

## Study of the Pioneer Anomaly: A Problem Set

<sup>a</sup>Slava G. Turyshev, <sup>b</sup>Michael Martin Nieto, and <sup>c</sup>John D. Anderson<sup>a,c</sup>Jet Propulsion Laboratory,  
California Institute of Technology,  
4800 Oak Grove Drive, Pasadena, CA 91109, USA<sup>b</sup>Theoretical Division (MS-B285),  
Los Alamos National Laboratory,  
University of California, Los Alamos, NM 87545  
(dated: October 20, 2019)

Analysis of the radio-metric tracking data from the Pioneer 10 and 11 spacecraft at distances between 20{70 astronomical units (AU) from the Sun has consistently indicated the presence of an anomalous, small, constant Doppler frequency drift. The drift is a blue-shift, uniformly changing at the rate  $\dot{\nu} = (5.99 \pm 0.01) \cdot 10^{-9}$  Hz/s. The signal also can be interpreted as a constant acceleration of  $a_p = (8.74 \pm 1.33) \cdot 10^{-8}$  cm/s<sup>2</sup> directed towards the Sun. This interpretation has become known as the Pioneer anomaly.

The nature of this anomaly remains unexplained. That is to say, up to now no unambiguous explanation of the anomalous signal has been found. To reach this conclusion a complicated interplay between experiment and theory is needed to rule out systematics. However, in the end many of the necessary calculations are amenable to students. To elucidate this students would have a deeper understanding of the workings of physics in space systems. We give a problem set devoted to this cause.

PACS numbers: 04.80.-y, 95.10.Eg, 95.55.Pe

## I. INTRODUCTION

The Pioneer 10/11 missions, launched on 2 March 1972 (Pioneer 10) and 4 December 1973 (Pioneer 11), were the first to explore the outer solar system. After Jupiter and (for Pioneer 11) Saturn encounters, the two spacecraft followed escape hyperbolic orbits near the plane of the ecliptic to opposite sides of the solar system. (The hyperbolic escape velocities are 12.5 km/s for Pioneer 10 and 11.6 km/s for Pioneer 11.) Pioneer 10 eventually became the first man-made object to leave the solar system. (See Figure 1 for a perspective of the orbits and Tables I and II for more details. The orbital parameters for the craft are given in Appendix A.)

The Pioneers were excellent craft with which to perform precise celestial mechanics experiments. This was due to a combination of many factors, including their attitude control (spin-stabilized, with a minimum number of attitude correction maneuvers using thrusters), power design (the Plutonium-238 radioactive heat-source RTGs being on extended booms aided the stability of the craft and also reduced the heat systematics), and precise Doppler tracking (with sensitivity to resolve small frequency drifts at the level of mHz/s). The result was the most precise navigation in deep space to date. (See Figure 2 for a design drawing of the spacecraft.)

By 1980 Pioneer 10 had passed a distance of 20 AU from the Sun and the acceleration contribution from

solar-radiation pressure on the craft (directed away from the Sun) had decreased to less than  $4 \cdot 10^{-8}$  cm/s<sup>2</sup>. At that time an anomaly in the Doppler signal became evident. Subsequent analysis of the radio-metric tracking data from the Pioneer 10/11 spacecraft at distances between 20{70 AU from the Sun has consistently indicated the presence of an anomalous, small, constant Doppler frequency drift of  $\dot{\nu} = (5.99 \pm 0.01) \cdot 10^{-9}$  Hz/s. The drift can be interpreted as being due to a constant acceleration of  $a_p = (8.74 \pm 1.33) \cdot 10^{-8}$  cm/s<sup>2</sup> directed towards the Sun [1, 2]. The nature of this anomaly remains unexplained; that is to say, up to now no satisfactory explanation of the anomalous signal has been found. This signal has become known as the Pioneer Anomaly. (To be precise, the data analyzed in Ref. [1] was taken between 3 January 1987 and 22 July 1998 for Pioneer 10 (when the craft was 40 AU to 70.5 AU distant from the Sun) while that from Pioneer 11 and was obtained between 5 January 1987 and 1 October 1990 for Pioneer 11 (22.4 to 31.7 AU).)

Although the most obvious explanation would be that there is a systematic origin to the effect, perhaps generated by the spacecraft themselves from excessive heat or propulsion gas leaks, none has been found. That is, attempts to find a convincing explanation using such a mechanism have not succeeded because no unambiguous, onboard systematic origin has been discovered [1, 2]. This inability to explain the anomalous acceleration of the Pioneer spacecraft with conventional physics has contributed to a growing discussion about its origin.

Attempts to verify the anomaly using other spacecraft have proven disappointing [1, 2, 3, 4]. This is because the

---

Electronic address: turyshev@jpl.nasa.gov, mmn@lanl.gov, john.d.anderson@lanl.gov

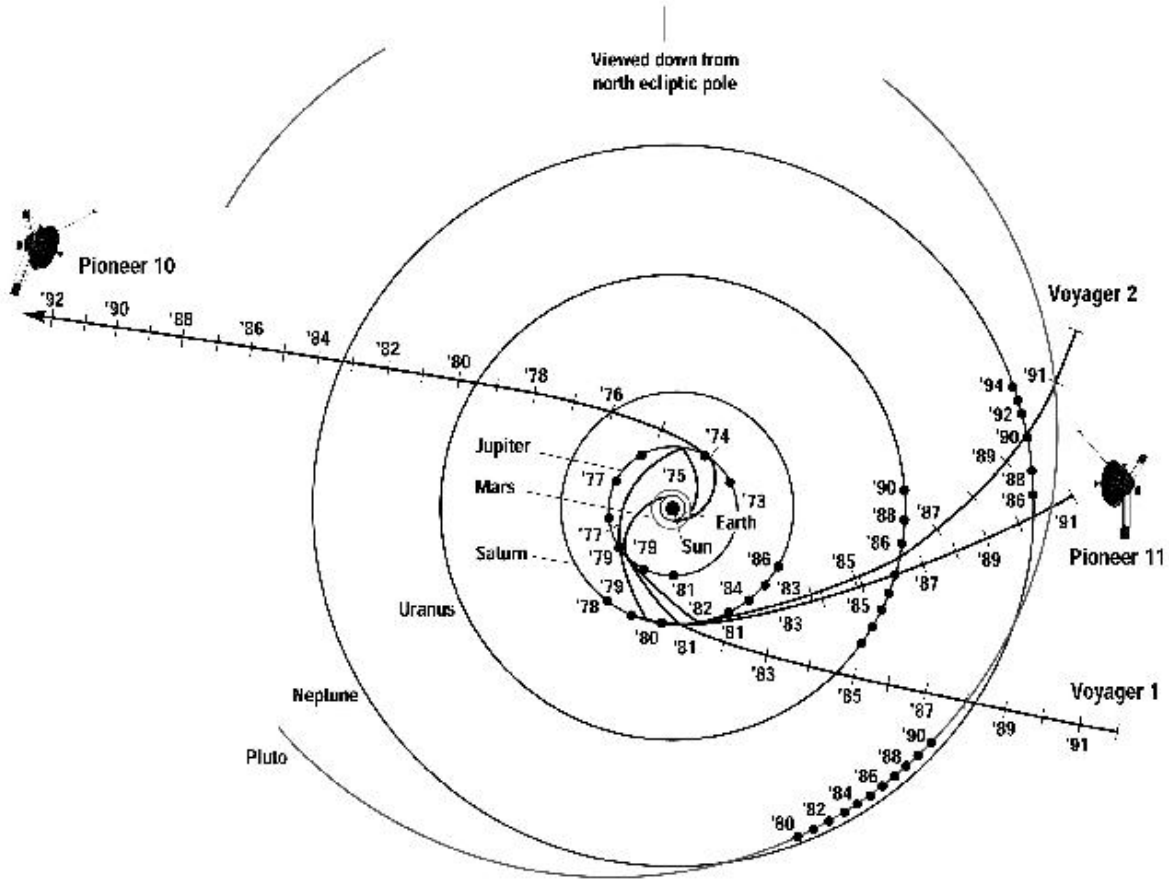


FIG. 1: Ecliptic pole view of Pioneer 10, Pioneer 11, and Voyager trajectories. Pioneer 11 is traveling approximately in the direction of the Sun's orbital motion about the galactic center. The galactic center is approximately in the direction of the top of the figure. [Digital artwork by T. Esposito. NASA ARC Image # AC 97-0036-3.]

TABLE I: Pioneer 10/11 Mission status

	Pioneer 10	Pioneer 11
Launch	2 March 1972	5 April 1973
Planetary encounters	Jupiter 4 Dec 1973	Jupiter/Saturn 2 Dec 1974/1 Sep 1979
Mission status	Formally ended 31 March 1997	Last data received 1 October 1990
Solar Distance	67 AU	30 AU
Direction of motion	Star Altair	Constellation of Aquila
	2 million years	4 million years

TABLE II: Position of Pioneer 10 on 1 January 2005

Distance from Sun	87.06 AU
Position (lat <sub>SE</sub> , lon <sub>SE</sub> )	(3.0°, 78.0°)
Speed relative to the Sun	12.24 km/sec
Distance from Earth	13.14 × 10 <sup>9</sup> km
Round-Trip Light Time	24 hr 21 min

Voyager, Galileo, Ulysses, and Cassini spacecraft navigation data all have their own individual difficulties for use in an independent test of the anomaly. In addition, many of the deep space missions that are currently being planned either will not provide the needed navigational accuracy and trajectory stability of under  $10^{-8}$  cm/s<sup>2</sup> (i.e., Pluto Express, Interstellar Probe) or else

they will have significant on-board systematics that mask the anomaly (i.e., JIMO { Jupiter Icy Moons Orbiter}).

The acceleration regime in which the anomaly was observed diminishes the value of using modern disturbance compensation systems for a test. For example, the systems that are currently being developed for the LISA and LISA Pathfinder missions, are designed to operate in the presence of a very low frequency acceleration noise (at the mHz level), while the Pioneer anomalous acceleration is a strong constant bias in the Doppler frequency data. In addition, currently available DC accelerometers

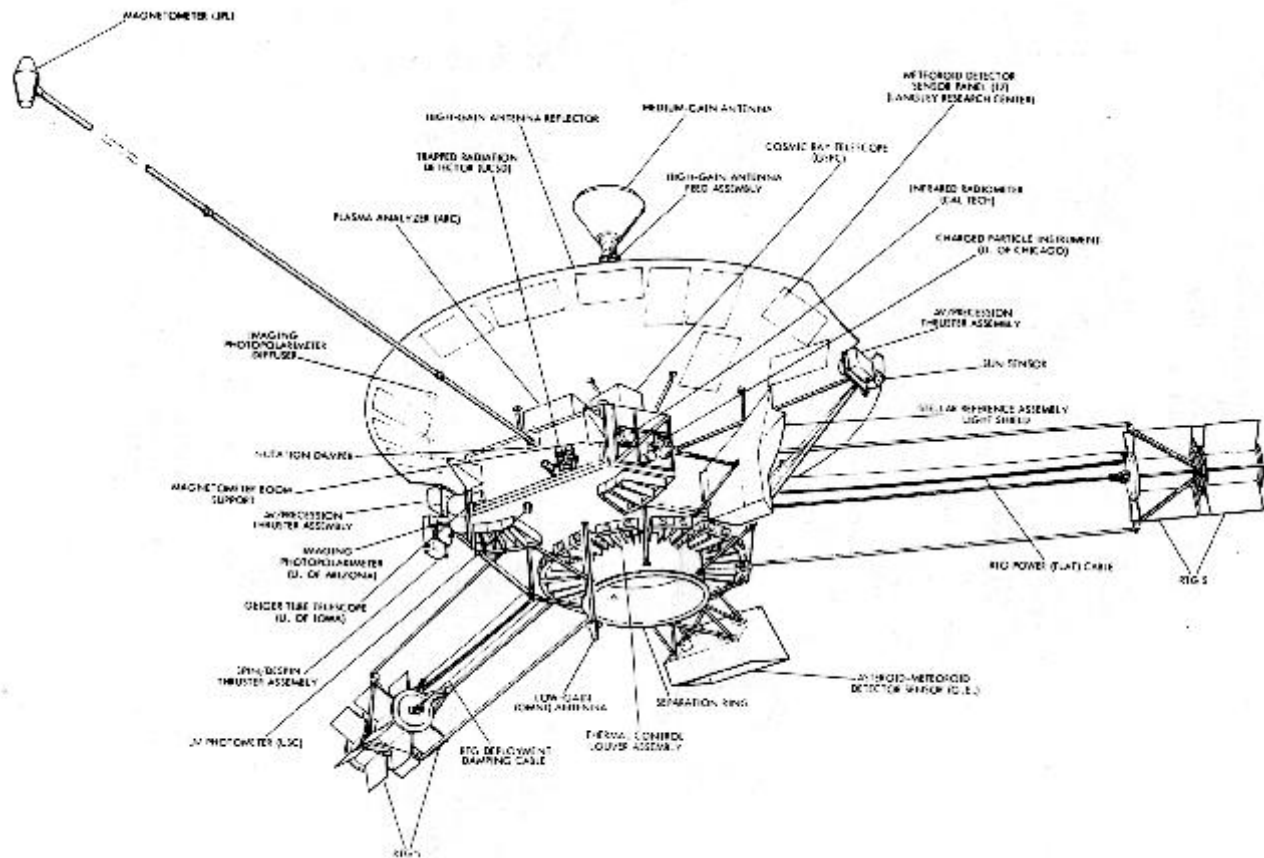


FIG. 2: A drawing of the Pioneer spacecraft.

are a few orders of magnitude less sensitive than is needed for a test. Furthermore, should the anomaly be a fictitious force that universally affects frequency standards [1], the use of accelerometers will shed no light on what is the true nature of the observed anomaly.

Finally, a comprehensive test of the anomaly requires an escape hyperbolic trajectory [1, 2, 3]. This makes a number of advanced missions (i.e., LISA { the Laser Interferometric Space Antenna, STEP { the Space Test of Equivalence Principle, LISA Pathfinder) less able to test properties of the detected anomalous acceleration. Although these missions all have excellent scientific goals and technologies, nevertheless, because of their orbits they will be in a less advantageous position to conduct a precise test of the detected anomaly. These observations and analyses of the capabilities of other spacecraft currently in operation or in design led to the conclusions that none could perform an independent verification of the anomaly and that a dedicated test is called for [3, 4, 5, 6].

As the Pioneer anomaly has remained unexplained, widespread (even public) interest in it has grown. One result was that Catherine Mignard of the Observatoire de Nice inquired if a problem set could be created on the Pioneer anomaly for the students of the University of Nice, France. The aims were to excite and engage them,

and also to show them by example how research really works. As a byproduct one would naturally show them that they, too, could take part and understand. The present Problem Set is the result of the inquiry.

To start we present a few simple calculations that on the physical situation. Specifically, these first exercises are designed to give an intuition into the dynamics of the problem. In them one can use the approximation of ignoring the angular momentum in the hyperbolic orbits, treating the velocities as radial.

**Problem 1.1:** Given the orbital parameters of Pioneer 10 on 1 January 2005 (distance  $r_0$  and velocity  $v_0$ ) in Table II, and assuming that there were no anomaly, what would be the final velocity of Pioneer 10?

**Solution 1.1:** Using the velocity,  $v_0$ , and distance,  $r_0$ , from Table II, the terminal escape velocity can be calculated from the conservation of energy equation

$$v_1 = \sqrt{v_0^2 - \frac{2GM}{r_0}} = 11.38 \text{ km/s} \quad (1)$$

**Problem 1.2:** On the other hand, presume that the anomaly continues on as a constant. At what distance from the Sun would the acceleration of the anomaly be equal to that of gravity?

Solution 1.2: By simply equating the anomalous and gravitational forces one finds

$$d_{\text{L}} = \frac{P}{GM} = a_p \quad 2;600 \text{ AU} : \quad (2)$$

Problem 1.3: Assume the anomaly is due to a physical force. The time period over which the Pioneer 10 data was analyzed was 11.5 years (1987.0 to 1998.5).

Because of the anomaly, approximately what is the shortfall in distance which Pioneer 10 traveled during the data period?

Solution 1.3: Using this data interval, simple mechanics yields

$$d = \frac{1}{2} a_p t^2 \quad 57;500 \text{ km} : \quad (3)$$

Problem 1.4: If the anomaly were to continue as a constant out to deep space and were due to a force, how far will Pioneer 10 travel before it reaches zero velocity and starts to fall back in to the Sun? How long will this take?

Solution 1.4: As seen in Problem 1.1, in deep space the gravitational potential energy due to the Sun is small compared to the kinetic energy of Pioneers. Therefore, one can ignore it with respect to the kinetic energy needed to be turned into anomaly potential energy. (This approximation slightly overestimates the time and distance.) Using the data from Table II, the time is found by solving for

$$v_f = 0 = v_0 - a_p t : \quad (4)$$

The solution is  $t = 2;40 \cdot 10^{13} \text{ s} = 445;000 \text{ yr}$ . Then the distance traveled would be given by

$$D = r_0 + v_0 t + \frac{1}{2} a_p t^2 \quad 562;300 \text{ AU} = 1;15 \text{ lt:yr} : \quad (5)$$

This would be well on its way to Aldebaran. (See Table I.) Since this distance is so large compared to  $r_0 = 87;06 \text{ AU}$ , this verifies the validity of the approximation of ignoring the gravitational potential energy.

In what follows we concentrate on the error analysis that demonstrated the existence of the anomaly in the data. In Section II we will consider sources of systematic error external to the spacecraft. Section III will deal with the sources of systematic error internal to the spacecraft. We will discuss computational systematics in Section IV and will summarize the error budget in Section V.

## II. SOURCES OF SYSTEMATIC ERROR EXTERNAL TO THE SPACECRAFT

External forces can produce three vector components of spacecraft acceleration. This is unlike forces generated on board the Pioneers, since the two non-radial components (i.e., those that are effectively perpendicular to the spacecraft spin) are canceled out by spacecraft rotation. However, non-radial spacecraft accelerations are

difficult to observe by the Doppler technique, which measures spacecraft velocity along the Earth-spacecraft line of sight. Although one could in principle set up complicated engineering models to predict all or each of the systematics, often the uncertainty of the models is too large to make them useful, despite the significant effort required. A different approach is to accept our ignorance about these non-gravitational accelerations and assess to what extent they can be assessed to be a bias over the time scales of all or part of the missions.

In this section we will discuss possible systematics (including forces) generated external to the spacecraft which might significantly affect the navigation of the Pioneers 10 and 11. These start with true forces due to (1) solar-radiation pressure and (2) solar wind pressure. We go on to discuss (3) the effect of the solar corona, (4) electromagnetic Lorentz forces, and (5) the phase stability of the reference atomic clocks.

Problem 2.1: There is an exchange of momentum when solar photons impact the spacecraft and are either absorbed or reflected. There are models that take into account various parts of the spacecraft exposed to solar radiation, primarily the high-gain antenna. They compute an acceleration directed away from the Sun as a function of spacecraft orientation and solar distance. The effect of the solar radiation pressure depends on the optical properties of the spacecraft surface (i.e. its absorptivities and emissivities), and effective areas of spacecraft parts parameters which, although modeled by design, are determined by calibration early in the mission. The effect can be distinguished from gravity's  $1/r^2$  law because the direction between the Sun and effective spacecraft surface varies. For navigational purposes, one determines the magnitude of the solar pressure acceleration at various orientations using Doppler data.

Estimate the systematic error from solar-radiation pressure on the Pioneer 10 spacecraft over the interval from 40 to 70.5 AU, and for Pioneer 11 over the interval from 22.4 to 31.7 AU.

Solution 2.1: The following equation provides a good model for analysis of the effect of solar radiation pressure on the motion of distant spacecraft. It is accounted for by most of the programs used for orbit determination:

$$a_{\text{sp}}(r) = \frac{K f A \cos(\theta)}{c m} \frac{1}{r^2} : \quad (6)$$

$f = 1367 \text{ W m}^{-2} (\text{AU})^2$  is the (effective-temperature Stefan-Boltzmann) "solar radiation constant" at 1 AU from the Sun and  $A$  is the effective size of the craft as seen by the Sun. For the Pioneers the area was taken to be the antenna dish of radius 1.37 m. (See Figure 2 for more information.)  $\theta$  is the angle between the axis of the antenna and the direction of the Sun (the solar pressure effect can be distinguished from gravity's  $1/r^2$  law because  $\cos \theta$  varies).  $c$  is the speed of light.  $m$  is taken to be the mass of the Pioneers when half the hydrazine thruster fuel is gone (241 kg) and  $r$  is the distance from

the Sun to the spacecraft in AU.  $K$  is the effective absorption/reflection coefficient. For Pioneer 10 modeling of the data yielded  $K_0 = 1.71$ .

Because of the  $1/r^2$  law, by the time the craft reached 10 AU the solar radiation acceleration was  $18.9 \cdot 10^{-8} \text{ cm/s}^2$  going down to 0.39 of those units by 70 AU. Since this systematic falls off as  $r^{-2}$ , it can bias the Doppler determination of a constant acceleration at some level. By taking the average of the  $r^{-2}$  acceleration curves over the Pioneer distance intervals, one can estimate that the systematic error from solar-radiation pressure, in units of  $10^{-8} \text{ cm/s}^2$ , is 0.001 for Pioneer 10 over the interval from 40 to 70.5 AU, and 0.006 for Pioneer 11 over the interval from 22.4 to 31.7 AU.

**Problem 2.2:** Estimate the effect of the solar wind on the Pioneer spacecraft. How significant is it to the accuracy of the Pioneers' navigation?

**Solution 2.2:** The acceleration caused by the solar wind has the same form as Eq. (6), with  $f=c$  replaced by  $m_p v^2 n$ , where  $n = 5 \text{ cm}^{-3}$  is the proton density at 1 AU and  $v = 400 \text{ km/s}$  is the speed of the wind. Thus,

$$a_{sw}(r) = K_{sw} \frac{m_p v^2 n A \cos \theta}{M r^2} \\ 4.4 \cdot 10^{-11} \frac{20 \text{ AU}^2}{r} \text{ cm/s}^2: \quad (7)$$

Because the density can change by as much as 100%, the exact acceleration is unpredictable. Even if one makes the very conservative assumption that the solar wind contributes only 100 times less force than the solar radiation, its smaller contribution is completely negligible.

**Problem 2.3:** Both range and Doppler observations at S-band (frequency  $\nu_0 = 2295 \text{ MHz}$ ) are affected by the electron density in the outer solar corona. Indeed, both the electron density and density gradient in the solar atmosphere influence the propagation of radio waves through the medium. So, both range and Doppler observations at S-band are affected by the electron density in the interplanetary medium and outer solar corona. Since, throughout the experiment, the closest approach to the center of the Sun of a radio ray path was greater than  $3.5 R_\odot$ , the medium may be regarded as collisionless. The one-way time delay associated with a plane wave passing through the solar corona is obtained by integrating the group velocity of propagation along the ray's path,  $\gamma$ :

$$t = \frac{1}{2c n_{crit}(\gamma)} \int_{\gamma} d\gamma n_e(t; r); \\ n_{crit}(\gamma) = 1240 \cdot 10^4 \frac{\gamma^2}{1 \text{ MHz}} \text{ cm}^{-3}; \quad (8)$$

where  $n_e(t; r)$  is the free electron density in the solar plasma,  $c$  is the speed of light, and  $n_{crit}(\gamma)$  is the critical plasma density for the radio carrier frequency  $\gamma$ . The plus sign is applied for ranging data and the minus sign for Doppler data.

Therefore, in order to calibrate the plasma contribution, one should know the electron density along the

path. One usually decomposes the electron density,  $n_e$ , into a static, steady-state part,  $\bar{n}_e(r)$ , plus a fluctuation  $n_e(t; r)$ , i.e.,  $n_e(t; r) = \bar{n}_e(r) + n_e(t; r)$ . The physical properties of the second term are hard to quantify. But luckily, its effect on Doppler observables and, therefore, on our results is small. On the contrary, the steady-state corona behavior is reasonably well known and several plasma models can be found in the literature.

Consequently, while studying the effect of a systematic error from propagation of the S-band carrier wave through the solar plasma, both analyses adopted the following model for the electron density profile:

$$n_e(t; r) = A \frac{R}{r}^2 + B \frac{R}{r}^{2.7} e^{[-\frac{r}{r_0}]^2} + C \frac{R}{r}^6 \quad (9)$$

$r$  is the heliocentric distance to the immediate ray trajectory and  $\theta$  is the helio-latitude normalized by the reference latitude of  $\theta_0 = 10^\circ$ . The parameters  $r$  and  $\theta$  are determined from the trajectory coordinates on the tracking link being modeled. The parameters  $A, B, C$  are parameters chosen to describe the solar electron density. (They are commonly given in two sets of units, meters or  $\text{cm}^{-3}$ .)

Derive an expression for the solar corona contribution to the range and Doppler models.

**Solution 2.3:** Substitution of Eq. (9) into Eq. (8) results in the following steady-state solar corona contribution to the range model that was used in the Pioneer analysis [1]:

$$\Delta r_{sc} = \frac{\nu_0^2}{2} A \frac{R}{F} + B \frac{R}{\nu_0^{1.7}} e^{[-\frac{r}{r_0}]^2} + C \frac{R}{\nu_0^5}; \quad (10)$$

$\nu_0$  and  $\nu$  are a reference frequency and the actual frequency of radio-wave [for Pioneer 10 analysis  $\nu_0 = 2295 \text{ MHz}$ ],  $r_0$  is the impact parameter with respect to the Sun and  $F$  is a light-time correction factor. For distant spacecraft this function is given as follows:

$$F = F(\gamma; r_T; r_E) = \frac{1}{\gamma} \left( \text{ArcTan} \frac{h^p \frac{r_T^2}{2} i}{\gamma} + \text{ArcTan} \frac{h^p \frac{r_E^2}{2} i}{\gamma} \right); \quad (11)$$

where  $r_T$  and  $r_E$  are the heliocentric radial distances to the target and to the Earth, respectively. (Note, once again, that the sign of the solar corona range correction is negative for Doppler and positive for range.)

**Problem 2.4:** The analyses of the Pioneer anomaly [1] took the values for  $A, B$ , and  $C$  obtained from the Cassini mission and used them as inputs for orbit determination purposes:  $A = 6.0 \cdot 10^3$ ;  $B = 2.0 \cdot 10^4$ ;  $C = 0.6 \cdot 10^6$ , all in meters. This is the "Cassini corona model."

Given the formula derived in the previous problem and the values of the parameters  $A$ ,  $B$  and  $C$ , estimate the systematic error due to the effect of the solar corona on the propagation of radio waves between the Earth and the spacecraft.

Solution 2.4: The Doppler correction is obtained from Eq. (10) by simple time differentiation. (The impact parameter depends on time as  $b = b(t)$  and may be expressed via the relative velocity of the spacecraft with respect to the Earth,  $v \approx 30 \text{ km/s}$ ). Use the physical model of Eq. (10) for the steady-state solar corona effect on the radio-wave propagation through the solar plasma. The effect of the solar corona is expected to be small for Doppler and large for range. The time-averaged effect of the corona on the Doppler is found to be small, of order  $\delta \nu_{\text{corona}} = 0.02 \cdot 10^8 \text{ cm/s}^2$ , as might be expected.

Problem 2.5: The possibility that the Pioneer spacecraft could hold a charge, and be detected in its trajectory by Lorentz forces, was a concern for the magnetic field strengths at Jupiter and Saturn. (See Figures 2 and 1). (For a discussion of spacecraft charging, see <http://www.eas.asu.edu/~holbert/eee460/spc-chrg.html>.) However, the magnetic field strength in the outer solar system is on the order of  $10^5$  Gauss. This is about a factor of  $10^5$  times smaller than the magnetic field strengths measured by the Pioneers at their nearest approaches to Jupiter: 0.185 Gauss for Pioneer 10 and 1.135 Gauss for the closer in Pioneer 11. Further, data from the Pioneer 10 plasma analyzer can be interpreted as placing an upper bound of  $0.1 \text{ C}$  on the positive charge during Jupiter encounter [7].

Estimate the upper limit for the contribution of the electro-magnetic force on the motion of the Pioneer spacecraft in the outer solar system.

Solution 2.5: Using the standard equation for electromagnetism, involving velocity, magnetic field strength, and charge,  $F = qv \times B$ , the greatest force would be on Pioneer 11 during its closest approach,  $< 20 \cdot 10^8 \text{ cm/s}^2$ . However, once the spacecraft reached the interplanetary medium, this force decreased to  $\sim 2 \cdot 10^{12} \text{ cm/s}^2$ , completely negligible.

Problem 2.6: Long-term frequency stability tests are conducted with the exciter/transmitter subsystems and the DSN's radio-science open-loop subsystem. An uplink signal generated by the exciter is translated at the antenna to a downlink frequency. The downlink signal is then passed through the RF-IF downconverter present at the antenna and into the radio science receiver chain. This technique allows the processes to be synchronized in the DSN complex based on the frequency standards whose "Allan deviations" are of the order of  $\sigma_y = 10^{-14}$  to  $10^{-15}$  for integration time in the range from 10 s to  $10^3$  s. (The "Allan deviation" is the variance in the relative frequency fluctuation, defined as  $\sigma_y = \sqrt{\langle y^2 \rangle}$ , or  $\sigma_{y'} = \sqrt{\langle y'^2 \rangle}$ . See the discussion of Allan deviation in Appendix B.) For the S-band frequencies of the Pioneers, the corresponding variances are  $1.3 \cdot 10^{-12}$  and  $1.0 \cdot 10^{-12}$ , respectively, for a  $10^3$  s Doppler integration time.

The influence of the clock stability on the detected acceleration,  $a_p$ , can be estimated based on the reported variances for the clocks,  $\sigma_y$ . The standard 'single measurement' error on acceleration is derived from the time derivative of the Doppler frequency data as  $(\sigma_{a_p})_y = \frac{c}{\lambda} \sigma_y$ , where the variance,  $\sigma_y$ , is calculated for 1000 s Doppler integration time and  $\lambda$  is the signal averaging time. This formula provides a good rule of thumb when the Doppler power spectral density function obeys a  $1/f$  flicker-noise law, which is approximately the case when plasma noise dominates the Doppler error budget. Assume a worst case scenario, where only one clock was used for the whole 11 year study. To estimate the influence of that one clock on the reported accuracy of the detected anomaly  $a_p$ , combine  $\sigma_y = \sigma_{y_0}$ , the fractional Doppler frequency shift from the reference frequency of  $\nu_0 = 2.29 \text{ GHz}$ , with the estimate for the variance,  $\sigma_y = 1.3 \cdot 10^{-12}$ . This yields a number that characterizes the upper limit for a frequency uncertainty introduced in a single measurement by the instabilities in the atomic clock:  $\sigma_{a_p} = \sigma_{y_0} \nu_0 = 2.98 \cdot 10^{-3} \text{ Hz}$  for a  $10^3$  s Doppler integration time.

Derive an estimate for the total effect of phase and frequency stability of clocks to the Pioneer anomaly value. (Note that the observed  $a_p$  corresponds to a frequency drift of about  $0.2 \text{ Hz/year}$ .) How significant is this effect?

Solution 2.6: In order to derive an estimate for the total effect, recall that the Doppler observation technique is essentially a continuous count of the total number of complete frequency circles during observational time. Within a year one can have as many as  $N \approx 3.15 \cdot 10^8$  independent single measurements of the clock with durations  $\sim 10^3$  seconds. This yields an upper limit for the contribution of atomic clock instability on the frequency drift of  $\sigma_{\text{clock}} = \frac{\sigma_y}{N} \approx 5.3 \cdot 10^{-5} \text{ Hz/year}$ . Noting that the observed  $a_p$  corresponds to a frequency drift of about  $0.2 \text{ Hz/year}$ , means that the error in  $a_p$  is about  $0.0003 \cdot 10^8 \text{ cm/s}^2$ , which is completely negligible.

### III. SOURCES OF SYSTEMATIC ERROR INTERNAL TO THE SPACECRAFT

In this section forces generated by on-board spacecraft systems that could contribute to the discovered constant acceleration,  $a_p$ , are considered. The on-board mechanisms discussed are: (1) the radio beam reaction force, (2) RTG heat reflecting on the spacecraft, (3) differential emissivity of the RTGs, (4) expelled Helium produced within the RTG, (5) thruster gas leakage, and (6) the difference in experimental results from the two spacecraft.

Problem 3.1: The Pioneers have a total nominal emitted radio power of 8 Watts. It is parameterized as

$$P_{\text{rp}} = \int_0^{2\pi} \int_{\theta_{\text{min}}}^{\theta_{\text{max}}} d \sin \theta P(\theta, \phi); \quad (12)$$

$P(\theta, \phi)$  being the antenna power distribution. The radiated power has been kept constant in time, independent of

the coverage from ground stations. That is, the radio transmitter is always on, even when not received by a ground station.

The recoil from this emitted radiation produces an acceleration bias,  $b_{rp}$ , on the spacecraft away from the Earth of

$$b_{rp} = \frac{P_{rp}}{m c} : \quad (13)$$

$m$  is taken to be the Pioneer mass when half the fuel is gone 241 kg.  $c$  is the fractional component of the radiation momentum that is going in a direction opposite to  $a_p$  :

$$c = \frac{1}{P_{rp}} \int_0^{Z_{max}} d \sin \cos P ( ) : \quad (14)$$

The HGA downlink antenna pattern is known. The gain is given as (33.3 ± 0.4) dB at zero (peak) degrees. The intensity is down by a factor of two ( 3 dB) at 1.8 degrees. It is down a factor of 10 ( 10 dB) at 2.7 degrees and down by a factor of 100 ( 20 dB) at 3.75 degrees. [The first diffraction minimum is at a little over four degrees.] Therefore, the pattern is a very good conical beam .

Estimate the effect of the recoil force due to the emitted radio-power on the craft. What is the uncertainty in this estimation?

Solution 3.1: Since  $\cos[3.75] = 0.9978$ , one can take  $c = (0.99 \pm 0.01)$ , yielding  $b_{rp} = 1.10$ . To estimate uncertainty, take the error for the nominal 8 Watts power to be given by the 0.4 dB antenna error (0.10), and arrive at the result

$$a_{rp} = b_{rp} \quad c_{rp} = (1.10 \pm 0.10) \cdot 10^{-8} \text{ cm/s}^2 : \quad (15)$$

Problem 3.2: It has been argued that the anomalous acceleration seen in the Pioneer spacecraft is due to anisotropic heat rejection off the back of the spacecraft high-gain antennae, the heat coming from the RTGs. Before launch, the four RTGs had a total thermal fuel inventory of 2580 W ( 2070 W in 2002). They produced a total electrical power of 160 W ( 65 W in 2002). (In Table III a description of the overall power system is given.) Thus, by 2002 2000 W of RTG heat still had to be dissipated. Since only 63 W of directed power could have explained the anomaly, in principle there was enough power to explain the anomaly this way.

The main bodies of the RTGs are cylinders and they are grouped in two packages of two. Each package has the two cylinders end to end extending away from the antenna. Every RTG has six fins separated by equal angles of 60 degrees that go radially out from the cylinder. Approximate dimensions for the RTGs are: the cylinder and fin lengths are 28.2 and 26.0 cm (11.06 and 10.24 in), the radius of the central RTG cylinder is 8.32 cm (3.315 in), and the RTG fin width is 17.0 cm as measured from the surface of the cylinder to the outer fin tip is 17.0 cm (6.685 in). (See Figure 3.)

The RTGs are located at the end of booms, and rotate about the spacecraft in a plane that contains the approximate base of the antenna. From the closest axial center point of the RTGs, the antenna is seen nearly "edge on" (the longitudinal angular width is 24.5°). The total solid angle subtended is 1-2% of 4 steradians. A more detailed calculation yields a value of 1.5% .

Estimate the contribution of the RTG heat rejection off the spacecraft to the Pioneer anomaly. Can one explain the seen anomaly with this mechanism? Use the spacecraft geometry and the resultant RTG radiation pattern.

Solution 3.2: There are two reasons that preclude this mechanism :

i) The spacecraft geometry: Even taking the higher bound of 2% of steradians solid angle being the fraction of solid angle covered by the antenna, the equivalent fraction of the RTG heat could provide at most 40 W .

ii) The RTGs' radiation pattern: The above estimate was based on the assumption that the RTGs are spherical black bodies. But they are not. Presumably this results in a symmetrical radiation of them all power into space.

The fins are "edge on" to the antenna (the fins point perpendicular to the cylinder axes). The largest opening angle of the fins is seen only by the narrow-angle parts of the antenna's outer edges. Ignoring these edge effects, only 2.5% of the surface area of the RTGs is facing the antenna. This is a factor 10 less than that from integrating the directional intensity from a hemisphere:  $[(\int_{hemisph} d \cos \theta) = (4 \pi)] = 1/4$ . So, one has only 4 W of directed power.

This suggests a systematic bias of  $0.55 \cdot 10^{-8} \text{ cm/s}^2$ . Even adding an uncertainty of the same size yields a systematic for heat rejection of

$$a_{hrr} = (0.55 \pm 0.55) \cdot 10^{-8} \text{ cm/s}^2 : \quad (16)$$

Finally, if this mechanism were the cause, ultimately an unambiguous decrease in the size of  $a_p$  should be seen because the RTGs' radioactively produced radiant heat is decreasing. As noted previously, the heat produced is now about 80% of the original magnitude. In fact, one would similarly expect a decrease of about  $0.75 \cdot 10^{-8} \text{ cm/s}^2$  in  $a_p$  over the 11.5 year Pioneer 10 data interval if this mechanism were the origin of  $a_p$  .

Problem 3.3: Another suggestion related to the RTGs is the following: during the early parts of the missions, there might have been a differential change of the radiant emissivity of the solar-pointing sides of the RTGs with respect to the deep-space facing sides. Note that, especially closer in the Sun, the inner sides were subjected to the solar wind. Contrariwise, the outer sides were sweeping through the solar-system dust cloud. Therefore, it can be argued that these two processes could have caused the effect.

The six fins of each RTG, designed to "provide the bulk of the heat rejection capacity," were fabricated of

TABLE III: Thermal system and on-board power

I Heat & power source: 2 2 SNAP-19 RTG s

- .  $_{94}\text{Pu}^{238} \rightarrow _{92}\text{U}^{234} + _2\text{He}^4$  . half life-time: 87.74 years
- . Converts 5 to 6 % of released heat to electric power

Power available:	
. before launch electric total 165 W (by 2001 61 W )	
. needs 100 W to power all system s (2 24.3 W science instrum ents)	
Heat provided:	
. before launch therm al fuel total 2580 W (by 2001 2050 W )	
. electric heaters; 12 one-W RHU s	
. heat from the instrum ents (dissipation of 70 to 120 W )	
Excess power/heat: if electric power was > 100 W )	
. therm ally radiated into space by a shunt-resistor radiator, or	
. charge a battery in the equipm ent com partm ent	
Therm al control:	
. therm o-responsive louvers (bim etallic springs)	0 - 90 F
. insulation : m ulti-layered alum inized m ylar and kapton blankets	# 40 - " 85 F




FIG . 3: A design picture of the SNAP 19 RTG s. Note that for better heat radiation, this nal design had much larger ns than those in the earlier spacecraft concept of Figure 2.

HM 21A -T 8 m agnesium alloy plate. The metal, after being specially prepared, was coated with two to three mils of zirconia in a sodium silicate binder to provide a high emissivity ( 0.9) and low absorptivity ( 0.2). (See Figure 3.)

Estimate the possible difference in the fore-and-aft

em issivities of the RTG s needed to support this mechanism . Can this mechanism explain the seen anomaly on Pioneers? Discuss the significance of radioactive decay for this mechanism .

Solution 3.3: Depending on how symmetrically fore-and-aft they radiated, the relative fore-and-aft em is-



sivity of the alloy would have had to have changed by 10% to account for  $a_p$ . Given our knowledge of the solar wind and the interplanetary dust, this amount of a radiant change would be difficult to explain, even if it were of the right sign.

To obtain a reasonable estimate of the uncertainty, consider if one side (fore or aft) of the RTGs had its emissivity changed by only 1% with respect to the other side. In a simple cylindrical model of the RTGs, with 2000 W power (here only radial emission is assumed with no loss out the sides), the ratio of power emitted by the two sides would be  $0.99 = 995/1005$ , or a differential emission between the half cylinders of 10 W. Therefore, the fore/aft asymmetry towards the normal would be  $[10 \text{ W}] \frac{1}{0.005} \sin 6.37^\circ = 6.37 \text{ W}$ .

A more sophisticated model of the structure starts off from ground zero to verify one still gets about the same number, 6.5 W [1]. Indeed one does, 6.12 W, which is the number we use below. (We refer the reader to Ref. [1] for that discussion, since the basic physics is already seen above.)

Taking 6.12 W as the uncertainty from differential emissivity of the RTGs, one obtains an acceleration uncertainty of

$$a_{\text{se}} = 0.85 \cdot 10^{-8} \text{ cm/s}^2 \quad (17)$$

Note that  $10^{-8} \text{ cm/s}^2$  almost equals our  $a_p$ . This is the origin of our previous statement that 10% differential emissivity (in the correct direction) would be needed to explain  $a_p$ .

Finally, consider the significance of radioactive decay for this mechanism. The formal statistical error before systematics of the determination was small [1]. (See the next section.) An example is a specific one-day batch-sequential value for  $a_p$ , averaged over the entire 11.5 year interval. It was,  $a_p = (7.77 \pm 0.16) \cdot 10^{-8} \text{ cm/s}^2$ , where a batch-sequential error tends to be large. From radioactive decay, the value of  $a_p$  should have decreased by 0.75 of these units over 11.5 years. This is 5 times the above variance, which is very large with batch sequential. Even more stringently, this bound is good for all radioactive heat sources. So, what if one were to argue that emissivity changes occurring before 1987 were the cause of the Pioneer effect? There still should have been a decrease in  $a_p$  with time since then, which has not been observed.

**Problem 3.4:** Another possible on-board systematic is from the expulsion of the He being created in the RTGs from the  $\alpha$ -decay of  $^{238}\text{Pu}$ .

The SNAP-19 Pioneer RTGs were designed in a such a way that the He pressure is not totally contained within the Pioneer heat source over the life of the RTGs. Instead, the Pioneer heat source contains a pressure relief device which allows the generated He to vent out of the heat source and into the thermoelectric converter. The thermoelectric converter housing-to-power output receptacle interface is sealed with a viton O-ring. The O-ring allows the helium gas within the converter to be released

by permeation to the space environment throughout the mission life of the Pioneer RTGs.

Information on the fuel pucks shows that they each have heights of 0.212 inches with diameters of 2.145 inches. With 18 in each RTG and four RTG per mission, this gives a total volume of fuel of about  $904 \text{ cm}^3$ . The fuel is PMCPu conglomerate. The amount of  $^{238}\text{Pu}$  in this fuel is about 5.8 kg. With a half life of 87.74 years, that means the rate of He production (from Pu decay) is about 0.77 gm/year, assuming it all leaves the cement. To make this mechanism work, one would need that the He leakage from the RTGs be preferentially directed away from the Sun, with a velocity large enough to cause the acceleration.

Can this mechanism explain the Pioneer anomaly? What is the largest effect possible with this mechanism? What is the uncertainty?

**Solution 3.4:** Taking operational temperature on the RTG surface of  $320^\circ\text{F} = 433 \text{ K}$ , implies a  $3kT = 2$  helium velocity of  $1.22 \text{ km/s}$ . Using this in the rocket equation,

$$a(t) = -v(t) \frac{d}{dt} \ln M(t) \quad (18)$$

with our nominal Pioneer mass with half the fuel gone and the assumption that the gas is all unidirectional, yields a maximum bound on the possible acceleration of  $1.16 \cdot 10^{-8} \text{ cm/s}^2$ . So, one can rule out helium permeating through the O-rings as the cause of  $a_p$  although it is a systematic to be dealt with.

If one assumes a single elastic reflection, one can estimate the fraction of the bias away from the Sun. This estimate is  $(3/4) \sin[30^\circ]$  times the average of the heat momentum component parallel to the shortest distance to the RTG. Using this, one finds the bias would be  $0.31 \cdot 10^{-8} \text{ cm/s}^2$ . This bias effectively increases the value of the solution for  $a_p$ , which is too optimistic given all the complications of the real system. Therefore one can take the systematic expulsion to be  $a_{\text{He}} = (0.15 \pm 0.16) \cdot 10^{-8} \text{ cm/s}^2$ .

**Problem 3.5:** The effect of propulsive mass expulsion due to gas leakage has to be assessed. Although this effect is largely unpredictable, many spacecraft have experienced gas leaks producing accelerations on the order of  $10^{-7} \text{ cm/s}^2$ . Gas leaks generally behave differently after each maneuver. The leakage often decreases with time and becomes negligibly small.

Gas leaks can originate from Pioneer's propulsion system, which is used for mid-course trajectory maneuvers, for spinning-up or -down the spacecraft, and for orientation of the spinning spacecraft. The Pioneers are equipped with three pairs of hydrazine thrusters which are mounted on the circumference of the Earth-pointing high gain antenna. Each pair of thrusters forms a Thruster Cluster Assembly (TCA) with two nozzles aligned in opposition to each other. For attitude control, two pairs of thrusters can be fired forward or aft and are used to precess the spinning antenna. The other pair of

thrusters is aligned parallel to the rim of the antenna with nozzles oriented in co- and contra-rotation directions for spin/despin maneuvers.

During both observing intervals for the two Pioneers, there were no trajectory or spin/despin maneuvers. So, in this analysis one is mainly concerned with precession (i.e., orientation or attitude control) maneuvers only. Since the valve seals in the thrusters can never be perfect, one can ask if the leakages through the hydrazine thrusters could be the cause of the anomalous acceleration,  $a_p$ .

Now consider the possible action of gas leaks originating from the spin/despin TCA. Each nozzle from this pair of thrusters is subject to a certain amount of gas leakage. But only a differential leakage from the two nozzles would produce an observable effect causing the spacecraft to either spin-down or spin-up.

So, to obtain a gas leak uncertainty (and we emphasize "uncertainty" vs. "error" because there is no other evidence) one has to ask how large a differential force is needed to cause the spin-down or spin-up effects observed? This depends on the moment of inertia about the spin axis,  $I_z = 588.3 \text{ kg m}^2$ , the antenna radius,  $R = 1.37 \text{ m}$ , and the observed spin-down rates over three time intervals. In Ref. [1] a systematic was determined at the end by considering the three gas systematic results to be a manifestation of errors that are uncorrelated and are normally distributed around zero mean. For simplicity, here we include the effect of this analysis in terms of an overall "effective spin-down rate" of  $\dot{\omega} = 0.0067 \text{ rpm/yr}$ .

Estimate the uncertainty in the value for the Pioneer anomaly from the possibility of undetected gas leaks. How big is it?

**Solution 3.5:** Using the above information and the antenna radius,  $R = 1.37 \text{ m}$ , as the lever arm, one can calculate that the differential force needed to torque the spin-rate change is

$$F = \frac{I_z \dot{\omega}}{R} = 0.95 \times 10^{-3} \text{ dynes} \quad (19)$$

It is possible that a similar mechanism of undetected gas leakage could be responsible for the net differential force acting in the direction along the line of sight. In other words, what if there were some undetected gas leakage from the thrusters oriented along the spin axis of the spacecraft that is causing  $a_p$ ? How large would this have to be? A force of ( $m = 241 \text{ kg}$ )

$$F_{a_p} = m a_p = 21.11 \times 10^{-3} \text{ dynes} \quad (20)$$

would be needed to produce our final unbiased value of  $a_p$ .

Given the small amount of information, let us conservatively take as our gas leak uncertainties the acceleration values that would be produced by differential forces equal to

$$F_{g,il} = \frac{1}{2} F = 1.35 \times 10^{-3} \text{ dynes} \quad (21)$$

The argument for this is that, in the root sum of squares sense, one is accounting for the differential leakages from the two pairs of thrusters with their nozzles oriented along the line of sight direction. This directly translates into the acceleration errors introduced by the leakage during the interval of Pioneer 10 data,

$$\sigma_{a_p} = F_{a_p} / m = 0.56 \times 10^{-8} \text{ cm/s}^2 \quad (22)$$

At this point, one must conclude that the gas leak mechanism for explaining the anomalous acceleration seems very unlikely, because it is hard to understand why it would affect Pioneer 10 and 11 at the same level. One also expects a gas leak would obey the rules of a Poisson distribution. That clearly is not true. Instead, analyses of different data sets indicate that  $a_p$  behaves as a constant bias rather than as a random variable [1].

**Problem 3.6:** There are two "experimental" results for the Pioneer anomaly from the two spacecraft:  $7.84 \times 10^{-8} \text{ cm/s}^2$  (Pioneer 10) and  $8.55 \times 10^{-8} \text{ cm/s}^2$  (Pioneer 11). The first number, 7.84, is for Pioneer 10, this number represents the entire 11.5 year data arc of Pioneer 10. Similarly, Pioneer 11's number, 8.55, represents a 3.75 year data arc.

The difference between the two craft could be due to different gas leakage. But it also could be due to heat emitted from the RTGs. In particular, the two sets of RTGs have had different histories and so might have different emissivities. Pioneer 11 spent more time in the inner solar system (absorbing radiation). Pioneer 10 has swept out more dust in deep space. Further, Pioneer 11 experienced about twice as much Jupiter/Saturn radiation as Pioneer 10. However, if the Pioneer effect is real, and not a systematic, these numbers should be approximately equal.

Estimate the value for the Pioneer Anomaly based on these two independent determinations. What is the uncertainty in this estimation?

**Solution 3.6:** One can calculate the time-weighted average of the experimental results from the two craft:  $[(11.5)(7.84) + (3.75)(8.55)] / (15.25) = 8.01$  in units of  $10^{-8} \text{ cm/s}^2$ . This implies a bias of  $b_{2,craft} = +0.17 \times 10^{-8} \text{ cm/s}^2$  with respect to the Pioneer 10 experimental result  $a_{p(exper)}$ . Take this number to be the two spacecraft uncertainty. This means

$$\begin{aligned} a_{2,craft} &= b_{2,craft} \pm \sigma_{2,craft} \\ &= (0.17 \pm 0.17) \times 10^{-8} \text{ cm/s}^2 \quad (23) \end{aligned}$$

#### IV. COMPUTATIONAL SYSTEMATICS

Given the very large number of observations for the same spacecraft, the error contribution from observational noise is very small and not a meaningful measure of uncertainty. It is therefore necessary to consider several other effects in order to assign realistic errors. Our first consideration is the statistical and numerical stability of

the calculations. We then go on to the cumulative influence of all modeling errors and editing decisions. Finally we discuss the reasons for and significance of the annual term.

Besides the factors mentioned above, we will discuss in this section errors that may be attributed to the specific hardware used to run the orbit determination computer codes, together with computational algorithms and statistical methods used to derive the solution.

**Problem 4.1:** In addition to the constant anomalous acceleration term, an annual sinusoid was reported [1]. The peaks of the sinusoid are centered on conjunction, where the Doppler noise is at a maximum. The amplitude of this oscillatory term by the end of the data interval was about  $0.22 \cdot 10^{-8} \text{ cm/s}^2$ . The integral of a sine wave in the acceleration,  $a_p$ , with angular velocity  $\dot{\alpha}$  and amplitude  $A_0$  yields the following first-order Doppler amplitude in two-way fractional frequency:

$$\frac{\Delta f}{f} = \frac{2A_0}{c \dot{\alpha}} \quad (24)$$

The resulting Doppler amplitude for the annual angular velocity  $2 \cdot 10^{-7} \text{ rad/s}$  is  $\Delta f = 7.3 \cdot 10^{-13}$ . At the Pioneer downlink S-band carrier frequency of 2.29 GHz, the corresponding Doppler amplitude is 0.002 Hz (i.e., 0.11 mm/s).

A 4-parameter, nonlinear, weighted, least-squares fit to the annual sine wave was found, with the parameters amplitude  $v_{att} = (0.1053 \pm 0.0107) \text{ mm/s}$ , phase  $(5.3 \pm 7.2)$ , angular velocity  $\dot{\alpha}_{att} = (0.0177 \pm 0.0001) \text{ rad/day}$ , and bias  $(0.0720 \pm 0.0082) \text{ mm/s}$ . The weights eliminate data taken inside of solar quadrature, and also account for different Doppler integration times  $T_c$  according to  $\sigma = (0.765 \text{ mm/s}) [(60 \text{ s})/T_c]^{1/2}$ . This rule yields post-weighted RMS residuals of  $\sigma_T = 0.1 \text{ mm/s}$  (the Doppler error averaged over the data interval  $T$ ).

The amplitude,  $v_{att}$ , and angular velocity,  $\dot{\alpha}_{att}$ , of the annual term result in a small acceleration amplitude of  $a_{att} = v_{att} \dot{\alpha}_{att} = (0.215 \pm 0.022) \cdot 10^{-8} \text{ cm/s}^2$ . The cause is most likely due to errors in the navigation program's determinations of the direction of the spacecraft's orbital inclination to the ecliptic.

Estimate the annual term contribution to the error budget for  $a_p$ .

**Solution 4.1:** First observe that the standard errors for radial velocity,  $v_r$ , and acceleration,  $a_r$ , are essentially what one would expect for a linear regression. The caveat is that they are scaled by the root sum of squares (RSS) of the Doppler error and unmodeled sinusoidal errors, rather than just the Doppler error. Further, because the error is systematic, it is unrealistic to assume that the errors for  $v_r$  and  $a_r$  can be reduced by a factor  $1/\sqrt{N}$ , where  $N$  is the number of data points. Instead, averaging their correlation matrix over the data interval,  $T$ , results in the estimated systematic error of

$$\frac{\sigma_r}{a_r} = \frac{12}{T^2} \quad \frac{\sigma_r}{v_r} = \frac{12}{T^2} \quad \frac{\sigma_r}{T} + \frac{\sigma_{v_{att}}}{v_{att}} \quad (25)$$

$\sigma_T = 0.1 \text{ mm/s}$  is the Doppler error averaged over  $T$  (not the standard error on a single Doppler measurement).  $v_{att}$  is equal to the amplitude of the unmodeled annual sine wave divided by  $\sqrt{2}$ . The resulting RSS error in radial velocity determination is about  $v_r = (\frac{\sigma_r}{T} + \frac{\sigma_{v_{att}}}{v_{att}})^{1/2} = 0.15 \text{ mm/s}$  for both Pioneer 10 and 11. Our values of  $a_p$  were determined over time intervals of longer than a year. At the same time, to detect an annual signature in the residuals, one needs at least half of the Earth's orbit complete. Therefore, with  $T = 1/2 \text{ yr}$ , Eq. (25) results in an acceleration error of

$$a_{ad} = \frac{0.50 \text{ mm/s}}{T} = 0.32 \cdot 10^{-8} \text{ cm/s}^2 \quad (26)$$

This number is taken for the systematic error from the annual term.

## V. ERROR BUDGET AND FINAL RESULT

The tests documented in the preceding sections have considered various potential sources of systematic error. The results of these tests are included in Table IV. The only major source of uncertainty not discussed in this problem set is item 2d), "Non-isotropic radiative cooling of the spacecraft." The reader can consult Refs. [1, 2] for more details. Other, more minor effects were also discussed in Ref. [1]. This Table serves as a systematic "error budget," which is useful both for evaluating the accuracy of the solution for  $a_p$  and also for guiding possible future efforts with other spacecraft.

Finally, there is the intractable mathematical problem of how to handle combined experimental and systematic errors. In the end it was decided to treat them all in a least squares uncorrelated manner [1].

**Problem 5.1:** The results of our analyses are summarized in Table IV. There are two columns of results. The first gives a bias,  $b_p$ , and the second gives an uncertainty,  $\sigma_p$ . The constituents of the error budget are listed separately in three different categories: 1) systematics generated external to the spacecraft; 2) on-board generated systematics, and 3) computational systematics. Our final result then will become some average

$$a_p = a_p(\text{exper}) + b_p \quad \sigma_p \quad (27)$$

where

$$a_p(\text{exper}) = (7.84 \pm 0.01) \cdot 10^{-8} \text{ cm/s}^2 \quad (28)$$

is the formal solution for the Pioneer anomaly.

Discuss contributions of various effects to the total error budget and determine the final value for the Pioneer anomaly,  $a_p$ .

**Solution 5.1:** The least significant factors of our error budget are in the first group of effects, those external to the spacecraft. From the table one sees that some are near the limit of contributing. But in totality, they are insignificant.

TABLE IV : Error Budget: A Summary of Biases and Uncertainties.

Item	Description of error budget constituents	Bias $10^{-8} \text{ cm/s}^2$	Uncertainty $10^{-8} \text{ cm/s}^2$
1	Systematics generated external to the spacecraft:		
a)	Solar radiation pressure	+ 0.03	0.01
b)	Solar wind		$< 10^{-3}$
c)	Solar corona		0.02
d)	Electro-magnetic Lorentz forces		$< 10^{-4}$
e)	Phase stability and clocks		$< 0.001$
2	On-board generated systematics:		
a)	Radio beam reaction force	+ 1.10	0.10
b)	RTG heat rejected on the craft	0.55	0.55
c)	Differential emissivity of the RTGs		0.85
d)	Non-isotropic radiative cooling of the spacecraft		0.48
e)	Expelled Helium produced within the RTGs	+ 0.15	0.16
f)	Gas leakage		0.56
g)	Variation between spacecraft determinations	+ 0.17	0.17
3	Computational systematics:		
a)	Accuracy of consistency/model tests		0.13
b)	Annual term		0.32
c)	Other important systematics		0.04
Estimate of total bias/error		+ 0.90	1.33

As was expected, the on-board generated systematics are the largest contributors to our total error budget. All the important constituents are listed in the second group of effects in Table IV. Among these effects, the radio beam reaction force produces the largest bias to our result,  $1.10 \cdot 10^{-8} \text{ cm/s}^2$ . It makes the Pioneer effect larger. The largest bias/uncertainty is from RTG heat rejecting on the spacecraft. The effect as large as  $(0.55 \pm 0.55) \cdot 10^{-8} \text{ cm/s}^2$ . Large uncertainties also come from differential emissivity of the RTGs, radiative cooling, and gas leaks, 0.85, 0.48, and 0.56, respectively,  $10^{-8} \text{ cm/s}^2$ .

The computational systematics are listed in the third group of Table IV.

One computes  $b_p = +0.90 \cdot 10^{-8} \text{ cm/s}^2$  and  $p = 1.33 \cdot 10^{-8} \text{ cm/s}^2$ . Therefore, from Eq. (27) the final value for  $a_p$  is

$$a_p = (8.74 \pm 1.33) \cdot 10^{-8} \text{ cm/s}^2: \quad (29)$$

The effect is clearly significant and remains to be explained.

## VI. DISCUSSION

The actual trajectories of the Pioneers are calculated using very complicated orbital determination codes with

double-precision accuracies. Even so, many the implications of the measured anomaly can be determined with simple physical ideas.

The aim of this work was to give a set of problems on a topic of current interest, the Pioneer anomaly, that would involve and excite students. We wanted to emphasize the strength of the simple physics approach in addressing complex problems. We hope that this collection of problems will be helpful not only to those who are interested in learning more about the Pioneer anomaly, but also will be useful to the wider audience of people interested in general physics.

## ACKNOWLEDGMENTS

If we have succeeded in our above stated aim, the first grateful acknowledgment must go to Catherine Mignard of the Observatoire de Nice. She not only inquired if such a set as this could be written for the students at the University of Nice, she also made valuable comments as the work progressed. We must, of course, also once again express our gratitude to our many colleagues who, over the years, have either collaborated with us on this problem or given of their wisdom.

The work of SGT and JDA was carried out at the Jet Propulsion Laboratory, California Institute of Technology under a contract with the National Aeronautics and

Space Administration. M M N acknowledges support by the U.S. Department of Energy.

TABLE V: Orbital parameters for Pioneers 10 and 11 at epoch 1 January 1987, 01:00:00 UTC.

Parameter	Pioneer 10	Pioneer 11
$a$ [km]	1033394633 (4)	1218489295 (133)
$e$	1.733593601 (88)	2.147933251 (282)
$I$ [deg]	26.2488696 (24)	9.4685573 (140)
$\Omega$ [deg]	3.3757430 (256)	35.5703012 (799)
$\omega$ [deg]	38.1163776 (231)	221.2840619 (773)
$M_0$ [deg]	259.2519477 (12)	109.8717438 (231)
$f_0$ [deg]	112.1548376 (3)	81.5877236 (50)
$r_0$ [km]	5985144906 (22)	3350363070 (598)
$\alpha$	0.3252905546 (4)	0.2491819783 (41)
$\beta$	0.8446147582 (66)	0.9625930916 (22)
$\gamma$	0.4252199023 (133)	0.1064090300 (223)
$\lambda_0$ [deg]	70.98784378 (2)	105.06917250 (31)
$b_0$ [deg]	3.10485024 (85)	16.57492890 (127)

#### APPENDIX A: ORBITAL PARAMETERS FOR PIONEERS 10 AND 11

In Table V we give the hyperbolic orbital parameters for Pioneer 10 and Pioneer 11 at epoch 1 January 1987, 01:00:00 UTC. The semimajor axis is  $a$ ,  $e$  is the eccentricity,  $I$  is the inclination,  $\Omega$  is the longitude of the ascending node,  $\omega$  is the argument of the perihelion,  $M_0$  is the mean anomaly,  $f_0$  is the true anomaly at epoch, and  $r_0$  is the heliocentric radius at the epoch. The direction cosines of the spacecraft position for the axes used are  $(\alpha; \beta; \gamma)$ . These direction cosines and angles are referred to the mean equator and equinox of J2000. The ecliptic longitude  $\lambda_0$  and latitude  $b_0$  are also listed for an

obliquity of  $23^\circ 26' 21''.4119$ . The numbers in parentheses denote realistic standard errors in the last digits.

#### APPENDIX B: ALLAN DEVIATION

In order to achieve the highest accuracy, the Doppler frequency shift of the carrier wave is referenced to ground-based atomic frequency standards. The observable is the fractional frequency shift of the stable and coherent two-way radio signal (Earth-spacecraft-Earth)

$$y(t) = \frac{f_r(t) - f_t}{f_t} = \frac{2}{c} \frac{dL}{dt} \quad (\text{B1})$$

where  $f_r$  and  $f_t$  are, respectively, the transmitted and received frequencies,  $t$  is the receiving time, and  $2L$  is the overall optical distance (including diffraction effects) traversed by the photon in both directions.

The received signal is compared with the expected measurement noise in  $y$ . This is characterized by its Allan deviation, defined as

$$\sigma_y(\tau) = \sqrt{\frac{1}{2} \langle (y_{i+1}(\tau) - y_i(\tau))^2 \rangle} \quad (\text{B2})$$

where  $y_i = \frac{1}{\tau} \int_{t_i}^{t_i+\tau} y(t) dt$ . The Allan deviation is the most widely used figure of merit for the characterization of frequency in this context.

For advanced planetary missions such as Cassini, equipped with multi-frequency links in the X- and Ka-bands, Allan deviations reach the level of  $\sigma_y \sim 10^{-14}$  for averaging times between 103 and 104 s. The Pioneer spacecraft were equipped with S-band Doppler communication systems for which Allan deviations were usually at the level of  $1.3 \times 10^{-12}$  and  $1.0 \times 10^{-12}$ , respectively, for  $10^3$  s Doppler integration times.

- 
- [1] J. D. Anderson, P. A. Laing, E. L. Lau, A. S. Liu, M. M. Nieto and S. G. Turyshev: 2002, The Study of Apparent Anomalous Weak, Long-Range Acceleration of Pioneer 10 and 11. *Phys. Rev. D* 65, 082004/1-50, (2002). [[arXiv:gr-qc/0104064](#)].
  - [2] J. D. Anderson, E. L. Lau, S. G. Turyshev, P. A. Laing and M. M. Nieto: 2002, The Search for a Standard Explanation of the Pioneer Anomaly. *Mod. Phys. Lett. A* 17, 875-885 (2002) [[arXiv:gr-qc/0107022](#)].
  - [3] M. M. Nieto and S. G. Turyshev, Finding the Origin of the Pioneer Anomaly, *Class. Quant. Grav.* 21, 4005-4023 (2004). [[arXiv:gr-qc/0308017](#)].
  - [4] J. D. Anderson, S. G. Turyshev, and M. M. Nieto, A Mission to Test the Pioneer Anomaly. *Int. J. Mod. Phys. D* 11, 1545-1551 (2002). [[arXiv:gr-qc/0205059](#)].
  - [5] S. G. Turyshev, M. M. Nieto, and J. D. Anderson, Lessons Learned from the Pioneers 10/11 for a Mission to Test the Pioneer Anomaly, *Adv. Space Res.* (to be published, 2005), *Proc. 35th COSPAR Scientific Assembly* (Paris, 2004). [[arXiv:gr-qc/0409117](#)].
  - [6] M. M. Nieto, S. G. Turyshev, and J. D. Anderson, The Pioneer Anomaly: The Data, its Meaning, and a Future Test, in: *Proceedings of the 2nd Mexican Meeting on Mathematical and Experimental Physics*, eds: A. Macias, C. Lammmerzahl, and D. Nunez (American Institute of Physics, NY, to be published, 2005). [[arXiv:gr-qc/0411077](#)].
  - [7] G. W. Null, Gravity Field of Jupiter and its Satellites from Pioneer 10 and Pioneer 11 Tracking Data, *Astron. J.* 81, 1153-1161 (1976).