

Short Calculus

Homework assignments for MAT 16B

Oscar Bolina
bolina@ifusp.br

This is a set of homework assignments for the MAT 16B course that I taught at the Department of Mathematics of the University of California at Davis in the winter of 2000, winter of 2001 and spring of 2001.

MAT 16B is a second calculus course for the biology, economics and social science students.

I present here the core material for one quarter in the sequence I teach it. The course description is as follows.

- 1) Review of functions.
- 2) Review of derivatives.
- 3) Exponential functions.
- 4) Logarithmic functions.
- 5) Applications of exponential and logarithmic functions.
- 6) Derivatives of exponential functions.
- 7) The chain rule for exponential functions.
- 8) Derivatives of logarithmic functions.
- 9) Notions of integration. The integral of power, exponential and logarithmic function.
- 10) Techniques of integration. Integration by Substitution.
- 11) The definite integral and its relation to area. The area between curves.
- 12) Volumes of solids of revolution.
- 13) Techniques of integration. Integration by partial fractions.

- 14) Trigonometric functions.
- 15) Derivatives of trigonometric functions.
- 16) Integrals of trigonometric functions.
- 17) Techniques of integration. Integration by parts.
- 18) Improper integrals.
- 19) Probability theory.

Other topics that can be included are the Riemann sum concept, the trapezoid and Simpson's rule, integration by tables and some special probability density functions.

1 Review of functions.

1. Let $f(x) = x^2 + 1$ and $g(x) = 1 - x$. Determine

a) $f(2)$ b) $f(-3)$ c) $g(3)$ d) $g(1/2)$

2. Sketch the graphs of $f(x) = x^2 + 1$ and $g(x) = -x^2 + 1$.

3. The cost per unit c (in dollars) to manufacture x units of a product is given by the equation

$$c(x) = \frac{100 + 5x}{x}.$$

Estimate the cost per unit of large-scale production by computing $\lim_{x \rightarrow \infty} c(x)$.

4. The function $g(u)$ may be combined with another function $h(x)$ to produce a composite function

$$f(x) = g(h(x)).$$

This means that $f(x)$ is the function obtained by substituting $h(x)$ for u in the expression for $g(u)$. Let $g(u) = 1 - u$ and $h(x) = \sqrt{x} - 1$. Find the composite function $f(x) = g(h(x))$.

5. Let $f(x) = x^2 + 1$ be a function of x , and let h be any number. Set up the following difference quotient for $f(x)$.

$$\frac{f(x+h) - f(x)}{h}; \tag{1}$$

Simplify your expression so that the dependence of (1) on h is evident. Next determine what happens to this difference quotient when $h \rightarrow 0$.

2 Review of differentiation.

1. Let $f(x)$ be a function of x . The derivative of $f(x)$ at x , denoted by $f'(x)$, is defined to be

$$f'(x) = \lim_{h \rightarrow 0} \frac{f(x+h) - f(x)}{h}; \quad (2)$$

provided the limit exists. When the limit exists, the function f is said to be differentiable at x .

Use this definition to find the derivative of $f(x) = x^2 + 1$.

It is often tedious { and sometimes very difficult { to calculate derivatives from the definition (2). Because of this it is important to develop some basic formulas for the derivatives of certain general functions.

2. The power rule. If $f(x)$ is a power function of the form $f(x) = x^n$, where n is any real number, the derivative of $f(x)$ is given by $f'(x) = nx^{n-1}$.

Use the power rule to find the derivative of the following functions.

a) $f(x) = 4x^2 - 10x + 1$;

b) $f(x) = 5x^3 - 3x^2$.

3. The product rule. Let $f(x)$ and $g(x)$ be two functions of x , and let $h(x) = f(x)g(x)$. The derivative of $h(x)$ is given by the following product rule.

$$h'(x) = [f(x)g(x)]' = f'(x)g(x) + f(x)g'(x):$$

Use the product rule to find the derivative of the function

$$h(x) = (x^2 - 1)(x^2 + 1):$$

4. The quotient rule. Let $f(x)$ and $g(x)$ be two functions of x , and let $h(x) = f(x)/g(x)$. The derivative of $h(x)$ is given by the following quotient rule.

$$h'(x) = [f(x)/g(x)]' = \frac{f'(x)g(x) - f(x)g'(x)}{g^2(x)}:$$

Use the quotient rule to find the derivative of the function

$$h(x) = \frac{(x^2 - 1)}{(x^2 + 1)}:$$

5. The chain rule. The derivatives of functions that are closely related to power functions are conveniently dealt with by using the chain rule for power functions. For instance, let $f(x) = (x^2 + 1)^{1/3}$. This is in the form of a power function $f(x) = u^n$, except that u is not the single variable x , as in item 2 above, but u is itself a function of x : $u(x) = x^2 + 1$. To find the derivative of such a function, we use the chain rule, stated in the following way.

Let $f(x) = [u(x)]^n$, where u is some function of x and n is any real number. The derivative of $f(x)$ is given by the following chain rule for power functions.

$$(u^n)' = nu^{n-1} u'$$

Use the chain rule to find the derivatives of the following functions

a) $f(x) = (x^2 + 1)^{1/3}$

b) $f(x) = \frac{1}{x^2 + 1}$

6. The pressure P exerted by a gas confined in a volume V is given by the expression

$$P = \frac{81}{V} \quad (3)$$

Suppose the volume varies with time t according to $V(t) = 3t^2 + 2t + 1$.

a) Substitute the function $V(t)$ into equation (3) and obtain an expression for the pressure as a function of time.

b) Use your result in (a) to find an expression for the rate of change of the pressure with time.

3 The exponential function.

In algebra we define 2^6 to be the number 2 multiplied by itself 6 times. Thus $2^6 = 2 \cdot 2 \cdot 2 \cdot 2 \cdot 2 \cdot 2 = 64$. In the expression the number 2 is called the base and the number 6 is called the exponent. Take a look at these examples.

i) $3^4 = 3 \cdot 3 \cdot 3 \cdot 3 = 81$

ii) $4^3 = 4 \cdot 4 \cdot 4 = 64$

iii) $(0.5)^6 = (0.5) \cdot (0.5) \cdot (0.5) \cdot (0.5) \cdot (0.5) \cdot (0.5) = 0.015625$

In example (iii) the base (the number 0.5) is smaller than one. In this case we can also write

$$(0.5)^6 = \frac{1}{2}^6 = \frac{1}{2} \frac{1}{2} \frac{1}{2} \frac{1}{2} \frac{1}{2} \frac{1}{2} = \frac{1}{2^6} = \frac{1}{64} = 0.015625:$$

The fraction $1/2^6$ above, having an exponent form in the denominator, can also be written with a negative exponent as

$$\frac{1}{2^6} = 2^{-6} = 0.015625:$$

The negative exponent notation is very convenient in most work in algebra to avoid multiplying out a long series of numbers, as in the following example.

$$\frac{2^9}{2^6} = 2^9 \cdot 2^{-6} = 2^{9-6} = 2^3 = 8:$$

When the base itself is in exponent form, as is the case with $(2^6)^3$, we multiply the two exponents. Thus $(2^6)^3 = 2^{6 \cdot 3} = 2^{18} = 262144$.

We should also mention that when the exponent is zero, then $a^0 = 1$ no matter what number a is. Thus, $2^0 = 3^0 = 98^0 = 7136^0 = 1$.

When the exponent is of the form $n-m$ as in 7^{3-4} with $n = 3$ and $m = 4$ this means that

$$a^{n-m} = \frac{a^n}{a^m}:$$

$$1. \text{ Find } n \text{ if } 7^4 \cdot 7^3 = 7^n$$

$$2. \text{ Find } n \text{ if } a^5 a^{1-3} = a^{-n}.$$

$$3. \text{ Is } 3^{(2^4)} = (3^4)^2?$$

$$4. \text{ Find } x \text{ if } 2^{2x-5} = 24.$$

Now we can say what an exponential function is. An exponential function is a function of the form $f(x) = a^x$, where a is a positive constant, with $a \neq 1$ (What function do you get when $a = 1$?).

In an exponential function the independent variable x is in the exponent (contrast with power functions $x^2; x^3$, in which the independent variable is the base).

The rules we have seen above are summarized in the following laws of exponents.

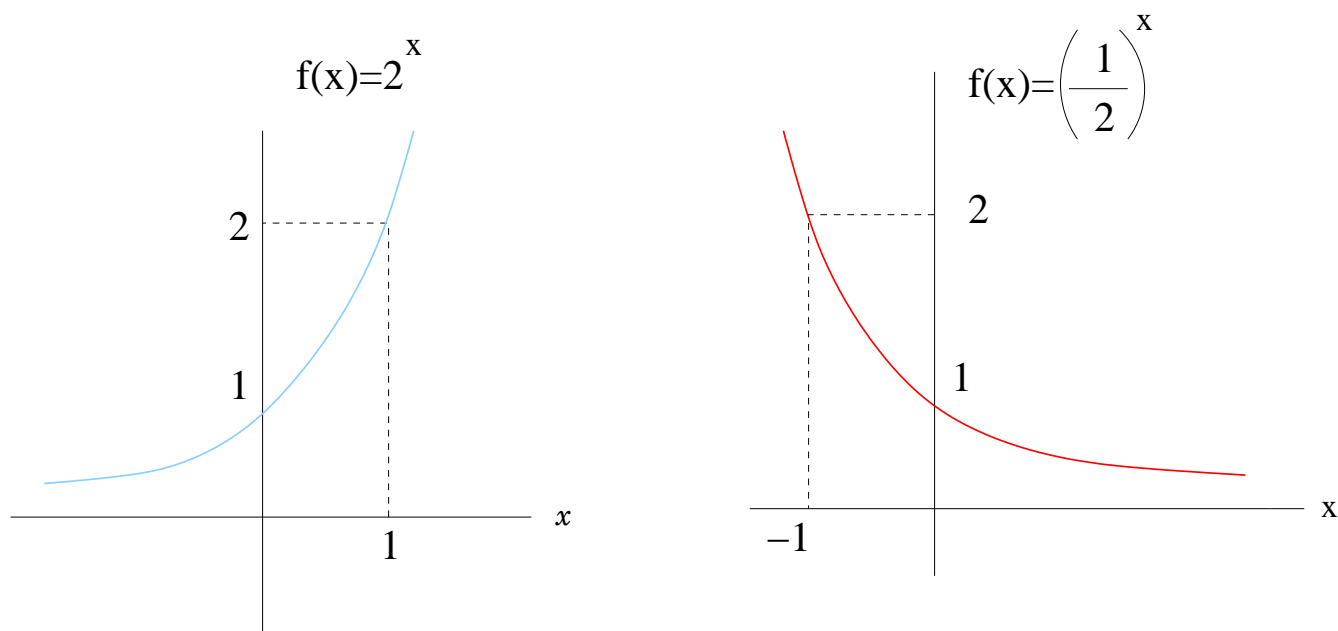


Figure 1: Two typical graphs of exponential functions. The curve on the left is characteristic of functions $y = a^x$ for $a > 1$. The curve on the right is characteristic of functions $y = a^x$ for $0 < a < 1$.

i. $a^x \cdot a^y = a^{x+y}$

ii. $a^x \cdot a^y = a^{x \cdot y}$

iii. $(a^x)^y = a^{x \cdot y}$

iv. $(a^{1/x})^y = \frac{a^y}{a^{y/x}} = a^{y-x}$

Let us take a look at the graphs of some exponential functions. To begin with, note that we always have $f(x) = a^x > 0$ for any $a > 0$ and for all x . Also, when $x = 0$ we always have $f(0) = a^0 = 1$.

When $a > 1$, $f(x) = a^x$ is an increasing function of x . When $0 < a < 1$ it is a decreasing function, as shown in Fig. 1 for $a = 5$ and $a = 1/2$. In this last case we can write the function as $f(x) = 2^{-x}$.

5. Sketch as well as you can the graphs of the following functions.

a) $(2^x)^2$

b) 2^{x^2}

6. What happens to the following quotient

$$\frac{5^x}{7^x}$$

as x increases without bound?

4 The logarithmic function.

Given two positive numbers p and a we define $\log_a p$ to be a number c and write

$$\log_a p = c \quad \text{if} \quad a^c = p: \quad (4)$$

In other words, the expression $\log_a p$ represents the exponent to which a must be raised in order to obtain p . We read expression (4) as the logarithm of p to base a is c .

Let us see some examples.

$$\log_3 81 = 4 \quad \text{since} \quad 3^4 = 81$$

$$\log_2 32 = 5 \quad \text{since} \quad 2^5 = 32.$$

$$\log_6 36 = 2 \quad \text{since} \quad 6^2 = 36$$

$$\log_5 5 = 1 \quad \text{since} \quad 5^1 = 5.$$

$$\log_3 81 = 4 \quad \text{since} \quad 3^4 = 81$$

$$\log_{\sqrt[3]{3}} 81 = 8 \quad \text{since} \quad (\sqrt[3]{3})^8 = 81.$$

$$\log_{1=2} 16 = 4 \quad \text{since} \quad (1=2)^4 = 16$$

$$\log_{100} 1 = 0 \quad \text{since} \quad 100^0 = 1.$$

Three important properties of logarithms are very useful in the simplification of numerical computation.

$$a. \log_a pq = \log_a p + \log_a q$$

$$b. \log_a p = q = \log_a p - \log_a q$$

$$c. \log_a p^r = r \log_a p$$

$$d. \log_a \sqrt[n]{p} = \frac{1}{n} \log_a p$$

for all positive p, q, n and all r .

Use the definition (4) and the properties a, b, c and d to evaluate the following expressions.

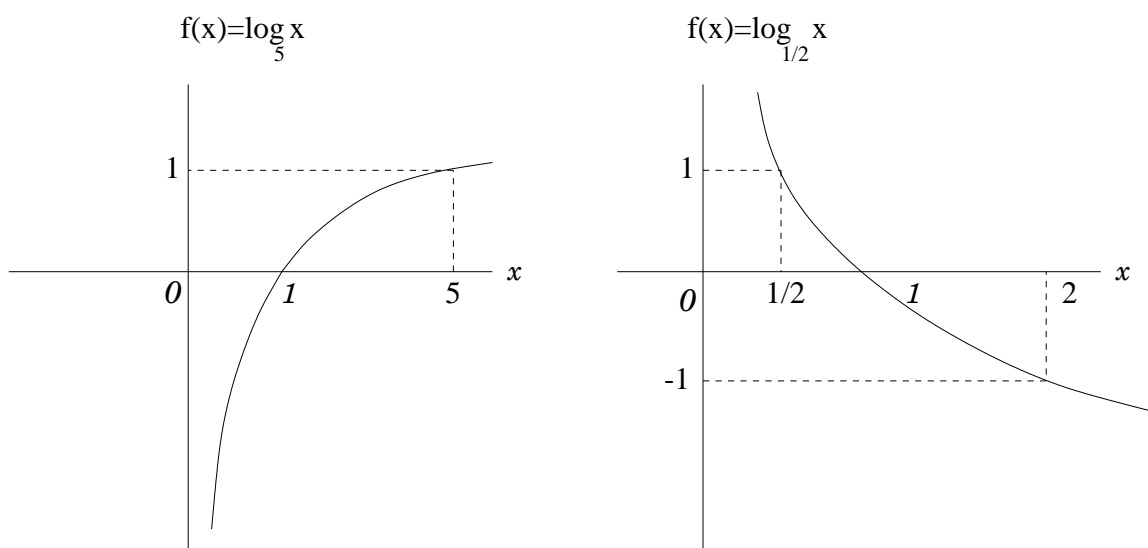


Figure 2: Two typical graphs of logarithmic functions. The curve on the left is characteristic of functions $y = \log_a x$ for $a > 1$. The curve on the right is characteristic of functions $y = \log_a x$ for $0 < a < 1$.

7. $\log_9 \frac{4^p \sqrt{27}}{3}$

8. $\log_{1=4} \frac{16^2}{2^{\frac{2}{3}}}$.

Use the properties a,b,c to rewrite each of the following expressions as sum s and di erences of logarithm s.

9. $\log_m \frac{5s^3}{t^5}$

10. $\log_z \frac{x^5 y^3}{3}$

Let us move on to logarithmic functions. Logarithmic functions are of the form $y = \log_a x$ for $a > 0$. We say that y is the logarithm of x to base a . We define $y = \log_a x$ to be a logarithmic function if and only if $a^y = x$ (What happens when $a = 1$?).

The logarithmic function is an increasing function when $a > 1$ and is a decreasing function when $0 < a < 1$, as shown in Fig 2. In both cases the domain of the function is the set of positive real numbers. This means that the function is defined for positive values of x ; $x > 0$.

11. Sketch as well as you can the graphs of the following functions.

a) $\log_2 x^2$

b) $(\log_2(x))^2$.

12. What happens to the quotient

$$\frac{\log_5 x}{\log_7 x}$$

as x increases without bound?

Although the base a of the logarithmic function can be any positive number, only two bases are widely used. One is the number $e \approx 2.71828$. In this case we have a different notation for the logarithm. Instead of writing $y = \log x$, we write $y = \ln x$ with the implicit understanding that the base is e . The function $y = \ln x$ is then called the natural logarithm of x , and the number e is called the base of the natural logarithm. The other base is the number 10. In this case, instead of writing $y = \log_{10} x$, we just do not indicate the base and write $y = \log x$, with the implicit understanding that the base is 10. The function $y = \log x$ is called the common logarithm.

In our course we will almost always use the base e for logarithms, so that most of our logarithmic functions will be an increasing function of x (since $e > 1$) and will have graphs that look like the one shown on the left in Fig 2. From this basic sketch we can easily graph any logarithmic function. For instance, the graph of $y = 3 \log_2 x$ is the graph of $y = \log_2 x$ stretched vertically by a factor of 3. The graph of $y = 3 \log_2 x + 1$ is the graph of $y = \log_2 x$ stretched vertically by a factor of 3 and shifted one unit up. The graph of $y = \log_2 (x + 4)$ is the graph of $y = \log_2 x$ shifted 4 units to the left (why?).

13. Find x if $\ln x + \ln(5 - x) = \ln 2 + \ln 3$.

14. Find z if $z = 2^{\log_2 32}$?

15. Find w if $5 = 3 \ln w + \ln^p \frac{1}{w}$.

It follows from the definition of exponential and logarithmic functions that there is a close relationship between the two functions. We can change a logarithmic function $y = \log_5 x$ in an equivalent exponential function $5^y = x$.

16. Show that $e^{\ln x} = x$

17. Find x if $e^{\ln x} = 100$.

5 Applications of exponential and logarithmic functions.

In this assignment we consider applications of exponential functions that involve models of exponential growth and decay. These include problems of population growth, radioactive decay, compound interest, natural resources depletion and many others.

Let us take an example of population growth. Suppose that there is a single bacterium in a culture. After some period of time, say 1 hour, the bacterium divides in two daughter cells; after another hour, each of these two cells divides again, thus producing four cells. The process of cell division continues indefinitely as follows.

$t = 0$ population 1

$t = 1$ population 2

$t = 2$ population 4

$t = 3$ population 8

$\vdots \quad \vdots \quad \vdots$

$t = n$ population 2^n

Thus, the population $N(t)$ at any time t is given by the equation

$$N(t) = 2^t: \quad (5)$$

Although population size changes by an integer number of elements, (5) also works well when it is considered a continuous variable.

5.1 Radioactive decay

A quantity R (in milligrams) of radioactive element present during an experiment at time t (in minutes) is given by

$$R = 80e^{0.006t}:$$

The initial quantity of radioactive element is 80 grams. Suppose that at time T half of the quantity of radioactive material present at $t = 0$ remains. The

number T is called the half-life of the element. To find T , substitute $R = 40$ when $t = T$ to get

$$40 = 80e^{0.006T} \quad \text{or} \quad \frac{1}{2} = e^{0.006T} :$$

By taking the logarithm of both sides of the second equation above we obtain

$$\ln(1/2) = 0.006T :$$

Since $\ln(1/2) = -\ln 2$, we get

$$T = \frac{\ln 2}{0.006} \approx 115.5 \text{ minutes}$$

5.2 Charged bodies

The initial charge of $Q_0 = 0.5$ coulombs on an electrified body leaks away from it according to the equation

$$Q(t) = Q_0 e^{-kt}$$

where $k = 3.58 \times 10^{-3} \text{ s}^{-1}$ is the constant of decrement at which the charge leaks away from the body.

1. How long does it take for the body to lose half of its original charge?

5.3 Atmospheric pressure

The pressure p of the atmosphere at an altitude of h miles above sea level is expressed by

$$p(h) = p_0 e^{-kh} ;$$

where $p_0 = 1 \text{ atm}$ is the pressure at sea level.

2. What is the value of k if the pressure at $h = 6$ miles has dropped to 0.25 atm ? What unit is k measured in?

5.4 Newton's law of cooling

When a body is at an initial temperature θ_0 that is higher than the constant temperature T of its surrounding medium, the body will cool off until its temperature drops to room temperature. This is expressed by the formula

$$\theta(t) = T + (\theta_0 - T)e^{kt}$$

where k is the decrement constant and t is time (in minutes).

3. A cake is baked in a 350 degrees oven and is removed to stand in a kitchen at 70 degrees. After 10 minutes, the temperature of the cake is 240 degrees. Find the temperature after one hour.

(Hint: The initial temperature of the cake is 350 degrees. The surrounding medium is the kitchen. Use the given fact that the temperature of the cake is 240 degrees 10 minutes after the cake is removed from the oven to find the constant k in Newton's law of cooling. Then, use the law again to find the temperature after 1 hour.)

6 Derivatives of exponential functions.

We are now interested in finding the derivative of the exponential function $f(x) = a^x$. It is better at this point to take as example a definite exponential function, say $f(x) = 3^x$.

To find the derivative of the exponential function $f(x) = a^x$, we go back to the definition of derivative (Section 2). The derivative of a function is defined as the following limit

$$f'(x) = \lim_{h \rightarrow 0} \frac{f(x+h) - f(x)}{h} :$$

For the function $f(x) = 3^x$ we have

$$(3^x)' = \lim_{h \rightarrow 0} \frac{3^{(x+h)} - 3^x}{h} :$$

h	$\frac{3^h - 1}{h}$
1	2
0.5	1.464
0.1	1.161
0.05	1.129
0.01	1.105
0.001	1.099
0.0005	1.098
0.0001	1.098

Figure 3: Evaluating the limit of the difference quotient (6) as $h \rightarrow 0$.

Since $3^{x+h} = 3^x \cdot 3^h$, we can bring the term 3^x outside the limit as follows.

$$(3^x)' = 3^x \lim_{h \rightarrow 0} \frac{3^h - 1}{h}.$$

We are thus left with calculating the difference quotient

$$\frac{3^h - 1}{h} \tag{6}$$

as h approaches zero.

To see the behavior of the difference quotient (6) as h gets closer and closer to zero, we substitute a sequence of smaller and smaller values for h and observe the corresponding behavior of the difference quotient.

Let us start with an initial value, say $h = 1$ (which is not quite so small!) and then proceed with $h = 0.5$, followed by an even smaller h , like $h = 0.1$ and so forth. Table 1 shows the values of h we have chosen. The corresponding values of the difference quotient are shown on the right.

We see that for values of h smaller than 0.001 the difference quotient gets

closer and closer to the limiting value 1.098. This behavior is described by saying that the limit of $(3^h - 1)/h$ as h approaches 0 is 1.098, or yet

$$\lim_{h \rightarrow 0} \frac{3^h - 1}{h} = 1.098: \quad (7)$$

We are thus able to find the derivative of the exponential function 3^x . Our result is

$$(3^x)' = 3^x \cdot 1.098:$$

What is the meaning of the number 1.098? It turns out that 1.098 is related to both the number 3 appearing in the exponential function 3^x and to a natural logarithm. You can check for yourself that your calculator gives you

$$\ln 3 = 1.098:$$

From this we conclude that 1.098 is the power to which the number e has to be raised to obtain a 3: $e^{1.098} = 3$.

We can then write down the following formula for the derivative of 3^x .

$$(3^x)' = 3^x \cdot \ln 3:$$

In fact, the derivative of any exponential function $f(x) = a^x$, for any value of a , is $(a^x)' = a^x \ln a$. Because of this, it is important that you have an idea of the logarithm of some numbers, such as $\ln 2 = 0.6931$, $\ln 5 = 1.609$, $\ln 7 = 1.946$, $\ln 10 = 2.302$. Among all numbers, however, one in particular plays a special role. It is the number $e = 2.71828$. For this number, the derivative of the exponential function e^x is the exponential function itself:

$$(e^x)' = e^x \quad \ln e = 1:$$

This also means that if we repeated the steps that led to formula (6) for the function e^x we would have obtained, instead of (7), the limit

$$\lim_{h \rightarrow 0} \frac{e^h - 1}{h} = 1:$$

This formula can be used as the very definition of the number e .

Find the derivatives of the following functions.

$$19. f(x) = 2^x \quad 20. f(x) = \left(\frac{1}{5}\right)^x \quad 21. f(x) = (1/3)e^x$$

7 The chain rule for exponential functions.

The differentiation formulas we have developed so far, when combined with a few other results that are immediate consequence of the Chain Rule of differentiation, provide us with a technique to find the derivative of many other functions.

We are going to deal with the exponential in the same way we dealt with power functions (See Section 2).

Suppose we want to find the derivative of the exponential function $e^{u(x)}$, where $u(x)$ is a function of x . Let e^{x^2} be an example of such a function. The chain rule for exponential functions tells us that

$$e^{u(x)}{}' = e^{u(x)} u'(x): \quad (8)$$

We have also to consider the case when the exponential function is $f(x) = a^{u(x)}$ for any number a other than e . For instance, let $f(x) = 6^{(x^2 + 11x + 9)}$. The chain rule in this case yields

$$a^{u(x)}{}' = a^{u(x)} u'(x) \ln a: \quad (9)$$

Find the derivatives of the following functions.

22. $f(x) = e^{x^2}$

23. $f(x) = 6^{(x^2 + 11x + 9)}$.

24. The concentration C in the blood of a certain drug administered by muscle injection is given by

$$C = 2.8(e^{0.02t} - e^{0.6t})$$

at time t after the injection.

Find an expression for the rate of change of concentration.

25. The voltage V (in volts) in a particular electric circuit as a function of time t (in seconds) is given by the equation

$$V = 120(1 - e^{0.3t})$$

a) Sketch the graph of $V(t)$.

b) Find t for which $V = 60$ volts.

c) Find the time rate of change of V when $t = 10$ s.

8 Derivatives of logarithmic functions

In dealing with logarithmic functions, we will consider only base-e logarithms. Having studied the basic properties of logarithmic functions in Section 4, we now turn our attention to the derivatives of these functions.

The derivative of the logarithmic function $y = \ln x$ is

$$(\ln x)' = \frac{1}{x}$$

Find the derivatives of the following functions.

1. $f(x) = \ln x^2$

2. $f(x) = \ln^p x$.

(Hint: The derivative of $\ln x$ is $1/x$ but the derivative of $\ln x^2$ is NOT $1/x^2$! You will need to use one of the properties of logarithms to write the function above in plain $\ln x$ form before taking the derivative.)

When the logarithmic function is combined with other functions to produce a composite function of the form

$$y = \ln u(x);$$

where $u(x)$ is a function of x , its derivative is given by the chain rule.

The derivative of the logarithmic function $y = \ln u(x)$ is

$$(\ln u(x))' = \frac{1}{u(x)} u'(x):$$

Find the derivative of the following functions.

3. $f(x) = \ln(x^2 + 3x + 2)$

4. $f(x) = \ln \frac{x+1}{x^2+1}$.

Extra: Use the chain rule to find the derivatives of the functions in exercises 1 and 2 above. Did you get the same result?!

The above differentiation rules for logarithmic functions, together with the rules for the differentiation of exponential and power functions, complete the first stage of our course. It is appropriate at this point to have a summary of the basic derivative formulas.

a. $f(x) = k$, a constant,	$f'(x) = 0$
b. $f(x) = x^n$,	$f'(x) = nx^{n-1}$
c. $f(x) = kx^n$,	$f'(x) = knx^{n-1}$
d. $f(x) = e^x$,	$f'(x) = e^x$
e. $f(x) = ke^x$,	$f'(x) = ke^x$
f. $f(x) = a^x$, $a > 0$,	$f'(x) = a^x \ln a$
g. $f(x) = \ln x$,	$f'(x) = 1/x$

You should remember that each one of these basic formulas have a generalization given by the chain rule when the single variable x is replaced by a function $u(x)$ of x .

Use the table above (when necessary combine it with the chain rule and the product and quotient rules of derivatives) to find the derivatives of the following functions.

$$5. y = xe^{\frac{1}{x}} \quad 6. y = e^x \ln x \quad 7. y = \frac{\ln x}{x^2} \quad 8. y = \ln(\ln x).$$

8.1 Miscellaneous applications

9. An object is moving in such a way that its distance (in meters) as a function of time (in seconds) is given by the equation

$$s = \ln(t^2 + 7):$$

- If the object started to move at $t = 0$, what was its distance at that time.
- When is the object at distance $s = 7$ meters?
- Find the instantaneous velocity (in meters per second) of the object when $t = 4$ s.

10. The noise level of a sound with pressure p is measured in decibels by the formula

$$D = \frac{5}{2} \log \frac{p}{15}:$$

Suppose the noise from outside in a residence is 30 decibels. What will be the noise in the residence if the windows are replaced by glass windows that cut the pressure of any sound by half?

11. The resistance R (in ohms) of a certain resistor varies with the temperature T (in degrees Celsius) according to the formula

$$R = 265 + 0.3T + 0.02T^2;$$

- a) At what temperature is the resistance 300 ohms?
- b) Find an expression for the rate of change of the resistance with temperature.

12. The volume V (in cubic meters) of a quantity of gas is given by the equation

$$V = 8.1 \frac{T}{P};$$

where the temperature T and the pressure P are functions of the time (in hours) given by

$$T = 2.7t^3 - 5 \quad \text{and} \quad P = 2.5t;$$

Find the rate of change of volume with respect to time when $t = 0.78$ h.

9 Notions of integration. The integral of power, exponential and logarithmic functions.

So far in our course you have been given a function $f(x)$ and asked to find its derivative $f'(x)$. This process is called differentiation. For instance,

$$\text{given } f(x) = \frac{x^4}{4} \text{ its derivative is } f'(x) = x^3: \quad (10)$$

Section 8 contains a table of derivative formulas for the functions we have been dealing with. Let us see the basic formulas of that table again.

Power Functions

$$y = x^n \qquad y' = nx^{n-1} \quad (11)$$

Exponential Functions

$$y = e^x \qquad y' = e^x \qquad (12)$$

More Exponential Functions, $a \neq 1$:

$$y = a^x \qquad y' = a^x \ln a \qquad (13)$$

Logarithmic Functions

$$y = \ln x \qquad y' = 1/x \qquad (14)$$

From now on, we will be dealing with the inverse of the differentiation problem. You will be given a function, say x^3 , and, instead of being asked to find its derivative, you will be asked to find its antiderivative. By this we mean that you will be asked to come up with a function whose derivative is x^3 . From our example above it is clear that the antiderivative of x^3 is the function $x^4/4$.

To arrive at $x^4/4$ as the function having derivative x^3 you have used your knowledge of derivatives. You probably used formula (11) above, but in reverse! This backward thinking (and some guessing too) is part of the process.

The antiderivative problem of the previous example could have been written with the notation (10) in reverse

$$\text{given } f'(x) = x^3 \text{ its antiderivative is } f(x) = \frac{x^4}{4}:$$

However, instead of doing this, we are going to use the following notation

$$\int x^3 dx = \frac{x^4}{4} \qquad (15)$$

In general, we will write

$$\int f dx = F(x);$$

with the understanding that F is the antiderivative of f . In our example, $f(x) = x^3$ and $F(x) = x^4/4$.

The symbol $\int f(x) dx$ is called the indefinite integral, or just the integral of f with respect to x . The symbol \int is called an integral sign. The symbol

dx contributes little. It just indicates that x is the variable with respect to which the integration is being performed.

You observe immediately from our example that the functions

$$\frac{x^4}{4}; \quad \frac{x^4}{4} + 7; \quad \frac{x^4}{4} + 996; \quad \frac{x^4}{4} + 4^{71};$$

all have the same derivative x^3 . In fact, the function $\frac{x^4}{4}$ plus any arbitrary constant has derivative x^3 , since the derivative of a constant is zero. Because of this, we write our integral formula (15) more precisely in the following way.

$$\int x^3 dx = \frac{x^4}{4} + C;$$

where C denotes any arbitrary constant.

1. In each of the following exercises check the correctness of the integration by differentiating the functions on the right side.

$$a. \int x^2 e^x dx = (x^2 - 2x + 2)e^x \qquad b. \int 3x^2 e^{x^3} dx = e^{x^3} \quad 37.$$

$$c. \int \ln x dx = x \ln x - x + 10 \qquad d. \int \frac{1}{x} dx = \frac{2}{3}x^{3/2} + 11.$$

Below we will develop techniques that will allow you to give many antiderivatives directly. These techniques are called techniques of integration and constitute the core of our course. At this point, however, you should use your knowledge of derivatives (the table above) to make an educated guess in order to find antiderivatives. Try with these exercises.

$$2. \int x^{10} dx \qquad 3. \int \frac{x^2+1}{x^2} dx: \qquad 4. \int (x+1)^2 dx:$$

5. Let $m(x) = x^2 + x^3 + 1 = x + e^x$. Find an antiderivative of $m(x)$. Find an antiderivative of $m(x)$ having the value e when $x = 1$.

$$6. \text{ Let } g(x) = e^{4x+9x^2}. \text{ Find } g'(x). \text{ Evaluate } \int (2+9x)e^{4x+9x^2} dx.$$

7. Find a function h satisfying the condition that $h'(x) = \frac{1}{x} + x^{5/2}$ ($x > 0$), $h(1) = 0$.

$$8. \text{ Let } g(x) = (1-3)(2x+1)^{3/2}. \text{ Find } g'(x). \text{ Evaluate } \int (2x+1)^{1/2} dx.$$

You are ready now to understand the following formulas for antiderivatives that correspond to the differentiation formulas for power, exponential and logarithmic functions.

A . Power functions

$$\int x^p dx = \frac{x^{p+1}}{p+1} + C; \quad \text{provided } p \neq -1: \quad (16)$$

Verify formula (16) by taking the derivative of $x^{p+1} = (p+1)x^p + C$.

We have excluded the case $p = -1$ in (16) because it does not follow the general pattern.

B . For $p = -1$ we have

$$\int \frac{1}{x} dx = \ln |x| + C: \quad (17)$$

Remember that the log function is defined only for positive values of x . The absolute value in (17) is necessary when $x < 0$.

C . Exponential functions

$$\int e^x dx = e^x + C: \quad (18)$$

This simple formula is a consequence of the use of the number e . Any number other than e will make the formula more complicated. Since the derivative of the any exponential function is $(a^x)' = a^x \ln a$, for $a \neq e$, it follows that

$$D. \quad \int a^x dx = \frac{a^x}{\ln a} + C: \quad (19)$$

Use formulas A, B, C, D to find the integrals below. Note that the integral of a sum is equal to the sum of the integrals. Also, any factors multiplying the function to be integrated can be brought outside the integral as a factor multiplying the whole integral.

$$10. \quad \int (3^x + 5x^{2-3}) dx$$

$$11. \quad \int \frac{5x^3 - 1}{3^x} dx$$

$$12. \int \frac{(x-1)^2}{x} dx$$

$$13. \int (1+5^x)^2 dx$$

$$14. \int e^{(x-3)^2} dx$$

$$15. \int (x^p - \frac{p}{x})^2 dx.$$

The integration formulas A, B, C and D above correspond to the basic differentiation formulas read in reverse. They allow us to find antiderivatives of the simple functions of problems 2 to 15 above. For more complicated functions we need to develop more general methods. These methods are given the name techniques of integration and involve the techniques called Substitution, Partial Fractions and Integration by Parts. Substitution is the topic of the next assignment.

10 Techniques of integration. Integration by substitution.

The integration formulas we learned in Section 9 were

A. Power functions

$$\int x^p dx = \frac{x^{p+1}}{p+1} + C; \quad \text{provided } p \neq -1: \quad (20)$$

B. For $p = -1$ we have

$$\int \frac{1}{x} dx = \ln |x| + C: \quad (21)$$

C. Exponential functions

$$\int e^x dx = e^x + C; \quad \int a^x dx = \frac{a^x}{\ln a} + C: \quad (22)$$

These integration formulas correspond to our basic differentiation formulas. We are now going to begin the study of more general methods of integration. This assignment deals with substitution. The chain rule for the derivative of

a composite function gives rise to this integration technique. The method is illustrated with the following example. Suppose you want to find the integral

$$\int 2x(x^2 + 1)^{1/2} dx:$$

$$\int 2x(x^2 + 1)^{1/2} dx: \quad (23)$$

This integral can not be found using the basic formulas A, B, C above. The substitution technique intends to transform the integral (23) into one of the basic formulas by a suitable substitution or change of variable. The goal is to replace the variable x by a new variable { let us call it u } in such a way that the integral in u can be performed using formulas A, B and C. For the integral (23) the suitable change of variables is

$$u = x^2 + 1:$$

It is clear that substituting this u for $x^2 + 1$ in (23) leads to

$$\int 2x u^{1/2} dx;$$

$$\int 2x u^{1/2} dx; \quad (24)$$

which looks like the integral for the power function A in the variable u , except that we are still left with the factor $2x dx$.

The term $2x dx$ is taken care of by observing that

$$\text{if } u = x^2 + 1; \quad \text{then } du = 2x dx:$$

Thus, the term $2x dx$ can also be replaced by du . In this way, the whole product $2x(x^2 + 1)^{1/2}$ under the integral sign is completely replaced by $u^{1/2} du$, and we can write

$$\int 2x(x^2 + 1)^{1/2} dx = \int u^{1/2} du;$$

with $u = x^2 + 1$.

The integral in the new variable u is indeed a simple power function and can be integrated directly to give

$$\int u^{1/2} du = \frac{2}{3} u^{3/2} + C:$$

Since the change of variable is only a tool to carry out the integration, at the end we have to plug back the expression for u as a function of x . Our tour from x to u and back to x leads us to the following result.

$$\int 2x(x^2 + 1)^{1/2} dx = \int u^{1/2} du = \frac{2}{3} u^{3/2} + C = \frac{2}{3} (x^2 + 1)^{3/2} + C:$$

The substitution technique is not restricted to power functions. What is important is that you end up with one of the basic formulas A, B, and C. Sometimes this is not possible. For example, this method could not be applied to the evaluation of $\int_0^2 (x^2 + 1)^{1/2} dx$. If we set $u = x^2 + 1$, we have $du = 2x dx$, everything as before. However, in this case, the change of variable does not lead to one of our basic formulas. For situations like this, we have to appeal to other methods of integration.

Sometimes the substitution technique surprises us. Here is one example. Suppose we want to find

$$\int \frac{e^x}{1 + e^x} dx; \quad (25)$$

which looks nothing like any of our basic formulas. ARG !!.

However, the substitution $u = 1 + e^x$ does a remarkable job here, since

$$\text{if } u = 1 + e^x; \quad \text{then } du = e^x dx:$$

Now both the numerator and the denominator of (25) can be written in terms of u only as

$$\int \frac{e^x}{1 + e^x} dx = \int \frac{1}{u} du;$$

which is only one of the basic formulas. Formula B gives

$$\int \frac{1}{u} du = \ln |u| + C:$$

Let us again write the beginning and the end in the variable x , and the middle part in u . We have

$$\int \frac{e^x}{1 + e^x} dx = \int \frac{1}{u} du = \ln |u| + C = \ln(1 + e^x) + C:$$

Find the following integrals by substitution.

- | | |
|----------------------------------|---|
| 1. $\int x^2 (x + 42)^{1/2} dx$ | 2. $\int (x^4 + 5x)(4x^3 + 5) dx$ |
| 3. $\int \frac{1}{5 + 4x} dx$ | 4. $\int \frac{e^{2x}}{e^{2x} + 4} dx$ |
| 5. $\int \frac{(\ln x)^2}{x} dx$ | 6. $\int \frac{3x^2 - 2}{x^3 - 2x} dx$ |
| 7. $\int 3^{6x} dx$ | 8. $\int \frac{x}{x+3} dx \quad (u = x + 3).$ |

$$9. \int_0^R \frac{e^x e^{-x}}{e^x + e^{-x}} dx$$

$$10. \int_0^R x e^{4x^2} dx.$$

11 The definite integral and its relation to area. The area between curves.

We have introduced the notion of integration and have developed our first technique of integration (substitution) in Section 10. Before going on with the two remaining techniques of integration, let us analyze a little further the concept of integral.

Consider the following problem.

The graph of the function $f(x) = 2x$ between $x = 0$ and $x = 2$ defines a triangular region as shown in Fig. 1. The problem is: What is the area of the region bounded by the graph of $y = 2x$ and the x -axis between $x = 0$ and $x = 2$?

To find the area of this region, we use the formula for the area of the triangle to get

$$A = (1/2) (\text{base of the triangle} \times \text{height of the triangle}) = 4;$$

We want to show that there is an alternative way to obtain the value of the area under the curve $2x$, and consists in the following. We first look for a function $F(x)$ such that its derivative is $2x$. That is, we look for a function $F(x)$ such that $F'(x) = 2x$. Still another way to say is that we look for the antiderivative of the function $2x$. You know what this function is. Or, we should say, what these functions are. Because there is more than one function. Just take the integral of the curve $2x$ to obtain

$$F(x) = \int 2x dx = x^2 + C;$$

where C is any constant.

Now, let us evaluate the function $F(x)$ at the point $x = 0$ of the interval $[0; 2]$. We get $F(x = 0) = 0 + C$. Next, let us evaluate the function $F(x)$ at the point $x = 2$. We get $F(x = 2) = 4 + C$. Then observe that

$$F(x = 2) - F(x = 0) = (4 + C) - (0 + C) = 4;$$

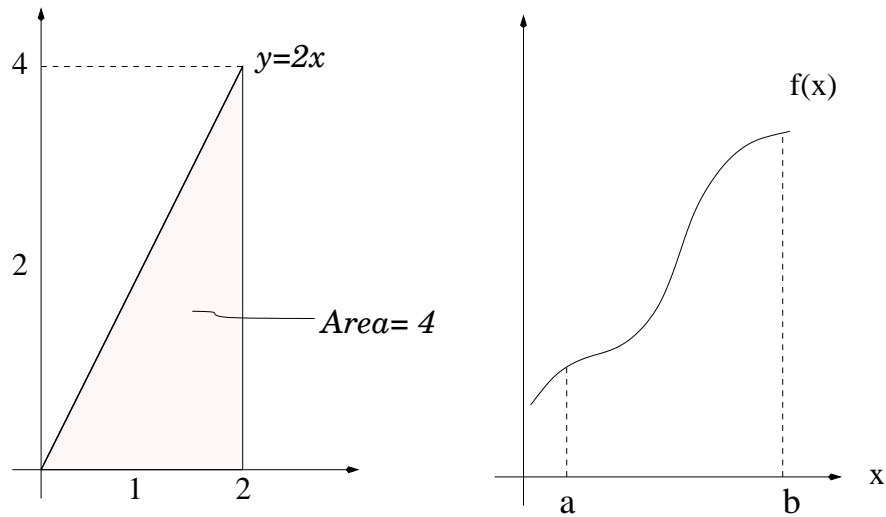


Figure 4: Evaluating the area of the shaded region.

is the value we obtained for the area of the region when we used the formula $A = (1/2)(\text{base} \cdot \text{height})$.

Since we have found a new way to determine the area, let us introduce a new notation. Instead of denoting this area by A we will represent it by the expression $\int_0^2 2x \, dx$, and its value will be given by

$$\int_0^2 2x \, dx = F(x=2) - F(x=0) = 4: \quad (26)$$

This formula stands for this sentence: "The area of the region bounded by the curve $f(x) = 2x$ and the x -axis between $x = 0$ and $x = 2$ is the difference in the values of the function $F(x)$ at $x = 2$ and at $x = 0$ ".

We call $\int_0^2 2x \, dx$ the definite integral of the function $2x$. Thus a definite integral of a function is a number that measures the area under the curve.

We have thus transformed the problem of finding the area under a curve into a problem of finding the antiderivative of the function that defines the curve. Although we have done this for only one example of a simple linear function, this property holds for any continuous function.

If $f(x)$ is a continuous and non-negative function on the interval $a \leq x \leq b$ the area of the region bounded by the graph of f and the x -axis

between the points $x = a$ and $x = b$ is given by

$$\int_a^b f(x) dx = F(b) - F(a); \quad (27)$$

where $F' = f$.

This result is known as the Fundamental Theorem of Calculus. In formula (27) the numbers a and b are called limits of integration and the function $f(x)$ is called the integrand.

The crucial point to understand here is that there is a relationship between the measure of the area defined by the function $f(x)$ and the value of the function $F(x)$.

1. Find the area of the region bounded by the curve $y = 4 - x$ and the x -axis between $x = 0$ and $x = 4$. Use the formula for the area of a triangle to check your result.
2. What is the area of the region enclosed by the curve $y = \sqrt{x}$ and the x -axis between $x = 0$ and $x = 4$?
3. Find the area of the region bounded by the curve $y = e^{2x}$, the y -axis, the x -axis and the line $x = 2$.
4. Find the area of the region bounded by the curve

$$y = \frac{x^3}{5} \sqrt{x^2 + 16}$$

and the x -axis between $x = 0$ and $x = 3$.

5. Find the area bounded by $y = x^2 + 4x - 3$ and the x -axis.

Formula (27) has an obvious generalization when one wishes to find the area of the region bounded by two curves, $f(x)$ and $g(x)$, between the points $x = a$ and $x = b$. If $g(x) \geq f(x)$ for $a \leq x \leq b$, then

$$\text{Area} = \int_a^b [f(x) - g(x)] dx:$$

6. Find the area of the region below the curve $y = \sqrt[3]{x}$ and above the curve $y = x$.

7. Find the area of the region bounded by the graphs of

$$y = 5 - x^2 \quad \text{and} \quad y = 5 - 2x:$$

It is possible to express many mathematical and physical quantities as integrals. The following exercises are practical problems whose solutions are based on definite integrals. In all of them a relationship between two functions is given in terms of derivatives, in the same way that a function $f(x) = 2x$ is related to $F(x) = x^2$ in our previous example. You are then asked to evaluate a definite integral, in the same way you would do if you were asked to evaluate the area under the curve $2x$. You should identify the function to be integrated and the limits of integration.

8. Angular velocity ω for a rotating object is the time rate of change of angular displacement θ ,

$$\omega = \frac{d\theta}{dt}:$$

A wheel rotates at a rate given by

$$\omega = 2t^2 - t + 5 \quad (\text{revolutions per minute})$$

Find the number of revolutions in the first 30 seconds.

9. The current I in an electric circuit is the time rate of change of the total charge q that has passed a given point in the circuit. Therefore,

$$I = \frac{dq}{dt}:$$

The current in a certain circuit as a function of time is given by the equation

$$I = 3t^2 + t:$$

What is the total charge (in coulombs) that passes a given point in the circuit in the first 2 seconds?

10. An offshore oil well after t days of drilling produced oil at a rate of

$$200 + 3t - 0.2t^2$$

barrels a day. Find the total output of the well for the first 10 days of drilling.

12 Volumes of solids of revolution.

The last three exercises of Section 11 dealt with applications of the definite integral to physical quantities like the electric current and the angular velocity. Let us continue with more applications, this time using the definite integral to calculate volumes of solids of revolutions.

A solid of revolution is obtained whenever a curve $f(x)$ is rotated about the x -axis, as shown in Figure 5. The volume of the solid is defined by the rotation of the curve $f(x)$ from point $x = a$ to $x = b$.

The x -axis around which the curve is rotated is an axis of symmetry of the resulting solid. It should be noted that we can as well generate a solid by rotating an area in the plane xy about any fixed horizontal or vertical line in the plane. In our discussion this line will always be the x axis.

The volume V of the solid of revolution obtained by revolving around the x -axis the curve $f(x)$ is given by

$$V = \int_a^b [f(x)]^2 dx:$$

1. Find the volume obtained by revolving around the x axis the graph of $y = \sqrt{x}$ between $x = 1$ and $x = 2$.
2. What is the volume of the solid generated by revolving about the x axis the curve $y = e^x - 1$ between $x = 0$ and $x = 2$?
3. Find the volume of the solid generated by revolving around the x axis the region bounded by the graph of $y = 2x^2$ and the x axis between $x = 0$ and $x = 5$.
4. Let R and H be two positive numbers. What is the geometrical object obtained when the region bounded by the curve

$$y = \frac{R}{H} x;$$

the x axis and the lines $x = 0$ and $x = H$ is rotated around the x axis? Find the volume of the resulting solid.

5. A semicircle of radius R and center $(0;0)$ has equation

$$y = \sqrt{R^2 - x^2}:$$

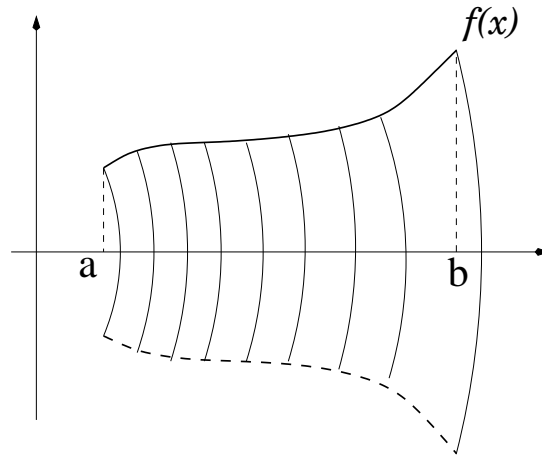


Figure 5: The solid swept out by a plane area as it is revolved about the x -axis is called a solid of revolution. For instance, a right circular cylinder is a solid of revolution that may be generated by revolving a rectangle about one of its sides. In this figure the plane area defined by the curve $f(x)$ and the x axis between $x = a$ and $x = b$ is revolved around the x axis. Note that every point in the area being revolved describes a circle.

Obtain the volume of a sphere of radius R by revolving this semicircle about the x axis.

6. Find the volume generated by rotating the area in the first quadrant bounded by $y = 9 - x^2$, $x = 0$ and $y = 0$ about the x axis.

13 Techniques of integration . Integration by partial fractions

We have learned that definite integrals are useful tools to compute areas and volumes and also find applications in many other problems as discussed in Sections 11 and 12.

At first the integrals we performed were very simple because we knew how to find antiderivatives of just a few functions. Then, we introduced our first technique of integration { substitution }, which has allowed us to obtain the

antiderivatives of more complicated functions.

In this assignment we resume our study of other methods of integrations with a technique called Expansion in Partial Fractions or simply Partial Fractions. This technique of integration is useful when the integrand is a rational function. A rational function is a function that can be written as a ratio of polynomial functions. For instance

$$f(x) = \frac{3x + 6}{x^2 + 2x - 3}$$

is a rational function.

How does integration by partial fractions work when one wish to integrate

$$\int \frac{3x + 6}{x^2 + 2x - 3} dx ? \quad (28)$$

The method consists in writing the denominator of (28) as a product of factors of the first degree, none of which are repeated. The denominator of (28) can be decomposed into two factors: $x^2 + 2x - 3 = (x - 1)(x + 3)$. Thus,

$$\frac{3x + 6}{x^2 + 2x - 3} = \frac{3x + 6}{(x - 1)(x + 3)} :$$

Now the above fraction is decomposed or separated into as many partial fractions as there are factors in the denominator, each fraction having one of the factors as denominator.

$$\frac{3x + 6}{x^2 + 2x - 3} = \frac{A}{x - 1} + \frac{B}{x + 3}; \quad (29)$$

where A and B are constants to be determined so that (29) is indeed an equality. On developing the right side we get

$$\begin{aligned} \frac{3x + 6}{x^2 + 2x - 3} &= \frac{A}{x - 1} + \frac{B}{x + 3} \\ &= \frac{A(x + 3)}{(x - 1)(x + 3)} + \frac{B(x - 1)}{(x - 1)(x + 3)} \\ &= \frac{(A + B)x + (3A - B)}{(x - 1)(x + 3)}; \end{aligned}$$

The numerators on the left and right sides of the above equation will be equal if $A + B = 3$ and $3A - B = 6$. Solving for A and B , we get $A = \frac{9}{4}$ and $B = -\frac{3}{4}$.

The original fraction in the integrand can be replaced by two partial fractions

$$\begin{aligned} \int \frac{3x+6}{x^2+2x-3} dx &= \int \frac{\frac{9}{4}}{x-1} dx + \int \frac{-\frac{3}{4}}{x+3} dx \\ &= \frac{9}{4} \int \frac{1}{x-1} dx + \frac{3}{4} \int \frac{1}{x+3} dx: \end{aligned}$$

Each of these terms can be integrated by substitution. We get

$$\int \frac{3x+6}{x^2+2x-3} dx = \frac{9}{4} \ln|x-1| + \frac{3}{4} \ln|x+3| + C:$$

Observe that to be able to decompose a rational fraction into partial fractions the degree of the numerator must be less than the degree of the denominator.

When this is not the case, as in

$$\int \frac{x^4+6x^3}{x^2+3x+1} dx;$$

the fraction has to be reduced by performing the division

$$\frac{x^4+6x^3}{x^2+3x+1} dx = x^2+3x-10 + \frac{27x+10}{x^2+3x+1}$$

and using partial fraction for the remainder

$$\int \frac{27x+10}{x^2+3x+1} dx:$$

Use partial fractions to find the following integrals.

$$1: \int \frac{4x-2}{(x+2)(x-4)} dx$$

$$2: \int \frac{x+2}{x^2+x-6} dx$$

$$3: \int \frac{4x-1}{x^2+x-2} dx$$

$$4: \int \frac{x+2}{x^2-1} dx$$

$$5: \int \frac{3x+6}{x^3+2x^2-3x} dx$$

$$6: \int \frac{3x+5}{(x-2)(x-3)(x-5)} dx$$

14 Trigonometric functions.

In this assignment we will make a review of trigonometry, the mathematics of angles and triangles. We will then pass on to trigonometric functions and study the differentiation and integration of these functions.

The importance of trigonometric functions lies in their useful role in the construction of physical models of repetitive or periodic phenomena. Business cycles, sound waves, blood pressure in the aorta, are periodic phenomena that can be described by trigonometric functions.

14.1 The unit circle

Let us begin by setting an x-axis and an y-axis orthogonal to each other with a origin at O , as shown in Figure 6. We have also drawn a circle of unit radius with center in O . This circle is called the trigonometric circle or the unit circle.

Consider the rotation of the point A from its initial position on the x-axis to the point P on the unit circle. Let θ be the angle formed by the line OP and the x-axis. We assume that counterclockwise rotations define positive angles, thus θ is a positive angle; clockwise rotations define negative angles.

14.2 Measurement of angles

There are two commonly used units of measurement for angles, the degree and the radian. To measure an angle in degrees the unit circle is divided into 360 equal degrees, so that each of the four quadrants comprise 90 degrees. The radian measure of an angle is equal to the length of the arc it subtends

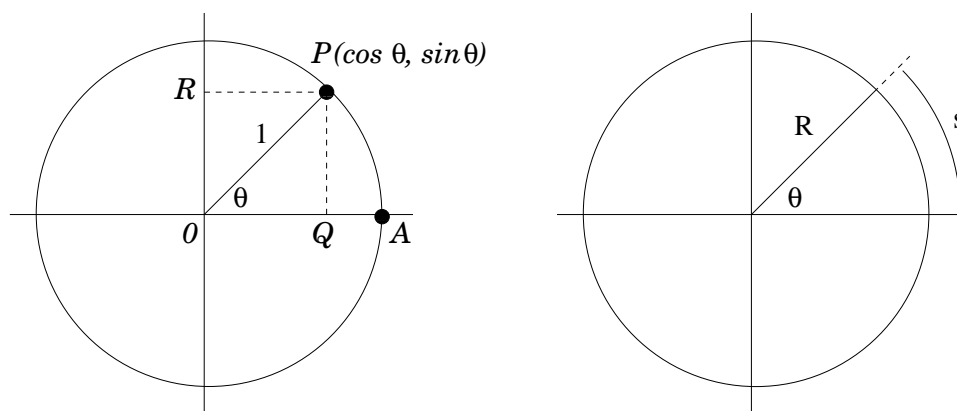


Figure 6: Representation of angles on the unit circle.

on the circle. If, instead of taking a unit circle, one takes any circle as shown in Figure 6, then the radian measure of the angle is the ratio of the length s of the arc it subtends to the radius R of the circle,

$$= \frac{s}{R}$$

Since the length of a circle of unit radius $R = 1$ is 2π , a full revolution on the unit circle, starting from and returning to position A , comprises 360 degrees or 2π radians. Thus, to convert degrees to radians, multiply by $\frac{\pi}{180}$, and to convert radians to degrees, multiply by $\frac{180}{\pi}$.

Here is a table of common angles in both degrees and radians.

30 degrees = $\frac{\pi}{6}$ radians	45 degrees = $\frac{\pi}{4}$ radians
60 degrees = $\frac{\pi}{3}$ radians	90 degrees = $\frac{\pi}{2}$ radians
120 degrees = $\frac{2\pi}{3}$ radians	135 degrees = $\frac{3\pi}{4}$ radians
150 degrees = $\frac{5\pi}{6}$ radians	180 degrees = π radians
270 degrees = $\frac{3\pi}{2}$ radians	360 degrees = 2π radians

14.3 Trigonometric functions and their graphs

The sine of the angle θ is the vertical coordinate OR (Fig. 7) of the point P , or the height of the point above or below the horizontal axis of the unit circle.

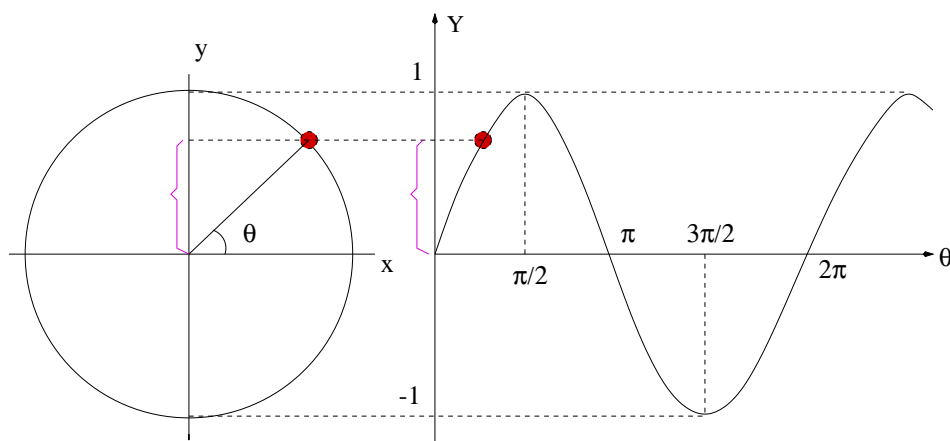


Figure 7: The sine function $Y = \sin \theta$ is the height of points on the unit circle both above and below the horizontal axis of the circle as a function of the angle θ .

Points above the horizontal axis have positive coordinates; points below the horizontal axis have negative coordinate.

The cosine of the angle θ is the horizontal coordinate OQ of the point P , or the horizontal distance of the point to the right or to the left of the origin O . Points to the right of the origin have positive coordinate; points to the left of the origin have negative coordinates.

The shapes of the graphs of $\sin \theta$ and $\cos \theta$ can be determined from these definitions.

For each position of the point P , the sine function is obtained by plotting the vertical height of P , as shown in Figure 7.

For each position of the point P , the cosine function is obtained by plotting the horizontal distance from O , as shown in Figure 8.

Note that the graphs of these functions oscillate between a maximum of 1 and a minimum of -1. Also, the basic shape depicted in the figures repeats every 2π radians or 360 degrees. We say that the sine and cosine functions are periodic functions of period 2π or 360. Mathematically this is expressed as follows.

$$\sin(\theta + 2\pi) = \sin \theta \quad \text{and} \quad \cos(\theta + 2\pi) = \cos \theta :$$

The sine curve crosses the horizontal axis at the origin ($\theta = 0$), again at ($\theta = \pi$), still again at ($\theta = 2\pi$), and so forth indefinitely. Thus the sine

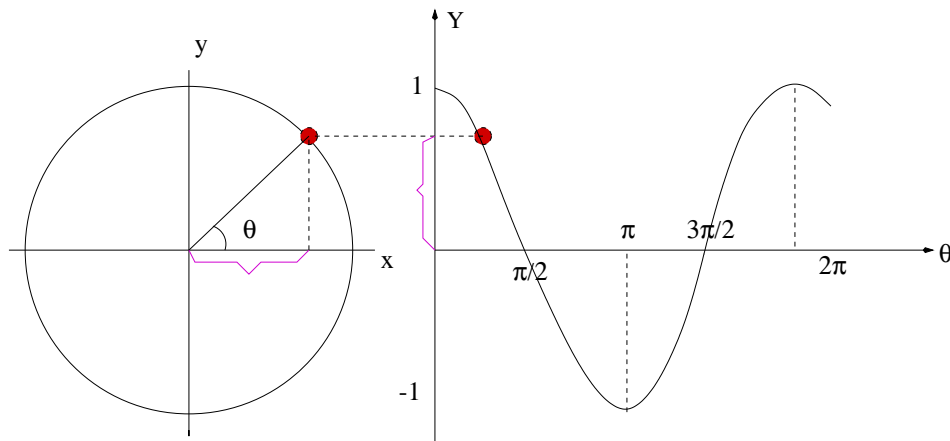


Figure 8: The cosine function $Y = \cos \theta$ is the horizontal distance of points on the unit circle to the left and to the right of the vertical axis of the circle as a function of the angle θ .

function has zeros at every multiple of $\pi/2$. It reaches a maximum value of 1 when $\theta = 0, 2\pi, 4\pi, \dots$ It reaches a minimum of -1 value when $\theta = \pi, 3\pi, 5\pi, \dots$

The cosine function crosses the horizontal axis when $\theta = \pi/2, 3\pi/2, 5\pi/2, \dots$ It attains its maximum value when θ is any even multiple of $\pi/2$, or when $\theta = 0, 2\pi, 4\pi, \dots$ It attains a minimum value when θ is any odd multiple, or when $\theta = \pi, 3\pi, 5\pi, \dots$

Returning now to Figure 6 and the triangle defined by the points O, P, Q we see that we can also write

$$\sin \theta = \frac{OQ}{OP} \quad \text{and} \quad \cos \theta = \frac{OR}{OP} \quad (30)$$

since the radius of the circle is $OP = 1$.

As a consequence, it follows from Pythagorean theorem applied to the right triangle OAP that¹

$$\sin^2 \theta + \cos^2 \theta = 1; \quad (31)$$

for any value of θ .

¹Powers of sines and cosines are written $\sin^n x$ and $\cos^n x$ in place of $(\sin x)^n$ and $(\cos x)^n$ to save having to use parentheses. Also, do not mistake $\sin^2 x$ for $\sin x^2$.

θ	$\pi/6$	$\pi/4$	$\pi/3$	$\pi/2$	$2\pi/3$	$3\pi/4$	$5\pi/6$	π
$\cos\theta$	$\frac{\sqrt{3}}{2}$	$\frac{\sqrt{2}}{2}$	$\frac{1}{2}$	0	$-\frac{1}{2}$	$-\frac{\sqrt{2}}{2}$	$-\frac{\sqrt{3}}{2}$	-1
$\sin\theta$	$\frac{1}{2}$	$\frac{\sqrt{2}}{2}$	$\frac{\sqrt{3}}{2}$	1	$\frac{\sqrt{3}}{2}$	$\frac{\sqrt{2}}{2}$	$\frac{1}{2}$	0

Figure 9: Sines and cosines for common angles.

1. Use formula (31) to find

a) $\cos 40^\circ$ given that $\sin 40^\circ = 0.643$:

b) $\sin 320^\circ$ given that $\cos 320^\circ = 0.766$:

14.4 Trigonometric Identities

There are other very useful formulas that allow us to calculate sines and cosines of many angles as long as we have a few angles to take as a basis. The following double angle formulas show how to find sines and cosines of twice an angle if we know the sine and the cosine of the angle itself. Let $\sin\theta$ and $\cos\theta$ be known. Then

$$\sin 2\theta = 2 \sin\theta \cos\theta ; \quad \cos 2\theta = \cos^2\theta - \sin^2\theta : \quad (32)$$

The second formula above,

$$\cos 2\theta = \cos^2\theta - \sin^2\theta ; \quad (33)$$

together with formula (31) can be solved for $\sin\theta$ and $\cos\theta$. This leads to two power reducing formulas which show how to find squares of sines and cosines of an angle if we know the sine and the cosine of twice the angle.

$$\cos^2\theta = \frac{1 + \cos 2\theta}{2} ; \quad \sin^2\theta = \frac{1 - \cos 2\theta}{2} : \quad (34)$$

2. Show how to obtain (34) from (33) and (31).

3. Use (32) to find $\sin 40$ and $\cos 40$ given that $\sin 20 = 0.342$ and $\cos 20 = 0.94$.

4. Use (34) to find $\sin 15$ and $\cos 15$ given that $\cos 30 = \frac{\sqrt{3}}{2}$.

The double angle formulas that we mentioned above are particular cases of more general rules for addition and subtraction of angles. These addition formulas are:

$$\begin{aligned}\sin(A + B) &= \sin A \cos B + \cos A \sin B \\ \sin(A - B) &= \sin A \cos B - \cos A \sin B \\ \cos(A + B) &= \cos A \cos B - \sin A \sin B \\ \cos(A - B) &= \cos A \cos B + \sin A \sin B\end{aligned}$$

5. Use the addition formulas to find $\sin 75$ and $\cos 75$ given that $\sin 30 = \frac{1}{2}$, $\cos 30 = \frac{\sqrt{3}}{2}$ and $\sin 45 = \cos 45 = \frac{\sqrt{2}}{2}$.

6. Use the addition formulas to find $\sin(A - B)$ and $\cos(A - B)$ in terms of $\sin A$ and $\cos A$.

The above rules for addition and subtraction of angles suggest equivalent formulas to replace a product by a sum of sines and cosines. For instance, take two of those expressions

$$\begin{aligned}\cos(A + B) &= \cos A \cos B - \sin A \sin B \\ \cos(A - B) &= \cos A \cos B + \sin A \sin B\end{aligned}$$

and add them to obtain

$$\cos A \cos B = \frac{\cos(A + B) + \cos(A - B)}{2};$$

Similarly, we can derive these three other product formulas

$$\begin{aligned}\cos A \sin B &= \frac{\sin(A + B) - \sin(A - B)}{2} \\ \sin A \cos B &= \frac{\sin(A + B) + \sin(A - B)}{2} \\ \sin A \sin B &= \frac{\cos(A - B) - \cos(A + B)}{2}\end{aligned}$$

Express the following products as a sum or difference.

7. $\sin 9^\circ \sin 4^\circ$

8. $\cos(=5^\circ) \cos(=14^\circ)$.

14.5 Other trigonometric functions

Other important trigonometric functions are defined in terms of sines and cosines. The tangent of an angle is

$$\tan = \frac{\sin}{\cos} :$$

The reciprocal of the tangent is called the cotangent:

$$\cot = \frac{1}{\tan} = \frac{\cos}{\sin}$$

The reciprocal of sine is called cosecant; the reciprocal of cosine is called secant:

$$\csc = \frac{1}{\sin} \qquad \sec = \frac{1}{\cos} :$$

9. Use (31) to show that

$$1 + \cot^2 = \csc^2 \quad \text{and} \quad 1 + \tan^2 = \sec^2 :$$

10. If $\sin = 0.53$ and $\cos = 0.85$, what is \tan ?

11. If α and β represent acute angles such that $\csc \alpha = 5/3$ and $\cos \beta = 8/17$, find $\cos(\alpha + \beta)$.

12. Find θ in the interval $[0; 2\pi)$ if $\sin 2\theta = \sin \theta$.

13. Find the solutions of the equation $2 \cos^2(\theta/2) - 3 \cos \theta = 0$ which are in the interval $[0; 2\pi)$.

14. Simplify to a constant the expression $(1 - \sin^2 \theta)(1 + \tan^2 \theta)$.

15. Use the appropriate trigonometric identities to show that

$$\frac{\csc^2}{1 + \tan^2} = \cot^2 :$$

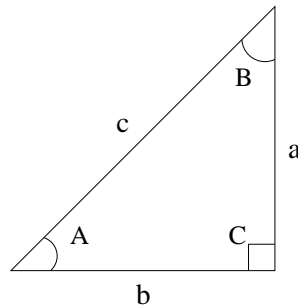


Figure 10: Trigonometry of the right triangle.

14.6 Right triangles

In addition to all the identities we have seen so far, there are other relationships involving the trigonometric functions and the sides and angles of any right triangle (having one angle of 90 degrees).

These relationships are derived directly from (30). Although the formulas in (30) have been obtained for the right triangle OAP , which is a particular triangle having hypotenuse $OP = 1$, they are valid in any right triangle.

These relationships are used to find unknown parts (an angle, the length of a side, etc.) in terms of known parts (other angles, sides, etc.). This is usually named solving the right triangle.

Let us fix our notation by labelling the sides and angles of an arbitrary right triangle as shown in Figure 10. Let the hypotenuse be c and the right angle opposite it be C . The other two sides are a and b and the angles opposite them are A, B respectively.

We have the following relationships.

$$a^2 + b^2 = c^2$$

$$\sin A = \frac{a}{c}; \quad \sin B = \frac{b}{c}$$

$$\cos A = \frac{b}{c}; \quad \cos B = \frac{a}{c}.$$

$$\tan A = \frac{a}{b}; \quad \tan B = \frac{b}{a}.$$

16. Two men start walking at the same time from the same point along perpendicular paths. If both men walk at 3 miles an hour, how far apart will they be at the end of three hours?

17. The second angle of a triangle is 20 degrees greater than the first angle. The third angle is twice the second. Find the three angles.

14.7 Miscellaneous Problems

18. The profit in the sales of swimming suits in a chain department store over a 2 year period is given by

$$P(t) = 5 - 5 \cos \frac{\pi}{26} t;$$

where P is the profit in hundreds of dollars for a week of sales t weeks after January 1.

- Plot the graph of $P(t)$ without using a calculator.
- Find the values of $P(13)$, $P(26)$, $P(39)$ and $P(52)$ without using a calculator.
- Use a calculator to find $P(30)$ and $P(100)$.

19. Sales of snow blowers are seasonal. Suppose that the sales of snow blowers in one region of Canada are approximated by

$$S(t) = 500 + 500 \cos \frac{\pi}{6} t;$$

where t is time in months, with $t = 0$ corresponding to November. Plot the graph of $S(t)$ and determine for what month(s) the sales are equal to zero.

15 Derivatives of trigonometric functions.

In this assignment we continue our study of trigonometric functions we started in Section 14. This time, we turn our attention to the derivatives of trigonometric functions.

We will make one change in the notation used in Section 14, in that all angles will be represented by x instead of θ , so that the trigonometric functions will be denoted by $y = \sin x$, $y = \cos x$, and so forth. For these functions the angle x is given in radians.

Let us work first with the sine function. To find its derivative, go back to the definition of derivative for any function $f(x)$ as the limit of the difference quotient (see Section 2)

$$f'(x) = \lim_{h \rightarrow 0} \frac{f(x+h) - f(x)}{h} : \quad (35)$$

For the sine function this means that we look for a change in the function $y = \sin x$ as the angle increases from x to $x+h$, as depicted in Figure 11. Formula (35) becomes

$$(\sin x)' = \lim_{h \rightarrow 0} \frac{\sin(x+h) - \sin x}{h} : \quad (36)$$

The computation of this limit is carried out with the aid of the addition formula for the sine, given in Section 14, page 39. We use that

$$\sin(x+h) = \sin x \cosh + \cos x \sin h : \quad (37)$$

Substituting the above expression into (36) we write

$$(\sin x)' = \lim_{h \rightarrow 0} \frac{\sin x \cosh + \cos x \sin h - \sin x}{h} \quad (38)$$

In the above formula, all terms that do not contain h can be brought outside the limit, as a multiplication factor according to the following steps.

$$\begin{aligned} (\sin x)' &= \lim_{h \rightarrow 0} \frac{\sin x (\cosh - 1) + \cos x \sin h}{h} \\ &= \sin x \lim_{h \rightarrow 0} \frac{\cosh - 1}{h} + \cos x \lim_{h \rightarrow 0} \frac{\sin h}{h} \end{aligned} \quad (39)$$

Thus, it turns out that to find the derivative of the sine function it is necessary to know what the two limits in (39) are.

If the angles are measured in radians, then

$$\lim_{h \rightarrow 0} \frac{\sin h}{h} = 1 \quad \text{and} \quad \lim_{h \rightarrow 0} \frac{1 - \cosh}{h} = 0 : \quad (40)$$

1. When angles are measured in degrees the limit $(1 - \cosh)/h$ is still zero. The limit $\sin h/h$, however, is no longer 1. It is $\approx 180/0.017$. Use your calculator to check this.

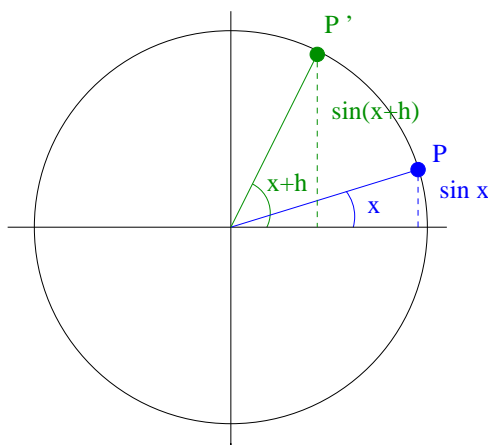


Figure 11: As the angle varies from x to $x + h$, the sine function varies from $\sin x$ to $\sin(x + h)$. According to the definition, the derivative of the sine function is the limit as h approaches zero of the difference quotient $(\sin(x + h) - \sin x)/h$.

Substituting the limits (40) into expression (39) we see that the first term vanishes and we are left with

$$(\sin x)' = \cos x: \quad (41)$$

In short, the derivative of the sine function is the cosine function.

2. Repeat the steps (35) through (41) with due changes to show that the derivative of the cosine function is the negative of the sine function:

$$(\cos x)' = -\sin x: \quad (42)$$

This time, instead of (37), use the following addition formula for the cosine

$$\cos(x + h) = \cos x \cos h - \sin x \sin h:$$

Having obtained the two basic derivatives (41) and (42), we can now combine them with the chain rule to obtain the derivative of composite functions. If $u(x)$ is a function of x , we have

$$(\sin u(x))' = \cos u(x) \cdot u'(x) \quad \text{and} \quad (\cos u(x))' = -\sin u(x) \cdot u'(x)$$

Find the derivatives of the following functions.

$$3. y = \sin(3x + 2)$$

$$4. y = \sin x^5$$

$$5. y = \sin^5 x$$

$$6. y = \tan x$$

$$7. y = \frac{\sin x}{1 + \cos x}$$

$$8. y = \ln(x + \tan x)$$

$$9. y = \frac{1}{\cos x}$$

$$10. y = e^{\sin x \cos x}$$

$$11. y = x[\sin(\ln x) + \cos(\ln x)]$$

$$12. y = 3e^x \cos x$$

$$13. y = (\sec x + \tan x)$$

$$14. y = \frac{\ln x}{\csc x}$$

$$15. y = e^{2x}(2 \cos 3x + 3 \sin 3x).$$

16. Distance (in meters) as a function of time (in seconds) for a particular object is given by the equation

$$s = t^3 \sin 2t:$$

Find the velocity at $t = 3$ s.

17. Current I in a certain electrical circuit t seconds after the start of an experiment is given by

$$I = 40 \sin 3t:$$

Find the first time after the start of the experiment when the current peaks at a maximum.

18. A certain individual's blood pressure at time t is given by the expression

$$P = 90 + 25 \sin 6t:$$

Find the values of the maximum and minimum pressure. When do these values occur?

19. Energy W (in joules) supplied to an electrical circuit as a function of time t (in seconds) is given by

$$W = 31 \sin^2 2t:$$

Find an expression for the power (dW/dt) required by the circuit.

20. Current I (in amperes) as a function of time t (in seconds) in a certain circuit is given by the equation

$$I = 3 \sin(92\pi t + \frac{\pi}{4})$$

Find the rate of change of current with respect to time at $t = 2$ s.

16 Integrals of trigonometric functions.

In Section 15 we studied derivatives of trigonometric functions. The two basic formulas for differentiating trigonometric function are

$$(\sin x)' = \cos x \quad \text{and} \quad (\cos x)' = -\sin x$$

The following rules of integration are deduced from these two formulas

$$\int \sin x \, dx = -\cos x + C \quad \text{and} \quad \int \cos x \, dx = \sin x + C \quad (43)$$

Many other integrals of trigonometric functions will have to be reduced to the two basic integrals above, either with the aid of the substitution technique we studied in Section 10, or with the power reducing and product formulas we studied in Section 14.

Here is one example of the use of substitution.

$$\int \sin 18x \, dx$$

Because of the argument of the sine is $18x$ instead of simply x , the basic integrals (43) will not work here without some change. We need to substitute

$$u = 18x \quad \text{with} \quad du = 18 \, dx$$

to send the integral into one of the formulas (43). Substituting, we get

$$\int \sin 18x \, dx = \frac{1}{18} \int \sin u \, du = -\frac{1}{18} \cos u + C = -\frac{1}{18} \cos 18x + C$$

In the next example, before using substitution, we have to use one of the power reducing formulas.

$$\int \cos^2 x \, dx:$$

Formula (34) of Section 11.4 is the following identity

$$\cos^2 x = \frac{1 + \cos 2x}{2}:$$

Thus, we have

$$\int \cos^2 x \, dx = \int \frac{1 + \cos 2x}{2} \, dx = \int \frac{1}{2} \, dx + \int \frac{\cos 2x}{2} \, dx:$$

The first term can be integrated directly to give $x/2$. The second term is solved by substituting $u = 2x$ and using one of the basic formulas (43). We get

$$\int \cos^2 x \, dx = \frac{x}{2} + \frac{\sin 2x}{4} + C:$$

In the next example, before using substitution, we have to use one of the product formulas.

$$\int \sin 5x \cos 3x \, dx \quad (44)$$

In Section 14, page 39 we saw that

$$\sin A \cos B = \frac{\sin(A+B) + \sin(A-B)}{2}$$

If we set $A = 5x$ and $B = 3x$, the left side becomes the integrand in (44).

$$\text{Thus } \int \sin 5x \cos 3x \, dx = \int \frac{\sin 8x + \sin 2x}{2} \, dx:$$

We now separate the integral in two parts, using the substitution $u = 8x$ for the first part and the substitution $u = 2x$ for the second part. We get

$$\int \sin 5x \cos 3x \, dx = \frac{1}{16} \cos 8x - \frac{1}{4} \cos 2x + C:$$

Find the following integrals by substitution.

$$1. \int x^6 \sin x^7 \, dx$$

$$2. \int \cos x \, (\sin x)^6 \, dx$$

$$3. \int \tan x \, dx$$

$$4. \int \frac{1}{\cos x} \sin x \, dx$$

$$5. \int \frac{\cos x}{\sin^3 x} \, dx$$

$$6. \int (\sin x) \ln (\cos x) \, dx$$

$$7. \int (\sin x) e^{sx} \, dx$$

$$8. \int \cos x \, \sqrt{1 + \sin x} \, dx$$

$$9. \int \sin (2 + 3x) \, dx$$

$$10. \int e^x \cos (e^x) \, dx$$

11. Find the area of the region bounded by the graphs of $y = \sin x + \cos 2x$ and $y = 0$, between $x = 0$ and $x = \pi$.

12. Find the area under one arch of the curve $y = \sin 2x$.

13. Find the volume of the solid of revolution generated by revolving the graph of $y = \sin x$ about the x axis between $x = 0$ and $x = \pi$.

14. The surface tension T on a globule of mercury on a glass plate satisfies the equation

$$gk \int_0^a y \, dy = T \int_0^a \sin x \, dx;$$

where g , k and a are constants. Evaluate the integrals to find an expression for T .

15. According to Stokes' theory of the scattering of X-rays, the intensity of scattered radiation in a direction making an angle θ with the primary beam is

$$I(\theta) = I_m (1 + \cos^2 \theta);$$

where I_m is a constant. Find

$$\int_0^{\pi/2} I(\theta) \, d\theta$$

which is the total intensity of scattered radiation.

17 Techniques of integration { Integration by parts

Now that we have seen exponential, logarithmic and trigonometric functions, it is time to study one last technique of integration. We have developed two techniques of integration: Substitution (in Section 10) and partial fractions (in Section 13).

The rule for the derivative of the product of two functions gives rise to an integration technique called integration by parts. This technique is expressed by the formula

$$\int f'(x)g(x) dx = f(x)g(x) - \int f(x)g'(x) dx: \quad (45)$$

The goal here is to exchange the problem of evaluating $\int f'(x)g(x) dx$ for the problem of evaluating $\int f(x)g'(x) dx$. Of course the method is useful only if the second integral $\int fg'$ is easier than the first.

Example. Let us find $\int xe^x dx$:

by parts.

We first identify what is f' and what is g in the integrand xe^x . Let us choose

$$f'(x) = e^x \quad \text{thus} \quad f(x) = e^x$$

and

$$g(x) = x \quad \text{thus} \quad g'(x) = 1:$$

From (45) we get

$$\int xe^x dx = xe^x - \int e^x dx:$$

The integral on the right is easy. We have

$$\int xe^x dx = xe^x - e^x + C: \quad (46)$$

Note that the choice of f and g was a good one. Had we chosen

$$f'(x) = x \quad \text{thus} \quad f(x) = \frac{x^2}{2}$$

and

$$g(x) = e^x \quad \text{thus} \quad g'(x) = e^x:$$

we would have obtained, according to (45),

$$\int x e^x dx = \frac{x^2}{2} e^x - \int \frac{x^2}{2} e^x dx;$$

and the integral on the right is not simpler than the original integral.

Sometimes the integration by parts technique can be used in cases where it does not appear to be applicable, as in

$$\int \ln x dx;$$

since there is only one function in the integrand. In this case, we can supply a second function by writing

$$\int 1 \ln x dx:$$

Now, choose

$$f'(x) = 1 \quad \text{thus} \quad f(x) = x$$

and

$$g(x) = \ln x \quad \text{thus} \quad g'(x) = \frac{1}{x}:$$

Formula (45) yields

$$\int 1 \ln x dx = x \ln x - \int x \frac{1}{x} dx = x \ln x - x + C:$$

The integration by parts technique is particularly useful when it can be applied successively. Consider the example

$$\int x^2 e^x dx:$$

The good choice of f and g is

$$f'(x) = e^x \quad \text{thus} \quad f(x) = e^x$$

and

$$g(x) = x^2 \quad \text{thus} \quad g'(x) = 2x:$$

Formula (45) gives

$$\int x^2 e^x dx = x^2 e^x - 2 \int x e^x dx:$$

In the first application of formula (45) we have been able to reduce the power of x on the right side. A second application of (45), as we have already done in (46) leads to

$$\int x^2 e^x dx = x^2 e^x - 2(xe^x - e^x) + C = x^2 e^x - 2xe^x + 2e^x + C:$$

Find the following integrals by parts.

1. $\int x e^x dx$
2. $\int x^2 \ln x dx$
3. $\int x^3 e^{2x} dx$
4. $\int (\ln x)^2 dx$
5. $\int \frac{\ln x}{x^{10}} dx$
6. $\int x^{10} \ln x dx$
7. $\int x \ln x dx$
8. $\int \frac{x^3}{1+x^2} dx$ (Hint: Let $f' = x = \frac{d}{dx} \frac{1}{2} x^2$; $g = \frac{1}{1+x^2}$)

9. Show that

$$\int x f'(x) dx = x f(x) - \int f(x) dx \quad (47)$$

is a special case of the integration by parts formula (45).

10. Use (47) to find

$$\int \frac{x^p}{1+x} dx:$$

18 Improper integrals

The definite integral

$$\int_a^b f(x) dx$$

is an improper integral if

A . The function $f(x)$ approaches infinity somewhere in the interval of integration $[a;b]$. The integral

$$\int_0^1 \frac{1}{x^p} dx \quad (48)$$

is improper since the function $1/x^p$ blows up when $x = 0$.

B . At least one of the limits of integration is infinite. The following integral is an example

$$\int_0^1 e^x dx: \quad (49)$$

The fact that the function approaches infinity at some point of the interval (as in A above) and that the limit of integration is infinite (as in B above) does not mean that the corresponding integrals are not defined or do not exist (as a finite number). The integrals in each case may or may not exist. To decide whether or not the integral exists, let us try to find them directly and, at the same time, develop a procedure to evaluate improper integrals.

To find the integral (48) we first replace $x = 0$ with the number $x = b$ not equal zero as the extreme point of integration

$$\int_0^1 \frac{1}{x^p} dx \rightarrow \int_b^1 \frac{1}{x^p} dx:$$

We do this because we already know that we might have problem evaluating the integral at the point $x = 0$. So we replace this potentially troublesome point with another point $x = b$ and we proceed to find the integral normally. However, we have to keep in mind that at the end we have to let b approach zero if we want to find the original integral. We have then the following sequence of steps to take.

$$\int_0^1 \frac{1}{x^p} dx = \lim_{b \rightarrow 0} \int_b^1 \frac{1}{x^p} dx = \lim_{b \rightarrow 0} \left[\frac{x^{1-p}}{1-p} \right]_b^1 = \lim_{b \rightarrow 0} \left(\frac{1}{1-p} - \frac{b^{1-p}}{1-p} \right):$$

Now observe that although the function $1/x^p$ is not defined at the point $x = 0$, the result of the integration tells us that as b approaches zero the integral is perfectly well defined and takes the value

$$\int_0^1 \frac{1}{x^p} dx = 2:$$

When the result of integration exists as a finite number we say that the improper integral converges or is convergent.

Let us see now how to proceed when one of the limits of integration is infinite, as is the case with integral (49). To find the integral (49) we replace that 1 with a finite number, say $x = b$, and perform the integral normally. Then, at the end, take the limit $b \rightarrow \infty$. We have the following sequence of steps to take.

$$\int_0^{\infty} e^x dx = \lim_{b \rightarrow \infty} \int_0^b e^x dx = \lim_{b \rightarrow \infty} e^x \Big|_0^b = \lim_{b \rightarrow \infty} e^b - e^0 :$$

Here, too, the integral is well defined when b goes to infinity. The integral converges to

$$\int_0^{\infty} e^x dx = 1 :$$

In both cases above the integrals could be evaluated and converged to a finite number. When the improper integral does not exist as a finite number we say it diverges. Here is one example.

$$\begin{aligned} \int_0^{\infty} \frac{1}{x} dx &= \lim_{b \rightarrow \infty} \int_b^{\infty} \frac{1}{x} dx \\ &= \lim_{b \rightarrow \infty} \ln x \Big|_b^{\infty} \\ &= \lim_{b \rightarrow \infty} (\ln \infty - \ln b) = \infty : \end{aligned}$$

Find the following integrals.

$$1. \int_1^{\infty} \frac{1}{x^2} e^{-\frac{1}{x}} dx$$

$$2. \int_1^{\infty} \frac{1}{x^2} dx$$

$$3. \int_1^{\infty} e^x dx$$

$$4. \int_0^1 \ln x dx \quad (\text{Hint: } \lim_{x \rightarrow 0} x \ln x = 0)$$

$$5. \int_0^1 x \ln x dx$$

7. Show that

$$\int_2^{\infty} \frac{1}{x \ln x} dx$$

is divergent, but

$$\int_2^{\infty} \frac{1}{x (\ln x)^2} dx$$

exists. Find its value.

8. Show that (for $a > 0$)

$$\int_a^{\infty} \frac{1}{x^p} dx$$

converges for $p > 1$, and diverges for $p \leq 1$. In the case it converges, find the value of the integral in terms of a .

19 Probability theory.

The theory of probability deals with the likelihood of events that happen by chance { such as the landing of a tossed coin heads or tails { or are selected at random { such as the blindfolded selection of a card from a shuffled deck. The mathematical description of the events that happen by chance is based on the assumption that the event happens in a definite number of equally likely cases. For instance, in the tossing of a fair coin it is assumed that the coin is equally likely to land with either heads or tails face up (but can not stand on edge); in the rolling of an unloaded die it is assumed that the die is equally likely to stop rolling with any one of its six faces up.

If on any given trial a particular event can happen in k ways out of a total of n equally likely ways, then the mathematical measure of the probability of that particular event is, by definition,

$$p = \frac{k}{n}:$$

For example, in the tossing of a fair coin there are $n = 2$ possible ways the coin can land. The probability that one ($k = 1$) of them { say heads up { will happen, is $p = 1/2$.

1. Two coins are tossed. What is the probability that the two coins land heads up? (Hint: You should first list all the possible outcomes from tossing two coins.)

2. Three coins are tossed. What is the probability of getting at least one head?

Each of the possible ways an event can happen is called an outcome from the trial. The set S of all possible outcomes is called the sample space. Consider the experiment of throwing a pair of perfectly balanced dice. There are 36 possible outcomes of the experiment, associated with the sample space

$$S = \begin{matrix} & \begin{matrix} 8 & & 9 \end{matrix} \\ & \begin{matrix} \text{\\\\\\\\\\\\\\\\} \end{matrix} \end{matrix} \begin{matrix} (1;1); (1;2); (1;3); (1;4); (1;5); (1;6) \\ (2;1); (2;2); (2;3); (2;4); (2;5); (2;6) \\ (3;1); (3;2); (3;3); (3;4); (3;5); (3;6) \\ (4;1); (4;2); (4;3); (4;4); (4;5); (4;6) \\ (5;1); (5;2); (5;3); (5;4); (5;5); (5;6) \\ (6;1); (6;2); (6;3); (6;4); (6;5); (6;6) \end{matrix} \begin{matrix} \text{\\\\\\\\\\\\\\\\} \end{matrix}$$

Each of these outcomes is assumed equally likely. Therefore, the probability of any one of them is $1/36$.

Consider now the event that the sum of the up faces on both dice is seven. This event is associated with the following subset of S :

$$A = \{(6;1); (1;6); (5;2); (2;5); (4;3); (3;4)\}$$

There are six different ways a 7 can be obtained. Thus, the probability of event A is

$$P(A) = \frac{\text{number of ways a 7 can be obtained}}{\text{number of possible outcomes}} = \frac{6}{36} = \frac{1}{6}$$

3. Two fair dice are rolled.

- What is the probability that the sum of the up faces on both dice is 6?
- What is the probability that the sum of the up faces on both dice is 8?
- What is the probability that the sum of the up faces on both dice is either 6 or 8?
- What is the probability that the sum of the numbers on the dice is less than 6?

4. A die is thrown six times.

- a) What is the probability that the 5 will appear at the first throw?
- b) What is the probability that the 5 will not appear at the first throw?
- c) What is the probability that the 5 will appear at the second throw?
- d) What is the probability that the 5 will not appear at the second throw?
- e) What is the probability that the 5 will appear at the first two throws?
- f) What is the probability that the 5 will not appear at the first two throws?
- g) Calculate the probability of the 5 appearing at least once in six throws.
(Hint: Calculate the probability that the 5 will not appear at all in six throws.)

It is important that you understand the necessity of counting correctly all the equally likely outcomes. Failure to consider all possible cases will certainly lead to disaster { the probability here is $\frac{1}{6}$! Many times it will give rise to paradoxical situations. Here is an example.

What is the probability that if you toss three coins, all of them fall alike?

One reasoning that disregards the proper counting of the equally likely outcomes goes as follows. Suppose two coins fall alike. The third coin either matches that pair or is different. Since there is a fifty-fifty chance for both cases, the probability of all three coins being alike is $\frac{1}{2}$. WRONG !!!!!

5. Find the correct answer to this problem by listing all possible outcomes for a toss of three coins and calculating the desired probability as the ratio of a particular outcome (three coins alike) to the total number of all possible outcomes from the trial.

6. If you toss a coin and roll a fair dice, what is the probability that a head and a number greater than 3 comes up?

7. Let $X = \{4; 5; 6; 7; 8\}$. What is the probability that the sum of two numbers picked at random from this set is an odd number?

8. A letter is randomly selected from the English alphabet, which consists of 26 letters. What is the probability that it is a vowel?

9. Race tickets numbered 1 to 300 are placed in a large container. What is the probability of selecting a ticket with the number 223?

10. A man, whose wife is imminently expecting a child, wants very much to have a son. The man knows that the chance of having a boy or a girl is fifty-fifty. However, he devises a plan to increase the probability of having the much desired son. He phones all the hospitals in town asking for the number of boys and girls that have been born in the last few days. He finds that at one particular hospital 19 girls have been born in succession to that day. "Aha!", he says very happy, "I will immediately take my wife to that particular hospital, because the probability that the next child born there will be a girl { thus making up twenty female births in a row { is certainly very small".

a) Is the man right?

b) What is the probability that his child will be a boy?

11. Consider a play in which you are blindfolded and throw three dice.

a) What is the probability that the sum of the up numbers is ten?

b) Suppose that the throw has taken place and someone tells you that on one of the three dice a 2 has come up. What is now the probability that the sum of the up numbers is ten?

12. An urn contains a red ball and two yellow balls. The yellow balls are numbered 1 and 2. You draw two balls out of the urn simultaneously and at random.

a) What is the probability that both balls are yellow?

b) What is the probability that the red ball comes up?

c) Suppose that as you draw the balls you see some yellow between your fingers. What now is the probability that both balls are yellow?

d) Suppose that as you draw the balls you see the number 1 between your fingers. What now is the probability that both balls are yellow?

19.1 Random Variables

Consider an experiment of tossing three coins. The sample space S of equally likely outcomes for this experiment is

$$S = \{HHH; HHT; HTH; HTT; THH; THT; TTH; TTT\}$$

where H is heads and T is tails.

If each coin is fair, each simple event in this sample space is equally likely to occur. Since there are eight different outcomes in S , the probability of any one of these occurring is $1/8$.

Suppose now that we turn this experiment into a game in the following way. You will receive 30 dollars if you throw three heads, 20 dollars if you throw two heads, 10 dollars if you throw just one head, and nothing if you throw three tails. For example, the event of throwing a head may happen in three different ways, namely, HTT or THT or TTH . You will win 10 dollars no matter which way it occurs. The event of throwing two heads may also happen in three ways, namely, HHT or HTH or THH . You will win 20 dollars no matter which of these three ways the coins turn up. The event of throwing a head may happen in one way only, as HHH . For this you will receive 30 dollars. Finally, if you throw three tails, an event that can occur in one way only as TTT , you will receive nothing.

Take a look at the table below.

outcome	probability	prize	Random variable
HHH	$1/8$	\$30 dollars	$x(3 \text{ heads}) = 30$
HHT	$1/8$	\$20 dollars	$x(2 \text{ heads}) = 20$
HTH	$1/8$	\$20 dollars	$x(2 \text{ heads}) = 20$
THH	$1/8$	\$20 dollars	$x(2 \text{ heads}) = 20$
HTT	$1/8$	\$10 dollars	$x(1 \text{ head}) = 10$
THT	$1/8$	\$10 dollars	$x(1 \text{ head}) = 10$
TTH	$1/8$	\$10 dollars	$x(1 \text{ head}) = 10$
TTT	$1/8$	\$0 dollar	$x(0 \text{ head}) = 0$

Table 1. The first column lists all possible outcomes of throwing three dice. The second column lists the corresponding probabilities of each of the particular outcomes. The third column lists the prize in money corresponding to the particular outcomes, and the last column lists the values of the random variable x .

In this game a prize in money is associated with each event of the sample space S . In the table shown above the value of the prize has been denoted by x . We view x as a function that assigns a value to each event of the sample space. Thus, the event of throwing three heads has been assigned the value 30. We represent it as $x(3 \text{ heads}) = 30$; the event of throwing two heads has been assigned the value 20, which we represent as $x(2 \text{ heads}) = 20$, and so forth.

This type of function that assigns a numerical value to each simple event in the sample space S is called a random variable.

In our case, the random variable can take only a definite and finite number of values. Because of this, it is called a discrete random variable.

19.2 Expected Values

Suppose now that you play this game of tossing three coins a large number of times. How much money can you expect to win in the long run?

Of course you hope for the outcome of three heads every time you play so that you can get the higher prize. However, the expectation that you will always get the higher prize is not a reasonable one. A more reasonable measure of your financial return should take into account the probability of the outcomes listed in the second column of the Table 1 above.

You expect to throw zero heads (and win nothing) one-eighth of the time; you expect to throw one head (and win 10 dollars) three-eighths of the time, since there are three ways of throwing one head; you expect to throw two heads (and win 20 dollars) three-eighths of the time, since there are also three ways of throwing two heads; and you expect to throw three heads (and win 30 dollars) one-eighth of the time.

Thus, the mathematical measure of your average gain per game is given by

$$= 0 \cdot \frac{1}{8} + 10 \cdot \frac{3}{8} + 20 \cdot \frac{3}{8} + 30 \cdot \frac{1}{8} = 15: \quad (50)$$

In (50) we have added the prizes in money associated with the particular events, each multiplied by the corresponding probability of that event. This is often referred to as the expected value or mean, and is usually denoted by the greek letter μ .

Note that what really happens on any single trial of this game is that you get nothing if the coins come up tails up, you get 10 dollars if one head comes up, you get 20 dollars if two heads come up and you get 30 dollars if three heads come up. In no individual case you can actually get 15 dollars, which is the expected value. The point here is that if you play the game many times, your average gain will approach 15.

Formula (50) can be written in more general terms if we introduce some notation.

A random variable that can take n values is represented by $X = \{x_1; x_2; \dots; x_n\}$. Let $P(x_j)$ be the probability of the particular outcome associated with the value x_j (The subscript j is used in this situation to denote any one of the x 's, without specifying which one). By this we mean that the probability that the random variable X does turn out to be x_j is $P(x_j)$. The collection $\{P(x_1); P(x_2); \dots; P(x_n)\}$ of probabilities corresponding to the values of the random variable X is called the probability distribution of that random variable.

The mean or expected value (also denoted by $E(X)$) of the random variable X is then given by

$$\mu = E(X) = x_1P(x_1) + x_2P(x_2) + \dots + x_nP(x_n): \quad (51)$$

Make sure you understand how to get (50) from (51). To begin with we have denoted $X = \{x_1; x_2; x_3; x_4\} = \{0; 10; 20; 30\}$. Then, $x_1 = 0$ is the prize in money of the event of throwing three tails; the corresponding probability of this event is $P(0) = 1/8$. $x_2 = 10$ is the prize in money of the event of throwing one head; the corresponding probability of this event is $P(10) = 3/8$. $x_3 = 20$ is the prize in money of the event of throwing two heads; the corresponding probability of this event is $P(20) = 3/8$. $x_4 = 30$ is the prize in money of the event of throwing three heads. The corresponding probability of this event is $P(30) = 1/8$.

14. Suppose you play the game analyzed above, but with the rule that you lose 30 dollars if two tails appear. What now is the expected value of X ?

15. Consider the following game. A jar contains 100 balls, fifteen of which are numbered 2, four are numbered 10, one is numbered 25 and the remaining 80 are blanks (no number on them at all). The balls are all mixed up and you are asked to draw out one ball. You will receive a prize in dollars equal to the number on the ball you draw.

- What is the probability that you draw a blank?
- What is the probability that you draw a ball numbered 2?
- What is the probability that you draw a ball numbered 10?
- What is the probability that you draw a ball numbered 25?
- If you play many times, what is the payoff you expect to receive in this game?

19.3 Probability Distribution

In the previous example, the set of probabilities associated with the random variable X is $f_1=8; f_2=3; f_3=3; f_4=1$. As we have seen, this is called a probability distribution.

Note that the sum of the probabilities of the individual probabilities must add up to 1:

$$P(x_1) + P(x_2) + \dots + P(x_n) = 1;$$

as is the case with $1=8 + 3=8 + 3=8 + 1=8 = 1$. Instead of representing a probability distribution as a set, as we have done above, or listed on a table, as in Table 1, we may as well devise a graphic representation for it. Figure 12 shows this for our game. Note that the mean $= 15$ obtained in (50) is, in geometric sense, the center of the values of X shown on the horizontal axis of the graph. Because this often happens, the mean is called the measure of central tendency.

19.4 Some Dicey Examples

Let us leave coins aside and apply what we have seen so far to a die. Let us choose the random variable to be the number showing on the up face of the die. It is clear that this random variable can take values only on the set $X = \{1; 2; 3; 4; 5; 6\}$. Since any face is equally likely to come up, the probability

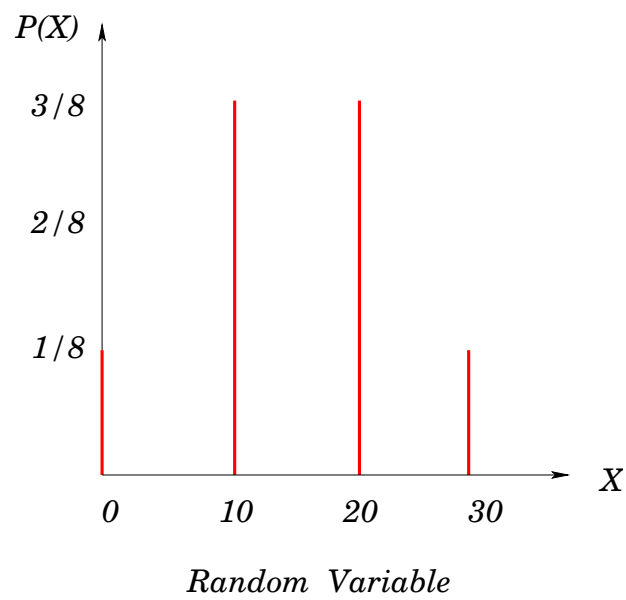


Figure 12: Graphic representation of a probability distribution. The horizontal axis represents the values of the random variable X . The height of each bar gives the corresponding probability for that value of the random variable.

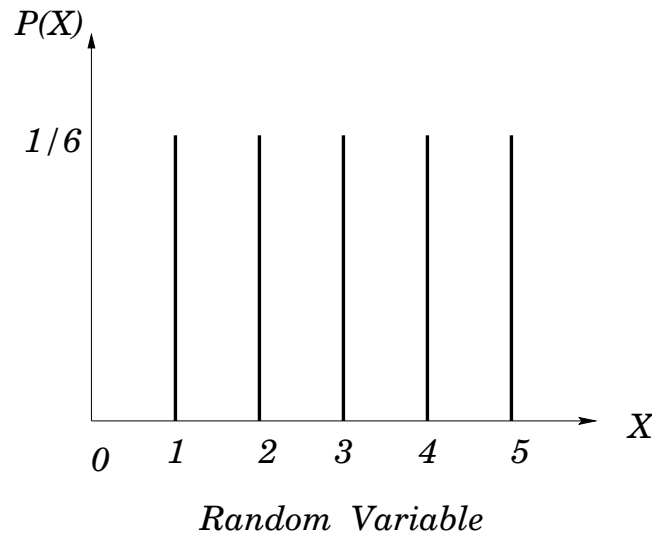


Figure 13: Probability distribution when one die is rolled. Since all outcomes are equally likely, this distribution is uniform.

of any one is $1/6$. Figure 13 represents the probability distribution when one die is rolled.

Let us roll two dice now, and choose the random variable to be the sum of the numbers showing on the up faces. This random variable can take any integer value from 2 to 12. Thus, in this case, $X = \{2, 3, 4, 5, 6, 7, 8, 9, 10, 11, 12\}$. The probability distribution when two dice are rolled is represented graphically in Figure 14. Note that, in comparison with the previous distribution, the larger number of values of the random variable now makes the distribution wider. On the other hand, the vertical height, which measures the probability of the random variables, gets shorter. This is a general pattern that becomes more visible as more dice are rolled. For example, when three dice are rolled, the possible values for the sum of the up faces ranges from 3 to 18, and the distribution peak is around $1/8$. When four dice are rolled, the possible values of the sum of the up faces ranges from 4 to 24, and the distribution peak is around $1/9$.

16. What is the expected value of the number of dots facing up for the roll

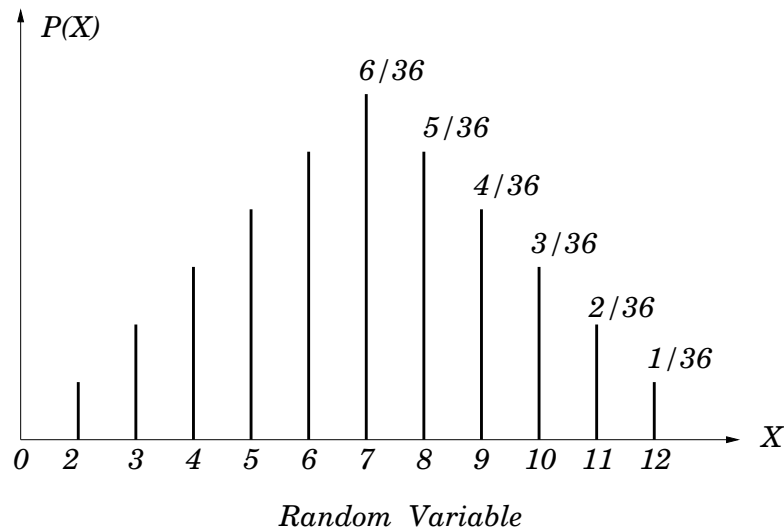


Figure 14: Probability distribution when two dice are rolled. This distribution is symmetric. It has a peak at the middle and tapers off on either side of the peak.

of a single die?

17. Consider the experiment of rolling a pair of fair dice, as discussed above. Let the random variable X represent the sum of the number of dots on the up faces of the dice.

- Verify that the probability distribution of X given in Figure 14 is indeed the correct one.
- Find the expected value of the sum of the dots on the up faces.

19.5 Variance and Standard Deviation

Although the mean is a good measure of the central tendency of a distribution, it is clear that very different distribution can have the same mean. Because of this, other quantities can be introduced that will be useful in characterizing a distribution.

One of these quantities is the variance of the random variable X . This is a

measure of the variability or spread of the numbers $x_1; x_2; \dots; x_n$ about the mean \bar{x} . Variance is defined as

$$V(X) = (x_1 - \bar{x})^2 P(x_1) + (x_2 - \bar{x})^2 P(x_2) + \dots + (x_n - \bar{x})^2 P(x_n); \quad (52)$$

where $P(x_j)$ are, as before, the probabilities of the particular outcomes associated with the random variable X , and \bar{x} is the mean of the random variable. A related quantity is the Standard Deviation of the random variable X , which is defined as

$$= \sqrt{V(X)}: \quad (53)$$

The symbol σ is the greek letter sigma.

18. Return to the coin tossing game we have discussed on pages 58-81. We have already found that $\bar{x} = 15$, as given in formula (50). Determine the variance and the standard deviation using formulas (52) and (53).

19. Find the variance and the standard deviation for the random variable of Exercise 16.

20. Find the standard deviation of the random variable of Exercise 17.

19.6 Continuous Random Variable

So far we have considered only discrete random variables. These, you remember, can assume only a finite number of possible values.

There is, however, no reason not to consider a random variable that can assume any one of an infinite number of possible values. In this case, we speak of a continuous random variable.

The daily demand for gasoline in a certain city is an example of a continuous random variable. It is clear that this demand can take on any value from zero to millions of gallons a day. The shelf-life of perishable drugs sold at drugstores, the number of hours it takes a chimpanzee to learn a new task and the height of a person in a population are also examples of continuous random variables.

Thus, the values of continuous random variables form a continuous set of numbers, such as $[0; 100]$, rather than a discrete one, as

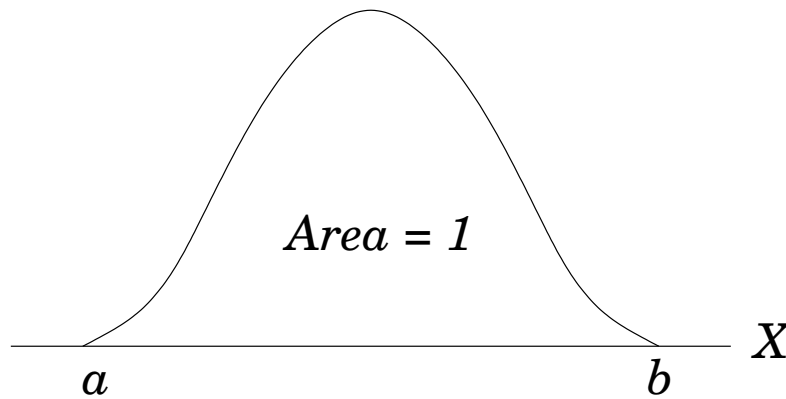


Figure 15: Probability density function for a continuous variable X .

Since the random variable can take an infinite number of values, we can not define the probability of an individual outcome associated with it as we have done in Table 1 or using the graphs shown in Figures 12, 13 and 14. Instead, we have to define what is called a probability density function for a continuous random variable.

Let $f(x)$ be a probability density function in the interval $[a; b]$. This function satisfies the following properties:

- i) $f(x) \geq 0$ for all $x \in [a; b]$;
- ii) $\int_a^b f(x) dx = 1$;

Note that the function f is NOT the same as the probability. Rather, the probability $P(c \leq x \leq d)$ that x lies in some interval $[c; d]$ is obtained from the probability density function in the following way.

$$\text{iii) } P(c \leq x \leq d) = \int_c^d f(x) dx.$$

Figure 15 is an example of a probability density function in the interval $[a; b]$.

21. Let

$$f(x) = \begin{cases} 8 - 12x^2 - 12x^3 & 0 \leq x \leq 1 \\ 0 & \text{otherwise} \end{cases}$$

a) Verify that f satisfies conditions (i) and (ii) for a probability density

function.

b) Compute $P(1 \leq x \leq 3)$.

c) Compute $P(x = 1)$. Interpret your result.

d) Compute $f(2)$. Can a probability density function assume values greater than 1?

22. In a computer time-sharing network, the time it takes in seconds to respond to a user's request is a continuous random variable with probability density function given by

$$f(x) = \begin{cases} \frac{8}{10}e^{-x/10} & x \geq 0 \\ 0 & \text{otherwise} \end{cases}$$

a) What is the probability that the computer responds within 1 second?

b) What is the probability that the user must wait over 4 seconds for a response?

19.7 Expected Value, Variance and Standard Deviation

To complete our discussion we have only to extend the notions of expected value, variance and standard deviation to the case of continuous random variables.

Let $f(x)$ be the probability density function for a continuous random variable X over the interval $[a; b]$.

The expected value or mean of X is

$$= E(X) = \int_a^b xf(x) dx: \quad (54)$$

The variance is

$$V(X) = \int_a^b (x - \mu)^2 f(x) dx: \quad (55)$$

where μ is the mean of X .

The Standard deviation of X is

$$= \sqrt{V(X)}: \quad (56)$$

23. Find the mean, variance and standard deviation for

$$f(x) = \begin{cases} 12x^2 - 12x^3 & 0 \leq x \leq 1 \\ 0 & \text{otherwise} \end{cases}$$

24. Multiply out the factor $(x - \mu)^2$ in the formula (55) for the variance of a continuous random variable and use the definition (54) and the property (ii) on page 66 to obtain the following alternative formula for the variance.

$$V(X) = \int_a^b x^2 f(x) dx - \mu^2:$$

Use the above formula to calculate the variance in Exercise 23.