

Max/Min Puzzles in Geometry II†

Revised

James M Parks
Dept. of Math.
SUNY Potsdam
Potsdam, NY
parksjm@potsdam.edu
January 20, 2022

Abstract. In this paper we continue the investigation of finding the max/min polygons which can be inscribed in a given triangle. We are concerned here with equilateral triangles. This may seem uninteresting or benign at first, but there are some surprises later.

An inscribed polygon in a given triangle is a polygon which has all of its vertices on the triangle. In a previous paper [3] we considered the inscribed polygons: parallelograms, rectangles, and squares. In this paper we investigate inscribed equilateral triangles in a given triangle. Fig.1 shows two examples of inscribed equilateral triangles in $\triangle ABC$.

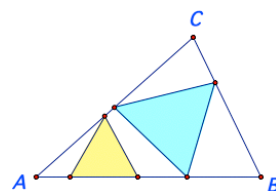


Figure 1

The first Puzzle is a quick investigation of properties of equilateral triangles (*ET* for short). All graphs were made with *Sketchpad**.

Puzzle 1. *If the sides of the ET $\triangle XYZ$ have known length s , determine the height h , and the area of $\triangle XYZ$ (denoted by (XYZ)). If the height h of ET $\triangle XYZ$ is known, determine the length of the side s , and the area (XYZ) of $\triangle XYZ$.*

Tip: The left and right hand halves of $\triangle XYZ$ are 30° - 60° - 90° triangles with sides in the ratios $s/2$, s , and $h = s\sqrt{3}/2$, Fig. 2.

Thus $(XYZ) = hs/2 = s^2\sqrt{3}/4$.

On the other hand, given h , the equality of ratios $h/\sqrt{3} = s/2$ holds.

Hence $s = 2h\sqrt{3}/3$, and $(XYZ) = h^2\sqrt{3}/3$.

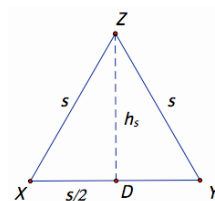


Figure 2

Puzzle 2. *Show that an inscribed ET of largest area in a given $\triangle ABC$, always shares at least one vertex with $\triangle ABC$.*

By trial and error it can be shown that there are only two ways an *ET* of maximum area will fit in a given $\triangle ABC$. Either with its base on one side of the triangle and its upper vertex coincides with

†Some of this material has appeared previously [4].

*All graphs in this paper were made with *Sketchpad* v5.10 BETA.

the upper vertex of the given triangle, Fig. 3 Left, or it's base on one side of the triangle and at least one of it's base vertices coincides with one of the base vertices of the given triangle, Fig. 3 Right. That one side of the largest *ET* must be on a side of the triangle is well known [5], [6].

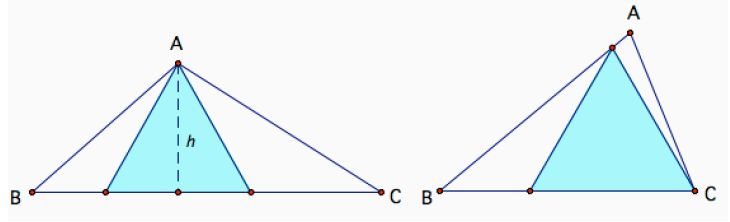


Figure 3

Observe that if the base angles of a side of $\triangle ABC$ are both greater than 60° , then there is no inscribed *ET* possible on that side (look at examples, or see Fig. 13).

In Fig. 3 Left, notice that both base angles of $\triangle ABC$ are less than 60° , so the area of the largest *ET* for this side is determined by the height h of $\triangle ABC$. From *Puzzle 1*, the area of the *ET* is $h^2\sqrt{3}/3$.

In Fig. 3 Right, base angle B of $\triangle ABC$ is greater than 60° , and base angle A is less than 60° , so it will take some additional calculating to compute the area of the largest *ET* for that side of $\triangle ABC$ (see *Puzzles 3 & 4*).

Since we are looking for the **inscribed *ET* of maximum area**, if we can determine the largest inscribed *ET* for each side of the given triangle, then **the largest of these three *ET*s is called the *max ET* of the triangle**, and **the smallest of these 3 is called the *min ET* of the triangle**.

By the results in *Puzzle 2* we know exactly where to look for the *max* and *min ET*s. We will see below that this makes our search much easier.

We consider an example in *Puzzle 3* which illustrates Fig. 3 Right.

The angle notation is standard, angle $CAB = \alpha$, and so on.

Puzzle 3. Let $\triangle ABC$ be the given triangle with $\alpha = 45^\circ$, $\beta = 75^\circ$, $\gamma = 60^\circ$, and side a of length 2, Fig. 4. Let $\triangle BDE$ be the largest *ET* with base EB on side AB , and D on side AC . Compute s , the length of the side of $\triangle BDE$, and the exact area of $\triangle BDE$. Is $\triangle BDE$ the *max ET* in $\triangle ABC$?

Hint: Drop a perpendicular from B to AC at M .

Then $\triangle BMC$ is a 30° - 60° - 90° triangle with $|BM| = \sqrt{3}$.

This means that $c = \sqrt{6}$, since $\triangle ABM$ is a 45° - 45° - 90° triangle.

By the Law of Sines, $s = \sqrt{6}(\sin 45^\circ / \sin 75^\circ)$, since angle $BDA = 75^\circ$.

Hence $(BDE) = s^2\sqrt{3}/4 \sim 1.392$.

For side b construct a point F on AC such that $|FC| = 2$.

Then $\triangle BCF$ is an *ET* which is the largest *ET* on both sides a and b , and $(BCF) = \sqrt{3} \sim 1.732$, by *Puzzle 1*.

Thus $\triangle BCF$ is the *max ET* in $\triangle ABC$.

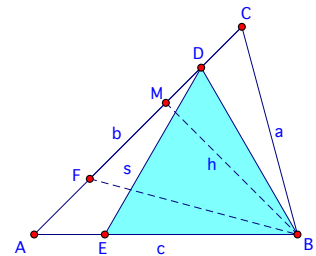


Figure 4

The key to solving *Puzzle 3* was knowing that $\gamma = 60^\circ$. But what if $\gamma \neq 60^\circ$? How do we compute the area of $\triangle BDE$ in that case?

Here's a way to compute the area of such an *ET*.

Puzzle 4. Compute the area of the largest inscribed *ET* on side c of $\triangle ABC$, when $\alpha < 60^\circ$, and $\beta > 60^\circ$.

Hint: By the Exterior Angle Theorem, angle $CDB = 60^\circ + \alpha$.

By the Law of Sines, $s = a \sin \gamma / \sin(60^\circ + \alpha)$.

But if h_b is the altitude of B to AC at M , $h_b = BM$, as in Fig.4, then $\sin \gamma = h_b/a$, hence $s = h_b / \sin(60^\circ + \alpha)$.

So, by the solution to *Puzzle 1*, $(BDE) = (h_b / \sin(60^\circ + \alpha))^2 \sqrt{3}/4$.

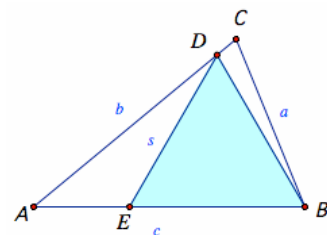


Figure 5

We will now determine the location of the max and min *ETs* for all triangles.

Also, **we assume from here on that $\triangle ABC$ is scalene, unless noted otherwise**, and note in particular that $\alpha > \beta > \gamma$ iff $a > b > c$, [2, Vol.1, Props. 18, 19].

By symmetry, any result we get for $\triangle ABC$ under these assumptions will also hold for a triangle reflected about the vertical line through the mid-point of the base AB . So we need only consider those triangles with upper vertex C to the left of this vertical line. If C is on this line, then $\triangle ABC$ is an isosceles triangle, which is a simpler case to work with.

In the chart in Fig. 6 there is a list of examples generated on *Sketchpad*. The ratio of the area of the *ET* to the area of $\triangle ABC$ is listed in the right-hand column, marked *Ratios*. This makes it easier to compare the sizes of the areas of the *ETs*. The bold **x** marks the side a , b , c , where the *max ET* occurs, and the italic *x* marks the side where the *min ET* is found. Several patterns can be observed here.

The general results are given in *Puzzle 5*. In each part of *Puzzle 5* an example(s) of triangles from this chart is considered.

Angles $\alpha - \beta - \gamma$	Sides: long/middle/short $a / b / c$			Ratios
70-65-45		x		0.638
"	x			0.677
80-65-35		x		0.461
"	x			0.547
90-70-20		x		0.288
"	x			0.327
90-80-10		x		0.168
"	x			0.173
75-60-45		x		0.589
"	x			0.732
90-60-30		x		0.378
"	x		x	0.500
100-60-20		x		0.265
"	x		x	0.348
90-50-40		x		0.437
"	x			0.569
110-40-30		x		0.297
"	x			0.395
120-35-25		x	x	0.243
"	x			0.325
130-30-20			x	0.193
"	x			0.258
140-25-15			x	0.150
"	x			0.193

Figure 6

Puzzle 5. Given $\triangle ABC$, suppose the sides a, b, c satisfy $a > b > c$. Show that the *max ET* is always on the long side a (a and c , when $\beta = 60^\circ$), and the *min ET* is on:

- side c , when $120^\circ < \alpha$; and sides b and c , when $\alpha = 120^\circ$;
- side b , when $60^\circ < \alpha < 120^\circ$, and $\beta < 60^\circ$;
- side b , when $60^\circ \leq \beta$.

In Figures 7 - 10, notice that all 3 largest *ETs* (2 *ETs* coincide in Fig.10) have vertex *A* in common. Then *ET* ΔGHA , on the long side *a*, is the *max ET*, since *JA* and *FA* are interior to it (a consequence of Euclid Prop. 19 [2]). Since ΔGHA and ΔAEF coincide when $\beta = 60^\circ$, Fig. 10, the *max ET* is on both the long side *a* and the short side *c* for this case. If $\beta > 60^\circ$, Fig. 10, then $\alpha > \beta > 60^\circ$, and $m\angle JAB > m\angle IBA$. So $|HI| > |JA|$, by Euclid Prop. 19 [2], and ΔGHI is the *max ET* on the long side *a*.

These results agree with what is observed in the chart in Fig.6.

A. Fig. 7 is a 130° - 30° - 20° triangle with *ET* ΔGHA on the long side *a*, which is clearly the *max ET*, since $|AG| > |AJ|$ and $|AG| > |AF|$. If we compare $|AJ|$ and $|AF|$ we discover that ΔAEF is the *min ET*.

For the general case for $\alpha > 120^\circ$, since $m\angle CAJ = 60^\circ = m\angle FAB$, it follows that $m\angle AJC > m\angle AFB$. So, in ΔAJF , $s_b = |JA| > |FA| = s_c$, and the *min ET* is on the short side *c*.

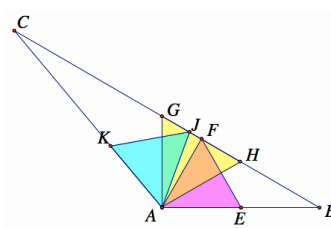


Figure 7

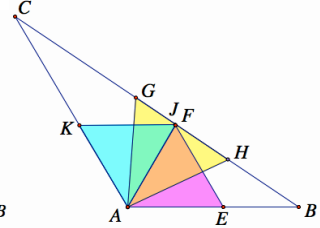


Figure 8

Figure 8 is a 120° - 35° - 25° triangle with the *max ET*, ΔGHA , on the long side *a*. From the first of part **A** it follows that ΔGHA is larger than the other two *ETs*, and ΔAEF and ΔJKA are congruent. For a general argument, if $\alpha = 120^\circ$, then $s_b = |JA| = |FA| = s_c$, so ΔAEF and ΔAJK are congruent, and the *min ET* is on both the short side *c*, and the middle side *b*.

B. In the 110° - 40° - 30° triangle, Fig. 9, the area of the *min ET*, ΔAJK on side *b*, is less in area than *ET* ΔAEF on side *c*, which is less in area than the *max ET* ΔGHA on side *a*, by comparing sides *AG*, *AF*, and *AJ*.

For a formal argument, the situation is similar to part **A**, since $m\angle CAJ = 60^\circ = m\angle FAB$, so we have $m\angle AJC > m\angle AFB$. In ΔAJF it follows that $s_b = |JA| < |FA| = s_c$, and ΔAJK is the *min ET* on the middle side *b*.

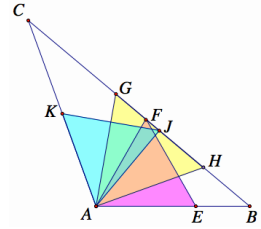


Figure 9

C. In the 75° - 60° - 45° triangle Fig. 10, the *ETs* on sides *c* and *a* coincide, and have sides of length *c*, while the *ET* on side *b*, ΔAJK , has side $s_b < c$.

In general, if $\beta = 60^\circ$, then ΔAEF and ΔGHA coincide. Also *AJ* is interior to ΔAEF , $s_b = |JA| < |AE| = s_c = c$. This means the *min ET* is ΔAJK on the middle side *b*.

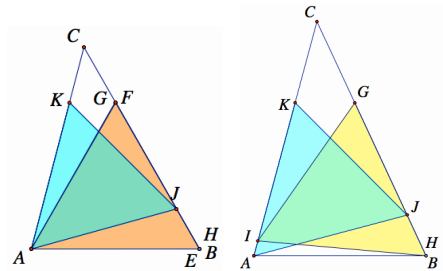


Figure 10

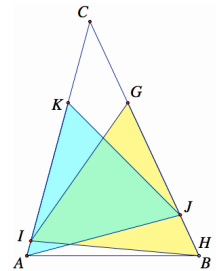


Figure 11

In the 70° - 65° - 45° triangle, Fig.11, the length of the side of the *min ET*, ΔAJK on side *b*, is less than that of the *max ET*, ΔGHI on side *a*, by comparing $|AJ|$ and $|IB|$.

For the general argument, suppose $\beta > 60^\circ$, then $\alpha > \beta > 60^\circ$, and by subtracting 60° from α and β it follows that $m\angle JAB > m\angle IBA$. This means $s_a = |HI| > |JA| = s_b$, and ΔJKA is the *min ET* on

the middle side b . There is no ET on side c in this case, as the base angles are greater than 60° .

In Fig. 12 the graphs of the regions which correspond to Puzzles 5A, 5B, and 5C, are shown. The regions are labeled with the puzzle letter. A typical triangle ΔABC is shown with vertex C in the region B . Ignoring isosceles triangles for now, the dashed lines in red and green are off limits, as is the white circular area (recall it is assumed that $a > b > c$).

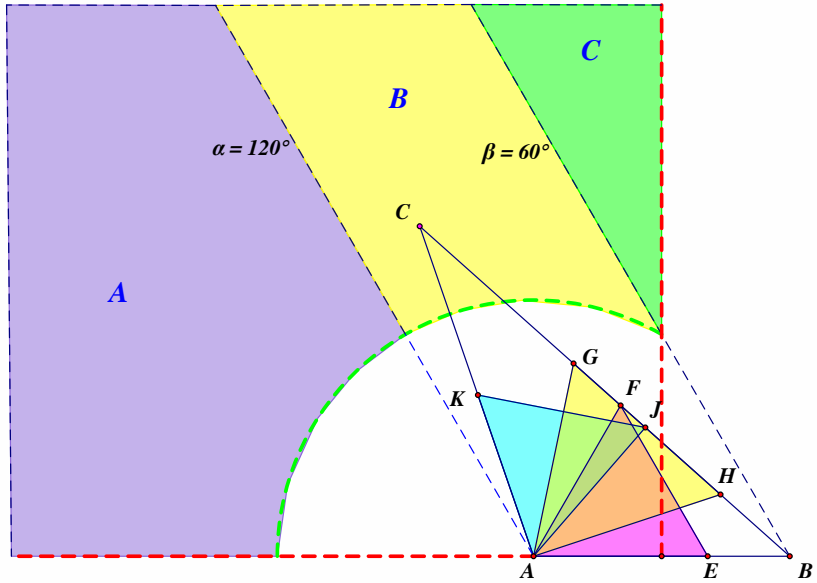


Figure 12

If ET s of largest area on side c are allowed, when vertex C is in region C , there is a *wedged*

ET (WET for short) [1], [4]. These are not inscribed ET s as defined above, since the ET s do not have all 3 vertices on ΔABC , but they are the largest ET s on side c .

The term *wedged* was first used by Calabi in [1].

The new results under this change will happen in *Puzzle 5C*, for then a WET on the base side c of the triangle can be included, see Figures 11 and 13.

We list these new results to *Puzzle 5C* here as 5C.1, 5C.2, and 5C.3.

5C.1. Let ΔABC satisfy $60^\circ \leq \beta < 80^\circ$, $60^\circ < \alpha < 90^\circ$, and $\alpha + \beta/2 < 120^\circ$. Then the max WET is on the short side c , and the min WET is on the middle side b .

5C.2. In ΔABC , if we assume:

- i.) $60^\circ < \beta < 80^\circ < \alpha < 90^\circ$, $\alpha/2 + \beta < 120^\circ$, and $\alpha + \beta/2 \geq 120^\circ$, then the min WET is on the middle side b , and the max WET is on both the short side c and the long side a , when $\alpha + \beta/2 = 120^\circ$, and on the long side a , when $\alpha + \beta/2 > 120^\circ$.
- ii.) $75^\circ < \beta < 90^\circ$, $80^\circ < \alpha < 90^\circ$, and $\alpha/2 + \beta \geq 120^\circ$, then the max WET is on the long side a , and the min WET is on the short side c , when $\alpha/2 + \beta > 120^\circ$; and on the short side c and the middle side b , when $\alpha/2 + \beta = 120^\circ$.

5C.3. In ΔABC , if $60^\circ < \beta < 90^\circ < \alpha$, then the max WET is on the long side a , and the min WET

- i.) is on the middle side b , when $\alpha/2 + \beta < 120^\circ$, and on the short side c and the middle side b , when $\alpha/2 + \beta = 120^\circ$,
- ii.) is on the short side c , when $\alpha/2 + \beta > 120^\circ$.

As might be expected, the arguments for these results are a little more involved than those given for Puzzles **5A**, **B**, and **C** above. For example, the following is an argument for result **5C.2.i**.

Suppose $60^\circ < \beta < 80^\circ < \alpha < 90^\circ$, $\alpha/2 + \beta < 120^\circ$, $\alpha + \beta/2 = 120^\circ$, and $20^\circ < \gamma < 30^\circ$, by the boundaries of the subregion. This means $90^\circ < m\angle AEC$, and $m\angle BGC < 100^\circ$. Since $\beta < \alpha$, $m\angle EAB > m\angle GBA$, and $|GB| > |AE|$. So $\triangle BHG$ is a possible *max WET* on side a , and $\triangle AEF$ is a possible *min WET* on side b .

Let BJ be the angle bisector of β , J on CA , Fig. 13. Then $m\angle AJB = 60^\circ$, since $\alpha + \beta/2 = 120^\circ$. This also means $\gamma + \beta/2 = 60^\circ$, by the Ext. Angle Th., so $m\angle CJB = 120^\circ = m\angle CHG$, and $m\angle CGH = \beta/2$. But then $m\angle AGB = \alpha$, since $\alpha + \beta/2 = 120^\circ$, so $\triangle ABG$ is isosceles, and $c = |GB|$. Therefore $\triangle ABD$ and $\triangle BHG$ are equal *max WETs* on sides c and a , resp., and $\triangle AEF$ is the *min WET* on side b .

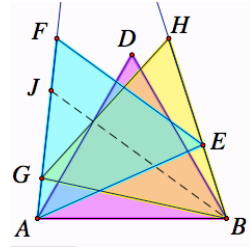


Figure 13

On the other hand, if $60^\circ < \beta < 80^\circ < \alpha < 90^\circ$, $\alpha/2 + \beta < 120^\circ$, and $\alpha + \beta/2 > 120^\circ$, then $15^\circ < \gamma < 30^\circ$ (check the conditions for $\alpha = 90^\circ$), and as above $\triangle CAE$ and $\triangle CBG$ are similar, so $m\angle AGB = m\angle AEB$. Then $\alpha > \beta$ implies $\alpha + \beta/2 > \alpha/2 + \beta$, $m\angle EAB > m\angle GBA$, and $m\angle AEB > \beta$, so $|GB| > c > |AE|$. This means that $\triangle BHG$ is the *max WET* on side a and $\triangle AEF$ is the *min WET* on side b .

The argument for **5C.2.ii** is analogous, but the angle α is bisected instead of angle β in that case. Also, a similar argument can be used in **5C.3**.

The other cases for isosceles triangles with central angle less than 90° are contained in results **5C.1**, and **5C.2.ii**.

These new results for Puzzle **5C** divide region **C**, Fig. 12, into subregions which correspond to each of these new results, Fig. 14.

The subregion **C.2.i** is of particular interest, as two of the boundaries are the graphs of cubic equations, determined by the conditions on the angles in that part.

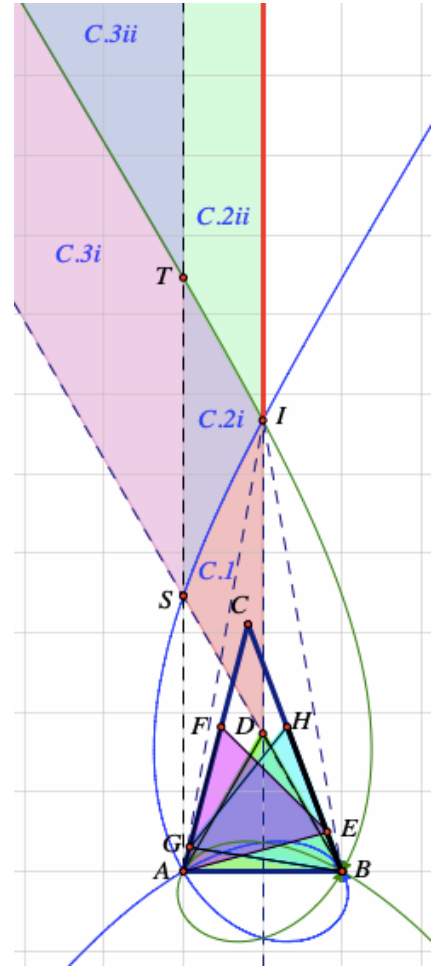


Figure 14

In region **C.2.ii**, if $\alpha/2 + \beta = 120^\circ$, then $\gamma = 60^\circ - \alpha/2$, so by the law of sines, if $c = 1$, then $b = \sin\beta/\sin\gamma = \sin(120^\circ - \alpha/2)/\sin(60^\circ - \alpha/2) = \sin(60^\circ + \alpha/2)/\sin(60^\circ - \alpha/2)$, [2].

Converting to polar coordinates: $r = \sin(60^\circ + \theta/2)/\sin(60^\circ - \theta/2)$, for $80^\circ < \theta < 90^\circ$, $A = (0, 0)$ the polar pole, $B = (1, 0)$, $\theta = \alpha$, and AB on the polar axis.

Changing to rectangular coordinates, by the usual method, determines the associated cubic equation: $\sqrt{3}x^3 + x^2(y - 2\sqrt{3}) + \sqrt{3}x(y^2 + 1) + y^3 - 2\sqrt{3}y^2 - y = 0$.

The graph of this curve (green) is the lower bound of region **C.2.ii** and the upper bound of region **C.2.i**.

Similarly, the lower bound of region **C.2.i** which is the upper bound of region **C.1** satisfies the condition $\alpha + \beta/2 = 120^\circ$, so $\gamma = 60^\circ - \beta/2$. By the law of sines, if $c = 1$, then $b = \sin\beta/\sin\gamma = \sin(240^\circ - 2\alpha)/\sin(\alpha - 60^\circ)$.

The corresponding polar coordinates equation is: $r = \sin(240^\circ - 2\theta)/\sin(\theta - 60^\circ)$, for $80^\circ < \theta < 90^\circ$. In rectangular coordinates this corresponds to the cubic equation:

$$\sqrt{3}x^3 - x^2(y + \sqrt{3}) + x(\sqrt{3}y^2 + 2y) + \sqrt{3}y^2 - y^3 = 0.$$

The graph of this curve (blue) is the lower bound of region **C.2.i**, and the upper bound of **C.1**.

The two cubic curves are symmetric about the vertical line through points *D* and *I*. The point labeled *I* is a point where the 2 cubics intersect, and also the upper vertex of a triangle which is a *WET* analog of Calabi's result for wedged squares in triangles, *Puzzle 6*, [1] [3].

It is obvious that if $\triangle ABC$ is itself an *ET*, then all inscribed *ETs* of largest area will coincide with $\triangle ABC$. From our analysis above this is the only triangle where the 3 largest inscribed *ETs* are equal. However, if *WETs* are admitted, then a new possibility exists.

Puzzle 6. If $\triangle ABC$ is isosceles with base angles of 80° , show that the largest *WETs* on sides *a*, *b*, and *c* are congruent.

Hint: If $\alpha = \beta = 80^\circ$, then $\gamma = m\angle EAB = m\angle GBA = 20^\circ$.

So, $m\angle AEB = m\angle BGA = 80^\circ$. Then, triangles $\triangle ABE$ and $\triangle ABG$ are isosceles, so $|GB| = c = |AE|$, and all 3 largest *WETs* $\triangle ABD$, $\triangle AEF$, and $\triangle BGH$, are congruent, Fig. 15.

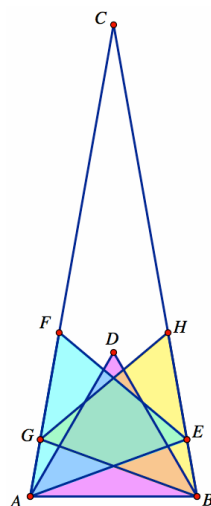


Figure 15

References

1. E. Calabi, *Outline of Proof Regarding Squares Wedged in Triangles*, <http://www.mit.edu/~sfinch/calabi.html>
2. T. Heath, *EUCLID, The Thirteen Books of THE ELEMENTS*, Vol. 1, 2nd ed., Dover, 1956.
3. J. Parks, *Max/Min Puzzles in Geometry*, arXiv: 2201.02050v3.
4. _____, *Inscribing ETs in Triangles*, NYSMTJ, Vol. 63, No. 2, 2013.
5. K. A. Post, *Triangle in a triangle: on a problem of Steinhaus*, Geom. Dedicata 45 (93) 115-120.
6. Sullivan, J. M., *Polygon in triangle: generalizing a theorem of Post*, <http://torus.math.uiuc.edu/jms/>, 1996.