

Maker–Breaker total domination games on cubic graphs

Jovana Forcan^{*†} and Mirjana Mikalački[‡]

June 11, 2022

Abstract

We study Maker–Breaker total domination game played by two players, Dominator and Staller on the connected cubic graphs. Staller (playing the role of Maker) wins if she manages to claim an open neighbourhood of a vertex. Dominator wins otherwise (i.e. if he can claim a total dominating set of a graph). For certain graphs on $n \geq 6$ vertices, we give the characterization on those which are Dominator’s win and those which are Staller’s win.

1 Introduction

Maker–Breaker positional games are played on the finite set of elements X , called the *board* of the game, where the family of *winning sets*, $\mathcal{F} \subseteq 2^X$, is also given. Two players, *Maker* and *Breaker*, take turns in claiming previously unclaimed elements of X until all of them are claimed. Maker wins the game if, by the end of the game, she claims all the elements of some winning set $F \subseteq \mathcal{F}$. Otherwise, Breaker wins. Positional games – finite combinatorial games of perfect information and no chance moves, have attracted lots of attention in recent years, and Maker–Breaker games are their most studied type. More about this type and other types of positional games can be found in Beck’s book [1] as well as in the recent monograph of Hefetz, Krivelevich, Stojaković and Szabó [9].

In the standard (total) domination game on a given graph G introduced by Brešar, Klavžar and Rall [2], two players, *Dominator* and *Staller*, claim previously unclaimed vertices of G in turns, and Dominator wins if he can claim a (*total*) *dominating set* D of G ,

^{*}Department of Mathematics and Informatics, Faculty of Sciences, University of Novi Sad, Serbia. Email: dmi.jovana.jankovic@student.pmf.uns.ac.rs.

[†]Department of Mathematics, Informatics and Physics, Faculty of Philosophy, University of East Sarajevo, Bosnia and Herzegovina.

[‡]Department of Mathematics and Informatics, Faculty of Sciences, University of Novi Sad, Serbia. Research partly supported by Provincial Government for Higher Education and Scientific Research, Grant No. 142-451-3227/2020. Email: mirjana.mikalacki@dmi.uns.ac.rs.

i.e. if for every vertex of G holds that its neighbour is in D . On the other hand, Staller's aim is to prevent Dominator from his goal. In other words, Staller wins, if she manages to claim an open neighbourhood of a vertex of G . Although the domination game under various setup appeared earlier in the literature (see e.g. [3, 4]), Maker–Breaker domination game was only introduced quite recently, see [5, 7].

In the Maker–Breaker total domination game (MBTD game for short) on a given graph G , two players, Maker and Breaker are selecting unclaimed vertices of the graph. So, the board is the vertex set of G , and the winning sets are open neighbourhoods of all vertices in G . To keep up with the common notation in the domination game, the players will be renamed to Staller, playing the role of Maker, and Dominator, playing the role of Breaker.

It is easy to see that Dominator wins the MBTD game on $G = K_n$, for any given $n \geq 2$, no matter who starts the game. Also, for $G = K_1$, the MBTD game is Staller's win, as the graph has a unique vertex. Therefore, it is interesting to look at other graphs and characterize them according to the winner of the game.

Following the notation from [7] we say that a graph G is

- \mathcal{D} , if Dominator wins the game
- \mathcal{S} , if Staller wins the game
- \mathcal{N} , if first player wins the game.

Motivated by the question of Gledel, Henning, Iršič and Klavžar [7], we study MBTD game on connected cubic graphs (the graphs whose all vertices have degree three), and for certain graphs we are able to characterize which ones are \mathcal{D} and which are \mathcal{S} .

It is stated in [7] that

- there are infinitely many examples of connected cubic graphs in which Staller wins the game as the first player.
- no minimum degree condition is sufficient to guarantee that Dominator wins in the game in which Staller is the first player.

To determine which connected cubic graphs are Dominator's win and which are Staller's win, we use the following classification of cubic graphs. In a cubic graph on $n \geq 6$ vertices each vertex has only three possibilities [10]:

1. it lies in two triangles (Figure 1(a)).
2. it lies in one triangle (Figure 1(b))
3. it lies in zero triangles (Figure 1(c))

So, cubic graphs can be classified according to the number of vertices of type 1 (being in two triangles), type 2 (being in one triangle) and type 3 (being in no triangle). Let T_1, T_2

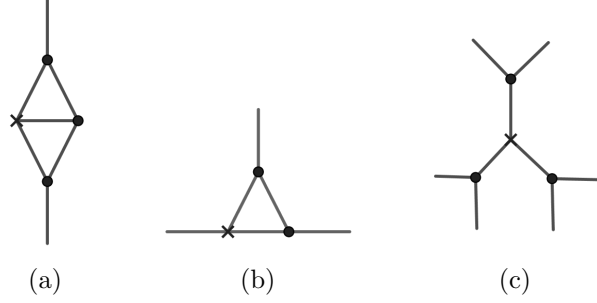


Figure 1: Different possible locations for vertices in cubic graph of order $n \geq 6$. Vertex can lie in (a) two triangles (b) one triangle (c) no triangles

and T_3 denote the number of vertices of type 1, type 2 and type 3, respectively. These three numbers are related by the following formulas [10]:

$$T_1 = 2k_1 \quad T_2 = T_1 + 3k_2 \quad T_1 + T_2 + T_3 = n$$

where k_1 and k_2 are nonnegative integers.

If the cubic graph contains vertices of type 1, then this means that G contains at least one *diamond*, that is, the complete graph on four vertices minus one edge.

Hereinafter, when we say a triangle we refer to an induced K_3 which is not part of a diamond.

We say that a vertex $x \in V(G)$ is adjacent to some triangle $Y \subseteq G$, where $V(Y) = \{y_1, y_2, y_3\}$, if $xy_i \in E(G)$, for some $i \in \{1, 2, 3\}$. Also, we say that two triangles $X \subseteq G$ and $Y \subseteq G$, with the vertex sets $V(X) = \{x_1, x_2, x_3\}$ and $V(Y) = \{y_1, y_2, y_3\}$, are adjacent if $x_i y_j \in E(G)$ for some $i, j \in \{1, 2, 3\}$.

Taking into consideration the possible types of cubic graphs, we prove the following theorems.

Theorem 1.1. *Let G be a cubic graph on $n \geq 6$ which is the union of vertex-disjoint diamonds. Then, the MBTD game on G is \mathcal{D} .*

Theorem 1.2. *Let G be a cubic graph on $n \geq 6$ vertices in which every vertex lies in exactly one triangle, that is, G is the union of vertex-disjoint triangles. If $n = 6$, the graph G is \mathcal{D} . Otherwise, the graph G is \mathcal{S} .*

Theorem 1.3. *Let G be a cubic graph on $n \geq 6$ vertices which is the union of vertex-disjoint triangles and diamonds. Then, there are only two types of such a graph on which Dominator wins, but only as the first player. In all other cases the graph G is \mathcal{S} .*

Definition 1.4 (Watkins [11]). *The generalized Petersen graph $GP(n, k)$, for given $n \geq 3$ and $1 \leq k \leq n - 1$, is a graph whose vertex set is $V(GP(n, k)) = \{u_0, u_1, \dots, u_{n-1}, v_0, v_1, \dots, v_{n-1}\}$ and $E(GP(n, k))$ consists of all edges in form*

$$u_i, u_{i+1} \quad u_i, v_i \quad v_i, v_{i+k},$$

where i is an integer. All subscripts are to be read modulo n .

Generalized Petersen graphs drew lots of attention since their definition. In [7], the authors showed that the prism $P_2 \square C_n$, for $n \geq 3$ is \mathcal{D} . This graph is equivalent to the Generalized Petersen graph $GP(n, 1)$. For the graph $GP(5, 2)$ it is proven in [7] that it is \mathcal{S} . The following theorem gives the characterization of $GP(n, 2)$ for every $n \geq 6$.

Theorem 1.5. *MBTD game on generalized Petersen graph $GP(n, 2)$ for $n \geq 6$ is \mathcal{S} .*

Finally, we are interested in MBTD games on cubic bipartite graphs and the union of bipartite graphs and prove the following.

Theorem 1.6. *Cubic bipartite graph is \mathcal{D} .*

A *claw* is the complete bipartite graph $K_{1,3}$.

Theorem 1.7. *Let G be a connected cubic graph on $n \geq 6$ vertices formed as the union of $k \geq 2$ vertex-disjoint claws. For $k = 2$, G is \mathcal{D} . For $k \geq 3$, the graph G is \mathcal{S} .*

1.1 Preliminaries

For given graph G by $V(G)$ and $E(G)$ we denote its vertex set and edge set, respectively. The order of graph G is denoted by $v(G) = |V(G)|$, and the size of the graph by $e(G) = |E(G)|$.

Assume that the MBTD game is in progress. We denote by d_1, d_2, \dots the sequence of vertices chosen by Dominator and by s_1, s_2, \dots the sequence of vertices chosen by Staller. At any given moment during this game, we denote the set of vertices claimed by Dominator by \mathfrak{D} and the set of vertices claimed by Staller by \mathfrak{S} . As in [8], we say that the game is the D -game if Dominator is the first to play, i.e. one *round* consists of a move by Dominator followed by a move of Staller. In the S -game, one round consists of a move by Staller followed by a move of Dominator. We say that the vertex v is *isolated* by Staller if all neighbours of v are claimed by Staller. The open neighbourhood of a vertex v , denoted by $N_G(v)$, is the set of vertices adjacent to v in G . Graph G is r -regular if every vertex $v \in V(G)$ has degree r . A 3-regular graph is called *cubic graph*.

Definition 1.8. *The Cartesian product $G \square H$ of graphs G and H is the graph with vertex set $V(G \square H) = V(G) \times V(H)$ in which (u, v) is adjacent to (u', v') if either $u = u'$ and $vv' \in E(H)$, or $v = v'$ and $uu' \in E(G)$.*

The circular ladder graph (or prism graph) CL_n is the Cartesian product of a cycle of length $n \geq 3$ and an edge, that is, $CL_n = C_n \square P_2$.

A n -prism graph is equivalent to the generalized Petersen graph $GP(n, 1)$.

We point out some basic properties of the MBTD games given in [7].

Proposition 1.9. ([7], Corollary 2.2(ii)) *Let G be a graph. Let V_1, \dots, V_k a partition of $V(G)$ such that V_i , $i \in [k] := \{1, \dots, k\}$, induces a graph on which Dominator wins the MBTD game, then Dominator wins MBTD game on G .*

Proposition 1.10. ([7], Proposition 2.4) *Dominator wins in MBTD game on cycle C_4 .*

1.1.1 Traps

Consider the MBTD game on graph G . Let $v \in V(G)$ and let $u_1, u_2, u_3 \in N_G(v)$. Let u_2 and u_3 be free vertices. Let $u_1 \in \mathfrak{S}$ and suppose that it is Staller's turn to make her move. If Staller claims u_2 (or u_3), she creates a *trap* for Dominator, that is, Staller forces Dominator to claim u_3 (or u_2) as otherwise she isolates v .

Double trap. We say that Staller creates a *double trap* $u - v$ in the MBTD game on G , where $u, v \in V(G)$ are free vertices, if after Staller's move Dominator is forced to claim both vertices u and v . Since Dominator can not claim two vertices in one move, in her next move Staller will claim either u or v and isolate either a neighbour of u or a neighbour of v .

If Staller creates a double trap, Dominator loses the game.

Diamond trap. Suppose that the MBTD game on the connected cubic graph G is in progress. Let $Z \subseteq G$ be a diamond with the vertex set $V(Z) = \{z_1, z_2, z_3, z_4\}$ and the edge set $E(Z) = \{z_1z_2, z_2z_3, z_3z_4, z_4z_1, z_2z_4\}$ and suppose that all vertices from $V(Z)$ are free. By claiming z_1 (or z_3) Staller creates a *diamond trap* on Z . That is, she forces Dominator to claim a vertex from $V(Z) \setminus \{z_1\}$ (or $V(Z) \setminus \{z_3\}$), as otherwise, in her next move Staller will claim z_3 (or z_1) and create a double trap $z_2 - z_4$.

Vertex-diamond trap. Suppose that the MBTD game on the connected cubic graph G is in progress. Consider subgraph $G' \subseteq G$ with the vertex set $V(G') = \{v, y_1, y_2, z_1, z_2, z_3, z_4\}$ where the vertices z_1, z_2, z_3 and z_4 form a diamond Z with the edge set $E(Z) = \{z_1z_2, z_2z_3, z_3z_4, z_4z_1, z_2z_4\}$. Let $E(G') = E(Z) \cup \{vy_1, vy_2, vz_1\}$. Let y_2, z_1, z_2, z_3, z_4 be free vertices. Suppose that $y_1 \in \mathfrak{S}$ and it is Staller's turn to make her move. If Staller claims z_1 she creates a *vertex-diamond trap* $y_2 - Z$. That is, she forces Dominator to claim y_2 , as otherwise Staller can isolate v in her next move. Also, Staller has created a diamond trap on Z which forces Dominator to claim $V(Z) \setminus \{z_1\}$. In any case Dominator will lose the game.

2 Graphs from \mathcal{D} and \mathcal{S}

The proof of Theorem 1.1. The vertex set $V(G)$ can be partitioned into 4-sets, each containing a C_4 . So, by Proposition 1.10 and Proposition 1.9 Dominator wins on C_4 , and therefore on diamond. \square

Definition 2.1. Suppose that the MBTD game on connected cubic graph G on $n \geq 6$ vertices is in progress.

1. By G_1 denote a induced subgraph of G with the vertex set $V(G_1) = \{u_0, u_1, u_2, u_3, v_0, v_1, v_2, v_3\}$ where the vertices u_1, u_2, u_3 form a triangle U and the

vertices v_1, v_2, v_3 form a triangle V . Let $E(G_1) = E(U) \cup E(V) \cup \{u_0u_1, v_0v_1\}$. The subgraph is illustrated in Figure 2(a).

2. By G_2 denote a subgraph of G with the vertex set $\{x_1, x_2, x_3, u_1, u_2, u_3, v_1, v_2, v_3, z_1, z_2, z_3, v\}$ where the vertices x_1, x_2, x_3 form a triangle X , u_1, u_2, u_3 form a triangle U , v_1, v_2, v_3 form a triangle V , and z_1, z_2, z_3 form a triangle Z . Let $E(G_2) = E(X) \cup E(U) \cup E(V) \cup E(Z) \cup \{v_3v\}$. The subgraph is illustrated in Figure 2(b).

3. By G_3 denote a subgraph of G which contains a triangle U with the vertex set $\{u_1, u_2, u_3\}$, and a diamond Z with the vertex set $\{z_1, z_2, z_3, z_4\}$ and the edge set $E(Z) = \{z_1z_2, z_2z_3, z_3z_4, z_4z_1, z_2z_4\}$. Let $E(G_3) = E(U) \cup E(Z) \cup \{u_2z_1\}$. The subgraph is illustrated in Figure 2(c).

4. By G_4 denote a subgraph of G which contains a triangle U with the vertex set $\{u_1, u_2, u_3\}$ and two diamonds, a diamond Y with the vertex set $\{y_1, y_2, y_3, y_4\}$ and the edge set $E(Y) = \{y_1y_2, y_2y_3, y_3y_4, y_4y_1, y_2y_4\}$, and a diamond Z with the vertex set $\{z_1, z_2, z_3, z_4\}$ and the edge set $E(Z) = \{z_1z_2, z_2z_3, z_3z_4, z_4z_1, z_2z_4\}$. Let $E(G_4) = E(U) \cup E(Y) \cup E(Z) \cup \{u_2y_1, u_3z_1\}$. The subgraph is illustrated in Figure 2(d).

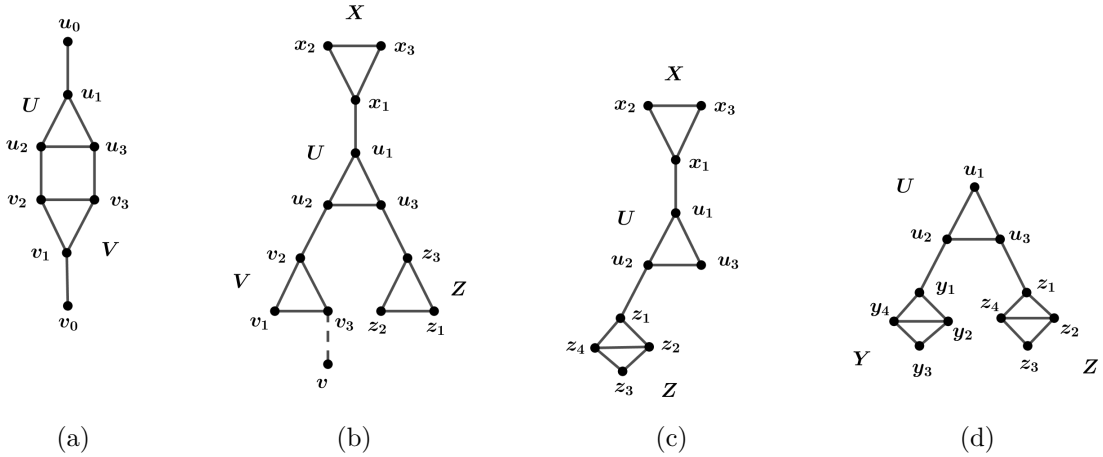


Figure 2: Subgraph (a) G_1 (b) G_2 (Vertex v can belong to $V(Z) \cup V(X)$) (c) G_3 (d) G_4

To prove Theorem 1.2 and Theorem 1.3 we will need the following lemmas.

Lemma 2.2. *Consider the D-game on G_1 . If $d_1 = u_0$, then G_1 is \mathcal{S} . Also, Staller wins S-game on G_1 .*

Proof. We have $d_1 = u_0$. Then, $s_1 = v_2$. Consider the following cases:

- Case 1. $d_2 = u_1$. Then, $s_2 = v_3$ which forces $d_3 = v_0$. In her third move Staller claims v_1 and creates a double trap $u_2 - u_3$. After Staller's move in round four, Dominator will lose the game. Staller isolates either v_2 or v_3 by claiming u_2 or u_3 .
- Case 2. $d_2 = u_2$. Then, by playing $s_2 = u_3$ Staller creates a double trap $u_1 - v_1$. In her third move Staller isolates u_2 or v_3 .
- Case 3. $d_2 = u_3$. Then, $s_2 = v_3$ which forces $d_3 = v_0$. In her third move Staller claims u_2 and creates a double trap $u_1 - v_1$. In her next move Staller isolates either u_3 or v_2 .
- Case 4. $d_2 = v_1$. Then, $s_2 = v_3$ which forces $d_3 = v_0$. By playing $s_3 = u_1$ Staller creates a double trap $u_3 - u_2$. In her next move Staller isolates either u_2 or u_3 .
- Case 5. $d_2 \in \{v_3, v_0\}$. By playing $s_3 = u_3$ Staller creates a double trap $u_1 - v_1$. In her next move Staller isolates either u_2 or v_3 .

In the S -game, Staller can pretend that she is the second player and $d_1 = u_0$ and win the game. \square

Lemma 2.3. *Consider the MBTD game on G_2 . Let $u_1 \in \mathfrak{S}$ and suppose that at least the vertices $u_2, u_3, v_1, v_2, v_3, v, z_3$ are free. Suppose that it is Staller's turn to make her move. Then, Staller wins.*

Proof. Staller plays in the following way: $s_1 = u_2$ which forces $d_1 = z_3$ and $s_2 = v_2$ which forces $d_2 = u_3$. By playing $s_3 = v_1$ Staller creates a double trap $v_3 - v$. In her next move Staller isolates either v_2 or v_3 by claiming v_3 or v . \square

Lemma 2.4. *Consider the MBTD game on G_3 . Let $u_1 \in \mathfrak{S}$ and suppose that at least the vertices u_3, z_1, z_2, z_3, z_4 are free. Suppose that it is Staller's turn to make her move. Then, Staller wins.*

Proof. Staller plays $s_1 = z_1$ and creates a vertex-diamond trap $u_3 - Z$. Dominator can not win. \square

Lemma 2.5. *Staller wins the S -game on G_4 .*

Proof. Consider the S -game on G_4 . Staller plays in the following way: $s_1 = y_1$ which forces $d_1 \in \{y_2, y_3, y_4\}$ (a diamond trap on Y), as otherwise Staller will claim y_3 in her second move and then in her third move she can isolate y_2 or y_4 . Next, $s_2 = u_1$ which forces $d_2 = u_3$. By playing $s_3 = z_1$ Staller creates a vertex-diamond trap $u_2 - Z$. \square

Lemma 2.6. *Consider the MBTD game on the connected cubic graph η illustrated in Figure 3. In the D -game, if $d_1 \in \{h_1, h_3\}$, Dominator wins. Otherwise, Staller wins as the second player. In the S -game on η Staller wins.*

Proof. Consider the D -game and let $d_1 \in \{h_1, h_3\}$. W.l.o.g. let $d_1 = h_1$. To dominate vertices from $V(Y) \cup V(K)$ Dominator plays in the following way:

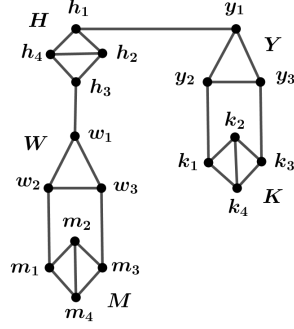


Figure 3: Graph η

- Case 1. If Staller's first move on $V(Y) \cup V(K)$ is y_1 , Dominator responds with k_1 . To cover the remaining vertices from $V(Y) \cup V(K)$, Dominator will use the pairing strategy on pairs (y_2, k_3) and (k_2, k_4) . If Staller claims y_3 , Dominator will claim an arbitrary free vertex among $\{y_2, k_2, k_3, k_4\}$.
- Case 2. If Staller's first move on $V(Y) \cup V(K)$ is a vertex from $\{y_2, y_3\}$, Dominator responds with y_1 . To dominate the remaining vertices from $V(Y) \cup V(K)$, Dominator will use the pairing strategy on pairs (k_1, k_3) and (k_2, k_4) .
- Case 3. If Staller's first move on $V(Y) \cup V(K)$ is k_1 (or k_3), Dominator responds with k_3 (or k_1). To cover the remaining vertices from $V(Y) \cup V(K)$, Dominator will use the pairing strategy where the pairs are (y_1, y_3) (or (y_1, y_2)) and (k_2, k_4) . If Staller claims y_2 (or y_3), Dominator will claim an arbitrary free vertex from one of the pairs.

To cover vertices from $V(H) \cup V(W) \cup V(M)$ Dominator plays in the following way. When Staller claims h_2 (or h_4), Dominator claims h_4 (or h_2), and when Staller claims m_2 (or m_4), Dominator claims m_4 (or m_2). So, suppose that vertices h_2, h_4, m_2, m_4 are already taken by players. Let, for example, $h_2, m_2 \in \mathfrak{D}$. It is enough to consider the following cases.

- Case 1. If Staller's first move on $V(H) \cup V(W) \cup V(M)$ is h_3 , Dominator responds with w_1 . In order to cover vertices from $V(W) \cup V(M)$ Dominator will use the pairing strategy on pairs (w_2, w_3) and (m_1, m_3) .
- Case 2. If Staller's first move on $V(H) \cup V(W) \cup V(M)$ is w_1 (or w_2), Dominator responds with m_1 (or m_3). In order to cover vertices from $V(H) \cup V(W) \cup V(M)$ Dominator will use the pairing strategy on pairs (w_2, m_3) (or (w_1, m_1)) and (w_3, h_3) .
- Case 3. If Staller's first move on $V(H) \cup V(W) \cup V(M)$ is w_3 , Dominator responds with m_1 . In order to cover vertices from $V(H) \cup V(W) \cup V(M)$ Dominator will use the pairing strategy on pairs (w_2, h_3) and (w_1, m_3) .
- Case 4. If Staller's first move on $V(H) \cup V(W) \cup V(M)$ is m_1 (or m_3), Dominator responds with m_3 (or m_1). In order to cover vertices from $V(H) \cup V(W) \cup V(M)$ Dominator will use the pairing strategy on pairs (w_1, w_3) and (w_2, h_3) (or (w_1, w_2) and (w_3, h_3)).

- Next, suppose that $d_1 \in \{h_2, h_4\}$. W.l.o.g. let $d_1 = h_2$. Staller plays in the following way: $s_1 = k_1$ which forces $d_2 \in V(K) \setminus \{k_1\}$ (a diamond trap), $s_2 = y_3$ which forces $d_3 = y_1$, $s_3 = h_1$ which forces $d_4 = y_2$ and $s_4 = h_3$ which forces $d_5 = h_4$. Next, $s_5 = w_1$. Afterwards,
- if $d_6 = w_2$ (or $d_6 = w_3$), then $s_6 = m_1$ (or $s_6 = m_3$) and Staller creates a vertex-diamond trap $w_3 - M$ (or $w_2 - M$).
 - if $d_6 \in \{m_1, m_2, m_4\}$ (or $d_6 = m_3$), then $s_6 = w_2$ (or $s_6 = w_3$) and Staller creates a double trap $m_3 - w_3$ (or $m_1 - w_2$). In her next move Staller isolates either w_3 or w_1 (or, w_2 or w_1).

Next, suppose that $d_1 \notin V(H)$. W.l.o.g. let $d_1 \in V(Y) \cup V(K)$. Then, Staller plays on the subgraph G_4 with the vertex set $V(W) \cup V(H) \cup V(M)$. By Lemma 2.5, Staller wins. In the the S -game, Staller uses the same strategy. \square

Lemma 2.7. *Consider the MBTD game on the connected cubic graph ω illustrated in Figure 4, where the chain of diamonds adjacent to A can consist of one or more diamonds. In the D -game, if $d_1 = a_1$, Dominator wins. In the S -game on ω Staller wins.*

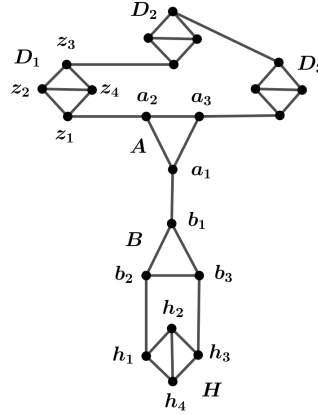


Figure 4: Graph ω

Proof. We first look at the D -game on ω . In his first move Dominator claimed a_1 . When Staller plays on a diamond which is different from H , Dominator responds by claiming the corresponding vertex from that diamond. Since each diamond contains a 4-cycle, Dominator is able to cover all vertices from these diamonds, by Proposition 1.10.

When Staller claims a_2 (or a_3), Dominator responds by claiming a_3 (or a_2) and when Staller claims h_2 (or h_4), Dominator responds by claiming h_4 (or h_2). So, suppose that these vertices are already taken by players. Let $a_2, h_2 \in \mathfrak{D}$.

- If Staller's first move on $V(B) \cup V(H)$ is b_1 , Dominator responds with h_1 . If Staller in her next move claims a vertex from $\{b_2, b_3, h_3\}$, Dominator claims the free vertex from $\{b_2, h_3\}$ and in this way he covers all vertices from the graph.

- If Staller's first move on $V(B) \cup V(H)$ is b_2 (or b_3), Dominator responds with h_1 (or h_3). If Staller in her next move claims a vertex from $\{b_1, h_3, b_3\}$ (or $\{b_1, h_1, b_2\}$), Dominator claims the free vertex from $\{b_1, h_3\}$ (or $\{b_1, h_1\}$) and he covers all vertices.
- If Staller's first move on $V(B) \cup V(H)$ is h_1 (or h_3), Dominator responds with h_3 (or h_1). In his next move Dominator claims a free vertex from $\{b_1, b_3\}$ (or $\{b_1, b_2\}$).

Consider the S -game. Staller plays in the following way: $s_1 = h_1$ which forces $d_1 \in V(H) \setminus \{h_1\}$ (a diamond trap), $s_2 = b_1$ which forces $d_2 = b_3$, $s_3 = z_1$ which forces $d_3 \in V(D_1) \setminus \{z_1\}$ (a diamond trap) and $s_4 = a_3$. Staller creates a double trap $a_1 - a_2$. \square

The proof of Theorem 1.2. First, let $n = 6$. Consider the S -game. Let H_1 be a triangle with the vertex set $\{u_1, u_2, u_3\}$ and let H_2 be a triangle with the vertex set $\{v_1, v_2, v_3\}$. Let $u_i v_i \in E(G)$ for every $i \in \{1, 2, 3\}$. W.l.o.g. suppose that Staller in her first move chooses a vertex u_1 . Then Dominator will choose a vertex from the opposite triangle H_2 which is not adjacent to u_1 , say a vertex v_2 . In her second move Staller needs to claim u_2 , as otherwise Dominator will win after his second move. If $s_2 = u_2$, then $d_2 = v_3$. In his third move Dominator will claim a free vertex from $\{v_1, u_3\}$ and win. One of these two vertices must be free after Staller's third move.

Let $n > 6$. Since graph is the cubic, the number of vertices needs to be even, so we have the even number of triangles. Consider the D -game on graph G . Suppose that in his first move Dominator claims some vertex a_1 which belongs to a triangle A with the vertex set $V(A) = \{a_1, a_2, a_3\}$. Let $a_1 b_1 \in E(G)$ where b_1 is a vertex of some triangle B with the vertex set $V(B) = \{b_1, b_2, b_3\}$.

Case 1 There is only one edge between triangles A and B , that is, the edge $a_1 b_1$. We consider the following subcases.

1.i. Triangle B is adjacent to one more triangle, say Y with the vertex set $V(Y) = \{y_1, y_2, y_3\}$. So, there are two edges between B and Y , say $b_2 y_2$ and $b_3 y_3$. Let $y'_1 \in N_G(y_1)$ for some $y'_1 \in V(G) \setminus \{y_2, y_3\}$. Consider a subgraph induced by $\{a_1, b_1, b_2, b_3, y_1, y_2, y_3, y'_1\}$ where a_1 is claimed by Dominator and now it is Staller's turn to make her move. By Lemma 2.2 it follows that Staller wins.

1.ii. Triangle B is adjacent to two more triangles, say Y with the vertex set $V(Y) = \{y_1, y_2, y_3\}$, and W with the vertex set $V(W) = \{w_1, w_2, w_3\}$. Let $b_2 w_2, b_3 y_3 \in E(G)$. Let $w'_1 \in N_G(w_1)$ for some $w'_1 \in V(G) \setminus \{w_2, w_3\}$ and let $w'_3 \in N_G(w_3)$ for some $w'_3 \in V(G) \setminus \{w_1, w_2\}$.

In her first move Staller plays $s_1 = b_1$. The rest of the Staller's strategy depends on Dominator's second move. So, we analyse the following cases.

1.ii.1. $d_2 \in V(A)$.

Then, $s_2 = b_2$ which forces $d_3 = y_3$, $s_3 = w_2$ which forces $d_4 = b_3$. If $w'_1 = a_i$ (or

$w'_3 = a_i$), for some $i \in \{2, 3\}$, and a_i is claimed by Dominator in his second move, then $s_4 = w_1$ (or w_3). In this way Staller creates a double trap $w_3 - w'_3$ (or $w_1 - w'_1$). In her next move Staller isolates either w_2 or w_3 (or, either w_2 or w_1). Otherwise, Staller can claim any of the vertices w_1, w_3 in her fourth move and then play in the same way as above, i.e. she creates a double trap and win in the following move.

1.ii.2. $d_2 \in V(B)$.

W.l.o.g. let $d_2 = b_3$.

1.ii.2.1. Triangle Y is adjacent to two more triangles, say K with the vertex set $V(K) = \{k_1, k_2, k_3\}$ and $H = \{h_1, h_2, h_3\}$. Let $y_2 k_2 \in E(G)$ and $y_1 h_1 \in E(G)$. Then, $s_2 = y_3$ which forces $d_3 = b_2$, $s_3 = y_1$ which forces $d_4 = k_2$ and $s_4 = h_1$ which forces $d_5 = y_2$. Next, $s_5 = h_2$ and Staller creates a double trap $h_3 - h'_3$, where $h'_3 \in N_G(h_3)$ for some $h'_3 \in V(G) \setminus \{h_1, h_2\}$. In her next move Staller isolates either h_1 or h_3 .

The statement holds also if $h'_3 \in (V(K) \setminus \{k_2\}) \cup (V(W) \setminus \{w_2\}) \cup (V(A) \setminus \{a_1\})$.

It could be the case that one of these triangles K, H is the triangle W . The statement also holds in this case.

If $K = A$, the statement also holds. If $H = A$, the proof is very similar.

1.ii.2.2. Triangle Y is adjacent to one more triangle, say $K \neq A$ with the vertex set $V(K) = \{k_1, k_2, k_3\}$. Let $y_1 k_1, y_2 k_2 \in E(G)$. Assume that $k'_3 \in N_G(k_3)$ for some $k'_3 \in V(G) \setminus \{k_1, k_2\}$. Since the graph induced by $\{b_3, y_1, y_2, y_3, k_1, k_2, k_3, k'_3\}$ is a variant of graph G_1 where $b_3 \in \mathfrak{D}$. According to Lemma 2.2, Staller wins.

If $K = W$, the statement also holds.

1.ii.2.3. Triangle Y is adjacent to triangle A and there are two edges between them, say $y_2 a_2, y_1 a_3$.

Then, Staller plays $s_2 = y_3$ which forces $d_3 = b_2$. By playing $s_3 = a_2$ Staller creates a double trap $a_3 - y_1$. In her next move Staller isolates either a_1 or y_2 .

1.ii.3. $d_2 \in V(Y) \cup V(W)$. W.l.o.g. let $d_2 \in V(Y)$.

Let $w'_1 \in N_G(w_1)$ and let $w'_3 \in N_G(w_3)$. Consider the following subcases.

1.ii.3.1. $d_2 \neq y_3$. W.l.o.g. let $d_2 = y_1$.

Then, $s_2 = w_2$ which forces $d_3 = b_3$ and $s_3 = b_2$ which forces $d_4 = y_3$. It is enough to consider the case if one of the vertices w'_1 and w'_3 is the vertex y_1 . Let, for example, $w'_1 = y_1$. Then, $s_4 = w_1$ and Staller creates a double trap $w_3 - w'_3$. In her next move Staller isolates either w_2 or w_3 .

Staller plays in the same way if $y_1 \notin \{w'_1, w'_3\}$.

1.ii.3.2. $d_2 = y_3$.

Then, $s_2 = w_2$ which forces $d_3 = b_3$, $s_3 = w_1$ which forces $d_4 = w'_3$ and $s_4 = w_3$. Staller creates a double trap $b_2 - w'_1$. In her next move Staller isolates either w_2 or w_1 .

Case 2 Suppose that between triangles A and B there are two edges, say $a_1b_1, a_2b_2 \in E(G)$. Let C , with the vertex set $V(C) = \{c_1, c_2, c_3\}$, be another triangle adjacent to A , that is, $a_3c_3 \in E(G)$. Such C must exist, as G is connected and $n > 6$. The triangle C can be adjacent to one more triangle by two edges. In this case we can consider the S -game on a subgraph G_1 . So, by Lemma 2.2, Staller wins.

If the triangle C is adjacent to two more triangles, say C_1 and C_2 , then we can consider the S -game on a subgraph induced by the vertex set $V(C) \cup V(C_1) \cup V(C_2) \cup \{a_3\}$ which is a variant of the subgraph described in Case 1.ii (where we had the vertex set $V(B) \cup V(Y) \cup V(W) \cup \{a_1\}$), with the difference that a_3 is a free vertex. So, Staller wins.

According to the analysed cases it follows that the graph G is \mathcal{S} . \square

The proof of Theorem 1.3. Consider the following cases.

Case 1 Let $d_1 = a_1 \in V(A)$ where A is a triangle with the vertex set $V(A) = \{a_1, a_2, a_3\}$. Consider the following cases.

1.i. The vertex a_1 is adjacent to a diamond H with the vertex set $V(H) = \{h_1, h_2, h_3, h_4\}$ where $E(H) = \{h_1h_2, h_2h_3, h_3h_4, h_4h_1, h_2h_4\}$. Let $a_1h_1 \in E(G)$. Consider the following subcases.

1.i.1. The vertices a_2 and a_3 are adjacent to the same triangle, say B , where $a_2b_2, a_3b_3 \in E(G)$.

1.i.1.a. B is adjacent to a triangle Y with the vertex set $V(Y) = \{y_1, y_2, y_3\}$. Let $b_1y_1 \in E(G)$. Then, $s_1 = b_3$. It is enough to consider the following cases for Dominator's second move.

1.i.1.a.1 If $d_2 \in (V(A) \cup V(B)) \setminus \{b_2\}$, then Staller plays $s_2 = y_1$ which forces $d_3 = b_2$. Triangle Y can be adjacent to some diamonds and triangles. The vertices of these triangles and diamonds which are adjacent to Y together with $V(Y) \cup V(B)$ form one of the subgraphs G_1, G_2 or G_3 . According to the lemmas 2.2, 2.3 and 2.4, Staller wins the game on these subgraphs.

1.i.1.a.2. If $d_2 = b_2$. Then, $s_2 = a_2$ which forces $d_3 = b_1$. By playing $s_3 = h_1$ Staller creates a vertex-diamond trap $a_3 - H$. Dominator can not win.

1.i.1.a.3. If $d_2 \in V(H)$. Then, $s_2 = b_1$ which forces $d_3 = a_2$. Next, $s_3 = b_2$ and Staller creates a double trap $a_3 - y_1$. In her next move Staller isolates either b_3 or b_1 .

1.i.1.a.4. If $d_2 \in V(Y)$. Then, $s_2 = h_1$ which forces $d_3 \in V(H) \setminus \{h_1\}$ (a diamond trap). Next, $s_3 = a_2$ and Staller creates a double trap $a_3 - b_1$. In her next move Staller isolates either a_1 or b_2 .

So, G is \mathcal{S} .

1.i.1.b. B is adjacent to a diamond K with the vertex set $V(K) = \{k_1, k_2, k_3, k_4\}$ where $E(K) = \{k_1k_2, k_2k_3, k_3k_4, k_4k_1, k_2k_4\}$. Let $b_1k_1 \in E(G)$. Then, $s_1 = b_3$. Depending on Dominator's move in round 2, we analyse the following cases.

- 1.i.1.b.1. If $d_2 \in (V(A) \cup V(B)) \setminus \{b_2\}$, then Staller plays $s_2 = k_1$ and creates a vertex-diamond trap $b_2 - K$. Dominator can not win.
- 1.i.1.b.2. If $d_2 = b_2$, then Staller uses the strategy from Case 1.i.1.a.2.
- 1.i.1.b.3. If $d_2 \in V(H)$, then Staller's strategy is very similar to the strategy from Case 1.i.1.a.3.
- 1.i.1.b.4. If $d_2 \in V(K)$, then Staller uses the strategy from Case 1.i.1.a.4.

It follows that the graph G is \mathcal{S} .

- 1.i.1.c. B is adjacent to a diamond H , that is, $b_1h_3 \in E(G)$. Since induced subgraph with the vertex set $V(A) \cup V(B) \cup V(H)$ is a connected cubic graph, it follows that this graph is the graph G on 10 vertices.

In her first move Staller plays $s_1 = b_1$. Then

- if $d_2 = h_1$, Staller plays $s_2 = b_3$ which forces $d_3 = a_2$. Next, $s_3 = b_2$ and Staller creates a double trap $a_3 - h_3$. In her next move she isolates either b_3 or b_1 .
- if $d_2 \in V(H) \setminus \{h_1\}$, Staller plays $s_2 = a_2$ which forces $d_3 = b_3$. Next, $s_3 = a_3$ and Staller creates a double trap $h_1 - b_2$. In her next move she isolates either a_1 or b_3 .
- if $d_2 = a_2$ (or $d_2 = a_3$), Staller plays $s_2 = b_2$ (or $s_2 = b_3$) which forces $d_3 = a_3$ (or $d_3 = a_2$). Next, $s_3 = h_3$ and Staller creates a vertex-diamond trap $b_3 - H$ (or $b_2 - H$).
- if $d_2 = b_2$ ($d_2 = b_3$), Staller plays $s_2 = a_2$ (or $s_2 = a_3$) which forces $d_3 = b_3$ (or $d_3 = b_2$). Next, $s_3 = h_1$ and Staller creates a vertex-diamond trap $a_3 - H$ (or $a_2 - H$).

It follows that the graph G is \mathcal{S} .

- 1.i.2.** The vertex a_2 is adjacent to a triangle, say T and the vertex a_3 is adjacent to a triangle, say B with the vertex set $\{b_1, b_2, b_3\}$. Let $a_3b_3 \in E(G)$. Consider the following subcases.

- 1.i.2.a. At least one of the vertices b_1 and b_2 is adjacent to a diamond, say K , different from H , with the vertex set $V(K) = \{k_1, k_2, k_3, k_4\}$. Let $E(K) = \{k_1k_2, k_2k_3, k_3k_4, k_4k_1, k_2k_4\}$. Let $b_1k_1 \in E(G)$. Then, Staller plays in the following way: $s_1 = h_1$ which forces $d_2 \in V(H) \setminus \{h_1\}$ (a diamond trap), $s_2 = a_3$ which forces $d_3 = a_2$, $s_3 = k_1$ which forces $d_4 \in V(K) \setminus \{k_1\}$ (a diamond trap). Next, $s_4 = b_2$ and Staller creates a double trap $b_1 - b_3$. In her next move Staller isolates either b_3 or b_1 . So, G is \mathcal{S} .
- 1.i.2.b. One of the vertices b_1 and b_2 is adjacent to a diamond H . Let $b_1h_3 \in E(G)$ and suppose that b_2 is adjacent to some triangle, say W , with the vertex set $V(W) = \{w_1, w_2, w_3\}$ where $b_2w_2 \in E(G)$.

1.i.2.b.1. $W \neq T$.

If the triangle W is a part of some subgraph G_1 , that is, if W is adjacent to one more triangle and there are two edges between them, then by Lemma 2.2 Staller wins. Otherwise, Staller plays in the following way: $s_1 = h_1$ which forces $d_2 \in V(H) \setminus \{h_1\}$, $s_2 = a_3$ which forces $d_3 = a_2$, $s_3 = b_1$ which forces $d_4 = b_2$ and $s_4 = w_2$ which forces $d_5 = b_3$.

Triangle W can be adjacent to diamonds and triangles different from H and A . Vertices of these diamonds and triangles which are adjacent to W , together with $V(W) \cup V(B)$ form one of the subgraphs G_2 or G_3 . According to the lemmas 2.3 and 2.4, Staller wins the game on these subgraphs.

1.i.2.b.2. $W = T$. Suppose that $a_2w_3 \in E(G)$.

Suppose, first, that the vertex w_1 is adjacent to a diamond, say K with the vertex set $V(K) = \{k_1, k_2, k_3, k_4\}$ and the edge set $E(K) = \{k_1k_2, k_2k_3, k_3k_4, k_4k_1, k_2k_4\}$ and let $w_1k_1 \in E(G)$. Then, Staller plays in the following way: $s_1 = h_3$ which forces $d_2 \in V(H) \setminus \{h_3\}$ (a diamond trap), $s_2 = b_2$ which forces $d_3 = b_3$, $s_3 = k_1$ which forces $d_4 \in V(K) \setminus \{k_1\}$ (a diamond trap), $s_4 = w_3$ and Staller creates a double trap $w_1 - w_2$. In her next move Staller isolates either w_2 or w_1 .

Next, suppose that W is adjacent to a triangle, say R with the vertex set $V(R) = \{r_1, r_2, r_3\}$. Let $w_1r_1 \in E(G)$. Staller plays in the following way: $s_1 = h_3$ which forces $d_2 \in V(H) \setminus \{h_3\}$ (a diamond trap), $s_2 = b_2$ which forces $d_3 = b_3$, $s_3 = w_3$ which forces $d_4 = w_1$ and $s_4 = r_1$ which forces $d_5 = w_2$. The triangle R can be adjacent to triangles and diamonds different from A, B and H . Vertices of these triangles and diamonds which are adjacent to R , together with $V(R) \cup V(W)$ form one of the subgraphs G_1, G_2 or G_3 . According to the lemmas 2.2, 2.3 and 2.4, Staller wins the game on these subgraphs.

So, G is \mathcal{S} .

1.i.2.c. The triangle B is adjacent to some triangle, say Y with the vertex set $V(Y) = \{y_1, y_2, y_3\}$ where $b_1y_1, b_2y_2 \in E(G)$. Let $y'_1 \in N_G(y_1)$ for some $y'_1 \in V(G) \setminus \{y_2, y_3\}$. Consider the S -game on the subgraph G_1 with the vertex set $V(B) \cup V(Y) \cup \{a_3, y'_1\}$. According to Lemma 2.2, Staller wins. The same holds if $Y = T$. So, G is \mathcal{S} .

1.i.2.d. The triangle B is adjacent to two more triangles, say Y with the vertex set $V(Y) = \{y_1, y_2, y_3\}$, and W with the vertex set $\{w_1, w_2, w_3\}$ where $b_1y_1, b_2w_2 \in E(G)$.

1.i.2.d.1. $W \neq T$ and $Y \neq T$.

At least one of the triangles Y and W is not adjacent to H . Suppose that there is no edge between W and H . If W is adjacent to one more triangle and there are two edges between them, then we can consider a subgraph G_1 and by Lemma 2.2, Staller wins. Otherwise, Staller plays in the following way: $s_1 = h_1$ which forces $d_2 \in V(H) \setminus \{h_1\}$, $s_2 = a_3$ which forces $d_3 = a_2$, $s_3 = b_1$ which forces $d_4 = b_2$ and $s_4 = w_2$ which forces $d_5 = b_3$.

Triangle W can be adjacent to diamonds and triangles different from H and A .

Vertices of these diamonds and triangles which are adjacent to W , together with $V(W) \cup V(B)$ form one of the subgraphs G_2 or G_3 . According to the lemmas 2.3 and 2.4, Staller wins the game on these subgraphs.

1.i.2.d.2. $Y = T$ or $W = T$. W.l.o.g. suppose that $Y = T$.

Let $a_2 y_2 \in E(G)$.

- Suppose, first, that there is no edge between W and Y .

First, suppose that H is adjacent to Y . Let $y_3 h_3 \in E(G)$. Staller plays in the following way: $s_1 = h_1$ which forces $d_2 \in V(H) \setminus \{h_1\}$, $s_2 = a_3$ which forces $d_3 = a_2$, $s_3 = b_1$ which forces $d_4 = b_2$ and $s_4 = w_2$ which forces $d_5 = b_3$.

Triangle W can be adjacent to diamonds and triangles different from A , Y and H . Vertices of these diamonds and triangles which are adjacent to W , together with $V(W) \cup V(B)$ form one of the subgraphs G_1 , G_2 or G_3 . According to the lemmas 2.2, 2.3 and 2.4, Staller wins the game on these subgraphs.

Next, suppose that H is adjacent to W . Let $w_1 h_3$.

The triangle Y can be adjacent to a diamond or a triangle. If Y is adjacent to a diamond, say K with the vertex set $V(K) = \{k_1, k_2, k_3, k_4\}$ and the edge set $E(K) = \{k_1 k_2, k_2 k_3, k_3 k_4, k_4 k_1, k_2 k_4\}$ and if $y_3 k_1 \in E(G)$, then, Staller plays in the following way: $s_1 = h_1$ which forces $d_2 \in V(H) \setminus \{h_1\}$ (a diamond trap), $s_2 = a_2$ which forces $d_3 = a_3$ and $s_3 = y_1$ which forces $d_4 = y_3$. By playing $s_4 = k_1$, Staller creates a vertex-diamond trap $y_2 - K$.

Finally, if Y is adjacent to a triangle, say R with the vertex set $V(R) = \{r_1, r_2, r_3\}$ where $y_3 r_3 \in E(G)$, then Staller plays in the following way $s_1 = h_1$ which forces $d_2 \in V(H) \setminus \{h_1\}$ (a diamond trap), $s_2 = a_2$ which forces $d_3 = a_3$, $s_3 = y_1$ which forces $d_4 = y_3$ and $s_4 = r_3$ which forces $d_5 = y_2$. The triangle R can be adjacent to diamonds and triangles different from A , B and H . Vertices of these diamonds and triangles which are adjacent to R , together with $V(R) \cup V(Y)$ form one of the subgraphs G_1 , G_2 or G_3 . According to the lemmas 2.2, 2.3 and 2.4, Staller wins the game on these subgraphs.

- Next, suppose that there is an edge between W and Y . Let $w_3 y_3 \in E(G)$.

Staller plays in the following way: $s_1 = h_1$ which forces $d_2 \in V(H) \setminus \{h_1\}$, $s_2 = a_3$ which forces $d_3 = a_2$, $s_3 = b_1$ which forces $d_4 = b_2$, $s_4 = y_3$ which forces $d_4 = y_2$ and $s_5 = w_2$. Staller creates a double trap $w_1 - b_3$. In her next move she isolates either w_3 or b_2 .

So, G is \mathcal{S} .

1.i.3. Let a_2 be adjacent to a diamond and a_3 to a triangle B . Staller's strategy is very similar as in Case 1.i.2. So, G is \mathcal{S} .

1.i.4. Vertex a_2 is adjacent to a diamond D_1 different from H and vertex a_3 is adjacent to a diamond D_2 (which can be equal to one of the diamonds D_1 , H).

Since the number of triangles must be even there exists at least one more triangle,

say B , with the vertex set $V(B) = \{b_1, b_2, b_3\}$ such that one of the cases 1.i.4.1., 1.i.4.2., 1.i.4.3., 1.i.4.4., 1.i.4.5. and 1.i.4.6. from Figure 5 holds. We analyse each of these six cases separately.

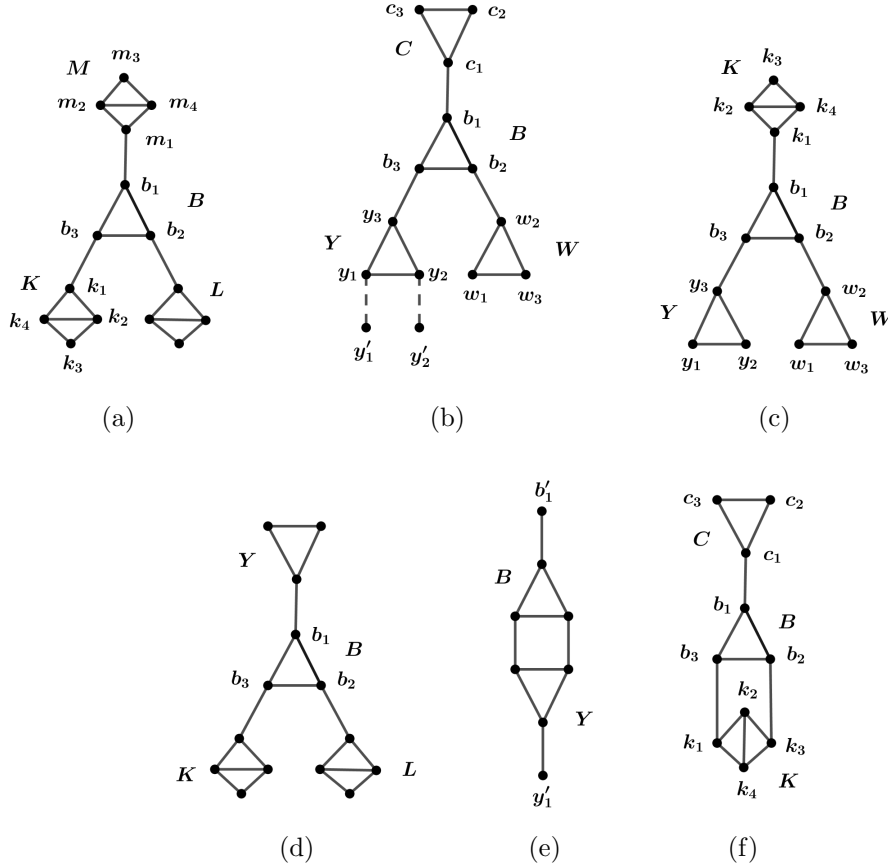


Figure 5: Subgraph (a) Case 1.i.4.1. (b) Case 1.i.4.2 (Vertices y'_1, y'_2 can belong to $V(W) \cup V(C)$) (c) Case 1.i.4.3. (d) Case 1.i.4.4. (e) Case 1.i.4.5. (f) Case 1.i.4.6.

1.i.4.1. Staller plays in the following way:

$s_1 = k_1$ which forces $d_2 \in V(K) \setminus \{k_1\}$ (a diamond trap) and $s_2 = b_2$ which forces $d_3 = b_1$. Next, $s_3 = m_1$ and Staller creates a vertex-diamond trap $b_3 - M$. Dominator can not win.

1.i.4.2. Staller plays in the following way:

$s_1 = b_1$. First, suppose that $d_2 \notin V(B)$. W.l.o.g. let $d_2 \in V(C)$. Then, $s_2 = b_3$ which forces $d_3 = w_2$ and $s_3 = y_3$ which forces $d_4 = b_2$. In her next move Staller will claim y_1 or y_2 . This depends on whether is it the case that $y'_1 = c_i$ or $y'_2 = c_i$ for $i \in \{2, 3\}$ and $d_2 = c_i$. Let $d_1 = y'_1 = c_i$ for some $i \in \{2, 3\}$. Then, $s_4 = y_1$ and Staller creates a double trap $y_2 - y'_2$. In her next move Staller isolates either y_3 or y_2 .

Next, suppose that $d_2 \in V(B)$. W.l.o.g. let $d_2 = b_2$. If W is adjacent to one more triangle and there are two edges between them (that triangle can be Y), then we have the subgraph G_1 and by Lemma 2.2 Staller wins. Otherwise, Staller plays $s_2 = w_2$ which forces $d_3 = b_3$. Triangle W can be adjacent to some diamonds and triangles. The vertices of these diamonds and triangles together with $V(W) \cup V(B)$ form one of the subgraphs G_2 or G_3 . According to the lemmas 2.3 and 2.4, Staller wins.

- 1.i.4.3. If we have the case that one of the triangles Y and W is adjacent to k_3 , then, W.l.o.g. suppose that triangle W is adjacent to k_3 . Then, Staller plays in the following way: $s_1 = k_1$ which forces $d_2 \in V(K) \setminus \{k_1\}$ (a diamond trap), $s_2 = b_2$ which forces $d_3 = b_3$ and $s_3 = y_3$ which forces $d_4 = b_1$. Triangle Y can be adjacent to some diamonds and triangles. The vertices of these diamonds and triangles together with $V(Y) \cup V(B)$ form the subgraphs G_1 , G_2 or G_3 . According to the lemmas 2.2, 2.3 and 2.4, Staller wins.
- 1.i.4.4. Consider the S -game on the subgraph G_4 with the vertex set $V(B) \cup V(K) \cup V(L)$. By Lemma 2.5, Staller wins.
- 1.i.4.5. Consider the S -game on the subgraph G_1 with the vertex set $V(B) \cup V(Y) \cup \{b'_1, y'_1\}$. By Lemma 2.2, Staller wins.
- 1.i.4.6. Staller plays in the following way:
 $s_1 = k_1$ which forces $d_2 \in V(K) \setminus \{k_1\}$ (a diamond trap), $s_2 = b_2$ which forces $d_3 = b_1$ and $s_3 = c_1$ which forces $d_4 = b_3$. Triangle C can be adjacent to some diamonds and triangles. Vertices of these diamonds and triangles together with $V(C) \cup V(B)$ form one of the subgraphs G_1 , G_2 or G_3 . According to the lemmas 2.2, 2.3 and 2.4, Staller wins.

So, the graph G is \mathcal{S} .

1.ii. The vertex a_1 is adjacent to a triangle, say B with the vertex set $V(B) = \{b_1, b_2, b_3\}$. Let $a_1 b_1 \in E(G)$. Consider the following subcases.

- 1.ii.1** The vertex b_2 is adjacent to some diamond, say H , and the vertex b_3 is adjacent to a diamond, say K . Consider the S -game on the subgraph G_4 with the vertex set $V(B) \cup V(H) \cup V(K)$. By Lemma 2.5, Staller wins. So, G is \mathcal{S} .
- 1.ii.2** The vertices b_2 and b_3 are adjacent to the same diamond, say H with the vertex set $V(H) = \{h_1, h_2, h_3, h_4\}$ and the edge set $E(H) = \{h_1 h_2, h_2 h_3, h_3 h_4, h_4 h_1, h_2 h_4\}$, where $b_2 h_1, b_3 h_3 \in E(G)$.
- 1.ii.2.a. If there are no more triangles in the graph G , then the vertices a_2 and a_3 are adjacent to the chain of diamonds. We have a graph ω from Figure 4. According to Lemma 2.7, Dominator wins as the first player. So, G is \mathcal{D} .
- 1.ii.2.b. Otherwise, there exist at least two more triangles, say Y with the vertex set $V(Y) = \{y_1, y_2, y_3\}$ and W with the vertex set $V(W) = \{w_1, w_2, w_3\}$.

- 1.ii.2.b.1. At least one of the triangles Y , W is adjacent to A . Suppose that there is at least one edge between A and Y , say $a_2y_2 \in E(G)$.
- If Y and W are adjacent and there are two edges between them, say y_1w_1 and y_3w_3 , then consider the subgraph G_1 with the vertex set $V(Y) \cup V(W) \cup \{a_2, w'_2\}$ where $w'_2 \in N_G(w_2)$ (note that it could be the case that $w'_2 = a_3$). By Lemma 2.2, Staller wins.
 - If there are no more triangles in the graph G , then let K , with the vertex set $V(K) = \{k_1, k_2, k_3, k_4\}$ and the edge set $E(K) = \{k_1k_2, k_2k_3, k_3k_4, k_4k_1, k_2k_4\}$, be a diamond adjacent to Y where $y_1k_1 \in E(G)$. Then, Staller plays in the following way: $s_1 = k_1$ which forces $d_2 \in V(K) \setminus \{k_1\}$ (a diamond trap), $s_2 = y_3$ which forces $d_3 = y_2$, $s_3 = a_2$ which forces $d_4 = y_1$, $s_4 = b_1$ which forces $d_5 = a_3$. Next, $s_5 = h_1$ and Staller creates a vertex-diamond trap $b_3 - H$.
 - If the graph G contains more than 4 triangles, then there exists at least two more triangles, say R and T . Since Y and B are adjacent to A at least two of the triangles R , T , W are not adjacent to A , but are adjacent to some other triangles and diamonds, so one of the cases from Figure 5 has to occur having Y or W as B . The proof from Case 1.i.4 can be applied on the corresponding triangles and diamonds.
- 1.ii.2.b.2 The triangles Y and W are not adjacent to A , but are adjacent to some other triangles and diamonds, so one of the cases from Figure 5 has to occur having Y or W as B . The proof is the same as in Case 1.i.4.

So, G is \mathcal{S} .

- 1.ii.3** The vertex b_2 is adjacent to a diamond, say H with the vertex set $V(H) = \{h_1, h_2, h_3, h_4\}$, where $b_2h_1 \in E(G)$ and vertex b_3 is adjacent to a triangle, say W , with the vertex set $V(W) = \{w_1, w_2, w_3\}$, where $b_3w_3 \in E(G)$. If W is the part of a subgraph G_1 , that is W is adjacent to one more triangle and there are two edges between them, then by Lemma 2.2, Staller wins. Otherwise, Staller plays in the following way:
 $s_1 = h_1$ which forces $d_2 \in V(H) \setminus \{h_1\}$ (a diamond trap), $s_2 = b_1$ which forces $d_3 = b_3$, $s_3 = w_3$ which forces $d_4 = b_2$. Triangle W can be adjacent to diamonds and triangles.
- 1.ii.3.a. If these diamonds and triangles are different from A and H , then vertices of these diamonds and triangles together with $V(W) \cup V(B)$ form one of the subgraphs G_2 or G_3 . According to the lemmas 2.3 and 2.4, Staller wins.
- 1.ii.3.b. If at least one of the vertices w_1, w_2 is adjacent to A , e.g. let $w_2a_2 \in E(G)$, then by playing $s_4 = a_2$ Staller creates a double trap $a_3 - w_1$. In her next move Staller isolates either a_1 or w_2 .
- 1.ii.3.c. If $w_1h_3 \in E(G)$ and w_2 is adjacent to some diamond K with the vertex set $V(K) = \{k_1, k_2, k_3, k_4\}$, where $w_2k_1 \in E(G)$, then Staller plays $s_4 = k_1$ and creates a vertex-diamond trap $w_1 - K$.

1.ii.3.d. If $w_1h_3 \in E(G)$ and w_2 is adjacent to some triangle different from A , say R , with the vertex set $V(R) = \{r_1, r_2, r_3\}$ where $w_2r_2 \in E(G)$. Then, Staller plays $s_4 = r_2$ and forces $d_5 = w_1$. Next,

- if there is at least one edge between R and A , say a_3r_3 , then Staller plays $s_5 = a_3$ and creates a double trap $a_2 - r_1$. In her next move she isolates a_1 or r_3 .
 - if there are no edges between R and A , then R is adjacent to other diamonds and triangles. The vertices of these diamonds and triangles together with $V(W) \cup V(R)$ form one of the subgraphs G_1 , G_2 or G_3 . According to the lemmas 2.2, 2.3 and 2.4, Staller wins.
- So, G is \mathcal{S} .

1.ii.4 The vertex b_2 is adjacent to a triangle, say W , with the vertex set $V(W) = \{w_1, w_2, w_3\}$, where $b_2w_2 \in E(G)$ and the vertex b_3 is adjacent to a triangle, say Y , with the vertex set $V(Y) = \{y_1, y_2, y_3\}$, where $b_3y_3 \in E(G)$. The Staller's strategy is very similar to Staller's strategy in Theorem 1.2 for the Case 1.ii. So, the graph G is \mathcal{S} .

Case 2 $d_1 \in V(H)$ where H is a diamond with the vertex set $V(H) = \{h_1, h_2, h_3, h_4\}$ and the edge set $E(H) = \{h_1h_2, h_2h_3, h_3h_4, h_4h_1, h_2h_4\}$. Consider the following subcases.

2.i. At least one of the vertices h_1 or h_3 is adjacent to some diamond, or h_1 and h_3 are adjacent to the same triangle, say C .

Then, there exists at least one triangle, say B , which is not adjacent to H such that one of the cases from Figure 5 holds. The proof is the same as in Case 1.i.4. So, the graph G is \mathcal{S} .

2.ii. The vertex h_1 is adjacent to a triangle, say Y , with the vertex set $V(Y) = \{y_1, y_2, y_3\}$, where $h_1y_1 \in E(G)$ and the vertex h_3 is adjacent to a triangle, say W , with the vertex set $V(W) = \{w_1, w_2, w_3\}$, where $h_3w_1 \in E(G)$.

2.ii.1. There are two edges between Y and W . Let $y_2w_2, y_3w_3 \in E(G)$. Consider the MBTD game on the subgraph G_1 with the vertex set $V(Y) \cup V(W) \cup \{h_1, h_3\}$. By Lemma 2.2, Staller wins. So, G is \mathcal{S} .

2.ii.2. There is one edge between Y and W . Let $y_3w_3 \in E(G)$.

Suppose, first, that graph G contains only these two triangles Y and W . Consider the following cases:

2.ii.2.a. Triangle Y is adjacent to a diamond, say K , with the vertex set $V(K) = \{k_1, k_2, k_3, k_4\}$ and $E(K) = \{k_1k_2, k_2k_3, k_3k_4, k_4k_1, k_2k_4\}$. Let $y_2k_1 \in E(G)$.

2.ii.2.a.1. Let $w_2k_3 \in E(G)$. W.l.o.g. let $d_1 \in \{h_1, h_2, h_4\}$. In her first move Staller plays $s_1 = y_1$ which forces Dominator to claim a vertex from $V(K) \cup \{y_3\}$, as otherwise if Staller claims k_1 in her second move she will create a vertex-diamond trap

$y_3 - K$.

If $d_2 = y_3$, then $s_2 = w_3$ which forces $d_3 = y_2$, $s_3 = w_2$ which forces $d_4 = h_3$. Next, $s_4 = k_3$ and Staller creates a vertex-diamond trap $w_1 - K$.

Otherwise, if $d_2 = k_1$ (or $d_2 \in \{k_2, k_3, k_4\}$), then $s_2 = w_3$ which forces $d_3 = y_2$, $s_3 = w_2$ which forces $d_4 = h_3$. Next, $s_4 = w_1$ (or $s_4 = y_3$) and Staller creates a double trap $y_3 - k_3$ (or $k_1 - w_1$). In her next move Staller isolates either w_3 or w_2 (or, y_2 or w_3). So, G is \mathcal{S} .

2.ii.2.a.2. Otherwise, suppose that there exists at least one more diamond, say $M \neq K$ with the vertex set $V(M) = \{m_1, m_2, m_3, m_4\}$ adjacent to W , where $w_2 m_1 \in E(G)$. Staller plays in the following way:

$s_1 = m_1$ which forces $d_2 \in V(M) \setminus \{m_1\}$ (a diamond trap), $s_2 = w_3$ which forces $d_3 = w_1$ and $s_3 = y_1$ which forces $d_4 = y_2$. Next, $s_4 = k_1$ and Staller creates a vertex-diamond trap $y_3 - K$. Dominator can not win. So, G is \mathcal{S} .

Next, suppose that graph G contains at least four triangles. Consider some triangle B different from Y and W . One of the cases from Figure 5 must hold. The proof is the same as in Case 1.i.4. So, G is \mathcal{S} .

2.ii.3 There are no edges between Y and W .

Suppose, first, that graph G contains only these two triangles Y and W .

- Let K with the vertex set $V(K) = \{k_1, k_2, k_3, k_4\}$ be a diamond adjacent to Y where $y_2 k_1 \in E(G)$, and let M with the vertex set $V(M) = \{m_1, m_2, m_3, m_4\}$ be a diamond adjacent to W , where $w_2 m_1 \in E(G)$. If $y_3 k_3, w_3 m_3 \in E(G)$, then we have the graph η (see Figure 3). By Lemma 2.6, if $d_1 \in \{h_1, h_3\}$, Dominator wins in the D -game. Otherwise, Staller wins.
- Otherwise, at least one of the triangles Y, W is adjacent to two more diamonds (different from H). Let K and L be two diamonds with the vertex sets $V(K) = \{k_1, k_2, k_3, k_4\}$ and $V(L) = \{l_1, l_2, l_3, l_4\}$, respectively, such that $y_2 k_1, y_3 l_1 \in E(G)$. Staller plays on subgraph G_4 with the vertex set $V(Y) \cup V(K) \cup V(L)$. By Lemma 2.5, Staller wins. Statement also holds if $L = M$. So, G is \mathcal{S} .

Next, suppose that graph G contains at least four triangles. Consider some triangle B different from Y and W . One of the cases from Figure 5 must hold. The proof is the same as in Case 1.i.4. So, G is \mathcal{S} .

□

Before we give the proof for Theorem 1.5, we give the winning strategy Dominator in the MBTD game on $\mathcal{G}_1 = GP(n, 1)$ where $n \geq 3$. Note that it is already proven in [7] that $GP(n, 1)$ is \mathcal{D} (precisely, the authors considered the prism $P_2 \square C_n$, which is equivalent to $GP(n, 1)$). Here we give a shorter proof for that.

Claim 2.8. *MBTD game on $GP(n, 1)$, $n \geq 3$ is \mathcal{D} .*

Proof. Let $V(\mathcal{G}_1) = \{u_1, u_2, \dots, u_n, v_1, v_2, \dots, v_n\}$ and let $E(\mathcal{G}_1) = \{u_{i-1}u_i, v_{i-1}v_i | i \in \{2, \dots, n\}\} \cup \{u_1u_n, v_1v_n\} \cup \{u_iv_i | i \in \{1, \dots, n\}\}$.

If n is even, then $V(\mathcal{G}_1)$ can be partitioned into 4-sets, each inducing a C_4 . So, by Proposition 1.10, Dominator wins.

Let n be odd. Then, Dominator uses the pairing strategy where the pairs are (u_i, v_{i-1}) for $i \in \{2, \dots, n\}$ and (u_1, v_n) . We need to prove that this is his winning strategy. Suppose that at some point of the game we have a situation that Staller's set contains vertices u_i, u_{i+2}, v_{i+1} . This means that vertex u_{i+1} stays uncovered by Dominator. This is not possible, because when Staller claimed vertex u_{i+2} (or v_{i+1}), Dominator, according to his strategy, must claim vertex v_{i+1} (or u_{i+2}) and in this way he covers vertex u_{i+1} . A contradiction. \square

The proof of Theorem 1.5. Consider Generalized Petersen graph $\mathcal{G}_2 = GP(n, 2)$.

Let $n = 6$. Suppose that in his first move Dominator claims some vertex l which belongs to internal polygon (see Figure 6(a)). Staller responds with $s_1 = u$. We consider the following case.

Case 1. $d_2 \in \{z, t, v, w, y\}$.

Then, $s_2 = t_2$ which forces $d_3 = t_1$. By playing $s_3 = r_1$ Staller creates a double trap $r - r_2$. In her next move Staller isolates either r_2 or r .

Case 2. $d_2 = t_1$.

Then, $s_2 = z$ which forces $d_3 = w$ and $s_3 = t_2$ which forces $d_4 = y$. Next, $s_4 = r_1$ and Staller creates a double trap $r - r_2$. In her next move Staller isolates either r_2 or r .

Case 3. $d_2 = t_2$.

Then, $s_2 = z$ which forces $d_3 = w$. By playing $s_3 = r_2$ Staller creates a double trap $r - r_1$. In her next move Staller isolates either r_1 or r .

Case 4. $d_2 \in \{r, r_1, r_2\}$.

Then, $s_2 = z$ which forces $d_3 = w$. By playing $s_3 = t_2$ Staller creates a double trap $y - t_1$. In her next move Staller isolates either l or t .

Let $n = 7$ and suppose that $d_1 = l$ (see Figure 6(b)). Staller responds with $s_1 = u$. We consider the following case.

Case 1. $d_2 \in \{t, r, w, z, y_2\}$.

Then, $s_2 = t_1$ which forces $d_3 = t_2$ and $s_3 = r_1$ which forces $d_4 = r_2$. Next, $s_4 = v$ and Staller creates a double trap $y_3 - y_1$. In her next move Staller isolates either w or z .

Case 2. $d_2 \in \{v, t_1, t_2, y_3\}$.

Then, $s_2 = w$ which forces $d_3 = z$. By playing $s_3 = r_2$ Staller creates a double trap $r_1 - y_1$. In her next move Staller isolates either r or y_3 .

Case 3. $d_2 \in \{r_1, r_2, y_1\}$.

Then, $s_2 = w$ which forces $d_3 = z$, $s_3 = t$ which forces $d_4 = y_2$ and $s_4 = r$ which forces $d_5 = v$. Next, $s_5 = t_2$ and Staller creates a double trap $y_3 - t_1$. In her next move Staller isolates either r_2 or t .

Let $n = 8$ and suppose that $d_1 = l$ (see Figure 6(c)). Staller responds with $s_1 = u$. We consider the following cases:

Case 1. $d_2 \in \{v, t_1, t_2, y_5\}$.

Then, $s_2 = r_2$ which forces $d_3 = r_1$ and $s_3 = t$ which forces $d_4 = y_3$. Next, by playing $s_4 = w$ Staller creates a double trap $y_4 - z$. By claiming z or y_4 in her fifth move, Staller isolates either v or t_1 .

Case 2. $d_2 \in \{w, t, y_3, y_4, z\}$.

Then, $s_2 = t_1$ which forces $d_3 = t_2$ and $s_3 = r_1$ which forces $d_4 = r_2$. Next, by playing $s_4 = v$ Staller creates a double trap $y_1 - y_5$. By claiming y_5 or y_1 in her fifth move, Staller isolates either w or z .

Case 3. $d_2 \in \{r_1, r_2\}$.

Then, $s_2 = t_2$ which forces $d_3 = t_1$, $s_3 = r$ which forces $d_4 = y_2$ and $s_4 = t$ which forces $d_5 = v$. Next, by playing $s_5 = w$ Staller creates a double trap $y_4 - z$. By claiming z or y_4 in her sixth move, Staller isolates v or t_1 .

Case 4. $d_2 \in \{r, y_1, y_2\}$.

Then, $s_2 = r_2$ which forces $d_3 = r_1$ and $s_3 = t$ which forces $d_4 = y_3$. Next, by playing $s_4 = w$ Staller creates a double trap $y_4 - z$. By claiming z or y_4 in her fifth move, Staller isolates v or t_1 .

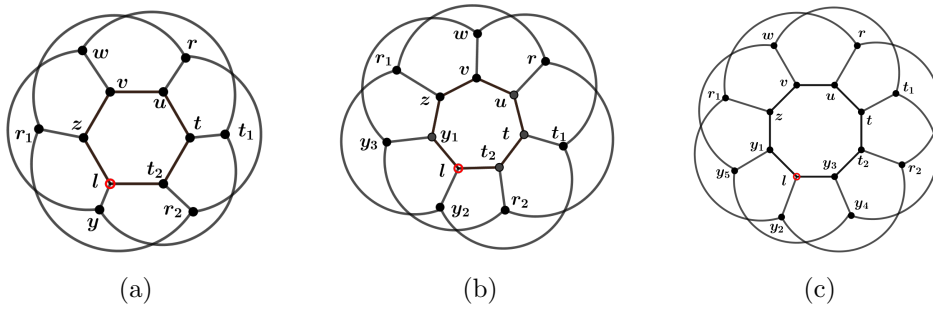


Figure 6: (a) Generalized Petersen graph $GP(6, 2)$ (b) Generalized Petersen graph $GP(7, 2)$ (c) Generalized Petersen graph $GP(8, 2)$

Consider Generalized Petersen graph $\mathcal{G}_2 = GP(n, 2)$ where $n \geq 9$. Suppose that in his first move Dominator claims some vertex l which belongs to internal polygon (see Figure 7(a)). Consider subgraph $\tau \subseteq \mathcal{G}_2$ with the vertex set $\{u, v, w, z, t, t_1, t_2, r_1, r_2, y_1, y_2, y_3, y_4, y_5, y_6\}$

where the vertices u and v are at distance 4 from the vertex l on the internal polygon. The subgraph τ is illustrated in Figure 7(b). In her first move Staller claims $s_1 = u$. It is enough to consider the cases when $d_2 \in \{v, w, t, t_1, t_2, y_4, y_5, y_6\}$.

Case 1. $d_2 \in \{w, t, y_4, y_5\}$.

Then, $s_2 = t_1$ which forces $d_3 = t_2$ and $s_3 = r_1$ which forces $d_4 = r_2$. Next, by playing $s_4 = v$ Staller creates a double trap $y_1 - y_6$. In her next move Staller isolates either w or z by claiming y_6 or y_1 .

Case 2. $d_2 = \{v, t_1, t_2, y_6\}$.

Then, $s_2 = r_2$ which forces $d_3 = r_1$ and $s_3 = t$ which forces $d_4 = y_4$. Next, by playing $s_4 = w$ Staller creates a double trap $y_5 - z$. In her next move Staller isolates either t_1 or v by claiming y_5 or z .

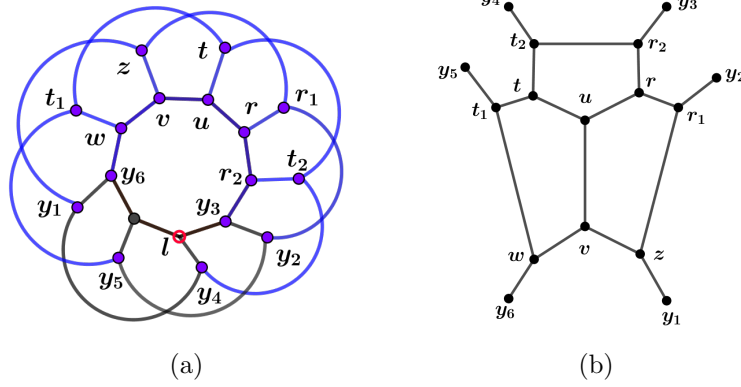


Figure 7: (a) Generalized Petersen graph $GP(9, 2)$ (b) subgraph τ

□

The proof of Theorem 1.6. Consider the cubic bipartite graph on n vertices with the vertex set $\{u_1, \dots, u_{n/2}, v_1, \dots, v_{n/2}\}$. Let $V_1 = \{u_1, \dots, u_{n/2}\}$ and $V_2 = \{v_1, \dots, v_{n/2}\}$ be a bipartition of the graph. Add an edge from each u_i to v_i, v_{i+1} and v_{i+2} (with indices modulo $n/2$).

W.l.o.g. suppose that $s_1 = u_i \in V_1$, for some $i \in \{1, 2, \dots, n/2\}$. Then $d_1 = u_{i-1} \in V_1$, modulo $n/2$. Note that every two vertices u_{i-1} and u_i from V_1 have two common neighbours in V_2 , v_i and v_{i+1} (and every two $v_{i-1}, v_i \in V_2$ have two common neighbours in V_1 , u_{i-1}, u_{i-2}). In every other round $r \geq 2$, Dominator plays in the following way. If Staller claims a vertex which is a common neighbour of two vertices, say u_{k-1} and u_k such that for example, $u_{k-1} \in \mathfrak{D}$ and $u_k \in \mathfrak{S}$, then Dominator responds by claiming the other common neighbour of these two vertices. Otherwise, if Staller claimed some vertex u_l (or v_l) which is not common neighbour of any two vertices, $x, y \in V_k$, for some $k \in \{1, 2\}$, such that, for example, $x \in \mathfrak{D}$ and $y \in \mathfrak{S}$, then Dominator claims a free vertex u_{l-1} or u_{l+1} , with preference

u_{l-1} (or, v_{l-1} or v_{l+1} with preference v_{l-1}) modulo $n/2$. If Dominator can not find such a free vertex, he claims an arbitrary free vertex from the graph with the preference that a vertex is a neighbour of vertex which is already claimed by him in some point of the game.

We prove that this is a winning strategy for Dominator. Suppose that $v_i, v_{i+1}, v_{i+2} \in \mathfrak{S}$ for some $i \in \{1, 2, \dots, n/2\}$ modulo $n/2$, that is, Staller isolated vertex u_i . This means that when Staller claimed v_i , Dominator responded with v_{i-1} , but then when Staller claimed v_{i+1} (or v_{i+2}), according to his strategy Dominator had to take v_{i+2} (or v_{i+1}). A contradiction. \square

The proof of Theorem 1.7. The graph G is a connected cubic graph on $4k$ vertices formed with $k \geq 2$ disjoint claws \mathcal{C}_i , $i \in \{1, \dots, k\}$. Let $V(\mathcal{C}_i) = \{x_i, y_i, z_i, t_i\}$, where t_i is a center of \mathcal{C}_i , for every $i \in \{1, \dots, k\}$.

First, suppose that $k = 2$. Let $E(G) = E(G[\mathcal{C}_1]) \cup E(G[\mathcal{C}_2]) \cup \{x_1x_2, y_1y_2, z_1z_2, x_1y_2, y_1z_2, z_1x_2\}$.

The graph can be partitioned into two 4-sets, $\{x_1, t_1, y_1, y_2\}$ and $\{z_1, z_2, t_2, x_2\}$ each inducing a C_4 (see Figure 8(a)). By Proposition 1.10 and Proposition 1.9, Dominator wins.

Let $k = 3$. Let $E(G) = E(G[\mathcal{C}_1]) \cup E(G[\mathcal{C}_2]) \cup E(G[\mathcal{C}_3]) \cup \{x_{i-1}x_i, y_{i-1}y_i, z_{i-1}z_i \mid i \in \{2, 3\}\} \cup \{x_1x_3, y_1y_3, z_1z_3\}$.

It is enough to consider the case when $d_1 \in V(\mathcal{C}_1)$. The cases when $d_1 \in V(\mathcal{C}_2)$ or $d_1 \in V(\mathcal{C}_3)$ are symmetric.

Case 1. $d_1 = x_1$.

Then, $s_1 = t_1$. After Dominator's second move either all vertices from \mathcal{C}_2 are free or all vertices from \mathcal{C}_3 are free. Suppose that all vertices from \mathcal{C}_3 are free. Also, at least two of the vertices x_2, y_2, z_2 must be free. Suppose that x_2 and z_2 are free. Then, $s_2 = z_3$ which forces $d_3 = z_2$. By $s_3 = x_3$ Staller creates a double trap $x_2 - y_3$. In her next move Staller isolates either x_1 or t_3 .

If $d_1 \in \{y_1, z_1\}$, the proof is very similar.

Case 2. $d_1 = t_1$.

Then, $s_1 = t_2$.

Case 2.1. $d_2 = t_3$. Then, $s_2 = z_3$ which forces $d_3 = z_1$. By playing $s_3 = x_3$, Staller creates a double trap $x_1 - y_3$. In her fourth move Staller isolates either x_2 or t_3 .

Case 2.2. $d_2 \in \{x_i, y_i, z_i\}$, $i \in \{1, 2, 3\}$.

Let $d_2 = x_i$. If $i = 1$, then Staller will make her next move on \mathcal{C}_3 and she will force Dominator to play his next move on \mathcal{C}_1 , if $i = 3$, Staller will make her next move on \mathcal{C}_1 and force Dominator to play on \mathcal{C}_3 . If $i = 2$, then she can make her next move either on \mathcal{C}_1 or \mathcal{C}_3 .

Suppose that $d_2 = x_1$. Then, $s_2 = z_3$ which forces $d_3 = z_1$. By playing $s_3 = y_3$ Staller creates a double trap $y_1 - x_3$. In her fourth move Staller isolates either

y_2 or t_3 .

The proof is very similar if $d_2 = y_i$ or $d_2 = z_i$, $i \in \{1, 2, 3\}$.

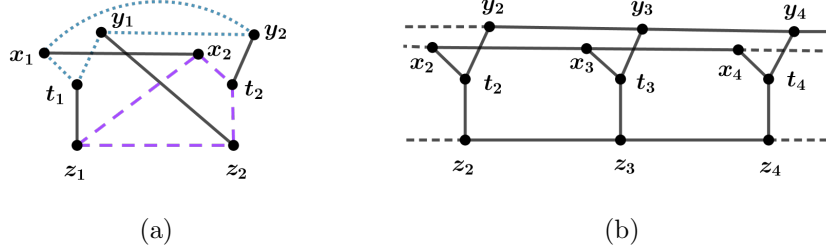


Figure 8: (a) Two claws (b) Three consecutive claws

Let $k \geq 4$. After Dominator's first move, Staller can find three consecutive claws \mathcal{C}_{i-1} , \mathcal{C}_i , \mathcal{C}_{i+1} such that all vertices from these three claws are free. Suppose that these three claws are $\mathcal{C}_2, \mathcal{C}_3$ and \mathcal{C}_4 . Staller will play on a subgraph with the vertex set $V(\mathcal{C}_2), V(\mathcal{C}_3) \cup V(\mathcal{C}_4)$, and the edge set $E(G[\mathcal{C}_2]) \cup E(G[\mathcal{C}_3]) \cup E(G[\mathcal{C}_4]) \cup \{x_{i-1}x_i, y_{i-1}y_i, z_{i-1}z_i | i \in \{3, 4\}\}$ (Figure 8(b)). In her first move Staller plays $s_1 = t_3$.

If $d_2 \in V(\mathcal{C}_2)$, then Staller will make her next move on \mathcal{C}_4 and she will force Dominator to play his next move on \mathcal{C}_2 , if $d_2 \in V(\mathcal{C}_4)$, Staller will make her next move on \mathcal{C}_2 and force Dominator to play on \mathcal{C}_4 . If $d_2 \in V(\mathcal{C}_3)$, then she can make her moves either on \mathcal{C}_2 or \mathcal{C}_4 . Suppose that $d_2 \in V(\mathcal{C}_2) \cup V(\mathcal{C}_3)$.

Let $d_2 = x_2$. Then, $s_2 = z_4$ which forces $d_3 = z_2$. By playing $s_3 = y_4$ Staller creates a double trap $y_2 - x_4$. In her next move she isolates either y_3 or t_4 .

The cases when $d_2 \in \{y_2, z_2, t_2\}$ are symmetric. If $d_2 \in \{x_3, y_3, z_3\}$, Staller can apply the same strategy. \square

Remark 2.9. Note that if in the D -game on the connected cubic graph G on $n \geq 6$ vertices after Dominator's first move Staller can find at least one of the subgraphs G_1 , G_4 , τ , or subgraph which consists of three consecutive connected claws as in Figure 8(b), such that all vertices from that subgraph are free, then the graph G is \mathcal{S} .

3 Concluding remarks

In this paper we considered several types of connected cubic graphs in MBTD game and determined which are \mathcal{D} and which are \mathcal{S} . In order to determine the outcome of the game, we have focused on finding a representative subgraph of the given graph. Related to this, another interesting type of subgraph of the cubic graph G on which Staller wins as the first player in the MBTD game is the following graph, which will be denoted by Q .

Graph Q . Let Q be a subgraph of the graph G which consists of two even cycles C_l and C_m with the vertex sets $V(C_l) = \{x_1, x_2, \dots, x_l\}$ and $V(C_m) = \{y_1, y_2, \dots, y_m\}$,

respectively, where $E(C_l) = \{x_i x_{i+1} | i \in \{1, 2, \dots, l-1\}\} \cup \{x_l x_1\}$ and $E(C_m) = \{y_i y_{i+1} | i \in \{1, 2, \dots, m-1\}\} \cup \{y_m y_1\}$ for $l, m \geq 4$. Suppose that between C_l and C_m there is a path P with the vertex set $V(P) = \{u_1, u_2, \dots, u_t\}$, where $t \geq 1$ is odd. Suppose that for each $k \in \{1, 3, 5, \dots, t\}$ there exist a different vertex v_k , such that $u_k v_k \in E(G)$. Let $x_1 u_1, y_1 u_t \in E(G)$. If $l > 4$, then for every two $x_{i+2}, x_{i+4} \in C_l$, for $i \in \{0, \dots, l-2\}$ there exists a different neighbour $x'_{i+2} \in N_G(x_{i+2})$ and $x'_{i+4} \in N_G(x_{i+4})$. Also, if $m > 4$, then for every two $y_{i+2}, y_{i+4} \in C_m$, for $i \in \{0, \dots, m-2\}$ there exists a different neighbour $y'_{i+2} \in N_G(y_{i+2})$ and $y'_{i+4} \in N_G(y_{i+4})$.

Staller's strategy in the S -game is illustrated in Figure 9(a) and 9(b) where $l = 6$, $m = 8$ and $t = 5$.

If x_1 lies on diamond, then in his first move Dominator is forced to claim a vertex from that diamond. In the following, Staller uses the strategy illustrated in Figure 9(b).

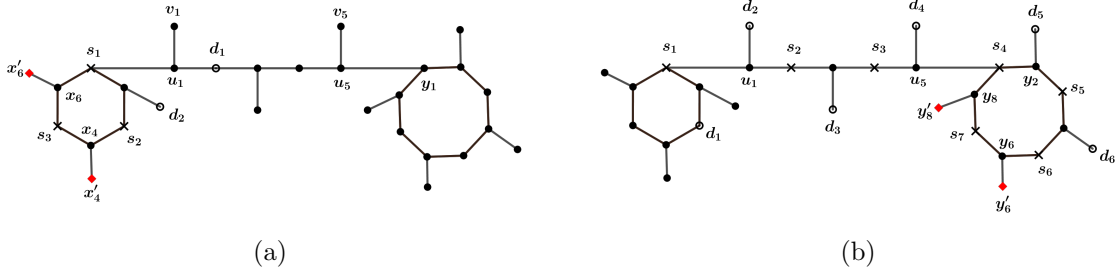


Figure 9: Staller's strategy in the S -game on Q when (a) $d_1 \in V(P) \cup V(C_8)$ (b) $d_2 \in V(C_6)$. Vertices claimed by Dominator are denoted by cycles and vertices claimed by Staller by crosses. Traps are denoted by red squares.

As we can see from this paper, finding a suitable subgraph makes it easier to determine the winner of the game and helps in characterization of cubic connected graphs. However, we have not covered all connected cubic graphs, so there are still open problems related to this topic. Therefore, it would be interesting to find some other subgraphs that could contribute to expanding the class of cubic connected graphs for which the winner is known in MBTD game.

Biased games. We are curious to know what will happen in the *biased* setup of MBTD game. Given two positive integers, a and b , representing the *biases* of Staller and Dominator, respectively, in the biased $(a : b)$ MBTD game, Staller claims exactly a and Dominator claims exactly b elements of the board in each move. Now, if the biases of the players are the same, i.e. *fair* $(a : a)$ game, for $a \geq 2$, we wonder whether the outcome of the games change compared to the outcome of the $(1 : 1)$ MBTD games that were previously studied.

Finally, we wonder how the situation changes if biased non-fair $(a : b)$ MBTD games are played, i.e. the games in which $a \neq b$.

References

- [1] J. Beck, **Combinatorial Games: Tic-Tac-Toe Theory**, Encyclopedia of Mathematics and Its Applications 114, Cambridge University Press, (2008).
- [2] B. Brešar, S. Klavžar and D. F. Rall, *Domination game and an imagination strategy*, SIAM J. Discrete Math., 24 (2010), pp. 979–991.
- [3] Cs. Bujtaš, *On the game domination number of graphs with given minimum degree*, Electron. J. Combin. 22 (2015) #P3.29.
- [4] P. Dorbec, G. Košmrlj, G. Renault, *The domination game played on unions of graphs*, Discrete Math. 338 (2015) 71–79.
- [5] E. Duchêne, V. Gledel, A. Parreau and G. Renault, *Maker-Breaker domination game*, arXiv:1807.09479 [cs.DM] (25 Jul 2018).
- [6] P. Erdős and J. L. Selfridge, *On a combinatorial game*, J. Combinatorial Theory Ser. A 14 (1973) pp. 298–301.
- [7] V. Gledel, M.A. Henning, V. Iršič and S. Klavžar, *Maker-Breaker total domination game*, Discrete Applied Mathematics, 282 (2020) pp. 96–107.
- [8] V. Gledel, V. Iršič and S. Klavžar, *Maker-Breaker domination number*, Bulletin of the Malaysian Mathematical Sciences Society, 42(4) (2019), pp. 1773–1789.
- [9] D. Hefetz, M. Krivelevich, M. Stojaković and T. Szabó, **Positional Games**, Oberwolfach Seminars 44, Birkhäuser/Springer Basel, 2014.
- [10] R. R. Korfhage, **Discrete Computational Structures**, Academic Press, New York, second edition (1984).
- [11] M. E. Watkins, *A theorem on Tait colorings with an application to the generalized Petersen graphs*, Journal of Combinatorial Theory, 6(4) (1969) pp. 152–164.