

Phylogenetic Networks

Elizabeth Gross, Colby Long, and Joseph Rusinko

Abstract Phylogenetics is the study of the evolutionary relationships between organisms. One of the main challenges in the field is to take biological data for a group of organisms and to infer an evolutionary tree, a graph that represents these relationships. Developing practical and efficient methods for inferring phylogenetic trees has led to a number of interesting mathematical questions across a variety of fields. However, due to hybridization and gene flow, a phylogenetic network may be a better representation of the evolutionary history of some groups of organisms. In this chapter, we introduce some of the basic concepts in phylogenetics, and present related research projects on phylogenetic networks that touch on areas of graph theory and abstract algebra. In the first section, we describe several open research questions related to the combinatorics of phylogenetic networks. In the second, we describe problems related to understanding phylogenetic statistical models as algebraic varieties. These problems fit broadly in the realm of algebra, but could be more accurately classified as problems in *algebraic statistics* or *applied algebraic geometry*.

Suggested prerequisites. *An introductory course in graph theory or discrete mathematics for the research projects in Section 2. For the projects in Section 3, an introductory course in abstract algebra would also be helpful.*

E. Gross

University of Hawai'i at Mānoa, 2565 McCarthy Mall, Honolulu, HI 96822, e-mail: egross@hawaii.edu

C. Long

Mathematical Biosciences Institute, 1735 Neil Ave, Columbus, OH 43210, e-mail: long.1579@mbi.osu.edu

J. Rusinko

Hobart and William Smith Colleges, 300 Pulteney Street, Geneva, NY 14456, e-mail: rusinko@hws.edu

1 Introduction.

The field of phylogenetics is concerned with uncovering the evolutionary relationships between species. Even before Darwin proposed evolution through variation and natural selection, people used family trees to show how individuals were related to one another. Since Darwin's theory implies that all species alive today are descended from a common ancestor, the relationships among any group of individuals, even those from different species, can similarly be displayed on a phylogenetic tree. Thus, the goal of phylogenetics is to use biological data for a collection of individuals or species, and to infer a tree that describes how they are related. In modern phylogenetics, the biological data that we consider is most often the aligned DNA sequences for the species under consideration. Understanding how species have evolved has important applications in evolutionary biology, species conservation, and epidemiology [36].

Perhaps unsurprisingly, there is a rich interplay between phylogenetics and mathematics. A tree can be viewed as a certain type of graph, and graph theory is an entire field of mathematics dedicated to understanding the structure and properties of graphs. Similarly, DNA mutation is a random process, and understanding random processes falls in the domain of probability and statistics. As such, there are many mathematical tools that have been developed for doing phylogenetic inference. Often, developing a new tool or trying to answer a novel question in phylogenetics requires solving some previously unsolved mathematical problem. It is also common for a phylogenetic problem to suggest a mathematical problem that is interesting in its own right.

The outline above, where every set of species is related by a phylogenetic tree, is a simplified description of the evolutionary process. Rarely does the evolutionary history for a set of species neatly conform to this story. Instead, species hybridize and swap genes. Moreover, genes within individuals have their own unique evolutionary histories that can differ from that of the individuals in which they reside [29, 44]. The result is that in many cases, a tree is simply insufficient to represent the evolutionary process. Recognizing this, many researchers have argued that networks can be a more appropriate way to represent evolution. While using networks might be more realistic from a biological standpoint, there are many complexities and new mathematical questions that must be solved in order to infer phylogenetic networks. In particular, understanding inference for networks requires proving results for networks analogous to those known for trees. The projects that we present in this chapter are examples of some of the new lines of inquiry inspired by using networks in phylogenetics.

The first category of problems that we describe concern the combinatorics of phylogenetic networks. Inferring phylogenies for large sets of species can often be computationally intensive regardless of the method chosen. One approach for dealing with this in the tree setting is to consider small subsets of species one at a time. Once phylogenetic trees have been built for each subset, the small trees are then assembled to construct the tree for the entire set of species. The details of actually doing this can of course become quite complicated. Thus, different heuristics and

algorithms have been proposed, and understanding their performance and properties leads to a number of interesting questions about the combinatorics of trees. As a first example, one might consider if it is even possible to uniquely determine the species tree for a set of species only from knowledge of how each subset of a certain size is related. Even if this is possible, one then might like to know how to resolve contradictions between subtrees if there is error in the inference process. Adopting a similar strategy for inferring phylogenetic networks from subnetworks leads to a host of similar combinatorial questions about networks. In Section 2, we will explore the structure of phylogenetic networks in greater depth and formulate some of these questions more precisely for potential research projects.

The second class of problems we discuss concerns the surprising connections between abstract algebra and phylogenetics. One of the ways that researchers have sought to infer phylogenies is by building models of DNA sequence evolution on phylogenetic trees. Once the tree parameter is chosen, the numerical parameters of the model control the rates and types of mutations that can occur as evolution proceeds along the tree. Once all the parameters for the model are specified, the result is a probability distribution on DNA site-patterns. That is, the model predicts the frequency with which different DNA site-patterns will appear in the aligned DNA sequences of a set of species. For example, the model might predict that at the same DNA locus for three species, there is a 5% chance that the DNA nucleotide A is at that locus in each species. Another way to write this is to write that for this choice of parameters, $p_{AAA} = .05$. Algebra enters the picture when we start to consider the algebraic relationship between the predicted sight pattern frequencies. For example, we might find that for a particular model on a tree T , no matter how we choose the numerical parameters the probability of observing ACC under the model is always the same as the probability of observing GTT. We can express this via the polynomial relationship $p_{ACC} - p_{GTT} = 0$, and polynomials that always evaluate to zero on the model we call *phylogenetic invariants* [8] for the model on T .

The set of all phylogenetic invariants for a model is an algebraic object called an *ideal*. By studying the ideals and invariants associated to phylogenetic models, researchers have been able to prove various properties of the models, such as their dimension and whether or not they are identifiable, as well as to develop new methods for phylogenetic inference (see e.g., [2, 7, 9, 34]). As with some of the combinatorial questions above, there are a number of papers studying these questions in the case of trees, but few in the case of networks. In Section 3, we show how to associate invariants and ideals to phylogenetic networks and describe several related research projects. While there are fascinating connections between these algebraic objects and statistical models of DNA sequence evolution, our presentation distills some of the background material and emphasizes the algebra. There is also a computational algebra component to some of these projects and we provide example computations with Macaulay2 [17] code.

2 Combinatorics of Phylogenetic Networks

In this section, we give the background necessary to work on the research and challenge questions related to the structure of phylogenetic networks. We begin by introducing some of the concepts from graph theory necessary to formally define a phylogenetic tree and a phylogenetic network. We then discuss some ways to encode trees and networks and common operations that we can perform on them. Much of the terminology around trees and graphs is standard in graph theory, and so we have omitted some of the basic definitions that can be found in the first chapter of any text on the subject. An affordable and helpful source for more information and standard graph theoretic results would be [10]. The terms that are specific to phylogenetic trees and networks we have adapted largely from [16, 35]. The textbook [22] provides a thorough introduction to phylogenetic networks, though the specific terminology being used in the research literature is still evolving. A broader introduction to phylogenetics from a mathematical perspective can be found in [39].

2.1 Graphs and Trees

The outcome of a phylogenetic analysis is typically a phylogenetic tree, a graph that describes the ancestry for a set of taxa. As an example, an interactive phylogenetic tree relating hundreds of different species can be accessed at

<https://itol.embl.de/itol.cgi>.

In mathematical terms, a *tree* is a connected graph with no cycles. We refer to the degree one vertices of a tree as the *leaves* of the tree. The leaves correspond to the extant species for which we have data in a phylogenetic analysis and so we label these vertices by some label set. In theoretical applications, the label set for an n -leaf tree is often just the set $[n] := \{1, \dots, n\}$, and we call such a tree an *n -leaf phylogenetic tree*. Note that we consider two n -leaf phylogenetic trees to be distinct even if they differ only by the labeling of the leaves. In technical terms, two n -leaf trees are the same if and only if there is a graph isomorphism between them that also preserves the leaf-labeling.

We often distinguish one special vertex of an n -leaf phylogenetic tree which we call the *root*. If the root is specified, then the tree can be regarded as a directed graph, where all edges point away from the root. The root corresponds to the common ancestor of all of the species of the tree, hence, the directed edges can be thought of as indicating the direction of time. We also often restrict the set of trees we consider to those that are *binary*. A binary tree is one in which every vertex other than the root has degree one or degree three. If the root is specified for a binary tree, then it will have degree two. We use these rooted binary phylogenetic trees as a model of evolution. The degree three internal vertices correspond to speciation events, where there is one species at the time just prior to the vertex, and two species that emerge from the vertex.

Depending on the application, it is common in phylogenetics to consider both rooted and unrooted trees. As such, we can think about *rooting* a tree, where we place a degree two vertex along an edge and direct the edges away from this vertex (so that there is a directed path from the root to every vertex in the graph). Or, we can think about *unrooting* a tree, where we suppress the degree two vertex (see the trees in Figure 1). As an example, there is only one 3-leaf binary phylogenetic tree, however, there are three different rooted 3-leaf binary phylogenetic trees that can be obtained by rooting along the three different edges of the unrooted tree.

Example 1. Figure 1 shows a rooted 4-leaf binary phylogenetic tree and the tree obtained by unrooting this tree. Notice that the edges of the rooted tree are directed, but that this is unnecessary since the root determines the direction of each edge. Also observe that if we root the unrooted tree along the edge labeled by 1, we obtain the rooted tree at left. Finally, notice that swapping the labels 1 and 3 in the rooted tree produces a distinct rooted 4-leaf binary phylogenetic tree, whereas for the unrooted tree, swapping these labels leaves the tree unchanged.

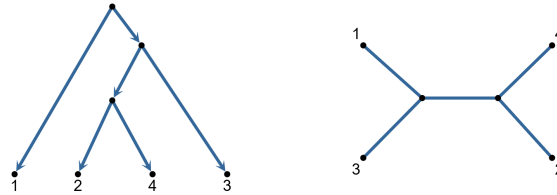


Fig. 1 A rooted 4-leaf binary phylogenetic tree and the tree obtained by unrooting this tree.

Exercise 1. How many edges are there in an n -leaf rooted binary phylogenetic tree?

Exercise 2. Prove that there exists a unique path between any pair of vertices in a tree.

Exercise 3. Prove that the number of rooted binary phylogenetic n -trees is $(2n - 3)!!$. Here the symbol $!!$ does not mean the factorial of the factorial, but rather multiplying by numbers decreasing by two. For example, $7!! = 7 \times 5 \times 3 \times 1 = 105$ and $10!! = 10 \times 8 \times 6 \times 4 \times 2 = 3840$.

Each edge of an unrooted phylogenetic tree subdivides the collection of leaves into a pair of disjoint sets. This pair is called a split. For example the unrooted tree in Figure 1 displays the splits $S = \{1|234, 2|134, 3|124, 4|123, 13|24\}$.

Exercise 4. Draw an unrooted tree with the set of splits

$$S = \{1|23456, 2|13456, 3|12456, 4|12356, 5|12346, 6|12345, 13|2456, 135|246, 46|1235\}.$$

Challenge Problem 1. Prove that two unrooted phylogenetic trees are isomorphic if and only if they display the same set of splits.

2.2 Phylogenetic Networks

As mentioned in the introduction, a tree might not always be sufficient to describe the history of a set of species. For example, consider the graphs depicted in Figure 3. Notice that there are vertices in these graphs with in-degree two and out-degree one. There are a few ways that we might interpret these *reticulation events*. It could be that two distinct species entered the vertex, and only one, their hybrid, emerged. Or, it might be that one of the edges directed into the degree two vertices represents a gene flow event where species remain distinct but exchange a small amount of genetic material. If we undirect all of the edges of either of these graphs, the result is clearly not a tree since the resulting undirected graph contains a cycle. In fact, this is a phylogenetic network. A more thorough introduction to phylogenetic networks than we offer here can be found in [22, 31]. The website “Who’s who in phylogenetic networks” [1] is also an excellent resource for discovering articles and authors in the field.

Definition 1. A phylogenetic network N on a set of leaves $[n]$ is a rooted acyclic directed graph with no edges in parallel (i.e. no multiple edges) and satisfying the following properties:

- (i) The root has out-degree two.
- (ii) The only vertices with out-degree zero are the leaves $[n]$ and each of these have in-degree one.
- (iii) All other vertices either have in-degree one and out-degree two, or in-degree two and out-degree one.

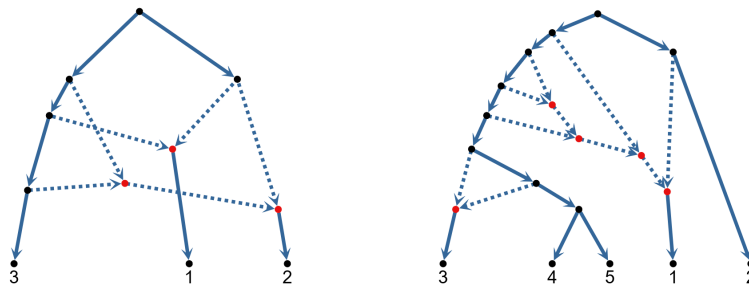


Fig. 2 Two rooted binary phylogenetic networks.

In the preceding definition, the term acyclic refers to the fact that the network should contain no *directed* cycles. The vertices of in-degree two are called the *reticulation vertices* of the network since they correspond to reticulation events. Likewise, the edges that are directed into reticulation vertices are called *reticulation edges*. Observe that the set of rooted binary phylogenetic trees are subset of the set of phylogenetic networks.

Exercise 5. For what $m \in \mathbb{N}$ is it possible to draw a rooted 3-leaf phylogenetic network with exactly m edges?

Exercise 6. Show that there are an infinite number of rooted n -leaf phylogenetic networks.

The ability of phylogenetic networks to describe more complicated evolutionary histories comes at a cost in that networks can be much more difficult to analyze. Since there are infinitely many phylogenetic networks versus only finitely many phylogenetic trees, selecting the best network to describe a set of species is particularly challenging. Because there are so many networks, it is often desirable to consider only certain subclasses of phylogenetic networks depending on the particular application. One way to restrict the class of networks is by considering only networks with a certain number of reticulations or those of a certain *level*. The concept of the level of a network, introduced in [25], relies on the definition of a *biconnected component* of a graph.

Definition 2. A graph G is *biconnected* (or 2-connected) if for every vertex $v \in V(G)$, $G - \{v\}$ is a connected graph. The *biconnected components* of a graph are the maximal biconnected subgraphs.

Definition 3. The *reticulation number* of a phylogenetic network is the total number of reticulation vertices of the network. The *level* of a rooted phylogenetic network is the maximum number of reticulation vertices in a biconnected component (considered as an undirected graph) of the network.

Exercise 7. What is the reticulation number of the two phylogenetic networks pictured in Figure 3? What are the biconnected components of each network? What are the levels of the two networks?

Exercise 8. Suppose that you remove one reticulation edge from each pair of edges directed into a reticulation vertex in a phylogenetic network. Show that if you undirect the remaining edges the result is a connected, acyclic graph.

Exercise 9. How many 3-leaf rooted phylogenetic networks with a single reticulation vertex are there?

2.3 *Semi-directed Networks*

Whether we work with rooted or unrooted phylogenetic trees or networks depends upon the particular application. As an example, for some statistical models of DNA sequence evolution, the models for two distinct rooted trees will be the same if the trees are the same when unrooted. Thus, when working with such models, there is no basis for selecting one location of the root over any other, and so we only concern ourselves with unrooted trees.

Rooting a tree is one way of assigning a direction to each of its edges. When constructing evolutionary models associated to phylogenetic networks it can occur that the direction of some edges can be distinguished by the model, but that the directions associated to other edges can not. Thus it makes sense to consider the class of unrooted networks in which some of the edges are directed which are known as *semi-directed* networks.

For certain algebraic models of evolution, the models will not necessarily be the same if the unrooted phylogenetic network parameters are the same. However, they will be if the underlying *semi-directed topology* of the networks is the same.

Definition 4. The *semi-directed topology* of a rooted phylogenetic network is the semi-directed network obtained by unrooting the network and undirecting all non-reticulation edges.

Because of the increasing importance of networks in phylogenetics, several authors have investigated the combinatorics of both rooted and unrooted phylogenetic networks (e.g., [16, 33, 23]). The semi-directed topology has recently appeared in some applications [18, 38], but the combinatorics of these networks have received comparatively little attention.

Of course, the semi-directed networks that we are interested in are those that actually correspond to the semi-directed topology of a rooted phylogenetic network, which we call *phylogenetic semi-directed networks*. An edge in a phylogenetic semi-directed network is a *valid root location* if the network can be rooted along this edge and orientations chosen for the remaining undirected edges to yield a rooted phylogenetic network.

Example 2. Figure 3 shows three semi-directed networks. The 3-leaf semi-directed network is a phylogenetic semi-directed network, which can be seen by noting that it is the semi-directed topology of the 3-leaf network in Figure 2. The 4-leaf semi-directed network is not a phylogenetic semi-directed network. Notice that there is no way to orient the edge connecting the reticulation vertices without creating vertices of in-degree 3 and out-degree 3, violating the conditions of Definition 1. The 6-leaf network is also a phylogenetic semi-directed network (Exercise 11).

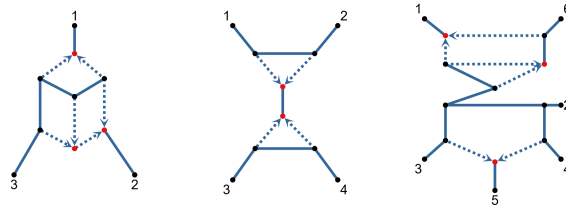


Fig. 3 A 3-leaf phylogenetic semi-directed network, a 4-leaf semi-directed network that is not phylogenetic, and a 6-leaf phylogenetic semi-directed network.

Exercise 10. Find all of the valid root locations for the 3-leaf phylogenetic semi-directed network in Figure 3.

Exercise 11. Show that the 6-leaf semi-directed network in Figure 3 is a phylogenetic semi-directed network. Find all of the valid root locations.

Exercise 12. Draw the semi-directed topology of the 5-leaf rooted phylogenetic network in Figure 3.

Exercise 13. How many 4-leaf semi-directed networks with a single reticulation are there?

Exercise 14. Show that there is no way to direct any of the existing undirected edges in the semi-directed network in Figure 4 below to obtain a phylogenetic semi-directed network.

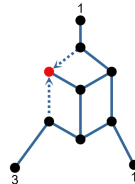


Fig. 4 The semi-directed network referenced in Exercise 14.

Exercise 15. Find a formula for the reticulation number of a phylogenetic semi-directed network in terms of the number of leaves and edges of the network.

Exercise 16. Consider the semi-directed topology of the rooted 5-leaf network in Figure 2. How many different rooted phylogenetic networks share this semi-directed topology?

Challenge Problem 2. Prove or provide a counterexample to the following statement. It is impossible for two distinct phylogenetic semi-directed networks to have the same unrooted topology and the same set of reticulation vertices (i.e., to differ only by which edges are the reticulation edges).

As a hint for this challenge problem, consider the 3-leaf phylogenetic semi-directed network in Figure 3. Two of the reticulation vertices are incident to leaf edges in the network. As a first step, it may be helpful to consider whether or not there is any way to reorient the edges into one of these vertices so that it is still a reticulation vertex and so that the network remains a phylogenetic semi-directed network.

Challenge Problem 3. Find an explicit formula for the number of semi-directed networks with a single reticulation vertex and n leaves.

Research Project 1. Find an explicit formula for the number of level-1 semi-directed networks with n leaves and m reticulation vertices. Can you generalize this formula to level- k networks with n leaves and m reticulation vertices?

For Research Project 1, the level of a semi-directed network is defined in terms of the unrooted, undirected topology just as for phylogenetic networks. Thus, any phylogenetic network and its semi-directed topology will have the same level. A starting point would be to look for patterns in small families of trees or networks. To begin thinking about proof techniques you might examine the proofs of the number of rooted trees with n leaves, or perhaps the number of distinct unlabeled tree topologies with n leaves. Chapter three of Felsenstein's book *Inferring Phylogenies* provides some intuition about tree counting [15].

Challenge Problem 4. Find necessary and sufficient conditions for a semi-directed network to be a phylogenetic semi-directed network.

Research Project 2. Determine a method or algorithm for counting valid root locations in a phylogenetic semi-directed network (i.e., count the number of rooted networks corresponding to a particular semi-directed network).

By definition, a phylogenetic semi-directed network must have at least one valid root location. A simple, though extremely inefficient algorithm for finding all valid root locations would be to check all edges as root locations and then all possible orientations for the other edges. To improve on this naive algorithm, you might start by considering each reticulation vertex one at a time. Does a single pair of reticulation edges place restrictions on the possible valid root locations?

It also might be helpful to have an efficient representation of a phylogenetic semi-directed network. Since a phylogenetic semi-directed network is just a special type of graph, it can be represented by an *adjacency matrix*. There are some subtleties involved in constructing this matrix for a semi-directed network, as there are both directed and undirected edges. Still, it could be useful to construct a dictionary between properties of the network and properties of the adjacency matrix of the network.

Research Project 3. Construct a fast heuristic algorithm which will determine if a semi-directed network is a phylogenetic semi-directed network. Alternatively, determine the computational complexity of determining if a given semi-directed network with n leaves and reticulation number m is a phylogenetic semi-directed network.

These research projects may be closely related to Research Project 2 above. After all, determining if a semi-directed network is phylogenetic amounts to determining if there exist *any* valid root locations. Thus, one might consider some of the suggestions above when approaching these problems. Determining the computational complexity may prove very difficult indeed, and it may be a challenge to prove something even when $m = 1$.

One general strategy for proving computational complexity results is to find a transformation from the problem of interest into another problem with a known computational complexity. A good model for how this might work in the context of phylogenetics can be found in [6] a project which was the result of collaboration between undergraduates and faculty members.

2.4 Restrictions of Networks

In phylogenetics it is frequently necessary to pass back and forth between analyzing full datasets on a complete set of organisms $[n]$ and a more confined analysis on subset of $[n]$. For instance you may have access to an existing data set on $[n]$ but are only interested in some subset of the organisms. Alternatively you may have information on a collection of subsets of $[n]$ and want to piece them together to determine information about the complete set of organisms.

Definition 5. Let N be an n -leaf phylogenetic network with root ρ , and let $A \subseteq [n]$. The *restriction of N to A* is the phylogenetic network $N|_A$ constructed by

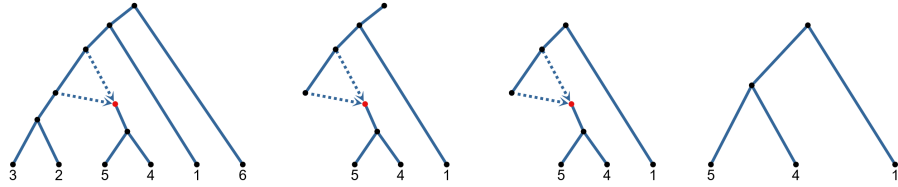
- (i) Taking the union of all directed paths from ρ to a leaf labeled by an element of A .
- (ii) Deleting any vertices that lie above a vertex that is on every such path.
- (iii) Suppressing all degree two vertices other than the root.
- (iv) Removing all parallel edges.
- (v) Applying steps (iii) and (iv) until the network is a phylogenetic network.

We say that N *displays* $N|_A$.

While the definition of restriction is defined in terms of a rooted phylogenetic network, we can also apply this definition to a semi-directed network. Given a phylogenetic semi-directed network, its restriction to a subset $A \subset [n]$ is found by rooting the network at a valid root location, restricting the rooted phylogenetic network to A , and then taking the semi-directed topology of the restricted phylogenetic network. The following Challenge Problem shows that this operation is well-defined.

Challenge Problem 5. Suppose that a valid rooting is chosen for an n -leaf semi-directed network and that the network is then restricted to a subset of the leaves of size $k \leq n$. Show that the k -leaf semi-directed network obtained by unrooting the restricted network is independent of the original rooting chosen.

Fig. 5 The restriction of a 6-leaf phylogenetic network to the set $\{1, 4, 5\}$. The networks pictured are obtained by applying (i), (ii), and then (iii), (iv), and (iii) again to obtain the restricted phylogenetic network.

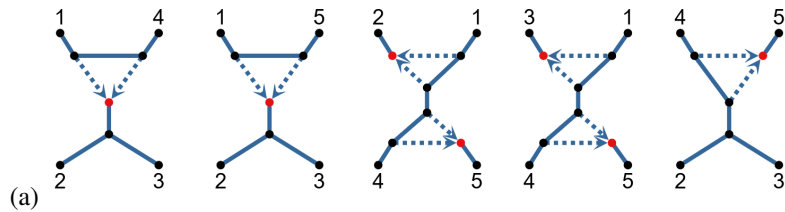


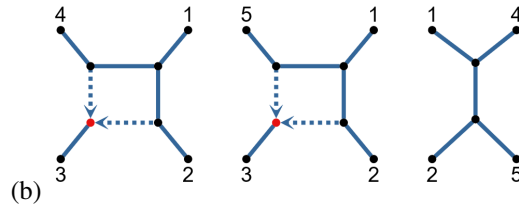
In practice it can be computationally difficult to directly estimate a phylogenetic network from sequence data corresponding to the set $[n]$. One potential workaround is to infer phylogenetic networks on a collection of subsets of $[n]$, and then select a larger network N which best reflects the networks estimated on the various subsets.

Definition 6. A set of phylogenetic networks $\mathcal{A} = \{N_1, N_2, \dots, N_k\}$ whose leaves are all contained in a set $[n]$ is called *compatible* if there exists a phylogenetic network N for which the restriction of N to the leaf set of N_i is isomorphic to N_i for all $1 \leq i \leq k$.

It is common when working with unrooted trees to restrict the trees to four element subsets of the leaves. The resulting 4-leaf trees are called *quartets*, and an n -leaf phylogenetic tree is uniquely determined by its $\binom{n}{4}$ quartets. Similarly, when working with a network, we can construct a *quarnet* by restricting the network to a four element subset of its leaves. In this paper, since we are working with semi-directed phylogenetic networks, we will use the term *quarnet* to mean a 4-leaf semi-directed phylogenetic network. However, note that in other sources a quarnet may refer to an unrooted 4-leaf network.

Exercise 17. Determine if the following collections of quarnets are compatible.





It is possible that some collections of subnetworks can be displayed by multiple phylogenetic networks. In practice we might want to know when a collection of subnetworks can be used to represent a unique network.

Definition 7. Let $\mathcal{A} = \{N_1, N_2, \dots, N_k\}$ be a collection of phylogenetic networks for which the union of all of the corresponding leaf sets is $[n]$. The collection \mathcal{A} is said to *distinguish* a phylogenetic network N , if N is the only phylogenetic network with leaf set $[n]$ such that the restriction of N to the leaf set of N_i is isomorphic to N_i for all $1 \leq i \leq k$.

Exercise 18. Find a collection of three quarnets which are displayed by the 6-leaf phylogenetic network in Figure 5 which do not distinguish that network.

Challenge Problem 6. Show that the set of all quarnets of a level-one semi-directed network distinguishes that network.

A good strategy for proving this might be to consider two distinct level-one semi-directed networks, and then show that there must be a quarnet on which they differ.

Challenge Problem 7. Find all minimal sets of quarnets which distinguish the semi-directed topology of the 6-leaf phylogenetic network in Figure 5.

Challenge Problem 8. Give criteria for determining whether or not a collection of quarnets are compatible. Hint: There are known criteria for determining if a set of quartet trees are compatible [19].

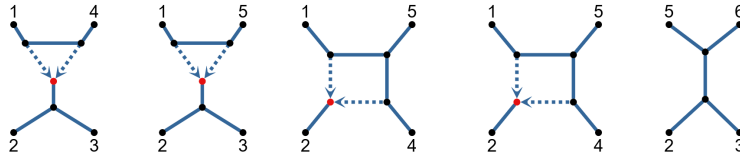
Research Project 4. Describe an algorithm that determines if a set of semi-directed networks $\mathcal{A} = \{N_1, N_2, \dots, N_k\}$ is compatible. Bonus points if the algorithm is efficient, constructive, or determines if the collection distinguishes a unique network. This question is already interesting in the case that each of the N_i is a quarnet.

The previous research problem is based on the notion that one could computationally estimate quarnets from DNA-sequence data, and then the compatible quarnets could be combined to determine a single network which describes the evolution across a broader collection of organisms. This idea has proven successful when building phylogenetic trees, thus, a number of authors have studied whether or not

networks can be constructed by building up large networks from smaller structures (e.g., [21, 23, 24, 26]). Insights and techniques from these papers will likely prove valuable for attacking some of these research and challenge questions. However, it is unlikely that any results will translate directly, since each of the sources cited place different restrictions on the types of input networks and the types of networks constructed.

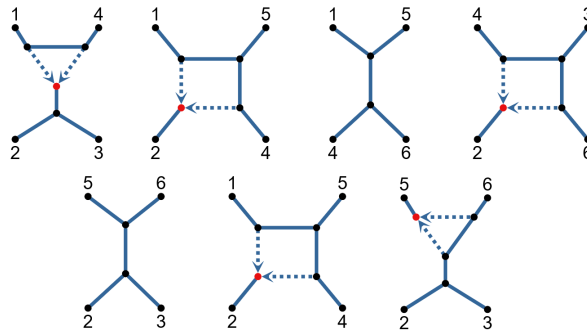
As a warmup to this activity one might examine similar results on trees as can be found throughout Chapters 3 and 6 in the textbook *Basic Phylogenetic Combinatorics* [12], the introductory chapters of which also provide a nice mathematical framework for working with trees and networks. However there is a level of abstraction in this book which mandates that readers may need to keep a running list of concrete examples nearby to connect the text with their intuitive understanding of trees and networks.

Exercise 19. Construct a phylogenetic network which displays the following quartets: Either prove this collection distinguishes the network, or find the set of all networks which display this collection.



In practice, the estimation of quartets from data is likely to be imperfect. Thus, even if we produce data from a model on an $[n]$ -leaf semi-directed network, the collection of estimated quartets is likely to be incompatible. The same issue applies no matter the size of the the inferred subnetworks. In such cases, one would like to construct a phylogenetic network which displays the maximum number of quartets or other semi-directed networks in a collection \mathcal{A} .

Exercise 20. Find a phylogenetic network which displays the maximum number of the following collection of quartets.



Research Project 5. Given a collection $\mathcal{A} = \{N_1, N_2, \dots, N_k\}$ of semi-directed networks, give an efficient algorithm for computing a semi-directed network N which maximizes the number of sub-networks in \mathcal{A} displayed by N .

As a warmup example, in the case of trees, there are two very popular approaches to this problem. The first is described in a series of papers describing the ASTRAL family of software [30], where the solution tree T is assumed to have certain features which appear in the trees in \mathcal{A} . This is a very efficient algorithm which provably solves the problem under this assumption. An alternative is the quartet MaxCut family of algorithms [37] which provide a fast heuristic for solving this problem. While it does not offer the same theoretical guarantees of the ASTRAL methods, it also removes some of the restrictive assumptions of the ASTRAL method. Both of these algorithms would be good starting points for exploration.

In moving towards networks, one might examine the recent software SNAQ [38] which builds phylogenetic networks based on input from a collection of quartets. This research problem is very broad, and allows for many types of restrictions that would still be interesting in practice. One should feel free to restrict both the types of networks in the collection \mathcal{A} and the type of semi-directed network N which is allowed. Consider restrictions both on the number of leaves, level, and number of reticulation vertices.

3 Algebra of Phylogenetic Networks

In the previous section, we introduced networks as a possible explanation for the evolutionary history of a set of species and explored some combinatorial questions related to their structure. In this section we move from combinatorial to algebraic questions. In particular, we study *phylogenetic ideals*, collections of polynomials associated to models of DNA sequence evolution. Phylogenetic ideals associated to tree models have been well-studied (e.g., [4, 13, 42]) and have been used not only for model selection but also to prove theoretical results about the models. For example, they have been used to show that the tree parameters of certain models are *identifiable* (e.g., [2, 4, 9, 28]). A model parameter is identifiable if each output from the model uniquely determines the value of that parameter. This is an important consideration for using phylogenetic models for inference, since it would be undesirable to have multiple different trees explain our data equally well.

Phylogenetic ideals are determined by two things: a model of DNA sequence evolution and a tree or network. In this section, we fix the model of DNA sequence evolution, and then focus on how the polynomials change based on different network attributes. The model of evolution that is quietly sitting in the background is

the Cavendar-Farris-Neyman (CFN) model. While there are four DNA bases (adenine (A), guanine (G), cytosine (C), and thymine (T)), the CFN model only distinguishes between purines (A, G) and pyrimidines (C, T). Thus, it is a 2-state model of evolution where the two states are represented by 0 and 1. For the CFN model on a fixed n -leaf tree T , the mutations between purines and pyrimidines are modeled as a Markov process proceeding along the tree. The numerical parameters of the model determine the probabilities that mutations occur along each edge. Once the numerical parameters are specified, the model gives a probability distribution on the set $\{0, 1\}^n$. Put another way, the tree determines a map, or *parameterization*, that sends each choice of numerical parameters to a probability distribution. Because each coordinate of this map is a polynomial, we can consider it as a ring homomorphism. The kernel of this homomorphism is the phylogenetic ideal associated to T .

In this section, we describe how to associate an ideal to a phylogenetic semi-directed network. Just as for trees, we begin by describing how to construct a polynomial map from the network, and the ideal of the network is the kernel of this map. We then present a number of Research Projects related to uncovering generating sets and properties of these ideals as well as comparing the ideals for different networks. Phylogenetic network ideals were originally studied in [18], and it is likely they will receive increasing attention as researchers look to apply methods that have proven successful for trees to phylogenetic networks.

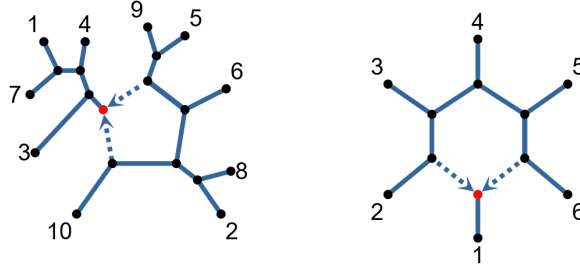
While not essential for the projects presented below, for those interested in learning more about the CFN model and the connections to phylogenetic ideals we recommend [5]. One reason that we do not dwell on the details of the maps referenced above is that we actually work in a set of transformed coordinates called the *Fourier coordinates*, introduced in [14]. This is common when studying phylogenetic ideals, as it makes many of the computations feasible. Though the derivation and details of the transform are outside the scope of this chapter, they can be found in [13, 14, 41]. Viewing phylogenetic statistical models from an algebraic perspective fits broadly into the field of *algebraic statistics*. An overview of some of the basic concepts and significant results in this area can be found in [43, Chapter 15]. Similarly, many of the concepts below come from computational algebraic geometry, and some good first references for students are [11, 20]. If the reader has not yet had a course in abstract algebra, [3, Chapter 4] provides an excellent introduction to the algebraic viewpoint on phylogenetics which is accessible to readers who are familiar with matrices.

3.1 Ideals Associated to Sunlet Networks

The algebra of phylogenetic semi-directed networks is rich enough that even the simplest networks give rise to interesting research questions. Therefore, in this chapter, we will work with semi-directed networks with only a single reticulation vertex. As an undirected graph, a semi-directed network with a single reticulation has a unique cycle of length k , and so we call these semi-directed networks *k-cycle*

networks. To begin this section, we will first consider a specific type of k -cycle network called a *sunlet* network. A k -sunlet network is a k -leaf, k -cycle network. Starting with sunlet networks will allow us to introduce network ideals in a simplified setting, before we show how to associate an ideal to a general k -cycle network in Section 3.2.

Fig. 6 A 5-cycle network and a 6-sunlet.



Let N_k be the k -sunlet network with the leaves labeled clockwise, from 1 to k , starting from the leaf extending from the single reticulation vertex. For example, N_6 is the network pictured at right in Figure 6. In order to describe the ideal associated to N_k we will need to introduce two polynomial rings. For what follows, we will use \mathbb{Z}_2 to denote the quotient group $\mathbb{Z}/2\mathbb{Z}$. This group has two elements, 0 and 1, with addition modulo 2. The first polynomial ring we will consider is

$$R_k := \mathbb{Q}[q_{i_1, \dots, i_k} : i_1, \dots, i_k \in \mathbb{Z}_2, i_1 + \dots + i_k = 0]$$

Exercise 21. Enumerate the indeterminates, i.e. variables, for R_3 . In general, how many indeterminates does R_k have?

The next ring we will consider is a ring with two indeterminates associated to each edge in N_k . The k -sunlet network N_k has $2k$ edges, k of which are leaf edges and k of which are internal (non-leaf) edges. We label the leaf edges of the network from 1 to k to match the corresponding leaf labels. Similarly, we label the internal edges from 1 to k , starting with the reticulation edge clockwise from the leaf edge labeled by 1 and continuing around the sunlet (as in Figure 7). To each edge of the sunlet, we associate two indeterminates, one for each element of \mathbb{Z}_2 . We denote the indeterminates for the leaf edge labeled by i as $a_0^{(i)}$ and $a_1^{(i)}$ and the indeterminates for the internal edge labeled by i as $b_0^{(i)}$ and $b_1^{(i)}$. The second polynomial ring of interest is

$$S_k := \mathbb{Q}[a_j^{(i)}, b_j^{(i)} : 1 \leq i \leq k, j \in \mathbb{Z}_2]$$

An ideal I of a ring R is a subset of R closed under addition and multiplication by ring elements, that is, for all $f, g \in I$, we have $f + g \in I$, and for all $r \in R$ and $f \in I$,

we have $rf \in I$. The ideal I_k associated to the phylogenetic network N_k is the kernel of the following ring homomorphism:

$$\begin{aligned} \phi_k : R_k &\rightarrow S_k \\ q_{i_1, \dots, i_k} &\mapsto a_{i_1}^{(1)} \cdots a_{i_k}^{(k)} \left(\prod_{j=1}^{k-1} b_{i_1 + \dots + i_j}^{(j)} + \prod_{j=2}^k b_{i_2 + \dots + i_j}^{(j)} \right). \end{aligned}$$

In other words,

$$I_k := \ker(\phi_k) = \{f \in R_k : \phi_k(f) = 0\}.$$

Exercise 22. Show that the kernel of any ring homomorphism is an ideal.

Exercise 23. For $k = 3$ write down the rings R_k and S_k . Let $f = 3q_{1,1,0}q_{1,0,1}^2 + q_{0,0,0}$. Compute $\phi_3(f)$.

Exercise 24. Find a non-zero polynomial in I_3 or prove that no such polynomial exists.

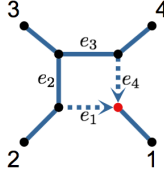
The ideal $I_k \subseteq R_k$ is finitely generated, meaning that there exist $g_1, \dots, g_m \in R_k$ such that for any $f \in I_k$, there exist $r_1, \dots, r_m \in R_k$ such that $f = r_1g_1 + r_2g_2 + \dots + r_mg_m$. Any set $\{g_1, \dots, g_m\}$ that satisfies the preceding definition is called a *generating set* of I_k . When studying ideals associated to phylogenetic networks, we are interested in the polynomials in the ideal. In some cases, just knowing a few polynomials in the ideal is helpful, but we can obtain a more complete understanding of the ideal if we can determine a generating set.

There are algorithms based on the theory of Gröbner bases for determining the generating set for an ideal from its parameterization. A Gröbner basis is a special type of generating set for an ideal and we encourage curious readers to learn more about them before starting on some of the research problems in this section (see e.g. [11, 40]). However, while these algorithms give us a means of determining a generating set for an ideal, in most cases of interest, it is infeasible to perform all the computations necessary by hand. Therefore, we will want to use a computer algebra system to do most of the tedious work for us. In this chapter, we will use the computer algebra system *Macaulay2* [17]. As a first example, we show below how to use this program to find a generating set for I_4 , the ideal associated to the 4-sunlet network.

Example 3. Let us consider N_4 , the 4-leaf sunlet network pictured in Figure 7. In this case, the two rings of interest are

$$\begin{aligned} R_4 &= \mathbb{Q}[q_{0000}, q_{0011}, q_{0101}, q_{0110}, q_{1001}, q_{1010}, q_{1100}, q_{1111}], \text{ and} \\ S_4 &= \mathbb{Q}[a_0^{(1)}, a_1^{(1)}, a_0^{(2)}, a_1^{(2)}, a_0^{(3)}, a_1^{(3)}, a_0^{(4)}, a_1^{(4)}, b_0^{(1)}, b_1^{(1)}, b_0^{(2)}, b_1^{(2)}, b_0^{(3)}, b_1^{(3)}, b_0^{(4)}, b_1^{(4)}]. \end{aligned}$$

The ring homomorphism ϕ_4 is described as follows:

Fig. 7 The 4-sunlet network N_4 .

$$\begin{aligned} \phi_4(q_{0000}) &= a_0^{(1)} a_0^{(2)} a_0^{(3)} a_0^{(4)} (b_0^{(1)} b_0^{(2)} b_0^{(3)} + b_0^{(2)} b_0^{(3)} b_0^{(4)}), \\ \phi_4(q_{0011}) &= a_0^{(1)} a_0^{(2)} a_1^{(3)} a_1^{(4)} (b_0^{(1)} b_0^{(2)} b_1^{(3)} + b_0^{(2)} b_1^{(3)} b_0^{(4)}), \\ \phi_4(q_{0101}) &= a_0^{(1)} a_1^{(2)} a_0^{(3)} a_1^{(4)} (b_0^{(1)} b_1^{(2)} b_1^{(3)} + b_1^{(2)} b_1^{(3)} b_0^{(4)}), \\ \phi_4(q_{0110}) &= a_0^{(1)} a_1^{(2)} a_1^{(3)} a_0^{(4)} (b_0^{(1)} b_1^{(2)} b_0^{(3)} + b_1^{(2)} b_0^{(3)} b_0^{(4)}), \\ \phi_4(q_{1001}) &= a_1^{(1)} a_0^{(2)} a_0^{(3)} a_1^{(4)} (b_1^{(1)} b_1^{(2)} b_1^{(3)} + b_0^{(2)} b_0^{(3)} b_1^{(4)}), \\ \phi_4(q_{1010}) &= a_1^{(1)} a_0^{(2)} a_1^{(3)} a_0^{(4)} (b_1^{(1)} b_1^{(2)} b_0^{(3)} + b_0^{(2)} b_1^{(3)} b_1^{(4)}), \\ \phi_4(q_{1100}) &= a_1^{(1)} a_1^{(2)} a_0^{(3)} a_0^{(4)} (b_1^{(1)} b_0^{(2)} b_0^{(3)} + b_1^{(2)} b_1^{(3)} b_1^{(4)}), \\ \phi_4(q_{1111}) &= a_1^{(1)} a_1^{(2)} a_1^{(3)} a_1^{(4)} (b_1^{(1)} b_0^{(2)} b_1^{(3)} + b_1^{(2)} b_0^{(3)} b_1^{(4)}). \end{aligned}$$

Using *Macaulay2* we can compute a generating set for I_4 . In the code below, we use `I` for this ideal, `R` and `S` for the rings R_4 and S_4 , and `phi` for the map ϕ_4 .

```
i1: R = QQ[q_{0,0,0,0}, q_{0,0,1,1}, q_{0,1,0,1}, q_{0,1,1,0},
          q_{1,0,0,1}, q_{1,0,1,0}, q_{1,1,0,0}, q_{1,1,1,1}];

i2: S = QQ[a1_0, a1_1, a2_0, a2_1, a3_0, a3_1, a4_0, a4_1,
          b1_0, b1_1, b2_0, b2_1, b3_0, b3_1, b4_0, b4_1];

i3: phi = map(S, R,
  {a1_0*a2_0*a3_0*a4_0*(b1_0*b2_0*b3_0+b2_0*b3_0*b4_0),
   a1_0*a2_0*a3_1*a4_1*(b1_0*b2_0*b3_1+b2_0*b3_1*b4_0),
   a1_0*a2_1*a3_0*a4_1*(b1_0*b2_1*b3_1+b2_1*b3_1*b4_0),
   a1_0*a2_1*a3_1*a4_0*(b1_0*b2_1*b3_0+b2_1*b3_0*b4_0),
   a1_1*a2_0*a3_0*a4_1*(b1_1*b2_1*b3_1+b2_0*b3_0*b4_1),
   a1_1*a2_0*a3_1*a4_0*(b1_1*b2_1*b3_0+b2_0*b3_1*b4_1),
   a1_1*a2_1*a3_0*a4_0*(b1_1*b2_0*b3_0+b2_1*b3_1*b4_1),
   a1_1*a2_1*a3_1*a4_1*(b1_1*b2_0*b3_1+b2_1*b3_0*b4_1)});

i4: I = ker phi

o4: ideal (q_{0, 1, 1, 0}*q_{1, 0, 0, 1}-q_{0, 1, 0, 1}*q_{1, 0, 1, 0}+
          q_{0, 0, 1, 1}*q_{1, 1, 0, 0}-q_{0, 0, 0, 0}*q_{1, 1, 1, 1})
```

The output of the last command tells us that I_4 is generated by a single polynomial, namely

$$q_{0110}q_{1001} - q_{0101}q_{1010} + q_{0011}q_{1100} - q_{0000}q_{1111}.$$

Exercise 25. Verify that the polynomial from Example 3 is in I_4 .

Exercise 26. Compute the ideal I_5 for the the 5-sunlet N_5 using *Macaulay2* or another computer algebra system. How many generators are returned? What are the degrees of the returned generators?

Exercise 27. Verify (computationally or by hand) that the polynomial

$$q_{01100}q_{10010} - q_{01010}q_{10100} + q_{00110}q_{11000} - q_{00000}q_{11110}$$

is in the ideal I_5 .

On a standard laptop, the computation in Exercise 26 will finish, but not immediately. You may notice the difference in the time it takes to run the computation for I_4 in Example 3 and for I_5 in Exercise 26. As we increase k , computing I_k becomes even more complex, to the point that a computer may take several hours or days or may run out of memory before returning a generating set. The computer, of course, will execute an algorithm to determine a generating set for I_k . In many cases however, executing all the steps of the algorithm is not actually necessary to obtain the information about the ideal that we are interested in. Therefore, we can use some tricks and techniques to reduce the size of the computations and extract information about the ideals.

For example, we can use some of the built-in options in *Macaulay2* such as `SubringLimit`, a command that stops the computation after a specified number of polynomials have been found. If using this strategy, we will obtain a set of polynomials in the ideal I_k , but we will not have a certification that these polynomials generate I_k . However, if we let J be the ideal they generate then we know that $J \subseteq I_k$. We can show that $J = I_k$ if we can show that J is *prime* and that the *dimension* of J is equal to that of I_k . An ideal $I \subseteq R$ is prime if for all $f, g \in R$, if $fg \in I$, then $f \in I$ or $g \in I$. Checking whether an ideal is prime and finding its dimension can be done in *Macaulay2* using the `isPrime` and `dim` commands. Of course, we do not have a set of generators for I_k , since that is what we are trying to find, so we can not use `dim` to find its dimension. However, we can still determine a lower bound on the dimension of I_k from the map ϕ_k using the rank of the Jacobian matrix as shown in Example 4. Since $J \subseteq I_k$, we have $\dim(I_k) \leq \dim(J)$, and so if the rank of the Jacobian is equal to $\dim(J)$, then $\dim(I_k) = \dim(J)$.

This `SubringLimit` method of determining a generating set for an ideal was used to prove Proposition 4.6 in [18]. That paper also includes supplementary *Macaulay2* code which may prove useful.

Example 4. Let $I = \langle q_{0110}q_{1001} - q_{0101}q_{1010} + q_{0011}q_{1100} - q_{0000}q_{1111} \rangle$ be the ideal returned from Example 3. The following *Macaulay2* code is used to determine whether the dimension of the ideal I is the same as the dimension of the ideal I_4 as well as whether or not I is prime. This serves as verification that I is indeed equal to I_4 .

```

i5: phimatrix = matrix{{
    a1_0*a2_0*a3_0*a4_0*(b1_0*b2_0*b3_0+b2_0*b3_0*b4_0),
    a1_0*a2_0*a3_1*a4_1*(b1_0*b2_0*b3_1+b2_0*b3_1*b4_0),
    a1_0*a2_1*a3_0*a4_1*(b1_0*b2_1*b3_1+b2_1*b3_1*b4_0),
    a1_0*a2_1*a3_1*a4_0*(b1_0*b2_1*b3_0+b2_1*b3_0*b4_0),
    a1_1*a2_0*a3_0*a4_1*(b1_1*b2_1*b3_1+b2_0*b3_0*b4_1),
    a1_1*a2_0*a3_1*a4_0*(b1_1*b2_1*b3_0+b2_0*b3_1*b4_1),
    a1_1*a2_1*a3_0*a4_0*(b1_1*b2_0*b3_0+b2_1*b3_1*b4_1),
    a1_1*a2_1*a3_1*a4_1*(b1_1*b2_0*b3_1+b2_1*b3_0*b4_1)}}

i6: rank jacobian phimatrix == dim(I)

i7: isPrime I

```

Challenge Problem 9. Compute I_6 in *Macaulay2* by imposing a limit on the number of polynomials returned using `SubringLimit`. Verify that the ideal that is returned is indeed I_6 .

One will only get so far using the strategy described above, as for larger k , there may be many polynomials required to generate I_k and they may take a very long time to find. In these cases, just being able to compute the ideal I_k becomes an interesting project on its own.

Research Project 6. Find a generating set for the ideal I_k of the k -sunlet network N_k when $k = 7, 8, 9$.

Moving from the computational to the theoretical, it is sometimes possible to give a description of a generating set for a whole class of ideals.

Research Project 7. Give a description of a set of phylogenetic invariants in the sunlet ideal I_k . Does this set of invariants generate the ideal? Does this set of invariants form a Gröbner basis for the ideal with respect to some term order?

We can envision two different approaches to Research Project 7. The first is to compute the sunlet ideals for a range of examples. As you are able to compute I_k for higher k , patterns should emerge. We see this even for $k = 4$ and $k = 5$. For example, Exercise 27 might give a hint of how we can find some invariants for larger k by doing computations for small k . Once you discover a pattern, you could then try to prove that this pattern holds in general.

The second approach would be to try to construct invariants for sunlet networks using the known invariants in the ideals of the trees that they display. As an example,

consider the map ϕ_4 from Example 3. Consider the following two maps. The first, $\phi' : R_4 \rightarrow S_4$, sends $q_{i_1 i_2 i_3 i_4}$ to the term of $\phi_4(q_{i_1 i_2 i_3 i_4})$ that includes $b_j^{(1)}$ and the other, $\phi'' : R_4 \rightarrow S_4$, sends $q_{i_1 i_2 i_3 i_4}$ to the second term of $\phi_4(q_{i_1 i_2 i_3 i_4})$ that includes $b_j^{(4)}$. So, for example,

$$\phi'(q_{0000}) = a_0^{(1)} a_0^{(2)} a_0^{(3)} a_0^{(4)} b_0^{(1)} b_0^{(2)} b_0^{(3)} \text{ and } \phi''(q_{0000}) = a_0^{(1)} a_0^{(2)} a_0^{(3)} a_0^{(4)} b_0^{(2)} b_0^{(3)} b_0^{(4)}.$$

The ideal $I' = \ker(\phi')$ is the ideal of the tree created by removing the reticulation edge e_4 from the 4-sunlet in Figure 7. The ideal $I'' = \ker(\phi'')$ is the ideal of the tree created by removing the reticulation edge e_1 .

The problem of finding invariants for trees has been solved, and for small trees, explicit lists of invariants are available online at <https://www.shsu.edu/~ldg005/small-trees/>, the work of which is described in Chapter 15 of [32]. The tree ideals are parametrized by monomials which makes it easier to find invariants. In particular, invariants for ideals parameterized by monomials can be found by examining the additive relationships between the exponents of the monomials. This means that finding invariants for these ideals can be done using only tools from linear algebra.

Example 5. Let $f : \mathbb{R}^2 \rightarrow \mathbb{R}^3$ be the map defined by $(t_1, t_2) \mapsto (t_1^2, t_1 t_2, t_2^2)$. We can represent this map by a 2×3 matrix A , where the ij -th entry is the exponent of t_i in the j -th coordinate of the image of (t_1, t_2) ,

$$A = \begin{pmatrix} 2 & 1 & 0 \\ 0 & 1 & 2 \end{pmatrix}.$$

Elements of the integer kernel of A encode binomial invariants in $\ker(f)$. For example, the integer vector $(1, -2, 1)^T$ is a vector of integers in $\ker(A)$. We can interpret the positive entries as the monomial $y_1 y_3$ and the negative integers as the monomial y_2^2 , and conclude that $y^2 - y_1 y_3$ is in $\ker(f)$.

Notice in the preceding example that while the parameterization was in terms of monomials, the invariant we constructed is a binomial. While there are many different formal definitions, the class of ideals which are parameterized by monomials are called *toric ideals* and it is known that toric ideals can be generated by binomials. This fact is proven in [40, Chapter 4], which might also serve as a good reference for learning more about the invariants of toric ideals. The following exercise shows why toric ideals may prove useful when trying to find invariants for sunlet ideals.

Exercise 28. Consider the ideals I_4 , $I' = \ker(\phi')$, and $I'' = \ker(\phi'')$ described above.

- Show that if $f \in I_4$, then $f \in I' \cap I''$.
- Compute $I' = \ker(\phi')$ and $I'' = \ker(\phi'')$ using *Macaulay2*. You can verify that your computations are correct using the online catalog of invariants referenced above. Specifically, by looking under “Invariants in Fourier coordinates” for the “Neyman 2-state model.”

- (c) Verify that the generator for I_4 found in Example 3 is contained in I' and in I'' . (Hint: To determine if a polynomial f is contained in an ideal I , you can verify in *Macaulay2* that `f % I == 0` returns `TRUE`).

The previous exercise shows that $I_4 \subset I' \cap I''$. Put another way, invariants in I' and I'' are candidates to be invariants in I_4 . Similar statements hold for all of the ideals I_k in this section, and for the ideals I_N that we describe in the next section. Thus, exploring toric ideals might prove useful for finding network invariants.

3.2 Beyond sunlet networks

The sunlet networks N_k have a very particular structure, and the ring map we described in Section 3.1 is specific to sunlets. In this section, we set up the ring map ϕ more generally, which will allow us to explore the algebra of general k -cycle networks.

Let N be an n -leaf, k -cycle network. The first ring we will consider is of the same form as that from the previous section,

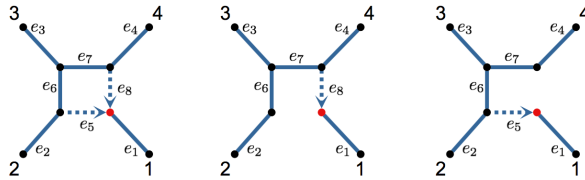
$$R_n := \mathbb{Q}[q_{i_1, \dots, i_n} : i_1, \dots, i_n \in \mathbb{Z}_2, i_1 + \dots + i_n = 0].$$

The next ring we will consider is a ring with two indeterminates associated to each edge of N . As with the sunlet, an n -leaf, k -cycle network has $2n$ edges, but unlike with sunlets, we no longer make a distinction between the leaf edges and the interior edges when labeling and so label all the edges by $\{1, \dots, 2n\}$. As before, we associate two parameters to each edge, indexed by the edge label and the elements of \mathbb{Z}_2 .

$$S_n := \mathbb{Q}[a_0^{(i)}, a_1^{(i)} : 1 \leq i \leq 2n].$$

Our next step will be to define the map $\phi_N : R_n \rightarrow S_n$. Before we do this, observe that if we remove one of the reticulation edges of N , the result is an unrooted n -leaf tree with labeled leaves. These two trees, T_1 and T_2 , are not binary since removing a reticulation edge in the network will leave vertices of degree two.

Fig. 8 The 4-sunlet network N_4 and the two trees obtained by removing each reticulation edge.



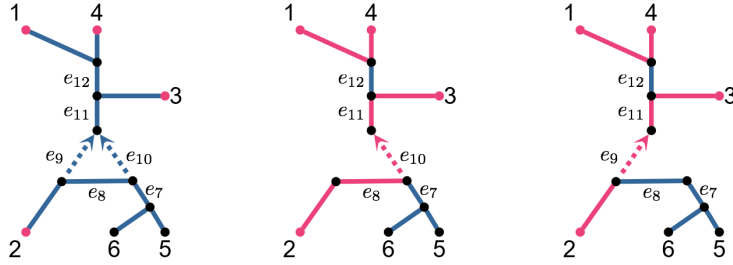
The map ϕ_N sends each variable in R_n to a binomial in S_n where the two terms are determined by T_1 and T_2 . For what follows, let $L_m \subset [2n]$ be the set of edge indices of T_m . For the variable q_{i_1, \dots, i_n} the term that is associated to T_m will be a monomial, with one indeterminate, $a_0^{(j)}$ or $a_1^{(j)}$, for each edge of the tree. In order to determine the “color” (0 or 1) of each edge indeterminate, we consider (i_1, \dots, i_n) as a labeling of the leaves of T_m by elements of \mathbb{Z}_2 . If we remove an edge e_j of T_m , the resulting graph has two connected components which splits the leaves into two sets. Let $s_j^m(i_1, \dots, i_n)$ be the group sum of the leaf labels on either side of the split induced by removing the edge e_j from T_m . (Note the sum of leaf labels is the same on either side of the split.) The indeterminate associated to the edge e_j is then $a_{s_j^m(i_1, \dots, i_n)}^{(j)}$. Thus, we have the map

$$\begin{aligned} \phi_N : R_n &\rightarrow S_n \\ q_{i_1, \dots, i_n} &\mapsto \prod_{j \in L_1} a_{s_j^1(i_1, \dots, i_n)}^{(j)} + \prod_{j \in L_2} a_{s_j^2(i_1, \dots, i_n)}^{(j)}. \end{aligned}$$

Now the phylogenetic ideal I_N associated to N is the kernel of ϕ_N :

$$I_N := \ker(\phi_N) = \{f \in R_n : \phi_N(f) = 0\}.$$

Example 6. Let N be the 6-leaf network pictured below. Removing the reticulation edges of N creates two trees, T_1 and T_2 , with edge indices $L_1 = [12] \setminus \{9\}$ and $L_2 = [12] \setminus \{10\}$. To determine the parameterization for the coordinate $q_{1111100}$, we color the leaves by $(1, 1, 1, 1, 0, 0)$. Here, we show vertices and edges colored by 1 as magenta.



To determine the color of an edge, we sum the leaf colors on either side of the split created by removing that edge. For example, the edge e_{11} in T_1 corresponds to the split $134|256$. Since

$$i_1 + i_3 + i_4 = 1 + 1 + 1 = i_2 + i_5 + i_6 = 1 + 0 + 0 = 1,$$

e_{11} is colored by 1. Thus, the indeterminate for e_{11} is $a_1^{(11)}$. Then for the map ϕ_N , we have

$$q_{1111100} \mapsto a_1^{(1)} a_1^{(2)} a_1^{(3)} a_1^{(4)} a_0^{(5)} a_0^{(6)} a_0^{(7)} a_1^{(8)} a_1^{(10)} a_1^{(11)} a_0^{(12)} + a_1^{(1)} a_1^{(2)} a_1^{(3)} a_1^{(4)} a_0^{(5)} a_0^{(6)} a_0^{(7)} a_0^{(8)} a_1^{(9)} a_1^{(11)} a_0^{(12)}.$$

Exercise 29. Let N be the quartet with leaf label set $\{1, 2, 3, 4\}$ from Exercise 20. Write out R_n , S_n , and ϕ_N . Use Macaulay2 to compute I_N .

Exercise 30. Let N be the sunlet network N_k . Show that the ring map in this section is the same ring map as the previous section if we replace the b indeterminates with the appropriate a indeterminates.

Notice that if we swap the leaf labels 1 and 3 in the 4-sunlet N_4 , we obtain a different 4-sunlet network. In the following challenge problem, we will see how changing the labeling of a network changes which polynomials are in the ideal.

Challenge Problem 10. How many labeled 4-leaf sunlets are there? Compute I_N for each of the 4-leaf sunlets. How are the generating sets of each of these ideals related to I_4 ?

For the sunlet graphs, we could factor all of the indeterminates corresponding to the leaf edges from the binomial but no other indeterminates. In essence, we could write the image of every variable in R_k as a monomial multiplied by a binomial. We can also do this for the k -cycle networks, and as Example 6 shows, sometimes we can factor out many more indeterminates. From that example, we could write

$$q_{1111100} \mapsto a_1^{(1)} a_1^{(2)} a_1^{(3)} a_1^{(4)} a_0^{(5)} a_0^{(6)} a_0^{(7)} a_1^{(11)} a_0^{(12)} (a_1^{(8)} a_1^{(10)} + a_1^{(9)} a_1^{(11)}).$$

The following challenge problem is aimed to get at this general phenomenon for k -cycle networks.

Challenge Problem 11. Write out the map ϕ_N for several 4-leaf and 5-leaf k -cycle networks. For each graph, which edge indeterminates can you factor for every binomial in the map? Can you describe the general pattern for k -cycle networks?

In our explorations we have seen that different networks may induce different phylogenetic ideals. The ideals of certain networks may contain the ideals of other networks with the same leaf set. This suggests we might try to understand the relationship between ideal containment and the corresponding network structures.

Research Project 8. Draw all of the 5-leaf level-one networks. Which networks have the same ideal under the CFN model? Which networks have ideals that are contained in one another?

To explore the structure of the ideals you might use the Macaulay 2 command `isSubset(J, I)` to determine if the ideal J is contained in the ideal I . Similarly, `I == J` will tell you if two ideals are equal. In order to formalize the ideal containment structures you identify, it might be helpful to use a mathematical object called a partially-ordered set (poset). The definition of a poset as well as examples can be found in Chapter 6 of [27].

References

1. Tushar Agarwal, Philippe Gambette, and David Morrison. Who is who in phylogenetic networks: Articles, authors, and programs, 2016.
2. Elizabeth S. Allman, Sonja Petrović, John A. Rhodes, and Seth Sullivant. Identifiability of 2-tree mixtures for group-based models. *IEEE/ACM Trans. Comp. Biol. Bioinformatics*, 8(3):710–722, 2011.
3. Elizabeth S. Allman and John A. Rhodes. *Mathematical Models in Biology, an Introduction*. Cambridge University Press, Cambridge, United Kingdom, 2004.
4. Elizabeth S. Allman and John A. Rhodes. The identifiability of tree topology for phylogenetic models, including covarion and mixture models. *J. Comp. Biol.*, 13(5):1101–1113, 2006.
5. Elizabeth S. Allman and John A. Rhodes. *Reconstructing Evolution: New Mathematical and Computational Advances*, chapter 4. Oxford University Press, UK, June 2007.
6. Maria Anaya, Olga Anipchenko-Ulaj, Aisha Ashfaq, Joyce Chiu, Mahedi Kaiser, Max Shoji Ohsawa, Megan Owen, Ella Pavlechko, Katherine St. John, Shivam Suleria, Keith Thompson, and Corinne Yap. On determining if tree-based networks contain fixed trees. *Bulletin of Mathematical Biology*, 78(5):961–969, 2016.
7. Marta Casanellas and Jesús Fernández-Sánchez. Performance of a new invariants method on homogeneous and nonhomogeneous quartet trees. *Molecular biology and evolution*, 24(1):288–293, 2006.
8. J.A. Cavender and Joseph Felsenstein. Invariants of phylogenies in a simple case with discrete states. *J. of Class.*, 4:57–71, 1987.
9. J.T. Chang. Full reconstruction of Markov models on evolutionary trees: identifiability and consistency. *Math. Biosci.*, 137(1):51–73, 1996.
10. Gary Chartrand and Ping Zhang. *A First Course in Graph Theory*. Courier Corporation, 2013.
11. David Cox, John Little, and Donal O’Shea. *Ideals, Varieties, and Algorithms*. Undergraduate Texts in Mathematics. Springer Science+Business Media, third edition, 2007.
12. Andreas Dress, Katharina T. Huber, Jacobus Koolen, Vincent Moulton, and Andreas Spillner. *Basic Phylogenetic Combinatorics*. Cambridge University Press, Cambridge, United Kingdom, 2012.
13. Nicholas Eriksson. Using invariants for phylogenetic tree construction. In *Emerging applications of algebraic geometry*, pages 89–108. Springer, 2009.
14. S.N. Evans and T.P. Speed. Invariants of some probability models used in phylogenetic inference. *Ann. Statist.*, 21(1):355–377, 1993.
15. Joseph Felsenstein. *Inferring Phylogenies*. Sinauer Associates, Inc., Sunderland, UK, 2004.
16. Andrew Francis, Charles Semple, and Mike Steel. New characterisations of tree-based networks and proximity measures. *Advances in Applied Mathematics*, 93, February 2018.
17. D.R. Grayson and M.E. Stillman. Macaulay2, a software system for research in algebraic geometry. Available at <http://www.math.uiuc.edu/Macaulay2/>, 2002.
18. Elizabeth Gross and Colby Long. Distinguishing phylogenetic networks. *SIAM J. Appl. Algebra Geometry*, 2(1):72–93, 2018.
19. Stefan Grünewald, Peter J Humphries, and Charles Semple. Quartet compatibility and the quartet graph. *the electronic journal of combinatorics*, 15(1):103, 2008.

20. Brendan Hassett. *Introduction to Algebraic Geometry*. Cambridge University Press, New York, 2007.
21. Katharina T. Huber, Vincent Moulton, Charles Semple, and Taoyang Wu. Quartet inference rules for level-1 networks. *Bulletin of Mathematical Biology*, 80(8):2137–2153, August 2018.
22. Daniel H. Huson, Regula Rupp, and Celine Scornavacca. *Phylogenetic Networks: Concepts, Algorithms and Applications*. Cambridge University Press, Cambridge, United Kingdom, 2010.
23. Leo Van Iersel and Vincent Moulton. Trinets encode tree-child and level-2 phylogenetic networks. *J. Math Biol.*, 68(7):1707–1729, June 2014.
24. J. Jansson, N.B. Nguyen, and W.K. Sung. Algorithms for combining rooted triplets into a galled phylogenetic network. *SIAM J. Comput.*, 35(5):1098–1121, 2006.
25. Jesper Jansson and Wing-Kin Sung. Inferring a level-1 phylogenetic network from a dense set of rooted triples. *Theoretical Computer Science*, 363(1):60–68, October 2006.
26. Judith Keijsper and R.A. Pendavingh. Reconstructing a phylogenetic level-1 network from quartets. *Bulletin of Mathematical Biology*, 76(10):2517–2541, October 2014.
27. Mitchel T Keller and William T Trotter. *Applied Combinatorics*. Mitchel T. Keller, William T. Trotter, 2016.
28. Colby Long and Seth Sullivant. Identifiability of 3-class Jukes–Cantor mixtures. *Advances in Applied Mathematics*, 64:89–110, 3 2015.
29. W.P. Maddison. Gene trees in species trees. *Syst. Biol.*, 46(523–536), 1997.
30. S. Mirarab, R. Reaz, M.S. Bayzid, T. Zimmermann, M.S. Swenson, and T. Warnow. ASTRAL: genome-scale coalescent-based species tree estimation. *Bioinformatics*, 30:i541–i548, 2014.
31. Luay Nakhleh. *Problem Solving Handbook in Computational Biology and Bioinformatics*, chapter Evolutionary Phylogenetic Networks: Models and Issues, pages 125–158. Springer Science+Business Media, LLC, 2011.
32. Lior Pachter and Bernd Sturmfels, editors. *Algebraic Statistics for Computational Biology*, page 101. Cambridge University Press, Cambridge, United Kingdom, 2005.
33. Fabio Pardi and Celine Scornavacca. Reconstructible phylogenetic networks: Do not distinguish the indistinguishable. *PLoS Comput Biol.*, 11(4), April 2015.
34. Joseph P. Ruskino and Brian Hipp. Invariant based quartet puzzling. *Algorithms Mol Biol.*, 7(35), 2012.
35. Charles Semple. Phylogenetic networks with every embedded phylogenetic tree a base tree. *Bulletin of Mathematical Biology*, 78(1):132–137, 2016.
36. Charles Semple and Mike Steel. *Phylogenetics*. Oxford University Press, Oxford, 2003.
37. S. Snir and S. Rao. Quartet MaxCut: a fast algorithm for amalgamating quartet trees. *Molecular Phylogenetics and Evolution*, 62(1):1–8, January 2012.
38. Claudia Solís-Lemus and Cécile Ané. Inferring phylogenetic networks with maximum pseudolikelihood under incomplete lineage sorting. *PLOS Genetics*, 2016.
39. Mike Steel. *Phylogeny: Discrete and Random Processes in Evolution*. CBMS-NSF Regional Conference Series in Applied Mathematics. SIAM, 2016.
40. Bernd Sturmfels. *Gröbner bases and Convex Polytopes*, volume 8. American Mathematical Soc., 1996.
41. Bernd Sturmfels and Seth Sullivant. Toric ideals of phylogenetic invariants. *J. Comp. Biol.*, 12(2):204–228, 2005.
42. Bernd Sturmfels and Seth Sullivant. Combinatorial secant varieties. *Quarterly Journal of Pure and Applied Mathematics*, 2:285–309, 2006.
43. Seth Sullivant. *Algebraic Statistics*. Graduate Studies in Mathematics. American Mathematical Society, 2018.
44. M. Syvanen. Horizontal gene transfer: evidence and possible consequences. *Annu. Rev. Genet.*, 28:237–261, 1994.