

The game chromatic index of trees of maximum degree 4 with at most three degree-four vertices in a row

Wai Lam Fong^{a,*}, Wai Hong Chan^a

^a*Department of Mathematics and Information Technology, The Education University of Hong Kong, Tai Po, Hong Kong SAR, China.*

Abstract

Fong et al. (The game chromatic index of some trees with maximum degree four and adjacent degree-four vertices, J. Comb Optim 36 (2018) 1-12) proved that the game chromatic index of any tree T of maximum degree 4 whose degree-four vertices induce a forest of paths of length l less than 2 is at most 5. In this paper, we show that the bound 5 is also valid for $l \leq 2$. This partially solves the problem of characterization of the trees whose game chromatic index exceeds the maximum degree by at most 1, which was proposed by Cai and Zhu (Game chromatic index of k -degenerate graphs, J. Graph Theory 36 (2001) 144-155).

Keywords: game chromatic index, tree, graph coloring game, game chromatic number, line graph

1. Introduction

We consider in this paper an edge-coloring game studied in [1, 2, 6, 7, 8, 9]. In the game, two players, Alice and Bob, alternately select a color from a set of colors and put it on an uncolored edge of an initially uncolored, finite and simple graph G such that adjacent edges receive distinct colors. Alice wins the game if all edges of G are colored finally; otherwise, Alice loses. Moreover, Bob begins and he is allowed to skip any number of turns throughout the game, while skipping is forbidden for Alice. The game played with a set of k colors is called the *k -edge-coloring game*. If Alice has a winning strategy for the k -edge-coloring game played on a graph G , then G is called *k -edge-game-colorable*. The parameter *game chromatic index* $\chi'_g(G)$ of a graph G , which was introduced by Cai and Zhu [5] for a related game, is defined as the least k such that Alice has a winning strategy for the k -edge-coloring game played on G . Bodlaender [4] introduced a similar kind of coloring games, in which vertices are colored instead of edges, and the corresponding parameter is called the *game chromatic number*.

Cai and Zhu [5] proved that $\chi'_g(T) \leq \Delta(T) + 2$ for any tree T of maximum degree $\Delta(T)$. Erdős et al. [7] showed that best possible upper bound for the class of trees T with maximum degree $\Delta(T)$ is at least $\Delta(T) + 1$ if $\Delta(T) \geq 2$. The upper bound $\Delta(T) + 1$ holds when $\Delta(T) = 3$ [1, 5] or $\Delta(T) \geq 5$ [2, 7].

*Corresponding author

Email addresses: s1118833@s.eduhk.hk (Wai Lam Fong), waihchan@eduhk.hk (Wai Hong Chan)

Any tree of maximum degree 2 is a path, which obviously means that all edges can be successfully colored in the 3-edge-coloring game played on any tree T of $\Delta(T) = 2$. As a result, $\Delta(T) = 4$ is the only case that was left open. On the one hand, researchers have not proved that all trees of maximum degree 4 are 5-edge-game-colorable; on the other hand, no trees of maximum degree 4 that are not 5-edge-game-colorable have been found. Some researchers have been working on finding subclasses of trees T of maximum degree 4 which are 5-edge-game-colorable, by considering the connectivity and distribution of 4-vertices (degree-four vertices) in T . For example, the subclass that the 4-vertices in T induce a *linear forest*, which is a disjoint union of paths, were studied [6, 8, 9]. These studies will be introduced below.

For trees T with $\Delta(T) = 4$. Chan and Nong [6] proved that the upper bound $\Delta(T) + 1$, i.e., 5, is also sharp when the set of 4-vertices of T is independent, or when T is a caterpillar, which may contain a long path of 4-vertices. After that, Fong and Chan [8] found that any 4-edge-game-colorable tree with maximum degree 4, in which any 4-vertex is adjacent to at most two vertices of degree not less than 3, is 5-edge-game-colorable. The result of Fong and Chan [8] not only provided a new 5-edge-game-colorable subclass of trees with maximum degree 4, but also confirmed that any tree is k -edge-game-colorable when k is greater than its game chromatic index. This result also partially answered a basic yet challenging and open question raised by Zhu [10]: Is having more colors always an advantage for Alice? Furthermore, Fong et al. [9] showed that the bound 5 is still valid when the subgraph of T induced by all its 4-vertices is a forest of paths of length l at most 1. Moreover, Fong et al. [9] conjectured that the result is true for any natural number l . In this paper, we confirm this conjecture for the case that $l \leq 2$.

The game studied in this paper is under the game variant that Bob begins and has the right to skip any number of turns. This variant was proposed by Andres [2]. Andres [2] proposed six game variants in which either Alice or Bob could take the first move; and either Alice, Bob, or none of them could be allowed to skip. In other words, there are two and three choices of the player who begins and the player who can skip, respectively, so that there are six variants in total. Andres [2] showed that the game chromatic index under the variant studied in this paper is an upper bound on the index under the other five variants. This means if one wants to establish an upper bound on the game chromatic index of a class of graphs, then one may consider the variant that Bob is the player who begins and is allowed to skip. Andres et al. [3] studied the relationship between graph structure and the effect of the game variants on the game chromatic index of graphs.

The rest of this paper is structured as follows. In Section 2, we will present our terminology and notation, and the notion of decomposition of a tree into independent subtrees, which facilitate our proof of the conjecture for $l \leq 2$, i.e., our main theorem. Moreover, we will state Lemma 2 and use it to prove the main theorem. At the end of Section 2, we will establish Lemma 3, which will be employed to prove Lemma 2 in Sections 3 and 4. Future work will be discussed in Section 5.

2. Decomposition of a tree into independent subtrees

THEOREM 1. *Let T be a finite tree with $\Delta(T) = 4$. If the subgraph of T induced by all its 4-vertices is a forest of paths of length at most 2, then $\chi'_g(T) \leq 5$.*

We now define the following terms for any colored or uncolored tree:

- A *k-vertex* is a vertex of degree k .
- The edge incident with a leaf is called a *leaf-edge*.
- The non-pendant vertex incident with a leaf-edge is called the *root of a leaf-edge*.
- A *trivial path* is a path of length zero, i.e., a path consisting of one vertex.
- A *star-node* is a vertex connected to at least three roots of colored leaf-edges by edge-disjoint (maybe trivial) paths.
- Any star-node connected to precisely k roots of colored leaf-edges by edge-disjoint (maybe trivial) paths is called a *k-SN*.
- A *star-edge* is an edge incident with a star-node.
- The path connecting two star-nodes is called a *star-path*.
- A *k-leaf-edge-colored tree (k-LCT)* is a tree containing precisely k colored leaf-edges.
- In a tree containing vertex u , a *u-branch* is a maximal subtree containing precisely one edge incident with u . A *u-branch* with no colored edges is called an *uncolored u-branch*.
- A *leaf-path* is the path connecting the root of a colored leaf-edge with its nearest star-node.
- S_3^4 is the star with exactly three leaves, i.e., the claw, formed by four 4-vertices.
- P_n^4 is the path of length $n - 1$ formed by n vertices of degree 4.

Note that S_3^4 and P_4^4 must not exist in a tree T with $\Delta(T) = 4$ and its subgraph induced by all its 4-vertices being a forest of paths of length at most 2. Also, we have the following remarks for any tree T with $\Delta(T) = 4$, based on the above definitions:

1. Any star-node is of degree 3 or 4.
2. A tree has zero star-nodes if and only if it has less than three colored leaf-edges. A 3-LCT has precisely one 3-SN; a 4-LCT has either exactly two 3-SNs or exactly one 4-SN.

The following are some notations and remarks about our figures. Let $\{1, 2, 3, 4, 5\}$ be the color set of the game with five colors, and letter a, b, c be arbitrary colors in the color set. A *filled rectangle*, a *filled triangle*, an *unfilled circle*, an *unfilled rhombus*, and a *filled circle* represent a 4-vertex, a 3-vertex, a vertex of degree at most 3, a vertex of degree at least 3, and a vertex, respectively. A *dashed edge* and its two end vertices jointly represent an uncolored path of any length, and this path may be trivial. For example, in Figure II(g), vertex u is incident with the edge with color a if the path is trivial. For any vertex, denoted by q , in the figures, uncolored q -branches may exist, even though they may not be shown in the figures.

To facilitate the proof of the above theorem, we first introduce the concept of independent subtree. Throughout the game on T , colored edges can be interpreted as *boundaries* to decompose T into *subtrees*, and each boundary belongs to exactly two subtrees. When an edge is being colored, the subtree containing this edge will be split into two subtrees. In particular, when a leaf-edge is colored, the subtree which contains it will be split into a K_2 and the subtree itself. Since it is clear that subsequent coloring of any subtree will not affect another, we may consider each subtree independently.

In all the figures and lemmas in this paper, our depictions and illustrations are based on colors of only some particular subset of the color set $\{1, 2, 3, 4, 5\}$, e.g., colors 1 and 2 in Figure I(b), or colors 1, 2, 3 in Figure II(c). Nevertheless, by the symmetry of the colors in the color set $\{1, 2, 3, 4, 5\}$, the depictions and illustrations based on a particular subset have no loss of generality so that they can be applied to cases with any other subset of the color set. As a result, the lemmas are not only true for some particular subset but also true for any other subset.

We call the following Types 0 to 40 subtrees *permitted*. Subtrees which are not permitted are called *unpermitted*.

Permitted types

- Type 0: Completely colored subtrees.
- Type 1: Subtrees containing no star-nodes. In particular, completely colored stars with at most two leaves are of Type 1.
- Type 2: Subtrees containing exactly one star-node, except those in Figures I(a) to I(g). In particular, Completely colored stars with three or four leaves are of Type 2.

We remark that:

- i. The subtrees in Figures I(a) and I(b) are 3-LCT, and those in Figures I(c), I(d), I(e), I(f) and I(g) are 4-LCT.
- ii. Each colored edge of Figures I(a) and I(b) is incident with some 4-vertex.
- iii. The subtree in Figures I(c) has three colored star-edges; Figures I(d), I(e) and I(f) have two colored star-edges; and Figure I(g) has one colored star-edge.
- iv. In the subtrees in Figures I(a) - I(f) but not in Figure I(g), any colored star-edge does not share the same color with any colored edge which is incident with a neighbor of the star-node.

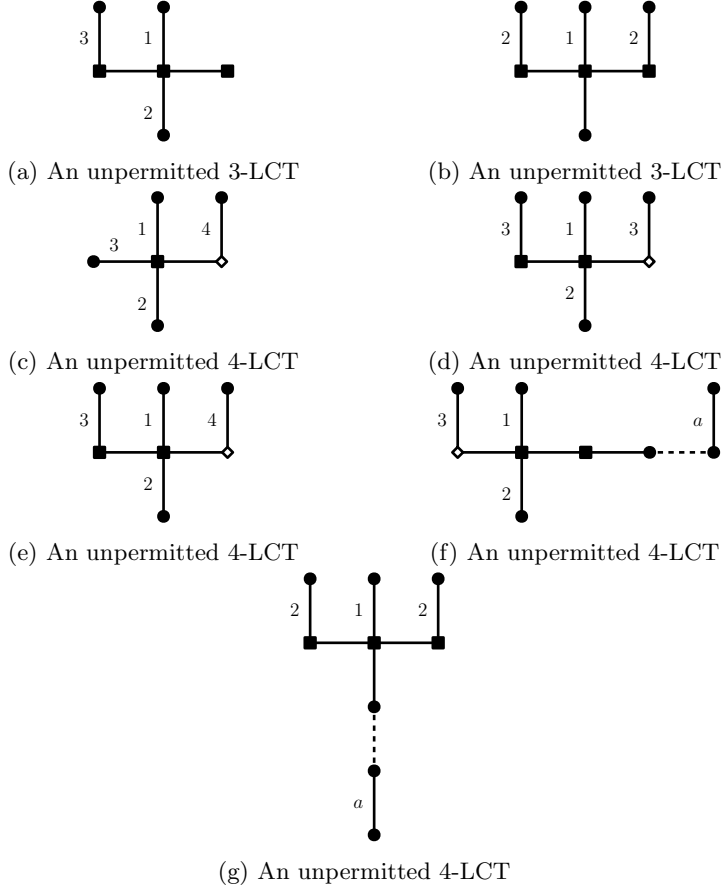
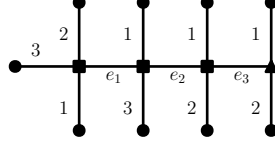


Figure I: The unpermitted 3-LCTs and 4-LCTs with one star-node.

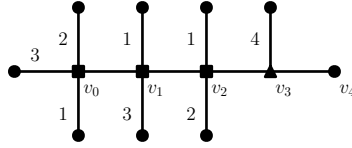
The above properties will be employed in the rest of this paper.

- Type 3: A subtree with the subgraph induced by all its uncolored edges being a path P of length m , where $1 \leq m \leq 3$. Moreover, for $m > 1$, at least two colors are available for each uncolored edge; the only uncolored edge has at least one available color for $m = 1$.
- Type 4: A subtree with the subgraph induced by all its uncolored edges being the union of a path $P = v_0v_1\dots v_m$, where $3 \leq m \leq 4$, and a tree T_s (maybe trivial). Also, this subtree has to satisfy the two requirements that (1) v_m is the only common vertex of P and T_s , and (2) all vertices of T_s are not incident with any colored edge. Moreover, the path P has to satisfy the condition that $v_{m-1}v_m$ has at least four available colors and each of the other uncolored edges of P has at least two available colors. An example of this type with $m = 4$ is shown in Figure II(b).
- Types 5-40: See Figures II, III, IV, and V.

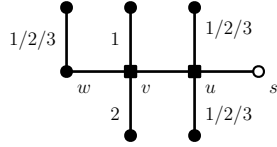
To show that the tree T is 5-edge-game-colorable, we will propose a strategy of Alice for picking an edge and assigning a color on it in each of her turns



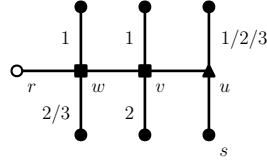
(a) An example of Type 3 subtrees. The path $e_1e_2e_3$ is the subgraph induced by all the uncolored edges e_1 , e_2 and e_3 . Colors 4 and 5 are available for e_1 and e_2 ; and colors 3, 4 and 5 are available for e_3 .



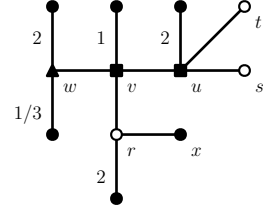
(b) An example of Type 4 subtrees. Colors 4 and 5 are available for v_0v_1 and v_1v_2 ; colors 3 and 5 are available for v_2v_3 ; and colors 1, 2, 3 and 5 are available for v_3v_4 .



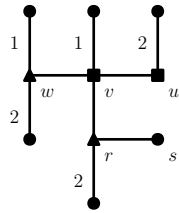
(c) Type 5. It is under the constraint that $d(w) = 2$ and the trivial constraint that the two colored edges incident with u do not have the same color.



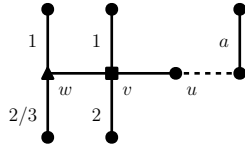
(d) Type 6



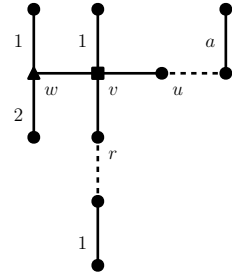
(e) Type 7. Vertex x exists if $d(r) = 3$.



(f) Type 8



(g) Type 9



(h) Type 10

Figure II: Types 3 - 10.

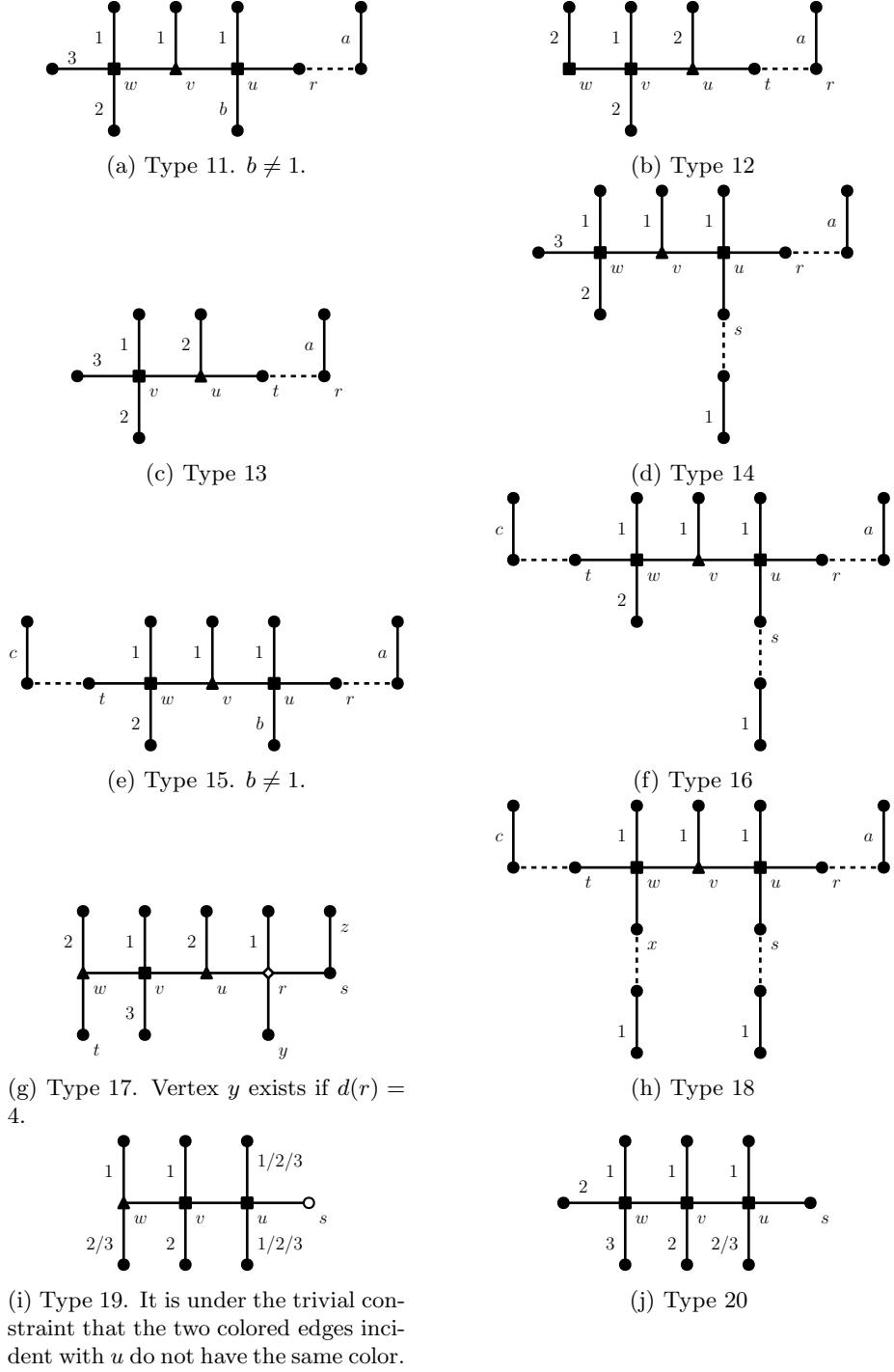
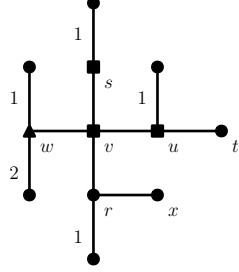
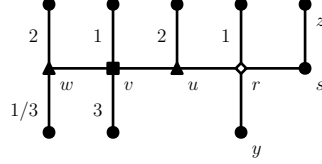


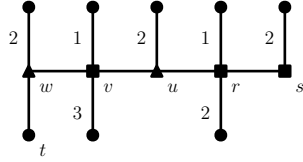
Figure III: Types 11 - 20.



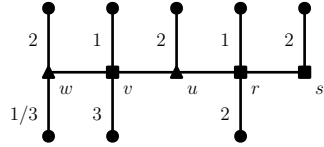
(a) Type 21. Since S_3^4 and P_4^4 are forbidden, $d(r), d(t) \leq 3$. Vertex x exists if $d(r) = 3$.



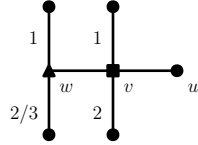
(b) Type 22. Vertex y exists if $d(r) = 4$.



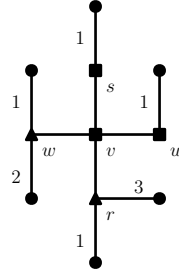
(c) Type 23



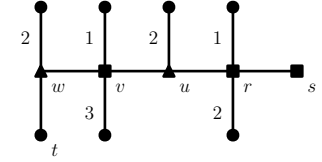
(e) Type 25



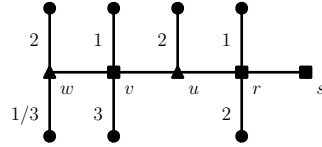
(g) Type 27



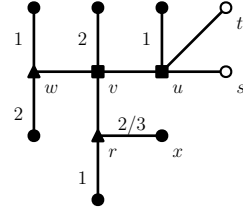
(i) Type 29



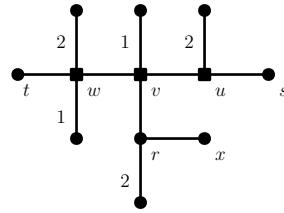
(d) Type 24



(f) Type 26

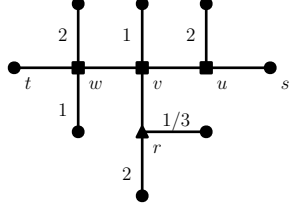


(h) Type 28

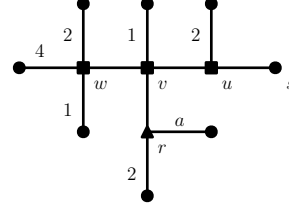


(j) Type 30. Since S_3^4 and P_4^4 are forbidden, $d(r), d(s), d(t) \leq 3$. Vertex x exists if $d(r) = 3$.

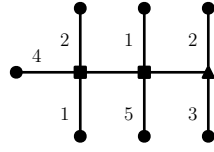
Figure IV: Types 21 - 30.



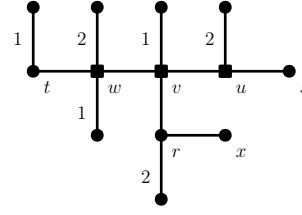
(a) Type 31



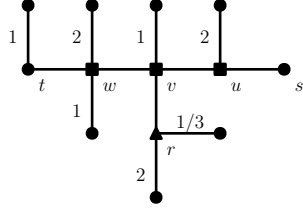
(b) Type 32. $a = 1$ or 3 .



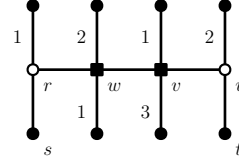
(c) Type 33



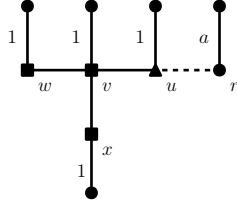
(d) Type 34. Since S_3^4 and P_4^4 are forbidden, $d(r), d(s), d(t) \leq 3$. Vertex x exists if $d(r) = 3$.



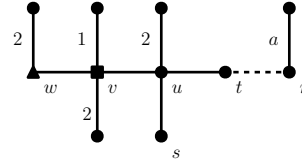
(e) Type 35



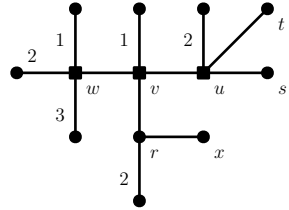
(f) Type 36. Vertex s (resp. t) exists if $d(r) = 3$ (resp. $d(u) = 3$).



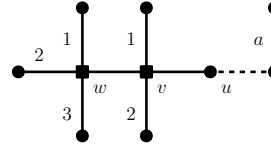
(g) Type 37



(h) Type 38. It is under the constraint that if $d(u) = 4$, then vertex s exists and $d(t), d(s) \leq 3$.



(i) Type 39. Vertex x exists if $d(r) = 3$.



(j) Type 40

Figure V: Types 31 - 40.

in the proof of Lemma 2. Before that, we first show that Theorem 1 can be derived from Lemma 2. Meanwhile, we give another lemma which ensures that after any Bob's move on a permitted subtree, at most one generated subtree is unpermitted.

LEMMA 2. *If all subtrees are permitted after a move of Alice, then Alice may keep all subtrees permitted right after her next move regardless of the move of Bob in this turn.*

Proof of Theorem 1. Under the game variant that Bob can skip, Alice loses the game on a finite tree if and only if she cannot find any available move in some of her turns. As a result, it suffices to show that Alice has a feasible move in each of her turns.

We will show that in each of Alice's turns, she can always find a move such that right after this move, all subtrees are permitted. This can be proved by induction on the number of Alice's turns. In her first turn, any subtree that Alice receives is either a 0- or 1-LCT. Hence right after her first move, each subtree has less than three colored edges, which implies all subtrees are of Type 0 or 1. Therefore, if Lemma 2 holds, by induction, she can ensure that all subtrees are permitted right after anyone of her moves. ■

LEMMA 3. *Suppose Bob colors an edge of a permitted subtree F and generates two subtrees. At most one of them is unpermitted.*

Proof of Lemma 3. First, any subtree containing at most two colored edges is permitted; therefore, at least six edges have been colored in the two subtrees in total if they are both unpermitted. Second, after Bob has colored an edge e of F , the two newly generated subtrees should have two more colored edges than that were in F , because e is double counted in the two subtrees. Consequently, the lemma holds if the number of colored edges of F is at most 3. We remark that any Type 1 subtree and any 3-LCT of Type 2 has at most three colored edges. In the following, we will deal with the rest of the permitted types.

- Suppose F is a 4-LCT of Type 2. A 4-LCT will be decomposed into two 3-LCT only if an edge on the path connecting two star-nodes is colored. As F has exactly one star-node, at least one of the newly formed subtrees has less than three colored edges, which is of Type 1.
- Suppose F is of Type 3 or 33. Bob can only color any edge of the uncolored path of length at most three. At least one of the subtrees formed is of Type 0 or 3.
- Suppose F is of Type 4. When Bob colors any edge of the uncolored path P , one of the two newly formed subtrees must be of Type 0, 1 or 3; when he colors any other edge, one of the two newly formed subtrees must contain only one colored edge.
- Suppose F is of Type 15, 16 or 18.

If Bob colors any edge incident with a colored edge, except wv and vu , a Type 1 or 2 subtree will be generated. He will generate a Type 1 subtree when he colors any edge not incident with a colored edge.

If he colors wv , the generated subtree which does not contain vertex t is of Type 9 (when F is of Type 15) or Type 10 (when F is of Type 16/18).

If he colors vu , the generated subtree which does not contain vertex r is of Type 9 (when F is of Type 15/16) or Type 10 (when F is of Type 18).

- Suppose F is of Type 23 or 24. If Bob colors any edge incident with a colored edge, except vu , a Type 1 or Type 2 subtree will be generated. He will generate a Type 1 subtree when he colors an edge not incident with any colored edge.

If he colors vu , the generated subtree which does not contain w is of Type 9.

- Suppose F is of Type 5, 7, 8, 9, 10, 11, 13, 14, 19, 20, 21, 22, 27, 28, 29, 32, 39 or 40. If Bob colors any edge incident with a colored edge, a Type 0/1/3 subtree will be generated. He will generate a Type 1 subtree when he colors an edge not incident with any colored edge.
- Suppose F is of Type 6, 12, 17, 25, 26, 30, 31, 34, 35, 36, 37 or 38. If Bob colors any edge incident with a colored edge, a Type 0/1/2/3 subtree will be generated. He will generate a Type 1 subtree when he colors an edge not incident with any colored edge. ■

In the next two sections, we will prove Lemma 2 using Lemma 3.

3. Proof of Lemma 2: Alice's strategy for Types 1 and 2 subtrees

In Lemma 3, we have shown that Bob generates at most one unpermitted subtree in his act on a permitted subtree. Therefore, in each turn of Alice, in order to ensure that all subtrees are permitted right after her move, her task is to turn F , the unpermitted subtree if any, or, otherwise, a non-completely colored permitted subtree, to two permitted subtrees. In the rest of this section, we shall propose a strategy of Alice for handling (i) subtrees of Types 1 and 2; and (ii) the unpermitted subtrees which would be made by any possible move of Bob on Types 1 and 2 subtrees. In the next section, we will introduce, one by one, strategies of Alice for handling (i) Types 3 to 40 subtrees; and (ii) the unpermitted subtrees which would be made by any possible move of Bob on Types 3 to 40 subtrees, respectively. Note that 1) all non-completely colored subtrees are permitted just before any move of Bob; and 2) a non-completely colored subtree may be a member of two different permitted types simultaneously, for example, Types 2 and 3. For this case, Alice may employ any one of the two strategies for the two distinct types of subtrees.

First, note that for case (i) (that is, handling Types 1 and 2 subtrees), all Types 1 and 2 subtrees have zero and one star-node, respectively. Second, we consider case (ii) (that is, handling the unpermitted subtrees which would be generated by any move of Bob on Types 1 and 2 subtrees). For those generated from a Type 1 subtree, at most one of the two generated subtrees contains a star-node. Any unpermitted subtree obtained from Type 2, which contains at most four colored edges and precisely one star-node, has three, four or five colored

edges. Moreover, any 5-LCT generated by coloring an edge of a permitted 4-LCT (which means this 4-LCT has one 4-SN) has precisely one 4-SN and one 3-SN. To conclude, F , the subtree on which Alice is going to act, has zero, one or two star-nodes. In the rest of this section, we will propose a unified strategy of Alice for handling cases (i) and (ii) together with respect to the three situations of the number of star-nodes in F . Unless specified otherwise, Alice may make use of any available color that can generate subtrees of the desired types.

(I) A non-completely colored F with no star-nodes:

- F is a 0-LCT or a 1-LCT:

Alice may color any edge to generate two Type 1 subtrees.

- F is a 2-LCT:

If the two colored edges are adjacent, Alice may color an edge adjacent to both these two colored edges to generate one Type 1 and one Type 2 subtree.

If the two colored edges are not adjacent, Alice may color an edge on the path containing the two roots of the colored edges to generate two Type 1 subtrees.

(II) A non-completely colored 3-LCT F with exactly one star-node:

- If F has three colored star-edges, Alice may color the remaining star-edge to make a Type 0 and a Type 1 subtree.
- If F has exactly two colored star-edges, Alice may color the star-edge on the leaf-path to make one Type 1 and a Type 0 (if $d(v) = 3$) or Type 2 (if $d(v) = 4$) subtree.
- Suppose F has exactly one colored star-edge. If $d(v) = 3$, Alice may color any star-edge to make one Type 1 and one 3-LCT. This 3-LCT is of Type 2 since an unpermitted 3-LCT must have a SN of degree 4.

When $d(v) = 4$, we denote the two vertices adjacent to v and on the two leaf-paths by u and w . We also denote the vertex adjacent to v but not on any leaf-path by t . When at least one of vertices u and w is a 4-vertex, without loss of generality, we assume $d(u) = 4$. Then, Alice may color vu to generate a Type 1 subtree and a 3-LCT. Given that S_3^4 is forbidden, the star-node v of this 3-LCT is adjacent to at most one 4-vertex in this 3-LCT, which means this 3-LCT is not the one in Figure I(a) nor I(b). This implies the 3-LCT is of Type 2. When both u and w are not of degree 4, Alice may color vt to generate a Type 1 subtree and a 4-LCT with 2 colored star-edges. This 4-LCT is of Type 2 since its SN v is not adjacent to any 4-vertex in this 4-LCT.

- Suppose F has no colored star-edge, Alice may use a strategy similar to that for the case that F having exactly one colored star-edge:

If $d(v) = 3$, Alice may color any star-edge to make one Type 1 and one 3-LCT of Type 2.

If $d(v) = 4$, we denote the three vertices adjacent to v and on the three leaf-paths by u , w and r . t denotes the vertex adjacent to v but not on

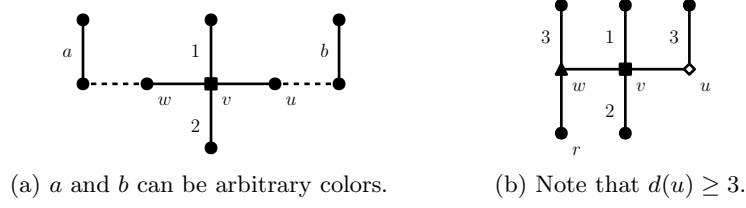


Figure VI: Some subtrees F having exactly two colored star-edges

any leaf-path. When at least one of u , w and r is a 4-vertex, without loss of generality, we assume $d(u) = 4$. Then, Alice may color vu to generate a Type 1 subtree and a 3-LCT of Type 2. When all u , w and r are not of degree 4, Alice may color vt to generate a Type 1 subtree and a 4-LCT with 1 colored star-edge and of Type 2.

(III) A non-completely colored 4-LCT F with exactly one star-node:

- If F has exactly three colored star-edges, Alice may color the remaining star-edge to make one Type 0 and one Type 1 subtree.
- Suppose F has exactly two colored star-edges, then F can be represented by the subtree in Figure VI(a). Note that this F is symmetric. Also, only colors 1 and 2 are used in the figure so colors 3, 4 and 5 are identical by symmetry.

If $a = 1$ or 2 (resp. $b = 1$ or 2), Alice may color vu (resp. vw) with 3/4/5 to generate one Type 1 subtree and one 4-LCT T_v with three colored star-edges. The four colored edges of T_v have three different colors only, which means it is not the one in Figure I(c); so T_v is of Type 2.

Suppose both a and b are not in $\{1, 2\}$. Alice may color vu by a or vw by b , if feasible, to generate one Type 1 subtree and one 4-LCT of Type 2 with three colored star-edges. Such two acts of Alice are both impossible if only if $a = b = 3$ and the edges with colors a and b are incident with w and u , respectively. We then discuss alternative strategies of Alice based on the degrees of w and u .

Suppose $d(u) = d(w) = 4$, then F is the unpermitted 4-LCT in Figure I(d), which means this F was just generated from a permitted subtree by Bob so some edge of this F was just colored by Bob. If Bob just colored the edge with color $b = 3$, F was generated either from the unpermitted 3-LCT in Figure I(a) or the 4-LCT in Figure I(f), which leads to a contradiction. If Bob just colored the edge with color 1 or 2, F was generated either from the unpermitted 3-LCT in Figure I(b) or the 4-LCT in Figure I(g), which are both impossible. To conclude, at most one of u and w is a 4-vertex. We will discuss it with two cases: (1) $d(w), d(u) \geq 3$; or (2) at least one of w and u is of degree 2.

(1) Without loss of generality, assume $d(w) = 3$ and $d(u) \geq 3$; hence, F can be represented by the one in Figure VI(b). Alice may color rw with 1 to make one Type 1 and one Type 9 subtree.

(2) Without loss of generality, assume $d(w) = 2$. Alice may color vu with color 4 to generate a Type 3 and a Type 1 subtree.

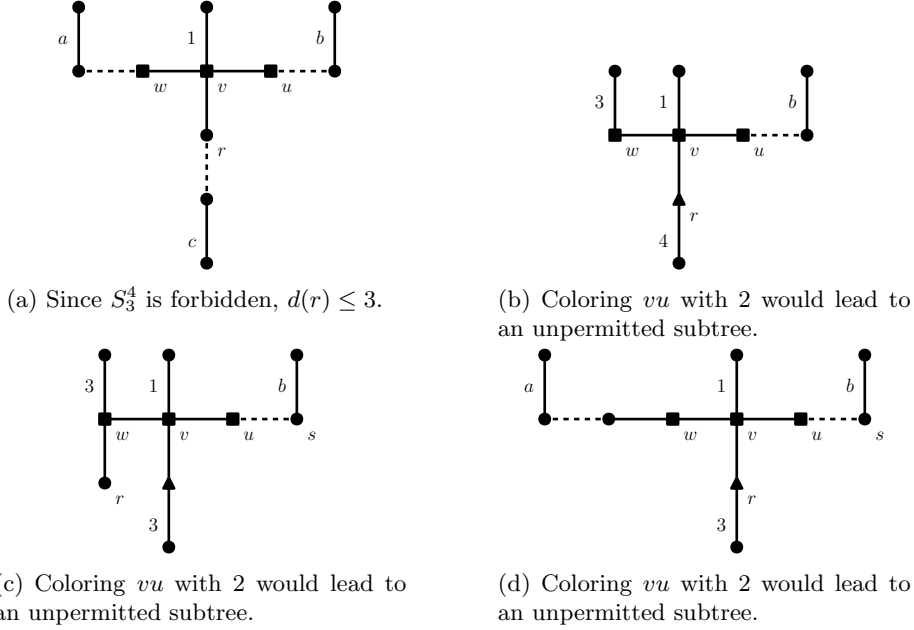


Figure VII: Some subtrees F having exactly one colored star-edge.

- Suppose F has exactly one colored star-edge. If v is adjacent to exactly one 4-vertex, denoted by u , Alice may color vu to generate one Type 1 subtree and one 4-LCT with exactly two colored star-edges. This 4-LCT is of Type 2 since its SN v is not adjacent to any 4-vertex. Similarly, if v is not adjacent to any 4-vertex, Alice may color any star-edge to generate one Type 1 subtree and one 4-LCT of Type 2 with exactly two colored star-edges.

If v is adjacent to two 4-vertices w and u , F can be represented by the configuration in Figure VII(a). Note that in F , $d(r) \leq 3$ because S_3^4 is forbidden. In F , if Alice colors vu , the generated 4-LCT with two colored star-edges, denoted by T_v , may be unpermitted. Furthermore, note that in any unpermitted 4-LCT with one 4-SN and two colored star-edges, i.e., the one in Figure I(e), I(d) or I(f), the 4-SN is adjacent to a 4-vertex and a vertex with degree at least 3; therefore, T_v is unpermitted only if $d(r) = 3$. In the following, we discuss all possible situations of F in which coloring vu with an arbitrary color may generate an unpermitted T_v . For situations not mentioned below, Alice may color vu with any available color to generate a Type 1 and a Type 2 subtree.

- If coloring vu may generate the subtree in Figure I(e), F can be represented by the configuration in Figure VII(b). Alice may color vu with color $d \in \{3, 4\} \setminus \{b\}$ to generate a T_v of Type 2.
- If coloring vu may generate the subtree in Figure I(d), F can be represented by the configuration in Figure VII(c). Note that color 3 is not available for vu if and only if $u = s$ and $b = 3$. Therefore, if $u = s$ and $b = 3$, Alice may color wr with 1 to generate a Type 1 and

a Type 30 subtree; otherwise, Alice may put 3 on vu to generate a Type 2 and a Type 1 subtree.

- If coloring vu may generate the subtree in Figure I(f), F can be represented by the configuration in Figure VII(d). Note that color 3 is not available for vu if and only if vertex $u = s$ and $b = 3$. Therefore, if $u = s$ and $b = 3$, Alice may color wv with 3 to generate a Type 1 and a Type 2 subtree; otherwise, Alice may put 3 on vu to generate a Type 1 and a Type 2 subtree.

- Suppose F has no colored star-edges. If v is not adjacent to any 4-vertex, Alice may color any star-edge to generate a Type 1 subtree and a 4-LCT with exactly one SN v and colored star-edge. This 4-LCT is of Type 2 because its SN v is not adjacent to any 4-vertex. Note that a 4-LCT with exactly one colored star-edge and star-node is unpermitted if and only if it is the subtree in Figure I(g), which has a star-node being adjacent to two 4-vertices.

Similarly, if v is adjacent to at least one 4-vertex, denoted by u , Alice may color vu to generate one Type 1 subtree and one 4-LCT. This 4-LCT is of Type 2 since its star-node v is adjacent to at most one 4-vertex.

(IV) F is a 4-LCT with two non-adjacent 3-SNs v and u .

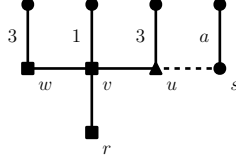
If $d(v) = d(u) = 3$, Alice may color any edge on the star-path to generate two Type 2 subtrees.

Suppose at least one of v and u is of degree 4. Since v and u are both 3-SNs in F , without loss of generality, we assume that $d(v) = 4$. Let r be the neighbor of v on the star-path. If Alice colors vr , she would generate a 3-LCT with star-node v and the other 3-LCT with star-node u , denoted by T_v and T_u , respectively.

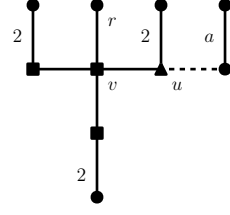
We first prove by contradiction that T_u must be permitted, regardless of the color put on vr . Suppose T_u is unpermitted, i.e., T_u is the subtree in Figure I(a) or I(b), in which any colored edge is incident with a 4-vertex and this 4-vertex is either the star-node or a neighbor of the star-node. Consequently, because vr was colored, r should be a 4-vertex in T_u and F ; moreover, r is a neighbor of u in T_u and F , given that u is the star-node of T_u . Then, in F , we have $d(r) = d(u) = d(s) = 4$, where s is a neighbor of the 3-SN u and $s \neq r$, given that the star-node in an unpermitted 3-LCT is adjacent to two 4-vertices. Consequently, in F , the path $vrus$ is P_4^4 , which is forbidden.

Second, we discuss the color that Alice should put on vr such that T_v is also permitted. In F , there are exactly two colored edges which can be connected to v by leaf-paths not containing u . We denote the color(s) on these two colored edges by a and b .

- If a or b is available for vr , Alice may put a or b on vr such that in T_v , a colored star-edge and a colored edge which is not a star-edge share the same color, which implies T_v must not be the subtree in Figure I(a) nor I(b).
- If both a and b are not available for vr , there are only two possibilities of F . The first one is v is incident with two colored edges; then, Alice may



(a) Coloring vu must lead to the subtree in Figure I(a).



(b) Coloring vu must lead to the subtree in Figure I(b).

Figure VIII: Some subtrees F having exactly two adjacent 3-SNs v and u such that coloring vu must lead to an unpermitted 3-LCT

color vr with any available color to generate a T_v with three colored star-edges, which is of Type 2. The second situation is $a = b$ and v is incident with exactly one colored star-edge; then, Alice may also color vr with any available color. After that, in T_v , a colored star-edge and a colored edge which is not a star-edge share the same color, which means T_v is of Type 2.

(V) F is a 4-LCT with two adjacent 3-SNs v and u .

If Alice colors vu , she would generate a 3-LCT with star-node v and the other 3-LCT with star-node u , denoted by T_v and T_u , respectively.

We now prove that at most one of T_v and T_u is unpermitted. Suppose at least one of T_v and T_u is unpermitted. Since v and u are both 3-SNs in F , without loss of generality, we assume that T_v is unpermitted. Then, in T_v , the 3-SN v is adjacent to two 4-vertices. Hence in F , v is also of degree 4 and adjacent to those two 4-vertices, which means $d(u) = 3$ in F , given that S_3^4 is forbidden. In addition, $d(u) = 3$ implies T_u must be permitted. In the following, when one of T_v and T_u is unpermitted, without loss of generality, we assume T_v is unpermitted.

We then discuss all situations of F in which coloring vu with any available color must generate an unpermitted 3-LCT, i.e., an unpermitted T_v . For situations not mentioned below, Alice may color vu with an appropriate color to generate two 3-LCTs of Type 2.

- If coloring vu must generate the subtree in Figure I(a), F can be represented by the configuration in Figure VIII(a). Note that:
 - Since the subtree in Figure I(a) has the 3-SN with two colored star-edges and v would be the 3-SN in T_v , v in F should be incident with exactly one colored star-edge (without loss of generality, with color 1);
 - based on the configuration in Figure I(a), w should be incident with a colored edge with a color not equal to 1 (without loss of generality, with color 3);
 - u should be incident with a colored edge with color 3; otherwise, Alice may color vu with 3 to generate two Type 2 subtrees; and

- if a color which is not 1 nor 3, e.g., 2, is now put on vu , the subtree in Figure I(a) will be generated.

Then, Alice's alternative move is to color vr with 3 to generate a Type 1 and a Type 9 (if $s = u$) or Type 12 (if $s \neq u$) subtree.

- If coloring vu must generate the subtree in Figure I(b), F can be represented by the configuration in Figure VIII(b). Using an analysis similar to that for the last situation of F , we know that u should be incident with a colored edge with color 2; otherwise, Alice may color vu with 2 to generate two Type 2 subtrees. Moreover, if a color which is not 2, e.g., 1, is now put on vu , the subtree in Figure I(b) will be generated. Alice's alternative move is to color vr with 2 to generate a Type 1 and a Type 37 subtree.

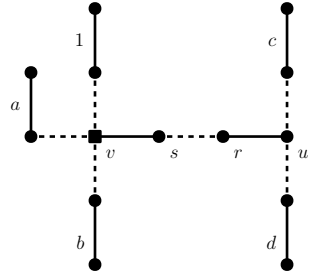
(VI) F is a 5-LCT with a 4-SN v and 3-SN u which are not adjacent.

F in this case can be represented by the configuration in Figure IX(a). If vs is colored, F is split into one 4-LCT with 4-SN v (denoted by T_v) and one 3-LCT with 3-SN u (denoted by T_u). We will first prove that no matter what color is put on vs , T_u is of Type 2, i.e., not the subtree in Figure I(a) nor I(b). After that, we will describe, under different situations of F , what color Alice should put on vs such that T_v is also of Type 2. These mean that Alice can always decompose F into two Type 2 subtrees by coloring vs .

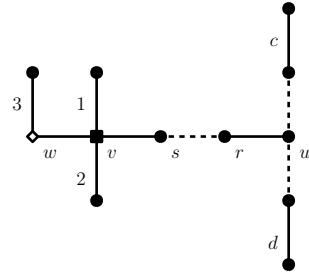
We now prove by contradiction that T_u is of Type 2. Suppose T_u is the subtree in Figure I(a) or I(b). Then, in F , $s = r$ and $d(s) = 4$; also, in F , $d(u) = 4$ and u is adjacent to another 4-vertex x which is not the vertex s . Hence the path $vsux$ is P_4^4 , which is forbidden.

Then, we discuss all possible situations of F in which coloring vs with an arbitrary color may generate an unpermitted T_v , i.e., the subtree in Figure I(c), I(d), I(e), I(f) or I(g). We will show that Alice can always find a suitable color c for coloring vs such that the generated T_v is of Type 2. Because in the subtrees in Figure I(c)-I(f), any colored star-edge does not share the same color with any colored edge which is incident with a neighbor of the star-node v , Alice's requirement on c is it should be a color on a colored edge which is incident with a neighbor of v . For situations not mentioned below, Alice may color vs with any available color to generate two Type 2 subtrees.

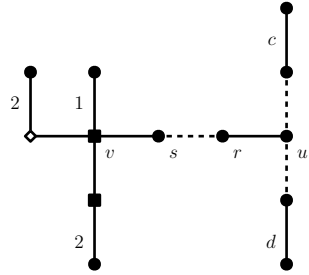
- If coloring vs may generate the subtree in Figure I(c), F can be represented by the subtree in Figure IX(b). Then, Alice may put 3 on vs .
- If coloring vs may generate the subtree in Figure I(d), F can be represented by the subtree in Figure IX(c). Then, Alice may put 2 on vs .
- If coloring vs may generate the subtree in Figure I(e), F can be represented by the subtree in Figure IX(d). Then, Alice may put 2 or 3 on vs .
- If coloring vs may generate the subtree in Figure I(f), F can be represented by the subtree in Figure IX(e). Then, Alice may put 2 on vs .
- If coloring vs may generate the subtree in Figure I(g), F can be represented by the subtree in Figure IX(f). Then, Alice may put 1 on vs .



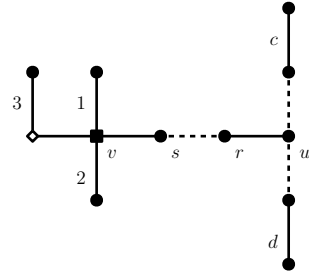
(a) The 4-SN v and 3-SN u .



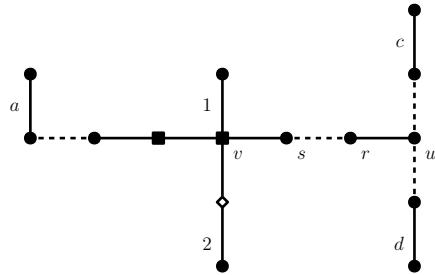
(b) Coloring vs with 4 would lead to an unpermitted subtree.



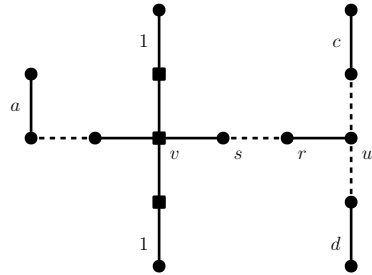
(c) Coloring vs with 3 would lead to an unpermitted subtree.



(d) Coloring vs with 4 would lead to an unpermitted subtree.



(e) Coloring vs with 3 would lead to an unpermitted subtree.



(f) Coloring vs with 2 would lead to an unpermitted subtree.

Figure IX: Some subtrees F having exactly two non-adjacent star-nodes

(VII) F is a 5-LCT with a 4-SN v and 3-SN u which are adjacent.

We prove by contradiction that there is always an available color for vu , that is, vu should not be surrounded by edges with five colors on them. Suppose it is not. Before Bob's last move, at least four colors were on the edges surrounding vu , which implies the subtree was the unpermitted one in Figure I(c). This is impossible since an unpermitted F must be generated from a permitted subtree by Bob.

If Alice colors vu , she will generate one 4-LCT with 4-SN v (denoted by T_v) and one 3-LCT with 3-SN u (denoted by T_u). So, Alice may color vu if only if T_v and T_u will be both permitted. We first show that T_u must be of Type 2. If $d(u) = 3$, T_u is of Type 2. If $d(u) = 4$, since S_3^4 is forbidden and $d(v) = 4$, we conclude that the 3-SN u is adjacent to at most one 4-vertex in T_u , which means T_u is of Type 2.

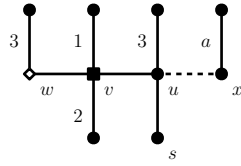
T_v is of Type 2 unless it is the subtree in Figure I(c), I(d), I(e), I(f) or I(g). In the following, we will discuss all possible configurations of F in which coloring vs must lead to an unpermitted T_v , and describe the corresponding alternative moves of Alice. For situations not mentioned below, Alice may color vu with an appropriate color to generate two Type 2 subtrees.

- If coloring vu must lead to the subtree in Figure I(e), F can be represented by the subtree in Figure X(c). In F , note that u should be incident with edges colored with 2 and 3 so that coloring vu with 4 or 5 would lead to the subtree in Figure I(e). We discuss this F with two cases: (1) $d(r) = 3$ and (2) $d(r) = 4$.
 1. Given that r is a 3-vertex, Alice may color wv with 3 to generate one Type 1 and one Type 4 (when $d(u) = 3$) or Type 6 (when $d(u) = 4$) subtree.
 2. Given that r is a 4-vertex and S_3^4 is forbidden, we conclude that $d(u) = 3$. Alice may also color wv with 3 to generate one Type 1 and one Type 9 subtree.
- If coloring vu must lead to the subtree in Figure I(f), F can be represented by the subtree in Figure X(d). In F , note that u should be incident with an edge with color 2 so that coloring vu with 3/4/5 would lead to the subtree in Figure I(e). Because S_3^4 is forbidden, at most one of r and u is of degree 4.

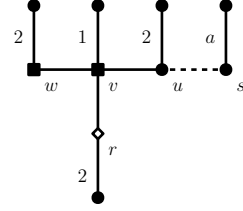
Suppose $u = s$. Alice may color wv with 2 to generate a Type 1 subtree, and a Type 9 (if $d(u) = 3$) or Type 6 (if $d(u) = 4$) subtree.

Suppose $u \neq s$. Alice may also color wv with 2 to generate a Type 1 subtree, and a Type 38 (if $d(r) = 3$) or Type 12 (if $d(r) = 4$) subtree, given that S_3^4 and P_4^4 are forbidden.
- If coloring vu must lead to the subtree in Figure I(g), F can be represented by the subtree in Figure X(e). In F , note that each of u, w and r is incident with an colored edge with the same color, i.e., color 1. Also, because S_3^4 is forbidden, we have $d(u) = 3$ and $d(t) \leq 3$.

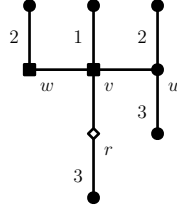
If t is not incident with an edge with color 1, Alice may color vt with 1 to generate a Type 1 and a Type 37 subtree.



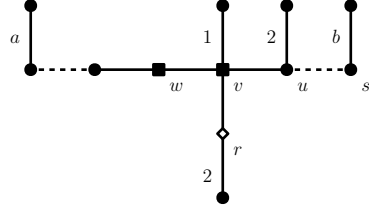
(a) Coloring vu with 4 would lead to the subtree in Figure I(c). Vertex s exists if $d(u) = 4$.



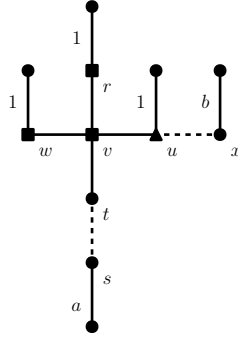
(b) Coloring vu with 3 would lead to the subtree in Figure I(d).



(c) Coloring vu with 4 would lead to the subtree in Figure I(e).



(d) Coloring vu with 3 would lead to the subtree in Figure I(f).



(e) Coloring vu with 2 would lead to the subtree in Figure I(g). Since S_3^4 is forbidden, $d(u) = 3$ and $d(t) \leq 3$.

Figure X: Some subtrees F having exactly two adjacent star-nodes, which are the 4-SN v and 3-SN u .

Suppose t is incident with an edge with color 1, i.e., $t = s$ and $a = 1$. Then, F is now of Type 21 if $u = x$. If $u \neq x$, we let y be the neighbor of u on the path connecting u and x . Alice may color uy with any available color to generate a Type 21 and a Type 1 subtree.

- If coloring vu must lead to the subtree in Figure I(c), F can be represented by the subtree in Figure X(a). In F , note that u must be incident with an edge colored with 3 so that only colors 4 and 5 are available for vu . We now describe alternative moves of Alice for two cases: (1) u is incident with two colored edges (i.e., $x = u$) and (2) u is incident with one colored edge ($x \neq u$).

1. When $x = u$, we consider two situations: (i) $a \neq 1, 2$ and (ii) $a = 1$ or 2.

(i) Without loss of generality, assume $a = 4$. Note that $d(w) \geq 3$, and a color of the colored star-edges incident with u was just added by Bob in his last move on a Type 2 subtree. Since the trees in Figure I(d) and I(e) are unpermitted, we have $d(u) \leq 3$, which implies $d(u) = 3$. Alice may put 4 on wv to generate one Type 1 and one Type 3 subtree.

(ii) If $a = 1$ or 2, without loss of generality, assume $a = 1$. For the case that $d(u) = 3$, Alice may put 4 on wv to generate one Type 1 and one Type 3 subtree. If $d(u) = 4$, Alice may put 2 on us to generate one Type 1 and one Type 40 subtree.

2. When $x \neq u$ and $d(u) = 3$, Alice may put 1 or 2 (at least one of them is available) on the star-edge incident with u on the leaf-path connecting u and x to generate one Type 1 and Type 6 subtree. We will show that $d(u) \neq 4$, using the fact that either the color 3 of the edge incident with u or the color a was just added by Bob in his last move on a permitted Type 2 subtree.

Suppose the color 3 of the edge incident with u was just added. Since $d(w) \geq 3$, u cannot be a 4-vertex; otherwise, the subtree after the color 3 is removed will be the one in Figure I(f), which contradicts that any unpermitted F was generated from a permitted subtree.

Similarly, if the color a was just added, u cannot be a 4-vertex; otherwise, the subtree after the color a is removed will be the one in Figure I(d).

- If coloring vu must lead to the subtree in Figure I(d), F can be represented by the subtree in Figure X(b). In F , note that u, w, r should have the same color (i.e., color 2) on the edges incident with them so that coloring of vu with 3, 4 or 5 would lead to the subtree in Figure I(d). Note that and either the color 2 of the colored edge incident with u or the color a of the colored edge incident with s was just added by Bob. Because the subtree in Figure I(g) is unpermitted, we conclude that at most one of w and r is of degree 4, which implies $d(r) = 3$.

In the following, we will introduce alternative strategies of Alice for two cases: (1) $u = s$ and (2) $u \neq s$.

1. If $u = s$, then s is now incident with two edges with colors 2 and a ; hence we may assume $a = 1$ or 3. Alice may color wv with 3 to generate a Type 1 and a Type 4 (if $d(u) = 3$) or Type 6 (if $d(u) = 4$).
2. Suppose $u \neq s$. Let t be the neighbor of u which is on the path connecting u and s . We consider two situations: (i) $d(u) = 3$ and (ii) $d(u) = 4$.
 - (i) Suppose $d(u) = 3$. If t is not incident with an edge colored with 1, Alice may color ut with 1 to generate a Type 8 and a Type 1 subtree. If t is incident with an edge colored with 1, i.e., $t = s$ and $a = 1$, Alice may color wv with 3 to generate a Type 1 and a Type 4 (if $d(t) = 2$) or 17 (if $d(t) \geq 3$) subtree.
 - (ii) When $d(u) = 4$, we let x be the neighbor of u which is of the uncolored u -branch. If t is not incident with an edge colored with 1, Alice may color ut with 1 to generate a Type 30 and a Type 1 subtree. If t is incident with an edge colored with 1, i.e., $t = s$ and $a = 1$, Alice may color ux with 1 to generate a Type 34 and a Type 1 subtree.

4. Proof of Lemma 2: Alice's strategies for Types 3 to 40 subtrees

We will give, one by one, Alice's strategies for handling (i) subtrees of each of Types 3 to 40; and (ii) any unpermitted subtree generated by Bob's move on subtrees of Types 3 to 40, respectively. Alice may need to use an appropriate color to generate the desired types of subtrees.

Type 3 subtrees: [Recall the definition: A subtree with the subgraph induced by all its uncolored edges being a path P of length m , where $1 \leq m \leq 3$. Moreover, for $m > 1$, at least two colors are available for each uncolored edge; the only uncolored edge has at least one available color for $m = 1$.]

(i) When Alice is going to act on a Type 3 subtree, if $m = 3$, she may color the middle edge to generate two Type 3 subtrees of length 1. If $m < 3$, she may color any edge to generate a Type 0 and a Type 3 subtree (for $m = 2$), or two Type 0 subtrees (for $m = 1$).

(ii) If $m = 3$ and Bob has made an unpermitted subtree by acting on an end edge of P , Alice may color the middle edge of P to generate a Type 0 subtree and a Type 3 subtree with $m = 1$.

Type 4 subtrees: [Recall the definition: A subtree with the subgraph induced by all its uncolored edges being the union of a path $P = v_0v_1\dots v_m$, where $3 \leq m \leq 4$, and a tree T_s (maybe trivial). Also, this subtree has to satisfy the two requirements that (1) v_m is the only common vertex of P and T_s , and (2) all vertices of T_s are not incident with any colored edge. Moreover, the path P has to satisfy the condition that $v_{m-1}v_m$ has at least four available colors and each of the other uncolored edges of P has at least two available colors.]

(i) We observe that in all Type 4 subtrees, $d(v_{m-1}) \leq 3$ and v_{m-1} is incident with at most one colored edge. Alice may put an appropriate color on $v_{m-1}v_m$ such that at least two colors are still available for $v_{m-2}v_{m-1}$ to generate a Type 1 and a Type 3 subtree.

(ii) After Bob has acted on a Type 4 subtree, Alice may respond as follows:

- If Bob has dyed v_0v_1 (resp. v_2v_3), Alice may dye v_2v_3 (resp. v_0v_1) to make a Type 1 subtree containing v_2v_3 (resp. a Type 0 subtree containing v_0v_1), and a Type 3 subtree with only one uncolored edge v_1v_2 .
- If he has dyed v_3v_4 (only for $m = 4$), Alice may dye v_1v_2 to make a Type 3 subtree with only one uncolored edge v_0v_1 and the other Type 3 subtree with only one uncolored edge v_2v_3 .
- If he has dyed v_1v_2 , Alice may dye $v_{m-1}v_m$ to make a Type 0 subtree containing v_1v_2 and v_2v_3 (when $m = 3$) or a Type 3 with only one uncolored edge v_2v_3 (when $m = 4$), and a Type 1 with only one colored edge $v_{m-1}v_m$.
- If he has dyed anyone of other edges, Alice may dye $v_{m-1}v_m$ to make a Type 3 subtree with only two uncolored edges (when $m = 3$) or only three (when $m = 4$), and a Type 1 subtree with only two colored edges.

Types 5, 19 and 20 subtrees:

We propose a unified strategy of Alice for any subtree H of Type 5, 19 or 20. Note that since P_4^4 is forbidden, $d(s) \leq 3$ for any Type 20 subtree. Also, at least colors 4 and 5 are available for wv, vu and us . Therefore, if $d(s) = 1$ (resp. $d(s) = 2$), H is of Type 3 (resp. Type 4 with $m = 4$) and Alice can use the corresponding strategies to handle H . So, we assume $d(s) = 3$ in the following.

- (i) Alice can color vu to generate one Type 3 and one Type 2 subtree.
- (ii) After Bob has colored an edge of H , Alice may respond as follows:
 - If Bob colored any edge incident with s , except us , he generated a Type 4 and a Type 1 subtree. So, all these generated subtrees are permitted and Alice can use the corresponding strategies to handle these subtrees.
 - If Bob colored us , Alice may color vu to generate one Type 3 and one Type 0 subtree.
 - If Bob colored anyone of other edges, Alice may color us with an available color in $\{1, 2, 3\}$ to generate a Type 3 subtree and a Type 1 subtree with at most two colored edges.

Type 6 subtrees:

- (i) Alice may color us with any available color in $\{1, 2, 3\}$ to generate one Type 19 and one Type 1 subtree.
- (ii) If Bob has colored an edge, Alice may respond as follows:
 - If Bob colored us (resp. wv) with 4, Alice may put 4 on wv (resp. us) to generate a Type 2 and Type 3 subtree.
 - If he colored vu (resp. rw) with a , she may color rw (resp. vu) with a if available or other colors if not to generate a Type 1 and a Type 3 subtree.
 - If he colored an edge incident with r , except rw , she may color us with any available color in $\{1, 2, 3\}$ to generate a Type 3/4 (since $d(r) \leq 3$) and a Type 1 subtree. If Bob colored another edge of an uncolored r -branch, Alice may color rw with any available color in $\{1, 2, 3\}$ to generate one Type 1 and one Type 4 subtree.

- If he colored an edge of an uncolored s -branch, she may color us with any available color in $\{1, 2, 3\}$ to generate one Type 19 and one Type 1 subtree.

Types 7 and 39 subtrees:

Note that $d(w) = 4$ in Type 39 subtrees, which implies vertices r, s and t are not of degree 4, given that S_3^4 and P_4^4 are forbidden. Therefore, in both Type 7 and 39 subtrees, vertices r, s and t are not of degree 4. We will provide a unified strategy of Alice for any subtree H which is of Type 7 or 39. Note that vertices t and s are identical by symmetry.

- Alice may color vu with 3 to generate a Type 1 and a Type 9 (if H is of Type 7) or 40 (if H is of Type 39) subtree.
- If Bob has colored an edge, Alice may respond as follows.

- If he colored wv with 4, she may color us with 4 to generate a Type 1 and a Type 4 (if $d(r) = 2$) or Type 6 (if $d(r) = 3$) subtree.
- If he colored vr with 3 (resp. 4), she may color vu with 4 (resp. 3) to generate a Type 3 and a Type 1 subtree.
- Suppose $d(r) = 3$. If he colored rx with 3, she may color vu with 3 to generate a Type 3 and a Type 1 subtree.
- Suppose $d(r) = 3$. If he colored rx (resp. an edge in an uncolored s -branch) with $a \neq 3$, she may color vr with 3 to generate a Type 9 (when H is of Type 7) or Type 40 (when H is of Type 39) subtree and a Type 0 (resp. Type 2) subtree.
- If he colored vu with 4, she may color vr with 3 to generate a Type 3 and a Type 1 subtree.
- If he colored us with 3, she may color vr with 3 to generate a Type 1 and a Type 19 (if H is of Type 7) or Type 20 (if H is of Type 39) subtree.
- If he colored us with color $a \neq 3$ or an edge in an uncolored s -branch, she may color vu with 3 to generate a Type 9 (if H is of Type 7) or Type 40 (if H is of Type 39) subtree and a 3-LCT with 3-SN u , denoted by T_u . In T_u , because $d(s), d(t) \leq 3$, u is not adjacent to two 4-vertices, which means T_u is of Type 2.

Type 8 subtrees:

- Alice may color vu with 3 to generate a Type 1 and a Type 9 subtree.
 - If Bob has colored an edge, Alice may respond as follows.
- If he colored wv with 3, she may color rs with 1 to generate a Type 9 and a Type 1 subtree.
 - If he colored vr with 3, he generated a Type 1 and a Type 9 subtree.
 - If he colored an edge in an uncolored r -branch, she may color vr to generate a Type 9 and a Type 0/2 subtree.
 - If he colored an edge in an uncolored u -branch, she may color vu to generate a Type 9 and a Type 2 (since S_3^4 is forbidden) subtree.

Types 9 and 40 subtrees:

We will propose a unified strategy for both Type 9 and 40 subtrees.

(i) Alice may color vu with any available color to generate one Type 3 and one Type 1 subtree.

(ii) If Bob has colored an edge, Alice may respond as follows:

- If he colored wv , Alice may color vu to generate a Type 0 and a Type 1 subtree.
- If he colored an edge of a u -branch not containing v , Alice may color vu with any available color to generate a Type 3 subtree and a 2-/3-LCT containing u , denoted by T_u . T_u is of Type 2 if it has two colored edges. Suppose T_u is a 3-LCT. Because S_3^4 and P_4^4 are forbidden, in T_u , u is neither the middle nor the end vertex of a P_3^4 ; therefore, T_u is neither the subtree in Figure I(b) nor I(a), which implies T_u is of Type 2.

Type 10 subtrees:

(i) Alice may color vu or vr with any available color to generate a Type 9 and a Type 1 subtree.

(ii) If Bob has colored an edge, Alice may respond as follows:

- If he colored wv , she may color vu with any available color to generate a 4-LCT of Type 2 and a Type 1 subtree.
- If he colored an edge of a u -branch not containing v , she may color vu with any available color to generate a Type 9 subtree and a 2-/3-LCT containing u , denoted by T_u . T_u is of Type 2 if it has two colored edges. Suppose T_u is a 3-LCT. Because S_3^4 and P_4^4 are forbidden, in T_u , u is neither the middle nor an end vertex of a P_3^4 ; therefore, T_u is neither the subtree in Figure I(b) nor I(a), which implies T_u is of Type 2.

The case that Bob colored an edge of a r -branch not containing v can be analyzed similarly.

Types 11, 14, 15, 16 and 18 subtrees:

We provide a unified strategy for all the five types of subtrees. Denote the subtree that Bob is acting on by Q . Note that tw and ur are identical by symmetry when Q is of Type 15 or 18; and wx and us are identical by symmetry when Q is of Type 18.

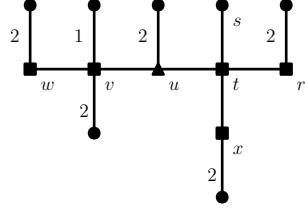
(i) When Q is of Type 11, 14, 15, 16 or 18, Alice may color ur with any available color to generate a Type 1 subtree, and a Type 3, 11, 11, 15 or 16 subtree, respectively.

(ii) If Bob has colored an edge of Q , Alice may respond as follows:

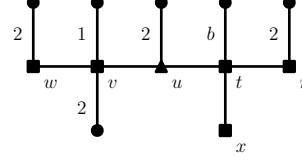
- Suppose Bob colored vu . Then, Alice may color ur with any available color to generate a Type 1 and a Type 0/2 subtree.

Similarly, suppose Bob colored wv . If not all subtrees are permitted, then tw exists and Alice may color tw with any available color to generate a Type 1 and a Type 0/2 subtree.

- If he colored tw , us or wx , all subtrees are now permitted.



(a) Coloring ut with 1 or 3 would lead to an unpermitted subtree.



(b) Coloring ut with 1 or 3 would lead to an unpermitted subtree.

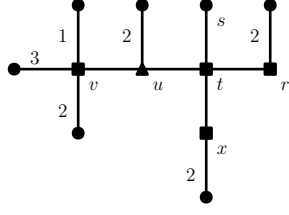
Figure XI: Situations of Type 12 subtrees in which coloring ut with any available color must lead to an unpermitted subtree.

- Suppose he colored an edge of a r -branch not containing u . She may color ur to generate a 2-/3-LCT (denoted by T_r) and a Type 3, 11, 11, 15 or 16 subtree. T_r is of Type 1 if it is a 2-LCT. Suppose T_r is a 3-LCT. Given that S_3^4 and P_4^4 are forbidden and $d(u) = 4$, r is neither the middle nor the end vertex of a P_3^4 in T_r , which implies T_r is of Type 2.

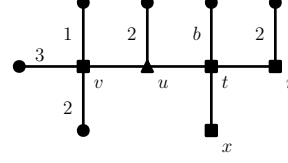
Similar analysis can be done when Bob colored an edge of a s -branch not containing u , a t -branch not containing w , or a x -branch not containing w .

Type 12 subtrees:

- (i) Alice may color vu to generate two Type 2 subtrees.
- (ii) If Bob has colored an edge, Alice may respond as follows:
 - If he colored an edge of an uncolored w -branch, she may color wv to generate a 3-LCT with star-node w and a Type 13 subtree. Because S_3^4 is forbidden, in the 3-LCT, w is adjacent to at most one 4-vertex, which implies this 3-LCT is of Type 2.
 - If he colored wv or ut , Alice may color vu to generate a Type 0 and a Type 2 subtree.
 - Suppose he colored an edge of a t -branch not containing u . Then, a Type 12 subtree was split into a Type 1 subtree and the other subtree, denoted by H . We will describe possible moves of Alice on H in the following. If Alice colors ut , she will generate a Type 9 subtree and a 2-/3-LCT, denoted by T_t . T_t is of Type 1 if it is a 2-LCT; and of Type 2 if and only if it is a 3-LCT but not the subtree in Figure I(a) nor I(b). Therefore, Alice may color ut with a suitable color if and only if T_t will be permitted.
 - If coloring ut must lead to the subtree in Figure I(b), H can be represented by the subtree in Figure XI(a). Note that in H , r and x should be incident with an edge colored with 2 so that Alice cannot put 2 on ut . Then, Alice may color ts with 2 to generate a Type 1 and a Type 16 subtree.
 - If coloring ut must lead to the subtree in Figure I(a), H can be represented by the subtree in Figure XI(b). Note that in H , r should be incident with an edge colored with 2 so that Alice cannot put 2 on ut ; also, t should be incident with an edge colored with $b \neq 2$.



(a) Coloring ut with 1/3/4 would lead to an unpermitted subtree.



(b) Coloring ut with 1/3/4 would lead to an unpermitted subtree.

Figure XII: Situations of Type 13 subtrees in which coloring ut with any available color must lead to an unpermitted subtree.

Then, Alice may color tx with 2 to generate a Type 1 and a Type 15 subtree.

Type 13 subtrees:

The strategy of Alice for this type is very similar to that for Type 12 subtrees.

- (i) Alice may color vu to generate a Type 0 and a Type 2 subtree.
- (ii) If Bob has colored an edge, Alice may respond as follows:

- If he colored ut , she may color vu to generate two Type 0 subtrees.
- Suppose he colored an edge of a t -branch not containing u . Then, a subtree of Type 13 will be split into a Type 1 subtree and the other subtree, denoted by H . We will describe possible moves of Alice on H in the following. If Alice colors ut , she will generate a Type 3 subtree and a 2-/3-LCT with star-node t , denoted by T_t . T_t is of Type 1 if it is a 2-LCT; and of Type 2 if and only if it is a 3-LCT but not the subtree in Figure I(b) nor I(a). Therefore, Alice may color ut with a suitable color if and only if T_t is permitted. Now, we discuss situations in which coloring ut must lead to an unpermitted T_t .

If coloring ut must lead to the subtree in Figure I(b) (resp. Figure I(a)), H can be represented by the subtree in Figure XII(a) (resp. Figure XII(b)). So, Alice may color ts with 2 to generate a Type 1 and a Type 14 (resp. Type 11) subtree.

Type 17 subtrees:

Note that rs and ry are identical by symmetry.

- (i) Alice may color ur with 3 to generate a Type 4 and a Type 1 subtree.
 - (ii) If Bob has colored an edge, Alice may respond as follows.
- If he colored an edge in an uncolored t -branch, she may colored tw with an available color in $\{1, 3\}$ to generate a Type 1 and a Type 22 subtree.
 - If he colored tw with 1/3/4 (resp. vu with 4), she may color vu with 4 (resp. tw with 1) to generate a Type 3 and a Type 2 subtree.
 - If he colored wv (resp. ur) with 4, she may color ur (resp. wv) with 4 to generate a Type 1 and a Type 3 subtree.

- Suppose $d(r) = 3$. If he colored rs , he generated a Type 4 and a Type 1 subtree. If he colored an edge in an uncolored s -branch, she may color rs with an available color in $\{2, 3\}$ to generate a Type 4 and a Type 1 subtree.
- Suppose $d(r) = 4$. If he colored rs with 2 (resp. 3 and 4), she may color ry with 3 (resp. 2 and 2) to generate a Type 4 and a Type 1 subtree.
- Suppose $d(r) = 4$. If he colored an edge in an uncolored s -branch. Then, a Type 17 subtree was split into a Type 1 subtree and the other subtree H . If Alice now colors ur with 3 in H , she will generate a Type 4 subtree, and a 3-LCT T_r . T_r is of Type 2 if and only if it is not the subtree in Figure I(a) nor I(b). Because T_r has exactly two colored star-edges, T_r must not be the one in Figure I(b). Therefore, Alice may color ur with 3 if and only if it will not lead to the subtree in Figure I(a). Note that T_r would be the subtree in Figure I(a) if and only if $d(s) = d(y) = 4$ and sz was colored with 2 or 4, since the colored star-edges already have colors 1 and 3. So, if sz was colored with 2 (resp. 4), an alternative move of Alice is to color ry (resp. rs) with 2 to generate a Type 23 (resp. Type 24) and a Type 1 subtree.

Type 21 subtrees:

Note that vu and vs are identical by symmetry.

- (i) Alice may color vu with 2 to generate a Type 7 and a Type 1 subtree.
- (ii) If Bob has colored an edge, Alice may respond as follows.
 - If he colored wv with 3, she may color ut with 3 to generate a Type 30 and a Type 1 subtree.
 - If he colored vu (resp. vr) with 2 or 3, she may color vr (resp. vu) with 3 or 2 to generate a Type 9 and a Type 1 subtree.
 - Suppose $d(r) = 3$. If he colored rx with 2 or 3, she may color vu with 2 to generate a Type 28 and a Type 1 subtree, given that P_4^4 is forbidden. If he colored an edge of an uncolored x -branch, she may color rx with 3 to generate a Type 29 and a Type 1 subtree.
 - If he colored an edge of an uncolored u -branch, she may color vu to generate a Type 7 and a Type 2 subtree, given that S_3^4 and P_4^4 are forbidden.

Type 22 subtrees:

Note that rs and ry are identical by symmetry.

- (i) Alice may color ur with 3 to generate a Type 3 and a Type 1 subtree.
- (ii) If Bob has colored an edge e , Alice may respond as follows. When e is an edge of an uncolored r -branch, our proposed responses of Alice are exactly the same as those for Type 17 subtrees; however, we remark that the permitted types which will be generated by Alice are different.
 - If he colored wv (resp. ur) with 4, she may color ur (resp. wv) with 4 to generate a Type 1 and a Type 3 subtree.
 - If he colored vu with 4, he generated a Type 3 and a Type 2 subtree.

- Suppose $d(r) = 3$. If he colored rs , he generated a Type 3 and a Type 1 subtree. If he colored an edge in an uncolored s -branch, she may color rs with an available color in $\{2, 3\}$ to generate a Type 3 and a Type 1 subtree.
- Suppose $d(r) = 4$. If he colored rs with 2 (resp. 3 and 4), she may color ry with 3 (resp. 2 and 2) to generate a Type 3 and a Type 1 subtree.
- Suppose $d(r) = 4$. If he colored an edge in an uncolored s -branch. Then, a subtree of Type 22 was split into a Type 1 subtree and the other subtree H . If Alice now colors ur with 3 in H , she will generate a Type 3 subtree and a 3-LCT T_r with star-node r . T_r is of Type 2 if and only if it is not the subtree in Figure I(a). Therefore, Alice may color ur with 3 if and only if it will not lead to the subtree in Figure I(a). Note that T_r would be the subtree in Figure I(a) if and only if $d(s) = d(y) = 4$ and sz was colored with 2 or 4. So, if sz was colored with 2 (resp. 4), an alternative move of Alice is to color ry (resp. rs) with 2 to generate a Type 25 (resp. Type 26) and a Type 1 subtree.

Types 23 and 24 subtrees:

We will provide a unified strategy of Alice for a subtree H of Type 23 or 24.

- (i) Alice may color ur with 3 to generate a Type 4 and a Type 2 subtree.
- (ii) If Bob has colored an edge, Alice may respond as follows.
 - If he colored an edge of an uncolored t -branch, she may color tw with an available color in $\{1, 3\}$ to generate a Type 1 and a Type 25 (for a Type 23 H) or Type 26 (for a Type 24 H) subtree.
 - If he colored tw with 1/3/4, she may color vu with 4 to generate a Type 3 and a Type 9 (for a Type 23 H) or Type 27 (for a Type 24 H) subtree. Symmetrically, if he colored vu with 4, she may color tw with 1 to generate a Type 1 and a Type 3 subtree.
 - If he colored wv (resp. ur) with 4, she may color ur (resp. wv) with 4 to generate a Type 3 subtree and a Type 2 (resp. Type 1) subtree.
 - If he colored rs with 3 or 4, he generated a Type 4 and a Type 1 subtree.
 - If he colored an edge of an uncolored s -branch, she may color rs with an available color in $\{3, 4\}$ to generate a Type 4 subtree and a 2-LCT (for a Type 23 H) or 3-LCT (for a Type 24 H) with star-node s , denoted by T_s . T_s is of Type 1 if it has only two colored edges. Suppose T_s has three colored edges. Because S_3^4 is forbidden and r was a 4-vertex before rs is colored by Alice, in T_s , the 3-SN s is adjacent to at most one 4-vertex, which means T_s is of Type 2.

Type 25 and 26 subtrees:

We will provide a unified strategy of Alice for a subtree H of Type 23 or 24. This unified strategy is very similar to that for Type 23 and 24 subtrees, since the only difference between a Type 23 (resp. Type 24) and a Type 25 (resp. Type 26) subtree is the number of colored edges incident with w .

- (i) Alice may color ur with 3 to generate a Type 3 and a Type 2 subtree.
- (ii) If Bob has colored an edge, Alice may respond as follows.

- If he colored wv (resp. ur) with 4, she may color ur (resp. wv) with 4 to generate a Type 3 subtree and a Type 2 (resp. 0) subtree.
- If he colored vu with 4, he generated a Type 3 and a Type 9 (for a Type 25 H) or Type 27 (for a Type 26 H) subtree.
- If he colored rs with 3 or 4, he generated a Type 3 and a Type 1 subtree.
- If he colored an edge of an uncolored s -branch, she may color rs with an available color in $\{3, 4\}$ to generate a Type 3 subtree and a 2-LCT (for a Type 25 H) or 3-LCT (for a Type 26 H) with star-node s , denoted by T_s . Given that S_3^4 is not allowed and using the same argument in the unified strategy for Type 23 and 24 subtrees, T_s is of Type 1 or Type 2.

Type 27 subtrees:

- (i) Alice may color vu to generate a Type 3 and a Type 1 subtree.
- (ii) If Bob colored wv (resp. an edge of an uncolored u -branch), he generated a Type 0 and a Type 2 (resp. a Type 9 and a Type 1) subtree.

Type 28 subtrees:

Note that vertices t and s are identical by symmetry.

- (i) Alice may color vu with 3 to generate a Type 3 and a Type 1 subtree.
- (ii) If Bob has colored an edge, Alice may respond as follows.
 - If he colored wv (resp. vu) with 3 or 4, she may color vu (resp. wv) with 4 or 3 to generate a Type 3 and a Type 1 subtree.
 - If he colored vr with 3 or 4, she may color vu with 5 to generate a Type 3 and a Type 1 subtree.
 - If he colored us with 3, she may color wv with 3 to generate a Type 0 and a Type 19 subtree.
 - If he colored us with 4 or an edge of the uncolored s -branch, she may color vu with 3 to generate a Type 3 and a Type 2 (since $d(s) \leq 3$) subtree.

Type 29 subtrees:

Note that vertices u and s (resp. w and r) are identical by symmetry.

- (i) Alice may color vu with 2 or 3 to generate a Type 28 (since P_4^4 is forbidden) and a Type 1 subtree.
- (ii) If Bob colored wv with 3 (resp. 4), Alice may color vu with 4 (resp. 3) to generate a Type 9 and a Type 1 subtree. Symmetrically, If he colored vu with 4, she may color wv with 3 to generate a Type 0 and a Type 9 subtree.

If he colored an edge of an uncolored u -branch, she may color vu with an available color in $\{2, 3\}$ to generate a Type 28 and a Type 2 subtree, given that P_4^4 is forbidden.

Type 30 subtrees:

Note that $d(r), d(s), d(t) \leq 3$ because S_3^4 and P_4^4 are forbidden.

- (i) Alice may color vu with 3 to generate a Type 5 (when $d(r) = 2$) or Type 6 (when $d(r) = 3$) and a Type 1 subtree.
- (ii) If Bob has colored an edge, Alice may respond as follows.

- If he colored an edge of an uncolored t -branch, she may color tw with 3 to generate a Type 1 and a Type 39 subtree.
- If he colored tw (resp. vr) with 3, she may color vr (resp. tw) with 3 to generate a Type 40 and a Type 1 subtree.
- If he colored wv with 3, she may color us with 3 to generate a Type 1 and a Type 5 (if $d(r) = 2$) or Type 6 (if $d(r) = 3$) subtree.
- Suppose $d(r) = 3$. If he colored rx , he generated a Type 1 and a Type 31 subtree. If he colored an edge of an uncolored x -branch, she may color rx with 1 or 3 to generate a Type 1 and a Type 31 subtree.
- If he colored an edge of an uncolored u -branch, she may color vu with 3 to generate a Type 2 (since $d(s) \leq 3$) and a Type 5 (if $d(r) = 2$) or Type 6 (if $d(r) = 3$) subtree.

Type 31 subtrees:

Note that $d(t), d(s) \leq 3$, because P_4^4 is forbidden.

- (i) Alice may color wv with 3 to generate a Type 2 and a Type 9 subtree.
- (ii) If Bob has colored an edge, Alice may respond as follows.
 - If he colored an edge of an uncolored t -branch, she may color tw with 4 to generate a Type 1 and a Type 32 subtree.
 - If he colored tw with 3 (resp. 4), she may color vu (resp. wv) with 3 to generate a Type 3 and a Type 1 (resp. a Type 0 and a Type 9) subtree.
 - If he colored wv (resp. vu) with 3 or 4, she may color vu (resp. wv) with 4 or 3 to generate a Type 1 (resp. Type 2) and a Type 3 subtree.
 - If he colored vr with color $b = 3$ or 4, she may color tw with b to generate a Type 1 and a Type 40 subtree.
 - If he colored us with 3, she may color wv with 3 to generate a Type 2 and a Type 19 subtree.
 - If he colored us with 1/4 or an edge of an uncolored s -branch, she may color vu with 3 to generate a Type 9 (since $d(t) \leq 3$) and a Type 2 (since $d(s) \leq 3$) subtree.

Type 32 subtrees:

Note that any neighbor of u , except v , has degree at most 3, because P_4^4 is forbidden.

- (i) Alice may color wv with 3 to generate a Type 0 and a Type 9 subtree.
- (ii) If Bob has colored an edge, Alice may respond as follows.
 - If he colored wv with 5, she may color vu with 3 to generate a Type 3 and a Type 1 subtree.
 - If he colored vr with 3 (resp. 4 or 5), she may color vu with 4 (resp. 3 or 4) to generate a Type 3 and a Type 1 subtree. Similarly, if he colored vu with 3 (resp. 4 or 5), she may color vr with 4 (resp. 5 or 4) to generate a Type 3 and a Type 0 subtree.

- If he colored us with 3, she may color vu with 5 (if $a = 3$) or 4 (if $a = 1$) to generate a Type 1 and a Type 33 (if $a = 3$) or Type 3 (if $a = 1$) subtree.
- If he colored us with 1 or 4, she may color vr with 4 to generate a Type 0 and a Type 20 subtree.
- If he colored an edge of an uncolored s -branch, she may color vu with 5 (if $a = 3$) or 4 (if $a = 1$) to generate a Type 2 and a Type 33 (if $a = 3$) or 3 (if $a = 1$) subtree.

Type 33 subtrees:

Coloring anyone of the two uncolored edges will generate a Type 0 and a Type 3 subtree.

Type 34 subtrees:

Note that $d(r), d(s) \leq 3$, because S_3^4 and P_4^4 are forbidden.

- (i) Alice may color tw with 3 to generate a Type 1 and a Type 39 subtree.
- (ii) If Bob has colored an edge, Alice may respond as follows.
 - If he colored an edge of the uncolored t -branch, she may color tw with 3 to generate a Type 1 and a Type 39 subtree.
 - If he colored wv with 3, she may color us with 3 to generate a Type 1 and a Type 5 (if $d(r) = 2$) or Type 6 (if $d(r) = 3$) subtree.
 - If he colored vr/vu with 3, she may color tw with 3 to generate a Type 1 and a Type 40 subtree.
 - If he colored rx with 1 or 3 (resp. us with 1 or 3), she may color wv with 3 to generate a Type 2 and a Type 9 (resp. a Type 2 and a Type 5 (when $d(r) = 2$) or Type 6 (when $d(r) = 3$)) subtree.
 - If he colored an edge of an uncolored x -branch, she may color rx with an available color in $\{1, 3\}$ to generate a Type 1 and a Type 35 subtree.
 - If he colored an edge of an uncolored s -branch, she may color vu with 3 to generate a Type 2 (since $d(s) \leq 3$) and a Type 36 subtree.

Type 35 subtrees:

Note that $d(s), d(t) \leq 3$, because P_4^4 is forbidden.

- (i) Alice may color wv with 3 to generate a Type 2 and a Type 9 subtree.
- (ii) If Bob has colored an edge, Alice may respond as follows.
 - If he colored an edge e of the uncolored t -branch (only when $d(t) = 3$), she may color wv with 3 to generate a Type 3 (if e is incident with t) or Type 13 (if e is not incident with t) and a Type 9 subtree.
 - If he colored tw with 3, she may color vu with 3 to generate a Type 3 and a Type 1 subtree.
 - If he colored tw with 4, she may color vr with 4 to generate a Type 0 and a Type 40 subtree.
 - If he colored wv (resp. vu) with 3 or 4, she may color vu (resp. wv) with 4 or 3 to generate a Type 3 subtree, and a Type 1 (resp. 2) subtree.

- If he colored vr with 3 (resp. 4), she may color tw with 3 (resp. 4) to generate a Type 1 and a Type 40 subtree.
- If he colored us with 1 or 3, she may color wv with 3 to generate a Type 2 and a Type 19 subtree.
- If he colored us with 4, she may color vu with 3 to generate a Type 2 and a Type 3 (if $d(t) = 2$) or Type 4 (if $d(t) = 3$) subtree.
- If he colored an edge of an uncolored s -branch, she may color vu with 3 to generate a Type 2 and a Type 3 (if $d(t) = 2$) or Type 4 (if $d(t) = 3$) subtree.

Type 36 subtrees:

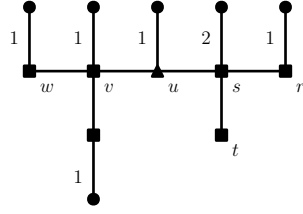
If $d(r) = d(u) = 2$, this Type 36 subtree is of Type 3. If $d(r) = 2$ and $d(u) = 3$, or $d(r) = 3$ and $d(u) = 2$, this Type 36 subtree is of Type 4. Since $d(r), d(u) \leq 3$, in the following, we assume $d(r) = d(u) = 3$.

- (i) Alice may color rw with 3 to generate a Type 1 and a Type 4 subtree.
- (ii) If Bob has colored an edge, Alice may respond as follows.
 - If he colored an edge of an uncolored s -branch (only when $d(s) \geq 2$), she may color rw with 3 to generate a Type 2 and a Type 4 subtree.
 - If he colored sr with 2/3/4, he generated a Type 1 and a Type 4 subtree.
 - If he colored rw (resp. vu) with 4, she may color vu (resp. rw) with 4 to generate a Type 1 and a Type 3 subtree.
 - If he colored wv with 4, she may color vu with 5 to generate a Type 0 and a Type 1 subtree.
 - If he colored ut with 1/3/4, she may color wv with 4 to generate a Type 2 and a Type 3 subtree.
 - If he colored us with 4, she may color wv with 4 to generate a Type 2 and a Type 3 subtree.
 - If he colored an edge of an uncolored t -branch, she may color ut with an available color in $\{1, 3\}$ to generate a Type 4 and a Type 1 subtree.

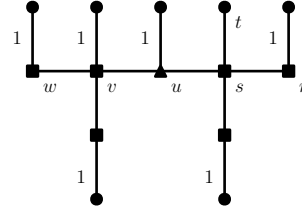
Type 37 subtrees:

If $u = r$, this Type 37 subtree is of Type 10. In the following, we may assume $u \neq r$ and let s be the neighbor of u which is not equal to v . Since $d(v) = 4$ and P_4^4 is forbidden, any neighbor of w and x other than v is of degree at most 3. Vertices w and x are identical by symmetry.

- (i) Alice may color vu with 2 to generate two Type 2 subtrees.
- (ii) If Bob has colored an edge, Alice may respond as follows.
 - If he colored an edge of an uncolored w -branch, she may color wv with 2 to generate a Type 2 and a Type 12 subtree.
 - If he colored wv , he generated a Type 1 and a Type 12 subtree.
 - If he colored us , he generated a Type 10 and a Type 1 subtree.



(a) Coloring us with 3 would lead to an unpermitted subtree.



(b) Coloring us with 3 would lead to an unpermitted subtree.

Figure XIII: Situations of Type 37 subtrees in which coloring us with any available color must lead to an unpermitted subtree.

- Suppose he colored an edge in an uncolored s -branch. Then, this Type 37 subtree was split into a Type 1 subtree and the other subtree, denoted by H . If Alice now colors us in H , she will generate a Type 10 subtree, and a 2-/3-LCT, denoted by T_s . T_s is of Type 2 if it is a 2-LCT. Suppose T_s is a 3-LCT. T_s is of Type 2 if and only if it is not the subtree in Figure I(a) nor I(b). Therefore, Alice may color us with an appropriate color if and only if it will not lead to these two unpermitted subtrees. In the following, we will propose alternative moves of Alice when coloring us must lead to anyone of these unpermitted subtrees.

If coloring us must generate the subtree in Figure I(a) (resp. Figure I(b)), H can be represented by the configuration in Figure XIII(a) (resp. Figure XIII(b)). Alice's alternative move is to color st with 2 to generate a Type 16 (resp. Type 18) and a Type 1 subtree.

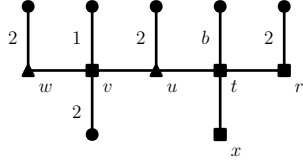
Type 38 subtrees:

(i) Alice may color vu with 3 to generate two Type 2 subtrees (since $d(t) \leq 3$ when $d(u) = 4$).

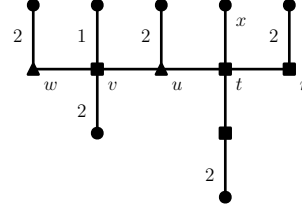
(ii) If Bob has colored an edge, Alice may respond as follows:

- If he colored an edge of the v -branch not containing u , she may color vu to generate a Type 2 subtree, and a Type 0/3/13 subtree.
- If he colored us with 1 or 3, she may color wv with 3 to generate a Type 1 and a Type 40 subtree.
- If he colored an edge of an uncolored s -branch, she may color vu with any available color to generate two Type 2 subtrees, since $d(t), d(s) \leq 3$.
- Suppose he colored ut with 1 or 3, she may color vu with 4 to generate a Type 2 and a Type 0 (when $d(u) = 3$) or Type 2 (when $d(u) = 4$) subtree.
- Suppose he colored an edge in an uncolored t -branch. If $d(u) = 4$ and so $d(t) \leq 3$, she may color ut with any available color to generate a Type 6 (since $d(s) \leq 3$) and a Type 1/2 subtree (since $d(t) \leq 3$).

The strategy of Alice is more complicated if $d(u) = 3$ because vertex t can be of degree 4. After Bob's coloring, a Type 37 subtree was split into a Type 1 subtree and the other subtree H . If Alice now colors ut in H , she will generate a Type 4 subtree, and a 2-/3-LCT, denoted by T_t . T_t is of



(a) Under the constraint that $b \neq 2$. Coloring ut with 1 or 3 would lead to an unpermitted subtree.



(b) Coloring ut with 1 or 3 would lead to an unpermitted subtree.

Figure XIV: Situations of Type 38 subtrees in which coloring ut with any available color must lead to an unpermitted subtree.

Type 2 if it is a 2-LCT. Suppose T_t is a 3-LCT. T_t is of Type 2 if and only if it is not the subtree in Figure I(a) nor I(b). Therefore, Alice may color ut with an appropriate color if and only if it will not lead to anyone of these two unpermitted subtrees. In the following, we will propose alternative moves of Alice when coloring us must lead to anyone of these unpermitted subtrees.

If coloring ut must generate the subtree in Figure I(a) (resp. Figure I(b)), H can be represented by the configuration in Figure XIV(a) (resp. Figure XIV(b)). Alice's alternative move is to color tx with 2 to generate a Type 15 (resp. Type 16) and a Type 1 subtree.

We have presented the strategies of Alice for all Types 1 to 40 in the last and this section so we have completed the proof of Lemma 2. ■

5. Open problem and conjecture

Since it could be very challenging to prove or disprove that all trees T with $\Delta(T) = 4$ have $\chi'_g(T) \leq 5$, one may first consider the trees whose 4-vertices form a forest of some basic subclass of trees. For example, one may try to prove the following conjecture proposed by Fong et al. [9]:

Conjecture Let T be a finite tree with $\Delta(T) = 4$. If the subgraph induced by all the 4-vertices is a forest of paths, then $\chi'_g(T) \leq 5$.

Moreover, since we confirm in this paper that the 4-vertices are allowed to form a path of three vertices, one may start to consider other subclasses such as stars with three or four leaves:

Open problem Let T be a finite tree with $\Delta(T) = 4$. If the subgraph induced by all the 4-vertices of T is a forest of stars, is $\chi'_g(T) \leq 5$?

Acknowledgments The work of W.H. Chan was partially supported by Guangdong Science and Technology Program Grant 2017A050506025.

References

- [1] S.D. Andres, Spieltheoretische Kantenfärbungsprobleme auf Wäldern und verwandte Strukturen (German), Diplomarbeit, Universität zu Köln (2003) 49–50; 55–56; 58; 61; 83–95; 97–123.
- [2] S.D. Andres, The game chromatic index of forests of maximum degree $\Delta \geq 5$, Discrete Applied Mathematics 154 (2006) 1317–1323.
- [3] S.D. Andres, W. Hochstättler, C. Schallück, The game chromatic index of wheels, Discrete Applied Mathematics 159 (2011) 1660–1665.
- [4] H.L. Bodlaender, On the complexity of some colouring games, International Journal of Foundations of Computer Science 2 (1991) 133–147.
- [5] L. Cai and X. Zhu, Game chromatic index of k -degenerate graphs, Journal of Graph Theory 36 (2001) 144–155.
- [6] W.H. Chan and G. Nong, The game chromatic index of some trees of maximum degree 4, Discrete Applied Mathematics 170 (2014) 1–6.
- [7] P. Erdős, U. Faigle, W. Hochstättler and W. Kern, Note on the game chromatic index of trees, Theoretical Computer Science 313 (2004) 371–376.
- [8] W.L. Fong, W.H. Chan, The edge coloring game on trees with the number of colors greater than the game chromatic index, Journal of Combinatorial Optimization (2019) 1–25.
- [9] W.L. Fong, W.H. Chan, G. Nong, The game chromatic index of some trees with maximum degree four and adjacent degree-four vertices, Journal of Combinatorial Optimization 36 (2018) 1–12.
- [10] X. Zhu, The game coloring number of planar graphs, Journal of Combinatorial Theory, Series B 75 (1999) 245–258.