

Stabbing Pairwise Intersecting Disks by Four Points

Paz Carmi

Department of Computer Science, Ben-Gurion University of the Negev, Israel
carmip@cs.bgu.ac.il

Matthew J. Katz

Department of Computer Science, Ben-Gurion University of the Negev, Israel
matya@cs.bgu.ac.il

Pat Morin

School of Computer Science, Carleton University
morin@scs.carleton.ca

Abstract

Following the seminal works of Danzer (1956, 1986) and Stachó (1965, 1981), and the recent result of Har-Peled et al. (2018), we study the problem of stabbing disks by points. We prove that any set of pairwise intersecting disks in the plane can be stabbed by four points. Our proof is constructive and yields a linear-time algorithm for finding the points.

2012 ACM Subject Classification Theory of computation → Computational geometry

Keywords and phrases disks in the plane, points in the plane, stabbing disks

Lines 10

1 Introduction

Let D be a set of pairwise intersecting disks in the plane. We say that a set S of points in the plane *stabs* D if the intersection of every disk of D with S is nonempty, i.e., every disk of D contains a point of S . The problem of stabbing disks with minimum number of points has attracted the attention of mathematicians for the past century.

The famous Helly's theorem states that if every three disks in D have a nonempty intersection, then all disks in D have a nonempty intersection [5, 6, 7]. Thus, any point in this intersection stabs D . The problem becomes interesting if D contains triplets of disks with empty intersections. It is known that in this case D can be stabbed by four points, due to Danzer (1986) [1] and Stachó (1981) [9]. Danzer's proof uses some ideas from his first unpublished proof in 1956, and Stachó's proof uses similar arguments as in his previous construction of five stabbing points in 1965 [8]. If the disks in D are unit disks, then three points suffice to stab D [3].

As noted in the recent result by Har-Peled et al. [4], Danzer's proof of four stabbing points is fairly involved, and there seems to be no obvious way to turn it into an efficient algorithm. The construction of Stachó is simpler, but not enough for an easy subquadratic algorithm. Har-Peled et al. [4] presented a linear time algorithm for finding a set of five stabbing points, by solving a corresponding LP-type problem. They left an efficient construction of four stabbing points as an open problem. We present a new proof for stabbing D with four points. Our proof is constructive and gives a linear-time algorithm for finding four stabbing points. Even though the algorithm itself is quite simple, its analysis is rather involved.

As for lower bounds, Grünbaum gave an example of 21 pairwise intersecting disks that cannot be stabbed by three points [2]. Danzer reduced the number of disks to ten [1],



© Author: Please provide a copyright holder;
licensed under Creative Commons License CC-BY

42nd Conference on Very Important Topics (CVIT 2016).

Editors: John Q. Open and Joan R. Access; Article No. 23; pp. 23:1–23:20

Leibniz International Proceedings in Informatics



LIPIC Schloss Dagstuhl – Leibniz-Zentrum für Informatik, Dagstuhl Publishing, Germany

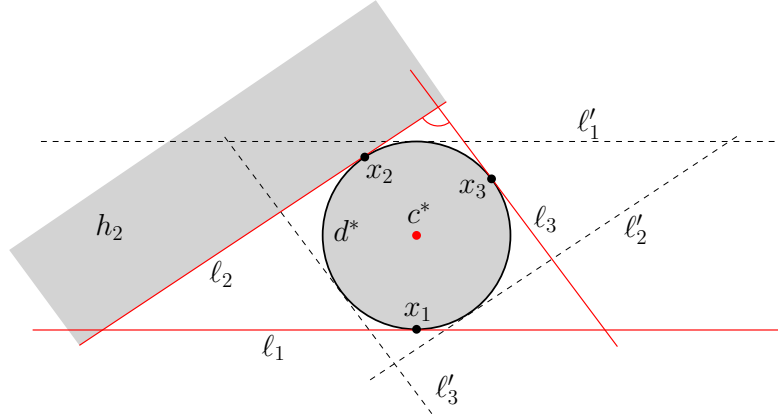
however, according to [4], this bound is hard to verify. Har-Peled et al. gave a simple construction that uses 13 disks [4]. It would be interesting to find a simple construction for ten disks. Since every set of eight disks can be stabbed by three points [8], it remains open to verify whether or not every set of 9 disks can be stabbed by three points.

2 The Setup and Preliminaries

We denote by $x(p)$ and $y(p)$, the x and y coordinates of a point p in the plane. We denote by $r(d)$, the radius of a disk d in the plane.

Let d^* be the smallest disk (not necessarily in D) that intersects every disk in D . We find a set of four points that stab $D \cup d^*$. Thus, without loss of generality, we assume that d^* is in D . After a suitable scaling and a suitable translation, we assume that d^* has radius 1 and its center c^* is the origin $(0,0)$. Let D^- be the set of all disks in D that do not contain c^* . For every disk $d \in D^-$ we define $\delta(d) = |cc^*| - r(d)$, where c is the center of d ; see Figure 2 for an illustration. We denote by $D_{\leq k}^-$, the set of all disks in D^- that have radii at most k .

Our choice of d^* , ensures that it is tangent to three disks, say d_1, d_2, d_3 , of D . Let x_1, x_2, x_3 be the points of tangency of d^* with d_1, d_2, d_3 , respectively. Our choice of d^* also ensures that c^* is in the triangle $\triangle x_1 x_2 x_3$. For each $i \in \{1, 2, 3\}$, we denote by ℓ_i the tangent line to d^* at x_i , by ℓ'_i the reflection of ℓ_i with respect to c^* , and by h_i the closed halfplane with boundary line ℓ_i that contains d_i . See Figure 1.



1 ■ **Figure 1** Illustration of the setup and notations.

Base setting: Let Δ be the triangle formed by the intersection points of ℓ_1 , ℓ_2 , and ℓ_3 . After a suitable relabeling and rotation we assume that $x_1 = (0, -1)$, the line ℓ_2 has positive slope, the line ℓ_3 has negative slope, and the largest angle of Δ is at the intersection of ℓ_2 and ℓ_3 , as depicted in Figure 1.

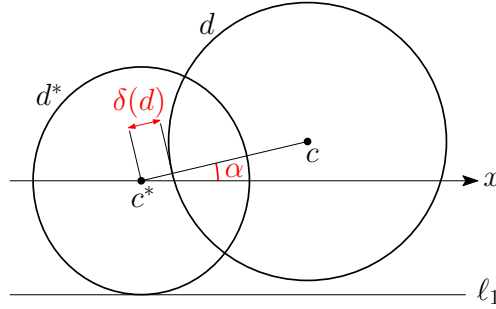
In the second setting of assumption, we assume without loss of generality that the center of d' is on the positive x -axis, where d' is a disk in $D_{\leq k}^-$ with maximum $\delta(d')$, for some values of k . later in the algorithm and in the proof, when we use this setting we will specify exactly what is disk d' .

3 Stabbing Algorithm

Find the smallest disk d^* , add it to D , and then compute D^- . Let d_{\min} denote the smallest disk in D^- , and let r_{\min} denote its radius. We show how to compute a set S of four points that stab all disks in D . We consider three cases, depending on the value of r_{\min} .

- $r_{\min} \geq 4$: Set $S = \{(0, 0), (-4, 1), (4, 1), (0, -3)\}$, assuming the [Base setting](#).
- $r_{\min} \leq 2$: Let $d \in D_{\leq 2}^-$ be the disk with maximum $\delta(d)$, and let c be its center. Let α be the convex angle between the segment cc^* and the x -axis; see Figure 2. After a suitable reflection and relabeling assume the [Base setting](#) and that c has positive x -coordinate. Depending on α and the y -coordinate of c we consider three sub-cases.
 1. $\alpha \leq 17^\circ$: Set $S = \{(-0.5, 0), (0, -1.7), (0, 1.7), (1.5, 0)\}$.
 2. $\alpha > 17^\circ$ and $y(c) \geq 0$: Set $S = \{(-0.5, 0), (0.5, -2.5), (-0.5, 1.83), \left(\frac{1}{2} + \frac{2\sqrt{6}}{5}, \frac{1}{5}\right)\}$.
 3. $\alpha > 17^\circ$ and $y(c) < 0$: Set $S = \{(-0.5, 0), (0.5, 2.5), (-0.5, -1.83), \left(\frac{1}{2} + \frac{2\sqrt{6}}{5}, -\frac{1}{5}\right)\}$.
- $2 < r_{\min} < 4$: This case involves four sub-cases. In the first three sub-cases, where we pick a disk d' , assume after a suitable rotation that the center of d' is on the positive x -axis. In the last sub-case we assume the [Base setting](#).
 1. If there exists a disk $d \in D_{\leq 5}^-$ with $\delta(d) \geq 0.5$, then let d' be such a disk with maximum $\delta(d')$. Then we set $S = \{(0, 0), (2, 0), (0.4, 2), (0.4, -2)\}$.
 2. Else, if there exists a disk $d \in D_{\leq 20}^-$ with $\delta(d) > 0.5$, then let d' be such a disk with maximum $\delta(d')$. Then we set $S = \{(0, 0), (2, 0), (-0.15, 2.7), (-0.15, -2.7)\}$.
 3. Else, if there exists a disk $d \in D_{\leq 5}^-$ with $\delta(d) > 0.11$, then let d' be such a disk with maximum $\delta(d')$. Then we set $S = \{(0, 0), (2, 0), (-0.15, 1.75), (-0.15, -1.75)\}$.
 4. Otherwise, set $S = \{(0, 0), (2.5, 1), (-2.5, 1), (0, -1.5)\}$, assuming the [Base setting](#).

This is the end of our algorithm and computation of S . We claim that S stabs D . In Subsection 3.1 we justify our claimed linear running time, and in Section 4 we prove the correctness of algorithm.



2 ■ **Figure 2** Illustration of $\delta(d)$ and the angle α .

3.1 Running Time Analysis

All transformations, i.e., translations, rotations, and reflections, can be done in $O(|D|)$ time. The smallest disk d^* , that intersects all disks in D , can be found in $O(|D|)$ time by using linear programming. The smallest disk d_{\min} , that does not contain c^* , and also the disks d and d' , with maximum $\delta(d)$ and $\delta(d')$, can be found in $O(|D|)$ time. Having d^* , d_{\min} , d ,

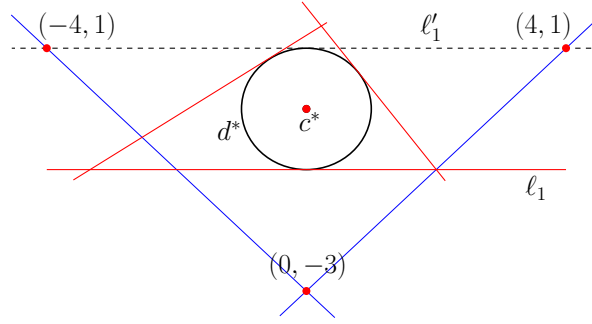
and d' , the set S can be found in constant time. Therefore, the total running time of the algorithm is $O(|D|)$.

4 Correctness Proof

In this section we prove the correctness of the algorithm, that is, the set S —computed by the algorithm— stabs D . We prove this for the three cases ($r_{\min} \geq 4$, $r_{\min} \leq 2$, and $2 < r_{\min} < 4$) separately in Subsections 4.1, 4.2, and 4.3. Recall the existence of three disks d_1 , d_2 , and d_3 , that touch d^* at the tangent points of ℓ_1 , ℓ_2 , and ℓ_3 , respectively. Any disk $d \in D$ that we consider in our proofs should intersect these three disks.

4.1 Proof of Case $r_{\min} \geq 4$

Recall that we are in the [Base setting](#), and $S = \{c^* = (0, 0), (-4, 1), (4, 1), (0, -3)\}$ as depicted in Figure 3. We prove that each disk in D contains at least one point of S .



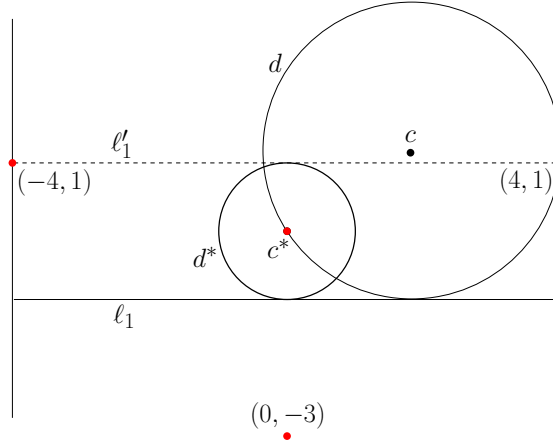
3 **Figure 3** Four stabbing points for the case where $r_{\min} \geq 4$.

By the definition of D^- , any disk in $D \setminus D^-$ contains $c^* = (0, 0)$. Now consider any disk $d \in D^-$ and let c denote its center. By our choice of d_{\min} , we have $r(d) \geq 4$.

1. If c lies below or on the line through $(0, -3)$ and $(4, 1)$, then by Corollary 5, d contains $(0, -3)$ or $(4, 1)$. (To see why Corollary 5 applies, observe that the circle of radius 4, with center $(4, -3)$, is tangent to d^* so the radius of d in Corollary 5 is 4.)
2. If c lies below or on the line through $(-4, 1)$ and $(0, -3)$, then by an argument similar to the previous case, d contains $(-4, 1)$ or $(0, -3)$.
3. If c lies on or above the line through $(-4, 1)$ and $(4, 1)$ (i.e. the line ℓ'_1) and $c(x) \notin [-4, 4]$, then by Corollary 4, the disk d contains $(-4, 1)$ or $(4, 1)$.
4. If c lies on or above ℓ'_1 and $c(x) \in [-4, 4]$, then assume, by symmetry, that $c(x) \in [0, 4]$. In this case we apply Lemma 6, such that $(0, 0)$, $(4, 1)$, ℓ_1 , d' and d play the roles of a , b , l , d and e , respectively; see Figure 4, where d' is the disk with c^* and $(4, 1)$ on its boundary and tangent to ℓ_1 with center in $[0, 4]$ x -coordinate.
5. If c is in the triangle with corners $(-4, 1)$, $(4, 1)$, and $(0, -3)$, then since $r_{\min} \geq 4$ it is stabs by at least one of the points in S .

4.2 Proof of Case $r_{\min} \leq 2$

Recall the disk d , with center c , as the disk with maximum $\delta(d)$ in $D_{\leq 2}^-$. In this case we are in the [Base setting](#) and c has positive x -coordinate. Recall α as the convex angle between



4 ■ **Figure 4** Illustration of the case where c lies on or above ℓ'_1 and $c(x) \in [0, 4]$.

the segment cc^* and the x -axis as in Figure 2. Depending on α and $y(c)$, our algorithm computes $S = \{p^l, q^-, q^+, p^r\}$ as follows:

1. $\alpha \leq 17^\circ$:

$$p^l = (-0.5, 0), q^- = (0, -1.7), q^+ = (0, 1.7), p^r = (1.5, 0).$$

2. $\alpha > 17^\circ$ and $y(c) \geq 0$:

$$p^l = (-0.5, 0), q^- = (0.5, -2.5), q^+ = (-0.5, 1.83), p^r = \left(\frac{1}{2} + \frac{2\sqrt{6}}{5}, \frac{1}{5}\right).$$

3. $\alpha > 17^\circ$ and $y(c) < 0$:

$$p^l = (-0.5, 0), q^- = (-0.5, -1.83), q^+ = (0.5, 2.5), p^r = \left(\frac{1}{2} + \frac{2\sqrt{6}}{5}, -\frac{1}{5}\right).$$

Let d' be the disk (not necessarily in D) of radius 1 that is centered at $(0.5, 0)$. Observe that the point $\left(\frac{1}{2} + \frac{2\sqrt{6}}{5}, \frac{1}{5}\right)$ lies on the boundary of d' .

We prove for each of the above cases that S stabs D . To that end, we partition the plane into four quadrants with apex at c^* , i.e. the origin, and then we show for each quadrant Q that any disk, with its center in Q , is stabbed by S .

Any disk in D that is centered at a point above ℓ_1 , i.e. the line $y = -1$, intersects d_1 , and thus it has to intersect ℓ_1 . Any disk $e \in D$ that is centered at a point below ℓ_3 intersects d_3 and thus has to intersect ℓ_3 . Any disk $e \in D$ that is centered at a point below ℓ_2 intersects d_2 and thus has to intersect ℓ_2 .

In section 4.2.4 we show that a disk that is centered at a point of negative y -coordinate and intersects both ℓ_2 and ℓ_3 at points whose y -coordinates is above the y -coordinate of q^- and below the x -axis, contains at least one of the points p^l or q^- . That is, we show that a disk that is centered at a point of negative y -coordinate and does not contain neither p^l or q^- cannot intersect both ℓ_2 and ℓ_3 at points that their y -coordinates is above the y -coordinate of q^- and below the x -axis, and thus cannot be in D . Moreover in Lemma 2 (in the same section), we show that a disk in D that is centered at a point of negative y -coordinate and does not contain q^- and intersects both ℓ_2 and ℓ_3 at points whose y -coordinates is below the y -coordinate of q^- also intersects ℓ'_1 .

Therefore we may assume that any disk $e \in D$ that is centered at a point of negative y -coordinate intersects ℓ'_1 .

Consider the vertical strip V whose left and right boundaries are the vertical lines through p^l and p^r , respectively. We claim that any disk $e \in D$, with center in V , contains p^l or p^r . This is implied from Lemma 6 where d' , p^l , and p^r play the roles of d , a , and b , respectively. Moreover, if the center of e is above the x -axis then ℓ_1 plays the role of ℓ , otherwise ℓ'_1 plays the role of ℓ .

Let Q_1 , Q_2 , Q_3 , and Q_4 be the four quadrants of the plane in counterclockwise order around c^* such that Q_1 contains all points with positive x - and y -coordinates. We define four disks d^{r+} , d^{l+} , d^{l-} , and d^{r-} as follows (see Figures 5 and 7):

- d^{r+} is the disk, with center in Q_1 , with x - and y -coordinates more than 1, that is tangent to ℓ_1 , and has p^r and q^+ on its boundary.
- d^{l+} is the disk, with center in Q_2 , that is tangent to ℓ_1 , and has p^l and q^+ on its boundary.
- d^{l-} is the disk, with center in Q_3 , that is tangent to ℓ'_1 , and has p^l and q^- on its boundary.
- d^{r-} is the disk, with center in Q_4 with x -coordinate more than 1 and with y -coordinate less than -1 , that is tangent to ℓ'_1 , and has p^r and q^+ on its boundary.

We will prove that d^{l+} and d^{l-} do not intersect d , and that d^{r+} and d^{r-} do not intersect d^* . Then we use this and Corollary 8 as describe bellow to show that any disk of D , that has its center outside V , contains a point of $S = \{p^l, p^r, q^+, q^-\}$. This would imply that S stabs D .

Let $e \in D$ be a disk that is centered at the second quadrant (with respect to p^l), then since e intersects ℓ_1 (since it intersects d_1) and d (recall that d_1 and d belong to D and any other disk in D intersects them) we have by Corollary 8 that e contains p^l or q^+ . To see that, p^l , q^+ , d , e and ℓ_1 , play the roll of a , b , c' , d and ℓ in Corollary 8.

Let $e \in D$ be a disk that is centered at the third quadrant (with respect to p^l) then since e intersects ℓ'_1 and d , we have by Corollary 8 that e contains p^l or q^- . To see that, p^l , q^- , d , e and ℓ'_1 , play the roll of a , b , c' , d and ℓ in Corollary 8.

Let $e \in D$ be a disk that is centered at the first quadrant (with respect to p^r), then since e intersects ℓ_1 (since it intersects d_1) and d^* (recall that d_1 and d^* belong to D and any other disk in D intersects them) we have by Corollary 8 that e contains p^r or q^+ . To see that, p^r , q^+ , d^* , e and ℓ_1 , play the roll of a , b , c' , d and ℓ in Corollary 8.

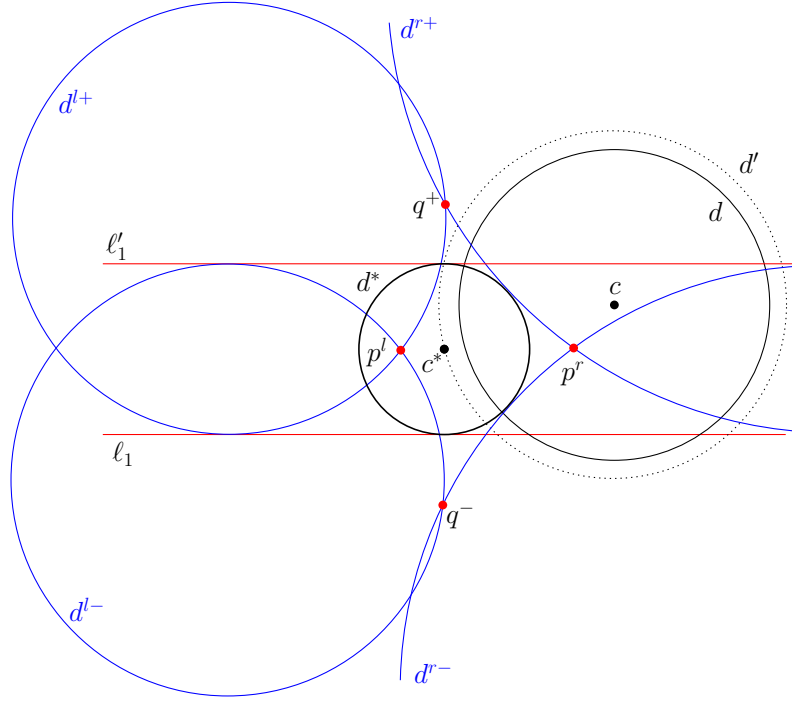
Let $e \in D$ be a disk that is centered at the fourth quadrant (with respect to p^r), then since e intersects ℓ'_1 and d^* we have by Corollary 8 that e contains p^r or q^- . To see that, p^r , q^- , d^* , e and ℓ'_1 , play the roll of a , b , c' , d and ℓ in Corollary 8.

In the rest of this section we prove that d^{l+} and d^{l-} do not intersect d , and that d^{r+} and d^{r-} do not intersect d^* . We prove this for different values of α in Subsections 4.2.1, 4.2.2, and 4.2.3.

4.2.1 $\alpha \leq 17^\circ$

First we prove that d^{l+} and d^{l-} do not intersect d . Because of symmetry, we prove this only for d^{l+} . To that end, let (a, b) denote the center of d^{l+} ; notice that $a \leq 0$ and $b \geq 0$. Since d^{l+} is tangent to ℓ_1 and has $p^l = (-0.5, 0)$ and $q^+ = (0, 1.7)$ on its boundary, the following equations hold:

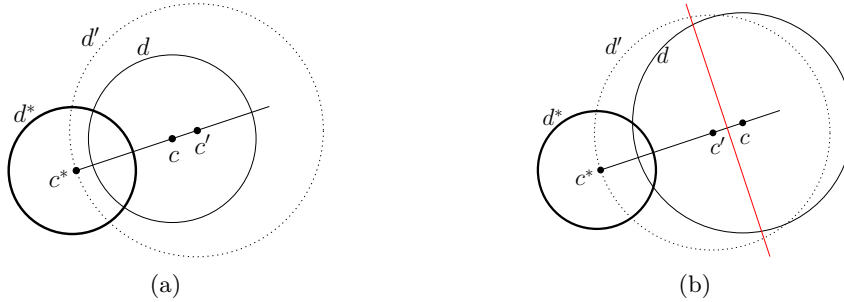
1. $r(d^{l+}) = b + 1$,
2. $(a + 0.5)^2 + b^2 = r(d^{l+})^2$,
3. $a^2 + (b - 1.7)^2 = r(d^{l+})^2$.



5 ■ **Figure 5** Illustration of d , d^{r+} , d^{l+} , d^{l-} , and d^{r-} when $\alpha \leq 17^\circ$.

These equations solve to: $a = \frac{-27}{34} - \frac{3\sqrt{471/5}}{17}$, $b = \frac{2919}{2890} + \frac{3\sqrt{2355}}{289}$.

Let d' be the disk of radius 2 that has c^* on its boundary and has its center $c' = (x', y')$ on the ray from c^* to c , i.e., its center is on a line through origin that makes angle α with the x -axis; see Figure 6. In fact we have $x' = 2 \cos \alpha$ and $y' = 2 \sin \alpha$. We claim that if d^{l+} does not intersect d' , then it also does not intersect d . To verify this claim we consider two cases: (i) c is on line segment c^*c' (ii) c' is on line segment c^*c . In case (i) our claim holds because d' contains d ; see Figure 6(a). In case (ii) our claim holds because the center of d^{l+} is closer to c' than to c (the center of d^{l+} and the point c' are on the same side of the perpendicular bisector of $c'c$); see Figure 6(b).



6

7 ■ **Figure 6** (a) The center c lies on c^*c' , and (b) the center c' lies on c^*c .

By the above claim it suffices to show that d^{l+} does not intersect d' , that is the distance between their centers is more than the sum of their radii: $(a - x')^2 + (b - y')^2 > (2 + (b + 1))^2$. This can be verified by plugging a , b , x' , and y' as follows:

$$\begin{aligned}
& (a - x')^2 + (b - 2y')^2 = \\
& \left(\frac{-27}{34} - \frac{3\sqrt{471/5}}{17} - 2\cos\alpha \right)^2 + \left(\frac{2919}{2890} + \frac{3\sqrt{2355}}{289} - 2\sin\alpha \right)^2 \geq \\
& \left(\frac{-27}{34} - \frac{3\sqrt{471/5}}{17} - 2\cos 17^\circ \right)^2 + \left(\frac{2919}{2890} + \frac{3\sqrt{2355}}{289} - 2\sin 17^\circ \right)^2 > \\
& \left(2 + \frac{2919}{2890} + \frac{3\sqrt{2355}}{289} + 1 \right)^2.
\end{aligned}$$

The above inequalities imply that d^{l+} does not intersect d' . Therefore d^{l+} does not intersect d .

Now we prove that d^{r+} and d^{r-} do not intersect d^* . Because of symmetry, we show this only for d^{r+} . Let (a, b) denote the center of d^{r+} , and recall that $a \geq 1$ and $b \geq 0$. Since d^{r+} is tangent to ℓ_1 and has $p^r = (1.5, 0)$ and $q^+ = (0, 1.7)$ on its boundary, the following equations hold:

1. $r(d^{l+}) = b + 1$,
2. $(a - 1.5)^2 + b^2 = r(d^{l+})^2$,
3. $a^2 + (b - 1.7)^2 = r(d^{l+})^2$.

These equations solve to: $a = \frac{81}{34} + \frac{3\sqrt{771/5}}{17}$, $b = \frac{6619}{2890} + \frac{9\sqrt{3855}}{289}$.

To prove that d^{r+} and d^* do not intersect, it suffices to show that the distance between their centers is more than the sum of their radii: $(a - 0)^2 + (b - 0)^2 > (1 + (b + 1))^2$. This can be verified by plugging a and b as follows:

$$\left(\frac{81}{34} + \frac{3\sqrt{771/5}}{17} \right)^2 + \left(\frac{6619}{2890} + \frac{9\sqrt{3855}}{289} \right)^2 > \left(1 + \frac{6619}{2890} + \frac{9\sqrt{3855}}{289} + 1 \right)^2.$$

The above inequalities imply that d^{r+} does not intersect d^* .

4.2.2 $\alpha > 17^\circ$ and $y(c) \geq 0$

First we prove that d^{l+} does not intersect d . Let (a, b) denote the center of d^{l+} ; notice that $a \leq 0$ and $b \geq 0$. Since d^{l+} is tangent to ℓ_1 and has $p^l = (-0.5, 0)$ and $q^+ = (-0.5, 1.83)$ on its boundary, the following equations hold:

1. $r(d^{l+}) = b + 1$,
2. $(a + 0.5)^2 + b^2 = r(d^{l+})^2$,
3. $(a + 0.5)^2 + (b - 1.83)^2 = r(d^{l+})^2$.

These equations solve to: $a = -\frac{1}{2} - \frac{\sqrt{283}}{10}$, $b = \frac{183}{200}$.

Let d' be the disk of radius 2 that has c^* on its boundary and has its center $c' = (\sqrt{3}, 1)$ on the ray from c^* to c , i.e., its center is on a line through origin that makes angle α with the x -axis. We claim that if d^{l+} does not intersect d' , then it also does not intersect d . To verify this claim we consider two cases: (i) c is on line segment c^*c' (ii) c' is on line segment c^*c . In case (i) our claim holds because d' contains d . In case (ii) observe that c is located below the parabola $x^2 - 2y = 1$ because otherwise c is closer to c^* than to ℓ_1 , and since d

23:10 Stabbing Pairwise Intersecting Disks by Four Points

$$\left(-\frac{9}{10} - \frac{\sqrt{203/2}}{5} - 2\right)^2 + \left(-\frac{161}{100} - \frac{\sqrt{406}}{25}\right)^2 > \left(2 + \frac{161}{100} + \frac{\sqrt{406}}{25} + 1\right)^2.$$

Therefore, d^{l-} does not intersect d' .

Now we prove that d^{r+} does not intersect d^* . Let (a, b) denote the center of d^{r+} ; notice that $a \leq 0$ and $b \leq 0$. Since d^{r+} is tangent to ℓ_1 and has $p^r = (1/2 + 2\sqrt{6}/5, 1/5)$ and $q^+ = (-0.5, 1.83)$ on its boundary, the following equations hold:

1. $r(d^{r+}) = b + 1$,
2. $(a - (1/2 + 2\sqrt{6}/5))^2 + (b - 1/5)^2 = r(d^{r+})^2$,
3. $(a + 0.5)^2 + (b - 1.83)^2 = r(d^{r+})^2$.

These equations solve to:

$$a = \frac{10075 + 5660\sqrt{6} + \sqrt{8490(46169 + 8000\sqrt{6})}}{8150} \approx 5.83662$$

$$b = \frac{13292307 + 3224000\sqrt{6} + 960\sqrt{1415(46169 + 8000\sqrt{6})} + 400\sqrt{8490(46169 + 8000\sqrt{6})}}{5313800}$$

$$\approx 7.50912$$

Now we show that d^{r+} does not intersect d^* , that is the distance between their centers is more than the sum of their radii.

$$(a - 0)^2 + (b - 0)^2 > (1 + (b + 1))^2$$

$$\left(\frac{10075 + 5660\sqrt{6} + \sqrt{8490(46169 + 8000\sqrt{6})}}{8150}\right)^2 +$$

$$\left(\frac{1}{5313800}(13292307 + 3224000\sqrt{6} + 960\sqrt{1415(46169 + 8000\sqrt{6})} +$$

$$400\sqrt{8490(46169 + 8000\sqrt{6})})\right)^2 >$$

$$(1 + 13292307 + 3224000\sqrt{6} + 960\sqrt{1415(46169 + 8000\sqrt{6})} +$$

$$400\sqrt{8490(46169 + 8000\sqrt{6})} + 1)^2$$

Thus, any disk centered at Quadrant 1 that intersects ℓ_1 and does not contain points p^r nor q^+ does not intersect d^* and hence is not in D .

Consider disk d^{r-} , and let (a, b) be its center (recall that $a > 1$ and $b < 0$), we have

1. $r(d^{r-}) = |b - 1|$, since d^{r-} is tangent to ℓ'_1 .
2. $(a - \frac{1}{2} - \frac{2\sqrt{6}}{5})^2 + (b - 0.2)^2 = r(d^{r-})^2$, having point p^r on the boundary of d^{r-} .
3. $(a - 0.5)^2 + (b + 2.5)^2 = r(d^{r-})^2$ having point q^- on the boundary of d^{r-} .

Solving this equations we get that

$$a = \frac{1}{54}(27 + 28\sqrt{6} + 2\sqrt{2310}), \quad b = \frac{-1393}{972} - \frac{8\sqrt{385}}{243}.$$

Notice that (as above) it is enough to consider disk d^{r-} that intersect ℓ'_1 , since a disk that is tangent to the vertical line that goes through $(-1, 0)$ and has q^- and p^r on its boundary has a bigger radius.

Now we show that d^{r-} does not intersect d^* , that is the distance between their centres is more than the sum of their radii.

$$(a - 0)^2 + (b - 0)^2 > (1 - (b - 1))^2$$

Thus, any disk centered at Quadrant 4 that intersects ℓ'_1 and does not contain points p^r nor q^- does not intersect d^* and hence is not in D .

4.2.3 $\alpha > 17^\circ$ and $y(c) < 0$

$\angle(\alpha) > 17^\circ$ and the center of d' has negative y -coordinates.

$$p^l = (-0.5, 0), \quad q^- = (-0.5, -1.83), \quad q^+ = (0.5, 2.5), \quad \text{and } p^r = \left(\frac{1}{2} + \frac{2\sqrt{6}}{5}, -\frac{1}{5}\right).$$

This case is symmetric to the case above $\angle(\alpha) > 17^\circ$ and the center of d' has positive y -coordinates.

4.2.4

In this section, we show that a disk e that is centered at a point of negative y -coordinate and does not contain neither p^l or q^- cannot intersects both ℓ_2 and ℓ_3 at points whose their y -coordinates are above the y -coordinate of q^- and bellow the x -axis, and thus cannot be in D . Then, in Lemma 2 we show that a disk $e \in D$ that is centered at a point of negative y -coordinate and does not contain q^- and intersects both ℓ_2 and ℓ_3 at points whose their y -coordinates are bellow the y -coordinate of q^- also intersects ℓ'_1 .

Let c be a disk with center on the negative y -axis and has points $(-0.5, 0)$ and $(0, -1.7)$ on its boundary. Notice that c does not intersect ℓ_2 nor ℓ_3 . Thus, for the case where $p^l = (-0.5, 0)$ and $q^- = (0, -1.7)$ ($\alpha < 17^\circ$) we apply Lemma 1, and get that no disk in D that does not contains points p^l and q^- has intersection with ℓ_2 nor ℓ_3 at points whose their y -coordinates are above the y -coordinate of q^- and bellow the x -axis.

Consider the second case where $\alpha > 17^\circ$ Let β be the minimum angle between ℓ_1 and ℓ_2 and the angle between ℓ_1 and ℓ_3 . First consider the case where β is the angle between ℓ_1 and ℓ_2 . Let ℓ_4 be the line that is tangent to d^* and of angle $\pi/2 - \beta/2$ and intersect ℓ_1 on the positive x -coordinates. Let c be a disk that is center has y -coordinate in $[0, -2.5]$, has points $(-0.5, 0)$ and $(0.5, -2.5)$ on its boundary, and it is tangent to the vertical line that goes through point $(1, 0)$.

Notice that for $0 < \beta \leq 45^\circ$, disk c does not intersect ℓ_2 nor ℓ_4 . Thus, does not intersect ℓ_2 nor ℓ_3 . Hence, for the case where $p^l = (-0.5, 0)$ and $q^- = (0.5, -2.5)$ ($\alpha > 17^\circ$) we apply Lemma 1, and get that no disk in D that does not contains points p^l and q^- has intersection with ℓ_2 nor ℓ_3 at points whose their y -coordinates are above the y -coordinate of q^- and bellow the x -axis.

Now assume $\beta > 45^\circ$, let c be a disk that is center is on the segment between points $(-0.5, 0)$ and $(0.5, -2.5)$ and has these points on its boundary. Notice that $\beta \leq 60^\circ$ and that disk c does not intersect ℓ_2 nor ℓ_4 . Thus, does not intersect ℓ_2 nor ℓ_3 . Hence, for the case where $p^l = (-0.5, 0)$ and $q^- = (0.5, -2.5)$ ($\alpha > 17^\circ$) we apply Lemma 1, and get that no disk in D that does not contains points p^l and q^- has intersection with ℓ_2 nor ℓ_3 at points whose their y -coordinates are above the y -coordinate of q^- and bellow the x -axis.

Next, consider the case where β is the angle between ℓ_1 and ℓ_3 , the proof of this case is symmetric to the above we just choose c to be tangent to the vertical line that goes through point $(-1, 0)$ and not through point $(1, 0)$.

► **Lemma 1.** *Let ℓ and ℓ' be two lines with positive and negative slopes respectively, and let a and b be two points bellow ℓ and bellow ℓ' , such that $y(a) > y(b)$. Let c be a disk having a and b on its boundary. If $c \cap \ell = \emptyset$ and $c \cap \ell' = \emptyset$ then any disk e that intersect both ℓ and ℓ' at points whose their y -coordinates are in $[y(a), y(b)]$ contains at least one of the points a or b .*

Proof. Assume towards contradiction that there exists such disk e that intersects both ℓ and ℓ' at points whose their y -coordinates are in $[y(a), y(b)]$ and does not contains neither a nor b and let $c(e)$ be its center. Let e' be a disk that has both a and b on its boundary and contains e . We can obtained e' by increasing the radius of e until it has point a or b on its boundary. Assume w.l.o.g. a then let $c(e')$ be the point on the intersection of the line segment that goes via a and $c(e)$ and the bisector between a and b . Thus, disk centered at $c(e')$ of radius $|c(e')a|$ contains e and has both a and b on its boundary. At least one of the arcs of e' between a and b is contained in c . thus e' could not intersect one of the lines ℓ or ℓ' . ◀

In the next lemma we show that a disk $e \in D$ that is centered at a point of negative y -coordinate and does not contain q^- and intersects both ℓ_2 and ℓ_3 at points whose their y -coordinates are bellow the y -coordinate of q^- also intersects ℓ'_1 .

► **Lemma 2.** *Let $e \in D$ be a disk that is centered at a point of negative y -coordinate and does not contain q^- and intersects both ℓ_2 and ℓ_3 at points whose their y -coordinates are bellow the y -coordinate of q^- , then e intersects ℓ'_1 .*

Proof. Notice that e since does not contain q^- and intersects both ℓ_2 and ℓ_3 at points whose their y -coordinates are bellow the y -coordinate of q^- its center is bellow the y -coordinate of q^- .

First consider the case where $q^- = (0, -1.7)$ (the case where $\alpha \leq 17^\circ$).

Assume w.l.o.g. that the center of e is at the third quadrant of q^- . We have that e intersects ℓ_3 at point whose its y -coordinates is bellow the y -coordinate of q^- .

Let c be a disk center at the the third quadrant of q^- , such that it has q^- on its boundary and it is tangent to ℓ'_1 and to the vertical line through point $(1, 0)$. Thus we have

1. $r(c) = |-y(c) + 1|$, since c is tangent to ℓ'_1 .
2. $r(c) = |-x(c) + 1|$, since c is tangent to the vertical line through point $(1, 0)$.
3. $(x(c) - x(q^-))^2 + (y(c) - y(q^-))^2 = r(c)^2$, having point q^- on the boundary of c .

These equations solve to

$$x(c) = -\frac{27}{10} - 3\sqrt{\frac{3}{5}}, \quad y(c) = -\frac{27}{10} - 3\sqrt{\frac{3}{5}}$$

By the above claim it suffices to show that c does not intersect d^* , that is the distance between their centers is more than the sum of their radii:

$(x(c) - 0)^2 + (y(c) - 0)^2 > (1 + r(c))^2$ This can be verified by plugging $x(c)$, $y(c)$, and $r(c)$, as follows:

$$\begin{aligned} (x(c) - 0)^2 + (y(c) - 0)^2 &= \\ \left(-\frac{27}{10} - 3\sqrt{\frac{3}{5}}\right)^2 + \left(-\frac{27}{10} - 3\sqrt{\frac{3}{5}}\right)^2 &\geq \\ \left(2 + \frac{27}{10} + 3\sqrt{\frac{3}{5}}\right)^2. \end{aligned}$$

The above inequalities imply that c does not intersect d^* . Therefore, since e intersects d^* , e must intersect ℓ'_1 . The proof for the case where the center of e is at the forth quadrant of q^- is symmetric.

Next consider the case where $\alpha > 17^\circ$. This case is split into two case with respect to the x -coordinate of e (since q^- is not on the y -axis, the proof is not symmetric if e is in the third or forth quadrant of q^-). Moreover, the proof of each sub-case is split into two cases with respect to the two locations of q^- (the two different cases with respect to the y -coordinates of d).

Assume that the center of e is at the third quadrant of q^- . We have that e intersects ℓ_3 at point whose its y -coordinates is bellow the y -coordinate of q^- .

Let c be a disk centered at the the third quadrant of q^- , such that it has q^- on its boundary and it is tangent to ℓ'_1 and to the vertical line through point $(1, 0)$. Thus we have

1. $r(c) = |-y(c) + 1|$, since c is tangent to ℓ'_1 .
2. $r(c) = |-x(c) + 1|$, since c is tangent to the vertical line through point $(1, 0)$.
3. $(x(c) - x(q^-))^2 + (y(c) - y(q^-))^2 = r(c)^2$, having point q^- on the boundary of c .

These equations solve to

$$\begin{aligned} x(c) &= -3 - \sqrt{\frac{7}{2}}, \quad y(c) = -3 - \sqrt{\frac{7}{2}} \text{ when } q^- = (0.5, -2.5) \text{ and} \\ x(c) &= -\frac{333}{100} - \frac{\sqrt{849}}{10}, \quad y(c) = -\frac{333}{100} - \frac{\sqrt{849}}{10} \text{ when } q^- = (-0.5, -1.83) \end{aligned}$$

Now, we show that c does not intersect d^* , that is the distance between their centers is more than the sum of their radii:

$(x(c) - 0)^2 + (y(c) - 0)^2 > (1 + r(c))^2$ This can be verified by plugging $x(c)$, $y(c)$, and $r(c)$, as follows:

$$\begin{aligned} (x(c) - 0)^2 + (y(c) - 0)^2 &= \\ \left(-3 - \sqrt{\frac{7}{2}}\right)^2 + \left(-3 - \sqrt{\frac{7}{2}}\right)^2 &\geq \\ \left(2 + 3 + \sqrt{\frac{7}{2}}\right)^2. \end{aligned}$$

and

$$\begin{aligned}
 (x(c) - 0)^2 + (y(c) - 0)^2 &= \\
 \left(-\frac{333}{100} - \frac{\sqrt{849}}{10}\right)^2 + \left(-\frac{333}{100} - \frac{\sqrt{849}}{10}\right)^2 &\geq \\
 \left(2 + \frac{333}{100} + \frac{\sqrt{849}}{10}\right)^2. &
 \end{aligned}$$

The above inequalities imply that c does not intersect d^* . Therefore, since e intersects d^* , e must intersect ℓ'_1 .

Finally, assume that the center of e is at the forth quadrant of q^- . We have that e intersects ℓ_2 at point whose y -coordinate is below the y -coordinate of q^- .

Let ℓ be the vertical line through point $(-1, 0)$, and let ℓ' is the line that is tangent to d^* and of convex angle 30° with line ℓ_1 . Notice that in the case the center of d has negative y -coordinate the angle between ℓ_2 and ℓ_1 is at most 30° , otherwise ℓ_2 will not intersect d (the radius of d is at most 2).

Let c be a disk centered at the the forth quadrant of q^- , such that it has q^- on its boundary and it is tangent to ℓ'_1 and to ℓ , in the case that the y -coordinates of d are positive. And in the in the case that the y -coordinate of d are negative, let c be a disk centered at the the forth quadrant of q^- , such that it has q^- on its boundary and it is tangent to ℓ'_1 and to ℓ' .

Thus, we have

1. $r(c) = |-y(c) + 1|$, since c is tangent to ℓ'_1 .
2. $r(c) = |x(c) + 1|$, since c is tangent to ℓ (the vertical line through point $(-1, 0)$).
3. $(x(c) - x(q^-))^2 + (y(c) - y(q^-))^2 = r(c)^2$, having point q^- on the boundary of c .

These equations, when the y -coordinates of d are positive and hence $q^- = (0.5, -2.5)$, solve to

$$x(c) = 4 + \sqrt{\frac{21}{2}}, \quad y(c) = -4 - \sqrt{\frac{21}{2}}$$

and when the y -coordinates of d are negative and hence $q^- = (-0.5, -1.83)$, solve to

$$x(c) = \frac{233}{100} + \frac{\sqrt{283}}{10}, \quad y(c) = -\frac{233}{100} - \frac{\sqrt{283}}{10}.$$

Now, we show that c does not intersect d^* , that is the distance between their centers is more than the sum of their radii:

$(x(c) - 0)^2 + (y(c) - 0)^2 > (1 + r(c))^2$. This can be verified by plugging $x(c)$, $y(c)$, and $r(c)$, as follows:

$$\begin{aligned}
 (x(c) - 0)^2 + (y(c) - 0)^2 &= \\
 \left(4 + \sqrt{\frac{21}{2}}\right)^2 + \left(4 + \sqrt{\frac{21}{2}}\right)^2 &\geq \\
 \left(2 + 4 + \sqrt{\frac{21}{2}}\right)^2. &
 \end{aligned}$$

and

$$\begin{aligned} (x(c) - 0)^2 + (y(c) - 0)^2 &= \\ \left(\frac{233}{100} + \frac{\sqrt{283}}{10}\right)^2 + \left(\frac{233}{100} + \frac{\sqrt{283}}{10}\right)^2 &\geq \\ \left(2 + \frac{233}{100} + \frac{\sqrt{283}}{10}\right)^2. \end{aligned}$$

The above inequalities imply that c does not intersect d^* . Therefore, since e intersects d^* , e must intersect ℓ'_1 . ◀

4.3 Proof of Case $2 < r_{\min} < 4$

Recall the disk $d_{\min} \in D^-$ with radius r_{\min} . Since $r_{\min} > 2$, any disk in D^- has radius larger than 2, and since $r_{\min} < 4$, every set $D_{\leq k}^-$ with $k \geq 4$ contains d_{\min} . In the following three claims we pick a disk d' from a set $D_{\leq k}^-$. In these claims we do not assume the [Base setting](#), rather we assume, after a suitable rotation, that the center of d' lies on the positive x -axis. In this section we slightly abuse the notation and for a disk e we denote by $x(e)$ and $y(e)$, the x - and y -coordinates of the center of e .

► **Claim 1.** Let d' be the disk in $D_{\leq 5}^-$ with maximum $\delta(d')$, and assume that its center lies on the positive x -axis. If $\delta(d') \geq 0.5$, then $\{(0, 0), (2, 0), (0.4, 2), (0.4, -2)\}$ stabs D .

Proof. Any disk in $D \setminus D^-$ contains $(0, 0)$. Thus, we prove the claim for D^- . We claim for any disk $e \in D^-$ that if $y(e) \geq 0$ then e contains $(2, 0)$ or $(0.4, 2)$, otherwise e contains $(2, 0)$ or $(0.4, -2)$. Because of symmetry we prove our claim only for $y(e) \geq 0$. Notice that the center of d' is $(r(d') + \delta(d'), 0)$. Depending on the sign of $x(e)$ we consider two cases.

- $x(e) \leq 0$. Let d_2 be the disk of radius 2, with negative $x(d_2)$, that has $(0, 0)$ and $(0.4, 2)$ on its boundary. If (x_2, y_2) denote the center of d_2 , then we have the following equations

$$x_2 \leq 0, \quad x_2^2 + y_2^2 = 4, \quad (x_2 - 0.4)^2 + (y_2 - 2)^2 = 4,$$

which solve to $x_2 = \frac{1}{5} - \sqrt{37/13}$ and $y_2 = 1 + \frac{\sqrt{37/13}}{5}$.

Since $r(d') \leq 5$ and $\delta(d') > 0.5$, the distance between the centers of d_2 and d' is more than the sum of their radii, that is

$$(x_2 - r(d') - \delta(d'))^2 + (y_2 - 0)^2 > (2 + r(d'))^2.$$

Therefore d_2 does not intersect d' . Recall that e intersects d' and d^* . These constraints and our geometric lemmas imply that if $y(e) > 2$ then e contains the point $(0.4, 2)$ because this point is above the tangent between d^* and d' . Moreover, if $0 \leq y(e) \leq 2$ then e contains $(0, 0)$ or $(0.4, 2)$.

- $x(e) > 0$. Let d_2 be the disk of radius 2, with $x(d_2) > 0.4$, that has $(2, 0)$ and $(0.4, 2)$ on its boundary. If (x_2, y_2) denote the center of d_2 , then we have the following equations

$$x_2 \geq 0.4, \quad (x_2 - 2)^2 + y_2^2 = 4, \quad (x_2 - 0.4)^2 + (y_2 - 2)^2 = 4,$$

which solve to $x_2 = \frac{6}{5} + \sqrt{59/41}$ and $y_2 = 1 + \frac{4\sqrt{59/41}}{5}$.

The distance between the centers of d_2 and d^* is more than the sum of their radii, that is $(x_2)^2 + (y_2)^2 > (1 + 2)^2$, which implies that d^2 does not intersect d^* . This constraint and our geometric lemmas imply that e contains $(2, 0)$ or point $(0.4, 2)$. ◀

► **Claim 2.** Assume that $D_{\leq 5}^-$ does not contain any disk with $\delta(\cdot)$ more than 0.5. Let d' be the disk in $D_{\leq 20}^-$ with maximum $\delta(d')$, and assume that its center lies on the positive x -axis. If $\delta(d') \geq 0.5$, then $\{(0,0), (2,0), (-0.15, 2.7), (-0.15, -2.7)\}$ stabs D .

Proof. Any disk in $D \setminus D^-$ contains $(0,0)$. Thus, we prove the claim for D^- . We claim for any disk $e \in D^-$ that if $y(e) \geq 0$ then e contains $(2,0)$ or $(-0.15, 2.7)$, otherwise e contains $(2,0)$ or $(-0.15, -2.7)$. Because of symmetry we prove our claim only for $y(e) \geq 0$. Notice that the center of d' is $(r(d') + \delta(d'), 0)$. We consider the following three cases.

- $x(e) \leq 0$. Let d_2 be the disk of radius 2, with negative $x(d_2)$, that has $(0,0)$ and $(-0.15, 2.7)$ on its boundary. If (x_2, y_2) denote the center of d_2 , then we have

$$x_2 \leq 0, \quad x_2^2 + y_2^2 = 4, \quad (x_2 + 0.15)^2 + (y_2 - 2.7)^2 = 4,$$

which solve to $x_2 = -\frac{3}{40} - \frac{9\sqrt{139/13}}{20}$ and $y_2 = \frac{27}{20} + \frac{\sqrt{139/13}}{40}$.

Since $r(d') \leq 20$ and $\delta(d') > 0.5$, the distance between the centers of d_2 and d' is more than the sum of their radii, that is $(x_2 - r(d') - \delta(d'))^2 + y_2^2 > (2 + r(d'))^2$.

Therefore d_2 does not intersect d' . Recall that e intersects d' and d^* . These constraints and our geometric lemmas imply that if $y(e) > 2.7$ then e contains the point $(-0.15, 2.7)$ because this point is above the tangent between d^* and d' . Moreover, if $0 \leq y(e) \leq 2.7$ then e contains $(0,0)$ or $(-0.15, 2.7)$.

- $x(e) > 0$ and $r(e) > 5$. Let d_5 be the disk of radius 5, with positive $x(d_5)$, that has $(2,0)$ and $(-0.15, 2.7)$ on its boundary. If (x_5, y_5) denote the center of d_5 , then we have

$$x_5 \geq 0, \quad (x_5 - 2)^2 + y_5^2 = 25, \quad (x_5 + 0.15)^2 + (y_5 - 2.7)^2 = 25,$$

which solve to $x_5 = \frac{37}{40} + \frac{243\sqrt{87/953}}{20}$ and $y_5 = \frac{27}{20} + \frac{387\sqrt{87/953}}{40}$.

Since distance between the centers of d_5 and d^* is more than the sum of their radii, i.e., $(x_5)^2 + (y_5)^2 > (1 + 5)^2$, these disks do not intersect. Thus, by geometric lemmas e contains $(2,0)$ or point $(-0.15, 2.7)$.

- $x(e) > 0$ and $r(e) < 5$. Recall that $r(e) > 2$. Since $e \in D_{\leq 5}^-$, our claim assumption implies that $\delta(e) < 0.5$. We are going to use an idea, similar to the one above, to show that e contains $(2,0)$ or $(-0.15, 2.7)$. Let d_2 be the disk of radius 2, with positive $x(d_2)$, that has $(2,0)$ and $(-0.15, 2.7)$ on its boundary. If (x_2, y_2) denote the center of d_2 , then

$$x_2 \geq 0, \quad (x_2 - 2)^2 + y_2^2 = 4, \quad (x_2 + 0.15)^2 + (y_2 - 2.7)^2 = 4,$$

which solve to $x_2 = \frac{37}{40} + \frac{27\sqrt{327/953}}{20}$ and $y_2 = \frac{27}{20} + \frac{43\sqrt{327/953}}{40}$.

We claim that d_2 does not intersect the disk, of radius 0.5 and center c^* , which we denote by $d_{0.5}$. This claim can be verified by showing that the distance between their centers is more than the sum of their radii, that is $x_2^2 + y_2^2 > (0.5 + 2)^2$. Notice that e intersects $d_{0.5}$ because $\delta(e) < 0.5$. Our geometric lemmas imply that e contains $(2,0)$ or $(-0.15, 2.7)$. ◀

► **Claim 3.** Let d' be the disk in $D_{\leq 5}^-$ with maximum $\delta(d')$, and assume that its center lies on the positive x -axis. If $0.11 < \delta(d') < 0.5$, then $\{(0,0), (2,0), (-0.15, 1.75), (-0.15, -1.75)\}$ stabs D .

Proof. Any disk in $D \setminus D^-$ contains $(0,0)$. Thus, we prove the claim for D^- . We claim for any disk $e \in D^-$ that if $y(e) \geq 0$ then e contains $(2,0)$ or $(-0.15, 1.75)$, otherwise e contains $(2,0)$ or $(-0.15, -1.75)$. Because of symmetry we prove our claim only for $y(e) \geq 0$. Notice that the center of d' is $(r(d') + \delta(d'), 0)$. We consider the following three cases.

- $x(e) \leq 0$. Let d_2 be the disk of radius 2, with negative $x(d_2)$, that has $(0,0)$ and $(-0.15, 1.75)$ on its boundary. If (x_2, y_2) denote the center of d_2 , then we have the following equations

$$x_2 \leq 0, \quad x_2^2 + y_2^2 = 4, \quad (x_2 + 0.15)^2 + (y_2 - 1.75)^2 = 4,$$

which solve to $x_2 = -\frac{3}{40} - \frac{21\sqrt{287/617}}{8}$ and $y_2 = \frac{7}{8} - \frac{9\sqrt{287/617}}{40}$.

Since $r(d') \leq 5$ and $\delta(d') > 0.11$, the following inequality holds, and thus d_2 and d' do not intersect: $(x_2 - r(d') - \delta(d'))^2 + (y_2 - 0)^2 > (2 + r(d'))^2$.

These constraints and our geometric lemmas imply that if $y(e) \leq 1.75$ then e contains $(0,0)$ or $(-0.15, 1.75)$ because it intersects d' , and if $y(e) > 1.75$ then e contains $(-0.15, 1.75)$ because this point is above the tangent between two d^* and d' , which are intersected by e .

- $x(e) > 0$ and $r(e) > 5$. Let d_5 be the disk of radius 5, with positive $x(d_5)$, that has $(2,0)$ and $(-0.15, 1.75)$ on its boundary. If (x_5, y_5) denote the center of d_5 , then we have

$$x_5 \geq 0, \quad (x_5 - 2)^2 + y_5^2 = 25, \quad (x_5 + 0.15)^2 + (y_5 - 1.75)^2 = 25,$$

which solve to $x_5 = \frac{37}{40} + \frac{7\sqrt{18463/1537}}{8}$ and $y_5 = \frac{7}{8} + \frac{43\sqrt{18463/1537}}{40}$.

Since distance between the centers of d_5 and d^* is more than the sum of their radii, i.e., $(x_5)^2 + (y_5)^2 > (1 + 5)^2$, these disks do not intersect. Thus, by geometric lemmas e contains $(2,0)$ or point $(-0.15, 1.75)$.

- $x(e) > 0$ and $r(e) < 5$. Recall that $r(e) > 2$. Since $e \in D_{\leq 5}^-$, our claim assumption implies that $\delta(e) < 0.5$. Let d_2 be the disk of radius 2, with positive $x(d_2)$, that has $(2,0)$ and $(-0.15, 1.75)$ on its boundary. If (x_2, y_2) denote the center of d_2 , then

$$x_2 \geq 0, \quad (x_2 - 2)^2 + y_2^2 = 4, \quad (x_2 + 0.15)^2 + (y_2 - 1.75)^2 = 4,$$

which solve to $x_2 = \frac{37}{40} + \frac{7\sqrt{1663/1537}}{8}$ and $y_2 = \frac{7}{8} + \frac{43\sqrt{1663/1537}}{40}$.

We claim that d_2 does not intersect the disk, of radius 0.5 and center c^* , which we denote by $d_{0.5}$. This can be verified by showing that the distance between their centers is more than the sum of their radii, that is $x_2^2 + y_2^2 > (0.5 + 2)^2$. Notice that e intersects $d_{0.5}$ because $\delta(e) < 0.5$. Our geometric lemmas imply that e contains $(2,0)$ or $(-0.15, 1.75)$. ◀

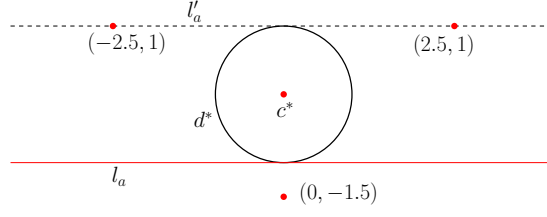
Claims 1, 2, and 3 imply that if $D_{\leq 5}^-$ contains a disk with $\delta(\cdot) \geq 0.11$, or if $D_{\leq 20}^-$ contains a disk with $\delta(\cdot) > 0.5$, then there exists a set of four points that stabs D . It remains to prove our claim for the case where every disk in $D_{\leq 5}^-$ has $\delta(\cdot) < 0.11$ and every disk in $D_{\leq 20}^-$ has $\delta(\cdot) < 0.5$. To that end, we assume the [Base setting](#).

In this stage we proved that for a set D such that

- there exists a disk $d \in D^-$ with radius less than 5 such that $\delta(d) \geq 0.11$ or
- there exists a disk $d \in D^-$ with radius less than 20 such that $\delta(d) \geq 0.5$

The set D is stabbed by 4 points.

So we may assume that for every disk $d \in D^-$ with radius less than 5 we have that $\delta(d) < 0.11$ and for each disk $d \in D^-$ with radius less than 20 we have that $\delta(d) \leq 0.5$. In what follows we show that such a set D is stabbed by $(0,0)$, $(2.5, 1)$, $(-2.5, 1)$, and $(0, -1.5)$. Here we assume w.l.o.g. that one of the tangents (ℓ_1) is as described in Section 4.1. See Figure 8.



9 ■ **Figure 8** The 4 piercing points in this case are depicted in red.

► **Claim 4.** If for every disk $e_1 \in D_{\leq 5}^-$ we have $\delta(e_1) < 0.11$ and for every disk $e_2 \in D_{\leq 20}^-$ we have $\delta(e_2) < 0.5$, then the set $\{(0, 0), (2.5, 1), (-2.5, 1), (0, -1.5)\}$ stabs D .

Proof. Let d_{k_l} and d_{k_r} be the two disks of radius k having points $(0, -1.5)$ and $(2.5, 1)$ on their boundary, such that the center of d_{k_r} is to the right of the center of d_{k_l} . Let d_k denote the disk d_{k_r} for short. Consider the disk d_2 , we have that $\delta(d_2) > 0.11$, thus any disk d of radius between 2 and 5 its $\delta(d)$ is more then 0.11. Moreover for disk d_5 we have that $\delta(d_5) > 0.5$, thus any disk d of radius more than 5 its $\delta(d)$ is more then 0.5. However, we assume there are no such disks in D . The case for disk with negative x -coordinate is symmetric. Finally for disk centered above the line containing $(-2.5, 1)$ and $(2.5, 1)$, The argument follows as the case where $r_{\min} \geq 4$. ◀

5 Geometric Lemmas

► **Lemma 3.** *Let*

- ℓ be a horizontal line;
- a and b be distinct points on ℓ with a to the left of b ;
- V be the vertical strip whose left side contains a and whose right side contains b ;
- c be a disk with center below ℓ , such that $c \cap \ell = \emptyset$ or c tangent to the line segment ab and $c \cap V \neq \emptyset$;
- e be a disk with center above ℓ that intersects $V \cap c$.

Then e intersects the segment ab .

► **Corollary 4.** *Let*

- ℓ , a , b , c , and V be defined as in Lemma 3;
- e be a disk with center above ℓ , not in V , and that intersects $V \cap c$.

Then e contains a or b .

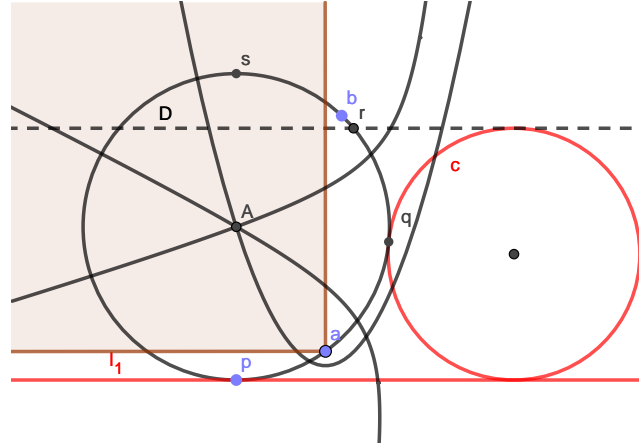
► **Corollary 5.** *Let*

- ℓ , a , b , c , and V be defined as in Lemma 3;
- d be disk tangent to a , b , and c ;
- e be a disk with center in V above ℓ whose radius is at least the radius of d ;
- $e \cap c \neq \emptyset$.

Then e contains a or b .

► **Lemma 6.** *Let*

- ℓ be a horizontal line;



10 **Figure 9** The statement of Lemma 7.

- a and b be two points above ℓ with a left of b ;
- V be the vertical strip whose left side contains a and whose right side contains b ;
- d_1 and d_2 are the two disks that have a and b on their boundary and tangent to ℓ from above;
- $d \in \{d_1, d_2\}$;
- e a disk with center in V and above the center of d that intersects ℓ .

Then e contains a or b .

► **Lemma 7.** *Let*

- ℓ be a horizontal line segment;
- c be a disk that intersects ℓ and whose center is above ℓ ;
- ℓ' be a line parallel to ℓ and tangent to c from above;
- d be a disk tangent to ℓ from above at some point p and tangent to c from the left at some point q ;
- r be the intersection of ℓ' with the right boundary of d ;
- s be the highest point on d ;
- a be a point on the boundary of d between p and q ;
- and b be a point on the boundary of d between r and s ;
- e be a disk with center in the upper-left quadrant of a that intersects ℓ and c .

Then e contains a or b .

► **Corollary 8.** *Let*

- ℓ , a , b , c , and d be defined as in Lemma 7;
- c' be a disk that is contained in disk c ;
- e be a disk with center in the upper-left quadrant of a that intersects ℓ and c' .

Then e contains a or b .

References

- 1 L. Danzer. Zur Lösung des Gallaischen Problems über Kreisscheiben in der Euklidischen Ebene. *Studia Scientiarum Mathematicarum Hungarica*, 21(1-2):111–134, 1986.
- 2 Branko Grünbaum. On intersections of similar sets. *Portugal. Math.*, 18:155–164, 1959.
- 3 H. Hadwiger and H. Debrunner. Ausgewählte Einzelprobleme der kombinatorischen Geometrie in der Ebene. *Enseignement Math. (2)*, 1:56–89, 1955.
- 4 Sariel Har-Peled, Haim Kaplan, Wolfgang Mulzer, Liam Roditty, Paul Seiferth, Micha Sharir, and Max Willert. Stabbing pairwise intersecting disks by five points. *arXiv:1801.03158*, 2018. Also in EuroCG’18.
- 5 Eduard Helly. Über Mengen konvexer Körper mit gemeinschaftlichen Punkten. *Jahresbericht der Deutschen Mathematiker-Vereinigung*, 32:175–176, 1923.
- 6 Eduard Helly. Über Systeme von abgeschlossenen Mengen mit gemeinschaftlichen Punkten. *Monatshefte für Mathematik*, 37(1):281–302, 1930.
- 7 Johann Radon. Mengen konvexer Körper, die einen gemeinsamen Punkt enthalten. *Mathematische Annalen*, 83(1):113–115, 1921.
- 8 Lajos Stachó. Über ein Problem für Kreisscheibenfamilien. *Acta Scientiarum Mathematicarum (Szeged)*, 26:273–282, 1965.
- 9 Lajos Stachó. A solution of Gallai’s problem on pinning down circles. *Mat. Lapok*, 32(1-3):19–47, 1981/84.