

Motion of a rod pushed at one point in a weightless environment in space

Ashok K. Singal*

Astronomy and Astrophysics Division, Physical Research Laboratory, Navrangpura, Ahmedabad - 380 009, India

(Dated: December 14, 2024)

We analyze the motion of a rod floating in a weightless environment in space when a force is applied at some point on the rod in a direction perpendicular to its length. If the force is applied at the center of mass, then the rod gets a linear motion perpendicular to its length. However, if the same force is applied at a point other than the center of mass, say, near one end of the rod, thereby giving rise to a torque, then there will also be a rotation of the rod about its center of mass, in addition to the motion of the center of mass itself. If the force applied is for a very short duration, but imparting nevertheless a finite impulse, like in a sudden (quick) hit at one end of the rod, then the center of mass will move with a constant linear speed and superimposed on it will be a rotation of the rod with constant angular speed about the center of mass. However, if force is applied continuously, say by strapping a tiny rocket at one end of the rod, then the direction of the applied force, as seen by an external (inertial) observer, would change continuously with the rotation of the rod, and the motion of the center of mass would also be not in one fixed direction. One expects the resultant motion of the rod to be quite complicated in such a case. We show here that the net motion of such a rod in space actually is an accelerated rotation about a fixed point, that may or may not lie on the rod, depending on the location of the point where the force is applied on the rod.

I. INTRODUCTION

Consider a uniform rod of length l and mass m , freely floating in space in a weightless condition. Suppose a force F is applied at some point on the rod, in a direction perpendicular to the length of the rod. What will be the motion of the rod? The question whether any such rod in space, when pushed at say, one end of the rod, will have only a linear motion or in addition possess a rotation too, has been discussed in various forums on the web (see e.g., <http://www.madsci.org/posts/archives/2007-03/1174873330.Phr.html>). However, the complete motion of the rod still seems to elude a precise description. If the force is applied at the center of mass C of the rod, then from the law of conservation of momentum the rod would gain a linear motion in the direction of the applied force. However, if the same force is applied at a point other than the center of mass, say, near one end of the rod, then in addition to the motion of the center of mass as before, there will be a torque giving rise to also a rotation of the rod about C .¹⁻³ In such a scenario, if force is applied continuously, then a rotation of the rod will imply a continuous change in the direction of the applied force and a consequential change in the direction of motion of the center of mass. One expects the combined motion to be quite complicated. We undertake this intriguing exercise here to figure out the net motion of such a system.

We could imagine the rod (as well as the observer) to be freely floating in space, say, in a weightless environment within a satellite orbiting the Earth (and thus freely falling in Earth's gravitational field) which can then be considered to be an inertial frame, provided any tidal effects over the system dimensions due to Earth's gravitation field could be ignored. We take the length of the rod to be short enough so that we may not be bothered

about any light-travel time effects. All movements are also assumed to be slow enough so that no special relativistic effects come into picture. Even the sound speed within the rod, with which one part of the rod material may communicate with other parts, i.e., the speed with which any influence within the rod may travel, is taken to be fast compared to any translational or rotational speeds of the rod for whatever temporal intervals we may be concerned with. In order to provide a continuous force perpendicular to the length of the rod, we could strap a tiny rocket to the rod at a point of our choosing. We further suppose that the rocket system, providing the thrust, makes only an imperceptible, if any, change in the mass of the rod. Further, we take the force, acceleration etc., though perpendicular to the rod, but to be always in the x - y plane, so that the torque, angular momentum and angular velocity vectors will all be along the z -axis, therefore we need to consider only the magnitudes of such vectors and as we shall see, it does not give rise to any ambiguities.

II. AN IMPULSE GIVEN TO ONE OF A PAIR OF INDEPENDENT MASSES

Before we analyse a uniform rod of distributed mass, we first consider a case where the mass is in the form of two independent, equal point masses. Let the two particles, A and B , each of mass $m/2$, lie initially a distance l apart, parallel to the x -axis. Let us now give a push to A , say along the y -axis, i.e., in a direction perpendicular to its separation from B . For this we consider a force F along y -axis, applied for a short (infinitesimal!) duration Δt , nevertheless imparting a finite impulse $p = F\Delta t$, like in a sudden (quick) hit at one end of the rod. We examine the system at an instant immediately after that. As a consequence of the impulse given, particle A gains

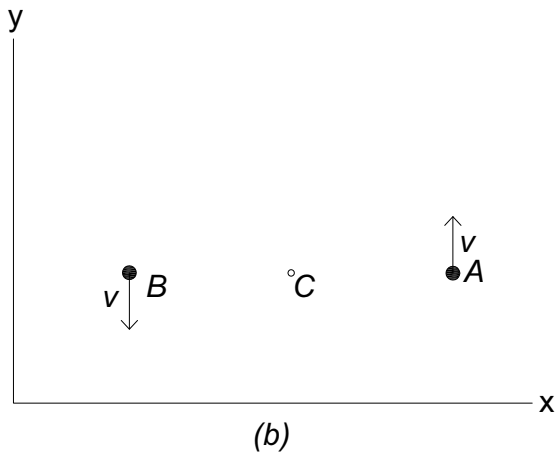
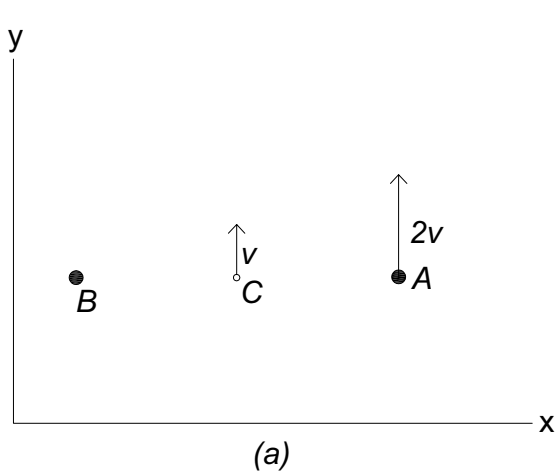


FIG. 1. (a) Particle A , with mass $m/2$, is given an impulse p , so that it moves with a constant velocity $v_A = 2p/m$. The center of mass C then moves with a velocity $v = p/m$. (b) With respect to C , the system rotates with A moving with a speed v along the y -direction while B moving with the same speed v in the opposite direction.

a velocity $v_A = 2p/m$ along y -direction, having a kinetic energy $K = p^2/m$, which is the total kinetic energy of the system, since B is considered stationary. From the conservation of momentum, the center of mass C of the system moves with a velocity $v = p/m$ parallel to the y -axis (Fig. 1a), with a kinetic energy of translation $K_1 = p^2/2m$. But this accounts for only half of the total kinetic energy of the system, i.e., $K_1 = K/2$.

Actually, the system possesses also a rotation about C . This is because while A has a velocity $2v$ along y -direction, B is stationary, and C has a velocity v along y -direction. Therefore with respect to C , A has a speed v along y -direction while B has a speed v in the opposite direction (Fig. 1b) and these two together constitute a rotation about C . The kinetic energy associated with this rotation about C is $K_2 = I\omega^2/2$, where

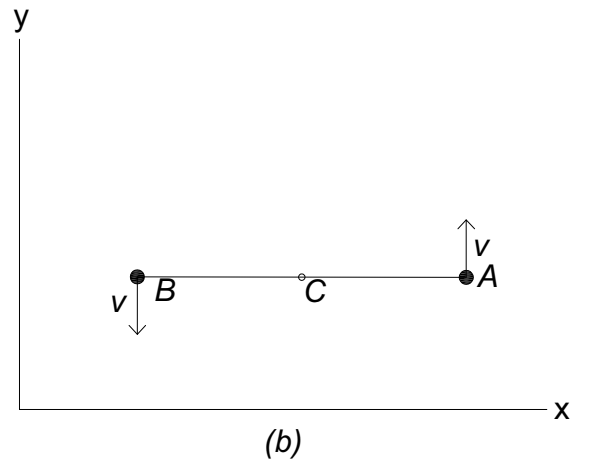
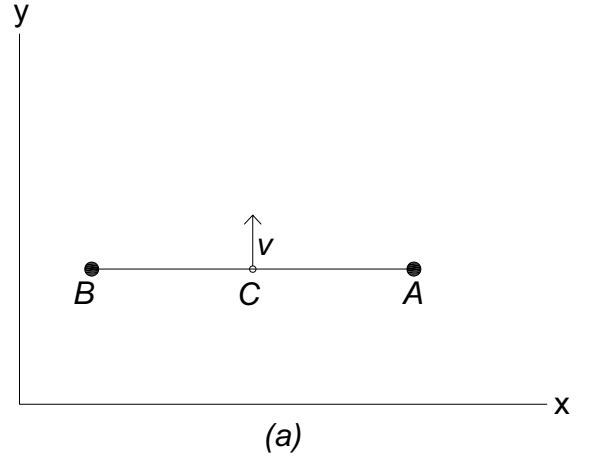


FIG. 2. (a) Motion of the centre of mass C , due to the impulse given to the system of two masses A and B joined by a massless rod. (b) Rotation of the rod about its centre of mass C , due to the torque resulting from the force applied at A .

$I = 2(l/2)^2 m/2 = ml^2/4$ and $\omega = 2v/l$ are respectively the moment of inertia and angular speed of rotation about the center of mass C . Thus $K_2 = mv^2/2 = p^2/2m$, giving $K_1 + K_2 = K$.

III. A PAIR OF MASSES JOINED BY A RIGID MASSLESS ROD BEING PUSHED AT ONE END

A. Force applied for a short duration

Let us now consider two particles, each of mass $m/2$, joined by a massless but rigid rod that keeps them a distance l apart. Again a force F along y -axis is applied at A for a short duration Δt , giving a finite impulse $p = F\Delta t$ to the system and as before we examine the system at an instant immediately after that. The center of mass

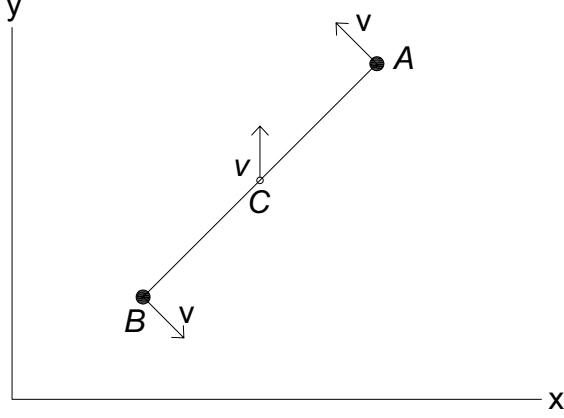


FIG. 3. After a finite impulse p is given to the system in a short (infinitesimal!) interval of time, the center of mass C of the rod moves with a constant linear velocity $v = p/m$ along the y -direction. In addition, the rod rotates around C with a constant angular speed $\omega = 2v/l$.

C of the system has a velocity $v = p/m$ along y -direction (Fig. 2a). But at this stage we do not know the velocity of A as it is connected to B by a rigid rod.

The force F applied at A results in a torque $N = lF/2$ about C for a time Δt , giving rise to an angular momentum $J = I\omega = lp/2$ to the system, implying an angular speed of rotation $\omega = J/I$, where I is the moment of inertia, $I = ml^2/4$, about C . Thus $\omega = 2p/ml$ and this implies that with respect to C , A moves with an instantaneous speed of rotation $\omega l/2 = p/m = v$ along the y -direction while B moves with an equal speed in the opposite direction (Fig. 2b).

As seen by an inertial observer, with respect to which C is moving with a speed v along y -axis, A will then have a speed $2v$ while speed of B will be zero, making its location fixed in space. We can notice the similarity of this case with that of unconnected masses in Section II, where C had a velocity v and A moved with $v_A = 2v$, while B remained stationary. Actually in the case of the unconnected masses in Section II, the instantaneous motion of A is perpendicular to the direction from B to A (Fig. 1a), therefore to a first order, the separation of A and B tends to remain constant at l , and the system for an instant behaves as if the two masses A and B were connected by a rigid rod of length l .

Thus, in the case of two masses joined by a rigid rod, for an instant the whole system will appear to rotate about point B with an angular speed ω . However, when seen over a longer duration, the center of mass C will move with a constant linear velocity $v = p/m$ along y -direction, and superimposed on it will be the rotation of the rod about C , with a constant angular speed $\omega = 2v/l$ (Fig. 3).

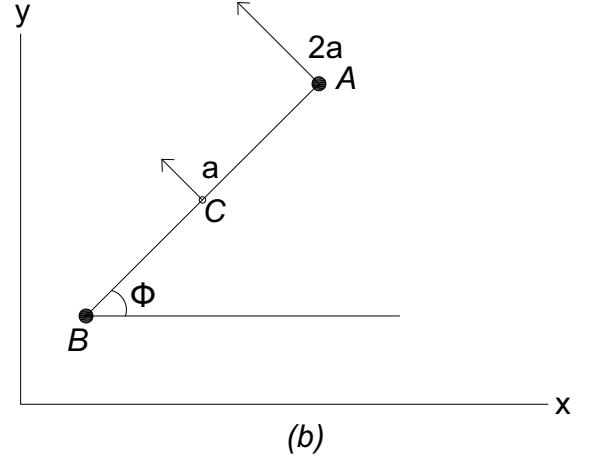
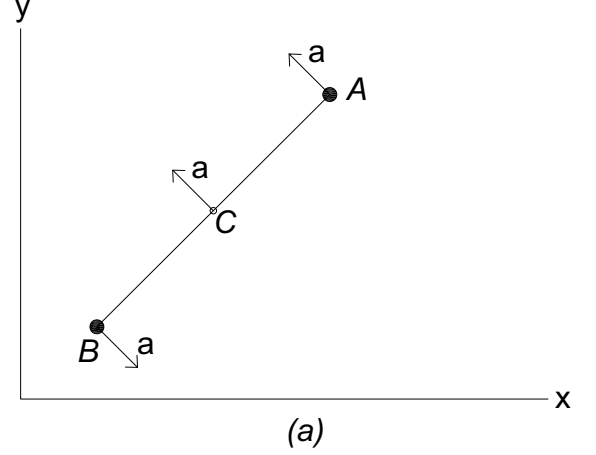


FIG. 4. (a) When a continuous force is applied at one end A , in addition to the instantaneous acceleration of the centre of mass C in direction perpendicular to the rod, there is also a rotation of the rod about C , with an increasing angular speed, due to the applied torque. (b) As seen in the inertial frame, due to the force applied perpendicular to the rod at A , at any orientation of the rod, the whole system rotates about its other end B with an accelerating angular speed, with the centre of mass C too rotating with the same increasing angular speed about B .

B. The force applied continuously

Let us now consider that a finite force F is applied continuously at A in a direction perpendicular to the length of the rod. Then C gets accelerated at a rate $a = F/m$, while due to the torque $N = Fl/2$ there is an increasing angular momentum, $dJ/dt = m(l/2)^2 d\omega/dt = N = Fl/2$ and hence an angular acceleration, $d\omega/dt = 2F/ml$ of A and B about C . This also implies that A has an instantaneous linear acceleration $(l/2)d\omega/dt = F/m = a$ with respect to C in direction perpendicular to the rod and parallel to the linear acceleration a of C itself with

respect to the inertial frame, while B has a linear acceleration a in an opposite direction (Fig. 4a). Thus B would have a zero acceleration in the inertial frame of reference. This will be true at every instant, for every orientation of the rod, and B will never gather any speed, while with respect to B , center of mass C will always have an acceleration a and the particle A would have an acceleration $2a$ (Fig. 4b). Assuming the system to be at rest at $t = 0$, the rod will thus rotate around B with an angular speed, $\omega = 2Ft/ml$ at time t , and the total rotation of the rod will be, $\phi = Ft^2/ml$. It can be readily seen that this rotation about B guarantees that C moves at every instant with an acceleration $a = F/m$ perpendicular to the line BCA , as expected from the force F applied perpendicular to the rod length, and a rotation of rod about C with an angular acceleration, $d\omega/dt = 2F/ml$, expected from the applied torque $Fl/2$. Since the moment of inertia about B is $I_0 = m(l/2)^2 + I = ml^2/2$,¹⁻³ the kinetic energy of rotation about O , which represents the total kinetic energy of the system, is $I_0\omega^2/2 = F^2t^2/m$.

IV. A PUSH GIVEN TO A ROD WITH A UNIFORM DISTRIBUTION OF MASS

A. Force applied for a short duration

A rod with a uniform distribution of mass m and length l has a moment of inertia about its center of mass C as $I = ml^2/12$.¹⁻³ Let us suppose that the rod, to begin with, is lying along the x -axis and we apply at one end A of the rod a force F along the y -axis, i.e., in a direction perpendicular to the length of the rod, for a short duration Δt , imparting a finite impulse, $p = F\Delta t$ to the system, like in a sudden (quick) hit at one end of the rod. As a result the center of mass C of the system moves with a velocity $v = p/m$ along y -direction, with a kinetic energy of translation $K_1 = mv^2/2 = p^2/2m$. But in addition there is a torque about C , $N = Fl/2$, for the time Δt that gives rise to an angular momentum $J = I\omega = ml^2\omega/12 = N\Delta t = pl/2$ about C . From this we readily see that the rod rotates around C with an angular speed $\omega = 6p/ml$ (Fig. 5). The kinetic energy associated with this angular motion about C is $K_2 = I\omega^2/2 = (ml^2/12)(6p/ml)^2/2 = 3p^2/2m$. Thus the total kinetic energy of the system is $K = K_1 + K_2 = 2p^2/m$.

Accordingly, a uniform rod of mass m and length l , after an impulse p is imparted at one end of the rod, will be spinning with an angular frequency $\omega = 6p/ml$ and simultaneously drifting along the direction of the given impulse with a constant velocity $v = p/m$.

Now suppose the same impulse p were given, not at one end of the rod, but at some general point, say, at point D at a distance d from C . The center of mass, C , would still move with the same velocity $v = p/m$ along the direction of the impulse. However the torque about C will now be different, $N = Fd$ and therefore the angular momentum about C would be $J = ml^2\omega/12 = pd$. Thus

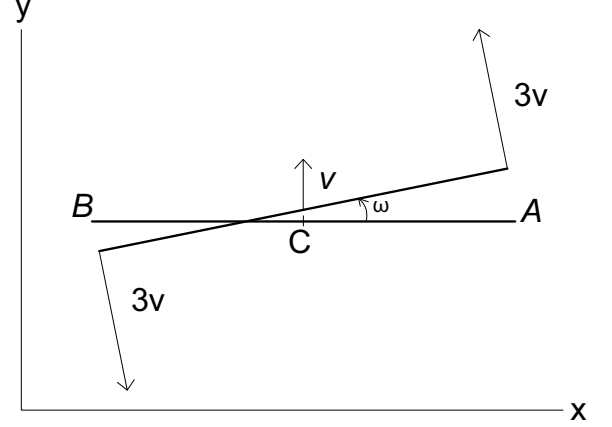


FIG. 5. The center of mass C of the rod moves with a constant linear velocity v along the y -direction. In addition, the rod rotates with a constant angular speed $\omega = 6v/l$ about C .

the rod will now be rotating with angular speed $\omega = 12pd/ml^2$. The kinetic energy of rotation about C would be $I\omega^2/2 = 6p^2d^2/ml^2$, with the total kinetic energy as $(p^2/2m)(1 + 12d^2/l^2)$.

B. The force applied continuously

Now if a finite force F is applied continuously at one of the rod ends, say A , in a direction perpendicular to the rod, then C gets accelerated at a rate $a = F/m$, while due to the torque $N = Fl/2$, there is an increasing angular momentum, $dJ/dt = N$ or $I d\omega/dt = Fl/2$, implying an angular acceleration, $d\omega/dt = 6F/ml$ about C .

This also means that with respect to C , A moves with an instantaneous linear acceleration $(l/2)d\omega/dt = 3F/m$ in direction perpendicular to the rod and in the same direction as the instantaneous linear acceleration F/m of C with respect to the inertial frame, while B has a linear acceleration $3F/m$ in the opposite direction. However, there would be a point, say O , at a distance $l/6$ from C in the direction of B (Fig. 6a) which will have an acceleration $(l/6)d\omega/dt = F/m$ in a direction opposite to the acceleration of C with respect to the inertial frame, and O thus will have a zero acceleration with respect to the inertial frame. Accordingly, the rod will be rotating around O with an angular acceleration, $d\omega/dt = 6F/ml$, with C having an instantaneous linear acceleration $a = F/m$ along y -direction, A moving with a linear acceleration $4F/m$ along y -direction and B moving a linear acceleration $2F/m$ in the opposite direction (Fig. 6a). It should be noted that O lies at a distance $2l/3$ from A and at $l/3$ from B .

Thus O will remain stationary in the inertial frame and the rod will rotate around O , with an angular speed, $\omega = 6Ft/ml$ at time t , with a total rotation angle, $\phi =$

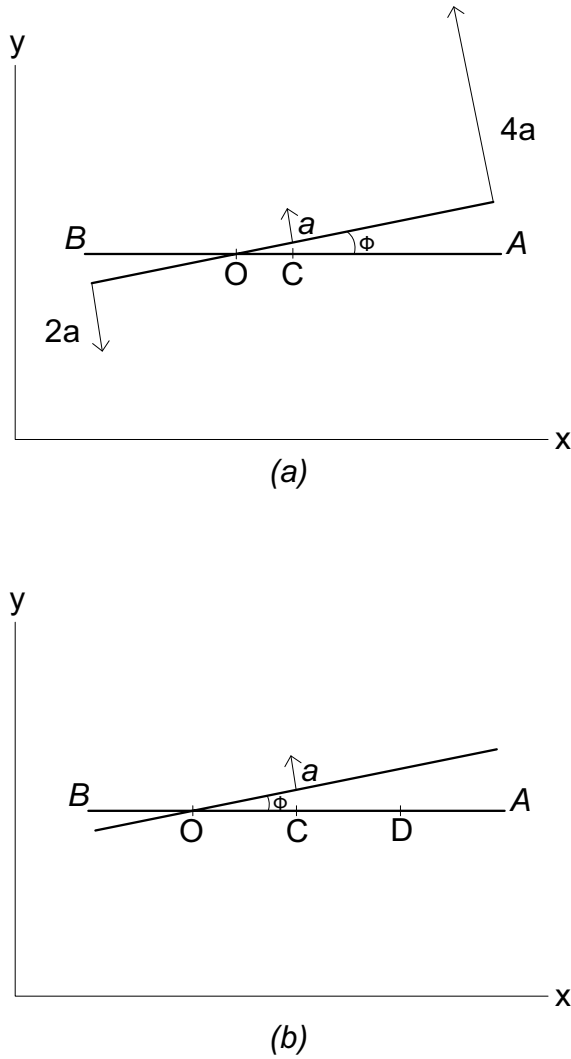


FIG. 6. (a) The uniform rod pushed continuously at one end A rotates with an angular acceleration about a point O , at a distance $l/6$ from C . The centre of mass C is also rotating about O with the same angular speed, increasing with time. (b) The uniform rod pushed continuously at a point D , at distance d from C , rotates with an angular acceleration about a point O , at a distance $l^2/12d$ from C . The centre of mass C is also rotating about O with the same angular speed, increasing with time.

$3Ft^2/ml$, assuming ϕ to be zero at $t = 0$ (Fig 6a). The moment of inertia about O is $I_0 = m(l/6)^2 + ml^2/12 = ml^2/9$, therefore at a time t , the kinetic energy of rotation about O , which is the total kinetic energy of the system at that time, is $I_0\omega^2/2 = 2F^2t^2/m$.

Now let us consider the case where the same force F is applied, not at the end A of the rod, but at some general point D , say, at a distance d from C . The center of mass C would still move with the same linear acceleration $a = F/m$ perpendicular to the rod. However the torque about C will be different, $N = Fd$, implying an angular acceleration, $d\omega/dt = 12Fd/ml^2$ about C . It can be easily seen that the whole system will rotate about a point O at a distance $x = l^2/12d$ from C (Fig. 6b), with an angular speed of rotation $\omega = 12Ftd/ml^2$ and a total rotation angle, $\phi = 6Ft^2d/ml^2$. The kinetic energy of rotation about C would be $6F^2t^2d^2/ml^2$ with the total kinetic energy being $(1 + 12d^2/l^2)F^2t^2/2m$.

As the location of D , where the force is applied, is shifted towards C , O will move away from C , with $x = d$ when $d = l/2\sqrt{3}$. Also O will coincide with B when $d = l/6$. For still smaller d values, the fixed point O , about which the total system rotates, will lie outside the rod beyond B . For $d = 0$, O will be at infinity, implying radius of the circle of rotation of OC to be infinite, which means that the motion of C (and of the whole finite rod along with it) will be in a straight line perpendicular to OC (tangential to the circle with infinite radius), with a linear acceleration $a = F/m$, without any accompanying rotation about C , which is expected even otherwise, as the force applied in this case is at the center of mass, C .

ACKNOWLEDGEMENTS

I acknowledge Apoorva Singal for bringing this intriguing problem to my attention, for her incessant doubts about the solutions initially suggested and for her help in the preparation of final diagrams.

* ashokkumar.singal@gmail.com

¹ S. Datta, *Mechanics*, (Pearson, Chennai, 2013) Ch. 12.

² H. Goldstein, *Classical Mechanics*, (Addison-Wesley, MA, 1968) Ch. 5.

³ C. Kittle, W. D. Knight, M. A. Ruderman, *Mechanics - Berkeley phys. course vol. 1* (McGraw-Hill, New York, 1965), ch. 8.