

On topological graphs with at most four crossings per edge

Eyal Ackerman*

October 9, 2018

Abstract

We show that if a graph G with $n \geq 3$ vertices can be drawn in the plane such that each of its edges is involved in at most four crossings, then G has at most $6n - 12$ edges. This settles a conjecture of Pach, Radoičić, Tardos, and Tóth, and yields a better bound for the famous *Crossing Lemma*: The *crossing number*, $\text{cr}(G)$, of a (not too sparse) graph G with n vertices and m edges is at least $c \frac{m^3}{n^2}$, where $c > 1/29$. This bound is known to be tight, apart from the constant c for which the previous best lower bound was $1/31.1$.

As another corollary we obtain some progress on the *Albertson conjecture*: Albertson conjectured that if the chromatic number of a graph G is r , then $\text{cr}(G) \geq \text{cr}(K_r)$. This was verified by Albertson, Cranston, and Fox for $r \leq 12$, and for $r \leq 16$ by Barát and Tóth. Our results imply that Albertson conjecture holds for $r \leq 18$.

1 Introduction

Throughout this paper we consider graphs with no loops or parallel edges, unless stated otherwise. A *topological graph* is a graph drawn in the plane with its vertices as points and its edges as Jordan arcs that connect corresponding points and do not contain any other vertex as an interior point. Every pair of edges in a topological graph have a finite number of intersection points. If every pair of edges intersect at most once, then the topological graph is *simple*. The intersection point of two edges is either a vertex that is common to both edges, or a crossing point at which one edge passes from one side of the other edge to its other side.

A *crossing* in a topological graph consists of a pair of crossing edges and a point in which they cross. We will be interested in the maximum number of crossings an edge is involved in, and in the total number of crossings in a graph. Therefore, we may assume henceforth that the topological graphs that we consider do not contain three edges crossing at a single point. Indeed, if more than two edges cross at a point p , then we can redraw these edges at a small neighborhood of p such that no three of them cross at a point and without changing the number of crossings in which each of these edges is involved.

Therefore, the *crossing number* of a topological graph D , $\text{cr}(D)$, can be defined as the total number of crossing points in D . The crossing number of an abstract graph G , $\text{cr}(G)$, is the minimum value of $\text{cr}(D)$ taken over all drawings D of G as a topological graph. It is not hard to see that if D is a drawing of G as a topological graph such that $\text{cr}(G) = \text{cr}(D)$, then D is a simple topological graph. Indeed, if D has two edges e_1 and e_2 that intersect at two points p_1 and p_2 , then at least one of these intersection points is a crossing point, for otherwise e_1 and e_2 are parallel edges. By swapping the segments of e_1 and e_2 between p_1 and p_2 and modifying the drawing of e_1 in a small neighborhood of the crossing points among p_1 and p_2 , we obtain a drawing of G as a topological graph with fewer crossings.

*Department of Mathematics, Physics, and Computer Science, University of Haifa at Oranim, Tivon 36006, Israel. ackerman@sci.haifa.ac.il.

The following result was proved by Ajtai, Chvátal, Newborn, Szemerédi [7] and, independently, Leighton [18].

Theorem 1 ([7, 18]). *There is an absolute constant $c > 0$ such that for every graph G with n vertices and $m \geq 4n$ edges we have $cr(G) \geq c \frac{m^3}{n^2}$.*

This celebrated result is known as the *Crossing Lemma* and has numerous applications in combinatorial and computational geometry, number theory, and other fields of mathematics.

The Crossing Lemma is tight, apart from the multiplicative constant c . This constant was originally very small, and later was shown to be at least $1/64 \approx 0.0156$, by a very elegant probabilistic argument due to Chazelle, Sharir, and Welzl [4]. Pach and Tóth [22] proved that $0.0296 \approx 1/33.75 \leq c \leq 0.09$ (the lower bound applies for $m \geq 7.5n$). Their lower bound was later improved by Pach, Radoičić, Tardos, and Tóth [21] to $c \geq 1024/31827 \approx 1/31.1 \approx 0.0321$ (when $m \geq \frac{103}{16}n$). Both improved lower bounds for c were obtained using the same approach, namely, finding many crossings in sparse graphs. To this end, it was shown that topological graphs with few crossings per edge have few edges.

Denote by $e_k(n)$ the maximum number of edges in a topological graph with $n > 2$ vertices in which every edge is involved in at most k crossings. Let $e_k^*(n)$ denote the same quantity for *simple* topological graphs. It follows from Euler's Polyhedral Formula that $e_0(n) \leq 3n - 6$. Pach and Tóth showed that $e_k^*(n) \leq 4.108\sqrt{kn}$ and also gave the following better bounds for $k \leq 4$.

Theorem 2 ([22]). *$e_k^*(n) \leq (k + 3)(n - 2)$ for $0 \leq k \leq 4$. Moreover, these bounds are tight when $0 \leq k \leq 2$ for infinitely many values of n .*

Pach et al. [21] observed that the upper bound in Theorem 2 applies also for not necessarily simple topological graphs when $k \leq 3$, and proved a better bound for $k = 3$.

Theorem 3 ([21]). *$e_3(n) \leq 5.5n - 11$. This bound is tight up to an additive constant.*

By Theorem 2, $e_4^*(n) \leq 7n - 14$. Pach et al. [21] claim that similar arguments to their proof of Theorem 3 can improve this bound to $(7 - \frac{1}{9})n - O(1)$. They also conjectured that the true bound is $6n - O(1)$. Here we settle this conjecture on the affirmative.

Theorem 4. *Let G be a simple topological graph with $n \geq 3$ vertices. If every edge of G is involved in at most four crossings, then G has at most $6n - 12$ edges. This bound is tight up to an additive constant.*

In fact, Theorem 4 holds also for topological graphs that are not necessarily simple. However, since this stronger statement is not needed to improve the Crossing Lemma, and because proving it would complicate an already long and technical proof, we chose not to prove this generalization here.

Using the bound in Theorem 4 and following the footsteps of [21, 22] we obtain the following linear lower bound for the crossing number.

Theorem 5. *Let G be a graph with $n > 2$ vertices and m edges. Then $cr(G) \geq 5m - \frac{139}{6}(n - 2)$.*

This linear bound is then used to get a better constant factor for the bound in the Crossing Lemma, by plugging it into its probabilistic proof, as in [19, 21, 22].

Theorem 6. *Let G be a graph with n vertices and m edges. Then $cr(G) \geq \frac{1}{29} \frac{m^3}{n^2} - \frac{35}{29}n$. If $m \geq 6.95n$ then $cr(G) \geq \frac{1}{29} \frac{m^3}{n^2}$.*

Albertson conjecture. The *chromatic number* of a graph G , $\chi(G)$, is the minimum number of colors needed for coloring the vertices of G such that none of its edges has monochromatic endpoints. In 2007 Albertson conjectured that if $\chi(G) = r$ then $\text{cr}(G) \geq \text{cr}(K_r)$. That is, the crossing number of an r -chromatic graph is at least the crossing number of the complete graph on r vertices.

If G contains a *subdivision*¹ of K_r as a subgraph, then clearly $\text{cr}(G) \geq \text{cr}(K_r)$. A stronger conjecture (than Albertson conjecture and also than *Hadwiger conjecture*²) is therefore that if $\chi(G) = r$ then G contains a subdivision of K_r . However, this conjecture, which was attributed to Hajós, was refuted for $r \geq 7$ [11, 13].

Albertson conjecture is known to hold for small values of r : For $r = 5$ it is equivalent to the Four Color Theorem, whereas for $r = 6$, $r \leq 12$, and $r \leq 16$, it was verified by Oporowska and Zhao [20], Albertson, Cranston, and Fox [8], and Barát and Tóth [9], respectively. By using the new bound in Theorem 5 and following the approach in [8, 9], we can now verify Albertson conjecture for $r \leq 18$.

Theorem 7. *Let G be an n -vertex r -chromatic graph. If $r \leq 18$ or $r = 19$ and $n \neq 37, 38$, then $\text{cr}(G) \geq \text{cr}(K_r)$.*

Organization. The bulk of this paper is devoted to proving Theorem 4 in Section 2. In Section 3 we recall how the improved crossing numbers are obtained, and their consequences.

2 Proof of Theorem 4

Most of this section (and of the paper) is devoted to proving the upper bound in Theorem 4. Let G be a topological graph with $n \geq 3$ vertices and at most four crossings per edge. We prove the theorem by induction on n . For $n \leq 10$ we have $6n - 12 \leq \binom{n}{2}$ and thus the theorem trivially holds. Therefore, we assume that $n \geq 11$. Furthermore, we may assume that the degree of every vertex in G is at least 7, for otherwise the theorem easily follows by removing a vertex of a small degree and applying induction.

For a topological graph G we denote by $M(G)$ the plane map induced by G . That is, the vertices of $M(G)$ are the vertices and crossing points in G , and the edges of $M(G)$ are the crossing-free segments of the edges of G (where each such edge-segment connects two vertices of $M(G)$). We will use capital letters to denote the vertices of G , and small letters to denote crossing points in G (that are vertices in $M(G)$). An edge of $M(G)$ will usually be denoted by its endpoints, e.g., xy .

Proposition 2.1. *If $M(G)$ is not 2-connected, then G has at most $6n - 12$ edges.*

Proof. Assume that $M(G)$ has a vertex x such that $M(G) \setminus \{x\}$ is not connected. The vertex x is either a vertex of G or a crossing point of two of its edges. Suppose that x is vertex of G . Then, $G \setminus \{x\}$ is also not connected. Let G_1, \dots, G_k be the connected components of $G \setminus \{x\}$, let G' be the topological graph induced by $V(G_1) \cup \{x\}$ and let G'' be the topological graph induced by $V(G_2) \cup \dots \cup V(G_k) \cup \{x\}$. Note that $6 \leq |V(G')|, |V(G'')| < n$, since $\delta(G) \geq 7$. Therefore, it follows from the induction hypothesis that $|E(G)| \leq 6|V(G')| - 12 + 6|V(G'')| - 12 = 6(n + 1) - 24 < 6n - 12$.

Suppose now that x is a crossing point of two edge e_1 and e_2 . Let \hat{G} be the topological graph we obtain by adding x has a vertex to G . Therefore, $|V(\hat{G})| = n + 1$ and $|E(\hat{G})| = |E(G)| + 2$. Let G_1, \dots, G_k be the connected components of $\hat{G} \setminus \{x\}$, let G' be the topological

¹A subdivision of K_r consists of r vertices, each pair of which is connected by a path such that the paths are vertex disjoint (apart from their endpoints).

²Hadwiger conjecture states that if $\text{cr}(G) = r$ then K_r is a minor of G .

graph induced by $V(G_1) \cup \{x\}$ and let G'' be the topological graph induced by $V(G_2) \cup \dots \cup V(G_k) \cup \{x\}$. Note that $6 \leq |V(G')|, |V(G'')| < n$, since $\delta(G) \geq 7$. Therefore, it follows from the induction hypothesis that $|E(G)| \leq 6|V(G')| - 12 + 6|V(G'')| - 12 - 2 = 6(n+2) - 26 < 6n - 12$. \square

The *boundary* of a face f in $M(G)$ consists of all the edges of $M(G)$ that are incident to f . Since $M(G)$ is 2-connected, the boundary of every face in $M(G)$ is a simple cycle. Thus, we can define the *size* of a face f , $|f|$, as the number of edges of $M(G)$ on its boundary. We will keep this fact in mind when analyzing some cases later.

Observation 2.2. *The boundary of every face in $M(G)$ is a simple cycle.*

We use the *Discharging Method* to prove Theorem 4. This technique, that was introduced and used successfully for proving structural properties of planar graphs (most notably, in the proof of the Four Color Theorem [5]), has recently proven to be a useful tool also for solving several problems in geometric graph theory [1, 2, 6, 17, 23]. In our case, we begin by assigning a *charge* to every face of the planar map $M(G)$ such that the total charge is $4n - 8$. Then, we redistribute the charge in several steps such that eventually the charge of every face is nonnegative and the charge of every vertex $A \in V(G)$ is $\deg(A)/3$. Hence, $2|E(G)|/3 = \sum_{A \in V(G)} \deg(A)/3 \leq 4n - 8$ and we get the desired bound on $|E(G)|$. Next we describe the proof in details. Unfortunately, as it often happens when using the discharging method, the proof requires considering many cases and subcases.

Charging. Let V' , E' , and F' denote the vertex, edge, and face sets of $M(G)$, respectively. For a face $f \in F'$ we denote by $V(f)$ the set of vertices of G that are incident to f . It is easy to see that $\sum_{f \in F'} |V(f)| = \sum_{A \in V(G)} \deg(A)$ and that $\sum_{f \in F'} |f| = 2|E'| = \sum_{u \in V'} \deg(u)$. Note also that every vertex in $V' \setminus V(G)$ is a crossing point in G and therefore its degree in $M(G)$ is four. Hence,

$$\sum_{f \in F'} |V(f)| = \sum_{A \in V(G)} \deg(A) = \sum_{u \in V'} \deg(u) - \sum_{u \in V' \setminus V(G)} \deg(u) = 2|E'| - 4(|V'| - n).$$

Assigning every face $f \in F'$ a charge of $|f| + |V(f)| - 4$, we get that total charge over all faces is

$$\sum_{f \in F'} (|f| + |V(f)| - 4) = 2|E'| + 2|E'| - 4(|V'| - n) - 4|F'| = 4n - 8,$$

where the last equality follows from Euler's Polyhedral Formula by which $|V'| + |F'| - |E'| = 2$ (recall that $M(G)$ is connected).

Discharging. We will redistribute the charges in several steps. We denote by $ch_i(x)$ the charge of an element x (either a face in F' or a vertex in $V(G)$) after the i th step, where $ch_0(\cdot)$ represents the initial charge function. We will use the terms *triangles*, *quadrilaterals*, *pentagons* and *hexagons* to refer to faces of size 3, 4, 5 and 6, respectively. An integer before the name of a face denotes the number of original vertices it is incident to. For example, a 2-triangle is a face of size 3 that is incident to 2 original vertices. Since G is a simple topological graph, there are no faces of size 2 in F' . Therefore, initially, the only faces with a negative charge are 0-triangles.

Step 1: Charging 0-triangles. Let t be a 0-triangle, let e_1 be one of its edges, and let f_1 be the other face that is incident to e_1 (see Figure 1(a)). It must be that $|f_1| > 3$, for otherwise there would be two edges of G that intersect twice. If f_1 is not a 0-quadrilateral,

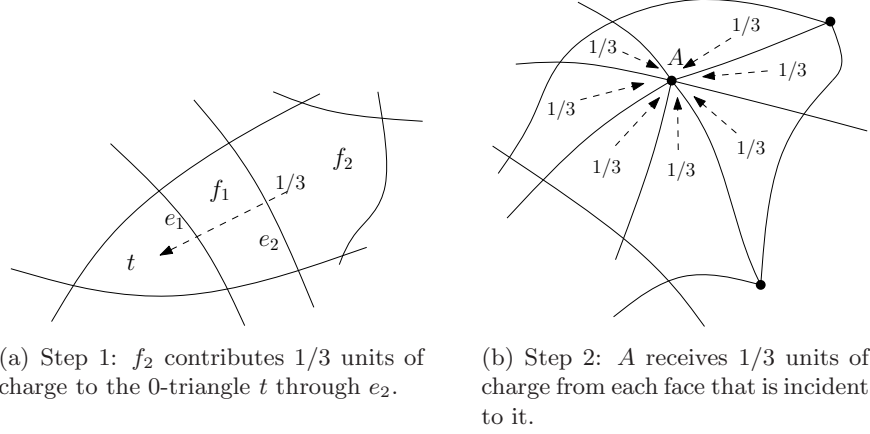


Figure 1: The first two discharging steps.

then we move $1/3$ units of charge from f_1 to t , and say that f_1 contributed $1/3$ units of charge to t through e_1 . Otherwise, if f_1 is a 0-quadrilateral, let e_2 be the edge opposite to e_1 in f_1 , and let f_2 be the other face that is incident to e_2 . If f_2 is not a 0-quadrilateral, then f_2 contributes $1/3$ units of charge to t through e_2 . Otherwise, let e_3 be the edge opposite to e_2 in f_2 and let f_3 be the other face that is incident to e_3 . The face f_3 contributes $1/3$ units of charge to t through e_3 . Note that f_3 cannot be a 0-quadrilateral since this would imply that two of the edges that support t are crossed five times. Note also that f_1, f_2, f_3 (if defined) are distinct faces, for otherwise there must be an edge that crosses itself.

In a similar way t obtains $2/3$ units of charge from the two other ‘directions’. Thus, after the first discharging step the charge of every 0-triangle is zero. $\Leftarrow\Leftarrow$

Observation 2.3. *A face can contribute at most once through each of its edges in Step 1. Moreover, if a face contributes through one of its edges in Step 1 then the vertices of this edge are crossing points in G .*

Recall that according to our plan, the charge of every original vertex should be one third of its degree. The next discharging step takes care of this.

Step 2: Charging the vertices of G . In this step every vertex of G takes $1/3$ units of charge from each face it is incident to (see Figure 1(b)). $\Leftarrow\Leftarrow$

It follows from Observation 2.3 and the discharging steps that $ch_2(f) \geq 2|f|/3 + 2|V(f)|/3 - 4$, for every face f . Therefore $ch_2(f) \geq 0$ if $|f| \geq 6$.

Observation 2.4. *Let f be a face in $M(G)$. Then*

- if $|f| \geq 6$, then $ch_2(f) \geq 2|V(f)|/3$;
- if f is a 0-pentagon, then $ch_2(f) \geq -2/3$;
- if f is a k -pentagon such that $0 < k < 5$, then $ch_2(f) \geq k - 1/3$;
- if f is a 5-pentagon, then $ch_2(f) = 4\frac{1}{3}$;
- if f is a 0-quadrilateral, then $ch_2(f) = 0$;
- if f is a 1-quadrilateral, then $ch_2(f) \geq 0$;
- if f is a k -quadrilateral such that $k > 1$, then $ch_2(f) \geq k - 4/3$;
- if f is a 0-triangle, then $ch_2(f) = 0$;
- if f is a 1-triangle, then $ch_2(f) = -1/3$;
- if f is a 2-triangle, then $ch_2(f) = 1/3$; and
- if f is a 3-triangle, then $ch_2(f) = 2/3$.

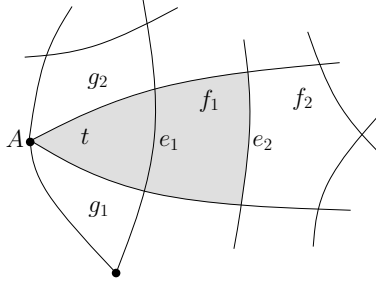


Figure 2: g_1 and g_2 are the neighbors of the 1-triangle t . The wedge of t is $t \cup f_1$ and f_2 is its wedge-neighbor.

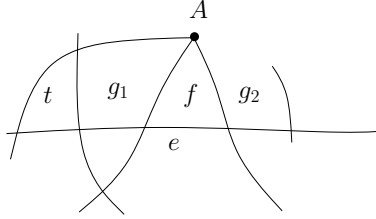


Figure 3: If $ch_2(g_1), ch_2(g_2) \leq 0$ and g_1 is not a 1-triangle, then g_1 is a 1-quadrilateral that contributed charge to two 0-triangles in Step 1 and e is crossed five times.

After the second discharging step the charge of every vertex $A \in V(G)$ is $\deg(A)/3$ and the only faces with a negative charge are 1-triangles and 0-pentagons. In the next three steps we redistribute the charges such that the charge of every 1-triangle becomes zero.

Let t be a 1-triangle and let $A \in V(G)$ be the vertex of G that is incident to t . Let g_1 and g_2 be the two faces that share an edge of $M(G)$ with f and are also incident to A . We call g_1 and g_2 the *neighbors* of t (see Figure 2 for an example). Note that it is impossible that $g_1 = g_2$, for otherwise $\deg(A) = 2 < 7 \leq \delta(G)$ or A is cut vertex in $M(G)$.

Next, we define the *wedge* and the *wedge-neighbor* of t . Let e_1 be the edge of t that is opposite to A and let f_1 be the other face that is incident to e_1 . For $i \geq 1$, if f_i is a 0-quadrilateral then we denote by e_{i+1} the edge of f_i that is opposite to e_i and by f_{i+1} the other face that is incident to e_{i+1} . Note that all the faces f_i are distinct, for otherwise there would be a self-crossing edge in G . Let j be the maximum index for which f_j is defined. Note that $j \leq 4$ since the existence of f_5 would imply that the two edges that support t and are incident to A are crossed five times. The *wedge* of t consists of t and $\bigcup_{i=1}^{j-1} f_i$ and we call f_j the *wedge-neighbor* of t .

Proposition 2.5. *Let f be a 1-triangle and let g_1 and g_2 be its neighbors. If $ch_2(g_1) \leq 0$ and $ch_2(g_2) \leq 0$, then g_1 and g_2 are 1-triangles.*

Proof. Suppose that $ch_2(g_1), ch_2(g_2) \leq 0$ and recall that $g_1 \neq g_2$. The neighbors of a 1-triangle must be incident to at least one vertex of G . Therefore, by Observation 2.4, each of g_1 and g_2 is either a 1-triangle or a 1-quadrilateral that has contributed charge to two 0-triangles in Step 1. Suppose without loss of generality that g_1 is such a 1-quadrilateral (if g_1 and g_2 are 1-triangles, then we are done). Let A be the vertex of G that is incident to f and let e be the edge of G that contains the edge of f that is opposite to A in f . Since g_1 contributes charge to two 0-triangles in Step 1, it follows that one of these 0-triangles, denote it by t , has an edge that is contained in e . However, this implies that e has five crossing points (two vertices of each of t, g_1, f , and g_2 , see Figure 3). \square

If both neighbors of a 1-triangle have a non-positive charge, and are therefore 1-triangles

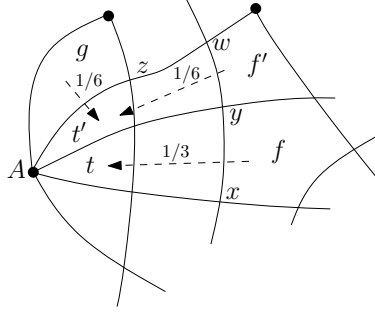


Figure 4: Discharging Steps 3, 4 and 5: In Step 3 t receives $1/3$ units of charge from its wedge neighbor f through the edge xy . In Step 4 t' receives $1/6$ units of charge from its neighbor g through the edge Az . In Step 5 t' receives $1/6$ units of charge from its wedge neighbor f' through the edge wy .

by Proposition 2.5, then this 1-triangle obtains the missing charge from its wedge.

Step 3: Charging 1-triangles with ‘poor’ neighbors. If t is a 1-triangle whose two neighbors are 1-triangles, then the wedge-neighbor of t contributes $1/3$ units of charge to t through the edge of $M(G)$ that it shares with the wedge of t (see Figure 4). \rightsquigarrow

Note that in Step 3, as in Step 1, charge is contributed only through edges whose both endpoints are crossing points. Moreover, a face cannot contribute through the same edge in Steps 1 and 3. Therefore, there if $ch_3(f) < 0$ for a face f , then f is either a 1-triangle or a 0-pentagon.

Proposition 2.6. *Let f be a face that contributes charge in Step 3 to a 1-triangle t through one of its edges e such that e is an edge of t . Then f does not contribute charge in Step 1 or 3 through neither of its two edges that are incident to e .*

Proof. Let (A, B) be the edge of G that contains e and let e' be an edge of f that is incident to e . Denote by v the vertex of f that is incident to both e and e' . Note that (A, B) contains four crossing points: the endpoints of e and two crossing points, one on each side of e on (A, B) , since the neighbors of t must be 1-triangles.

Suppose that f contributes charge through e' to a triangle t' in Step 1 or 3. Let g be the 1-triangle that is a neighbor of t and is incident to v , and let f'_1 be the other face but f that is incident to e' (see Figure 5). Observe that f'_1 and g share an edge and therefore f'_1 cannot be a 1-triangle or a 0-triangle (the latter implies that two edges of G intersect twice). If the wedge of t' contains more than one 0-quadrilateral, then (A, B) has more than four crossings. Thus, f'_1 must be a 0-quadrilateral that shares an edge with the triangle t' to which f contributes charge through e' . If t' is a 1-triangle, then one of its neighbors shares edges with t' and g , which implies that this neighbor is incident to two original vertices (of t and t') and is therefore not a 1-triangle (recall that if t' gets charge in Step 3, then its neighbors must be 1-triangles). Otherwise, if t' is a 0-triangle, then the edge (A, B) has more than four crossings (see Figure 5(b)). \square

Let f be a 1-triangle with a negative charge after Step 3. The missing charge of f will come from either both of its neighbors or from one neighbor and the wedge-neighbor of f . The next proposition shows that if the charge of one neighbor of f is zero (implying that this neighbor is a 1-quadrilateral or a 1-triangle), then the other neighbor of f is able to contribute charge to f .

Proposition 2.7. *Let f be a 1-triangle and let g_1 and g_2 be its neighbors. If $ch_3(g_1) = 0$ then $|V(g_2)| \geq 2$.*

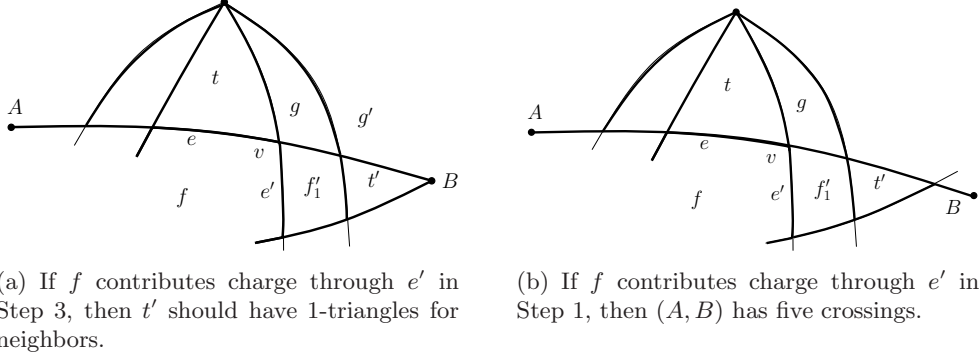


Figure 5: If f contributes charge to t through e in Step 3 and e is an edge of t , then f cannot contribute charge to a triangle t' through an edge e' that is incident to e .

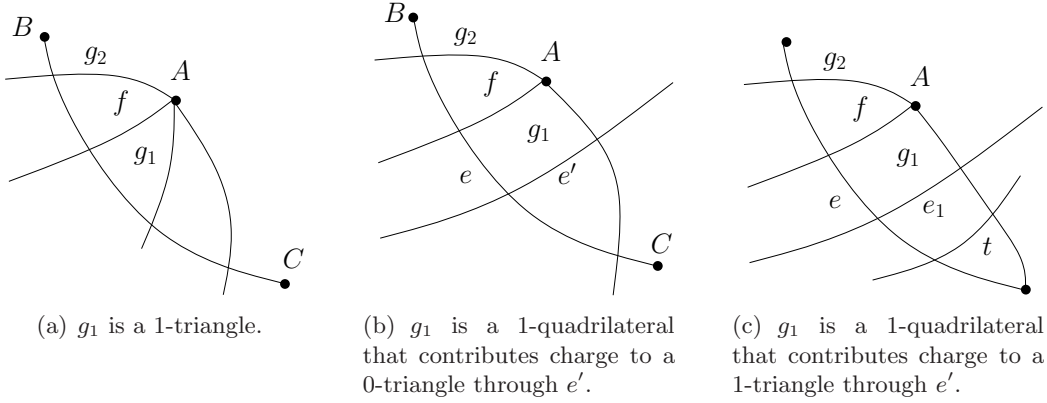


Figure 6: Illustrations for the proof of Proposition 2.7. f is a 1-triangle whose neighbors are g_1 and g_2 . If $ch_3(g_1) = 0$, then $|V(g_2)| \geq 2$.

Proof. Recall that a face that contributes charge through one of its edges in Step 3 cannot contribute charge through the same edge in Step 1. It follows from this fact and from Observation 2.4 that if a face is incident to a vertex of G and its charge after Step 3 is zero, then this face is either a 1-triangle or a 1-quadrilateral.

Assume that $ch_3(g_1) = 0$. Let A be the vertex of G that is incident to f , let e be the edge f that is opposite to A and let (B, C) be the edge of G that contains e (see Figure 6(a)). Consider first the case that g_1 is a 1-triangle. Since g_1 got its missing charge in Step 3, its neighbors are 1-triangles. Then (B, C) has four crossing points, since it supports three 1-triangles (g_1 and its neighbors). Therefore it is impossible that both endpoints of the edge of g_2 that is contained in (B, C) are crossing points. It follows that g_2 is incident to another vertex of G but A (either B or C).

Suppose now that g_1 is a 1-quadrilateral and $ch_3(g_1) = 0$. Denote by e' the other edge but e through which g_1 contributes charge in either Step 1 or 3. Note that if g_1 contributes charge to a 1-triangle t in Step 3, then e' is not an edge of t . Indeed, if g_1 and t share e' , then it follows from Proposition 2.6 that g_1 does not contribute charge through e and so $ch_3(g_1) \geq 1/3$. Therefore, (B, C) supports f , g_1 , and either a 0-triangle (if g_1 contributes through e' in Step 1, see Figure 6(b)) or a 0-quadrilateral and a 1-triangle (if g_1 contributes through e' in Step 3, see Figure 6(c)). This implies that (B, C) already contains four crossings, and therefore the edge of g_2 that is contained in (B, C) must be incident to a vertex of G different than A (either B or C). \square

Recall that after Step 3 the charge of every 1-triangle whose two neighbors have a non-

positive charge (and hence are 1-triangles themselves by Proposition 2.5) becomes zero.

Step 4: Charging 1-triangles with positive neighbors. Let t' be a 1-triangle such that $ch_3(t') < 0$ and let g be a neighbor of f such that $ch_3(g) > 0$. Denote by g' the other neighbor of f . Then g contributes $1/6$ units of charge to t' through the edge of $M(G)$ that they share in each of the following cases:

- g is not a 1-quadrilateral;
- g is a 1-quadrilateral and $ch_3(g) \geq 2/3$; or
- g is a 1-quadrilateral, $ch_3(g) = 1/3$, and g' is a 1-triangle or g' is a 1-quadrilateral and $ch_3(g') = 1/3$. \Leftarrow

See Figure 4 for an illustration of Step 4.

Proposition 2.8. *There is no face f such that $ch_3(f) \geq 0$ and $ch_4(f) < 0$.*

Proof. Let f be face. Note that f may contribute charge in Step 4 through one of its edges, only if the endpoints of this edge consist of one original vertex of G and one crossing point. Therefore f cannot contribute charge through the same edge in steps 1,3, or 4, and we only have to consider faces containing original vertices of G .

If f is a 1-triangle, then $ch_3(f) \leq 0$ and so it cannot contribute charge in Step 4. If f is a 2-triangle, then $ch_3(f) = 1/3$ and f is the neighbor of at most two 1-triangles and so $ch_4(f) \geq 0$. If f is a 3-triangle then f is not a neighbor of any 1-triangle and so $ch_4(f) = ch_3(f) = 1$. If f is a 1-quadrilateral then it contributes charge (to at most two 1-triangles) only if $ch_3(f) \geq 1/3$ and therefore $ch_4(f) \geq 0$. If $|V(f)| > 1$ or $|f| > 4$, then it is easy to see that the charge of f remains positive. \square

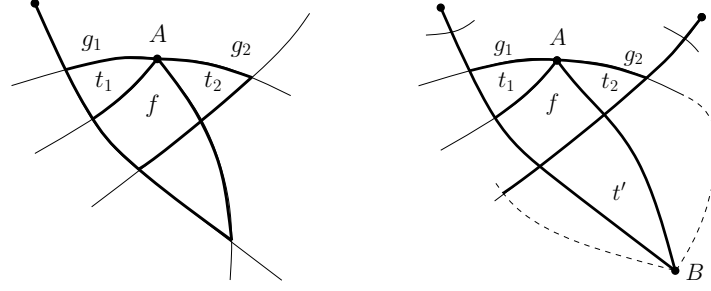
Proposition 2.9. *If f is a 1-triangle then $ch_4(f) \geq -1/6$.*

Proof. Let g_1 and g_2 be the neighbors of f . If $ch_4(f) < -1/6$ it means that f did not receive any charge from neither g_1 nor g_2 in Step 4. The only faces that contain an original vertex and may have a non-positive charge after Step 3 are 1-triangles and 1-quadrilaterals. Therefore, each of g_1 and g_2 is either a 1-triangle or a 1-quadrilateral. If both of them are 1-triangles, then f is charged in Step 3 and $ch_3(f) = 0$.

Suppose without loss of generality that $|g_1| \geq |g_2|$, and therefore g_1 is a 1-quadrilateral. Considering Step 4, observe that f receives charge from g_1 or g_2 unless $ch_3(g_1) = 0$ or $ch_3(g_1) = 1/3$ and g_2 is a 1-quadrilateral such that $ch_3(g_2) = 0$. In the first case $|V(g_2)| \geq 2$ by Proposition 2.7 and so $ch_3(g_2) > 0$. The second case is actually symmetric to the first case (switching the names of g_1 and g_2). \square

Proposition 2.10. *If f is a 1-quadrilateral such that $ch_3(f) = 1/3$ then f contributes charge to at most one 1-triangle in Step 4.*

Proof. Suppose that f is a 1-quadrilateral such that $V(f) = \{A\}$, $ch_3(f) = 1/3$ and f contributes charge to two 1-triangles t_1 and t_2 in Step 4. Let g_1 and g_2 be the other neighbors of t_1 and t_2 , respectively (it is impossible that $g_1 = g_2$, for otherwise $\deg(A) < 7$ or A is a cut vertex). Note that according to Step 4 (third option), each of g_1 and g_2 must be either a 1-triangle or a 1-quadrilateral whose charge is $1/3$ after Step 3. Observe also that it is impossible that $ch_2(f) < 2/3$, that is, that f contributes charge to at least one 0-triangle in Step 1. Indeed, this would imply that an edge of G that contains an edge of f that is not incident to A already has four crossings among the vertices of f and the 0- and 1-triangles to which f contributes charge. It then follows that $|V(g_1)| \geq 2$ or $|V(g_2)| \geq 2$ (see Figure 7(a) for an illustration).



(a) If $ch_2(f) < 2/3$ then $|V(g_1)| \geq 2$ (as in this figure) or $|V(g_2)| \geq 2$.

(b) If $ch_2(f) = 2/3$ and f contributes charge to t' in Step 3, then both neighbors of t' should be 1-triangles. This implies two parallel edges whose endpoints are A and B .

Figure 7: Illustrations for the proof of Proposition 2.10: There is no 1-quadrilateral f such that $ch_3(f) = 1/3$ and f contributes charge to two 1-triangles t_1 and t_2 in Step 4.

Therefore, assume that $ch_2(f) = 2/3$ and denote by t' the 1-triangle to which f has contributed charge in Step 3. Suppose without loss of generality that f contributes charge to t' through the edge that is opposite to the edge through which f contributes charge to t_1 (see Figure 7(b)). Note that t' must share an edge (of $M(G)$) with f , for otherwise, as before, $|V(g_1)| \geq 2$. Let B be the vertex of G that is incident to t' . Since t' receives charge in Step 3, both of its neighbors are 1-triangles. However, this implies that there are two parallel edges whose endpoints are A and B . \square

Step 5: Finish charging 1-triangles. Let t' be a 1-triangle, let f' be the wedge-neighbor of t' and let e' be the edge of $M(G)$ that is shared by f' and the wedge of t' . If $ch_4(t') < 0$ then f' contributes $1/6$ units of charge to t' through e' (see Figure 4 for an illustration). \leftrightarrow

Observation 2.11. Let f be a face and let e be an edge of f . Then f contributes charge through e at most once during the discharging steps 1–5.

Proposition 2.12. For every face f that is not a 0-pentagon we have $ch_5(f) \geq 0$.

Proof. It follows from Proposition 2.9 and Step 5 that the charge of every 1-triangle is zero after the fifth discharging step. Suppose that f is a 1-quadrilateral. Then $ch_3(f)$ is either 0, $1/3$, or $2/3$. If $ch_3(f) = 0$ then f does not contribute charge in Steps 4 and 5, and therefore $ch_5(f) = 0$. If $ch_3(f) = 1/3$ then it follows from Proposition 2.10 that $ch_4(f) \geq 1/6$ and so $ch_5(f) \geq 0$. If $ch_3(f) = 2/3$ then clearly $ch_5(f) \geq 1/6$. It is not hard to see, recalling Observation 2.11, that the charge of any other face but a 0-pentagon cannot be negative. \square

Let x be a crossing point in G and let f_1, f_2, f_3, f_4 be the four faces that are incident to x , listed in their clockwise order around x . Note that these faces are distinct, since $M(G)$ is 2-connected. We say that f_1 and f_3 (resp., f_2 and f_4) are *vertex-neighbors* at x .

Step 6: Charging 0-pentagons. Let f be a face such that $ch_5(f) > 0$ and let $B(f)$ be the set of 0-pentagons f' such that $ch_5(f') < 0$ and f' is a vertex-neighbor of f . If $B(f) \neq \emptyset$ then in the sixth discharging step f sends $ch_5(f)/|B(f)|$ units of charge to every 0-pentagon in $B(f)$ through the vertex by which they are vertex-neighbors. \leftrightarrow

Proposition 2.13. Let f be a face such that $ch_5(f) > 0$, $|f| \geq 4$, $|V(f)| > 0$ and $|B(f)| > 0$. If $|V(f)| = 1$, then each 0-pentagon in $B(f)$ receives at least $\frac{2|f|/3-3}{|B(f)|}$ units of charge from

f in Step 6. If $|V(f)| \geq 2$, then each 0-pentagon in $B(f)$ receives at least $\frac{2|f|/3-2}{|B(f)|}$ units of charge from f in Step 6.

Proof. Suppose that $V(f) = \{A\}$. Then f may contribute at most $1/6$ units of charge through each of its two edges that are incident to A , and at most $1/3$ units of charge through every other edge. Therefore $ch_5(f) \geq |f| + 1 - 4 - 1/3 - 2/6 - (|f| - 2)/3 = 2|f|/3 - 3$.

Suppose now that $V(f) = \{A, B\}$. If A and B are consecutive on the boundary of f , then f does not contribute charge through the edge (A, B) , contributes at most $1/6$ units of charge through two edges, and at most $1/3$ units of charge through every other edge. Therefore, $ch_5(f) \geq |f| + 2 - 4 - 2/3 - 2/6 - (|f| - 3)/3 = 2|f|/3 - 2$.

If A and B are not consecutive on the boundary of f , then f contributes at most $1/6$ units of charge through four edges, and at most $1/3$ units of charge through every other edge. Therefore, $ch_5(f) \geq |f| + 2 - 4 - 2/3 - 4/6 - (|f| - 4)/3 = 2|f|/3 - 2$.

Note that if f is incident to more than two original vertices, then each additional vertex increases its charge after Step 5 by $2/3$. \square

Corollary 2.14. *Let f and f' be two faces such that f contributes charge to f' in Step 6. If $|V(f)| \geq 2$ and $|f| \geq 4$, then f' receives at least $1/3$ units of charge from f .*

It follows from Proposition 2.12 and Step 6 that it remains to show that after the last discharging step the charge of every 0-pentagon is nonnegative. A 0-pentagon can contribute either $1/3$ or $1/6$ units of charge (to a triangle) at most once through each of its edges. We analyze the charge of 0-pentagons according to their charge after Step 1 in Lemmas 2.17, 2.18, 2.19, 2.24 and 2.25. In all cases we conclude that the charge of the 0-pentagons after Step 6 is non-negative. Recall that since $M(G)$ is 2-connected, the boundary of every 0-pentagon is a simple 5-cycle.

Next, we introduce some useful notations. Let f be a 0-pentagon. The vertices of f are denoted by v_0, \dots, v_4 , listed in their clockwise cyclic order. The edges of f are $e_i = v_{i-1}v_i$, for $i = 0, \dots, 4$ (addition and subtraction is modulo 5). For every edge $e_i = v_{i-1}v_i$ we denote by (A_i, B_i) the edge of G that contains e_i , such that v_{i-1} is between A_i and v_i on (A_i, B_i) . Denote by t_i the triangle to which f sends charge through e_i , if such a triangle exists. Note that if t_i is a 1-triangle then one of its vertices is $A_{i-1} = B_{i+1}$. Its other vertices will be denoted by x_i and y_i such that x_i is contained in (A_{i-1}, B_{i-1}) and y_i is contained in (A_{i+1}, B_{i+1}) . If t_i is a 0-triangle, then w_i denotes its vertex which is the crossing point of (A_{i-1}, B_{i-1}) and (A_{i+1}, B_{i+1}) , and, as before, x_i and y_i denote its other vertices. Finally, we denote by f_i the vertex-neighbor of f at v_i . See Figure 8 for an example of these notations. Note also that in all the figures bold edge-segments mark edges of $M(G)$ and filled circles represent vertices of G .

It might happen that different names refer to the same point (e.g., A_0 and B_3 in Figure 8). However, since (A_i, B_i) crosses (A_{i-1}, B_{i-1}) at v_{i-1} and (A_{i+1}, B_{i+1}) at v_i , we have:

Observation 2.15. *For every $0 \leq i \leq 4$ we have $\{A_i, B_i\} \cap \{A_{i-1}, B_{i-1}, A_{i+1}, B_{i+1}\} = \emptyset$.*

Proposition 2.16. *Let f be a 0-pentagon that contributes charge in Step 1 through e_i and e_{i+1} , $0 \leq i \leq 4$, and also contributes charge through e_{i+3} to a 1-triangle whose wedge contains one 0-quadrilateral or to a 0-triangle. If $ch_5(f) < 0$ then f receives at least $1/3$ units of charge from f_i in Step 6.*

Proof. Assume without loss of generality that $i = 0$. Each of (A_2, B_2) and (A_4, B_4) supports one 0-triangle, one 0-pentagon, and either another 0-triangle or a 0-quadrilateral. Thus, they already have four crossings among the vertices of these faces (see Figure 9). Therefore, A_2w_1, w_1v_0, v_0w_0 and w_0B_4 are edges of f_0 . Note that $A_2 \neq B_4$ for otherwise there would be two edges that intersect twice. Thus, $|f_0| \geq 5$ and $|V(f_0)| \geq 2$. The claim now follows from Corollary 2.14. \square

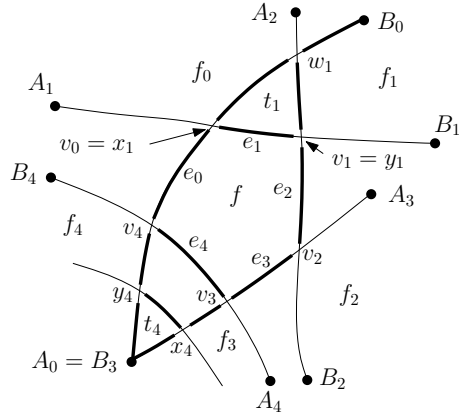


Figure 8: The notations used for vertices, edges, and faces near a 0-pentagon f . Bold edge-segments mark edges of $M(G)$.

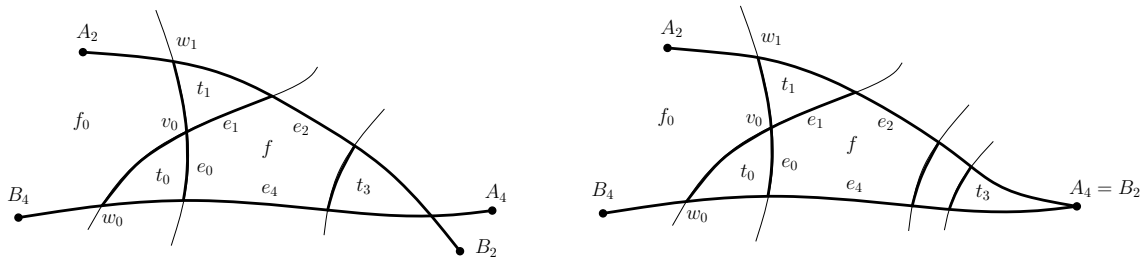


Figure 9: f contributes charge through e_0 and e_1 in Step 1 and also contributes charge through e_3 either to a 0-triangle or to a 1-triangle whose wedge contains one 0-quadrilateral. Then f receives charge from f_0 in Step 6.

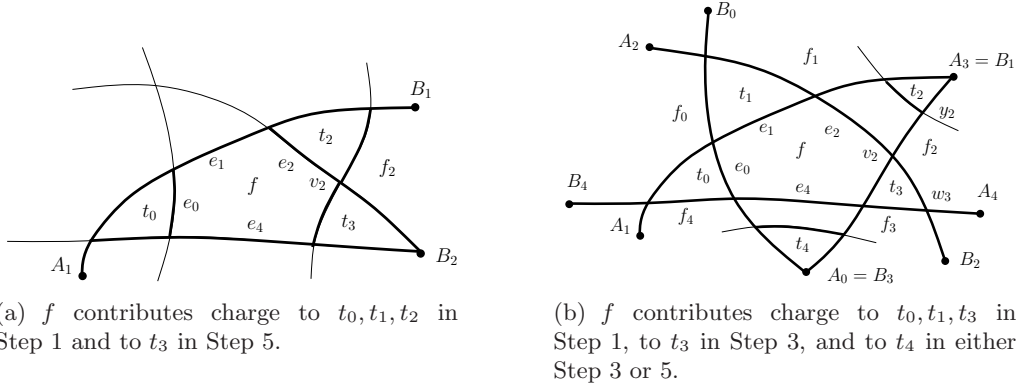


Figure 10: f contributes charge to three 0-triangles in Step 1.

Lemma 2.17. *Let f be a 0-pentagon such that $ch_1(f) < 0$ and $ch_5(f) < 0$. Then $ch_6(f) \geq 0$.*

Proof. If $ch_1(f) < 0$ then f contributes charge to at least four 0-triangles in Step 1. Assume without loss of generality that f contributes charge in Step 1 through e_0, e_1, e_2, e_3 . It follows from Proposition 2.16 that f receives at least $1/3$ units of charge from each of f_0 and f_2 and therefore $ch_6(f) \geq 0$. \square

Lemma 2.18. *Let f be a 0-pentagon such that $ch_1(f) = 0$ and $ch_5(f) < 0$. Then $ch_6(f) \geq 0$.*

Proof. Since $ch_1(f) = 0$, f contributes charge through exactly three of its edges in Step 1. We consider two cases, according to whether these edges are consecutive on the boundary of f .

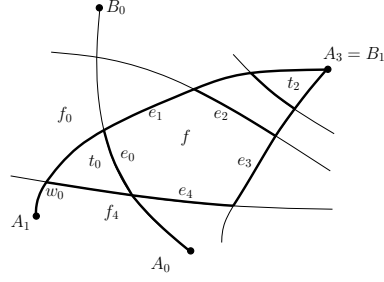
Case 1: Assume without loss of generality that f contributes charge in Step 1 through e_0, e_1 and e_2 . If $ch_5(f) < 0$, then f contributes charge through at least one more edge. Suppose without loss of generality that f contributes charge through e_3 .

Subcase 1.1: If f contributes charge through e_3 in Step 3, then the wedge of t_3 must contain exactly one 0-quadrilateral. Indeed, more than one 0-quadrilateral implies five crossings on (A_2, B_2) , and if t_3 shares an edge with f , then it follows from Proposition 2.6 that f cannot contribute charge through e_2 in Step 1. It follows from Proposition 2.16 that f receives at least $1/3$ units of charge from f_0 that compensate for the charge taken by t_3 .

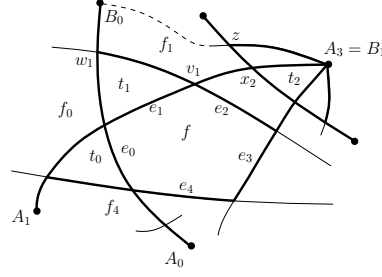
Subcase 1.2: If f contributes $1/6$ units of charge through e_3 in Step 5, then again if the wedge of t_3 contains one 0-quadrilateral, then f_0 compensates for the charge taken by t_3 . Assume therefore that t_3 and f share an edge (see Figure 10(a)). It follows that B_2 is incident to f_2 . Since (A_1, B_1) supports t_0, f and t_2 , it already has four crossings, and therefore B_1 is also a vertex of f_2 . Note that $B_1 \neq B_2$ by Observation 2.15. Thus, $|V(f_2)| \geq 2$ and $|f_2| \geq 4$, and therefore, by Corollary 2.14, f_2 sends at least $1/3$ units of charge to f in Step 6.

Note that if f contributes charge through e_4 , then by symmetry either f_1 or f_3 compensates for this charge in Step 6. This concludes Case 1.

Case 2: Assume without loss of generality that f contributes charge in Step 1 through e_0, e_1 and e_3 . It follows from Proposition 2.16 that f receives at least $1/3$ units of charge from f_0 in Step 6. Therefore, if $ch_6(f) < 0$, then f must contribute at least $1/3$ units of charge through one of e_2 and e_4 , and at least $1/6$ units of charge through the other edge. Suppose without loss of generality that f contributes $1/3$ units of charge through e_2 in Step 3, see Figure 10(b). Then the wedge of t_2 must contain exactly one 0-quadrilateral. Indeed, more than one 0-quadrilateral implies five crossings on (A_1, B_1) , whereas no 0-quadrilaterals implies that f cannot contribute charge through e_1 and e_3 in Step 1 by Proposition 2.6. Moreover, the wedge of t_4 must also contain exactly one 0-quadrilateral: more than one 0-quadrilateral



(a) If $A_0 \in V(f_4)$, then f_4 sends at least $1/3$ unit of charge to f in Step 6.



(b) If $A_0 \notin V(f_4)$, then f_1 sends at least $1/3$ unit of charge to f in Step 6.

Figure 11: Illustrations for the proof of Proposition 2.20: f contributes charge through e_0 and e_1 in Step 1 and through e_2 in Step 3.

implies five crossings on (A_3, B_3) . If t_4 shares an edge with f , then its neighbors would be f_3 and f_4 . However, in this case each of these faces would be incident to at least two original vertices of G and they would contribute charge to t_4 in Step 4 (and so f would not contribute charge to t_4 in Step 5).

It follows that f_1 is incident to B_0 and is a vertex-neighbor of f_0 and that f_4 is incident to A_1 and is a vertex-neighbor of f_0 . Therefore, $f_1, f_4 \notin B(f_0)$. Consider f_0 and observe that $|f_0| \geq 5$ and $|V(f_0)| \geq 2$. Note also that f_0 does not contribute charge through A_2w_1 (resp., w_0B_4) since the face it shares this edge with is incident to two original vertices. Thus, f_0 contributes at least $\frac{|f_0|+2-4-2/3-2/3-(|f_0|-4)/3}{|f_0|-4} \geq 2/3$ units of charge to every face in $B(f_0)$ in Step 6 (including f) and so $ch_6(f) \geq 0$. \square

Lemma 2.19. *Let f be a 0-pentagon such that $ch_1(f) = 1/3$ and $ch_5(f) < 0$. Then $ch_6(f) \geq 0$.*

Proof. Suppose that $ch_1(f) = 1/3$ and $ch_5(f) < 0$. Assume without loss of generality that f contributes $1/3$ units of charge in Step 1 to t_0 through e_0 . By symmetry, there are two cases to consider, according to whether the other edge through which f sends charge in Step 1 is e_1 or e_2 .

Case 1: f contributes charge through e_0 and e_1 in Step 1. We will use the following propositions.

Proposition 2.20. *Let f be a 0-pentagon such that $ch_5(f) < 0$, f contributes charge through e_i and e_{i+1} in Step 1, and through e_{i+2} (resp., e_{i-1}) in Step 3. If $A_i \in V(f_{i+4})$ (resp., $B_{i+1} \in V(f_{i+1})$), then f_{i+4} (resp., f_{i+1}) contributes at least $1/3$ units of charge to f in Step 6. Otherwise, f_{i+1} (resp., f_{i+4}) contributes at least $1/3$ units of charge to f in Step 6.*

Proof. Assume without loss of generality that $i = 0$. By symmetry, it is enough to consider the case that f contributes charge through e_2 in Step 3. It follows from Proposition 2.6 and the maximum number of crossings per edge that the wedge of t_2 contains exactly one 0-quadrilateral. Since (A_1, B_1) has four crossings, it follows that A_1 and w_0 are vertices of f_4 . Note that $|f_4| \geq 4$, for otherwise if $|f_4| = 3$ then this implies that $A_1 = A_0$ which is impossible by Observation 2.15.

If $A_0 \in V(f_4)$ (see Figure 11(a)), then it follows from Corollary 2.14 that f_4 sends at least $1/3$ units of charge to f in Step 6.

Otherwise, if A_0 is not a vertex of f_4 , then it follows that B_0 and w_1 are vertices of f_1 (see Figure 11(b)). Let z be the vertex of f_1 that precedes x_2 in the clockwise order of the

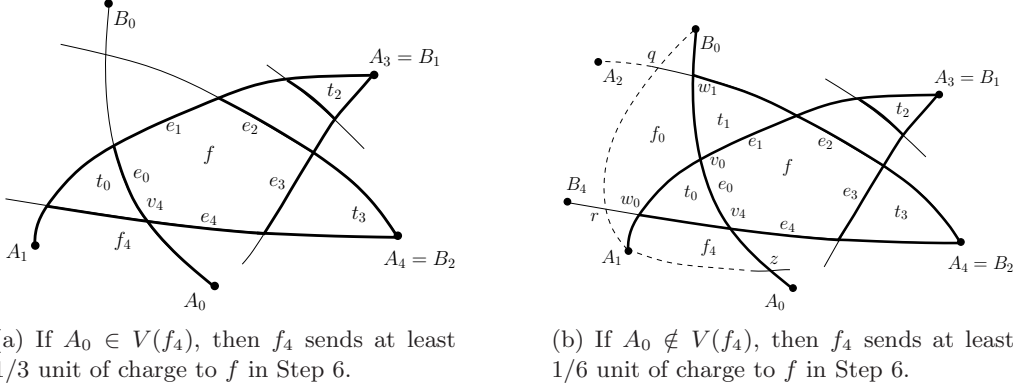


Figure 12: Illustrations for the proof of Proposition 2.21: f contributes charge through e_0 and e_1 in Step 1 and through e_2 and e_3 in Steps 3 or 5. The wedge of t_2 contains one 0-quadrilateral. The wedge of t_3 contains no 0-quadrilaterals.

vertices on the boundary of f_1 . Recall that the two neighbors of t_2 must be 1-triangles and therefore z is a crossing point in G . Observe that f contributes at most $1/6$ units of charge through each of zx_2 and w_1B_0 , and at most $1/3$ units of charge through each of x_2v_1 and v_1w_1 . Let $k \geq 1$ be the number of edges on the clockwise chain from B_0 to z on the boundary of f_1 . Then $ch_5(f_1) \geq 4 + 2k/3 + 1 - 4 - 1/3 - 2/3 - 2/6 = (2k - 1)/3$. Since f_1 is not a vertex-neighbor of a 0-pentagon through B_0, x_2 and z , we have $|B(f_1)| \leq k + 1$. Therefore, if $k \geq 2$ then every 0-pentagon in $B(f_1)$ (including f) receives at least $\frac{2k-1}{3(k+1)} \geq 1/3$ units of charge from f_1 in Step 6. If $k = 1$, that is, B_0z is an edge of f_1 , then notice that the other face that shares this edge with f_1 is incident to at least two original vertices. Therefore, f_1 does not contribute charge through B_0z and hence $ch_5(f_1) \geq 5 + 1 - 4 - 1/3 - 2/3 - 2/6 = 2/3$. In this case $|B(f_1)| \leq 2$ and therefore, as before, f receives at least $1/3$ units of charge from f_1 in Step 6. \square

Proposition 2.21. *Let f be a 0-pentagon such that $ch_5(f) < 0$, f contributes charge through e_i and e_{i+1} in Step 1 and through e_{i+2} (resp., e_{i-1}) and e_{i+3} in Steps 3 or 5. Suppose further that the wedge of t_{i+2} (resp., t_{i-1}) contain one 0-quadrilateral and the wedge fo t_{i+3} contains no 0-quadrilateral. If $A_i \in V(f_{i+4})$ (resp., $B_{i+1} \in V(f_{i+1})$), then f_{i+4} (resp., f_{i+1}) contributes at least $1/3$ units of charge to f in Step 6. Otherwise, f_{i+4} (resp., f_{i+1}) contributes at least $1/6$ units of charge to f in Step 6.*

Proof. Assume without loss of generality that $i = 0$. By symmetry, it is enough to consider the case that f contributes charge through e_2 in Step 3 or 5. It follows from the maximum number of crossings per edge that the wedge of t_2 contains exactly one 0-quadrilateral. Since (A_1, B_1) has four crossings, it follows that A_1 and w_0 are vertices of f_4 . Note that $|f_4| \geq 4$, for otherwise if $|f_4| = 3$ then this implies that $A_1 = A_0$ which is impossible by Observation 2.15.

If $A_0 \in V(f_4)$ (see Figure 12(a)), then it follows from Corollary 2.14 that f_4 sends at least $1/3$ units of charge to f in Step 6.

Suppose that $A_0 \notin V(f_4)$ and let z be the crossing point on (A_0, B_0) between A_0 and v_4 (see Figure 12(b)). If f_4 contributes charge through v_4z , then the receiver of this charge must be a 1-triangle whose neighbors are t_3 and a face that is incident to at least two original vertices. Therefore f_4 contributes at most $1/6$ units of charge through v_4z . Note that it also contributes at most $1/6$ units of charge through A_1w_0 .

Let $k \geq 1$ be the number of edges on the clockwise chain from z to A_1 on the boundary of f_4 . Note that f_4 contributes at most $1/6$ units of charge through the edge in this chain that is incident to A_1 and at most $1/3$ units of charge through every other edge. Thus,

$ch_5(f_4) \geq 3 + k + 1 - 4 - \frac{1}{3} - \frac{1}{3} - \frac{3}{6} - \frac{k-1}{3} = \frac{2k}{3} - \frac{5}{6}$. Note $|B(f_4)| \leq k + 1$ since the vertex-neighbor of f_4 at z is incident to A_0 . Therefore, if $k \geq 2$ then every 0-pentagon in $B(f_4)$ (including f) receives at least $\frac{2k/3-5/6}{k+1} \geq 1/6$ units of charge from f_4 in Step 6.

If $k = 1$, that is, zA_1 is an edge of f_4 , then notice that the other face that shares this edge with f_4 is incident to at least two original vertices. Therefore, f_4 does not contribute charge through zA_1 . Observe that f_4 does not contribute charge through A_1w_0 in Step 4. Indeed, if f_4 shares the edge A_1w_0 with a 1-triangle w_0A_1r , then since (A_4, B_4) already has four crossings the other neighbor of this 1-triangle is incident to two original vertices. It follows from the statement of Step 4 that the 1-quadrilateral f_4 whose charge after Step 3 is $1/3$ does not contribute charge through A_1w_0 . Thus, $ch_5(f_4) \geq 1/6$. Suppose that f_4 is a vertex-neighbor of a 0-pentagon through w_0 . Then this 0-pentagon is f_0 . Denote the vertices of f_0 by v_0, w_0, r, q, w_1 listed in clockwise order (see Figure 12(b)). Then f_0 does not contribute charge through rq , since (A_2, B_2) and (A_4, B_4) already intersect at $A_4 = B_2$. If f_0 contributes charge through qw_1 , then the receiver of this charge must be a 1-triangle whose vertices are q, B_0 and w_1 , since (A_0, B_0) already has four crossings. Because one neighbor of this 1-triangle is incident to two original vertices (A_2 and B_0), it follows that f_0 contributes at most $1/6$ units of charge through qw_1 . For similar arguments f_0 also contributes at most $1/6$ units of charge through w_0r . Therefore $ch_5(f_0) \geq 0$ and $f_0 \notin B(f_4)$. Since the vertex-neighbor of f through z is not a 0-pentagon (it is incident to A_0), we conclude that $B(f_4) = \{f\}$ and therefore f receives at least $1/6$ units of charge from f_4 in Step 6. \square

Recall that we consider now the case that f contributes charge through e_0 and e_1 in Step 1 and $ch_5(f) < 0$. By symmetry, we may assume without loss of generality that the charge that f contributes through e_4 is not greater than the charge it contributes through e_2 .

Subcase 1.1: f contributes $1/3$ units of charge through e_3 in Step 3. Note that the wedge of t_3 contains at most one 0-quadrilateral, for otherwise each of (A_2, B_2) and (A_4, B_4) would have more than four crossings. If the wedge of t_3 contains exactly one 0-quadrilateral, then it follows from Proposition 2.16 that f receives at least $1/3$ units of charge from f_0 in Step 6. Therefore, if $ch_6(f) < 0$, then f must contribute charge in Step 3 through at least one of e_2 and e_4 . However, in this case it also get at least $1/3$ units of charge from f_1 or f_4 , by Proposition 2.20, and ends up with a non-negative charge.

Suppose that the wedge of t_3 contains no 0-quadrilaterals. Then by Proposition 2.16 f does not contribute charge through neither e_2 nor e_4 in Step 3. Therefore, f must contribute $1/6$ units of charge through e_2 in Step 5. If the wedge of t_2 contains no 0-quadrilaterals, then f_2 is incident to at least two original vertices ($A_3 = B_1$ and $A_4 = B_2$). However, since f_2 is also a neighbor of t_3 , it must be a 1-triangle. Therefore, the wedge of t_2 contains exactly one 0-quadrilateral (two 0-quadrilaterals would imply that (A_1, B_1) and (A_3, B_3) are crossed more than four times). Thus, by Proposition 2.21, f receives at least $1/6$ units of charge from f_4 in Step 6.

If f also contributes $1/6$ units of charge through e_4 in Step 5, then by Proposition 2.21 it receives at least $1/6$ units of charge also from f_1 in Step 6. Therefore, $ch_6(f) \geq 0$.

Subcase 1.2: f contributes $1/6$ units of charge through e_3 in Step 5. Since $ch_5(f) < 0$ and we have assumed that the amount of charge that f contributes through e_2 is at least the amount of charge it contributes through e_4 , it follows that f contributes at least $1/6$ units of charge through e_2 .

If f contributes charge through e_2 in Step 3, then it follows from Proposition 2.20 that f receives at least $1/3$ units of charge from either f_4 or f_1 in Step 6. Therefore, if f contributes at most $1/6$ units of charge through e_4 , then it ends up with a non-negative charge.

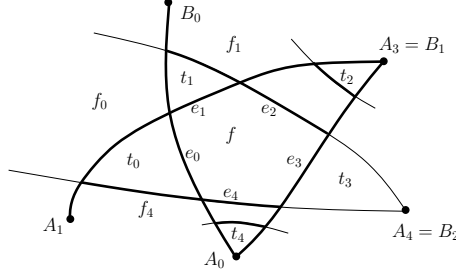


Figure 13: An illustration for Subcase 1.2 in the proof of Lemma 2.19: f contributes charge through e_0 and e_1 in Step 1, through e_2 and e_4 in Step 3, and through e_3 in Step 5.

If f also contributes charge through e_4 in Step 3, then it follows from Proposition 2.6 that $A_0 \notin f_4$ and $B_1 \notin f_1$ (see Figure 13). Therefore, it follows from Proposition 2.20 that f receives at least $1/3$ units of charge from each of f_4 and f_1 , and therefore $ch_6(f) \geq 0$.

It remains to consider the case that f contributes $1/6$ through each of e_2 and e_4 . If the wedge of t_3 contains one 0-quadrilateral, then it follows from Proposition 2.16 that f receives at least $1/3$ units of charge from f_0 and therefore $ch_6(f) \geq 0$. Assume therefore that that wedge of t_3 contains no 0-quadrilaterals. If the wedges of t_2 and t_4 also contain no 0-quadrilaterals, then each of the neighbors of t_3 is incident to at least two original vertices, and so f does not contribute charge to t_3 . Assume, without loss of generality, that the wedge of t_2 contains one 0-quadrilateral (note that two 0-quadrilateral would imply more than four crossings for (A_1, B_1)). By Proposition 2.21 f receives at least $1/6$ units of charge from f_4 and so $ch_6(f) \geq 0$.

Subcase 1.3: f does not contribute charge through e_3 . Since $ch_5(f) < 0$ and the amount of charge f contributes through e_2 is at least the amount of charge it contributes through e_4 , f must contribute charge through e_2 in Step 3. However, by Proposition 2.20 f receives at least $1/3$ units of charge from f_1 or f_4 in Step 6 and so $ch_6(f) \geq 0$.

Case 2: f contributes charge through e_0 and e_2 in Step 1. Note that since (A_1, B_1) has four crossings (because it supports f and two 0-triangles), it follows that e_0 and e_2 are edges of t_0 and t_2 , respectively.

Proposition 2.22. *Let f be a 0-pentagon such that $ch_5(f) < 0$, f contributes charge through e_i and e_{i+2} in Step 1 and through e_{i+3} (resp., e_{i+4}) in Step 3. Then f receives at least $1/3$ units of charge from f_{i+2} (resp., f_{i+4}) in Step 6.*

Proof. Assume without loss of generality that $i = 0$. By symmetry, it is enough to consider the case that f contributes charge through e_3 in Step 3. It follows from Proposition 2.6 and the maximum number of crossings per edge that the wedge of t_3 contains exactly one quadrilateral. Therefore, B_1, w_2, v_2 and x_3 are vertices of f_2 . Observe that $|f_2| \geq 5$, since the two neighbors of t_2 are 1-triangles. Denote by z the vertex of f_2 that precedes x_3 in a clockwise order of the vertices of f_2 (see Figure 14). Note that f_2 contributes at most $1/6$ units of charge through w_2B_1 and zx_3 and at most $1/3$ units of charge through x_3v_2 and v_2w_2 . Observe also that f_2 cannot be a vertex-neighbor of a 0-pentagon through B_1, z , and x_3 .

Let $k \geq 1$ be the number of edges on the clockwise chain from B_1 to z on the boundary of f_2 . Thus, $|f_2| = 4 + k$. Then $ch_5(f_2) \geq 4 + 2k/3 + 1 - 4 - 1/3 - 2/3 - 2/6 = (2k - 1)/3$. Note that $|B(f_2)| \leq k + 1$ since f_2 is not a vertex-neighbor of a 0-pentagon at B_1, z , and x_3 . Therefore, if $k \geq 2$, then every 0-pentagon in $B(f_2)$ (including f) receives at least $\frac{2k-1}{3(k+1)} \geq 1/3$ units of charge from f_2 in Step 6.

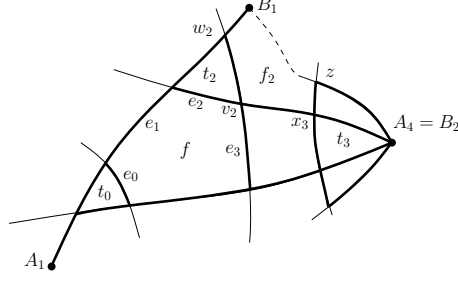


Figure 14: An illustration for the proof of Proposition 2.22: f contributes charge through e_0 and e_2 in Step 1 and through e_3 in Step 3.

If $k = 1$, that is, B_1z is an edge of f_2 , then notice that the other face that shares this edge with f_2 is incident to at least two original vertices. Therefore, f_2 does not contribute charge through B_1z . Thus, $ch_5(f_2) \geq 5 + 1 - 4 - 1/3 - 2/3 - 2/6 = 2/3$ and $|B(f_2)| \leq 2$. It follows that every 0-pentagon in $B(f_2)$ (including f) receives at least $1/3$ units of charge from f_2 in Step 6. \square

Recall that we consider the case that f contributes charge through e_0 and e_2 in in Step 1. Since $ch_5(f) < 0$, f must contribute charge through e_3 or e_4 . By symmetry we may assume without loss of generality that the amount of charge that f contributes through e_3 is at least the amount of charge it contributes through e_4 . Therefore, it is enough to consider the following four subcases: f contributes $1/3$ units of charge through e_1 and at least $1/6$ units of charge through e_3 ; f contributes $1/6$ units of charge through e_1 and $1/3$ units of charge through e_3 ; f contributes $1/6$ units of charge through each of e_1 , e_3 and e_4 ; and f does not contribute charge through e_1 .

Subcase 2.1: f contributes $1/3$ units of charge through e_1 and at least $1/6$ units of charge through e_3 . It follows from Proposition 2.6 that the wedge of t_1 contains at least one 0-quadrilateral. Suppose that it contains two 0-quadrilaterals. Then $\{A_0, A_1\} \subseteq V(f_4)$ and $\{B_1, B_2\} \subseteq f_2$ (see Figure 15(a)). Therefore, by Corollary 2.14 f receives at least $1/3$ units of charge from each of f_4 and f_2 in Step 6 and so $ch_6(f) \geq 0$. Assume therefore that the wedge of t_1 contains exactly one 0-quadrilateral.

If the wedge of t_3 contains no 0-quadrilaterals, then $\{B_1, B_2\} \subseteq V(f_2)$, and therefore it follows from Corollary 2.14 that $ch_6(f) \geq 0$ (note that in this case by Proposition 2.6 f does not contribute charge to t_3 in Step 3). Assume therefore that the wedge of t_3 contains exactly one 0-quadrilateral, and consider the face f_0 (refer to Figure 15(b)). Observe that x_1, v_0, w_0 and B_4 are vertices of f_0 and that $|f_0| \geq 5$, since the two neighbors of t_1 are 1-triangles. Denote by z the vertex of f_0 that precedes x_1 in a clockwise order of the vertices of f_0 . Note that f_0 contributes no charge through w_0B_4 , $1/6$ units of charge through zx_1 and at most $1/3$ units of charge through x_1v_0 and v_0w_0 . Observe also that f_2 cannot be a vertex-neighbor of a 0-pentagon through B_4, z, x_1 , and w_0 .

Let $k \geq 1$ be the number of edges on the clockwise chain from B_4 to z on the boundary of f_0 . Thus, $|f_0| = 4 + k$. Then $ch_5(f_0) \geq 4 + 2k/3 + 1 - 4 - 1/3 - 2/3 - 1/6 = (4k - 1)/6$. Note that $|B(f_2)| \leq k$ since f_0 is not a vertex-neighbor of a 0-pentagon at B_4, z, x_1 , and w_0 . Therefore, every 0-pentagon in $B(f_0)$ (including f) receives at least $\frac{4k-1}{6k} \geq 1/3$ units of charge from f_0 in Step 6.

Therefore if f contributes at most $1/6$ units of charge through e_3 (and, hence, through e_4), then $ch_6(f) \geq 0$. If f contributes $1/3$ units of charge through e_3 , then it follows from Proposition 2.22 that it receives at least $1/3$ units of charge from f_2 as well, and therefore $ch_6(f) \geq 0$.

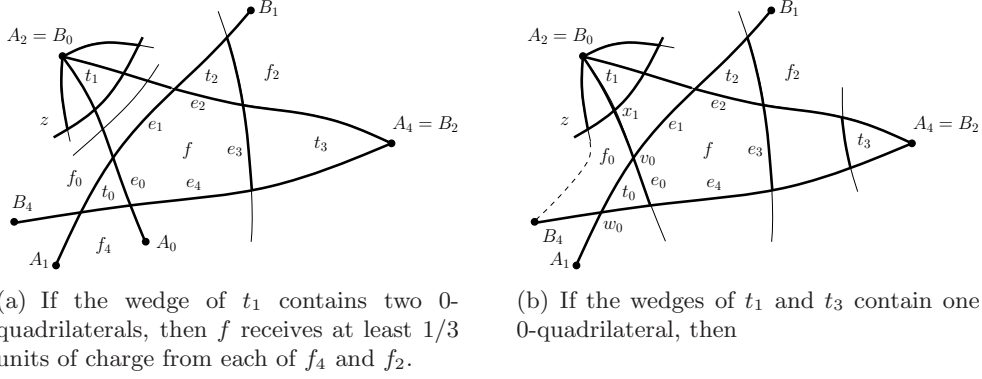


Figure 15: Illustrations for Subcase 2.1 in the proof of Lemma 2.19: f contributes charge through e_0 and e_2 in Step 1, through e_1 in Step 3, and through e_3 in Step 3 or 5.

Subcase 2.2: f contributes $1/6$ units of charge through e_1 and $1/3$ units of charge through e_3 . In this case, it follows from Proposition 2.22 that f receives at least $1/3$ units of charge from f_2 in Step 6. If f also contributes $1/3$ units of charge through e_4 , then it also receives at least $1/3$ units of charge from f_4 . Therefore, $ch_6(f) \geq 0$.

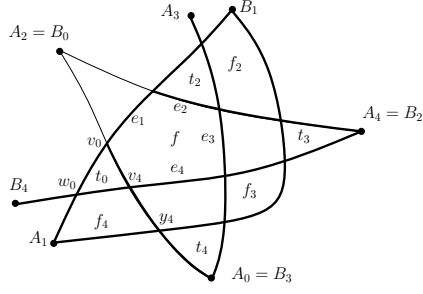
Subcase 2.3: f contributes $1/6$ units of charge through each of e_1 , e_3 and e_4 . Consider the face f_4 . It is incident to A_1 , w_0 , and v_4 . If f_4 is also incident to A_0 , then it follows from Corollary 2.14 that f_4 sends at least $1/6$ units of charge to f in Step 6 and thus $ch_6(f) \geq 0$.

Therefore we may assume that A_0 is not incident to f_4 , and, by symmetry, that f_2 is not incident to A_4 . Since (A_3, B_3) and (A_4, B_4) already have four crossings, the wedges of t_3 and t_4 contain exactly one 0-quadrilateral. Observe that A_1 , w_0 , v_4 and y_4 are incident to f_4 . f_4 might contribute at most $1/6$ through each of its two edges that are incident to A_1 , however, the other face that shares A_1w_0 with f_4 is incident to two original vertices (A_1 and B_4 , see Figure 16(a)), and therefore f_4 does not contribute charge through A_1w_0 .

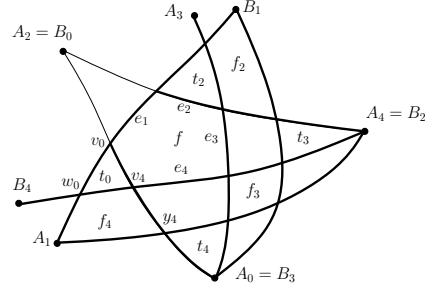
Note that $ch_5(f_4) \geq |f_4| + 1 - 4 - \frac{1}{3} - \frac{1}{6} - \frac{|f_4|-2}{3}$ and $A_1, w_0, y_4 \notin B(f_4)$ (the vertex-neighbor of f_4 at w_0 is f_0 which is incident to B_4 , and the vertex-neighbor of f_4 at y_4 is the 1-triangle t_4). Therefore, if $|f_4| \geq 5$, then f_4 contributes at least $\frac{2|f_4|/3-17/6}{|f_4|-3} \geq 1/6$ units of charge to f . If f_4 is a 1-quadrilateral, then $B(f_4) = \{f\}$ and f_4 does not contribute charge through y_4A_1 (the other face that shares this edge with f_4 is incident to A_0 and A_1). Thus, if $ch_5(f_4) \geq 1/6$, then $ch_6(f) \geq 0$.

Since the same arguments apply also for f_2 , it follows that if $ch_6(f) < 0$, then f_2 (resp., f_4) contributes charge in Step 1 or Step 3 to another triangle but t_0 (resp., t_2). If f_4 (resp., f_2) contributes charge in Step 1 to two 0-triangles, then one of these 0-triangles is f_3 (f_3 cannot be a 0-quadrilateral for otherwise (A_4, B_4) would have more than four crossings). If f_4 (resp., f_2) contributes charge in Step 3, then the 1-triangle that receives this charge is incident to $A_4 = B_2$ (resp., $A_0 = B_3$) and furthermore f_3 must be a 0-quadrilateral. It follows that either both of f_2 and f_4 contribute charge to two 0-triangles in Step 1 or both of them contribute charge in Step 3. However, the first case implies two parallel edges with endpoints A_1 and B_1 , see Figure 16(a). The second case is also impossible since it implies that one neighbor of the two 1-triangles that receive charge from f_2 and f_4 is incident two original vertices (recall that the neighbors of a 1-triangle that receives charge in Step 3 are 1-triangles), see Figure 16(b).

Subcase 2.4: f does not contribute charge through e_1 . If $ch_5(f) < 0$, then f contributes charge in Step 3 through e_3 or e_4 . By symmetry, we may assume without loss of generality



(a) If f_2 and f_4 are both 1-quadrilaterals that contribute charge to two 0-triangles in Step 1, then there are two parallel edges between A_1 and B_1 .



(b) If f_2 and f_4 are both 1-quadrilaterals that contribute charge to 1-triangles in Step 3, then these triangles has a neighbor which is not a 1-triangle.

Figure 16: Subcase 2.3 in the proof of Lemma 2.19: f contributes charge through e_0 and e_2 in Step 1, and through e_1, e_3 and e_4 in Step 5.

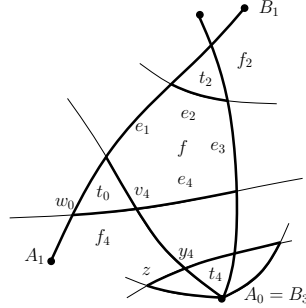


Figure 17: An illustration for Subcase 2.4 in the proof of Lemma 2.19: f contributes charge through e_0 and e_2 in Step 1, and through e_4 in Step 3.

that f contributes charge through e_4 in Step 3. It follows from Proposition 2.6 that e_4 is not an edge of t_4 . Therefore, the wedge of t_4 contains exactly one 0-quadrilateral.

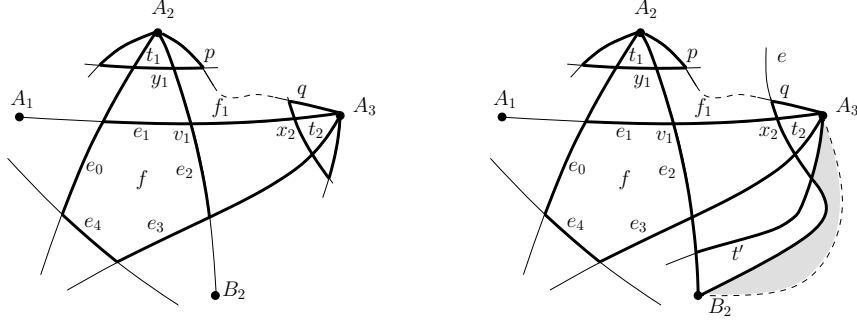
Consider the face f_4 . It is incident to A_1, w_0, v_4 , and y_4 (see Figure 17). Denote by z the vertex that follows y_4 in a clockwise order of the vertices on the boundary of f_4 . Notice that since t_4 must have two neighboring 1-triangles, it follows that $z \neq A_1$. Thus, $|f_4| \geq 5$. Note also that the face that is a vertex-neighbor of f_4 at z is incident to A_0 and is therefore not a 0-pentagon. Since the vertex-neighbors of f_4 at y_4 and A_1 are also not 0-pentagons, we have that $|B(f_4)| \leq |f_4| - 3$. Observe that f_4 contributes at most $1/6$ units of charge through y_4z and the two edges that are incident to A_1 . Therefore f_4 contributes at least $\frac{|f_4|+1-4-1/3-3/6-(|f_4|-3)/3}{|f_4|-3} \geq \frac{1}{6}$ to f in Step 6.

If f contributes $1/6$ units of charge through e_3 , then we are done. Otherwise, if f contributes $1/3$ units of charge through e_3 in Step 3, then by symmetry it also receives at least $1/6$ units of charge from f_2 in Step 6 and therefore $ch_6(f) \geq 0$.

This concludes the proof of Lemma 2.19. \square

Proposition 2.23. *Let f be a 0-pentagon that contributes charge in Step 3 through e_i and e_{i+1} , for some $0 \leq i \leq 4$, such that the wedges of t_i and t_{i+1} each contain exactly one 0-quadrilateral. If $ch_5(f) < 0$ then f receives at least $1/3$ units of charge from f_i in Step 6.*

Proof. Assume without loss of generality that $i = 1$ and refer to Figure 18(a). Since t_1 and t_2 receive charge in Step 3, both of their neighbors are 1-triangles. Let A_2y_1p be the neighbor of t_1 that shares an edge with f_1 and let A_3x_2q be the neighbor of t_2 that shares an edge



(a) f contributes charge to t_1 and t_2 in Step 3 and their wedges each contain exactly one 0-quadrilateral.

(b) If f_1 contributes charge to t' through v_1x_2 in Step 3, then one neighbor of t' is not a 1-triangle.

Figure 18: Illustration for the proof of Proposition 2.23.

with f_1 (each of these triangles shares an edge with f_1 since the wedges of t_1 and t_2 each contains exactly one 0-quadrilateral). Observe that $|f_1| \geq 5$ and that f_1 contributes at most $1/6$ units of charge through y_1p and x_2q . That is since the other neighbor of the 1-triangle A_2y_1p (resp., A_3x_2q) but t_1 (resp., t_2) must be incident to at least two original vertices.

Note also that f_1 contributes at most $1/6$ units of charge through v_1x_2 . Indeed, if it contributes charge through v_1x_2 in Step 1, then (A_2, B_2) would have more than four crossings. If f_1 contributes charge through v_1x_2 in Step 3 to a 1-triangle t' , then the vertex of G that is incident to t' must be B_2 (refer to Figure 18(b)). Denote by e the edge of G that contains the edge of t_2 that is not incident to A_3 . Note that one endpoint of e is B_2 and that e already has four crossing points (since it supports t_2 and its neighboring 1-triangles). However, this implies that one neighbor of t' is not a 1-triangle, and therefore t' could not have received charge from f_1 in Step 3 through v_1x_2 .

Similarly, f_1 contributes at most $1/6$ charge through v_1y_1 . Note that f_1 is not a vertex-neighbor of a 0-pentagon through the vertices q, x_2, y_1 and p . If $|f_1| = 5$ then $B(f_1) = \{f\}$ and f_1 does not contribute charge through pq . Indeed, each of the edges of G that contain py_1 and qx_2 already have four crossings, and this implies that if the face that shares pq with f_1 is a 1-triangle, then both of its neighbors are incident to two original vertices and therefore this 1-triangle gets its missing charge from them. Therefore, $ch_5(f_1) \geq 1/3$ and f_1 sends all its extra charge to f in Step 6.

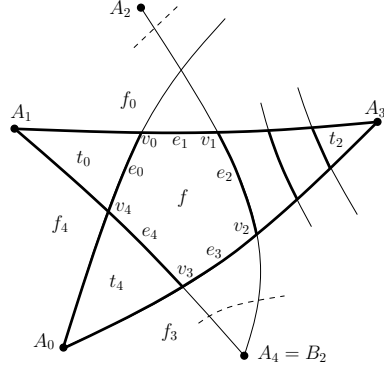
If $|f_1| \geq 6$ then the clockwise chain from p to q contains $|f_1| - 4$ edges and at most $|f_1| - 5$ vertices through which f_1 might contribute charge in Step 6. Since f_1 contributes at most $1/6$ units of charge through each of $py_1, v_1y_1, v_1x_2, qx_2$ and at most $1/3$ units of charge through each other edge, we have $ch_5(f_1) \geq |f_1| - 4 - 4/6 - (|f_1| - 4)/3$. Therefore every face in $B(f_1)$ receives at least $\frac{2|f_1|/3 - 10/3}{|f_1| - 4} \geq 1/3$ units of charge from f_1 in Step 6. \square

Lemma 2.24. *Let f be a 0-pentagon such $ch_1(f) = 2/3$ and $ch_5(f) < 0$. Then $ch_6(f) \geq 0$.*

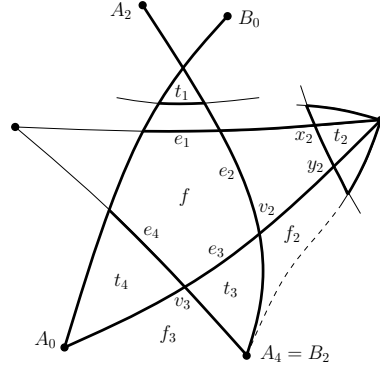
Proof. Assume without loss of generality that f contributes $1/3$ units of charge in Step 1 to t_1 through e_1 . There are three cases to consider, based on whether f contributes $1/3$ units of charge to exactly one, exactly two or at least three 1-triangles in Step 3.

Case 1: $ch_3(f) = 1/3$ and $ch_5(f) = -1/6$. That is, f contributes $1/3$ units of charge to exactly one 1-triangle t' in Step 3, and $1/6$ units of charge to three 1-triangles in Step 5. Without loss of generality we may assume that either $t' = t_2$ or $t' = t_3$.

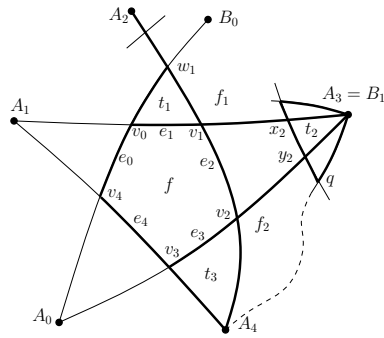
Subcase 1.1: f sends $1/3$ units of charge to t_2 in Step 3. It follows from Proposition 2.6 that the wedge of t_2 contains at least one 0-quadrilateral. We observe first that the wedge of t_2



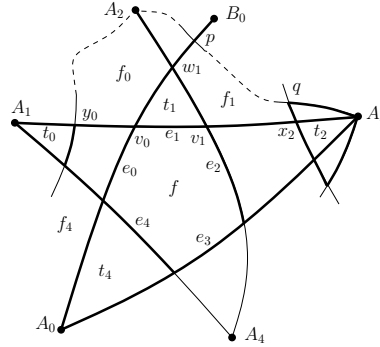
(a) If the wedge of t_2 contains two 0-quadrilaterals, then (A_2, B_2) has five crossings.



(b) If e_1 is not an edge of t_1 , then t_3 receives $1/6$ units of charge from each of its neighbors in Step 4.



(c) If A_2w_1 is not an edge in $M(G)$, then e_3 is an edge of t_3 , and f_2 contributes at least $1/6$ units of charge to f .



(d) A_2w_1 is an edge in $M(G)$ and B_0w_1 is not.

Figure 19: Subcase 1.1 in the proof of Lemma 2.24: f sends $1/3$ units of charge to t_1 in Step 1 and $1/3$ units of charge to t_2 in Step 3.

cannot contain two 0-quadrilaterals. Indeed, suppose it does and refer to Figure 19(a). Since each of the edges (A_1, A_3) and (A_3, A_0) has four crossings it follows that e_0 is an edge of t_0 and e_4 is an edge of t_4 . Thus f_4 is incident to A_0 and A_1 and is a neighbor of t_0 and t_4 . Therefore the other neighbor of t_0 (resp., t_4) cannot be incident to any other original vertex but A_1 (resp., $A_4 = B_2$). This implies that (A_2, B_2) has two additional crossings, and totally five crossings.

Next, we observe that e_1 must be an edge of t_1 . Indeed, suppose it is not and refer to 19(b). Since each of the edges (A_2, B_2) and (A_0, B_0) has four crossings, e_3 is an edge of t_3 and e_4 is an edge of t_4 . It follows that the neighbors of t_3 are f_2 and f_3 . Since f_3 is incident to A_0 and B_2 , it contributes charge to t_3 in Step 4. Consider f_2 , the other neighbor of t_3 . Note that f_2 does not contribute charge through v_2y_2 in Steps 1 or 3, for this would imply that the edge of G that contains x_2y_2 must cross (A_2, B_2) . However, this edge already has four crossings since it supports t_2 and its two neighboring 1-triangles. Since the size of f_2 is a least four, it follows that f_2 also contributes charge to t_3 in Step 4, and therefore f does not contribute charge to t_3 .

We may thus assume that e_1 is an edge of t_1 and that the wedge of t_2 contains exactly one 0-quadrilateral. Observe that this implies that $|f_1| \geq 5$. Indeed, if $|f_1| = 4$, then B_0 and B_1 must coincide, which is impossible.

Consider now the edge-segment A_2w_1 . Suppose that it contains a crossing point between

A_2 and w_1 and refer to Figure 19(c). It follows that e_3 is an edge of t_3 and that f_2 is a neighbor of t_3 . Since $|f_1| \geq 5$, f_2 does not contribute charge through v_2y_2 . Let q be the vertex of f_2 that follows y_2 in a clockwise order of the vertices on the boundary of f_2 . Note that f_2 contributes at most $1/6$ units of charge through each of A_4v_2 and y_2q . If $|f_2| = 4$, then f_2 does not contribute charge through qA_4 , and therefore $ch_5(f_2) \geq 1/3$. In this case f_2 sends at least $1/6$ units of charge to f in Step 6. It is also not hard to see that this remains true if $|f_2| \geq 5$. Therefore, $ch_6(f) \geq 0$ if A_2w_1 is not an edge of $M(G)$.

Assume that A_2w_1 is an edge of $M(G)$. If B_0w_1 is also an edge of $M(G)$, then B_0 is a vertex of f_1 . Recalling that $|f_1| \geq 5$, it is not hard to see that in this case f_1 sends at least $1/6$ units to f in Step 6 and so $ch_6(f) \geq 0$.

Suppose therefore that there is a crossing point between B_0 and w_1 on B_0w_1 , and refer to Figure 19(d). Since (A_0, B_0) contains four crossing points, it follows that e_4 is an edge of t_4 and A_0 is a vertex of f_4 . This implies that e_0 is not an edge of t_0 . Indeed, otherwise the neighbors of t_0 would be f_4 and f_0 and each of them would be incident to two original vertices. Therefore t_0 would get $1/6$ units of charge from each of them (in Step 4) and no charge from f .

Consider the face f_0 and observe that $|f_0| \geq 4$ and it contributes $1/3$ units of charge through v_0w_1 , and at most $1/6$ units of charge through v_0y_0 . We claim that $f_1 \notin B(f_0)$. Suppose that f_1 is a 0-pentagon, and denote by p and q its vertices that follow w_1 in a clockwise order. Then f_1 contributes $1/3$ units of charge through v_1w_1 , at most $1/6$ units of charge through w_1p , qx_2 and x_2v_1 , and no charge through pq (if p, q, B_0 are the vertices of a 1-triangle, then each of its two neighbors are incident to two original vertices). Therefore, $ch_5(f_1) \geq 1/6$ and $f_1 \notin B(f_0)$.

Suppose that f_0 is a 1-quadrilateral. Then it does not contribute charge through A_2w_1 in Step 4, since $ch_3(f_0) = 1/3$ and if the face that shares A_2w_1 with f_0 is a 1-triangle, then the other neighbor of this 1-triangle is incident to A_2 and B_0 . Note also that the face that shares A_2y_0 with f_0 is also incident to two original vertices and therefore f_0 does not contribute charge through this edge as well. Thus, $ch_5(f_0) \geq 1/6$ and since $B(f_0) = \{f\}$, f receives at least $1/6$ units of charge from f_0 in Step 6.

If $|f_0| \geq 5$, then the clockwise chain from y_0 to A_2 contains $|f_0| - 3$ edges and at most $|f_0| - 4$ vertices through which f_0 sends charge in Step 6. Therefore, every face in $B(f_0)$ (including f) receives from f_0 in Step 6 at least $\frac{|f_0|+1-4-2/3-2/6-(|f_0|-3)/3}{|f_0|-3} \geq 1/6$ units of charge.

Subcase 1.2: f sends $1/3$ units of charge to t_3 in Step 3. We first observe that e_1 must be an edge of t_1 . Indeed, suppose it does not and refer to Figure 20(a). Since each of (A_2, B_2) and (A_0, B_0) contain four crossings, e_3 is an edge of t_3 and e_4 is an edge of t_4 . But then one neighbor of t_3 (the face f_3) is incident to two original vertices (A_0 and B_2) and therefore f could not have contributed charge to t_3 in Step 3.

Suppose that e_3 is an edge of t_3 and refer to Figure 20(b). Since the neighbors of t_3 are 1-triangles it follows that the wedges of t_2 and t_4 each contain exactly one 1-quadrilateral. Observe also that one neighbor of t_2 is incident to two original vertices, which implies that its other neighbor is either a 1-quadrilateral or a 1-triangle. This in turn implies that f_1 cannot be a quadrilateral (because then the other neighbor of t_2 would be incident to two original vertices). Thus, the size of f_1 is at least five and it contains one original vertex. It is not hard to see that f_1 contributes at least $1/6$ units of charge to f in Step 6.

Therefore, assume that e_3 is not an edge of t_3 . This implies that f_0 is incident to A_2 . If e_0 is an edge of t_0 , then $|V(f_0)| \geq 2$ and $|f_0| \geq 4$ and by Corollary 2.14 f_0 contributes at least $1/3$ units of charge to f in Step 6. We may assume therefore that the wedge of t_0 contains exactly one 1-quadrilateral (more than one would imply five crossings on (A_4, B_4)).

Suppose that e_4 is an edge of t_4 and refer to Figure 20(c). Consider the face f_3 . Let q be

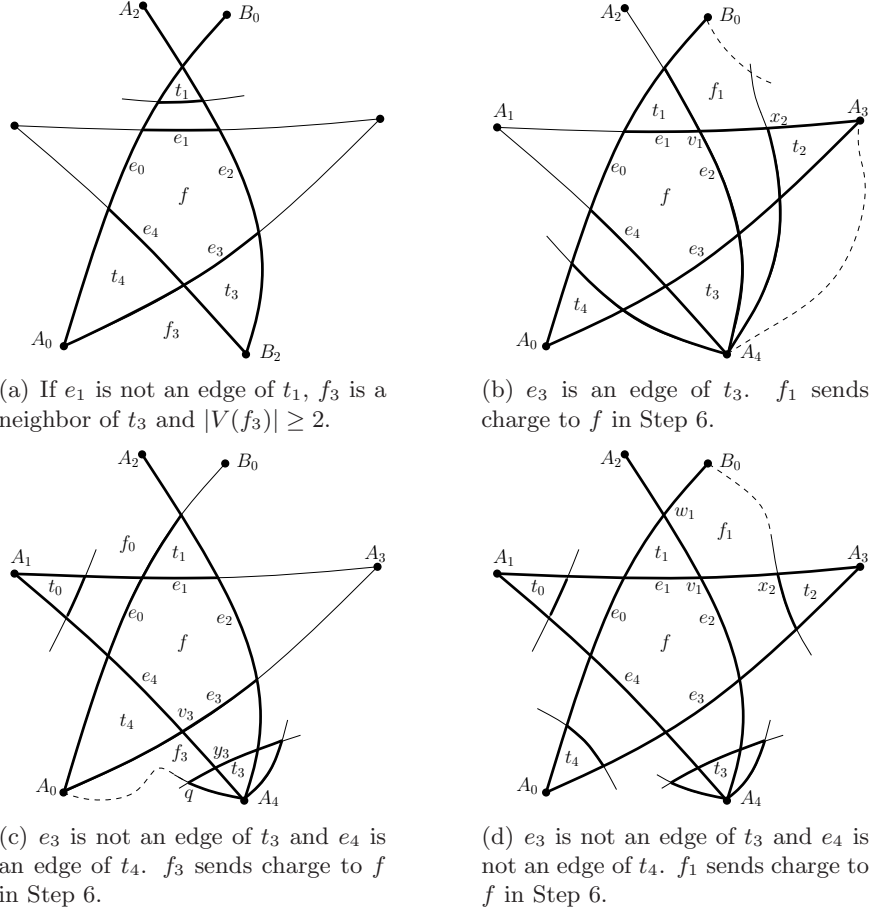


Figure 20: Subcase 1.2 in the proof of Lemma 2.24: f sends $1/3$ units of charge to t_1 in Step 1 and $1/3$ units of charge to t_3 in Step 3.

the vertex of f_3 that follows y_3 in a clockwise order of the vertices of f_3 . Note that $|f_3| \geq 4$ and that $|V(f_3)| \geq 1$. Observe also that f_3 contributes at most $1/6$ units of charge through A_0v_3 , y_3q and v_3y_3 (the latter since the edge of G that supports t_3 and its two neighboring 1-triangles already has four crossings). If f_3 is a 1-quadrilateral then $ch_5(f_3) \geq 1/6$ since f_3 does not contribute charge through A_0q (because the face sharing A_0q with f_3 is incident to two original vertices). Since $B(f_3) = \{f\}$, f ends up with a nonnegative charge in this case.

If $|f_3| \geq 5$, then consider the clockwise chain from q to A_0 , and observe that it contains $|f_3| - 3$ edges and at most $|f_3| - 4$ vertices through which f_3 sends charge in Step 6. Therefore, every face in $B(f_3)$ (including f) receives from f_3 in Step 6 at least $\frac{|f_3| + 1 - 4 - 1/3 - 3/6 - (|f_3| - 3)/3}{|f_3| - 3} \geq 1/6$ units of charge.

It remains to consider the case that e_4 is not an edge of t_4 (refer to Figure 20(d)). If e_2 is an edge of t_2 , then f_1 is incident to two original vertices (B_0 and A_3) and its size is at least four, and therefore by Corollary 2.14 it contributes at least $1/3$ units of charge to f in Step 6. Therefore we may assume that e_2 is not an edge of t_2 , and for similar arguments, e_0 is not an edge of t_0 . Note that $|f_1| \geq 4$ and $|V(f_1)| \geq 1$. Observe that f_1 contributes $1/3$ units of charge to B_0 and to t_1 and at most $1/6$ units of charge through v_1x_2 . Furthermore, f_1 does not contribute any charge through B_0w_1 , since the other face that is incident to this edge is incident to two original vertices. If f_1 is a 1-quadrilateral, then it also does not contribute any charge through B_0x_2 , and therefore $ch_5(f_1) \geq 1/6$. We also have $B(f_1) = \{f\}$ in this case, and so f_1 sends at least $1/6$ units of charge to f in Step 6.

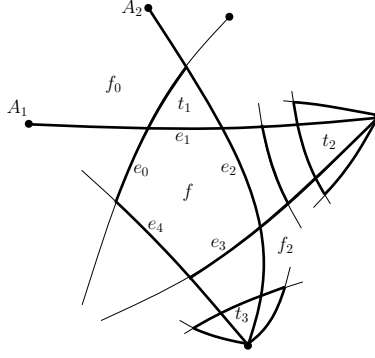


Figure 21: An illustration for Subcases 2.1 in the proof of Lemma 2.24: If f contributes through e_2 and e_3 in Step 3, such that the wedge of t_2 contains two 0-quadrilaterals, then f receives at least $1/3$ units of charge from f_0 in Step 6.

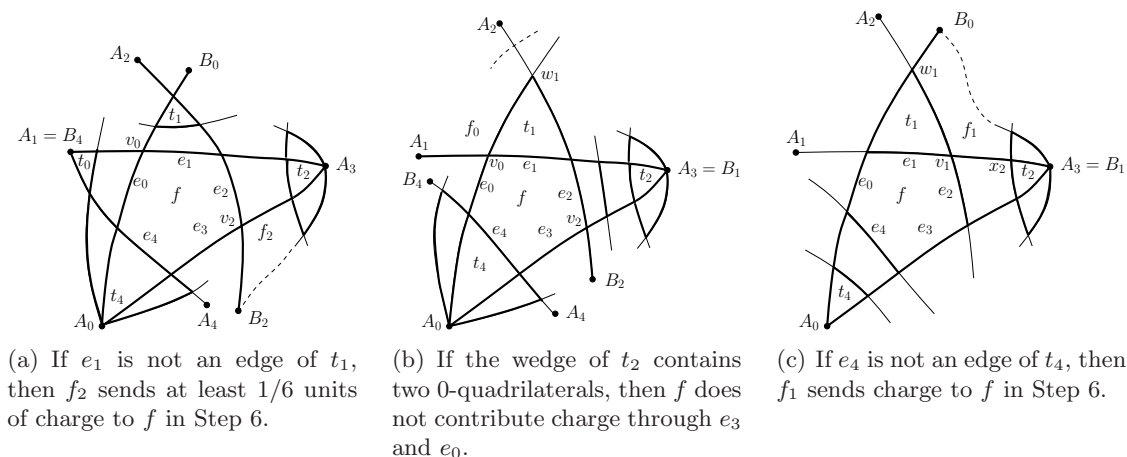
If $|f_1| \geq 5$, then consider the clockwise chain from B_0 to x_2 , and observe that it contains $|f_1| - 3$ edges and at most $|f_1| - 4$ vertices through which f_1 sends charge in Step 6. Therefore, every face in $B(f_1)$ (including f) receives from f_1 in Step 6 at least $\frac{|f_1|+1-4-2/3-1/6-(|f_1|-3)/3}{|f_1|-3} \geq 1/6$ units of charge.

Case 2: $ch_1(f) = 2/3$, $ch_3(f) = 0$ and $ch_5(f) < 0$. That is, f contributes $1/3$ units of charge to exactly two 1-triangles in Step 3. Recall that we assume without loss of generality that f sends $1/3$ units of charge to t_1 in Step 1. By symmetry, it is enough to consider the cases that the edges through which f contributes charge in Step 3 are e_2 and e_3 , e_2 and e_4 , e_2 and e_0 , and e_3 and e_4 .

Subcase 2.1: f contributes charge through e_2 and e_3 in Step 3. It follows from Proposition 2.6 and the maximum number of crossings per edge that the wedge of t_3 contains exactly one 0-quadrilateral and the wedge of t_2 contains one or two 0-quadrilaterals. If the wedge of t_2 contains exactly one quadrilateral, then by Proposition 2.23 f_2 contributes at least $1/3$ units of charge to f and thus $ch_6(f) \geq 0$. If the wedge of t_2 contains two 0-quadrilaterals, then it follows that the size of f_0 is at least four and this face is incident to A_1 and A_2 (see Figure 21). By Corollary 2.14 f_0 contributes at least $1/3$ units of charge to f in Step 6, and thus $ch_6(f) \geq 0$.

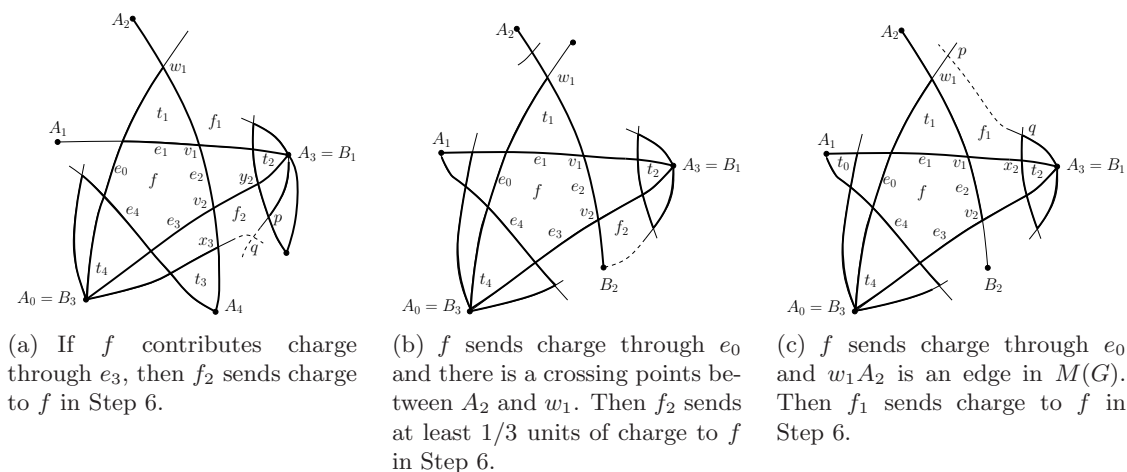
Subcase 2.2: f sends $1/3$ units of charge through e_2 and e_4 in Step 3. Suppose that e_1 is not an edge of t_1 and refer to Figure 22(a). Since (A_0, B_0) has four crossings, it follows that e_4 is an edge of t_4 . The edge (A_2, B_2) also has four crossings, which implies that v_2B_2 is an edge in $M(G)$. Therefore, the face that shares e_3 with f is of size at least four and is incident to B_2 . Thus, f does not contribute charge through e_3 , and hence must contribute $1/6$ units of charge through e_0 . This implies that A_1 and B_4 coincide, which in turn implies that e_0 is not an edge of t_0 and therefore the wedge of t_2 contains exactly one 0-quadrilateral. Considering the face f_2 , it is not hard to see that it contributes at least $1/6$ units of charge to f and thus $ch_6(f) \geq 0$.

Assume therefore that e_1 is an edge of t_1 . Observe next that the wedge of t_2 must contain exactly one 0-quadrilateral. Indeed, by Proposition 2.6 it must contain at least one 0-quadrilateral. Suppose that the wedge of t_2 contains two 0-quadrilaterals and refer to Figure 22(b). Then e_4 must be an edge of t_4 and v_0A_1 must be an edge of f_0 . If A_2w_1 is also an edge of f_0 , then $|f_0| \geq 4$ and $|V(f_0)| \geq 2$, and by Corollary 2.14 f_0 contributes at least $1/3$ units of charge to f in Step 6. Therefore, we may assume that the (open) segment A_2w_1 contains a crossing point. It follows that v_2B_2 is an edge in $M(G)$ and that f does not



(a) If e_1 is not an edge of t_1 , then f_2 sends at least $1/6$ units of charge to f in Step 6.
 (b) If the wedge of t_2 contains two 0-quadrilaterals, then f does not contribute charge through e_3 and e_0 .
 (c) If e_4 is not an edge of t_4 , then f_1 sends charge to f in Step 6.

Figure 22: Subcase 2.2 in the proof of Lemma 2.24.



(a) If f contributes charge through e_3 , then f_2 sends charge to f in Step 6.
 (b) f sends charge through e_0 and there is a crossing points between A_2 and w_1 . Then f_2 sends at least $1/3$ units of charge to f in Step 6.
 (c) f sends charge through e_0 and w_1A_2 is an edge in $M(G)$. Then f_1 sends charge to f in Step 6.

Figure 23: Subcase 2.2 in the proof of Lemma 2.24. e_4 is an edge of t_4 .

contribute charge through e_3 , since the face that shares this edge with f is incident to B_2 and its size is at least four. Thus, f must contribute charge through e_0 . However, the face that shares e_0 with f is also of size at least four and is incident to an original vertex (A_1), and therefore f does not contribute charge through e_3 either which implies that $ch_5(f) \geq 0$.

We may assume therefore that the wedge of t_2 contains exactly one 0-quadrilateral. Consider now the case that e_4 is not an edge of t_4 , and refer to Figure 22(c). Notice that $|f_1| \geq 5$ and $|V(f_1)| \geq 1$. f_1 contributes at most $1/6$ units of charge through each of its two edges that are incident to x_2 and through each of its two edges that are incident to B_0 . Note also that f_1 is not a vertex-neighbor of a 0-pentagon at B_0 , x_2 , and at the vertex that precedes x_2 in a clockwise order of the vertices of f_1 . Therefore, f_1 contributes in Step 6 at least $\frac{|f_1|+1-4-1/3-1/3-4/6-(|f_1|-5)/3}{|f_1|-3} \geq 1/3$ units of charge to every face in $B(f_1)$, including f .

It remains to consider the case that e_4 is an edge of t_4 . If $ch_5(f) < 0$ then f must have contributed charge through e_3 or e_0 in Step 5. Suppose that f sends $1/6$ units of charge through e_3 in Step 5, and refer to Figure 23(a). Note that the size of f_2 is at least five (if $|f_2| = 4$, then there are two parallel edges between A_3 and B_3) and let x_3, v_2, y_2, p, q be (some of) its vertices listed in a clockwise order. Observe that f_2 contributes no charge through v_2y_2 (since $|f_1| \geq 5$) and at most $1/6$ units of charge through x_3v_2 and y_2p . Note that f_2 is not a vertex-neighbor of a 0-pentagon at x_3 , y_2 and p . If $|f_2| = 5$, then f_2 might contribute at

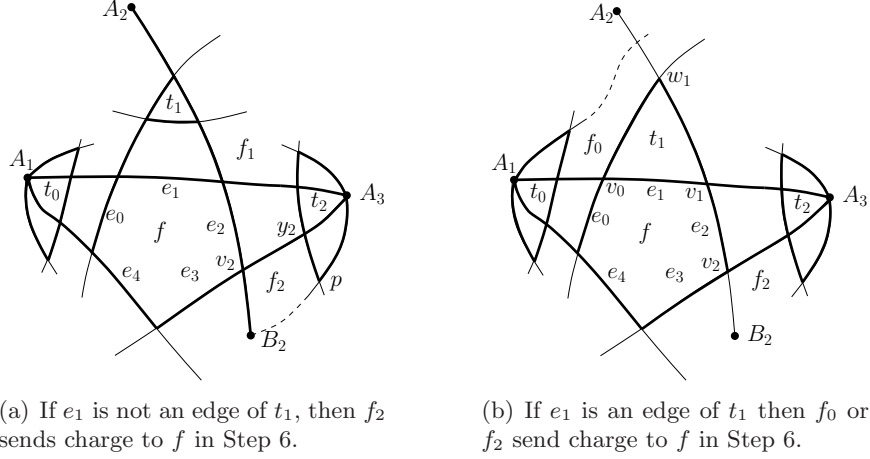


Figure 24: Subcase 2.3 in the proof of Lemma 2.24: f contributes $1/3$ units of charge to t_1 in Step 1, and $1/3$ units of charge to each of t_0 and t_2 in Step 3.

most $1/3$ units of charge through qx_3 and at most $1/6$ units of charge through pq . However, if f_2 contributes through one of these edges, then it does not contribute charge through q in Step 6. Therefore, f_2 sends at least $1/6$ units of charge to f in Step 6 and $ch_6(f) \geq 0$. If $|f_2| \geq 6$, then f sends at least $\frac{|f_2|-4-2/6-(|f_2|-3)/3}{|f_2|-3} \geq 1/6$ units of charge to f in Step 6.

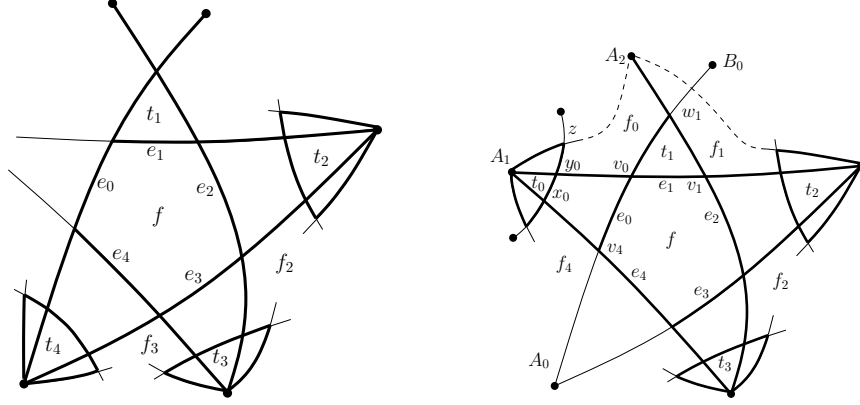
Finally, suppose that f sends $1/6$ units of charge through e_0 in Step 5. If there is a crossing point between A_2 and w_1 on (A_2, B_2) , then $B_2 \in V(f_2)$ and $|f_2| \geq 4$, and it is not hard to see that f_2 contributes at least $1/3$ units of charge to f in Step 6 (see Figure 23(b) for an illustration).

Otherwise, w_1A_2 is an edge in $M(G)$. Consider the face f_1 and note that its size is at least five. Let p be the other vertex of f_1 that is adjacent to w_1 but v_1 , and let q be the other vertex of f_1 that is adjacent to x_2 but v_1 . Refer to Figure 23(c) and observe that f_1 sends $1/3$ units of charge through w_1v_1 and at most $1/6$ units of charge through qx_2 , x_2v_1 , and w_1p . If $|f_1| = 5$, then f_1 cannot send charge through both pq and w_1p (because then the 1-triangle that gets the charge through pq has two neighbors such that each of them is incident to two original vertices). Therefore $ch_5(f_1) \geq 1/6$. Note that f_1 is not a vertex-neighbor of a 0-pentagon at x_2 , q , p and w_1 . Therefore, if $|f_1| = 5$ then f_1 sends at least $1/6$ units of charge to f in Step 6. If $|f_1| \geq 6$, then f sends at least $\frac{|f_1|-4-1/3-3/6-(|f_1|-4)/3}{|f_1|-4} \geq 1/6$ units of charge to f in Step 6. Thus, f ends up with a nonnegative charge.

Subcase 2.3: f sends $1/3$ units of charge through e_2 and e_0 in Step 3. It follows from Proposition 2.6 and the maximum number of crossings per edge that each of the wedges of t_2 and t_0 contain exactly one 0-quadrilateral.

Suppose first that e_1 is not an edge of t_1 and refer to Figure 24(a). Consider the face f_2 and observe that its size is at least four and it is incident to B_2 . Let p be the vertex that follows y_2 in a clockwise order of the vertices of f_2 . Note that f_2 does not contribute charge through v_2y_2 and contributes at most $1/6$ units of charge through its other edge that is incident to y_2 and through each of its edges that are incident to B_2 . Observe also that f_2 is not a vertex-neighbor of a 0-pentagon at B_2 , y_2 and p . Therefore f_2 contributes at least $\frac{|f_2|+1-4-1/3-3/6-(|f_2|-4)/3}{|f_2|-3} \geq 1/6$ units of charge to f in Step 6. By symmetry, so does f_4 and therefore $ch_6(f) \geq 0$.

Suppose now that e_1 is an edge of t_1 , and refer to Figure 24(b). Consider the face f_0 and observe that its size is at least five. If A_2 is a vertex of f_0 then it is easy to see that this face contributes at least $1/6$ units of charge to f in Step 6. Otherwise, there must be a crossing



(a) If f contributes through e_2 , e_3 and e_4 in Step 3, then it receives at least $1/3$ units of charge from each of f_2 and f_3 in Step 6.

(b) If f contributes through e_2 , e_3 and e_4 in Step 3, then it receives at least $1/3$ units of charge from f_2 and at least $1/6$ units of charge from f_0 .

Figure 25: Case 3 in the proof of Lemma 2.24: f sends $1/3$ units of charge to t_1 in Step 1 and $1/3$ units of charge to three 1-triangles in Step 3.

point between A_2 and w_1 on (A_2, B_b) and thus B_2v_2 is an edge of f_2 (see Figure 24(b)). In this case, as in the case that e_1 is not an edge of t_1 , it follows that f_2 contributes at least $1/6$ units of charge to f in Step 6. By symmetry, f also receives at least $1/6$ units of charge from f_1 or f_4 and therefore ends up with a nonnegative charge.

Subcase 2.4: f sends $1/3$ units of charge to t_3 and t_4 in Step 3. It follows from Proposition 2.6 and the maximum number of crossings per edge that each of the wedges of t_3 and t_4 contains exactly one 0-quadrilateral. Therefore, by Proposition 2.23 f receives at least $1/3$ units of charge from f_3 in Step 6 and thus $ch_6(f) \geq 0$.

Case 3: f contributes charge through three edges in Step 3. If these edges are consecutive on the boundary of f , say e_2 , e_3 , and e_4 , then it follows from Proposition 2.6 and the maximum number of crossings per edge that the wedge of each of the corresponding 1-triangles contains exactly one 0-quadrilateral (see Figure 25(a)). Therefore, by Proposition 2.23 each of f_2 and f_3 contributes at least $1/3$ units of charge to f and thus $ch_6(f) \geq 0$.

Suppose now that the three edges through which f contributes charge in Step 3 are not consecutive. By symmetry, we may assume that these edge are e_2 , e_3 and e_0 . Note that we may also assume that f does not contribute charge through e_4 in Step 3, for the case of f contributing in Step 3 through three consecutive edges was already considered. It follows from Proposition 2.6 and the maximum number of crossings per edge that the wedge of each of the 1-triangles t_2 , t_3 and t_0 contains exactly one 0-quadrilateral. Therefore, by Proposition 2.23 the face f_2 contributes at least $1/3$ units of charge to f in Step 6. Note that we only need to consider the case that f contributes $1/6$ units of charge through e_4 (recall that we assume that it does contribute $1/3$ units of charge through e_4).

Refer to Figure 25(b) and consider the face f_0 . Note that f_0 is incident to A_2 and that $|f_0| \geq 5$. The vertex-neighbor of f_0 at w_1 is f_1 . If f_1 is a 0-pentagon, then it is not hard to see that the only edge through which this 0-pentagon contributes $1/3$ units of charge is v_1w_1 , and therefore $ch_5(f_1) \geq 0$ and $f_1 \notin B(f_0)$. Denote by z the vertex of f_0 that follows y_0 in a clockwise order. Note that f_0 contributes $1/3$ units of charge through w_1v_0 , at most $1/6$ units of charge through y_0z , A_2w_1 and v_0y_0 . Therefore f_0 contributes at least $\frac{|f_0|+1-4-2/3-3/6-(|f_0|-4)/3}{|f_0|-3} \geq 1/6$ units of charge to f in Step 6. Thus, $ch_6(f) \geq 0$. This concludes Case 3 and the proof of Lemma 2.24. \square

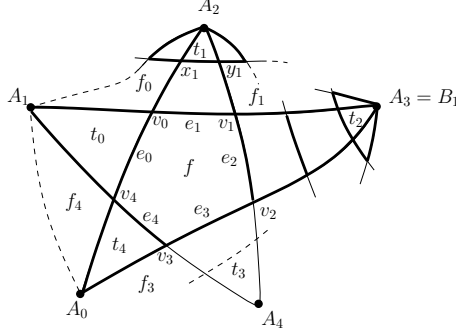


Figure 26: Subcase 1.1 in the proof of Lemma 2.25. If the wedge of t_2 contains two 0-quadrilaterals then t_0 receives charge from both of its neighbors in Step 4, and no charge from f .

Lemma 2.25. *Let f be a 0-pentagon such $ch_1(f) = 1$ and $ch_5(f) < 0$. Then $ch_6(f) \geq 0$.*

Proof. Suppose that $ch_1(f) = 1$ and $ch_5(f) < 0$. Then f contributes charge either to exactly two or to at least three 1-triangles in Step 3. We consider each of these cases separately.

Case 1: $ch_3(f) = 1/3$ and $ch_5(f) = -1/6$. That is, f contributes $1/3$ units of charge to two 1-triangles in Step 3 and contributes $1/6$ units of charge to three 1-triangles in Step 5. We may assume without loss of generality that in Step 3 either f contributes charge to t_1 and t_2 , or it contributes charge to t_1 and t_3 .

Subcase 1.1: f contributes charge to t_1 and t_2 in Step 3 and to t_3, t_4, t_0 in Step 5. Recall that by Proposition 2.6 e_1 cannot be an edge of t_1 and e_2 cannot be an edge of t_2 .

We claim that neither of the wedges of t_1 and t_2 contain two 0-quadrilaterals. Suppose, for contradiction, that the wedge of t_2 contains two 0-quadrilaterals and refer to Figure 26. Then, since (A_1, B_1) has four crossings it follows that e_0 is an edge of t_0 . Similarly, e_4 is an edge of t_4 . Note that f_4 is incident to A_0 and A_1 and therefore it contributes charge to t_4 in Step 4. Therefore the other neighbor of t_4 , f_3 , must not contribute charge to t_4 in Step 4 (otherwise f need not contribute charge to t_4 in Step 5). It follows that v_3A_4 and v_2A_4 are not edges of $M(G)$. Thus, the wedge of t_1 contains exactly one 0-quadrilateral and the size of f_0 is at least four.

Recall that t_0 receives charge from f_4 and from f , and therefore it should not receive charge from f_0 in Step 4, which implies that $|f_0| = 4$ and $ch_3(f_0) \leq 1/3$. However, if $|f_0| = 4$ then $ch_3(f_0) = 2/3$. Indeed, f_0 does not contribute charge to the 1-triangle that is a neighbor of t_1 in Step 3, since one neighbor of this 1-triangle is incident to two original vertices. Also, f_0 does not contribute charge through v_0x_1 to a 0- or 1-triangle in Step 1 or in Step 3, for otherwise f_1 must be 0-quadrilateral and so there must be an edge of G with more than four crossings (either (A_1, B_1) or the edge of G that contains x_1y_1). Thus, $ch_3(f_0) = 2/3$ and so f_0 contributes charge to t_0 in Step 4 (as does f_4), which implies that f does not contribute charge to t_0 in Step 5.

Therefore, each of the wedges of t_1 and t_2 contains exactly one 0-quadrilateral. Thus, by Proposition 2.23 the face f_1 contributes at least $1/3$ units of charge to f in Step 6, and so $ch_6(f) \geq 0$.

Subcase 1.2: f contributes charge to t_1 and t_3 in Step 3 and to t_2, t_4, t_0 in Step 5. Consider first the case that e_1 is an edge of t_1 and refer to Figure 27(a). Since the neighbors of t_1 should be 1-triangles, it follows that the wedges of t_2 and t_0 each contain exactly one 1-quadrilateral. It is impossible that e_3 is an edge of t_3 , as this would imply two parallel edges between A_2 and A_4 (note that B_2 and A_4 coincide). If the wedge of t_3 contains two

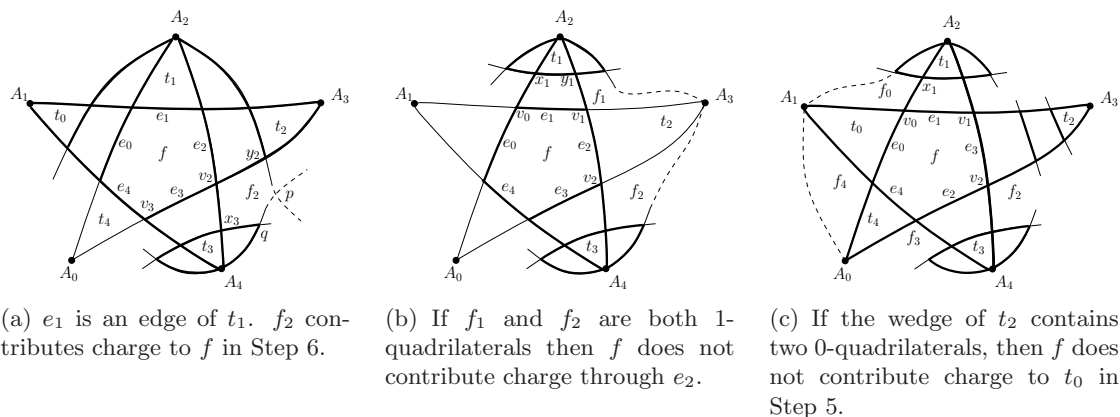


Figure 27: Subcase 1.2 in the proof of Lemma 2.25: f contributes $1/3$ units of charge in Step 3 through each of e_1 and e_3 .

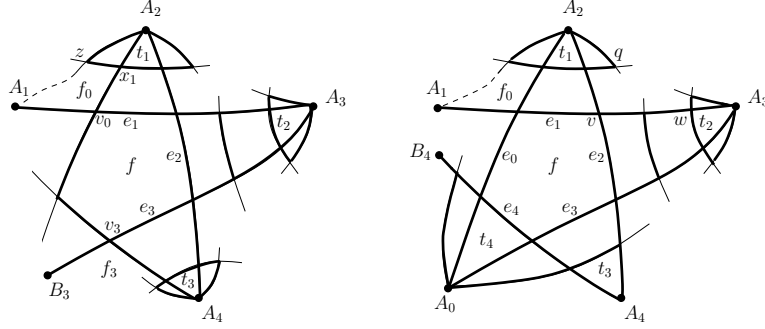
0-quadrilaterals, then there are more than four crossings on (A_1, A_4) . Therefore, the wedge of t_3 contains exactly one 0-quadrilateral.

Consider the face f_2 and refer to Figure 27(a). Observe that $|f_2| > 4$, for if $|f_2| = 4$ then G has two parallel edges between A_2 and A_4 . Let q, x_3, v_2, y_2 and p be (some of the) vertices of f_2 listed in clockwise order. Note that f_2 contributes at most $1/6$ units of charge through qx_3, x_3v_2, v_2y_2 and pq . Note also that f_2 is not a vertex-neighbor of a 0-pentagon at q, x_3 and y_2 . Suppose that $|f_2| = 5$. If f_2 contributes charge through y_2p or pq , then it is not a vertex-neighbor of a 0-pentagon at p . If f_2 contributes $1/3$ units of charge through y_2p , then it must be contributed to a 1-triangle whose vertices are y_2, p and A_3 , and whose neighbors are 1-triangles. Therefore, in such a case f_2 does not contribute charge through pq , since the face that shares this edge with pq cannot be a 0-quadrilateral (otherwise the edge of G that contains qx_3 would have five crossings), and if this face is a 1-triangle, then both of its neighbors are incident to two original vertices. Thus, in Step 6 f_2 contributes to f at least $1/6$ units of charge and f ends up with a nonnegative charge. If $|f_2| \geq 6$, then again it contributes at least $\frac{|f_2|-4-4/6-(|f_2|-4)/3}{|f_2|-3} \geq 1/6$ units of charge to f in Step 6.

The case that e_3 is an edge of t_3 is symmetric, therefore we assume now that e_1 is not an edge of t_1 and e_3 is not an edge of t_3 (refer to Figure 27(b)). Observe that the wedges of t_1 and t_3 must contain exactly one 0-quadrilateral each, for otherwise (A_2, A_4) has more than four crossings. This implies that the size of each of f_1 and f_2 is at least four. We claim that at least one of f_1 and f_2 is of size at least five. Indeed, suppose that both of them are of size four. Then it is impossible that both f_1 and f_2 are 0-quadrilaterals, since this implies two parallel edges between A_2 and A_4 . Assume without loss of generality that f_1 is not a 0-quadrilateral. If f_1 is a 1-quadrilateral, then A_3v_1 is an edge of t_2 , but then so is A_3v_2 . This means that the two neighbors of t_2 are 1-quadrilaterals, see Figure 27(b). Observe that these 1-quadrilaterals cannot contribute charge in Steps 1 and 3. Therefore, f_1 and f_2 contribute charge to t_2 in Step 4 and thus, f does not contribute charge to t_2 in Step 5.

Hence, we may assume without loss of generality that $|f_2| \geq 5$. If the wedge of t_2 contains no 0-quadrilaterals, that is $A_3 \in V(f_2)$, then it is not hard to see that f_2 contributes at least $1/6$ units of charge to f in Step 6. If the wedge of t_2 contains one 0-quadrilateral, then the situation is similar to the case that e_1 is an edge of t_1 (see Figure 27(a)), and thus f_2 sends at least $1/6$ units of charge to f in Step 6.

Note that the wedge of t_2 cannot contain two 0-quadrilaterals. Indeed, suppose it does and refer to Figure 27(c). Observe that in this case f_4 and f_0 are the neighbors of t_0 .



(a) Subcase 2.1: f contributes charge to t_1, t_2, t_3 in Step 3. If there are two 0-quadrilaterals in the wedge of t_2 , then f_3 and f_0 each contribute at least $1/3$ units of charge to f in Step 6.

(b) Subcase 2.2: f contributes charge to t_1, t_2, t_4 in Step 3. If there are two 0-quadrilaterals in the wedge of t_2 , then f_0 contributes at least $1/3$ units of charge to f in Step 6.

Figure 28: Illustrations for Case 2 in the proof of Lemma 2.25.

However, f_4 is incident to two original vertices (A_0 and A_1) and $|f_0| \geq 4$. It is not hard to see that if f_0 is a 1-quadrilateral, then it does not contribute any charge in Step 1 or 3. Therefore, $ch_4(f_0) = 2/3$ and so t_0 receives $1/6$ units of charge from each of f_0 and f_4 in Step 4, and no charge from f in Step 5.

Case 2: $ch_3(f) \leq 0$ and $ch_5(f) < 0$. In this case f contributes $1/3$ units of charge to at least three 1-triangles Step 3. By symmetry there are two subcases to consider.

Subcase 2.1: f contributes charge through each of e_1, e_2, e_3 in Step 3. Observe that none of the 1-triangles t_1, t_2, t_3 can share an edge (of $M(G)$) with f according to Proposition 2.6. Moreover, the wedges of t_1 and t_3 must contain exactly one 0-quadrilateral, for otherwise (A_2, A_4) has more than four crossings.

If there is only one 1-quadrilateral in the wedge of t_2 , then by Proposition 2.23 each of f_1 and f_2 contributes at least $1/3$ units of charge to f in Step 6 and so $ch_6(f) \geq 0$.

Therefore, assume that there are two 0-quadrilaterals in the wedge of t_2 and refer to Figure 28(a). It follows that A_1v_0 is an edge of f_0 and B_3v_3 is an edge of f_3 . Consider f_0 and observe that $|f_0| \geq 4$. Note also that f_0 does not contribute any charge through x_1v_0 , as this would imply that the edge of G that contains x_1y_1 has more than four crossings. Denote by z the other vertex (but v_0) that is adjacent to x_1 in f_0 , and observe that f_0 contributes at most $1/6$ units of charge through each of zx_1 and A_1v_0 .

If f_0 is a 1-quadrilateral (as in Figure 28(a)), then it does not contribute charge through A_1z , and therefore $ch_5(f_0) \geq 1/3$. In this case $B(f_0) = \{f\}$ and so f_0 sends $1/3$ units of charge to f in Step 6.

If $|f_0| \geq 5$ then consider the clockwise chain from A_1 to z , and observe that it contains $|f_0| - 3$ edges and at most $|f_0| - 4$ vertices through which f_0 sends charge in Step 6. Therefore, every face in $B(f_0)$ (including f) receives from f_0 in Step 6 at least $\frac{|f_0| - 4 + 1 - 2/6 - 1/3 - (|f_0| - 3)/3}{|f_0| - 3} \geq 1/3$ units of charge.

By symmetry f_3 also contributes at least $1/3$ units of charge to f in Step 6 and therefore f ends up with a nonnegative charge.

Subcase 2.2: In Step 3 f contributes charge through each of e_1, e_2, e_4 , and does not contribute charge through e_3 and e_0 (otherwise we are back in Subcase 2.1). Thus, $ch_5(f) \geq -1/3$. Observe that none of the 1-triangles t_1, t_2 can share an edge (of $M(G)$) with f according to Proposition 2.6. If the wedges of t_1 and t_2 each contain one 0-quadrilateral, then by

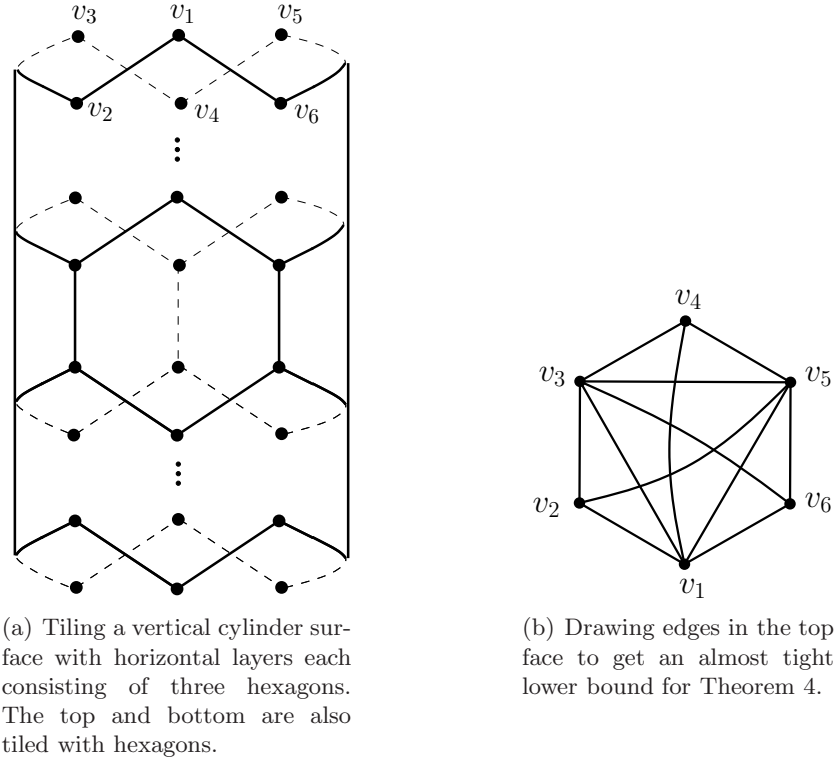


Figure 29: A lower bound construction.

Proposition 2.23 the face f_1 sends at least $1/3$ units of charge to f in Step 6 and thus $ch_6(f) \geq 0$.

Thus, assume without loss of generality that the wedge of t_2 contains two 0-quadrilaterals and refer to Figure 28(b). Since (A_0, A_3) contains at most four crossings, e_4 must be an edge of t_4 . It follows that $A_1 \neq B_4$, for otherwise, (A_1, A_3) would have more than four crossings. Therefore f does not contribute charge through e_0 and thus it must contribute charge through e_3 . Hence, $A_4 = B_2$ and the wedge of t_1 must contain exactly one 0-quadrilateral. It is not hard to see, as in Subcase 2.1, that f_0 contributes at least $1/3$ units of charge to f in Step 6. This concludes the proof of Lemma 2.25. \square

It follows from Proposition 2.12 and Lemmas 2.18, 2.19, 2.24, and 2.25 that the final charge of every face in $M(G)$ is nonnegative. Recall that the charge of every original vertex of G is $1/3$, and that the total charge is $4n - 8$. It follows that $2|E(G)|/3 = \sum_{A \in V(G)} \deg(v)/3 \leq 4n - 8$ and thus $|E(G)| \leq 6n - 12$.

A lower bound. To see that the bound in Theorem 4 is tight up to an additive constant we use the following construction of Pach et al. [21, Proposition 2.8]. For an integer $l \geq 2$, we set $n = 6l$ and tile a vertical cylindrical surface with $l - 1$ horizontal layers each consisting of three hexagonal faces that are wrapped around the cylinder. The top and bottom of the cylinder are also tiled with hexagonal faces. See Figure 29(a) for an illustration of this construction. Note that every vertex is adjacent to exactly three hexagons, except for three vertices of the top face (v_1, v_3, v_5 in Figure 29(a)) and three vertices of the bottom face that are adjacent to two hexagons. On the top and bottom hexagon we draw edges between every two vertices unless both of them are adjacent to exactly three hexagons (see Figure 29(b)). For the rest of the hexagons we draw all the possible edges. Thus, the degree of every vertex is 12, except for six vertices whose degree is 8, and six vertices whose degree is 10. Hence,

the number of edges is $(12(n - 12) + 10 \cdot 6 + 8 \cdot 6)/2 = 6n - 18$.

Remark. As noted in the Introduction, Theorem 4 actually holds in a more general setting where edges may intersect several times (including the case of two common endpoints), as long as there are no *balanced lenses*. A *lens* is formed by two (closed) edge-segments in a topological (multi)graph that intersect at their endpoints and at no other points: these edge-segments define a closed curve that divides the plane into two regions (bounded and unbounded), each of which is called a *lens*. If every edge of the topological (multi)graph crosses one of the edge-segments the same number of times it crosses the other edge-segment, then the lenses defined by these edge-segments are *balanced*. The proof of Theorem 4 can be modified to show that a topological (multi)graph with $n \geq 3$ vertices, at most four crossings per edge and no balanced lenses has at most $6n - 12$ vertices.³

3 Applications of Theorem 4

3.1 A better Crossing Lemma

Let G be a graph with $n > 2$ vertices and m edges. Recall that in a drawing of G with $\text{cr}(G)$ crossings G is drawn as a simple topological graph. Therefore, we may consider only such drawings.

The following linear bounds on the crossing number $\text{cr}(G)$ appear in [21] and [22].

$$\text{cr}(G) \geq m - 3(n - 2) \tag{1}$$

$$\text{cr}(G) \geq \frac{7}{3}m - \frac{25}{3}(n - 2) \tag{2}$$

$$\text{cr}(G) \geq 4m - \frac{103}{6}(n - 2) \tag{3}$$

$$\text{cr}(G) \geq 5m - 25(n - 2) \tag{4}$$

Using Theorem 4 we can obtain a similar bound, as stated in Theorem 5:

$$\text{cr}(G) \geq 5m - \frac{139}{6}(n - 2) \tag{5}$$

Proof of Theorem 5: If $m \leq 6(n - 2)$, then the statement holds by (3). Suppose now that $m > 6(n - 2)$ and consider a drawing of G with $\text{cr}(G)$ crossings. Remove an edge of G with the most crossings, and continue doing so as long as the number of remaining edges is greater than $6(n - 2)$. It follows from Theorem 4 that each of the $m - 6(n - 2)$ removed edges was crossed by at least 5 other edges at the moment of its removal. By (3), the number of crossings in the remaining graph is at least $4(6(n - 2)) - \frac{103}{6}(n - 2)$. Therefore, $\text{cr}(G) \geq 5(m - 6(n - 2)) + 4(6(n - 2)) - \frac{103}{6}(n - 2) = 5m - \frac{139}{6}(n - 2)$. \square

Using the new linear bound it is now possible to obtain a better Crossing Lemma, by plugging it into its probabilistic proof, as in [19, 21, 22].

Proof of Theorem 6: Let G be a graph with n vertices and $m \geq 6.95n$ edges and consider a drawing of G with $\text{cr}(G)$ crossings. Construct a random subgraph of G by selecting every vertex independently with probability $p = 6.95n/m \leq 1$. Let G' be the subgraph of G that is induced by the selected vertices. Denote by n' and m' the number of vertices and edges in G' , respectively. Clearly, $\mathbb{E}[n'] = pn$ and $\mathbb{E}[m'] = p^2m$. Denote by x' the number of crossing

³ Note that the construction above with the “missing diagonals” at the top and bottom hexagons shows that this bound is tight for infinitely many values of n .

in the drawing of G' inherited from the drawing of G . Then $\mathbb{E}[\text{cr}(G')] \leq \mathbb{E}[x'] = p^4 \text{cr}(G)$. It follows from Theorem 5 that $\text{cr}(G') \geq 5m' - \frac{139}{6}n'$ (note that this is true for any $n' \geq 0$), and this holds also for the expected values: $\mathbb{E}[\text{cr}(G')] \geq 5\mathbb{E}[m'] - \frac{139}{6}\mathbb{E}[n']$. Plugging in the expected values we get that $\text{cr}(G) \geq \left(\frac{5}{6.95^2} - \frac{139}{6 \cdot 6.95^3}\right) \frac{m^3}{n^2} = \frac{2000}{57963} \frac{m^3}{n^2} \geq \frac{1}{29} \frac{m^3}{n^2}$.

Consider now the case that $m < 6.95n$. Comparing the bounds (1)–(5) one can easily see that (1) is best when $3(n-2) \leq m < 4(n-2)$, (2) is best when $4(n-2) \leq m < 5.3(n-2)$, (3) is best when $5.3(n-2) \leq m < 6(n-2)$, and (5) is best when $6(n-2) \leq m$. If we consider the possible values of $m < 6.95n$ according to these intervals and use the best bound for each interval, then we get that $\text{cr}(G) \geq \frac{1}{29} \frac{m^3}{n^2} - \frac{35}{29}n$. \square

The new bound for the Crossing Lemma immediately implies better bounds in all of its applications. We recall three such improvements from [21] and [22]. Since the computations are almost verbatim to the proofs in [21], we omit them.

Corollary 3.1. *Let G be an n -vertex multigraph with m edges and edge multiplicity t . Then $\text{cr}(G) \geq \frac{1}{29} \frac{m^3}{tn^2} - \frac{35}{29}nt^2$.*

Corollary 3.2. *Let G be an n -vertex simple topological graph. If every edge of G is crossed by at most k other edges, for some $k \geq 2$, then G has at most $3.81\sqrt{kn}$ edges.*

Corollary 3.3. *The number of incidences between m lines and n points in the Euclidean plane is at most $2.44m^{2/3}n^{2/3} + m + n$.*

The previous best constant in the last upper bound was 2.5. It is known [22] that this constant should be greater than 0.42.⁴

3.2 Albertson conjecture

Recall that according to Albertson conjecture if $\chi(G) = r$ then $\text{cr}(G) \geq \text{cr}(K_r)$. This has been proven to hold for $r \leq 16$ [8, 9, 20]. The values $13 \leq r \leq 16$ were verified Barát and Tóth [9] who followed and refined the approach of Albertson et al. [8]. By using the new bound in Theorem 5 and following the same approach we can now verify Albertson conjecture for $r \leq 18$. For completeness we repeat the arguments from [9].

A graph G is r -critical if $\chi(G) = r$ and the chromatic number of every proper subgraph of G is less than r . Obviously, if H is a subgraph of G then $\text{cr}(H) \leq \text{cr}(G)$. Therefore, it is enough to prove Albertson conjecture for r -critical graphs. Recall also that it suffices to consider graphs with no subdivision of K_r . The next result shows that we may consider only graphs with at least $r + 5$ vertices.

Lemma 3.4 ([9, Corollary 11]). *An r -critical graph with at most $r + 4$ vertices contains a subdivision of K_r (and thus satisfies Albertson conjecture).*

The approach of [8] and [9] for proving Albertson conjecture is to plug lower bounds on the minimum number of edges in r -critical graphs into lower bounds on the crossing number and compare the results to an upper bound on $\text{cr}(K_r)$. By using the same method with the new bounds on the crossing number, we can verify Albertson conjecture for further values of r .

Let $f_r(n)$ be the minimum number of edges in an n -vertex r -critical graph. Since K_r is the only r -critical graph with r vertices we have $f_r(r) = r(r-1)/2$. Another trivial bound is $f_r(n) \geq n(r-1)/2$, because the degree of every vertex in an r -critical graph must be at

⁴ The constant 0.42 is the one stated in the literature (see, e.g., [10]), however, Adam Sheffer [3] recently observed that a known construction due to Elekes actually gives the better constant 0.629.

least $r - 1$. The study of $f_r(n)$ goes back to Dirac [12]. He proved that there is no r -critical graph on $r + 1$ vertices and that if $r \geq 4$ and $n \geq r + 2$ then

$$f_r(n) \geq n(r - 1)/2 + (r - 3)/2. \quad (6)$$

This was improved by Kostochka and Stiebitz [16] to

$$f_r(n) \geq n(r - 1)/2 + (r - 3), \quad (7)$$

when $n \neq 2r - 1$. Considering the case $n = 2r - 1$, Barát and Tóth [9] concluded

Lemma 3.5 ([9, Corollary 7]). *Let G be an n -vertex r -critical graph with m edges, such that $r \geq 4$. If G does not contain a subdivision of K_r then $m \geq n(r - 1)/2 + (r - 3)$.*

Gallai [14] found exact values of $f_r(n)$ for $6 \leq r + 2 \leq n \leq 2r - 1$:

$$f_r(n) = \frac{1}{2}(n(r - 1) + (n - r)(2r - n) - 2). \quad (8)$$

He also characterized the graphs obtaining this bound. His results yield:

Lemma 3.6 ([9, Corollary 5]). *Let G be an n -vertex r -critical graph with m edges, such that $6 \leq r + 2 \leq n \leq 2r - 1$. If G does not contain a subdivision of K_r then $m \geq \frac{1}{2}(n(r - 1) + (n - r)(2r - n) - 1)$.*

Instead of using the linear bound of Theorem 5 directly, we will use a more refined bound obtained from it using the probabilistic argument (as is done in [9]).

Lemma 3.7. *Let $cr(n, m, p) = \frac{5m}{p^2} - \frac{139n}{6p^3} + \frac{139}{3p^4} - \frac{6n^2(1-p)^{n-2}}{p^4}$. For every graph G with $n \geq 9$ vertices and m edges and every $0 < p \leq 1$ we have $cr(G) \geq cr(n, m, p)$.*

Proof. We will use the linear bound of Theorem 5, however it does not hold for $n \leq 2$. Therefore, for every graph G we define

$$cr'(G) = \begin{cases} cr(G) & \text{if } n \geq 3 \\ 5 & \text{if } n = 2 \\ 24 & \text{if } n = 1 \\ 47 & \text{if } n = 0 \end{cases}$$

Thus, for every graph G we have

$$cr'(G) \geq 5m - \frac{139}{6}(n - 2). \quad (9)$$

Let G be a graph with n vertices and m edges and let $0 < p \leq 1$. Consider a drawing of G with $cr(G)$ crossings. Construct a random subgraph of G by selecting every vertex independently with probability p . Let G' be the subgraph of G that is induced by the selected vertices. Denote by n' and m' the number of vertices and edges in G' , respectively. Consider the drawing of G' as inherited from the drawing of G , and let x' be the number of crossings in this drawing. Clearly, $\mathbb{E}[n'] = pn$, $\mathbb{E}[m'] = p^2m$, and $\mathbb{E}[x'] = p^4cr(G)$. From (9) and the linearity of expectation we get:

$$\begin{aligned} \mathbb{E}[x'] &\geq \mathbb{E}[cr(G')] - 5 \cdot \Pr(n' = 2) - 24 \cdot \Pr(n' = 1) - 47 \cdot \Pr(n' = 0) \\ &\geq 5p^2m - \frac{139}{6}pn + \frac{139}{3} - 5 \binom{n}{2} p^2(1-p)^{n-2} - 24np(1-p)^{n-1} - 47(1-p)^n \\ &\geq 5p^2m - \frac{139}{6}pn + \frac{139}{3} - 6n^2p^2(1-p)^{n-2}. \end{aligned}$$

Dividing by p^4 , the lemma follows. \square

Before proving Theorem 7, let us recall the best known upper bound on the crossing number of K_r [15]:

$$\text{cr}(K_r) \leq Z(r) = \frac{1}{4} \left\lfloor \frac{r}{2} \right\rfloor \left\lfloor \frac{r-1}{2} \right\rfloor \left\lfloor \frac{r-2}{2} \right\rfloor \left\lfloor \frac{r-3}{2} \right\rfloor. \quad (10)$$

Proof of Theorem 7: We follow the proof of Theorem 2 in [9]. Given r let G be an r -critical graph with n vertices and m edges. We assume that G does not contain a subdivision of K_r for otherwise we are done. By Lemma 3.4 we may assume that $n \geq r + 5$. Lemma 3.5 is used to get a lower bound on m , namely $m \geq (r-1)n/2 + (r-3)$. This bound is plugged into Lemma 3.7 and for an appropriate value of p we get a lower bound on $\text{cr}(G)$ that is greater than $Z(r)$ for $n \geq n'$. Then it remains to verify the conjecture for each n in the range $r + 5, \dots, n'$. This is done using a lower bound on m that we get from either Lemma 3.5 or Lemma 3.6 and picking p such that $\text{cr}(n, m, p) \geq Z(r)$. We will always have $n \geq 22$ and $p \geq 0.5$, therefore we may assume that

$$\text{cr}(n, m, p) \geq \frac{5m}{p^2} - \frac{139n}{6p^3} + \frac{139}{3p^4} - 0.05 \quad (11)$$

1. Suppose that $r = 17$ and let G be an n -vertex 17-critical graph with m edges. By (10) we have $\text{cr}(K_r) \leq 784$. It follows from Lemmas 3.4 and 3.5 that we may assume that $n \geq 22$ and $m \geq 8n + 14$. From (11) we have $\text{cr}(G) \geq \text{cr}(n, 8n + 14, 0.727) \geq 15.38n + 298.25$. Therefore, if $n \geq \frac{784-298.25}{15.38} \geq 31.58$ the conjecture holds. Since Barát and Tóth [9] have already verified Albertson conjecture for $r = 17$ and $n \leq 31$, we are done.

2. Suppose that $r = 18$ and let G be an n -vertex 18-critical graph with m edges. By (10) we have $\text{cr}(K_r) \leq 1008$. It follows from Lemmas 3.4 and 3.5 that we may assume that $n \geq 23$ and $m \geq 8.5n + 15$. From (11) we have $\text{cr}(G) \geq \text{cr}(n, 8.5n + 15, 0.69) \geq 18.74n + 361.88$. Therefore, if $n \geq \frac{1008-361.88}{18.74} \geq 34.47$ the conjecture holds. It remains to verify the conjecture for $n = 23, \dots, 34$. Table 1 (left) shows the lower bound on m for each n , the value of p we choose, and the corresponding lower bound on the crossing number that we get. Note that since we are interested in values of n such that $r + 2 \leq n \leq 2r - 1$, we may use Lemma 3.6 instead of the Lemma 3.5.

3. Suppose that $r = 19$ and let G be an n -vertex 19-critical graph with m edges. By (10) we have $\text{cr}(K_r) \leq 1296$. It follows from Lemmas 3.4 and 3.5 that we may assume that $n \geq 23$ and $m \geq 9n + 16$. From (11) we have $\text{cr}(G) \geq \text{cr}(n, 9n + 16, 0.66) \geq 22.72n + 427.78$. Therefore, if $n \geq \frac{1296-427.78}{22.72} \geq 38.21$ then the conjecture holds. It remains to verify the conjecture for $n = 24, \dots, 38$. Table 1 (right) shows the lower bound on m for each n , the value of p we choose, and the corresponding lower bound on the crossing number that we get.⁵

Therefore, the conjecture holds for $r = 19$ and every $n \notin \{36, 37, 38\}$. As is done in [9], we can handle the case $n = 36$ by using a result of Gallai [14], who proved that an r -critical graph with $2r - 2$ vertices is the *join*⁶ of two smaller critical graphs. Therefore, if $n = 36$ then G is the join of an r_1 -critical graph $G_1 = (V_1, E_1)$ and an r_2 -critical graph $G_2 = (V_2, E_2)$, such that $r_1 + r_2 = 19$. Let $n_i = |V_i|$ and $m_i = |E_i|$, for $i = 1, 2$. Then $n_1 + n_2 = 36$ and $m = m_1 + m_2 + n_1n_2$.

We assume without loss of generality that $r_1 \leq r_2$, and therefore have to consider the cases $r_1 = 1, \dots, 9$. Suppose that $r_1 = 1$, which implies that $G_1 = K_1$. If G_2 contains a subdivision of K_{18} then G contains a subdivision of K_{19} and we are done. Otherwise, by Lemma 3.5 we get $m_2 \geq 313$. Therefore, $m = n_1n_2 + m_2 \geq 348$ when $r_1 = 1$.

⁵The code of our calculations appears in Appendix A.

⁶A *join* of two graphs $G_1 = (V_1, E_1)$ and $G_2 = (V_2, E_2)$ consists of the two graphs and the edges $\{(v_1, v_2) \mid v_1 \in V_1, v_2 \in V_2\}$.

$r = 18, \text{cr}(K_{18}) \leq 1008$				$r = 19, \text{cr}(K_{19}) \leq 1296$			
n	m	p	$\lceil \text{cr}(n, m, p) \rceil$	n	m	p	$\lceil \text{cr}(n, m, p) \rceil$
23	228	0.555	1073				
24	240	0.556	1132	24	251	0.523	1321
25	251	0.560	1176	25	264	0.524	1397
26	261	0.567	1204	26	276	0.527	1455
27	270	0.576	1217	27	287	0.533	1495
28	278	0.586	1218	28	297	0.540	1518
29	285	0.599	1206	29	306	0.548	1527
30	291	0.613	1183	30	314	0.558	1520
31	296	0.628	1151	31	321	0.570	1501
32	300	0.646	1111	32	327	0.583	1471
33	303	0.665	1064	33	332	0.597	1430
34	305	0.686	1010	34	336	0.613	1380
				35	339	0.631	1322
				36	341	0.650	1259
				37	349	0.656	1269
				38	358	0.659	1292

Table 1: Lower bounds on the number of edges and crossing numbers for specific values of n for $r = 18$ (left) and $r = 19$ (right).

Since G_1 is r_1 -critical and G_2 is r_2 -critical we have $m \geq f_{r_1}(n_1) + f_{r_2}(n_2) + n_1 n_2$. Note that $n_1 = 36 - n_2 \leq 36 - r_2 = r_1 + 17$ and if $r_1 = 2$ then $G_1 = K_2$. A computer calculation using the trivial bound for $f_r(n)$ along with (7), reveals that $m \geq 348$ for every $r_1 = 2, \dots, 9$ and every $n_1 = r_1, \dots, r_1 + 17$ (ignoring cases where $n_1 = r_1 + 1$ or $n_2 = r_2 + 1$ since there are no such critical graphs). Therefore, we conclude that G has at least 348 edges. Picking $p = 0.635$ we get that $\text{cr}(G) \geq \text{cr}(36, 348, 0.635) = 1343 \geq \text{cr}(K_{19})$. \square

Recall that Barát and Tóth [9] showed that if Albertson conjecture is false, then the minimal counter-example is an r -critical graph with at least $r + 5$ vertices (Lemma 3.4). They also gave an upper bound of $3.57r$ on the number of vertices in such a minimal counter-example (improving a $4r$ bound due to Albertson et al. [8]). Using Theorem 5 we can improve upon this bound as well.

Lemma 3.8. *If G is an r -critical graph with $n \geq 3.03r$ vertices, then $\text{cr}(G) \geq \text{cr}(K_r)$.*

Proof. The proof is similar to the proof of Lemma 3 in [9]. We repeat it here for completeness, and because there is a small typo in the calculation in [9].

Let G be an r -critical graph with n vertices drawn in the plane with $\text{cr}(G)$ crossings. We may assume that $r \geq 19$, since for $r \leq 18$ the conjecture holds. If $n \geq 3.57r$ then it follows from [9] that $\text{cr}(G) \geq \text{cr}(K_r)$. Therefore, we assume that $n = \alpha r$ for some $3.03 \leq \alpha < 3.57$. Note that $n \geq 3r \geq 57$. Let $5 \leq k \leq n$ be an integer and let G_1, G_2, \dots, G_t , $t = \binom{n}{k}$, be all the (inherited drawings of) subgraphs induced by exactly k vertices in G . Denote by m_i the number of edges in G_i , and note that by Theorem 5 we have $\text{cr}(G_i) \geq 5m_i - \frac{139}{6}(k-2)$. Observe also that every crossing in G appears in $\binom{n-4}{k-4}$ subgraphs and every edge in G appears

in $\binom{n-2}{k-2}$ subgraphs. Finally, recall that $m \geq n(r-1)/2$ since G is r -critical. Thus we have,

$$\begin{aligned}
\text{cr}(G) &\geq \frac{1}{\binom{n-4}{k-4}} \sum_{i=1}^t \text{cr}(G_i) \geq \frac{1}{\binom{n-4}{k-4}} \sum_{i=1}^t \left(5m_i - \frac{139(k-2)}{6} \right) \\
&= 5m \frac{\binom{n-2}{k-2}}{\binom{n-4}{k-4}} - \frac{139(k-2)\binom{n}{k}}{6\binom{n-4}{k-4}} \\
&\geq \frac{5(r-1)n}{2} \frac{(n-2)(n-3)}{(k-2)(k-3)} - \frac{139n(n-1)(n-2)(n-3)}{6k(k-1)(k-3)} \\
&= \frac{n(n-2)(n-3)}{2(k-3)} \left(\frac{5(r-1)}{k-2} - \frac{139(n-1)}{3k(k-1)} \right) \\
&= \frac{\alpha^3 r(r - \frac{2}{\alpha})(r - \frac{3}{\alpha})}{2(k-3)} \left(\frac{5(r-1)}{k-2} - \frac{139(\alpha r - 1)}{3k(k-1)} \right) \\
&\geq \frac{\alpha^3 r(r-2)((r-3)+2)}{2(k-3)} \left(\frac{5(r-1)}{k-2} - \frac{139(r-1)(\alpha + \frac{\alpha-1}{r-1})}{3k(k-1)} \right) \\
&= \frac{\alpha^3 r(r-1)(r-2)(r-3)}{2(k-3)} \left(\frac{5}{k-2} - \frac{139\alpha}{3k(k-1)} \right) + h(\alpha, r, k),
\end{aligned}$$

where

$$\begin{aligned}
h(\alpha, r, k) &= \frac{\alpha^3 r(r-1)(r-2)}{2(k-3)} \left(\frac{10}{k-2} - \frac{139}{3k(k-1)} \left(2\alpha + 2\frac{\alpha-1}{r-1} + \frac{r-3}{r-1}(\alpha-1) \right) \right) \\
&\geq \frac{\alpha^3 r(r-1)(r-2)}{2(k-3)} \left(\frac{10}{k-2} - \frac{139}{3k(k-1)} \left(2\alpha + \frac{\alpha-1}{9} + (\alpha-1) \right) \right).
\end{aligned}$$

Suppose now that $3.17 \leq \alpha \leq 3.57$. Then for $k = 47 < n$ we have $h(\alpha, r, 47) \geq 0$ and therefore

$$\begin{aligned}
\text{cr}(G) &\geq \frac{\alpha^3}{2 \cdot 44} \left(\frac{5}{45} - \frac{139\alpha}{3 \cdot 47 \cdot 46} \right) r(r-1)(r-2)(r-3) \\
&\geq \frac{1}{64} r(r-1)(r-2)(r-3) \geq \text{cr}(K_r).
\end{aligned}$$

Suppose now that $3.05 \leq \alpha \leq 3.17$. Then for $k = 41 < n$ we have $h(\alpha, r, 41) \geq 0$ and therefore

$$\begin{aligned}
\text{cr}(G) &\geq \frac{\alpha^3}{2 \cdot 38} \left(\frac{5}{39} - \frac{139\alpha}{3 \cdot 41 \cdot 40} \right) r(r-1)(r-2)(r-3) \\
&\geq \frac{1}{64} r(r-1)(r-2)(r-3) \geq \text{cr}(K_r).
\end{aligned}$$

Finally, suppose that $3.03 \leq \alpha \leq 3.05$. Then for $k = 40 < n$ we have $h(\alpha, r, 40) \geq 0$ and therefore

$$\begin{aligned}
\text{cr}(G) &\geq \frac{\alpha^3}{2 \cdot 37} \left(\frac{5}{38} - \frac{139\alpha}{3 \cdot 40 \cdot 39} \right) r(r-1)(r-2)(r-3) \\
&\geq \frac{1}{64} r(r-1)(r-2)(r-3) \geq \text{cr}(K_r).
\end{aligned}$$

□

References

- [1] E. Ackerman, On the maximum number of edges in topological graphs with no four pairwise crossing edges, *Disc. Compu. Geometry*, 41 (2009), 365-375.
- [2] E. Ackerman and G. Tardos, On the maximum number of edges in quasi-planar graphs, *J. Combinatorial Theory, Ser. A.*, 114:3 (2007), 563-571.
- [3] A. Sheffer, Incidences: lower bounds (part 2), *Some Plane Truths*, Retrieved on July 20, 2014 from <http://adamsheffer.wordpress.com/2014/07/01/incidences-lower-bounds-part-2/>.
- [4] M. Aigner and G. Ziegler, *Proofs from the Book*, Springer-Verlag, Heidelberg, 2004.
- [5] K. Appel and W. Haken, Every planar map is four colorable. Part I. Discharging, *Illinois J. Math.*, 21 (1977), 429-490.
- [6] K. Arikushi, R. Fulek, B. Keszegh, F. Moric, and C.D. Tóth, Graphs that admit right angle crossing drawings, *Comput. Geom. Theory Appl.*, 45:7 (2012), 326-333.
- [7] M. Ajtai, V. Chvátal, M. Newborn, and E. Szemerédi, Crossing-free subgraphs, *Theory and Practice of Combinatorics*, North-Holland Math. Stud. 60, North-Holland, Amsterdam, 1982, 9-12.
- [8] M.O. Albertson, D.W. Cranston, and J. Fox, Crossings, colorings and cliques, *Elec. J. Combinatorics* 16 (2010), #R45.
- [9] J. Barát and G. Tóth, Towards the Albertson conjecture, *Elec. J. Combinatorics* 17:1 (2010), #R73.
- [10] P. Brass, W. Moser, J. Pach, *Research Problems in Discrete Geometry*, Springer, 2005.
- [11] P.A. Catlin, Hajós' graph-coloring conjecture: variations and counterexamples, *J. Combin. Theory Ser. B*, 26 (1979), 268-274.
- [12] G.A. Dirac, A theorem of R.L. Brooks and a conjecture of H. Hadwiger, *Proc. London Math. Soc.* 7 (1957), 161-195.
- [13] P. Erdős and S. Fajtlowicz, On the conjecture of Hajós, *Combinatorica*, 1 (1981), 141-143.
- [14] T. Gallai, Kritische Graphen II, *Publ. Math. Inst. Hungar. Acad. Sci.* 8 (1963), 373-395.
- [15] R.K. Guy, A combinatorial problem, *Nabla (Bulletin of the Malayan Mathematical Society)*, 7 (1960), 68-72.
- [16] A.V. Kostochka and M. Stiebitz, Excess in colour-critical graphs, in: Graph Theory and Combinatorial Biology, Balatonlelle (Hungary), 1996, *Bolyai Society, Mathematical Studies* 7, Budapest, 1999, 87-99.
- [17] S. Kurz and R. Pinchasi, Regular matchstick graphs, *American Mathematical Monthly*, 118:3 (2011), 264-267.
- [18] F.T. Leighton, *Complexity Issues in VLSI: Optimal Layouts for the Shuffle-Exchange Graph and Other Networks*, MIT Press, Cambridge, MA, 1983.
- [19] B. Montaron, An improvement of the crossing number bound, *J. Graph Theory*, 50:1 (2005), 43-54.
- [20] B. Oporowska and D. Zhao, Coloring graphs with crossings, *Disc. Math.*, 309:6 (2009), 2948-2951.
- [21] J. Pach, R. Radoičić, G. Tardos, G. Tóth, Improving the crossing lemma by finding more crossings in sparse graphs, *Disc. Compu. Geometry*, 36:4 (2006), 527-552.
- [22] J. Pach and G. Tóth, Graphs drawn with few crossings per edge, *Combinatorica*, 17:3 (1997), 427-439.
- [23] R. Radoičić and G. Tóth, The discharging method in combinatorial geometry and the Pach-Sharir conjecture, *Proc. Summer Research Conference on Discrete and Computational Geometry*, (J. E. Goodman, J. Pach, J. Pollack, eds.), Contemporary Mathematics, AMS, 453 (2008), 319-342.

A sage code of the calculations in the proof of Theorem 7

```

sage: Dirac(n,r)=((r-1)*n+r-3)/2
sage: KS(n,r)=((r-1)*n+2*r-6)/2
sage: Gallai(n,r)=((r-1)*n+(n-r)*(2*r-n)-2)/2
sage: BT_Gal(n,r)=Gallai(n,r)+0.5
sage: cr_prime(n,m,p)=5*m/p^2-139*n/(6*p^3)+139/(3*p^4)-0.05
sage: Z(r)=floor(r/2)*floor((r-1)/2)*floor((r-2)/2)*floor((r-3)/2)/4
sage: def proc1(r):
...     sols = solve([cr_prime(n,KS(n,r),p).diff(p)==0, cr_prime(n,KS(n,r),p)==Z(r)],n,p,
...     solution_dict=True)
...     for s in sols:
...         if (s[n].imag()==0 and s[p].imag()==0): # output only real solutions
...             print "p=",s[p].n(),"n=",s[n].n()
sage: proc1(17)
p= 0.727523979840676 ,n= 31.5627659574468
sage: cr_prime(n,KS(n,17),0.727)
15.3896636507376*n + 298.258502516192
sage: proc1(18)
p= 0.690689920492434 ,n= 34.4659498207885
sage: cr_prime(n,KS(n,18),0.69)
18.7463154231188*n + 361.887598221377
sage: def proc2(n,r):
...     if n <= 2*r-2:
...         m = ceil(BT_Gal(n,r))
...     else:
...         m = ceil(KS(n,r))
...     sols = solve(diff(cr_prime(n,m,p),p)==0, p, solution_dict=True)
...     best_p= round(sols[1][p],3)
...     best_cr = ceil(cr_prime(n,m,best_p))
...     str = '\t\t'+repr(n)+' & '+repr(m)+' & '+repr(best_p.n())+' & '+repr(best_cr) + '
...     '\\\
...     print str
sage: for n in range(23,35):
...     proc2(n,18)
23 & 228 & 0.555000000000000 & 1073 \\
24 & 240 & 0.556000000000000 & 1132 \\
25 & 251 & 0.560000000000000 & 1176 \\
26 & 261 & 0.567000000000000 & 1204 \\
27 & 270 & 0.576000000000000 & 1217 \\
28 & 278 & 0.586000000000000 & 1218 \\
29 & 285 & 0.599000000000000 & 1206 \\
30 & 291 & 0.613000000000000 & 1183 \\
31 & 296 & 0.628000000000000 & 1151 \\
32 & 300 & 0.646000000000000 & 1111 \\
33 & 303 & 0.665000000000000 & 1064 \\
34 & 305 & 0.686000000000000 & 1010 \\
sage: proc1(19)
p= 0.659831121833534 ,n= 38.2051696284330
sage: cr_prime(n,KS(n,19),0.66)
22.7249538544304*n + 427.789066289688
sage: for n in range(24,39):
...     proc2(n,19)
24 & 251 & 0.523000000000000 & 1321 \\
25 & 264 & 0.524000000000000 & 1397 \\
26 & 276 & 0.527000000000000 & 1455 \\
27 & 287 & 0.533000000000000 & 1495 \\
28 & 297 & 0.540000000000000 & 1518 \\
29 & 306 & 0.548000000000000 & 1527 \\
30 & 314 & 0.558000000000000 & 1520 \\
31 & 321 & 0.570000000000000 & 1501 \\
32 & 327 & 0.583000000000000 & 1471 \\
33 & 332 & 0.597000000000000 & 1430 \\
34 & 336 & 0.613000000000000 & 1380 \\
35 & 339 & 0.631000000000000 & 1322 \\
36 & 341 & 0.650000000000000 & 1259 \\
37 & 349 & 0.656000000000000 & 1269 \\
38 & 358 & 0.659000000000000 & 1292 \\
sage: def f(n,r): # lower bound for the number of edge in n-vertex r-critical graph
...     best=0
...     if n==r: # K_r

```

```

...         best=n*(n-1)/2
...     elif n>r+1:
...         best=ceil(n*(r-1)/2) # trivial
...         if (r>=4 and n>=r+2):
...             best=max(best,ceil(Dirac(n,r)))
...             if n!=2*r-1:
...                 best=max(best,ceil(KS(n,r)))
...             if n<=2*r-1:
...                 best=max(best,ceil(Gallai(n,r)))
...     return best
sage: # considering the case r=19, n=36
sage: min_m=348
sage: for r1 in range(2,10):
...     r2 = 19-r1
...     if r1==2:
...         max_n1=2
...     else:
...         max_n1=36-r2
...     for n1 in range(r1,max_n1+1):
...         n2 = 36-n1
...         if (n1!=r1+1 and n2!=r2+1):
...             curr = f(n1,r1)+f(n2,r2)+n1*n2
...             min_m = min(min_m,curr)
...
sage: print min_m
348

```