

AN ALGORITHM FOR COMPOSITION OF INVERSE PROBLEMS WITH EXCLUSIVE DISJUNCTION AS A LOGICAL STRUCTURE IN THE CONCLUSION

JULIA NINOVA AND VESSELKA MIHOVA

ABSTRACT. By suitable examples we illustrate an algorithm for composition of inverse problems.

1. INTRODUCTION

Let t, p_1, p_2, r be given statements. We deal with a generalization of the formal logical rule [3]

$$(p_1 \rightarrow r) \wedge (p_2 \rightarrow r) \Leftrightarrow p_1 \vee p_2 \rightarrow r.$$

In [1] and [2] we prove, clarify and use the equivalence

$$(*) \quad (t \wedge p_1 \rightarrow r) \wedge (t \wedge p_2 \rightarrow r) \Leftrightarrow t \wedge (p_1 \vee p_2) \rightarrow r.$$

It gives an algorithm for composition of inverse problems with a given logical structure that is based on the steps below.

- Formulating and proving *generating problems* with logical structures of the statements as those at the left hand side of (*).
- Formulating a problem with a logical structure of the statement $t \wedge (p_1 \vee p_2) \rightarrow r$.
- Formulating an *inverse problem* with a logical structure $t \wedge r \rightarrow p_1 \vee p_2$.

A technology for composition of equivalent and inverse problems is appropriate for training of mathematics students and teachers.

In what follows we illustrate the above algorithm by two groups of problems.

2. GROUP OF PROBLEMS I

The logical statements used for the formulation of the problems in this group are

t : { In the plane are given a $\triangle ABC$, a straight line $g \ni C$ and an arbitrary point $M \in g, M \neq C$. }

p_1 : { The straight line g is a median in $\triangle ABC$. }

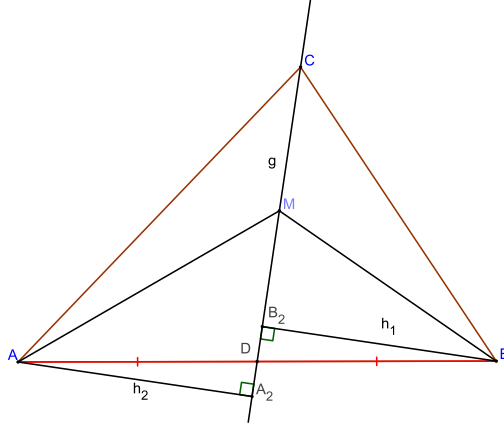
p_2 : { $g \parallel AB$ }

r : { $S_{\triangle AMC} = S_{\triangle BMC}$ }

Problem 2.1. Let in a $\triangle ABC$ the straight line g passes through C and is a median. Prove that for any point M on g ($M \neq C$) the triangles $\triangle AMC$ and $\triangle BMC$ are equal in area.

1991 Mathematics Subject Classification. Primary 51F20, Secondary 51M15.

Key words and phrases. Inverse problems, logical structure, exclusive disjunction.



This problem has a logical structure $t \wedge p_1 \rightarrow r$.

Proof. Since the straight line g passes through C and is a median in a $\triangle ABC$, then $AB \cap g \neq \emptyset$. Let $AB \cap g = D$ (fig. 1). Hence $AD = BD$.

Let h_1 and h_2 be the altitudes in $\triangle BDC$ and $\triangle ADC$ through the vertices B and A respectively. Then

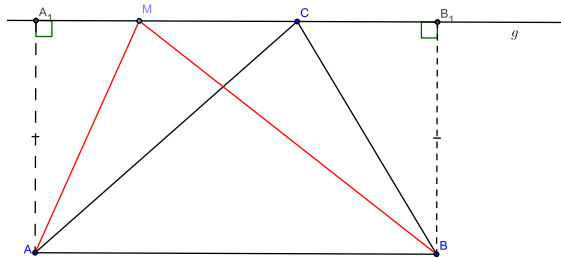
$$\frac{S_{\triangle AMC}}{S_{\triangle BMC}} = \frac{CM \cdot h_2}{CM \cdot h_1} = \frac{h_2}{h_1} = \frac{MD \cdot h_2}{MD \cdot h_1} = \frac{S_{\triangle AMD}}{S_{\triangle BMD}} = 1.$$

□

Problem 2.2. Let in $\triangle ABC$ the straight line g passes through C and is parallel to the straight line AB . Prove that for any point M on g ($M \neq C$) the triangles $\triangle AMC$ and $\triangle BMC$ are equal in area.

This problem has a logical structure $t \wedge p_2 \rightarrow r$.

The proof follows immediately from Figure 2.



According to (*) and the *generating problems* 2.1 and 2.2, we can formulate a problem with a logical structure $t \wedge (p_1 \vee p_2) \rightarrow r$.

Since the statements p_1 and p_2 are mutually exclusive, then $p_1 \vee p_2 \Leftrightarrow p_1 \vee\vee p_2$. Under this condition problems with structures $t \wedge (p_1 \vee p_2) \rightarrow r$ and $t \wedge (p_1 \vee\vee p_2) \rightarrow r$ are equivalent.

We formulate and solve the following inverse problem with a logical structure

$$t \wedge r \rightarrow p_1 \vee\vee p_2.$$

Problem 2.3. Let the point M in the plane of $\triangle ABC$ is such that $\triangle AMC$ and $\triangle BMC$ exist and are equal in area. Prove that the straight line CM either cuts the side AB of $\triangle ABC$ at its middle point or is parallel to AB .

Proof. The triangles $\triangle AMC$ and $\triangle BMC$ have a common side CM and are equal in area. Hence the altitudes to their common side are equal, i. e. the vertexes A and B are equidistant from CM .

There are two possibilities for the location of the points A and B with respect to the straight line CM .

- If A and B are situated at opposite sides of CM (fig. 1), then the point $D = AB \cap CM$ is the middle point of the side AB ($\triangle AA_2D \cong \triangle BB_2D$) and the straight line CM is the median of $\triangle ABC$ through C .
- If A and B are situated at one and the same side of CM (fig. 2), then they lie on a straight line parallel to CM , i. e. $CM \parallel AB$.

□

3. GROUP OF PROBLEMS II

The logical statements used for the formulation of the problems in this group are

$t : \{ \text{Let } ABCD \text{ be a quadrilateral with } AC \cap BD = O. \}$

$p_1 : \{ AB \parallel CD \}$

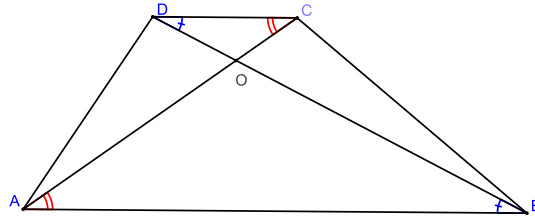
$p_2 : \left\{ \frac{AB}{CD} = 1 \right\}$

$r : \left\{ \frac{AO}{OC} = \frac{BO}{OD} = \lambda \right\}$

Problem 3.1. Let $ABCD$ be a trapezium with $AC \cap BD = O$. Prove that

$$\frac{AO}{OC} = \frac{BO}{OD} = \lambda, \lambda \neq 1.$$

This problem has a logical structure $t \wedge (p_1 \wedge \overline{p_2}) \rightarrow r$.



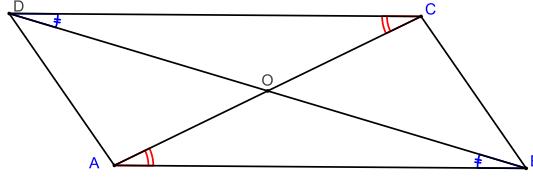
Proof. Since $\triangle AOB \sim \triangle COD$ (fig. 3) and $AB \neq CD$, then

$$\frac{AO}{OC} = \frac{BO}{OD} = \frac{AB}{CD} = \lambda, \lambda \neq 1.$$

□

Problem 3.2. Let $ABCD$ be a parallelogram with $AC \cap BD = O$. Prove that

$$\frac{AO}{OC} = \frac{BO}{OD} = \lambda, \lambda = 1.$$



This problem has a logical structure $t \wedge (p_1 \wedge p_2) \rightarrow r$.

Proof. Since $AB = CD$, the proportion

$$\frac{AO}{OC} = \frac{BO}{OD} = \frac{AB}{CD} = \lambda, \lambda = 1$$

follows from the congruence $\triangle AOB \cong \triangle COD$ (fig. 4). □

According to (*) and the *generating problems* 3.1 and 3.2, we can formulate a problem with a logical structure $t \wedge ((p_1 \wedge \overline{p_2}) \vee (p_1 \wedge p_2)) \rightarrow r$.

Since the notion trapezium is not generic with respect to the notion parallelogram, then problems with logical structures $t \wedge ((p_1 \wedge \overline{p_2}) \vee (p_1 \wedge p_2)) \rightarrow r$ and $t \wedge ((p_1 \wedge \overline{p_2}) \vee (p_1 \wedge p_2)) \rightarrow r$ are equivalent.

We formulate and solve the following inverse problem with a logical structure

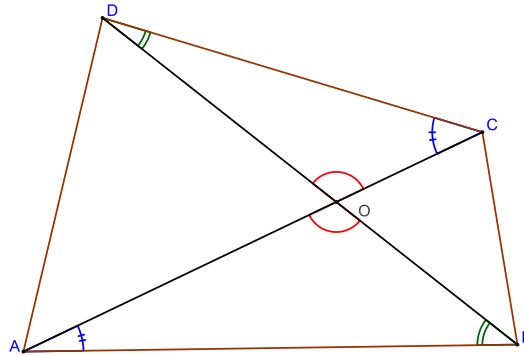
$$t \wedge r \rightarrow (p_1 \wedge \overline{p_2}) \vee (p_1 \wedge p_2).$$

Problem 3.3. *Let $ABCD$ be a quadrilateral with $AC \cap BD = O$. Prove that if*

$$\frac{AO}{OC} = \frac{BO}{OD} = \lambda,$$

then the quadrilateral is either a trapezium or a parallelogram.

Proof. From the given proportionality and the equality $\angle AOB = \angle COD$ we conclude that $\triangle AOB \sim \triangle COD$. Hence $\frac{AB}{CD} = \lambda$, $\angle OAB = \angle OCD$ and $\angle OBA = \angle ODC$,



which implies the straight lines AB and CD are parallel.

There are two possibilities for the ratio coefficient λ : either $\lambda \neq 1$ or $\lambda = 1$.

- If $\lambda \neq 1$ the quadrilateral $ABCD$ is a trapezium.
- If $\lambda = 1$ the quadrilateral $ABCD$ is a parallelogram.

□

REFERENCES

- [1] J. Ninova, V. Mihova (2014), *Composition of inverse problems with a given logical structure*, to appear in *Annuaire Univ. Sofia, Fac. Math. Inf.*
- [2] V. Mihova, J. Ninova (2014), *On a generalization of criteria A and D for congruence of triangles*, to appear in *Annuaire Univ. Sofia, Fac. Math. Inf.*
- [3] A. A. Stoljar (1971), *Logicheskoe vvedenie v matematiki*, Vishejskaja shkola, Minsk.

FACULTY OF MATHEMATICS AND INFORMATICS UNIVERSITY OF SOFIA E-MAIL: JULIANINOVA@HOTMAIL.COM

FACULTY OF MATHEMATICS AND INFORMATICS UNIVERSITY OF SOFIA E-MAIL: MIHOVA@FMI.UNI-SOFIA.BG