

Systematic equation formulation for simulation of power electronic circuits using explicit methods

Mahesh B. Patil

Department of Electrical Engineering, Indian Institute of Technology Bombay

June 19, 2024

Abstract

Use of explicit integration methods for power electronic circuits with ideal switch models significantly improves simulation speed. The PLECS package [1] has effectively used this idea; however, the implementation details involved in PLECS are not available in the public domain. Recently, a basic framework, called the “ELEX” scheme, for implementing explicit methods has been described [2]. A few modifications of the ELEX scheme for efficient handling of inductors and switches have been presented in [3]. In this paper, the approach presented in [3] is further augmented with robust schemes that enable systematic equation formulation for circuits involving switches, inductors, and transformers. Several examples are presented to illustrate the proposed schemes.

1 Introduction

Explicit integration methods are in general not suitable for circuit simulation since they become unstable when the circuit time constants are small compared to the simulator time step. However, for several power electronic circuits, it is possible to avoid small time constants – and thereby circumvent the above limitation – by treating the switches in an idealised manner, viz., zero resistance when the switch is closed and infinite resistance when the switch is open. This approach leads to different circuits, each corresponding to a specific set of switch states. Simulation is speeded up substantially since each of the circuits is linear, and the circuit matrix inverse needs to be computed only once for any given switch configuration. This basic idea has been used in the PLECS simulator [1], leading to a significant speed advantage over conventional circuit simulators such as SPICE [4] and its variants. Owing to the commercial nature of PLECS, however, the implementation details

have not been shared in the public domain.

Recently, the “ELEX” scheme was presented [2] to address the basic issues involved in implementing explicit methods for power electronic circuit simulation. It was pointed out in [3] that the treatment of switches and inductors presented in [2] has serious limitations, and an alternative approach involving Element Stamp (ES) and Circuit Topology Dependent (CTD) equations was described. In this paper, we point out that, the treatment of switches and inductors in the ES/CTD approach presented in [3] needs to be augmented. We also discuss transformer equations in the context of the ES/CTD approach. Furthermore, we present systematic procedures to address the various challenges associated with assembling circuit equations using the ELEX scheme.

The paper is organised as follows. In Sec. 2, we discuss assembly of equations related to switches and also the special case of isolation within a circuit due to switches in the off state. In Sec. 3, we discuss some issues related to inductor circuits. We present a systematic approach to check if two inductors are connected in series. We also give a simple procedure to check if an inductor has a conduction path. In Sec. 4, we discuss equations related to transformers, and present a general scheme for systematic formulation of equations for circuits involving both transformers and inductors. Finally, in Sec. 5, we present the conclusions of this work.

2 Switch circuits

In the ELEX scheme [3] we write the ES equations for a switch S as

$$\begin{aligned} i_S &= 0 && \text{if } S \text{ is off,} \\ V_S &= V_{\text{on}} && \text{if } S \text{ is on,} \end{aligned} \quad (1)$$

where V_{on} is the voltage drop across the switch when it is conducting. Note that V_S and i_S in Eq. 1 are auxiliary variables which represent the switch voltage and switch current, respectively. They need to be related to the circuit currents and voltages using the CTD equations, which will vary from circuit to circuit. An example with switch branches was considered in [3] to illustrate this approach. However, there are situations which require additional considerations in handling the switch equations. In the following, we illustrate these situations through representative examples.

2.1 Switch loops

In the ELEX scheme presented in [3], an example with parallel switch branches was considered, and consistent sets of equations were presented for different switch configurations. In some circuits, switches form a closed loop, but without any switch branches appearing in parallel, and therefore a more generalised approach is called for. The following examples illustrate this point.

2.1.1 Switch circuits: example 1

Consider the circuit shown in Fig. 1 in which S_1, S_3, S_5, S_4 form a loop of switches. If all switches are on, we get the circuit shown in Fig. 2. The branch currents assigned by the simulator are shown in capital letters (I_0, I_1 , etc) in Fig. 2 and also in other figures in the paper. Each switch has nodes p and n , with $V_S = V(p) - V(n)$, where $V(p)$ and $V(n)$ are node voltages with respect to a reference node (denoted by 0 in Fig. 2). The switch current i_S in Eq. 1 is defined to be positive if the switch carries a current from the p node to the n node. The p node of each switch is shown with a + sign. For simplicity, we will consider V_{on} to be 0 for all switches. Also, we will denote V_S and i_S for switch S_1 by V_{S1} and i_{S1} , respectively (and similarly for other switches).

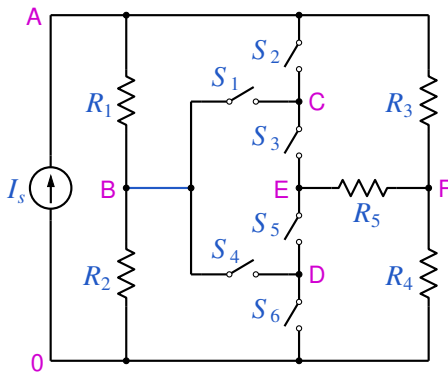


Figure 1: Switch circuit example 1.

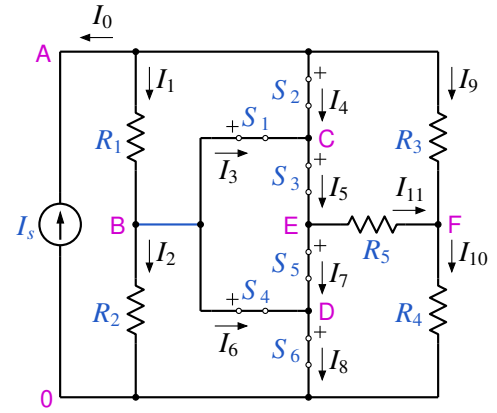


Figure 2: Circuit of Fig. 1 with all switches on.

The ES equations for the switches are

$$V_{S1} = 0, \quad (2)$$

$$V_{S3} = 0, \quad (3)$$

$$V_{S5} = 0, \quad (4)$$

$$V_{S4} = 0, \quad (5)$$

$$V_{S2} = 0, \quad (6)$$

$$V_{S6} = 0. \quad (7)$$

In addition, we would write the switch voltage definitions (SVD) as

$$V_{S1} = V_B - V_C, \quad (8)$$

$$V_{S3} = V_C - V_E, \quad (9)$$

$$V_{S5} = V_E - V_D, \quad (10)$$

$$V_{S4} = V_B - V_D, \quad (11)$$

$$V_{S2} = V_A - V_C, \quad (12)$$

$$V_{S6} = V_D. \quad (13)$$

Eqs. 2-4 and Eqs. 8-10 give $V_B = V_C = V_D = V_E$, and Eq. 11 reduces to $V_{S4} = 0$. However, V_{S4} is already equated to zero by Eq. 5. Clearly, we need to drop one equation from Eqs. 8-11 so that the overall system of equations is solvable. To this end, we first need to identify the loop S_1 - S_3 - S_5 - S_4 , given the netlist for the circuit, i.e., a description of how the various elements are connected. For this purpose, we will use the ‘‘Switch Loop’’ (SL) algorithm consisting of the following steps.

1. We call an on switch a ‘‘loop candidate’’ if it is connected to on switches at both ends. In the circuit of Fig. 2, the loop candidates are S_1, S_3, S_4, S_5 . Note that the p node of switch S_2 (node A in the figure) is not connected to another on switch, and therefore S_2 is not a loop candidate. Similarly, S_6 is not a loop candidate.

2. Start with one of the candidate nodes, and make a “switch tree”. For the circuit of Fig. 2, if we start with node B, we get the switch tree shown in Fig. 3. From node B, we have two paths: (a) S_1 -C, i.e., path to node C through S_1 , (b) S_4 -D, i.e., path to node D through S_4 . From node C, we have only one path, viz., S_3 -E. Note that, from node C, S_2 -A is not a possible path since S_2 has not been marked as a loop candidate in step 1. Also, from node C, we do not consider the path S_1 -B since S_1 has already been traversed.
3. We continue this process until we reach the starting node (B in this case). Any branch reaching node B gives us one loop, and the switches involved in that loop can be found by tracing back to the root.

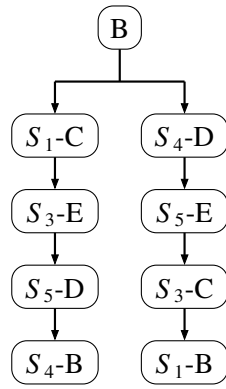


Figure 3: Switch tree for identifying switch loops in the circuit of Fig. 2, starting with node B.

From Fig. 3, we find that there are two loops starting from node B: S_1 - S_3 - S_4 - S_5 (the left branch in the figure) and S_4 - S_5 - S_3 - S_1 (the right branch). In this case, the two branches involve the same set of switches, so we conclude that there is only one loop. We can now drop the SVD for one of the switches, say, Eq. 11.

The complete set of equations for the circuit of Fig. 2 includes Eqs. 2-10, 12, 13, and the following additional equations.

$$I_0 + I_1 + I_4 + I_9 = 0, \quad (14)$$

$$-I_1 + I_2 + I_3 + I_6 = 0, \quad (15)$$

$$-I_3 - I_4 + I_5 = 0, \quad (16)$$

$$-I_5 + I_7 + I_{11} = 0, \quad (17)$$

$$-I_6 - I_7 + I_8 = 0, \quad (18)$$

$$-I_9 + I_{10} - I_{11} = 0, \quad (19)$$

$$i_{S1} = I_3, \quad (20)$$

$$i_{S2} = I_4, \quad (21)$$

$$i_{S3} = I_5, \quad (22)$$

$$i_{S4} = I_6, \quad (23)$$

$$i_{S5} = I_7, \quad (24)$$

$$i_{S6} = I_8, \quad (25)$$

$$I_0 = -I_s, \quad (26)$$

$$V_A - V_B = I_1 R_1, \quad (27)$$

$$V_B = I_2 R_2, \quad (28)$$

$$V_A - V_F = I_9 R_3, \quad (29)$$

$$V_F = I_{10} R_4, \quad (30)$$

$$V_E - V_F = I_{11} R_5, \quad (31)$$

$$i_{S4} - i_{S5} - i_{S3} - i_{S1} = 0. \quad (32)$$

Eqs. 14-19 are from KCL, Eqs. 20-25 assign the switch currents for on switches to the respective branch currents, and Eqs. 26-31 are the ES equations.

Eq. 32 comes from application of KVL around the loop B-C-E-D-B. If we imagine switch S_1 to be represented by a resistance R_{on} (see Fig. 4), the voltage drop across S_1 is $i_{S1} R_{on}$. By adding the drops across the four switches in the loop, we get

$$R_{on} i_{S4} - R_{on} i_{S5} - R_{on} i_{S3} - R_{on} i_{S1} = 0, \quad (33)$$

which reduces to Eq. 32.

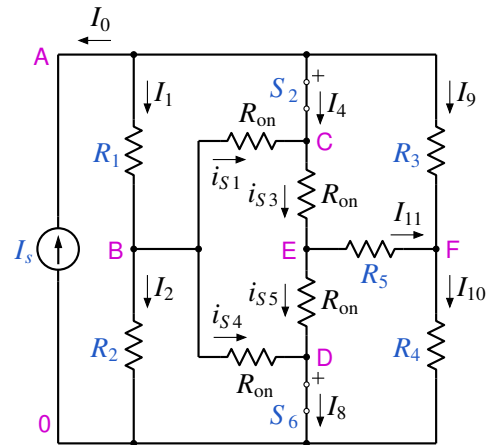


Figure 4: Circuit of Fig. 2 with loop switches with R_{on} .

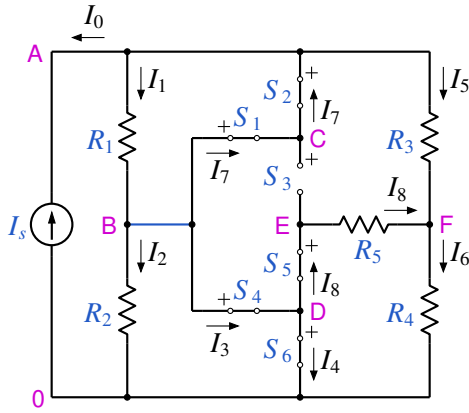


Figure 5: Circuit of Fig. 1 with S_3 off and all other switches on.

2.1.2 Switch circuits: example 2

Consider the circuit of Fig. 1 again with S_3 open and all other switches closed, as shown in Fig. 5. It is clear from the figure that the S_1 - S_3 - S_5 - S_4 loop is broken since S_3 is now replaced with an open circuit. As the first step of the SL algorithm, we identify S_1 , S_4 as the loop candidates. Starting with this set, we perform “passes” as follows. In the first pass, we observe that one of the on switches S_1 is connected to, viz., S_2 , is not a loop candidate. We therefore remove S_1 from the candidate set, leaving only S_4 . In the second pass, we rule out S_4 as well since one of the on switches it connects to, viz., S_1 , is not a candidate. That leaves an empty candidate set, and we conclude that no switch loop is possible in this example.

We now list the equations related to the circuit of Fig. 5, skipping the ES equations for R_1 - R_5 and I_s (which are similar to those seen in Sec. 2.1.1).

$$V_{S1} = 0, \quad (34)$$

$$V_{S2} = 0, \quad (35)$$

$$V_{S4} = 0, \quad (36)$$

$$V_{S5} = 0, \quad (37)$$

$$V_{S6} = 0, \quad (38)$$

$$i_{S3} = 0. \quad (39)$$

$$I_0 + I_1 + I_5 - I_7 = 0, \quad (40)$$

$$-I_1 + I_2 + I_3 + I_7 = 0, \quad (41)$$

$$-I_3 + I_4 + I_8 = 0, \quad (42)$$

$$-I_5 + I_6 - I_8 = 0, \quad (43)$$

$$V_{S1} = V_B - V_C, \quad (44)$$

$$V_{S2} = V_A - V_C, \quad (45)$$

$$V_{S4} = V_B - V_D, \quad (46)$$

$$V_{S5} = V_E - V_D, \quad (47)$$

$$V_{S6} = V_D, \quad (48)$$

$$i_{S1} = I_7, \quad (49)$$

$$i_{S2} = -I_7, \quad (50)$$

$$i_{S4} = I_3, \quad (51)$$

$$i_{S5} = -I_8, \quad (52)$$

$$i_{S6} = I_4, \quad (53)$$

$$V_{S3} = V_C - V_E. \quad (54)$$

Eqs. 34-39 are the switch ES equations, Eqs. 40-43 are the KCL equations, Eqs. 44-48 are the SVDs for on switches, Eqs. 49-53 are the branch current assignments for the on switches, and Eq. 54 is the SVD for the off switch S_3 .

2.1.3 Switch circuits: example 3

Consider the circuit shown in Fig. 6. When all switches are on, we have multiple switch loops, viz., S_1 - S_3 - S_2 , S_1 - S_6 - S_5 - S_4 , and S_2 - S_3 - S_6 - S_5 - S_4 (see Fig. 7). Note that this case has also been considered in [3] (Sec. 3.1, example 1) as an example of three switch branches in parallel. Here, we will use the more general approach of Sec. 2.1.1 to arrive at the circuit equations.

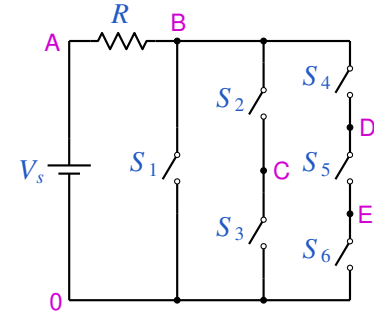


Figure 6: Switch circuit example 3.

The SL algorithm starts with identifying potential candidates. Since each switch in Fig. 7 is connected at both ends to on switches, the candidate set consists of all switches S_1 - S_6 . The switch tree starting with node B is shown in Fig. 8. We can identify six loops from the tree, but some of them are identical, e.g., S_2 - S_3 - S_1 and S_1 - S_3 - S_2 . By dropping the repeated loops, we end up with three distinct loops, viz., S_1 - S_3 - S_2 , S_1 - S_6 - S_5 - S_4 , and S_2 - S_3 - S_6 - S_5 - S_4 .

Some caution needs to be exercised in writing the SVD equations since the loops overlap. For example, loops

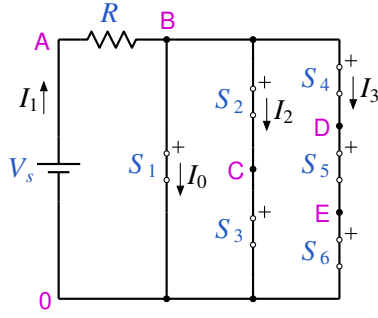


Figure 7: Circuit of Fig. 6 with all switches on.

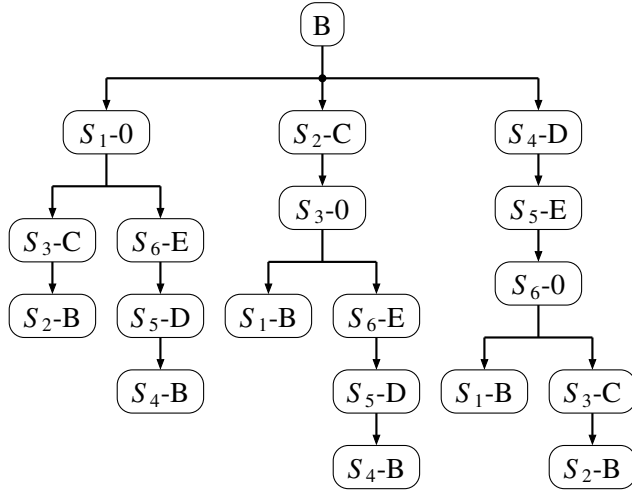


Figure 8: Switch tree for identifying switch loops in the circuit of Fig. 7, starting with node B.

S_1 - S_3 - S_2 and S_1 - S_6 - S_5 - S_4 have S_1 in common. As in the example of Sec. 2.1.1, writing the SVD equations for all switches will result in an unsolvable system of equations. We need to drop some of the SVDs such that each of the three loops has at least one SVD missing. The following set of equations is one such possibility.

$$V_{S1} = V_B, \quad (55)$$

$$V_{S2} = V_B - V_C, \quad (56)$$

$$V_{S4} = V_B - V_D, \quad (57)$$

$$V_{S5} = V_D - V_E. \quad (58)$$

Next, we write KVL equations for the switch loops as discussed in Sec. 2.1.1. However, we need to drop one of the three loops in order to get a solvable system of equations. For example, we may drop the loop S_2 - S_3 - S_6 - S_5 - S_4 and write the following equations for loops S_1 - S_3 - S_2 and S_1 - S_6 - S_5 - S_4 , respectively.

$$-i_{S3} - i_{S2} + i_{S1} = 0, \quad (59)$$

$$-i_{S6} - i_{S5} - i_{S4} + i_{S1} = 0. \quad (60)$$

The complete set of equations, apart from Eqs. 55-60, is given below.

$$I_0 - I_1 + I_2 + I_3 = 0, \quad (61)$$

$$i_{S1} = I_0, \quad (62)$$

$$i_{S2} = I_2, \quad (63)$$

$$i_{S3} = I_2, \quad (64)$$

$$i_{S4} = I_3, \quad (65)$$

$$i_{S5} = I_3, \quad (66)$$

$$i_{S6} = I_3, \quad (67)$$

$$V_A = V_s, \quad (68)$$

$$V_{S1} = 0, \quad (69)$$

$$V_{S2} = 0, \quad (70)$$

$$V_{S3} = 0, \quad (71)$$

$$V_{S4} = 0, \quad (72)$$

$$V_{S5} = 0, \quad (73)$$

$$V_{S6} = 0, \quad (74)$$

$$V_A - V_B = I_1 R, \quad (75)$$

where Eq. 61 is KCL at node B, Eqs. 62-67 are the branch current assignments for on switches, and Eqs. 68-75 are the ES equations.

2.1.4 Switch circuits: example 4

We consider the circuit of Fig. 6 again, with S_4 off and all other switches on (see Fig. 9). Let us see how the

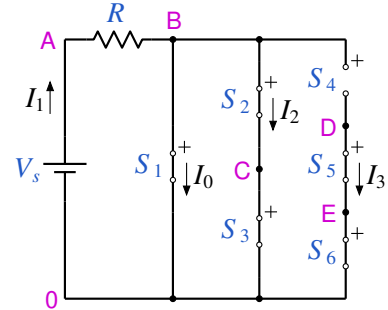


Figure 9: Circuit of Fig. 6 with S_4 off and all other switches on.

SL algorithm works in this case. We first identify the loop candidates as S_1 , S_2 , S_3 , S_6 since each of them is connected to on switches at both ends. We then make passes as described in Sec. 2.1.2. In the first pass, we rule out S_6 which is connected to S_5 which is an on switch but not a loop candidate. No other candidates get ruled out in subsequent passes, and we are left with S_1 , S_2 , S_3 .

Fig. 10 shows the switch tree constructed with node C as the root. From this tree, we identify S_1 - S_3 - S_2 as the switch loop, and choose to omit the SVD equation for one of them (say, S_3). The circuit equations are given by

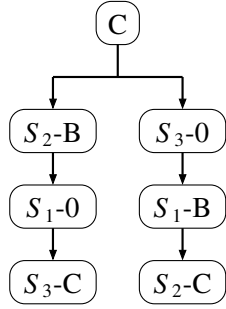


Figure 10: Switch tree for identifying switch loops in the circuit of Fig. 9, starting with node C.

$$V_{S1} = V_B, \quad (76)$$

$$V_{S2} = V_B - V_C, \quad (77)$$

$$V_{S5} = V_D - V_E, \quad (78)$$

$$V_{S6} = V_E, \quad (79)$$

$$-i_{S3} - i_{S2} + i_{S1} = 0, \quad (80)$$

$$I_0 - I_1 + I_2 = 0, \quad (81)$$

$$I_3 = 0, \quad (82)$$

$$i_{S1} = I_0, \quad (83)$$

$$i_{S2} = I_2, \quad (84)$$

$$i_{S3} = I_2, \quad (85)$$

$$i_{S5} = I_3, \quad (86)$$

$$i_{S6} = I_3, \quad (87)$$

$$V_{S4} = V_B - V_D, \quad (88)$$

$$V_A = V_s, \quad (89)$$

$$V_{S1} = 0, \quad (90)$$

$$V_{S2} = 0, \quad (91)$$

$$V_{S3} = 0, \quad (92)$$

$$i_{S4} = 0, \quad (93)$$

$$V_{S5} = 0, \quad (94)$$

$$V_{S6} = 0, \quad (95)$$

$$V_A - V_B = I_1 R, \quad (96)$$

where Eqs. 76 and 77 are the SVD equations for the loop switches S_1 and S_2 (note that SVD for S_3 has been dropped), Eqs. 78 and 79 are the SVD equations

for the other on switches, Eq. 80 is the KVL around the S_1 - S_3 - S_2 loop, Eqs. 81 and 82 are KCL equations, Eqs. 83-87 are the branch current assignments for the on switches, Eq. 88 is the SVD for the off switch S_4 , and Eqs. 89-96 are the ES equations.

2.2 Isolated circuit sections

In the ELEX scheme presented in [3], equations are written in terms of node voltages, i.e., voltages with respect to a reference node. We have used the same approach in the examples considered in this paper as well. However, in some situations, different sections of the circuit may get isolated from each other, thus requiring additional considerations, as illustrated in the following examples.

2.2.1 Switch circuits: example 5

Consider the circuit shown in Fig. 11. If S_1 and S_4 are off, the original circuit gets split into two sections, one on the left and the other on the right, as shown in Fig. 12. In the left section, the concept of node voltages

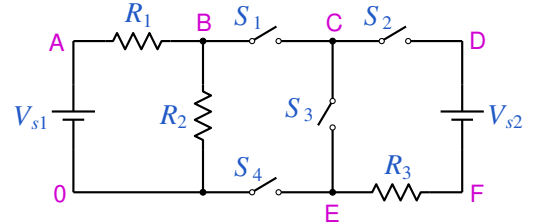


Figure 11: Switch circuit example 5.

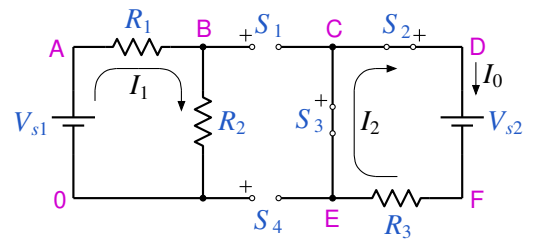


Figure 12: Circuit of Fig. 11 with S_1, S_4 off and S_2, S_3 on.

is meaningful since the reference node (denoted by 0) is one of the nodes in this section. The right section, however, is isolated from the reference node, and for nodes in this section, node voltages would make sense only if we have equations for the voltage drops across S_1 and S_4 . We can derive the required equations as follows.

We first establish the fact that there is indeed a section in the circuit (loop C-D-F-E) which is isolated from

the reference node. We then identify the off switches responsible for the isolation and obtain the desired equations. These steps are described below.

1. Identify nodes which are isolated from the reference node (0) by making passes: In the first pass, we find that V_{s1} and R_2 are connected directly to 0 (see Fig. 12), so we tick these elements. In the second pass, we look for unticked elements which are connected to any of the ticked elements. We find R_1 in this category and tick it. In the third pass, we do not find any unticked elements connected to a ticked element – since S_1 and S_4 are open – and we end the passes. That leaves S_2 , S_3 , V_{s2} , R_3 unticked. In this example, the unticked elements happen to form a single group since they are connected; however, the simulator in general must take into account the possibility of multiple groups isolated from the reference node and from each other. The nodes in the group of unticked elements are C, D, F, E. We will refer to these as “open” nodes.

Note that the simulator has assigned two branch currents, I_0 and I_2 for the elements in the isolated group in Fig. 12 although a single branch current could have been used. This is related to the branch current assignment section of the simulator and will be described elsewhere.

2. Identify off switches for which one of the nodes is an open node: In the example being discussed, we look for off switches connected to any of the open nodes (C, D, F, E) and find that S_1 and S_4 satisfy this condition.
3. Write the KCL equation for the off switches identified in the previous step: To arrive at a suitable equation, we replace each of S_1 and S_4 with a large resistance R_{off} , as shown in Fig. 13. Because the left and right sections of the circuit are isolated, we must have

$$i_{S1} + i_{S4} = 0, \quad (97)$$

leading to

$$\frac{V_{S1}}{R_{\text{off}}} + \frac{V_{S4}}{R_{\text{off}}} = 0, \quad (98)$$

which simplifies to

$$V_{S1} + V_{S4} = 0. \quad (99)$$

The rest of the equations are

$$I_0 - I_2 = 0, \quad (100)$$

$$V_{S2} = V_D - V_C, \quad (101)$$

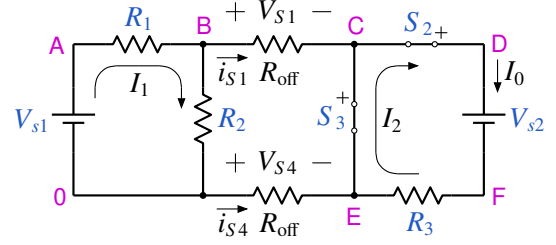


Figure 13: Circuit of Fig. 12 with S_1 , S_4 replaced with R_{off} .

$$V_{S3} = V_C - V_E, \quad (102)$$

$$i_{S2} = -I_2, \quad (103)$$

$$i_{S3} = -I_2, \quad (104)$$

$$V_{S1} = V_B - V_C, \quad (105)$$

$$V_{S4} = -V_E, \quad (106)$$

$$V_A = V_{s1}, \quad (107)$$

$$V_D - V_F = V_{s2}, \quad (108)$$

$$V_A - V_B = I_1 R_1, \quad (109)$$

$$V_B = I_1 R_2, \quad (110)$$

$$V_F - V_E = I_2 R_3, \quad (111)$$

$$i_{S1} = 0, \quad (112)$$

$$V_{S2} = 0, \quad (113)$$

$$V_{S3} = 0, \quad (114)$$

$$i_{S4} = 0, \quad (115)$$

where Eq. 100 is KCL at node D, Eqs. 101 and 102 are the SVD equations for the on switches, Eqs. 103 and 104 are the branch current assignments for the on switches, Eqs. 105 and 106 are the SVD equations for the off switches, and Eqs. 107-115 are the ES equations.

2.2.2 Switch circuits: example 6

Consider the circuit shown in Fig. 14. If S_1 and S_2 are open, R_1 gets isolated from the reference node (see Fig. 15). We identify nodes B and C as open nodes, and

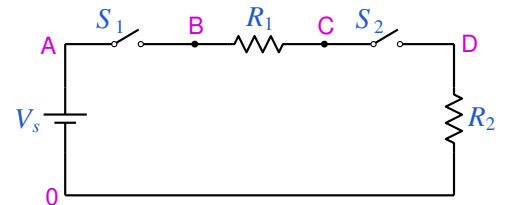


Figure 14: Switch circuit example 6.

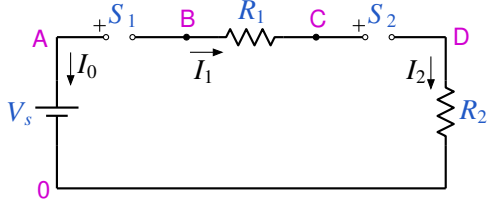


Figure 15: Circuit of Fig. 14 with S_1, S_2 off.

find that S_1 as well as S_2 is directly connected to an open node. Following the approach described in the previous section, we can write the KCL equation involving S_1 and S_2 as

$$-V_{S_1} + V_{S_2} = 0. \quad (116)$$

The rest of the equations can be written as

$$I_0 = 0, \quad (117)$$

$$I_1 = 0, \quad (118)$$

$$I_2 = 0, \quad (119)$$

$$V_{S_1} = V_A - V_B, \quad (120)$$

$$V_{S_2} = V_C - V_D, \quad (121)$$

$$V_A = V_s, \quad (122)$$

$$V_B - V_C = I_1 R_1, \quad (123)$$

$$V_D = I_2 R_2, \quad (124)$$

$$i_{S_1} = 0, \quad (125)$$

$$i_{S_2} = 0, \quad (126)$$

where Eqs. 117-119 are the KCL equations, Eqs. 120 and 121 are the SVD equations for the off switches, and Eqs. 122-126 are the ES equations.

3 Inductor circuits

In the ELEX scheme [3], inductor equations, like switch equations, are divided into ES and CTD equations. The ES equations are given by

$$i_L = i_L^{(n+1)}, \quad (127)$$

$$V_p - V_n - L i_{Ld} = 0, \quad (128)$$

where i_L and i_{Ld} are auxiliary variables associated with the inductor, representing the inductor current and its derivative with respect to time, respectively, and V_p, V_n are the node voltages $V(p), V(n)$ of the inductor with respect to the reference node. $i_L^{(n+1)}$ is a *known* value computed prior to solving the circuit equations. We will assume for simplicity that the

Forward Euler (FE) scheme is used in handling time derivatives. As explained in [2], the FE scheme is not a suitable choice for many circuits of practical interest, and higher-order variable time step methods such as the Runge-Kutta-Fehlberg (RKF) method are required. However, the nature of the equations to be solved remains the same in the FE method or RKF method. With the FE scheme, we have

$$i_L^{(n+1)} = i_L^{(n)} + \frac{\Delta t}{L} (V_p^{(n)} - V_n^{(n)}), \quad (129)$$

where the superscripts (n) and $(n+1)$ correspond to the time points t_n and t_{n+1} , respectively.

The CTD equation for an inductor L_i depends on two crucial factors: (a) whether L_i is in series with any other inductor(s), (b) whether there is a conduction path available for L_i . This information can be obtained by constructing the graph of the circuit under consideration and analysing it for series connections and conduction paths. In this paper, we present much simpler – and more robust – procedures to achieve the same goal.

3.1 Inductors in series

Consider a circuit consisting of inductors L_i, L_j , along with other elements, e_1, e_2, \dots, e_N . For now, assume that each of e_1, e_2, \dots, e_N has only two nodes. The following algorithm can be used to check if L_i and L_j are in series. We keep shorting the elements in the circuit

Algorithm 1 Shorting

```

1: for  $k = 1$  to  $N$  do
2:   Short  $e_k$ .
3:   if  $L_i$  or  $L_j$  got shorted then
4:     flag_series = false
5:     exit
6:   end if
7: end for
8: if  $L_i$  and  $L_j$  are in parallel then
9:   flag_series = true
10: else
11:   flag_series = false
12: end if

```

one by one (except for L_i and L_j). If at any stage L_i or L_j (or both) get shorted, we conclude that they are not in series. After all elements have been shorted, if L_i and L_j have got connected in parallel, we conclude that they are in series. The following examples illustrate the working of the Shorting algorithm.

3.1.1 Inductor circuits: example 1

Consider the circuit shown in Fig. 16. After applying the Shorting algorithm for (L_1, L_4) , we get the circuit of Fig. 17, and we find that L_1 and L_4 have got connected in parallel. We conclude therefore that L_1 and L_4 are in series (in the original circuit).

Application of the Shorting algorithm for (L_1, L_2) to the circuit of Fig. 16 is shown in Fig. 18. In this case, we find that L_1 and L_2 have both got shorted, leading to the conclusion that they are not in series. Note that the Shorting algorithm would in fact stop as soon as any one of L_1, L_2 gets shorted, and it would not be required to continue up to the situation shown in Fig. 18.

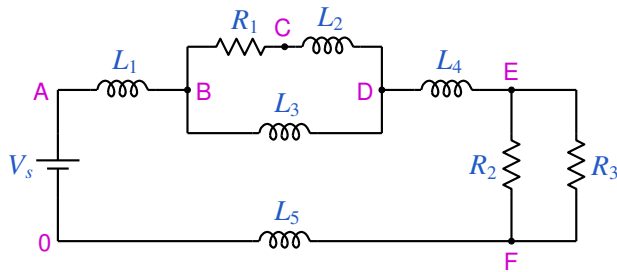


Figure 16: Inductor circuit example 1.

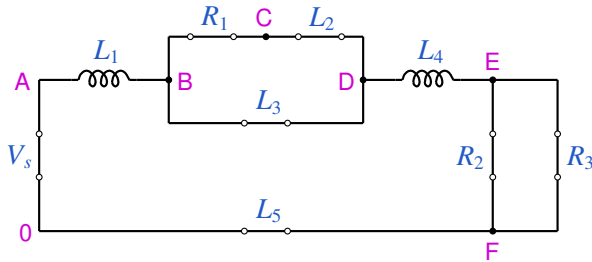


Figure 17: Application of the Shorting algorithm to the circuit of Fig. 16 for inductors L_1, L_4 .

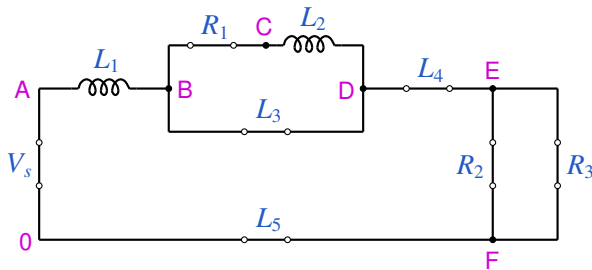


Figure 18: Application of the Shorting algorithm to the circuit of Fig. 16 for inductors L_1, L_2 .

3.1.2 Inductor circuits: example 2

If the circuit includes switches, the circuit graph depends on the switch states, and whether or not L_i and L_j are in series would also depend on the switch states. Consider the circuit shown in Fig. 19. If all switches are on, we get the circuit shown in Fig. 20. Application of the Shorting algorithm to this circuit for (L_1, L_2) gives the circuit shown in Fig. 21, and we find L_1 and L_2 to be shorted, thus implying that they are not connected in series.

If S_1 and S_3 are on and S_2 off, we get the circuit shown in Fig. 22, and application of the Shorting algorithm for (L_1, L_2) results in the circuit shown in Fig. 23. We see that L_1 and L_2 have got connected in parallel and conclude that they are in series in the original circuit.

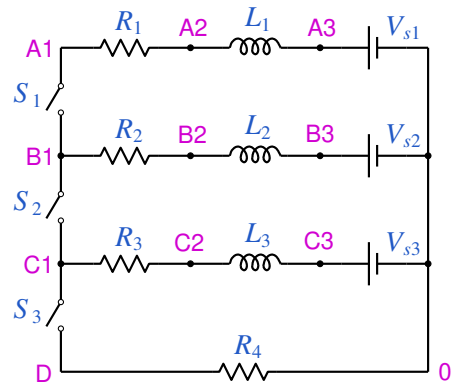


Figure 19: Inductor circuit example 2.

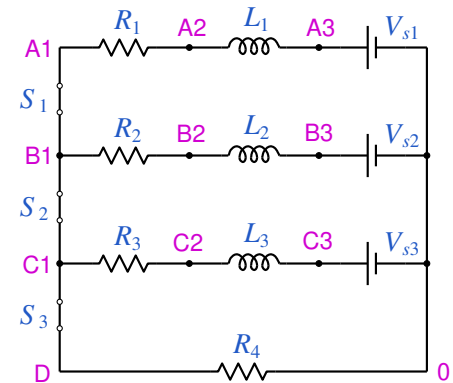


Figure 20: Circuit of Fig. 19 with all switches on.

3.2 Conduction path for inductors

As pointed out in [3], the CTD equation for an inductor depends on whether there is a conduction path available for that inductor. Consider a circuit consisting of an inductor L along with other elements, e_1, e_2, \dots, e_N .

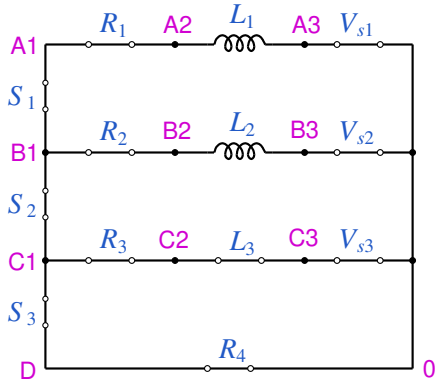


Figure 21: Application of the Shorting algorithm to the circuit of Fig. 20 for inductors L_1, L_2 .

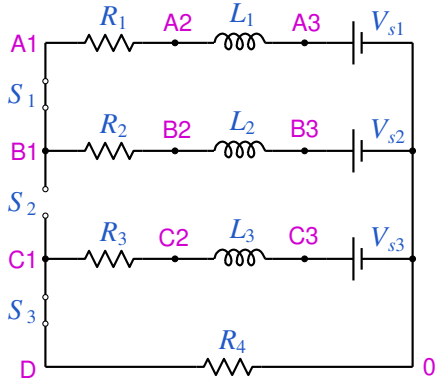


Figure 22: Circuit of Fig. 19 with S_1, S_3 on, S_2 off.

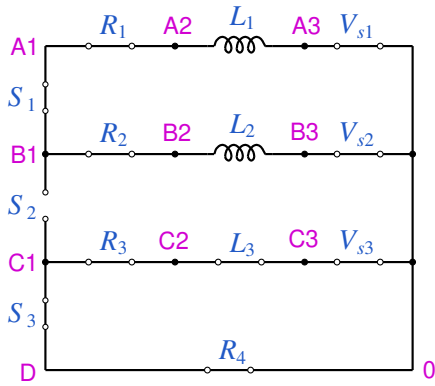


Figure 23: Application of the Shorting algorithm to the circuit of Fig. 22 for inductors L_1, L_2 .

The Path algorithm given below can be used to check if there is a conduction path for L . We keep shorting elements in the circuit – except for L – one by one. If at any stage L gets shorted, we conclude that L has a conduction path available, and exit the algorithm. The following examples illustrate the functioning of the Path algorithm.

Algorithm 2 Path

```

1: flag_path = false
2: for  $k = 1$  to  $N$  do
3:   Short  $e_k$ .
4:   if  $L$  got shorted then
5:     flag_path = true
6:     exit
7:   end if
8: end for

```

3.2.1 Inductor circuits: example 3

Consider the circuit of Fig. 19 with S_1, S_3 on and S_2 off, which gives the circuit shown in Fig. 22. This case was considered in Sec. 3.1.2 in the context of checking series connection of inductors. Application of the Path algorithm for inductor L_1 gives the circuit of Fig. 24. We observe that L_1 has got shorted and conclude that it has a conduction path in the original circuit. Note that the Path algorithm would terminate as soon as L_1 gets shorted, and we do not need to proceed all the way to the situation shown in Fig. 24.

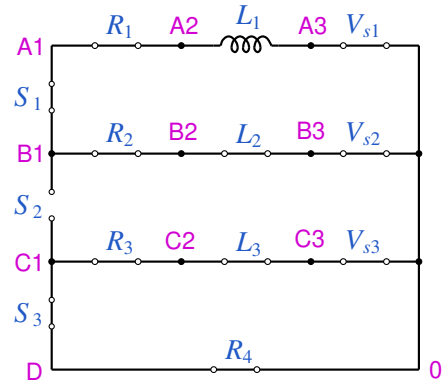


Figure 24: Application of the Path algorithm to the circuit of Fig. 22 for inductor L_1 .

3.2.2 Inductor circuits: example 4

Consider the circuit of Fig. 19 again but with S_2, S_3 on and S_1 off, leading to the circuit shown in Fig. 25. Application of the Path algorithm for inductor L_1 to this circuit is shown in Fig. 26. Since L_1 has not got shorted, we conclude that it has no conduction path available in the original circuit.

4 Transformer circuits

Handling of transformers for circuit simulation using explicit integration methods presents some challenges,

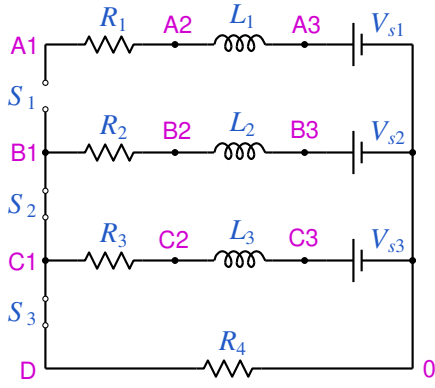


Figure 25: Circuit of Fig. 19 with S_2, S_3 on, S_1 off.

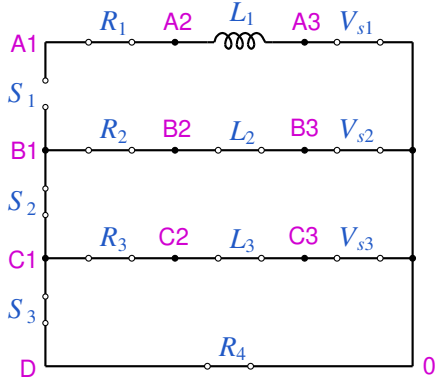


Figure 26: Application of the Path algorithm to the circuit of Fig. 25 for inductor L_1 .

and the situation gets more complicated for circuits involving transformers, inductors, and switches. In this section, we discuss how the ELEX scheme of [3] can be modified to incorporate transformers. As with switches and inductors, we divide the equations arising due to transformers into two categories: ES and CTD.

4.1 Transformers: ES equations

Transformer models used in circuit simulation involve an ideal transformer model along with resistors and inductors to represent non-ideal effects. The ES

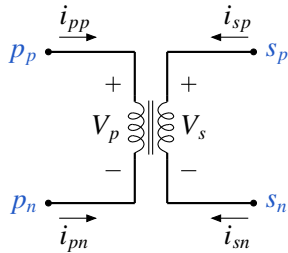


Figure 27: Ideal 1:1 transformer.

equations for an ideal 1:1 transformer shown in Fig. 27

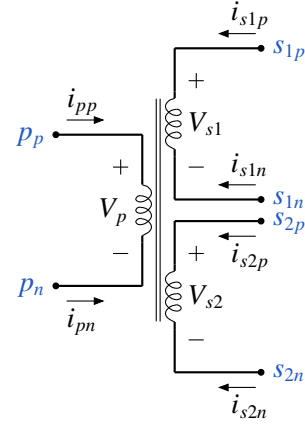


Figure 28: Ideal 1:2 transformer.

are

$$V_p = V(p_p) - V(p_n), \quad (130)$$

$$V_s = V(s_p) - V(s_n), \quad (131)$$

$$N_s V_p - N_p V_s = 0, \quad (132)$$

$$N_p i_{pp} + N_s i_{sp} = 0, \quad (133)$$

$$i_{pp} + i_{pn} = 0, \quad (134)$$

$$i_{sp} + i_{sn} = 0, \quad (135)$$

where N_p and N_s are the number of turns for the p and s coils, respectively. The above set of equations can be extended in a straightforward manner to the case of multiple primary or secondary windings. For example, for a 1:2 transformer (see Fig. 28), we can write

$$V_p = V(p_p) - V(p_n), \quad (136)$$

$$V_{s1} = V(s_{1p}) - V(s_{1n}), \quad (137)$$

$$V_{s2} = V(s_{2p}) - V(s_{2n}), \quad (138)$$

$$N_{s1} V_p - N_p V_{s1} = 0, \quad (139)$$

$$N_{s2} V_p - N_p V_{s2} = 0, \quad (140)$$

$$N_p i_{pp} + N_{s1} i_{s1p} + N_{s2} i_{s2p} = 0, \quad (141)$$

$$i_{pp} + i_{pn} = 0, \quad (142)$$

$$i_{s1p} + i_{s1n} = 0, \quad (143)$$

$$i_{s2p} + i_{s2n} = 0, \quad (144)$$

where N_p, N_{s1}, N_{s2} are the number of turns for the $p, s1, s2$ coils, respectively.

4.2 Transformers: CTD equations

Transformers introduce significant complications in assembling equations with the ELEX scheme. Although the primary and secondary sides seem to be independent sections, they are related through the ideal transformer current equation (Eq. 133 for a 1:1 transformer, Eq. 141 for a 1:2 transformer) thus requiring additional considerations while writing the CTD equations. It is perhaps best to illustrate the challenges posed by transformer circuits with the help of examples. We start with a simple transformer circuit and then go on to more complicated situations.

4.2.1 Transformer circuits: example 1

Consider the circuit shown in Fig. 29. The variables

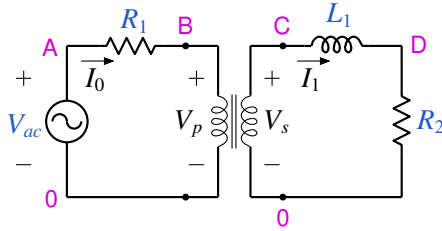


Figure 29: Transformer circuit example 1. For L_1 , nodes p and n are C and D, respectively.

involved in this circuit are the branch currents (I_0, I_1), the node voltages (V_A, V_B, V_C, V_D), the transformer variables ($V_p, V_s, i_{pp}, i_{pn}, i_{sp}, i_{sn}$), and the inductor variables (i_L, i_{Ld}). The total number of variables is 14, so we need a set of 14 equations. Note that, since we use node voltages in the ELEX scheme for formulating the equations, the secondary side is required to have a connection to the reference node. This is achieved by assigning the same node (0) for the p_n and s_n terminals of the transformer. We can now write the circuit equations as follows.

$$V_p = V_B, \quad (145)$$

$$V_s = V_C, \quad (146)$$

$$N_s V_p - N_p V_s = 0, \quad (147)$$

$$N_p i_{pp} + N_s i_{sp} = 0, \quad (148)$$

$$i_{pp} + i_{pn} = 0, \quad (149)$$

$$i_{sp} + i_{sn} = 0, \quad (150)$$

$$V_A = V_{ac}, \quad (151)$$

$$V_A - V_B = I_0 R_1, \quad (152)$$

$$V_D = I_1 R_2, \quad (153)$$

$$i_{L1} = i_{L1}^{(n+1)}, \quad (154)$$

$$V_C - V_D = L_1 i_{L1d}, \quad (155)$$

$$-I_0 + i_{pp} = 0, \quad (156)$$

$$I_1 + i_{sp} = 0, \quad (157)$$

$$I_1 = i_{L1}, \quad (158)$$

where Eqs. 145-155 are the ES equations, Eqs. 156 and 157 are the KCL equations at nodes B and C, respectively, and Eq. 158 is the branch current assignment for the inductor.

4.2.2 Transformer circuits: example 2

We now consider a circuit with two inductors, L_1 on the primary and L_2 on the secondary side of the transformer, as shown in Fig. 30. Although L_1 and L_2 are separated

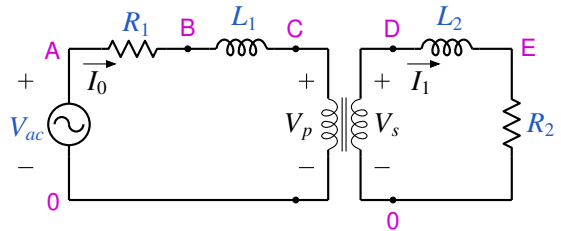


Figure 30: Transformer circuit example 2. The p nodes of L_1, L_2 are B, D, respectively.

by the transformer, their currents are linked since i_{pp} and i_{sp} of the transformer are related by Eq. 133. This situation is similar to Example 1, Sec. 2.1, of [3], with two inductors in series carrying the same current. With the FE scheme, we would write (among other equations)

$$i_{L1} = i_{L1}^{(n+1)}, \quad (159)$$

$$i_{L2} = i_{L2}^{(n+1)}. \quad (160)$$

In addition, the transformer current equation implies that

$$N_p i_{L1} - N_s i_{L2} = 0. \quad (161)$$

Clearly, Eqs. 159-161 cannot be solved since there are two variables and three equations, and as in the case of inductors in series [3], we need to replace Eq. 160 with another suitable equation, viz.,

$$N_p i_{L1d} - N_s i_{L2d} = 0, \quad (162)$$

which is obtained by differentiating Eq. 161. Although this is a very simple idea, assembling Eq. 162 from the netlist information requires a systematic approach which will work generally. The following steps constitute one such approach.

1. Find inductors in series with each of the two coils (p and s) using an algorithm similar to the shorting algorithm of Sec. 3.1; the only difference here is that we are looking for a series connection between a transformer coil and an inductor rather than between two inductors. We find L_1 to be in series with the p coil and L_2 to be in series with the s coil.

2. Write the transformer equation relating i_{pp} and i_{sp} , viz.,

$$N_p i_{pp} + N_s i_{sp} = 0. \quad (163)$$

3. For each term in the above equation, replace the coil current with i_L of the inductor (if any) in series with the coil, taking into account the relative directions of the coil current and the inductor current. For the circuit of Fig. 30, i_{pp} gets replaced with i_{L1} and i_{sp} with $-i_{L2}$, leading to

$$N_p i_{L1} - N_s i_{L2} = 0. \quad (164)$$

4. If the resulting equation has only i_L terms – which is true about Eq. 164 – we replace each i_L with the corresponding i_{Ld} and obtain the desired equation (Eq. 162).

4.2.3 Transformer circuits: example 3

Consider the circuit shown in Fig. 31 in which inductors L_2, L_3 are directly in series, and their currents are also related to the current through L_1 on the other side of the transformer. Of the three inductor currents, only one of them can be independently assigned. A systematic procedure for writing the inductor CTD equations is given below.

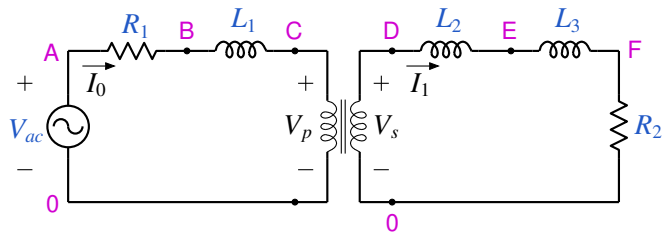


Figure 31: Transformer circuit example 3. The p nodes of L_1, L_2, L_3 are B, D, E, respectively.

1. Using the shorting algorithm, we find that L_2 and L_3 are directly in series. We now have two sets of inductors: (L_1) and (L_2, L_3). In the second set, we select one of the inductors as the “first” (F) inductor, and the remaining – in this case only one – as the

“non-first” (NF) inductor. For example, L_2 could be type F, and L_3 would then be type NF. In the first set, there is only one inductor (L_1), and it gets type F.

2. We now look for series connections between the F inductors and the transformer coils and find that L_1 is in series with the p coil, and L_2 is in series with the s coil.

3. Following the procedure described for the previous example, we find that the currents of the F inductors L_1 and L_2 are related by the transformer current equation. We get the following relationship.

$$N_p i_{L1d} - N_s i_{L2d} = 0. \quad (165)$$

We categorise one of the two F inductors (L_1 and L_2) as “first-first” (FF) and the other inductor as “first-non-first” (FNF). For example, we may select L_1 to be FF, which makes L_2 FNF.

4. After the above step, if there are any other F inductors, we mark them as FF. In the present example, there are no inductors in this category.

5. We now have three types of inductors: FF (L_1), FNF (L_2), and NF (L_3). For the FF inductors, we assign i_L (i.e., the corresponding branch current) independently:

$$I_0 = i_{L1}^{(n+1)}. \quad (166)$$

6. For each NF inductor, we relate its i_{Ld} to that of the corresponding FF inductor. For the inductor L_3 , we get

$$i_{L3d} = i_{L2d}. \quad (167)$$

Eqs. 165-167 are the desired inductor equations.

4.2.4 Transformer circuits: example 4

Fig. 32 shows a circuit with two coupled transformers. There are two inductors L_1 and L_2 which are not directly connected in series, but their currents are linearly related:

$$i_{L2} = \frac{N_p^{(1)}}{N_s^{(1)}} \times \frac{N_p^{(2)}}{N_s^{(2)}} \times i_{L1}, \quad (168)$$

where the superscripts (1) and (2) correspond to transformers X_1, X_2 , respectively. Since i_{L1} and i_{L2} are not independent, we should write the following equations:

$$I_1 = i_{L1}^{(n+1)} \text{ or } I_2 = i_{L2}^{(n+1)}, \quad (169)$$

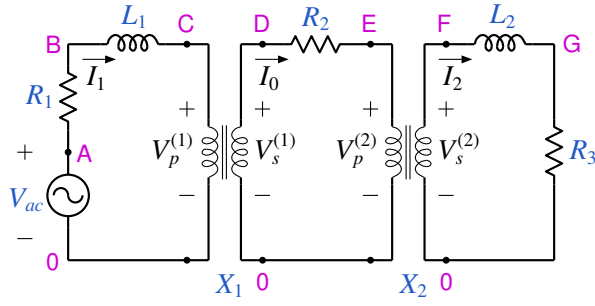


Figure 32: Transformer circuit example 4. The p nodes of L_1 , L_2 are B, F, respectively. X_1 and X_2 denote the two transformers.

$$i_{L2d} = \frac{N_p^{(1)}}{N_s^{(1)}} \times \frac{N_p^{(2)}}{N_s^{(2)}} \times i_{L1d}. \quad (170)$$

A systematic procedure to arrive at Eq. 170 is the following.

1. Write the current equations for the two transformers, X_1 and X_2 .

$$N_p^{(1)} i_{pp}^{(1)} + N_s^{(1)} i_{sp}^{(1)} = 0, \quad (171)$$

$$N_p^{(2)} i_{pp}^{(2)} + N_s^{(2)} i_{sp}^{(2)} = 0. \quad (172)$$

2. Use the shorting algorithm to check series connections between the transformer coils and inductors. We find that the p coil of X_1 is in series with L_1 , and the s coil of X_2 is in series with L_2 .

3. Replace $i_{pp}^{(1)}$ with i_{L1} in Eq. 171 and $i_{sp}^{(2)}$ with $(-i_{L2})$ in Eq. 172. We now have

$$N_p^{(1)} i_{L1} + N_s^{(1)} i_{sp}^{(1)} = 0, \quad (173)$$

$$N_p^{(2)} i_{pp}^{(2)} - N_s^{(2)} i_{L2} = 0. \quad (174)$$

4. Use the shorting algorithm to check series connections between transformer coils. We find that the s coil of X_1 is in series with the p coil of X_2 which implies

$$i_{sp}^{(1)} = -i_{pp}^{(2)}. \quad (175)$$

5. Use the above relationship to eliminate $i_{sp}^{(1)}$, $i_{pp}^{(2)}$ from Eqs. 173 and 174 to get

$$N_p^{(1)} N_p^{(2)} i_{L1} - N_s^{(1)} N_s^{(2)} i_{L2} = 0. \quad (176)$$

Differentiating Eq. 176 with respect to time gives us the desired equation (Eq. 168).

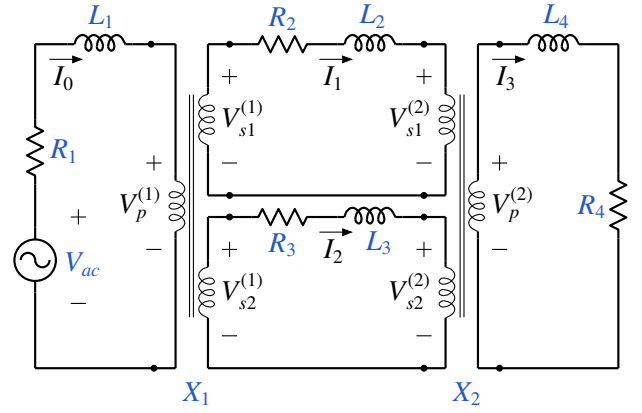


Figure 33: Transformer circuit example 5. The inductor currents i_{L1} , i_{L2} , i_{L3} , i_{L4} are in the same direction as the branch currents, I_0 , I_1 , I_2 , I_3 , respectively.

4.2.5 Transformer circuits: example 5

We now consider a circuit with 1:2 transformers, as shown in Fig. 33. For convenience, we will consider the side with one coil to be the primary side and the other side with two coils to be the secondary side. In this circuit, we have four inductors whose currents are not independent but are linked through the transformer current equations. The following procedure yields the desired set of inductor CTD equations.

1. Start with the transformer current equations:

$$N_p^{(1)} i_{pp}^{(1)} + N_{s1}^{(1)} i_{s1p}^{(1)} + N_{s2}^{(1)} i_{s2p}^{(1)} = 0, \quad (177)$$

$$N_p^{(2)} i_{pp}^{(2)} + N_{s1}^{(2)} i_{s1p}^{(2)} + N_{s2}^{(2)} i_{s2p}^{(2)} = 0. \quad (178)$$

2. Replace the coil current with i_L of the F inductor in series with that coil. This gives

$$N_p^{(1)} i_{L1} - N_{s1}^{(1)} i_{L2} - N_{s2}^{(1)} i_{L3} = 0, \quad (179)$$

$$-N_p^{(2)} i_{L4} + N_{s1}^{(2)} i_{L2} + N_{s2}^{(2)} i_{L3} = 0. \quad (180)$$

3. Since both the above equations have only i_L terms, we replace each i_L with the corresponding i_{Ld} and add the resulting equations to the set of circuit equations to be solved:

$$N_p^{(1)} i_{L1d} - N_{s1}^{(1)} i_{L2d} - N_{s2}^{(1)} i_{L3d} = 0, \quad (181)$$

$$-N_p^{(2)} i_{L4d} + N_{s1}^{(2)} i_{L2d} + N_{s2}^{(2)} i_{L3d} = 0. \quad (182)$$

4. We have four inductors and only two inductor CTD equations so far. We need to write two branch current assignment equations. One of the choices we can make is

$$I_0 = i_{L1}, \quad (183)$$

$$I_1 = i_{L2}. \quad (184)$$

4.2.6 Transformer circuits: example 6

If L_2 in our previous example (Fig. 33) is removed (shorted), we get the circuit shown in Fig. 34. We now

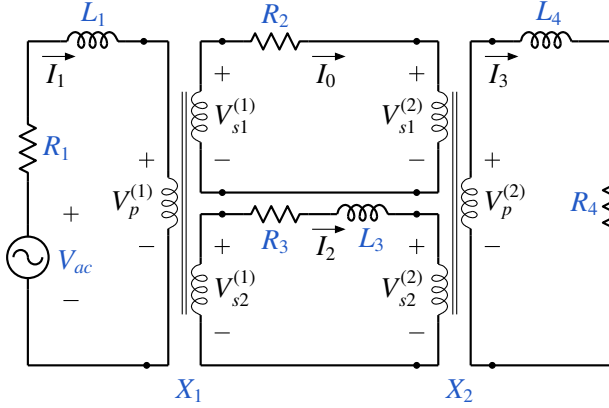


Figure 34: Transformer circuit example 6. The inductor currents i_{L1} , i_{L3} , i_{L4} are in the same direction as the branch currents, I_1 , I_2 , I_3 , respectively.

have three inductors, L_1 , L_3 , L_4 , and it is not obvious if their currents can be independently assigned. The following procedure can be used to arrive at the desired equations.

1. Start with the transformer current equations (Eqs. 177, 178) and for each coil replace the coil current with i_L of the F inductor – if any – in series with that coil. This gives

$$N_p^{(1)} i_{L1} + N_{s1}^{(1)} i_{s1p}^{(1)} - N_{s2}^{(1)} i_{L3} = 0, \quad (185)$$

$$-N_p^{(2)} i_{L4} + N_{s1}^{(2)} i_{s1p}^{(2)} + N_{s2}^{(2)} i_{L3} = 0. \quad (186)$$

2. Use $i_{s1p}^{(1)} = -i_{s1p}^{(2)}$ to combine Eqs. 185 and 186:

$$N_p^{(1)} N_{s1}^{(2)} i_{L1} + \left(N_{s1}^{(1)} N_{s2}^{(2)} - N_{s2}^{(1)} N_{s1}^{(2)} \right) i_{L3} - N_{s1}^{(1)} N_p^{(2)} i_{L4} = 0. \quad (187)$$

3. Since Eq. 187 has only i_L terms, we replace each i_L with the corresponding i_{Ld} and add the resulting equation to the set of circuit equations to be solved:

$$N_p^{(1)} N_{s1}^{(2)} i_{L1d} + \left(N_{s1}^{(1)} N_{s2}^{(2)} - N_{s2}^{(1)} N_{s1}^{(2)} \right) i_{L3d} - N_{s1}^{(1)} N_p^{(2)} i_{L4d} = 0. \quad (188)$$

4. Since we have three inductors and one inductor CTD equation, we write two branch current assignment equations. For example,

$$I_1 = i_{L1}, \quad (189)$$

$$I_2 = i_{L3}. \quad (190)$$

4.2.7 Transformer circuits: example 7

Consider the circuit shown in Fig. 35 which has two inductors, L_1 and L_4 . At first glance, they appear to

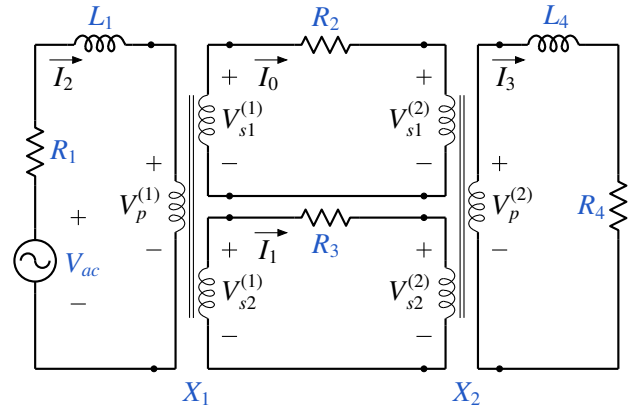


Figure 35: Transformer circuit example 7. The inductor currents i_{L1} , i_{L4} are in the same direction as the branch currents, I_2 , I_3 , respectively.

be coupled through the transformer current equations. However, in order to firmly conclude if i_{L1} and i_{L4} can be independently assigned, a systematic approach is called for. To this end, we perform the following steps.

1. Start with the transformer current equations and replace coil currents with inductor currents as discussed in the previous examples. This gives

$$N_p^{(1)} i_{L1} + N_{s1}^{(1)} i_{s1p}^{(1)} + N_{s2}^{(1)} i_{s2p}^{(1)} = 0, \quad (191)$$

$$-N_p^{(2)} i_{L4} + N_{s1}^{(2)} i_{s1p}^{(2)} + N_{s2}^{(2)} i_{s2p}^{(2)} = 0. \quad (192)$$

2. Use $i_{s1p}^{(1)} = -i_{s1p}^{(2)}$ to combine Eqs. 191 and 192:

$$N_p^{(1)} N_{s1}^{(2)} i_{L1} + N_{s2}^{(1)} N_{s1}^{(2)} i_{s2p}^{(1)} - N_{s1}^{(1)} N_p^{(2)} i_{L4} + N_{s1}^{(1)} N_{s2}^{(2)} i_{s2p}^{(2)} = 0. \quad (193)$$

3. Use $i_{s2p}^{(1)} = -i_{s2p}^{(2)}$ to simplify Eq. 193 as

$$N_p^{(1)} N_{s1}^{(2)} i_{L1} - N_{s1}^{(1)} N_p^{(2)} i_{L4} + \left(N_{s2}^{(1)} N_{s1}^{(2)} - N_{s1}^{(1)} N_{s2}^{(2)} \right) i_{s2p}^{(1)} = 0. \quad (194)$$

4. If $N_{s2}^{(1)} N_{s1}^{(2)} \neq N_{s1}^{(1)} N_{s2}^{(2)}$, we have a “mixed” equation containing inductor currents and transformer coil currents. We conclude that i_{L1} and i_{L4} can be independently equated to the respective branch currents, i.e.,

$$I_2 = i_{L1}, \quad (195)$$

$$I_3 = i_{L4}. \quad (196)$$

If $N_{s2}^{(1)}N_{s1}^{(2)} = N_{s1}^{(1)}N_{s2}^{(2)}$, Eq. 194 simplifies to

$$N_p^{(1)}N_{s1}^{(2)}i_{L1} - N_{s1}^{(1)}N_p^{(2)}i_{L4} = 0. \quad (197)$$

In this case, i_{L1} and i_{L4} are not independent. Differentiating Eq. 197 with respect to time, we obtain one of the desired equations:

$$N_p^{(1)}N_{s1}^{(2)}i_{L1d} - N_{s1}^{(1)}N_p^{(2)}i_{L4d} = 0, \quad (198)$$

and we should write the branch current assignment equation for only one of the two inductors, e.g., Eq. 195.

5 Conclusions

In this paper, we have pointed out some issues arising in using explicit integration schemes for simulation of power electronic circuits with ideal switch models. In particular, the following topics have been addressed: (a) treatment of circuits involving switch loops and isolated sections, (b) checking series connection of inductors, (c) conduction path for inductors, (d) inductor equations in the presence of transformers. Systematic algorithms have been presented to address the various challenges posed in assembling the circuit equations. Application of the new methods and algorithms is illustrated with the help of suitable examples.

The techniques presented in this paper have been incorporated in the open-source circuit simulator GSEIM [5]. In parallel, several improvements in the graphics interface of GSEIM are also being undertaken. The new version of GSEIM, when made available in the public domain, is expected to provide a versatile, open-source alternative for simulation of power electronic circuits.

References

- [1] PLECS 4.6. [Online]. Available: <https://www.plexim.com/products/plecs>
- [2] M.B. Patil and V.V.S. Pavan Kumar Hari, "Circuit simulation using explicit methods," *arXiv preprint arXiv:2301.04595*, 2023.
- [3] M.B. Patil, "Circuit simulation using explicit methods: singular matrix issues," *arXiv preprint arXiv:2306.13489*, 2023.

[4] P. Nenzi, "NGSPICE circuit simulator release 26, 2014."

[5] GSEIM. [Online]. Available: <https://github.com/gseim/gseim>