

Multistability of Small Zero-One Reaction Networks

YUE JIAO, XIAOXIAN TANG*, XIAOWEI ZENG

1 School of Mathematical Sciences, Beihang University, Beijing, China

2 State Key Laboratory of Software Development Environment, Beihang University, Beijing, China

3 Key Laboratory of Mathematics, Informatics and Behavioral Semantics, Ministry of Education, Beijing, China

* Corresponding Author: xiaoxian@buaa.edu.cn

Abstract

Zero-one reaction networks play key roles in cell signaling such as signalling pathways regulated by protein phosphorylation. Multistability of zero-one networks is a key dynamics feature enabling decision-making in cells. Since multistability (or, nondegenerate multistationarity) can be lifted from a smaller subnetwork (low-dimensional networks with less species and fewer reactions) to large networks, we aim to explore the multistability problem of small zero-one networks. We prove that any zero-one network with a one-dimensional stoichiometric subspace admits at most one (stable) positive steady state (this steady state is also called a structural attractor), and we completely classify all the one-dimensional zero-one networks according to if they indeed admits a (stable) positive steady state or not. Also, we prove that any two-dimensional zero-one network with up to three species either admits only degenerate positive steady states, or admits at most one (stable) positive steady state. In these proofs, we apply the theorem based on the Brouwer degree theory and the theory of real algebraic geometry. Moreover, using the tools of computational algebraic geometry, we provide a systematical way for detecting the smallest zero-one networks that admit nondegenerate multistationarity/multistability. We show that the smallest zero-one networks that admit nondegenerate multistationarity contain three species and five reactions, and the smallest zero-one networks that admit multistability contain three species and six reactions.

Author summary

This work addresses the challenging problem of studying the smallest reaction networks that admit more than one (stable) steady state, a property termed multistationarity (multistability). In particular, we are interested in the networks arising from the study of cell signaling, say zero-one networks. We prove that the smallest zero-one networks that admit nondegenerate multistationarity is three-dimensional and contain three species and five reactions. We also prove by a computational method that the smallest zero-one networks that admit multistability contain three species and six reactions.

1 Introduction

For the dynamical systems that arise from biochemical reaction networks, the following question has attracted widespread attention.

Question 1. *What is the smallest reaction network that admits at least two stable positive steady states (i.e., multistability)?*

The multistability problem of biochemical reaction systems [3, 11, 18, 38] is a key dynamics feature linked to switch-like behavior and decision-making process in cellular signaling. We say a network admits multistability if there exist rate constants such that the corresponding dynamical system (arising under mass-action kinetics) exhibits at least two stable positive steady states in the same stoichiometric compatibility class.

Deciding the existence of multistability is a hard problem in general. So far, a typical method is first finding multistationarity (i.e., finding parameters such that a given network admits at least two positive steady states), and then numerically checking the stability of those steady states (e.g., [25]). Recently, symbolic methods based on computational algebraic geometry are also successfully applied to a list of biochemical reaction networks [31]. Nonetheless, we still need to develop simpler criteria for multistability because the standard tools based on the classical criteria (e.g., Routh-Hurwitz criterion [16], or alternatively Liénard-Chipart criterion [12]) are computationally challenging. Since there has been a list of nice criteria for multistationarity (e.g., [4, 7, 8, 10, 13, 22, 28, 37]), it is natural to study the relation between the numbers of stable positive steady states and positive steady states. One piece of work toward this direction is [36], where the one-dimensional case is solved. But these results can not be easily extended to the higher dimensional networks.

Since the multistability problem is challenging in general, it is a common idea to study the small networks since multistability or nondegenerate multistationarity can be lifted from a small subnetwork to the related large networks [5, 19]. An ambitious goal is to give explicit descriptions for the multistable networks with small sizes. As the first step toward the big goal, Joshi and Shiu [20] provided explicit criteria for the multistationarity of the networks with only one species or up to two reactions (possibly reversible). Later, these results were extended to nondegenerate multistationarity for two-species networks with two reactions [29]. Especially, Joshi and Shiu [20] completely characterized one-species networks by “arrow diagrams”, and these results were also extended to more general one-dimensional networks [27, 33]. After that, Tang and Xu completely described the smallest multistable two-reaction networks [35]. More specifically, they proved that for two-reaction networks with up to four reactants and up to three species, there are only two kinds of networks (but infinitely many) that are multistable, and for the networks with one irreversible and one reversible reaction, if there are up to three reactants and up to two species, then only four kinds of networks are multistable [35]. Recently, Kaihnsa, Nguyen and Shiu [21] proved that an at-most-bimolecular network admitting both multistationarity and absolute concentration robustness is at least two-dimensional and has at least three species and three reactions.

In this paper, we focus on the reaction networks with zero-one stoichiometric coefficients (i.e., zero-one networks). Our interests in zero-one networks are motivated by the fact that many important biochemical reaction networks in cell signaling are zero-one. For instance, in [32, Figure 2], eleven zero-one networks arising in cell signaling are listed, including cell cycle, hybrid histidine kinase, and so on. A related recent work is [34], where the authors find that the smallest zero-one networks that admit Hopf bifurcations are four-dimensional (also, they are four-species with five reactions).

The main contribution of this work is to answer Question 1 for the zero-one networks, and the main results are listed as follows.

	Network		Reduced Network
(a)	$S_0 + E_1 \rightleftharpoons S_0E_1 \rightarrow S_1 + E_1$ $S_0 + E_2 \rightleftharpoons S_0E_2 \rightarrow S_1 + E_2$ $S_0E_1 \rightleftharpoons S_0E_2$ $E_1 \rightleftharpoons E_2$ $S_1 \rightarrow S_0$	\rightarrow	$S_0 + E_1 \rightarrow S_0E_1 \rightarrow S_1 + E_1$ $S_0 + E_2 \rightarrow S_1 + E_2$ $S_0 + E_2 \rightarrow S_0E_1$ $E_1 \rightarrow E_2$ $S_1 \rightarrow S_0$
	Futile cycle with a two-state kinase [30, 31]		
(b)	$S_0 + E \rightleftharpoons S_0E \rightarrow S_1 + E$ $S_1 + E \rightleftharpoons S_1E \rightarrow S_2 + E$ $S_2 + F \rightleftharpoons S_2F \rightarrow S_1 + F$ $S_1 + F \rightleftharpoons S_1F \rightarrow S_0 + F$	\rightarrow	$S_0 + E \rightarrow S_0E \rightarrow S_1 + E$ $S_1 + E \rightarrow S_2 + E$ $S_2 + F \rightarrow S_1 + F$ $S_1 + F \rightarrow S_0 + F$
	Mitogenactivated protein kinase (MAPK) cascades [15, 31]		

Fig 1. Three-dimensional zero-one networks admitting multistability

- (1) A one-dimensional zero-one network admits at most one (stable) positive steady state (this steady state is also called a structural attractor [1]), and all the parameters (the total constants) can be completely classified according to if the network indeed has a (stable) positive steady state or not (see Theorem 2).
- (2) A two-dimensional zero-one network with up to three species either admits no multistationarity, or admits only degenerate positive steady states (see Theorem 3).
- (3) For a three-dimensional zero-one network with three species, if it admits nondegenerate multistationarity, then it has at least five reactions, and if it admits multistability, then it has at least six reactions (see Theorem 4).

It is worth mention that there indeed exist three-dimensional zero-one networks that admit multistability, which are biologically meaningful in applications. For instance, for the futile cycle and the MAPK cascades, one can get three-dimensional reduced networks (“subnetworks”) by removing some inverse reactions and intermediates, see Figure 1. It is also known that the multistability can be lifted from these three-dimensional networks to the original large networks [15, 30, 31].

As what has been said, the main goal of this work is to find the smallest zero-one networks that admit multistationarity/multistability. First, we start our study with the one-dimensional zero-one networks, and for any one-dimensional zero-one network, we prove the following nice properties: (a) one can determine whether the network admits positive steady states by reading off the non-zero rows of the stoichiometric matrix (Theorem 2 (I)); (b) one can explicitly describe all the total constants such that the corresponding positive stoichiometric compatibility class is non-empty, which is an open connected region (Lemma 7); (c) if a positive stoichiometric compatibility class is nonempty, then the network has no boundary steady state and is dissipative (Lemma 8 and Lemma 10); (d) a positive steady state is always nondegenerate and stable (Lemma 11). Based on the above results, we can prove the main result (Theorem 2) by applying the theorem based on the Brouwer degree theory (e.g., Theorem 1 [10, Theorem 1]).

Second, we prove the nondegenerate monostationarity for the two-dimensional zero-one networks with up to three species (Theorem 3). For a two-species network, we prove the nondegenerate monostationarity by reducing the steady-state system to a

quadratic equation (Lemma 14). For the three-species case, the main idea is to first prove the nondegenerate monostationarity by applying Theorem 1 again for the maximum networks (see the definition of “maximum network” in Definition 2), and then extend the result to all networks by the lifting theorem [5, Theorem 1]. In order to systematically study the maximum networks, we classify them into three classes (later, see (73)–(75)) by studying the conservation laws (Lemma 19). After that, we find that for two of the three classes, we can not apply Theorem 1 since the dissipativity can not be determined by the known criteria (see Remark 7). So, we apply the theory of real algebraic geometry (Lemma 43) to complete the proof. We also remark that in order to apply the lifting results, we go over the determinants of the Jacobian matrices for all the three-species networks by a computational method (Lemma 24).

Third, we pursue the smallest zero-one networks that admit nondegenerate multistationarity/multistability. Based on Theorem 2 and Theorem 3, we know that such networks should be at least three-species, and also, by Theorem 3, we know that if a three-species network admits nondegenerate multistationarity, then it should be at least three-dimensional. Then, by linear algebra and by a known result [2], we can conclude that a nondegenerate multistationary three-species network has at least five reactions (Theorem 4 (I)). Since all three-species zero-one networks with five reactions can be enumerated, we provide a computational procedure (see Figure 3), where the tool of computational real algebraic geometry `realrootclassification` [6] plays a key role, to search a multistationary/multistable network. We find that there indeed exists a network with five reactions admitting nondegenerate multistationarity (see Example 3). However, this procedure also confirms that the smallest multistable three-species zero-one networks have six reactions (see Theorem 4 (II) and Example 4).

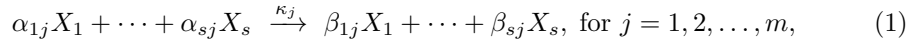
The rest of this paper is organized as follows. In Section 2, we review the basic notions and the definitions of multistationarity/multistability for the mass-action kinetics systems arising from reaction networks. In Section 3, we review a standard transformation of the Jacobian matrix using extreme rays, and we present a result (Lemma 5) on the sign of determinant of Jacobian matrix for a zero-one network. In Section 4, we prove the monostability for the one-dimensional zero-one networks (Theorem 2), and we illustrate (by small examples) how to efficiently determine the parameter region over which a one-dimensional zero-one network admits a stable positive steady state. In Section 5, we prove that a two-dimensional zero-one network with up to three species admits no multistationarity or only admits degenerate positive steady states (see Theorem 3). In Section 6, we prove that the smallest zero-one networks admitting nondegenerate multistationarity contain three species and five reactions, and we further prove by a computational approach that the smallest zero-one networks admitting multistability contain three species and six reactions (see Theorem 4). Besides, in Appendix 7, we provide a list of useful supporting materials including the classical criteria for checking stability (Appendix 7.1), the theory of real algebraic geometry (Appendix 7.2), and the enumeration of the maximum zero-one networks (Appendix 7.3).

2 Background

In Section 2.1, we briefly recall the standard notions and definitions for reaction networks, see [10] for more details. In Section 2.2, we present the definitions of multistationarity and multistability. Also, we review a useful criterion proposed in [10] for multistationarity (see Theorem 1), which will be used in Section 4 and Section 5.

2.1 Chemical reaction networks

A *reaction network* G (or *network* for short) consists of a set of s species $\{X_1, X_2, \dots, X_s\}$ and a set of m reactions:



where all α_{ij} and β_{ij} are non-negative integers, and $(\alpha_{1j}, \dots, \alpha_{sj}) \neq (\beta_{1j}, \dots, \beta_{sj})$. We say a reaction is a *zero-one reaction*, if the coefficients α_{ij} and β_{ij} in (1) belong to $\{0, 1\}$ for all $i \in \{1, \dots, s\}$ and $j \in \{1, \dots, m\}$. We say a network (1) is a *zero-one network* if it only has zero-one reactions. We call the $s \times m$ matrix with (i, j) -entry equal to $\beta_{ij} - \alpha_{ij}$ the *stoichiometric matrix* of G , denoted by \mathcal{N} . We call the $s \times m$ matrix the *reactant matrix* of G with (i, j) -entry equal to α_{ij} , denoted by \mathcal{Y} . We call the image of \mathcal{N} the *stoichiometric subspace*, denoted by S . For any $j \in \{1, \dots, m\}$, the reactant $\alpha_{1j}X_1 + \dots + \alpha_{sj}X_s$ and the product $\beta_{1j}X_1 + \dots + \beta_{sj}X_s$ are called the *complexes* of G .

We denote by x_1, \dots, x_s the concentrations of the species X_1, \dots, X_s , respectively. Under the assumption of mass-action kinetics, we describe how these concentrations change in time by the following system of ODEs:

$$\dot{x} = f(\kappa, x) := \mathcal{N}v(\kappa, x) = \mathcal{N} \begin{pmatrix} \kappa_1 \prod_{i=1}^s x_i^{\alpha_{i1}} \\ \kappa_2 \prod_{i=1}^s x_i^{\alpha_{i2}} \\ \vdots \\ \kappa_m \prod_{i=1}^s x_i^{\alpha_{im}} \end{pmatrix}, \quad (2)$$

where $x = (x_1, x_2, \dots, x_s)^\top$, $v(\kappa, x) = (v_1(\kappa, x), \dots, v_m(\kappa, x))^\top$ and

$$v_j(\kappa, x) := \kappa_j \prod_{i=1}^s x_i^{\alpha_{ij}}. \quad (3)$$

Each $\kappa_j \in \mathbb{R}_{>0}$ is called a *rate constant* corresponding to the j -th reaction in (1). By considering the rate constants as an unknown vector $\kappa := (\kappa_1, \kappa_2, \dots, \kappa_m)^\top$, we have polynomials $f_i(\kappa, x) \in \mathbb{Q}[\kappa, x]$, for $i \in \{1, \dots, s\}$.

Let $d := s - \text{rank}(\mathcal{N})$. A *conservation-law matrix* of G , denoted by W , is any row-reduced $d \times s$ -matrix whose rows form a basis of S^\perp (note here, $\text{rank}(W) = d$). The system (2) satisfies $W\dot{x} = 0$, and both $\mathbb{R}_{>0}^s$ and $\mathbb{R}_{\geq 0}^s$ are forward-invariant for the dynamics. So, any trajectory $x(t)$ beginning at a non-negative vector $x(0) = x^0 \in \mathbb{R}_{>0}^s$ remains, for all positive time, in the following *stoichiometric compatibility class* w.r.t. (with respect to) the *total-constant vector* $c := Wx^0 \in \mathbb{R}^d$:

$$\mathcal{P}_c := \{x \in \mathbb{R}_{\geq 0}^s \mid Wx = c\}. \quad (4)$$

That means \mathcal{P}_c is forward-invariant with respect to the dynamics (2). The *positive stoichiometric compatibility classes* are defined as the relative interior of \mathcal{P}_c , that is, the intersection of \mathcal{P}_c with the positive orthant:

$$\mathcal{P}_c^+ := \{x \in \mathbb{R}_{>0}^s \mid Wx = c\} = \mathcal{P}_c \cap \mathbb{R}_{>0}^s.$$

2.2 Multistationarity and multistability

A *steady state* of (2) is a concentration vector $x^* \in \mathbb{R}_{>0}^s$ such that $f(x^*) = 0$, where $f(x)$ is on the right-hand side of the ODEs (2). If all coordinates of a steady state x^*

are strictly positive (i.e., $x^* \in \mathbb{R}_{>0}^s$), then we call x^* a *positive steady state*. If a steady state x^* has zero coordinates (i.e., $x^* \in \mathbb{R}_{\geq 0}^s \setminus \mathbb{R}_{>0}^s$), then we call x^* a *boundary steady state*. We say a steady state x^* is *nondegenerate* if $\text{im}(\text{Jac}_f(x^*)|_S) = S$, where $\text{Jac}_f(x^*)$ denotes the Jacobian matrix of f w.r.t. x at x^* . A steady state x^* is *exponentially stable* (or, simply *stable* in this paper) if the steady state x^* is nondegenerate, and all non-zero eigenvalues of $\text{Jac}_f(x^*)$ have negative real parts. Note that if a steady state is exponentially stable, then it is locally asymptotically stable [26].

We suppose $N \in \mathbb{Z}_{\geq 0}$. We say a network *admits N (nondegenerate) positive steady states* if for some rate-constant vector κ and for some total-constant vector c , it has N (nondegenerate) positive steady states in the stoichiometric compatibility class \mathcal{P}_c . We say a network *admits N stable positive steady states* if for some rate-constant vector κ and for some total-constant vector c , it has N stable positive steady states in \mathcal{P}_c .

We say a network G admits *multistationarity* if G admits at least two positive steady states. We say a network G admits *multistability* if G admits at least two stable positive steady states.

We introduce a system from [13]. In order to analyze the steady states within a stoichiometric compatibility class, we use the conservation laws in place of linearly dependent steady-state equations, as follows. Recall that the conservation-law matrix W is row-reduced. Let $I = \{i_1, \dots, i_d\}$ be the indices of the first nonzero coordinate of the rows of W , and assume that $i_1 < i_2 < \dots < i_d$. Define

$$h_i := \begin{cases} f_i(x) & \text{if } i \notin I, \\ (Wx - c)_k & \text{if } i = i_k \in I, \end{cases} \quad (5)$$

where f_1, \dots, f_s are the polynomials defined in (2). Thus, define the system $h(\kappa, c, x)$ (abbreviated as h):

$$h := \{h_1, \dots, h_s\}. \quad (6)$$

We refer to system (6) as *the steady-state system augmented by conservation laws*. Note that for any $\kappa^* \in \mathbb{R}_{>0}^m$ and $c^* \in \mathbb{R}^d$, if $x^* \in \mathbb{R}_{>0}^s$ is a root of (6), then x^* is a steady state of the network G (1) in \mathcal{P}_{c^*} . Such a steady state x^* is nondegenerate if the matrix $\text{Jac}_h(x^*)$ has full rank (namely, equal to s), where we denote by $\text{Jac}_h(x^*)$ the Jacobian matrix of h w.r.t. x at x^* .

We say a reaction network is *dissipative* if for all stoichiometric compatibility classes \mathcal{P}_c , there exists a compact set where the trajectories of \mathcal{P}_c eventually enter. We say a reaction network is *conservative* if and only if the stoichiometric compatibility classes \mathcal{P}_c are compact subsets of $\mathbb{R}_{\geq 0}^n$.

Lemma 1. [10] *A conservative reaction network is dissipative.*

We define the *infinite norm* of the vector $x \in \mathbb{R}^s$ as

$$\|x\|_\infty := \max\{|x_1|, |x_2|, \dots, |x_s|\}. \quad (7)$$

Lemma 2. [10, Proposition 1] *Consider a network G defined as in (1). Let f be the steady-state system defined as in (2) corresponding to the network G . If for each c with $\mathcal{P}_c^+ \neq \emptyset$, there exist a vector $\omega \in \mathbb{R}_{>0}^s$ and a number $M > 0$ such that $\omega \cdot f(x) < 0$ for all $x \in \mathcal{P}_c$ with $\|x\|_\infty > M$, then the network G is dissipative.*

Theorem 1. [10, Theorem 1] *Consider a network G defined as in (1) with a rank- r stoichiometric matrix. Let h be the steady-state system augmented by conservation laws defined as in (6). Let \mathcal{P}_c be a stoichiometric compatibility class such that $\mathcal{P}_c^+ \neq \emptyset$, where $c \in \mathbb{R}^d$. Further, assume that*

(i) The network is dissipative.

(ii) There are no boundary steady states in \mathcal{P}_c .

Then, if

$$\text{sign}(\det(\text{Jac}_h(x))) = (-1)^r \quad \text{for all positive steady states } x \in \mathcal{P}_c^+,$$

then there is exactly one positive steady state in \mathcal{P}_c . Moreover, this steady state is nondegenerate.

3 Jacobian matrices of zero-one networks

In this section, we review a standard transformation of the Jacobian matrix using extreme rays (see [34, Section 4]). We also review two lemmas (see Lemmas 3–4) proved in [34], which reveal special properties of the transformed Jacobian matrices for zero-one networks. Then, for the zero-one networks, we study the sign of $\det(\text{Jac}_h)$ evaluating at nondegenerate positive steady states in Lemma 5. Later, in Section 4 and Section 5, we will use these lemmas to decide multistationarity.

Consider a network G (1) with a stoichiometric matrix \mathcal{N} and a reactant matrix \mathcal{Y} . Recall the system $\dot{x} = f(\kappa, x) = \mathcal{N}v(\kappa, x)$ defined as in (2). For any column vector $y := (y_1, \dots, y_s)^\top \in \mathbb{R}^s$, we denote by $\text{diag}(y)$ the $s \times s$ diagonal matrix with y_i on the diagonal. Then, the Jacobian matrix $\text{Jac}_f(\kappa, x)$ can be written as

$$\text{Jac}_f(\kappa, x) = \mathcal{N} \text{diag}(v(\kappa, x)) \mathcal{Y}^\top \text{diag}\left(\frac{1}{x}\right), \quad (8)$$

where $\frac{1}{x} := (\frac{1}{x_1}, \dots, \frac{1}{x_s})^\top$.

Next, we consider a transformation of the Jacobian matrix $\text{Jac}_f(\kappa, x)$ evaluated at the positive steady states. For the stoichiometric matrix $\mathcal{N} \in \mathbb{R}^{s \times m}$, the *flux cone* of \mathcal{N} is defined as

$$\mathcal{F}(\mathcal{N}) := \{\gamma \in \mathbb{R}_{\geq 0}^m : \mathcal{N}\gamma = \mathbf{0}\}, \quad (9)$$

where $\mathbf{0}$ denotes the vector whose coordinates are all zeros. Let $R^{(1)}, \dots, R^{(t)} \in \mathbb{R}_{\geq 0}^m$ be a fixed choice of representatives for the extreme rays of the flux cone $\mathcal{F}(\mathcal{N})$ (note here, it is known that the number of extreme rays is finite [9]). It is well-known that any $\gamma \in \mathcal{F}(\mathcal{N})$ can be written as

$$\gamma = \sum_{i=1}^t \lambda_i R^{(i)}, \quad \text{where } \lambda_i \geq 0 \text{ for any } i \in \{1, \dots, t\}. \quad (10)$$

We introduce the new variables $p_1, \dots, p_s, \lambda_1, \dots, \lambda_t$. Let $p := (p_1, \dots, p_s)^\top = \frac{1}{x}$, and let $\lambda := (\lambda_1, \dots, \lambda_t)^\top$. We define a new matrix in terms of p and λ :

$$J(p, \lambda) := \mathcal{N} \text{diag}\left(\sum_{i=1}^t \lambda_i R^{(i)}\right) \mathcal{Y}^\top \text{diag}(p). \quad (11)$$

Lemma 3. [34, Lemma 4.1] Consider a network G defined as in (1). Let f be the steady-state system defined as in (2). Let $J(p, \lambda) \in \mathbb{Q}[p, \lambda]^{s \times s}$ be the matrix defined as in (11). For any $\kappa \in \mathbb{R}_{> 0}^m$ and for any corresponding positive steady state $x \in \mathbb{R}_{> 0}^s$, there exist $p \in \mathbb{R}_{> 0}^s$ and $\lambda \in \mathbb{R}_{\geq 0}^t$ such that $J(p, \lambda) = \text{Jac}_f(\kappa, x)$.

Given $\mathcal{M} \in \mathbb{R}^{s \times s}$ and $I \subseteq \{1, \dots, s\}$, we denote by $\mathcal{M}[I, I]$ the submatrix of \mathcal{M} with entries of \mathcal{M} with indices (i, j) in $I \times I$.

Lemma 4. [34, Corollary 5.2, Lemma 5.4] Consider a zero-one network G defined as in (1). Let $J(p, \lambda) \in \mathbb{Q}[p, \lambda]^{s \times s}$ be the matrix defined as in (11). Then, we have the following statements.

(I) For any $I \subseteq \{1, \dots, s\}$ satisfying $|I| = 1$, $\det(J[I, I])$ is either a zero polynomial or a sum of terms with negative coefficients.

(II) For any $I \subseteq \{1, \dots, s\}$ satisfying $|I| = 2$, $\det(J[I, I])$ is either a zero polynomial or a sum of terms with positive coefficients.

Lemma 5. Consider an r -dimensional ($r \leq 2$) zero-one network G (1). Let h be the steady-state system augmented by conservation laws defined as in (6). For any $\kappa \in \mathbb{R}_{>0}^m$, for any $c \in \mathbb{R}^{s-r}$, and for any corresponding nondegenerate positive steady state x in \mathcal{P}_c^+ , we have

$$\text{sign}(\det(\text{Jac}_h(\kappa, x))) = (-1)^r. \quad (12)$$

Proof. Let f be the steady-state system defined as in (2). Since G is r -dimensional, by [37, Proposition 5.3], we have

$$\det(\text{Jac}_h) = \sum_{I \subseteq \{1, \dots, s\}, |I|=r} \det(\text{Jac}_f[I, I]). \quad (13)$$

Let $J(p, \lambda) \in \mathbb{Q}[p, \lambda]^{s \times s}$ be the matrix corresponding to G defined in (11). By Lemma 3, for any $\kappa \in \mathbb{R}_{>0}^m$ and for any corresponding positive steady state $x \in \mathbb{R}_{>0}^s$, there exist $p \in \mathbb{R}_{>0}^s$ and $\lambda \in \mathbb{R}_{\geq 0}^t$ such that $J(p, \lambda) = \text{Jac}_f(\kappa, x)$. So, we have

$$J(p, \lambda)[I, I] = \text{Jac}_f(\kappa, x)[I, I],$$

where $I \subseteq \{1, \dots, s\}$. Note that G is a zero-one network. If $|I| = 1$, then, by Lemma 4 (I), we get $\det(\text{Jac}_f[I, I]) \leq 0$. If $|I| = 2$, then, by Lemma 4 (II), $\det(\text{Jac}_f[I, I]) \geq 0$. Thus, by (13), for any $\kappa \in \mathbb{R}_{>0}^m$, for any $c \in \mathbb{R}^{s-r}$ and for any corresponding steady state x in \mathcal{P}_c^+ , we have $\text{sign}(\det(\text{Jac}_h(\kappa, x))) = (-1)^r$ or $\det(\text{Jac}_h(\kappa, x)) = 0$, where $r \in \{1, 2\}$. \square

4 One-dimensional zero-one networks

In Section 4.1, we present the main result for one-dimensional zero-one networks, see Theorem 2, and we illustrate by two examples how to apply the theorem to determine if a one-dimensional zero-one network admits a stable positive steady state. In Section 4.2, using Theorem 1, we prove Theorem 2.

4.1 Main result of one-dimensional zero-one networks

Consider a zero-one network G with a rank-one stoichiometric matrix \mathcal{N} . Without loss of generality, suppose that all row vectors of \mathcal{N} are generated by the last row vector \mathcal{N}_s , i.e., for any $i \in \{1, \dots, s-1\}$, there exists $a_i \in \mathbb{R}$ such that

$$\mathcal{N}_i = a_i \mathcal{N}_s. \quad (14)$$

For any $i \in \{1, \dots, s\}, j \in \{1, \dots, m\}$, we denote by \mathcal{N}_{ij} the (i, j) -th entry of \mathcal{N} . By the definition of zero-one network, for any $i \in \{1, \dots, s\}$ and for any $j \in \{1, \dots, m\}$,

$$\mathcal{N}_{ij} \in \{0, 1, -1\}. \quad (15)$$

Then, by (14) and (15), for any $i \in \{1, \dots, s-1\}$,

$$a_i \in \{0, 1, -1\}. \quad (16)$$

By (2) and (14), for any $i \in \{1, \dots, s-1\}$, $f_i = a_i f_s$. Hence, for any $i \in \{1, \dots, s-1\}$, the conservation law according to x_i can be written as $x_i = a_i x_s + c_i$. Thus, by (16), the conservation laws of the network have the following three forms. For any integer $i \in \{1, \dots, s-1\}$,

$$x_i = x_s + c_i, \quad (17)$$

$$x_i = -x_s + c_i, \quad (18)$$

$$x_i = c_i, \quad (19)$$

where $c_i \in \mathbb{R}$. By (17)–(19), we classify the indices of the species by defining three sets as follows.

$$\mathcal{J}_1 := \{i \mid x_i = x_s + c_i, i \in \{1, \dots, s-1\}\}, \quad (20)$$

$$\mathcal{J}_2 := \{i \mid x_i = -x_s + c_i, i \in \{1, \dots, s-1\}\}, \quad (21)$$

$$\mathcal{J}_3 := \{i \mid x_i = c_i, i \in \{1, \dots, s-1\}\}. \quad (22)$$

Definition 1. A row of a matrix is called a **non-zero row** if there exists a non-zero element in this row. If a row has both positive and negative elements, we say **the row changes sign**.

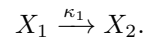
Theorem 2. Consider a zero-one network G with a rank-one stoichiometric matrix \mathcal{N} . Let the conservation laws be defined as in (17)–(19). Let \mathcal{J}_1 , \mathcal{J}_2 , and \mathcal{J}_3 be defined as in (20)–(22). We have the following statements.

- (I) If there exists a non-zero row of the matrix \mathcal{N} that does not change sign, then for any $c \in \mathbb{R}^{s-1}$, and for any $\kappa \in \mathbb{R}_{>0}^m$, the network G has no positive steady state in \mathcal{P}_c .
- (II) If all non-zero rows of the matrix \mathcal{N} change sign, then for any $c \in \mathbb{R}^{s-1}$, we have the following statements.
 - (i) If there exists $k \in \mathcal{J}_2 \cup \mathcal{J}_3$ such that $c_k \leq 0$ or there exists $(i, j) \in \mathcal{J}_1 \times \mathcal{J}_2$ such that $c_i + c_j \leq 0$, then for any $\kappa \in \mathbb{R}_{>0}^m$, the network G has no positive steady state in \mathcal{P}_c .
 - (ii) If $c_k > 0$ for any $k \in \mathcal{J}_2 \cup \mathcal{J}_3$, and $c_i + c_j > 0$ for any $(i, j) \in \mathcal{J}_1 \times \mathcal{J}_2$, then for any $\kappa \in \mathbb{R}_{>0}^m$, the network G has exactly one positive steady state in \mathcal{P}_c , and the positive steady state is stable.

Remark 1. The hypothesis “all non-zero rows of \mathcal{N} change sign” in Theorem 2 (II) is equivalent to “at least one non-zero row of \mathcal{N} changes sign” since the network G is one-dimensional.

Remark 2. Suppose that a one-dimensional zero-one network G satisfies the hypothesis of Theorem 2 (II). We remark that if $\mathcal{J}_2 \neq \emptyset$ or $\mathcal{J}_3 \neq \emptyset$, then both of the two cases (i) and (ii) indeed happen. And if $\mathcal{J}_2 = \mathcal{J}_3 = \emptyset$, then the case (i) can not happen, and the case (ii) must happen.

Example 1. Consider the following network G :

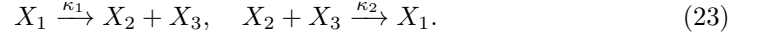


The stoichiometric matrix \mathcal{N} is

$$\begin{pmatrix} -1 \\ 1 \end{pmatrix}.$$

Notice that the first row of \mathcal{N} does not change sign. By Theorem 2 (I), for any $c \in \mathbb{R}$ and $\kappa \in \mathbb{R}_{>0}$, the network G has no positive steady state in \mathcal{P}_c .

Example 2. Consider the following network G :



The stoichiometric matrix \mathcal{N} is

$$\begin{pmatrix} -1 & 1 \\ 1 & -1 \\ 1 & -1 \end{pmatrix}.$$

The conservation laws are

$$x_1 = -x_3 + c_1, \quad \text{and} \quad x_2 = x_3 + c_2.$$

Notice that the first row vector of \mathcal{N} changes sign. By Theorem 2 (II), we know that if $c_1 \leq 0$ or $c_1 + c_2 \leq 0$, then for any $\kappa \in \mathbb{R}_{>0}^2$, G has no positive steady state in \mathcal{P}_c . If $c_1 > 0$ and $c_1 + c_2 > 0$, then for any $\kappa \in \mathbb{R}_{>0}^2$, G has exactly one positive steady state in \mathcal{P}_c , and the steady state is stable.

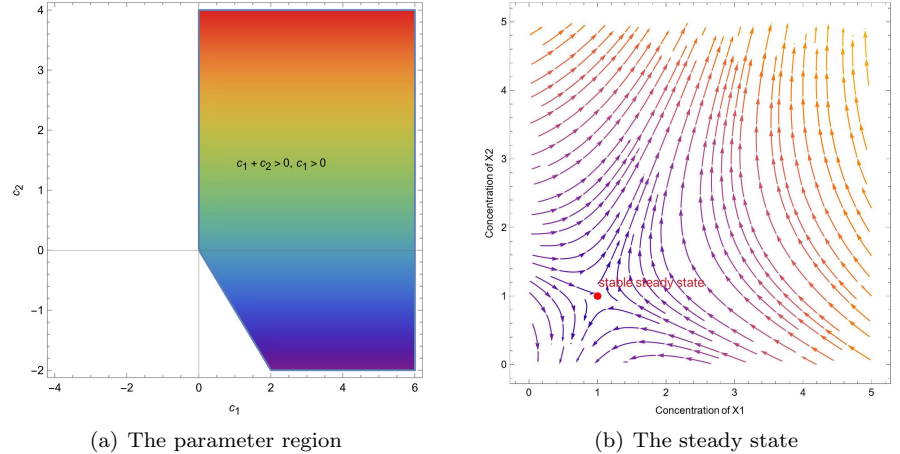


Fig 2. Illustrating Theorem 2 by Example 2. (a) The parameter region admits a (stable) steady state. (b) Let $\kappa_1 = \kappa_2 = 1$, $c_1 = 2$, $c_2 = 0$. We get a steady state $x = (1, 1, 1)^\top$, and it is stable.

4.2 Proof of Theorem 2

In this section, the goal is to prove Theorem 2. The main idea is to apply Theorem 1. In order to apply Theorem 1, we need to prepare some ingredients. First, we show that a one-dimensional zero-one network admits no boundary steady state in \mathcal{P}_c if $\mathcal{P}_c^+ \neq \emptyset$, see Lemma 8. Second, we show that a one-dimensional zero-one network is dissipative if $\mathcal{P}_c^+ \neq \emptyset$, see Lemma 10. Third, we prove that the determinant of Jacobian matrix evaluated at any positive steady state does not change sign, see Lemma 11. Finally, based on these results, we complete the proof.

Lemma 6. Consider a zero-one network G with a rank-one stoichiometric matrix \mathcal{N} . Let f_1, \dots, f_s be the polynomials defined as in (2). Let \mathcal{J}_i ($i = 1, 2, 3$) be defined as in (20)–(22). If all non-zero rows of \mathcal{N} change sign, then there exist two non-empty subsets τ_1 and τ_2 of $2^{\mathcal{J}_3}$ such that the network has the following form

$$\sum_{t \in \mathcal{J}_2} X_t + \sum_{t \in \sigma} X_t \xrightarrow{\kappa_\sigma} \sum_{t \in \{s\} \cup \mathcal{J}_1} X_t + \sum_{t \in \sigma} X_t, \text{ for each } \sigma \in \tau_1 \quad (24)$$

$$\sum_{t \in \{s\} \cup \mathcal{J}_1} X_t + \sum_{t \in \Lambda} X_t \xrightarrow{\kappa_\Lambda} \sum_{t \in \mathcal{J}_2} X_t + \sum_{t \in \Lambda} X_t, \text{ for each } \Lambda \in \tau_2, \quad (25)$$

where κ_σ and κ_Λ denote the rate constants, and, we have

$$f_s = - \sum_{\Lambda \in \tau_2} \kappa_\Lambda \prod_{t \in \Lambda \cup \{s\} \cup \mathcal{J}_1} x_t + \sum_{\sigma \in \tau_1} \kappa_\sigma \prod_{t \in \sigma \cup \mathcal{J}_2} x_t. \quad (26)$$

Proof. First, we can write down all reactions in G . For any $j \in \{1, \dots, m\}$, by (15), $\mathcal{N}_{sj} \in \{0, 1, -1\}$. Recall that by (14), all row vectors of \mathcal{N} can be generated by \mathcal{N}_s . For any $j \in \{1, \dots, m\}$, we notice that \mathcal{N}_{sj} can not be 0 (if $\mathcal{N}_{sj} = 0$, then by (14), for any $i \in \{1, \dots, s-1\}$, $\mathcal{N}_{ij} = 0$, which is contrary to the definition of reaction network). Since all non-zero rows of \mathcal{N} change sign, we get \mathcal{N}_s changes sign. Hence, 1 and -1 indeed appear in the coordinates of \mathcal{N}_s . For any $j \in \{1, \dots, m\}$, if $\mathcal{N}_{sj} = 1$, then for any $i \in \mathcal{J}_1$, by (14) and (20), $\mathcal{N}_{ij} = 1$, and for any $i \in \mathcal{J}_2$, by (14) and (21), $\mathcal{N}_{ij} = -1$. Notice that for any $i \in \mathcal{J}_3$, by (22), $\mathcal{N}_{ij} = 0$ (it means X_i appears in both the reactant and the product complex in the j -th reaction, or X_i does not appear in the j -th reaction). Hence, if $\mathcal{N}_{sj} = 1$, then the j -th reaction has the form (24). For any index $j \in \{1, \dots, m\}$, if $\mathcal{N}_{sj} = -1$, then for any $i \in \mathcal{J}_1$, by (14) and (20), $\mathcal{N}_{ij} = -1$, and for any $i \in \mathcal{J}_2$, by (14) and (21), $\mathcal{N}_{ij} = 1$. Note again that for any $i \in \mathcal{J}_3$, by (22), $\mathcal{N}_{ij} = 0$. Hence, if $\mathcal{N}_{sj} = -1$, then the j -th reaction has the form in (25). Thus, by (24) and (25), the polynomial f_s defined in (2) has the form (26). \square

Lemma 7. Consider a zero-one network G with a rank-one stoichiometric matrix \mathcal{N} . Let \mathcal{J}_i ($i = 1, 2, 3$) be defined as in (20)–(22). For any $c \in \mathbb{R}^{s-1}$, $\mathcal{P}_c^+ \neq \emptyset$ if and only if for any $k \in \mathcal{J}_2 \cup \mathcal{J}_3$, $c_k > 0$, and for any $(i, j) \in \mathcal{J}_1 \times \mathcal{J}_2$, $c_i + c_j > 0$.

Proof. “ \Rightarrow ”: For any $k \in \mathcal{J}_2 \cup \mathcal{J}_3$, by $\mathcal{P}_c^+ \neq \emptyset$ and by (21)–(22), we have $c_k > 0$. For any $i \in \mathcal{J}_1$ and for any $j \in \mathcal{J}_2$, substituting (17) into (18), we have

$$x_j + x_i = c_j + c_i. \quad (27)$$

So, by $\mathcal{P}_c^+ \neq \emptyset$ and by (27), we have $c_i + c_j > 0$.

“ \Leftarrow ”: Below we find a point x^* such that $x^* \in \mathcal{P}_c^+$. Let

$$x_s^* := \begin{cases} \frac{1}{2}(\min_{k \in \mathcal{J}_2} c_k - \min_{k \in \mathcal{J}_1} c_k), & \text{if } \min_{k \in \mathcal{J}_1} c_k < 0, \\ \frac{1}{2} \min_{k \in \mathcal{J}_2} c_k, & \text{if } \min_{k \in \mathcal{J}_1} c_k \geq 0, \end{cases} \quad (28)$$

$$x_i^* := x_s^* + c_i, \text{ for any } i \in \mathcal{J}_1, \quad (30)$$

$$x_j^* := -x_s^* + c_j, \text{ for any } j \in \mathcal{J}_2, \quad (31)$$

$$x_k^* := c_k, \text{ for any } k \in \mathcal{J}_3. \quad (32)$$

Then, the coordinates of x^* satisfy the conservation laws (17)–(19). Below, we prove that $x^* \in \mathbb{R}_{>0}^s$. First notice that for any $k \in \mathcal{J}_3$, since $c_k > 0$, by (32), $x_k^* > 0$. So, we only need to prove that $x_s^* > 0$ and for any $i \in \mathcal{J}_1 \cup \mathcal{J}_2$, $x_i^* > 0$.

- (I) Assume that $\min_{k \in \mathcal{J}_1} c_k < 0$. Note that $c_j > 0$ for any $j \in \mathcal{J}_2$. Then, by (28), we have $x_s^* > 0$. For any $i \in \mathcal{J}_1$, substitute (28) into (30), we have

$$\begin{aligned} x_i^* &= \frac{1}{2}(\min_{k \in \mathcal{J}_2} c_k - \min_{k \in \mathcal{J}_1} c_k) + c_i \\ &= \frac{1}{2}(\min_{k \in \mathcal{J}_2} c_k + c_i) + \frac{1}{2}(-\min_{k \in \mathcal{J}_1} c_k + c_i). \end{aligned} \quad (33)$$

Since for any $(i, j) \in \mathcal{J}_1 \times \mathcal{J}_2$, $c_i + c_j > 0$, we have $\min_{k \in \mathcal{J}_2} c_k + c_i > 0$. Note that for any $i \in \mathcal{J}_1$, we have $-\min_{k \in \mathcal{J}_1} c_k + c_i \geq 0$. Hence, by (33), for any $i \in \mathcal{J}_1$, $x_i^* > 0$. For any $j \in \mathcal{J}_2$, by (28) and (31),

$$\begin{aligned} x_j^* &= c_j - \frac{1}{2}(\min_{k \in \mathcal{J}_2} c_k - \min_{k \in \mathcal{J}_1} c_k) \\ &= \frac{1}{2}(c_j - \min_{k \in \mathcal{J}_2} c_k) + \frac{1}{2}(c_j + \min_{k \in \mathcal{J}_1} c_k). \end{aligned} \quad (34)$$

Since for any $(i, j) \in \mathcal{J}_1 \times \mathcal{J}_2$, $c_i + c_j > 0$, we have $c_j + \min_{k \in \mathcal{J}_1} c_k > 0$. Note that for any $j \in \mathcal{J}_2$, $c_j - \min_{k \in \mathcal{J}_2} c_k \geq 0$. Then, by (34), for any $j \in \mathcal{J}_2$, $x_j^* > 0$.

- (II) Assume that $\min_{k \in \mathcal{J}_1} c_k \geq 0$. Since for any $j \in \mathcal{J}_2$, $c_j > 0$, by (29), we have $x_s^* > 0$. By $\min_{k \in \mathcal{J}_1} c_k \geq 0$, for any $i \in \mathcal{J}_1$, $c_i \geq 0$. Hence, for any $i \in \mathcal{J}_1$, by (30), we have $x_i^* > 0$. By (29) and (31), we have $x_j^* = c_j - \frac{1}{2} \min_{k \in \mathcal{J}_2} c_k > 0$ for any $j \in \mathcal{J}_2$. □

Remark 3. By Lemma 7, the following region

$$\{c \in \mathbb{R}^{s-1} \mid c_k > 0, \text{ for any } k \in \mathcal{J}_2 \cup \mathcal{J}_3, \text{ and } c_i + c_j > 0, \text{ for any } (i, j) \in \mathcal{J}_1 \times \mathcal{J}_2\}$$

describes the parameter c such that $\mathcal{P}_c^+ \neq \emptyset$. Notice that this region is connected.

Lemma 8. Consider a zero-one network G with a rank-one stoichiometric matrix \mathcal{N} . Suppose that all non-zero rows of \mathcal{N} change sign. For any $c \in \mathbb{R}^{s-1}$, if $\mathcal{P}_c^+ \neq \emptyset$, then for any $\kappa \in \mathbb{R}_{>0}^m$, the network G has no boundary steady state in \mathcal{P}_c .

Proof. Let \mathcal{J}_i ($i = 1, 2, 3$) be defined as in (20)–(22). Since $\mathcal{P}_c^+ \neq \emptyset$, by Lemma 7,

$$c_k > 0, \text{ for any } k \in \mathcal{J}_2 \cup \mathcal{J}_3, \text{ and} \quad (35)$$

$$c_i + c_j > 0, \text{ for any } (i, j) \in \mathcal{J}_1 \times \mathcal{J}_2. \quad (36)$$

Below we prove the conclusion by contradiction. Assume that there exists $\kappa \in \mathbb{R}_{>0}^m$ such that G has a boundary steady state x in \mathcal{P}_c . By (22) and (35), for any $k \in \mathcal{J}_3$, $x_k > 0$.

- (I) Assume that there exists $i \in \{s\} \cup \mathcal{J}_1$ such that $x_i = 0$. By (21) and (35), for any $j \in \mathcal{J}_2$, x_s and x_j can not be 0 simultaneously. By (20), (21) and (36), for any $i \in \mathcal{J}_1$ and for any $j \in \mathcal{J}_2$, x_i and x_j can not be 0 simultaneously. Hence, for any $j \in \mathcal{J}_2$, $x_j > 0$. Note that since all non-zero rows of \mathcal{N} change sign, by Lemma 6, f_s has the form (26). Hence, we have

$$f_s(\kappa, x) = \sum_{\sigma \in \tau_1} \kappa_\sigma \prod_{t \in \sigma \cup \mathcal{J}_2} x_t > 0, \quad (37)$$

where $\tau_1 \in 2^{\mathcal{J}_3}$ and κ_σ are the rate constants.

(II) Assume that there exists $j \in \mathcal{J}_2$ such that $x_j = 0$. By a similar argument with the proof of case (I), we have $f_s(\kappa, x) < 0$.

Overall, we have $f_s(\kappa, x) \neq 0$, which is contrary to the fact that x is a boundary steady state in \mathcal{P}_c . \square

Lemma 9. *Consider a zero-one network G with a rank-one stoichiometric matrix \mathcal{N} . Let \mathcal{J}_i ($i = 1, 2, 3$) be defined as in (20)–(22). For any $c \in \mathbb{R}^{s-1}$, if $\mathcal{J}_2 \neq \emptyset$, then \mathcal{P}_c is compact.*

Proof. We suppose that $x \in \mathcal{P}_c$. By (21), since $\mathcal{J}_2 \neq \emptyset$, there exists $j \in \mathcal{J}_2$ such that $x_s + x_j = c_j$. So, by (4), we have $c_j \geq 0$ and hence, we have $x_s \leq c_j$. By (20), for any $i \in \mathcal{J}_1$, $x_i = x_s + c_i$. Hence, by $x_s \leq c_j$, we have $x_i \leq c_j + c_i$. By (21), for any $i \in \mathcal{J}_2$, $x_s + x_i = c_i$. Then, we have $x_i \leq c_i$. By (22), for any $i \in \mathcal{J}_3$, $x_i = c_i$. Therefore, \mathcal{P}_c is bounded. Clearly, \mathcal{P}_c is closed, and so, it is compact. \square

Lemma 10. *Consider a zero-one network G with a rank-one stoichiometric matrix \mathcal{N} . Suppose that all non-zero rows of \mathcal{N} change sign. For any $c \in \mathbb{R}^{s-1}$, if $\mathcal{P}_c^+ \neq \emptyset$, then the network G is dissipative.*

Proof. Let \mathcal{J}_i ($i = 1, 2, 3$) be defined as in (20)–(22). By Lemma 9, if $\mathcal{J}_2 \neq \emptyset$, then \mathcal{P}_c is compact, and hence it is conservative. So, by Lemma 1, it is dissipative. Below, we prove the conclusion by assuming that $\mathcal{J}_2 = \emptyset$. Since all non-zero rows of \mathcal{N} change sign, by Lemma 6, we have

$$f_s = - \sum_{\Lambda \in \tau_2} \kappa_\Lambda \prod_{t \in \Lambda \cup \mathcal{J}_1 \cup \{s\}} x_t + \sum_{\sigma \in \tau_1} \kappa_\sigma \prod_{i \in \sigma} x_i, \quad (38)$$

where τ_1 and τ_2 are non-empty subsets of $2^{\mathcal{J}_3}$ and κ_Λ and κ_σ are the rate constants of the reactions (24) and (25).

Below, we will prove that there exists $M > 0$ such that for any $x^* \in \mathcal{P}_c$ satisfying $\|x^*\|_\infty > M$, we have $f_s(x^*) < 0$. Since $\mathcal{P}_c^+ \neq \emptyset$, by Lemma 7, for any $k \in \mathcal{J}_3$, $c_k > 0$. Hence, for any $x^* \in \mathcal{P}_c$ and for any $k \in \mathcal{J}_3$, by (22), we have $x_k^* = c_k > 0$. Note that $\mathcal{J}_2 = \emptyset$. So, there exists a large enough real number M such that if $\|x^*\|_\infty > M$, then there exists $i \in \mathcal{J}_1 \cup \{s\}$ such that $x_i^* = \|x^*\|_\infty > M$. We claim that for any integer $j \in \mathcal{J}_1 \cup \{s\} \setminus \{i\}$, we have $x_j^* > M + b$, where b is a constant. In fact, if $i = s$, then for any $j \in \mathcal{J}_1$, by (20), $x_j^* > M + c_j$. If $i \neq s$, then by (20), $x_s^* > M - c_i$. Hence, for any $j \in \mathcal{J}_1 \setminus \{i\}$, by (20), $x_j^* > M - c_i + c_j$. Hence, by (38), if M is large enough, for any $x^* \in \mathcal{P}_c$ satisfying $\|x^*\|_\infty > M$, we have

$$f_s(x^*) < 0. \quad (39)$$

Note that for any $i \in \mathcal{J}_1$, by (20), we have

$$f_i = f_s, \quad (40)$$

and for any $k \in \mathcal{J}_3$, by (22), we have

$$f_k = 0. \quad (41)$$

Note again that $\mathcal{J}_2 = \emptyset$. Let $\omega := (1, \dots, 1)^\top \in \mathbb{R}_{>0}^s$ (here, all coordinates of ω are 1). Then, by (40) and (41), we have $\omega \cdot f(x) = (|\mathcal{J}_1| + 1)f_s(x)$. So, there exists a vector $\omega \in \mathbb{R}_{>0}^s$ and a number $M > 0$ such that $\omega \cdot f(x^*) < 0$ for all $x^* \in \mathcal{P}_c$ with $\|x^*\|_\infty > M$. Hence, by Lemma 2, the network is dissipative. \square

Lemma 11. Consider a zero-one network G with a rank-one stoichiometric matrix \mathcal{N} . Let h be the steady-state system augmented by conservation laws defined as in (6). If all non-zero rows of \mathcal{N} change sign, then for any $\kappa \in \mathbb{R}_{>0}^m$, for any $c \in \mathbb{R}^{s-1}$, and for any corresponding positive steady state x in \mathcal{P}_c^+ , we have $\det(\text{Jac}_h(\kappa, x)) < 0$.

Proof. Let f_1, \dots, f_s be the polynomials defined as in (2). Let \mathcal{J}_i ($i = 1, 2, 3$) be defined as in (20)–(22). By Lemma 6, we have

$$f_s = - \sum_{\Lambda \in \tau_2} \kappa_\Lambda \prod_{t \in \Lambda \cup \{s\} \cup \mathcal{J}_1} x_t + \sum_{\sigma \in \tau_1} \kappa_\sigma \prod_{t \in \sigma \cup \mathcal{J}_2} x_t, \quad (42)$$

where τ_1 and τ_2 are non-empty subsets of $2^{\mathcal{J}_3}$ and κ_Λ and κ_σ are the rate constants of the reactions (24) and (25). By (42), we have

$$\frac{\partial f_s}{\partial x_s}(\kappa, x) = - \sum_{\Lambda \in \tau_2} \kappa_\Lambda \prod_{t \in \Lambda \cup \mathcal{J}_1} x_t. \quad (43)$$

Note that for any $i \in \mathcal{J}_1$, we have $f_i = f_s$. Then, we have

$$\frac{\partial f_i}{\partial x_i}(\kappa, x) = - \sum_{\Lambda \in \tau_2} \kappa_\Lambda \prod_{t \in \Lambda \cup \{s\} \cup \mathcal{J}_1 \setminus \{i\}} x_t, \text{ for any } i \in \mathcal{J}_1. \quad (44)$$

Note that for any $i \in \mathcal{J}_2$, we have $f_i = -f_s$. So, we have

$$\frac{\partial f_i}{\partial x_i}(\kappa, x) = - \sum_{\sigma \in \tau_1} \kappa_\sigma \prod_{t \in \sigma \cup \mathcal{J}_2 \setminus \{i\}} x_t, \text{ for any } i \in \mathcal{J}_2. \quad (45)$$

Note that for any $i \in \mathcal{J}_3$, we have $f_i = 0$. Hence, we have

$$\frac{\partial f_i}{\partial x_i}(\kappa, x) = 0, \text{ for any } i \in \mathcal{J}_3. \quad (46)$$

By (43), (44), (45), and (46), we have

$$\begin{aligned} \sum_{i=1}^s \frac{\partial f_i}{\partial x_i}(\kappa, x) &= - \sum_{\Lambda \in \tau_2} \kappa_\Lambda \prod_{t \in \Lambda \cup \mathcal{J}_1} x_t - \sum_{i \in \mathcal{J}_1} \sum_{\Lambda \in \tau_2} \kappa_\Lambda \prod_{t \in \Lambda \cup \{s\} \cup \mathcal{J}_1 \setminus \{i\}} x_t \\ &\quad - \sum_{i \in \mathcal{J}_2} \sum_{\sigma \in \tau_1} \kappa_\sigma \prod_{t \in \sigma \cup \mathcal{J}_2 \setminus \{i\}} x_t. \end{aligned} \quad (47)$$

By (47), for any $\kappa \in \mathbb{R}_{>0}^m$ and for any corresponding positive steady state $x \in \mathbb{R}_{>0}^s$, we have $\sum_{i=1}^s \frac{\partial f_i}{\partial x_i}(\kappa, x) < 0$. Since the network G is one-dimensional, by [37, Proposition 5.3], $\det(\text{Jac}_h) = \sum_{i=1}^s \frac{\partial f_i}{\partial x_i}$. Therefore, for any $\kappa \in \mathbb{R}_{>0}^m$, for any $c \in \mathbb{R}^{s-1}$, and for any corresponding positive steady state x in \mathcal{P}_c^+ , we have $\det(\text{Jac}_h(\kappa, x)) < 0$. \square

Lemma 12. [35, Lemma 3.4] Consider a network G with a rank-one stoichiometric matrix \mathcal{N} . Let f_1, \dots, f_s be the polynomials defined as in (2). A nondegenerate steady state x is stable if and only if $\sum_{i=1}^s \frac{\partial f_i}{\partial x_i}(\kappa, x) < 0$.

proof of Theorem 2 (I) Let f_1, \dots, f_s be the polynomials defined as in (2). We assume that there exists $i \in \{1, \dots, s\}$ such that \mathcal{N}_i does not change sign. Thus, by (2), the coefficients of terms in $f_i(x)$ are all negative or all positive. Hence, for any $\kappa \in \mathbb{R}_{>0}^m$, $f_i(x) = 0$ has no positive solution. Therefore, G admits no positive steady state.

(II) (i) By Lemma 7, $\mathcal{P}_c^+ = \emptyset$. Hence, in this case, G admits no positive steady state.

(ii) By Lemma 7, $\mathcal{P}_c^+ \neq \emptyset$. By Lemma 8, there are no boundary steady states in \mathcal{P}_c . By Lemma 10, the network G is dissipative. By Lemma 11, for any $\kappa \in \mathbb{R}_{>0}^m$ and for any corresponding positive steady state x in \mathcal{P}_c^+ , $\det(\text{Jac}_h(\kappa, x)) < 0$. Hence, by Theorem 1, for any $\kappa \in \mathbb{R}_{>0}^m$, the network G has exactly one positive steady state in \mathcal{P}_c , and this steady state is nondegenerate. By Lemma 12, the nondegenerate positive steady state is stable.

5 Two-dimensional zero-one networks

In Section 5.1, we present the main result on two-dimensional zero-one networks in Theorem 3. In Section 5.2, we prove that for a two-dimensional zero-one network, any nondegenerate positive steady state is stable. In Section 5.3, we prove the conclusion of Theorem 3 for the two-dimensional zero-one networks with two species. In Section 5.4, we prove the conclusion of Theorem 3 for the two-dimensional zero-one networks with three species. In Section 5.5, we complete the proof of the main result Theorem 3.

5.1 Main result of two-dimensional zero-one networks

Theorem 3. *Consider a two-dimensional zero-one network G with up to three species. Then, the network G admits no multistationarity or G only admits degenerate positive steady states.*

Corollary 1. *A two-dimensional zero-one network G with up to three species admits no nondegenerate multistationarity. And if G admits one nondegenerate positive steady state, then the steady state is stable.*

Corollary 2. *If a zero-one network G with three species admits nondegenerate multistationarity, then the network G must have three dimensions.*

5.2 Stability of two-dimensional zero-one networks

Lemma 13. *Consider a two-dimensional zero-one network G . For any $\kappa \in \mathbb{R}_{>0}^m$ and for any $c \in \mathbb{R}^{s-2}$, if x is a nondegenerate positive steady state in \mathcal{P}_c , then x is stable.*

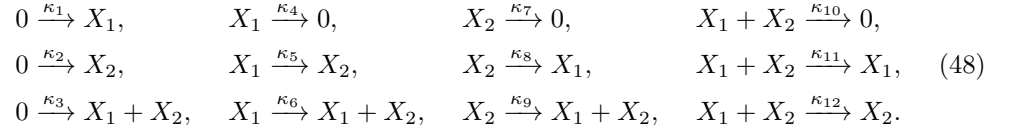
Proof. By Lemma 40 (see Appendix 7.1), we only need to prove that for any rate constant $\kappa^* \in \mathbb{R}_{>0}^m$, for any $c^* \in \mathbb{R}^{s-2}$ and for any corresponding nondegenerate positive steady state $x^* \in \mathbb{R}_{>0}^s$ in \mathcal{P}_{c^*} , we have $\det(\text{Jac}_h(\kappa^*, x^*)) > 0$ and $\sum_{i=1}^s \frac{\partial f_i}{\partial x_i}(\kappa^*, x^*) < 0$. Since x^* is a nondegenerate positive steady state, by Lemma 5, $\det(\text{Jac}_h(\kappa^*, x^*)) > 0$. Below we prove $\sum_{i=1}^s \frac{\partial f_i}{\partial x_i}(\kappa^*, x^*) < 0$. Since x^* is a positive steady state, for any $i \in \{1, \dots, s\}$, x^* is a positive solution to $f_i(\kappa^*, x) = 0$. Hence, for any $i \in \{1, \dots, s\}$, $f_i(\kappa^*, x)$ is a zero polynomial or $f_i(\kappa^*, x)$ has terms with both negative and positive coefficients. Since the network G is two-dimensional, there exists $j \in \{1, \dots, s\}$ such that $f_j(\kappa^*, x)$ has terms with both negative and positive coefficients. Hence, by the definition of zero-one network, $\frac{\partial f_j}{\partial x_j}(\kappa^*, x^*) < 0$. By Lemma 3 and Lemma 4 (I), for any $i \in \{1, \dots, s\} \setminus \{j\}$, $\frac{\partial f_i}{\partial x_i}(\kappa^*, x^*) \leq 0$. Therefore, $\sum_{i=1}^s \frac{\partial f_i}{\partial x_i}(\kappa^*, x^*) < 0$. \square

5.3 Two-dimensional zero-one networks with two species

In this section, we consider the two-species zero-one networks with rank-two stoichiometric matrices, and we give the main result as follows.

Lemma 14. *Consider a two-species zero-one network G with a rank-two stoichiometric matrix. Then, the network G admits no multistationarity or G only admits degenerate positive steady states.*

Proof. Notice that all possible zero-one reactions with two species are listed below:



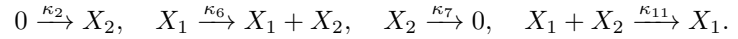
Suppose a two-dimensional network G consists of some of the above twelve reactions. The steady-state system f corresponding to the network G defined in (2) is:

$$\begin{aligned}
f_1 &= \kappa_1 + \kappa_3 - \kappa_4 x_1 - \kappa_5 x_1 + \kappa_8 x_2 + \kappa_9 x_2 - \kappa_{10} x_1 x_2 - \kappa_{12} x_1 x_2, \\
f_2 &= \kappa_2 + \kappa_3 + \kappa_5 x_1 + \kappa_6 x_1 - \kappa_7 x_2 - \kappa_8 x_2 - \kappa_{10} x_1 x_2 - \kappa_{11} x_1 x_2.
\end{aligned} \tag{49}$$

Note that $\kappa \in \mathbb{R}_{\geq 0}^{12}$ in (49). For any $\kappa \in \mathbb{R}_{\geq 0}^{12}$, we assume that x^* is a positive steady state of G . Solving x_1^* from $f_1(x^*) = 0$, we get

$$x_1^* = \frac{\kappa_1 + \kappa_3 + \kappa_8 x_2^* + \kappa_9 x_2^*}{\kappa_4 + \kappa_5 + \kappa_{10} x_2^* + \kappa_{12} x_2^*}. \tag{50}$$

Below we prove that (50) is well-defined by contradiction. If the denominator of the right-hand side of the equation (50) $\kappa_4 + \kappa_5 + \kappa_{10} x_2^* + \kappa_{12} x_2^* = 0$, then by $\kappa \in \mathbb{R}_{\geq 0}^{12}$, $\kappa_4 = \kappa_5 = \kappa_{10} = \kappa_{12} = 0$. Then, by $f_1(x^*) = 0$, we have $\kappa_1 + \kappa_3 + \kappa_8 x_2^* + \kappa_9 x_2^* = 0$. So, by $\kappa \in \mathbb{R}_{\geq 0}^{12}$, $\kappa_1 = \kappa_3 = \kappa_8 = \kappa_9 = 0$. Hence, the network has four reactions at most as follows.



Note that the network is one-dimensional. It is contrary to the condition. Hence, (50) is well-defined. We substitute (50) into $f_2(x^*) = 0$, and we get

$$\begin{aligned}
&((\kappa_{10} + \kappa_{11})(\kappa_8 + \kappa_9) + (\kappa_7 + \kappa_8)(\kappa_{10} + \kappa_{12}))x_2^{*2} + ((\kappa_1 + \kappa_3)(\kappa_{10} + \kappa_{11}) \\
&- (\kappa_5 + \kappa_6)(\kappa_8 + \kappa_9) - (\kappa_2 + \kappa_3)(\kappa_{10} + \kappa_{12}) + (\kappa_7 + \kappa_8)(\kappa_4 + \kappa_5))x_2^* \\
&- (\kappa_5 + \kappa_6)(\kappa_1 + \kappa_3) - (\kappa_2 + \kappa_3)(\kappa_4 + \kappa_5) = 0.
\end{aligned} \tag{51}$$

We denote by C_1 , C_2 and C_3 the coefficients of the quadratic term, linear term and constant term of (51), respectively. Note that the network G consists of some of twelve reactions in (48). So, we can classify $\{\kappa_1, \dots, \kappa_{12}\}$ into two following sets:

$$K_1 := \{i \in \{1, \dots, 12\} \mid \text{the } i\text{-th reaction appears in } G\}, \tag{52}$$

$$K_2 := \{i \in \{1, \dots, 12\} \mid \text{the } i\text{-th reaction does not appear in } G\}. \tag{53}$$

For any $i \in \{1, 2, 3\}$, we define

$$\tilde{C}_i := C_i|_{\kappa_i=0, \text{ for any } i \in K_2}. \tag{54}$$

We prove the conclusion by discussing the following two cases.

- (I) Assume that \tilde{C}_1 is not a zero polynomial. Note that by (51), for any $\kappa_i \in \mathbb{R}_{>0}$ (for any $i \in K_1$), we have $\tilde{C}_1 > 0$ and $\tilde{C}_3 \leq 0$. Hence, we have $(\tilde{C}_2^2 - 4\tilde{C}_1\tilde{C}_3) \geq 0$. If $(\tilde{C}_2^2 - 4\tilde{C}_1\tilde{C}_3) > 0$, by the Vieta's formulas, the quadratic equation (51) has one positive solution. Thus, for any $\kappa_i \in \mathbb{R}_{>0}$ (for any $i \in K_1$), the network G has exactly one nondegenerate positive steady state. If $(\tilde{C}_2^2 - 4\tilde{C}_1\tilde{C}_3) = 0$, then $\tilde{C}_2 = \tilde{C}_3 = 0$. Hence, by (51), the network G has no positive steady state. Thus, the network G admits no multistationarity.

(II) Assume that \tilde{C}_1 is a zero polynomial.

- (i) Assume that \tilde{C}_3 is not a zero polynomial. By (51), for any $\kappa_i \in \mathbb{R}_{>0}$ (for any $i \in K_1$), $\tilde{C}_3 < 0$. For any $\kappa_i \in \mathbb{R}_{>0}$ (for any $i \in K_1$), if $\tilde{C}_2 \leq 0$, then by (51), the network G has no positive steady state. If $\tilde{C}_2 > 0$, then by (51), the network G admits one nondegenerate positive steady state. Hence, the network G admits no multistationarity.
- (ii) Assume that \tilde{C}_3 is a zero polynomial. For any $\kappa_i \in \mathbb{R}_{>0}$ (for any $i \in K_1$), if $\tilde{C}_2 = 0$, then by (51), the network G only has degenerate positive steady states. If $\tilde{C}_2 \neq 0$, then by (51), the network G has no positive steady state. Therefore, the network G only admits degenerate positive steady states.

Hence, for any two-species zero-one network G with a rank-two stoichiometric matrix, the network G admits no multistationarity or G only admits degenerate positive steady states. \square

Remark 4. We remark that from the proof of Lemma 14, we can see that it is indeed possible for the network stated in Lemma 14 to admit only degenerate positive steady state. For instance, if the 4, 5, 6, 7, 8, 9-th reactions in (48) do not appear in the network, then the network only admits infinitely many degenerate positive steady states.

5.4 Two-dimensional zero-one networks with three species

In this section, we consider the three-species zero-one networks with rank-two stoichiometric matrices. We present the main result.

Lemma 15. Consider a three-species zero-one network G with a rank-two stoichiometric matrix. Then, the network G admits no multistationarity or the network G only admits degenerate positive steady states.

Remark 5. We remark that all two-dimensional zero-one networks with three species can be enumerated. We have checked all these networks by Maple [24], and we find that if a two-dimensional zero-one network with three species only admits degenerate positive steady states, then the network admits infinitely many degenerate positive steady states. The supporting codes are available online¹.

Definition 2. Consider an r -dimensional zero-one network G with s species, if the dimension becomes $r + 1$ when we add any zero-one reaction with s species into G , then we say G is a **maximum s -species network** (or, simply a **maximum network** if the number of species is fixed).

We prove Lemma 15 by the following steps. First, in Section 5.4.1, we show that there are only five types of conservation laws for a maximum three-species network with a rank-two stoichiometric matrix, see Lemma 16. Second, in Section 5.4.2, we show that a two-dimensional zero-one network with three-species either only admits degenerate positive steady states or only admits nondegenerate positive steady states, see Lemma 20. Third, in Section 5.4.3, we prove that any maximum three-species network with a rank-two stoichiometric matrix admits exactly one nondegenerate positive steady state, see Lemma 27. In the end, we complete the proof of Lemma 15 in Section 5.4.4.

¹<https://github.com/YueJ13/multistability/tree/main/degenerate>

5.4.1 Compatibility classes of maximum networks

For any three-species zero-one network G with a rank-two stoichiometric matrix \mathcal{N} , assume that the second and the third row vectors of the stoichiometric matrix \mathcal{N} are linearly independent. Recall that for any $i \in \{1, 2, 3\}$, we denote by \mathcal{N}_i the i -th row of \mathcal{N} . Thus, we have

$$\mathcal{N}_1 = a\mathcal{N}_2 + b\mathcal{N}_3, \quad (55)$$

where $a, b \in \mathbb{R}$. Then, the steady-state polynomial f_1 defined in (2) can be written as

$$f_1 = af_2 + bf_3. \quad (56)$$

So, the conservation law of the network can be written as

$$x_1 = ax_2 + bx_3 + c. \quad (57)$$

where $c \in \mathbb{R}$. The main goal of this section is to prove that there are five types of conservation laws for a maximum three-species network (Lemma 16).

Lemma 16. *Consider a maximum three-species network G with a rank-two stoichiometric matrix \mathcal{N} . Suppose that the conservation law $x_1 = ax_2 + bx_3 + c$ is defined as in (57). We can always get another conservation law by relabeling the species as $\bar{x}_1, \bar{x}_2, \bar{x}_3$ such that the conservation law $\bar{x}_1 = \bar{a}\bar{x}_2 + \bar{b}\bar{x}_3 + \bar{c}$ satisfies*

$$(|\bar{a}|, |\bar{b}|) \in \{(1, 0), (0, 1), (0, 0), (\frac{1}{2}, \frac{1}{2}), (1, 1)\}. \quad (58)$$

For any three-species zero-one network G with a rank-two stoichiometric matrix \mathcal{N} , we define a $2 \times m$ submatrix formed by the last two row vectors of \mathcal{N}

$$\mathcal{N}^* := \begin{pmatrix} \mathcal{N}_2 \\ \mathcal{N}_3 \end{pmatrix}. \quad (59)$$

Recall that we have assumed that \mathcal{N}_2 and \mathcal{N}_3 are linearly independent. So, the above matrix \mathcal{N}^* is also rank-two. For any $i \in \{1, \dots, m\}$, we denote by $col_i(\mathcal{N}^*)$ and $col_i(\mathcal{N})$ the i -th column of \mathcal{N}^* and the i -th column of \mathcal{N} , respectively. We define a 3×2 matrix

$$F := \begin{pmatrix} a & b \\ 1 & 0 \\ 0 & 1 \end{pmatrix}. \quad (60)$$

Then, by (55) and (59), for any $i \in \{1, \dots, m\}$, we have

$$Fcol_i(\mathcal{N}^*) = col_i(\mathcal{N}). \quad (61)$$

Lemma 17. *Consider a three-species zero-one network G with a rank-two stoichiometric matrix \mathcal{N} . Let \mathcal{N}^* be the submatrix formed by the last two row vectors of \mathcal{N} , see (59). Then, all the column vectors of \mathcal{N}^* are in the following set*

$$\mathcal{C}(\mathcal{N}^*) := \{(0, 1)^\top, (0, -1)^\top, (1, 0)^\top, (-1, 0)^\top, (1, 1)^\top, (-1, -1)^\top, (1, -1)^\top, (-1, 1)^\top\}. \quad (62)$$

Proof. Note that $\mathcal{C}(\mathcal{N}^*) = \{0, 1, -1\}^2 \setminus \{(0, 0)^\top\}$. Since the network is zero-one, all the elements of \mathcal{N}^* are in $\{0, 1, -1\}$. Hence, we only need to prove that $(0, 0)^\top$ can not be a column vector of \mathcal{N}^* . In fact, if there exists $j \in \{1, \dots, m\}$ such that $col_j(\mathcal{N}^*)$ is $(0, 0)^\top$, then, by (61), we get $col_j(\mathcal{N})$ is $(0, 0, 0)^\top$. It is contrary to the definition of the reaction network. \square

Lemma 18. Consider a maximum three-species network G with a rank-two stoichiometric matrix \mathcal{N} . Let \mathcal{N}^* be the submatrix formed by the last two rows of \mathcal{N} , see (59). Suppose that the conservation law $x_1 = ax_2 + bx_3 + c$ is defined as in (57). Then, we have the following statements.

- (1) If $a = 0$ and $b \neq 0$, then $|b| = 1$.
- (2) If $a \neq 0$ and $b = 0$, then $|a| = 1$.
- (3) For any column vector $\ell := (\ell_1, \ell_2)^\top$ in (62), the column vector ℓ is in \mathcal{N}^* if and only if $a\ell_1 + b\ell_2 \in \{-1, 0, 1\}$.
- (4) If $|a| \notin \{0, 1\}$, then $(1, 0)^\top$ or $(-1, 0)^\top$ is not a column vector of \mathcal{N}^* .
- (5) If $|b| \notin \{0, 1\}$, then $(0, 1)^\top$ or $(0, -1)^\top$ is not a column vector of \mathcal{N}^* .
- (6) If $|a| \notin \{0, 1\}$ and $|b| \notin \{0, 1\}$, then $a + b \in \{0, 1, -1\}$ and $a - b \in \{0, 1, -1\}$.
- (7) If $|a| > 1$ and $b \neq 0$, then $|b| = 1$.
- (8) If $a \neq 0$ and $|b| > 1$, then $|a| = 1$.
- (9) If $0 < |a| < 1$ and $b \neq 0$, then $0 < |b| < 1$.
- (10) If $a \neq 0$ and $0 < |b| < 1$, then $0 < |a| < 1$.
- (11) If $0 < |a| < 1$ and $0 < |b| < 1$, then $|a| = |b| = \frac{1}{2}$.
- (12) If $|a| > 1$ and $|b| = 1$, then we have $|a| = 2$.
- (13) If $|a| = 1$ and $|b| > 1$, then we have $|b| = 2$.
- (14) $(|a|, |b|) \in \{(1, 0), (0, 1), (0, 0), (2, 1), (1, 2), (\frac{1}{2}, \frac{1}{2}), (1, 1)\}$.

Proof. (1) If $a = 0$, then by (55), we have

$$\mathcal{N}_1 = b\mathcal{N}_3. \quad (63)$$

Since the network is zero-one, all the elements in \mathcal{N}_1 and \mathcal{N}_3 are in $\{0, 1, -1\}$. So, if $b \neq 0$, then by (63), we have $|b| = 1$.

- (2) The proof is similar to (1).
- (3) For any column vector $\ell := (\ell_1, \ell_2)^\top$ in (62), by (61), the column vector ℓ is in \mathcal{N}^* if and only if $F\ell$ is in \mathcal{N} . Thus, we only need to prove that $F\ell$ is in \mathcal{N} if and only if $a\ell_1 + b\ell_2 \in \{-1, 0, 1\}$. Since $\text{rank}(\mathcal{N}^*) = 2$, assume that $\text{col}_1(\mathcal{N}^*)$ and $\text{col}_2(\mathcal{N}^*)$ are linearly independent. Hence, by (61), we know that $\text{col}_1(\mathcal{N})$ and $\text{col}_2(\mathcal{N})$ are linearly independent. Note that G is a maximum network. So, a column vector is in \mathcal{N} if and only if it satisfies the following two conditions.

- (i) The column vector is a linear combination of $\text{col}_1(\mathcal{N})$ and $\text{col}_2(\mathcal{N})$.
- (ii) All the elements of the column vector are in $\{-1, 0, 1\}$.

First, we point out that $F\ell$ satisfies (i). In fact, by (62), there exist $r_1, r_2 \in \mathbb{R}$ such that $\ell = r_1\text{col}_1(\mathcal{N}^*) + r_2\text{col}_2(\mathcal{N}^*)$. Then, by (61), we have

$$F\ell = r_1\text{col}_1(\mathcal{N}) + r_2\text{col}_2(\mathcal{N}). \quad (64)$$

On the other hand, it is obvious that $F\ell$ satisfies the condition (ii) if and only if $a\ell_1 + b\ell_2 \in \{-1, 0, 1\}$. Thus, $F\ell$ is in \mathcal{N} if and only if $a\ell_1 + b\ell_2 \in \{-1, 0, 1\}$.

- (4) Since $|a| \notin \{0, 1\}$, we get $a = a \cdot 1 + b \cdot 0 \notin \{0, 1, -1\}$. By (3), we know that $(1, 0)^\top$ is not a column vector of \mathcal{N}^* . Similarly, one can argue that $(-1, 0)^\top$ is not a column vector of \mathcal{N}^* .
- (5) The proof is similar to (4).
- (6) If $|a| \notin \{0, 1\}$ and $|b| \notin \{0, 1\}$, then by (4) and (5), no column vectors in the set $\{(1, 0)^\top, (-1, 0)^\top, (0, 1)^\top, (0, -1)^\top\}$ appear in \mathcal{N}^* . Then, by Lemma 17, all the column vectors of \mathcal{N}^* are from the set

$$\begin{aligned} & \mathcal{C}(\mathcal{N}^*) \setminus \{(1, 0)^\top, (-1, 0)^\top, (0, 1)^\top, (0, -1)^\top\} \\ &= \{(1, 1)^\top, (-1, -1)^\top, (1, -1)^\top, (-1, 1)^\top\}. \end{aligned} \quad (65)$$

Since \mathcal{N} is rank-two, by (59), the submatrix \mathcal{N}^* is also rank-two. So, there exist two linearly independent column vectors in \mathcal{N}^* , which are from $\{(1, 1)^\top, (-1, -1)^\top\}$ and $\{(1, -1)^\top, (-1, 1)^\top\}$, respectively. By the fact that the network G is maximum, all the column vectors generated by these two column vectors appear in \mathcal{N}^* . Thus, all the elements in (65) indeed appear in the column vectors of \mathcal{N}^* . Without loss of generality, assume that $\text{col}_1(\mathcal{N}^*)$ is $(1, 1)^\top$ and $\text{col}_2(\mathcal{N}^*)$ is $(1, -1)^\top$. By (61), we get $\text{col}_1(\mathcal{N})$ and $\text{col}_2(\mathcal{N})$ is $(a + b, 1, 1)^\top$ and $(a - b, 1, -1)^\top$, respectively. By the definition of zero-one network, $a + b$ and $a - b$ are in $\{0, 1, -1\}$.

- (7) We prove it by contradiction. We assume that $|a| > 1$ and $|b| \notin \{0, 1\}$. By (6), if $|a| \notin \{0, 1\}$ and $|b| \notin \{0, 1\}$, then both $a + b$ and $a - b$ are in $\{0, 1, -1\}$. Since $|a| > 1$ and $|b| \notin \{0, 1\}$, by $a + b \in \{0, 1, -1\}$, a and b have different signs, and by $a - b \in \{0, 1, -1\}$, a and b have the same sign. It is contrary. So, if $|a| > 1$ and $|b| \neq 0$, then the only possibility is that $|b| = 1$.
- (8) The proof is similar to (7).
- (9) By (8), we know that if $|a| \neq 0$ and $|b| > 1$, then $|a| = 1$. Thus, if $0 < |a| < 1$ and $|b| \neq 0$, then we have $0 < |b| \leq 1$. Below, we prove that $|b| \neq 1$ by contradiction. Assume that $|b| = 1$. Since $0 < |a| < 1$ and $|b| = 1$, we get $a + b \notin \{0, 1, -1\}$ and $-a - b \notin \{0, 1, -1\}$. So, by (3), no column vectors in $\{(1, 1)^\top, (-1, -1)^\top\}$ appear in \mathcal{N}^* . Similarly, one can show that no column vectors in $\{(1, -1)^\top, (-1, 1)^\top\}$ appear in \mathcal{N}^* . Note that $|a| \notin \{0, 1\}$. Thus, by (4), no column vectors in the set $\{(1, 0)^\top, (-1, 0)^\top\}$ appear in \mathcal{N}^* . Hence, all the column vectors of \mathcal{N}^* are in $\{(0, 1)^\top, (0, -1)^\top\}$. So, the rank of \mathcal{N}^* is one, which is contrary to the fact that \mathcal{N}^* is rank-two. Therefore, if $0 < |a| < 1$ and $|b| \neq 0$, then $0 < |b| < 1$.
- (10) The proof is similar to (9).
- (11) If $0 < |a| < 1$ and $0 < |b| < 1$, then by (6), we know that both $a + b$ and $a - b$ are in $\{0, 1, -1\}$.
- If $a + b \in \{1, -1\}$ and $a - b = 0$, then we get $|a| = |b| = \frac{1}{2}$.
 - If $a + b = 0$ and $a - b \in \{1, -1\}$, then we get $|a| = |b| = \frac{1}{2}$.
 - If $a + b \in \{1, -1\}$ and $a - b \in \{1, -1\}$, then we can get $a \in \{0, 1, -1\}$ and $b \in \{0, 1, -1\}$, which is contrary to the assumption. (For instance, if $a + b = 1$ and $a - b = 1$, then we get $a = 1$ and $b = 0$.)
- (12) If $a \neq 0$ and $b \neq 0$, then by (55), \mathcal{N}_1 and \mathcal{N}_3 are linearly independent. Then, by (55),

$$\mathcal{N}_2 = \frac{1}{a}\mathcal{N}_1 - \frac{b}{a}\mathcal{N}_3. \quad (66)$$

Therefore, we get a new conservation law, in which x_2 can be written as

$$x_2 = \frac{1}{a}x_1 - \frac{b}{a}x_3 + c, \quad (67)$$

where $c \in \mathbb{R}$. By $|a| > 1$ and $|b| = 1$, we have $0 < |\frac{1}{a}| < 1$ and $0 < |\frac{b}{a}| < 1$. By (11), we have $|a| = 2$.

(13) The proof is similar to (12).

(14) By (1)–(2), if $a = 0$ or $b = 0$, then we have $(|a|, |b|) \in \{(0, 1), (1, 0)\}$. Assume that $a \neq 0$ and $b \neq 0$. By (9)–(11), if $0 < |a| < 1$ or $0 < |b| < 1$, then $(|a|, |b|) = (\frac{1}{2}, \frac{1}{2})$. If $|a| = 1$ and $|b| = 1$, then obviously, the conclusion holds. By (7) and (12), if $|a| > 1$ and $b \neq 0$, then $(|a|, |b|) = (2, 1)$. By (8) and (13), if $|b| > 1$ and $a \neq 0$, then we get $(|a|, |b|) = (1, 2)$. □

Lemma 19. *Consider a maximum three-species network G with a rank-two stoichiometric matrix \mathcal{N} . Suppose that the conservation law $x_1 = ax_2 + bx_3 + c$ is defined as in (57). If $(|a|, |b|) \in \{(2, 1), (1, 2)\}$, then, we can get another conservation law by relabeling the species as $\bar{x}_1, \bar{x}_2, \bar{x}_3$ such that the conservation law*

$$\bar{x}_1 = \bar{a}\bar{x}_2 + \bar{b}\bar{x}_3 + \bar{c}$$

satisfies that $(|\bar{a}|, |\bar{b}|) = (\frac{1}{2}, \frac{1}{2})$.

Proof. By the symmetry of a and b (i.e., we can always exchange the two species X_2 and X_3 in the network G by relabeling the species), we only need to prove the conclusion when $(|a|, |b|) = (2, 1)$. Note that by (57), we have

$$x_1 = ax_2 + bx_3 + c. \quad (68)$$

Note that $|a| = 2 (\neq 0)$. So, we can solve x_2 from (68), and we get

$$x_2 = \frac{1}{a}x_1 - \frac{b}{a}x_3 - \frac{c}{a}, \quad (69)$$

where $|\frac{1}{a}| = \frac{1}{2}$. Note also that $|b| = 1$. Hence, we have $|\frac{b}{a}| = \frac{1}{2}$. Let \bar{x}_1, \bar{x}_2 and \bar{x}_3 be equal to x_2, x_1 and x_3 , respectively. So, we get $(|\bar{a}|, |\bar{b}|) = (|\frac{1}{a}|, |-\frac{b}{a}|) = (\frac{1}{2}, \frac{1}{2})$. Then, by (69), we get the conclusion. □

proof of Lemma 16 By Lemma 18 (14), we have

$$(|a|, |b|) \in \{(1, 0), (0, 1), (0, 0), (2, 1), (2, 1), (\frac{1}{2}, \frac{1}{2}), (1, 1)\}. \quad (70)$$

Note that if $(|a|, |b|) \in \{(1, 0), (0, 1), (0, 0), (\frac{1}{2}, \frac{1}{2}), (1, 1)\}$, then the conclusion holds by letting \bar{x}_1, \bar{x}_2 and \bar{x}_3 equal to x_1, x_2 and x_3 , respectively. If $(|a|, |b|) \in \{(2, 1), (1, 2)\}$, then by Lemma 19, $(|\bar{a}|, |\bar{b}|) = (\frac{1}{2}, \frac{1}{2})$.

5.4.2 The sign of $\det(\text{Jac}_h)$

The goal of this section is to prove the following Lemma 20.

Lemma 20. *Consider a three-species zero-one network G with a rank-two stoichiometric matrix \mathcal{N} . Let h be the steady-state system augmented by conservation laws defined as in (6). Then, either the network G only admits degenerate positive steady states or for any $\kappa \in \mathbb{R}_{>0}^m$ and for any corresponding positive steady state $x \in \mathbb{R}_{>0}^3$, we have $\det(\text{Jac}_h(\kappa, x)) > 0$.*

Consider a three-species zero-one network G . Recall that by (57), the conservation law can be written as

$$x_1 = ax_2 + bx_3 + c, \quad (71)$$

where $c \in \mathbb{R}$. Define

$$\mathcal{G} := \{\text{the two-dimensional maximum three-species networks}\}. \quad (72)$$

Classify the networks of \mathcal{G} into three classes according to the values of (a, b) as follows.

$$\mathcal{G}_1 := \{G \mid (a, b) = (\frac{1}{2}, \frac{1}{2}), G \in \mathcal{G}\}, \quad (73)$$

$$\mathcal{G}_2 := \{G \mid (a, b) \in \{(1, 0), (0, 1), (0, 0)\}, G \in \mathcal{G}\}, \quad (74)$$


$$\mathcal{G}_3 := \mathcal{G} \setminus \{\mathcal{G}_1 \cup \mathcal{G}_2\}. \quad (75)$$

A *subnetwork* of the network G consists of some reactions in G [20]. We notice that the network G itself is the subnetwork of G . In order to prove Lemma 20, we give Lemma 23 and Lemma 26. In Lemma 23, we prove the conclusion for the two-dimensional subnetworks G of a network in \mathcal{G}_1 . In Lemma 26, we prove the conclusion for the two-dimensional subnetworks G of a network in $\mathcal{G}_2 \cup \mathcal{G}_3$.

Lemma 21. *Consider a maximum network G with a rank-two stoichiometric matrix \mathcal{N} . Recall that \mathcal{N}_{ij} denotes the (i, j) -th entry of \mathcal{N} , for any $(i, j) \in \{1, \dots, s\} \times \{1, \dots, m\}$. For any $j \in \{1, \dots, m\}$, we define*

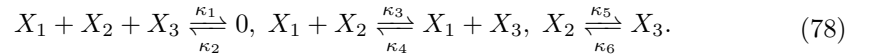
$$\begin{aligned} \zeta_{1j} &:= \{i \mid \mathcal{N}_{ij} = 0, \quad 1 \leq i \leq s\}, \\ \zeta_{2j} &:= \{i \mid \mathcal{N}_{ij} = -1, \quad 1 \leq i \leq s\}, \\ \zeta_{3j} &:= \{i \mid \mathcal{N}_{ij} = 1, \quad 1 \leq i \leq s\}. \end{aligned} \quad (76)$$

Then, there exists the following reaction in the network G .



Proof. Note that the corresponding column vector of the reaction (77) in \mathcal{N} is the same as the j -th column vector of \mathcal{N} . Note also that the network G is maximum. Hence, all column vectors which are linearly dependent with the i -th column vector of \mathcal{N} indeed appear in \mathcal{N} . Therefore, there exists the reaction (77) in the network. \square

Lemma 22. *Consider a network $G \in \mathcal{G}_1$. The network has the following form*



and, the corresponding steady-state system f defined as in (2) is

$$f_1 = -\kappa_1 x_1 x_2 x_3 + \kappa_2, \quad (79)$$

$$f_2 = -\kappa_1 x_1 x_2 x_3 - \kappa_3 x_1 x_2 + \kappa_4 x_1 x_3 - \kappa_5 x_2 + \kappa_6 x_3 + \kappa_2, \quad (80)$$

$$f_3 = -\kappa_1 x_1 x_2 x_3 + \kappa_3 x_1 x_2 - \kappa_4 x_1 x_3 + \kappa_5 x_2 - \kappa_6 x_3 + \kappa_2. \quad (81)$$

Proof. We denote by \mathcal{N} the stoichiometric matrix of the network G . Recall that \mathcal{N}^* (59) is the submatrix formed by the last two rows of \mathcal{N} . For any $i \in \{1, \dots, m\}$, we denote by $col_i(\mathcal{N}^*)$ and $col_i(\mathcal{N})$ the i -th column vector of \mathcal{N}^* and \mathcal{N} , respectively. By

(73), we get $(a, b) = (\frac{1}{2}, \frac{1}{2})$ (here, a and b are defined in $x_1 = ax_2 + bx_3 + c$ in (71)). Then, we have

$$(a, b) \cdot (-1, -1)^\top = \left(\frac{1}{2}, \frac{1}{2}\right) \cdot (-1, -1)^\top = -1.$$

So, by Lemma 18 (3), we can assume that $col_j(\mathcal{N}^*) = (-1, -1)^\top$, where $j \in \{1, \dots, m\}$. Similarly, we can assume that $col_k(\mathcal{N}^*) = (-1, 1)^\top$, where $k \in \{1, \dots, m\}$.


The purpose of this paragraph is to give all reactions in the network G . Recall that by (61), for any $i \in \{1, \dots, m\}$,

$$col_i(\mathcal{N}) = \begin{pmatrix} \frac{1}{2} & \frac{1}{2} \\ 1 & 0 \\ 0 & 1 \end{pmatrix} col_i(\mathcal{N}^*). \quad (82)$$

Since $col_j(\mathcal{N}^*)$ is $(-1, -1)^\top$, by (82), $col_j(\mathcal{N})$ is $(-1, -1, -1)^\top$. Hence, by Lemma 21, there exists a reaction in the network G as follows.



Since $col_k(\mathcal{N}^*)$ is $(-1, 1)^\top$, by (82), $col_k(\mathcal{N})$ is $(0, -1, 1)^\top$. Hence, by Lemma 21, there exists a reaction in the network G as follows.



Note that $col_j(\mathcal{N})$ and $col_k(\mathcal{N})$ are linearly independent. Hence, all column vectors of \mathcal{N} can be generated by $col_j(\mathcal{N})$ and $col_k(\mathcal{N})$. That means all reactions in the network G can be generated by (83) and (84). Hence, by the fact that the network G is maximum, the network G can be written as (78). By (78), the corresponding steady-state system f defined as in (2) has the form (79)–(81). \square

Lemma 23. *Consider a two-dimensional subnetwork G of a network in \mathcal{G}_1 . Let h be the steady-state system augmented by conservation laws defined as in (6). Then, for any $\kappa \in \mathbb{R}_{>0}^m$ and for any corresponding positive steady state $x \in \mathbb{R}_{>0}^3$, we get*

$$\det(\text{Jac}_h(\kappa, x)) > 0.$$

Proof. If the network $G \in \mathcal{G}_1$, then by Lemma 22, the steady-state system f is (79)–(81). By (71) and (73), the conservation law of G is $x_1 = \frac{1}{2}x_2 + \frac{1}{2}x_3 + c$. Hence, the steady-state system augmented by conservation laws h defined in (6) is

$$\begin{aligned} h_1 &= x_1 - \frac{1}{2}x_2 - \frac{1}{2}x_3 - c, \\ h_2 &= -\kappa_1 x_1 x_2 x_3 - \kappa_3 x_1 x_2 + \kappa_4 x_1 x_3 - \kappa_5 x_2 + \kappa_6 x_3 + \kappa_2, \\ h_3 &= -\kappa_1 x_1 x_2 x_3 + \kappa_3 x_1 x_2 - \kappa_4 x_1 x_3 + \kappa_5 x_2 - \kappa_6 x_3 + \kappa_2. \end{aligned} \quad (85)$$

Hence, it is straightforward to check that

$$\begin{aligned} \det(\text{Jac}_h) &= \kappa_1(2\kappa_3 x_1^2 x_2 + \kappa_3 x_1 x_2^2 + 2\kappa_4 x_1^2 x_3 + \kappa_4 x_1 x_3^2 + 2\kappa_5 x_1 x_2 + \\ &\quad \kappa_5 x_2 x_3 + 2\kappa_6 x_1 x_3 + \kappa_6 x_2 x_3). \end{aligned} \quad (86)$$

So, by (86), for any $\kappa \in \mathbb{R}_{>0}^6$ and for any corresponding positive steady state $x \in \mathbb{R}_{>0}^3$, we have $\det(\text{Jac}_h(\kappa, x)) > 0$.

If G is a two-dimensional subnetwork of a network \tilde{G} in \mathcal{G}_1 , then the reactions in G are some of the reactions in \tilde{G} . Note that by Lemma 23, \tilde{G} has the form (78). Assume that there are m ($m < 6$) reactions in G . We denote

$$M := \{i \mid \text{the } i\text{-th reaction in } \tilde{G} \text{ is in } G, 1 \leq i \leq 6\}. \quad (87)$$

Let the corresponding steady-state system of G and \tilde{G} are f and \tilde{f} , respectively. Then, we have

$$f(\kappa, x) = \tilde{f}(\kappa, x)|_{\kappa_i=0, \text{ for any } i \in \{1, \dots, 6\} \setminus M}. \quad (88)$$

Let the steady-state systems augmented by conservation laws of G and \tilde{G} are h and \tilde{h} , respectively. Then, we have

$$\det(\text{Jac}_h(\kappa, x)) = \det(\text{Jac}_{\tilde{h}}(\kappa, x))|_{\kappa_i=0, \text{ for any } i \in \{1, \dots, 6\} \setminus M}. \quad (89)$$

Below we prove that for any $\kappa \in \mathbb{R}_{>0}^m$ and for any corresponding positive steady state $x \in \mathbb{R}_{>0}^3$, $\det(\text{Jac}_h(\kappa, x)) > 0$. Since x is a positive steady state, by (79) and (88), we get κ_1 and κ_2 are either 0 simultaneously or not be 0 simultaneously. Since the network G is two-dimensional, by (78), we have κ_1 and κ_2 can not be 0 simultaneously and $\kappa_3, \kappa_4, \kappa_5$ and κ_6 can not be 0 simultaneously. So, by (86) and (89), $\det(\text{Jac}_{\tilde{h}}(\kappa, x)) > 0$. \square

In order to prove the conclusion in Lemma 20 for the networks in $\mathcal{G}_2 \cup \mathcal{G}_3$, we give the following notions. Suppose G is a network in \mathcal{G} . The stoichiometric matrix of G is \mathcal{N} . Recall that $\mathcal{F}(\mathcal{N})$ (9) denotes the flux cone of \mathcal{N} . For any $\gamma \in \mathcal{F}(\mathcal{N})$, we have

$$\gamma = \sum_{k=1}^t \lambda_k R^{(k)}, \quad (90)$$

where $R^{(1)}, \dots, R^{(t)} \in \mathbb{R}_{\geq 0}^m$ are a fixed choice of representation for the extreme rays of the flux cone $\mathcal{F}(\mathcal{N})$ and $\lambda_1, \dots, \lambda_t \in \mathbb{R}_{\geq 0}$. For any $r \in \{1, \dots, m\}$, denote by γ_r and $R_r^{(k)}$ the r -th coordinate of γ and $R^{(k)}$, respectively. Then, by (90), we have

$$\gamma_r = \sum_{k=1}^t \lambda_k R_r^{(k)}. \quad (91)$$

Let $J(p, \lambda)$ be the transformed Jacobian matrix defined in (11). We define

$$B(p, \lambda) := \sum_{I \subset \{1, 2, 3\}, |I|=2} \det(J(p, \lambda)[I, I]). \quad (92)$$

Note that by (11), the total degree of each entry of $J(p, \lambda)$ w.r.t. λ is at most 1. Thus, by (92), the total degree of each term of $B(p, \lambda)$ w.r.t. λ is at most 2. We define

$$\Theta := \{k \mid \exists \text{ a term in } B(p, \lambda) \text{ s.t. the degree of } \lambda_k \text{ in the term is 2}, k \in \{1, \dots, t\}\}, \quad (93)$$

and we define

$$\tilde{B}(p, \lambda) := B(p, \lambda)|_{\lambda_k=0, \text{ for any } k \in \Theta}. \quad (94)$$

For any $i \in \{1, \dots, m\}$, we define

$$q_i := \{k \mid R_i^{(k)} \neq 0, k \in \{1, \dots, t\}\}, \quad (95)$$

and for any $i, j \in \{1, \dots, m\}$, we define

$$\Lambda_{ij} := \{\lambda_k \lambda_\ell \mid k \in q_i, \ell \in q_j\}. \quad (96)$$

Finally, we define

$$\tilde{q}_i := q_i \setminus \Theta, \quad (97)$$

and for any $i, j \in \{1, \dots, m\}$, we define

$$\tilde{\Lambda}_{ij} := \{\lambda_k \lambda_\ell \mid k \in \tilde{q}_i, \ell \in \tilde{q}_j\}. \quad (98)$$

Lemma 24. Consider a network $G \in \mathcal{G}$. Let h be the steady-state system augmented by conservation laws defined as in (6). Let $\tilde{B}(p, \lambda)$ be defined as in (94). For any integers $i, j \in \{1, \dots, m\}$, let $\tilde{\Lambda}_{ij}$ be defined as in (98). If there exist $i, j \in \{1, \dots, m\}$ such that for any element in $\tilde{\Lambda}_{ij}$, there exists a term of $\tilde{B}(p, \lambda)$ such that this term can be divided by this element, then for any $\kappa \in \mathbb{R}_{>0}^m$ and for any corresponding positive steady state $x \in \mathbb{R}_{>0}^3$, we have $\det(\text{Jac}_h(\kappa, x)) > 0$.

Proof. By Lemma 5, for any $\kappa \in \mathbb{R}_{>0}^m$ and the corresponding positive steady state $x \in \mathbb{R}_{>0}^3$, we have $\det(\text{Jac}_h(\kappa, x)) \geq 0$. We prove the conclusion by contradiction. We assume that there exist $\kappa^* \in \mathbb{R}_{>0}^m$ and the corresponding positive steady state $x^* \in \mathbb{R}_{>0}^3$ such that $\det(\text{Jac}_h(\kappa^*, x^*)) = 0$. Hence, by Lemma 3, [37, Proposition 5.3] and (92), there exist $p^* \in \mathbb{R}_{>0}^3$ and $\lambda^* \in \mathbb{R}_{>0}^t$ such that

$$B(p^*, \lambda^*) = \det(\text{Jac}_h(\kappa^*, x^*)) = 0.$$

Then, by Lemma 4 (II), every term of $B(p, \lambda)$ evaluated at (p^*, λ^*) is 0. Note that by (94), any term of $\tilde{B}(p, \lambda)$ is also a term of $B(p, \lambda)$. So, every term of $\tilde{B}(p, \lambda)$ evaluated at (p^*, λ^*) is 0. Hence, $\tilde{B}(p^*, \lambda^*) = 0$.

Below we prove that if there exist $i, j \in \{1, \dots, m\}$ such that for any element in $\tilde{\Lambda}_{ij}$, there exists a term of $\tilde{B}(p, \lambda)$ such that this term can be divided by this element, then $\tilde{B}(p^*, \lambda^*) > 0$. Then, it will be contrary to $\tilde{B}(p^*, \lambda^*) = 0$. Therefore, for any $\kappa \in \mathbb{R}_{>0}^m$ and for any corresponding positive steady state $x \in \mathbb{R}_{>0}^3$, we have $\det(\text{Jac}_h(\kappa, x)) > 0$. Note that by (2), $\mathcal{N}v(\kappa^*, x^*) = 0$, where $v(\kappa^*, x^*) \in \mathbb{R}_{>0}^m$. Let $\gamma^* = v(\kappa^*, x^*)$. Then, by (9), $\gamma^* \in \mathcal{F}(\mathcal{N})$. Note that by (90), $\gamma^* = \sum_{k=1}^t \lambda_k^* R^{(k)}$. Note that $\gamma^* \in \mathbb{R}_{>0}^m$. Hence, by

(91), for any $r \in \{1, \dots, m\}$, there exists $k \in \{1, \dots, t\}$ such that $\lambda_k^* R_r^{(k)} > 0$ (i.e., $\lambda_k^* > 0$ and $R_r^{(k)} > 0$). So, by (95), $k \in q_r$. Below, we prove that $k \in \tilde{q}_r$ (i.e., $k \notin \Theta$). We prove it by contradiction. Assume that $k \in \Theta$, see (93). By (11), the total degree of each entry of $J(p, \lambda)$ w.r.t. λ is at most one. Hence, by (92), there exists a term in $B(p, \lambda)$ such that the term has the form $u(p)\lambda_k^2$, where $u(p) \in \mathbb{Q}[p]$. Recall that every term of $B(p, \lambda)$ evaluated at (p^*, λ^*) is 0. So, $u(p^*)\lambda_k^{*2} = 0$. Note that $p^* \in \mathbb{R}_{>0}^3$. Note also that, by Lemma 4 (II), the coefficient of every term of $B(p, \lambda)$ is positive. Hence, $\lambda_k^* = 0$. It is contrary to $\lambda_k^* > 0$. Thus, $k \in \tilde{q}_r$. Above all, for any $r \in \{1, \dots, m\}$, there exists $k \in \tilde{q}_r$ such that $\lambda_k^* > 0$. So, there exist $k_1 \in \tilde{q}_i$ and $k_2 \in \tilde{q}_j$ such that $\lambda_{k_1}^* \lambda_{k_2}^* > 0$. Note that for any element in $\tilde{\Lambda}_{ij}$, there exists a term in $\tilde{B}(p, \lambda)$ such that this term can be divided by this element. We recall that every term of $\tilde{B}(p, \lambda)$ is also a term of $B(p, \lambda)$. Hence, the total degree of each entry of $\tilde{B}(p, \lambda)$ w.r.t. λ is at most two. So, we have

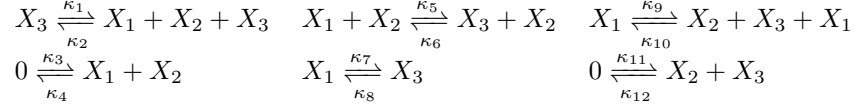
$$\tilde{B}(p, \lambda) = u_1(p)\lambda_{k_1}\lambda_{k_2} + u_2(p, \lambda), \quad (99)$$

where $u_1(p) \in \mathbb{Q}[p]$ and $u_2(p, \lambda) \in \mathbb{Q}[p, \lambda]$. Note that $p^* \in \mathbb{R}_{>0}^3$ and $\lambda^* \in \mathbb{R}_{>0}^t$. Hence, by Lemma 4 (II), we have $u_1(p^*) > 0$ and $u_2(p^*, \lambda^*) \geq 0$. Since $\lambda_{k_1}^* \lambda_{k_2}^* > 0$, we can get $u_1(p^*)\lambda_{k_1}^* \lambda_{k_2}^* > 0$. So, by (99), $\tilde{B}(p^*, \lambda^*) > 0$. \square

Remark 6. Note that if we replace $\tilde{B}(p, \lambda)$ (94) and $\tilde{\Lambda}_{ij}$ (98) respectively with $B(p, \lambda)$ (92) and Λ_{ij} (96) in Lemma 24, then the conclusion also holds. In practice, we find that $\tilde{B}(p, \lambda)$ usually has fewer terms than $B(p, \lambda)$. For instance, for the network (173) in \mathcal{G}_3 , (see Appendix 7.3), $B(p, \lambda)$ has 972 terms, and $\tilde{B}(p, \lambda)$ has 114 terms (see (102) and (105) later). Therefore, in the following proofs of Lemmas 25–26, we will apply a computational method to check if the hypothesis of Lemma 24 holds for $\tilde{B}(p, \lambda)$. We remark that if one hopes to complete the following proofs by checking $B(p, \lambda)$, it might be computationally infeasible.

Lemma 25. Consider a zero-one network $G \in \mathcal{G}_2 \cup \mathcal{G}_3$. Let h be the steady-state system augmented by conservation laws defined as in (6). Then, for any $\kappa \in \mathbb{R}_{>0}^m$ and for any corresponding positive steady state $x \in \mathbb{R}_{>0}^3$, we have $\det(\text{Jac}_h(\kappa, x)) > 0$.

Proof. Note that there are 9 networks in \mathcal{G}_2 and \mathcal{G}_3 . These networks are listed in Appendix 7.3. We choose one of them to state how Lemma 24 is used to determine it. Consider the following network (173) in \mathcal{G}_3 , see Appendix 7.3.



The stoichiometric matrix \mathcal{N} is

$$\begin{pmatrix} 1 & -1 & 1 & -1 & -1 & 1 & -1 & 1 & 0 & 0 & 0 & 0 \\ 1 & -1 & 1 & -1 & 0 & 0 & 0 & 0 & 1 & -1 & 1 & -1 \\ 0 & 0 & 0 & 0 & 1 & -1 & 1 & -1 & 1 & -1 & 1 & -1 \end{pmatrix}. \quad (100)$$

We calculate the extreme rays $R^{(1)}, \dots, R^{(t)}$ of the flux cone $\mathcal{F}(\mathcal{N})$ using **Mathematica**, and by (95), we have

$$\begin{aligned} q_1 &= \{14, 21, 24, 25, 28, 29\}, & q_2 &= \{2, 4, 11, 12, 13, 14\}, \\ q_3 &= \{12, 15, 16, 17, 18, 19\}, & q_4 &= \{3, 5, 10, 15, 20, 21\}, \\ q_5 &= \{6, 18, 19, 23, 28, 29\}, & q_6 &= \{10, 11, 13, 20, 22, 23\}, \\ q_7 &= \{7, 16, 17, 22, 24, 25\}, & q_8 &= \{2, 3, 4, 5, 6, 7\}, \\ q_9 &= \{2, 3, 13, 20, 26, 27\}, & q_{10} &= \{9, 16, 18, 24, 26, 28\}, \\ q_{11} &= \{4, 5, 8, 9, 10, 11\}, & q_{12} &= \{8, 17, 19, 25, 27, 29\}. \end{aligned} \quad (101)$$

By (92), we have

$$\begin{aligned} B(p, \lambda) &= \frac{1}{9}\lambda_2^2 p_1 p_3 + \frac{1}{9}\lambda_3^2 p_1 p_2 + \frac{1}{9}\lambda_4^2 p_1 p_3 + \frac{1}{9}\lambda_5^2 p_1 p_3 + \frac{1}{9}\lambda_{10}^2 p_1 p_2 + \frac{1}{9}\lambda_{11}^2 p_1 p_2 \\ &+ \frac{1}{9}\lambda_{13}^2 p_1 p_2 + \frac{1}{9}\lambda_{16}^2 p_1 p_2 + \frac{1}{9}\lambda_{17}^2 p_1 p_2 + \frac{1}{4}\lambda_{18}^2 p_1 p_3 + \frac{1}{4}\lambda_{19}^2 p_1 p_3 + \frac{1}{9}\lambda_{20}^2 p_1 p_2 \\ &+ \frac{1}{4}\lambda_{24}^2 p_1 p_2 + \frac{1}{4}\lambda_{25}^2 p_1 p_2 + \lambda_{28}^2 p_1 p_3 + \lambda_{29}^2 p_1 p_2 + \lambda_{14}\lambda_{23} p_1 p_2 + \lambda_{21}\lambda_{23} p_1 p_2 \\ &+ \lambda_{14}\lambda_{22} p_1 p_2 + \lambda_{21}\lambda_{22} p_1 p_2 + \dots, \end{aligned} \quad (102)$$

where we omit 952 items in the above polynomial. Recall that Θ is defined in (93). Thus, by (102), we have

$$\Theta = \{2, 3, 4, 5, 10, 11, 13, 16, 17, 18, 19, 20, 24, 25, 28, 29\}. \quad (103)$$

By (101) and (103), for \tilde{q}_i defined in (97), we have

$$\begin{aligned} \tilde{q}_1 &= \{14, 21\}, & \tilde{q}_2 &= \{12, 14\}, & \tilde{q}_3 &= \{12, 15\}, & \tilde{q}_4 &= \{15, 21\}, \\ \tilde{q}_5 &= \{6, 23\}, & \tilde{q}_6 &= \{22, 23\}, & \tilde{q}_7 &= \{7, 22\}, & \tilde{q}_8 &= \{6, 7\}, \\ \tilde{q}_9 &= \{26, 27\}, & \tilde{q}_{10} &= \{9, 26\}, & \tilde{q}_{11} &= \{8, 9\}, & \tilde{q}_{12} &= \{8, 27\}. \end{aligned} \quad (104)$$

By (102) and (103), for $\tilde{B}(p, \lambda)$ defined in (94), we have

$$\tilde{B}(p, \lambda) = \lambda_{14}\lambda_{23} p_1 p_2 + \lambda_{21}\lambda_{23} p_1 p_2 + \lambda_{14}\lambda_{22} p_1 p_2 + \lambda_{21}\lambda_{22} p_1 p_2 + \dots, \quad (105)$$

where we omit 110 items in the above polynomial. By (105), note that $\lambda_{14}\lambda_{23}$, $\lambda_{21}\lambda_{23}$, $\lambda_{14}\lambda_{22}$, and $\lambda_{21}\lambda_{22}$ appear in the terms of $\tilde{B}(p, \lambda)$. Also, note that

$$\tilde{\Lambda}_{16} = \{\lambda_{14}\lambda_{23}, \lambda_{21}\lambda_{23}, \lambda_{14}\lambda_{22}, \lambda_{21}\lambda_{22}\}.$$

Then, by Lemma 24, for any $\kappa \in \mathbb{R}_{>0}^m$ and for any corresponding positive steady state $x \in \mathbb{R}_{>0}^3$, we have $\det(\text{Jac}_h(\kappa, x)) > 0$. The other networks presented in Appendix 7.3 can be similarly proved. The supporting codes are available online². \square

Lemma 26. *Consider a two-dimensional subnetwork G of a network in $\mathcal{G}_2 \cup \mathcal{G}_3$. Let h be the steady-state system augmented by conservation laws defined as in (6). Then, either G only admits degenerate positive steady states or for any $\kappa \in \mathbb{R}_{>0}^m$ and for any corresponding positive steady state $x \in \mathbb{R}_{>0}^3$, we have $\det(\text{Jac}_h(\kappa, x)) > 0$.*

Proof. For any two-dimensional subnetwork, we first check by **Mathematica**. If for any $\kappa \in \mathbb{R}_{>0}^m$ and for any positive steady state $x \in \mathbb{R}_{>0}^3$, $\det(\text{Jac}_h(\kappa, x)) = 0$, then G only admits degenerate positive steady states and we get the conclusion. If there exists $\kappa \in \mathbb{R}_{>0}^m$ and there exists corresponding positive steady state $x \in \mathbb{R}_{>0}^3$ such that $\det(\text{Jac}_h(\kappa, x)) \neq 0$, then we can prove for any $\kappa \in \mathbb{R}_{>0}^m$ and for any corresponding positive steady state $x \in \mathbb{R}_{>0}^3$, $\det(\text{Jac}_h(\kappa, x)) > 0$ similar to the proof of Lemma 25. \square

5.4.3 The monostationarity of the networks in \mathcal{G}

Recall that \mathcal{G} is all two-dimensional maximum three-species networks defined as in (72). The main result of this section is the following lemma.

Lemma 27. *Consider a network $G \in \mathcal{G}$. Then, for any $c \in \mathbb{R}$, either $\mathcal{P}_c^+ = \emptyset$ or for any $\kappa \in \mathbb{R}_{>0}^m$, the network G has exactly one nondegenerate positive steady state in \mathcal{P}_c .*

Recall that \mathcal{G}_1 , \mathcal{G}_2 and \mathcal{G}_3 is a partition of \mathcal{G} defined in (73)–(75). In order to prove Lemma 27, we will prove the conclusion for the networks in \mathcal{G}_1 , \mathcal{G}_2 and \mathcal{G}_3 in Section 5.4.3, Section 5.4.3 and Section 5.4.3, respectively. In Section 5.4.3 and Section 5.4.3, we use the theory of real algebraic geometry (see Appendix 7.2) to prove the conclusion. In Section 5.4.3, we apply Theorem 1 to prove the conclusion, where the challenging/technical part is to prove that the networks in \mathcal{G}_3 are dissipative.

Remark 7. *We remark that for some networks in $\mathcal{G}_1 \cup \mathcal{G}_2$, we can not check if these networks are dissipative by Lemma 1 or Lemma 2. Hence, we can not prove the monostationarity of these networks by applying Theorem 1. For instance, by (73), the conservation law of the network G in \mathcal{G}_1 is $x_1 = \frac{1}{2}x_2 + \frac{1}{2}x_3$. Thus, the network G is not conservative. By Lemma 22, the steady-state system f is given in (79)–(81). Hence, for each c with $\mathcal{P}_c^+ \neq \emptyset$, for any $\omega = (\omega_1, \omega_2, \omega_3) \in \mathbb{R}_{>0}^3$ and for any $M > 0$, the sign of*

$$\omega \cdot f = (\omega_1 + \omega_2 + \omega_3)(-\kappa_1 x_1 x_2 x_3 + \kappa_2) + (\omega_2 - \omega_3)(-\kappa_3 x_1 x_2 + \kappa_4 x_1 x_3 - \kappa_5 x_2 + \kappa_6 x_3)$$

is uncertain for all $x \in \mathcal{P}_c$ with $\|x\|_\infty > M$. So, we can not check whether the network G is dissipative by Lemma 1 or Lemma 2.

The monostationarity of networks in \mathcal{G}_1

Lemma 28. *Consider a network $G \in \mathcal{G}_1$. Then, for any $c \in \mathbb{R}$ and for any $\kappa \in \mathbb{R}_{>0}^m$, the network G has exactly one nondegenerate positive steady state in \mathcal{P}_c .*

²[https://github.com/YueJ13/multistability/tree/main/jach positive](https://github.com/YueJ13/multistability/tree/main/jach%20positive)

Proof. By Lemma 22, the steady-state system f defined as in (2) has the form (79)–(81). For any $x \in \mathbb{R}_{>0}^3$, if x_1 or x_2 or x_3 is large enough, then by (79), we have

$$f_1(x^*) = -\kappa_1 x_1^* x_2^* x_3^* + \kappa_2 < 0.$$

Hence, the network G admits no positive steady state at infinity. Since $\kappa \in \mathbb{R}_{>0}^m$, for any $x \in \mathbb{R}_{>0}^3$, if $x_1 = 0$, $x_2 = 0$ or $x_3 = 0$, then, by (79), $f_1 > 0$. So, the network G admits no boundary steady state. By Lemma 23, for any $\kappa \in \mathbb{R}_{>0}^m$ and for any corresponding positive steady state $x \in \mathbb{R}_{>0}^3$, $\det(\text{Jac}_h(\kappa, x)) > 0$. By (73), the conservation law is $x_1 = \frac{1}{2}x_2 + \frac{1}{2}x_3 + c$ ($c \in \mathbb{R}$). So, the steady-state system augmented by conservation laws h defined in (6) is

$$h_1 = x_1 - \frac{1}{2}x_2 - \frac{1}{2}x_3 - c, \quad (106)$$

$$h_2 = f_2 = -\kappa_1 x_1 x_2 x_3 - \kappa_3 x_1 x_2 + \kappa_4 x_1 x_3 - \kappa_5 x_2 + \kappa_6 x_3 + \kappa_2, \quad (107)$$

$$h_3 = f_3 = -\kappa_1 x_1 x_2 x_3 + \kappa_3 x_1 x_2 - \kappa_4 x_1 x_3 + \kappa_5 x_2 - \kappa_6 x_3 + \kappa_2. \quad (108)$$

Let every coordinate of κ^* be 1. Let $c^* = 0$. Substitute κ^* and c^* into (106)–(108), we have

$$h_1 = x_1 - \frac{1}{2}x_2 - \frac{1}{2}x_3, \quad (109)$$

$$h_2 = -x_1 x_2 x_3 - x_1 x_2 + x_1 x_3 - x_2 + x_3 + 1, \quad (110)$$

$$h_3 = -x_1 x_2 x_3 + x_1 x_2 - x_1 x_3 + x_2 - x_3 + 1. \quad (111)$$

We solve x_1 , x_2 and x_3 from $h_1 = h_2 = h_3 = 0$. The network G has exactly one positive steady state $x^* = (1, 1, 1)^\top$ in \mathcal{P}_{c^*} . Note that the conservation law of the network G is $x_1 = \frac{1}{2}x_2 + \frac{1}{2}x_3 + c$. So, for any $c \in \mathbb{R}$, $\mathcal{P}_c^+ \neq \emptyset$. By Lemma 43 (see Appendix 7.2), for any $c \in \mathbb{R}$ and for any $\kappa \in \mathbb{R}_{>0}^m$, the network G has exactly one nondegenerate positive steady state in \mathcal{P}_c . \square

The monostationarity of networks in \mathcal{G}_2 In this section, we consider the networks in \mathcal{G}_2 . The main result of this section is Lemma 29.

Lemma 29. *Consider a network $G \in \mathcal{G}_2$. Then, for any $c \in \mathbb{R}$, either $\mathcal{P}_c^+ = \emptyset$ or for any $\kappa \in \mathbb{R}_{>0}^m$, the network G has exactly one nondegenerate positive steady state in \mathcal{P}_c .*

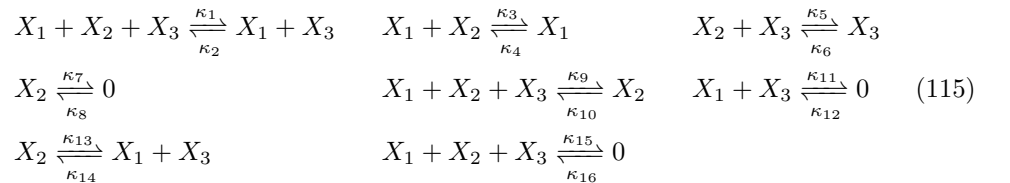
In order to prove Lemma 29, first we consider the conservation law of a network $G \in \mathcal{G}_2$. By the definition of \mathcal{G}_2 in (74), the conservation law of G is one of the following three expressions:

$$x_1 = x_3 + c, \quad (112)$$

$$x_1 = x_2 + c, \quad (113)$$

$$x_1 = c. \quad (114)$$

Lemma 30. *Consider a network $G \in \mathcal{G}_2$. Assume that the conservation law is (112). Then, the network G has the form as follows.*



And, the steady-state system f defined as in (2) is

$$f_1 = -x_1x_3((\kappa_9 + \kappa_{15})x_2 + \kappa_{11} + \kappa_{14}) + (\kappa_{10} + \kappa_{13})x_2 + \kappa_{12} + \kappa_{16}, \quad (116)$$

$$f_2 = -x_2((\kappa_1 + \kappa_{15})x_1x_3 + \kappa_3x_1 + \kappa_5x_3 + \kappa_7 + \kappa_{13}) \\ + (\kappa_2 + \kappa_{14})x_1x_3 + \kappa_4x_1 + \kappa_6x_3 + \kappa_8 + \kappa_{16}, \quad (117)$$

$$f_3 = -x_1x_3((\kappa_9 + \kappa_{15})x_2 + \kappa_{11} + \kappa_{14}) + (\kappa_{10} + \kappa_{13})x_2 + \kappa_{12} + \kappa_{16}. \quad (118)$$

Proof. We denote by \mathcal{N} the stoichiometric matrix of the network G . Recall that \mathcal{N}^* (59) is the submatrix formed by the last two row vectors of \mathcal{N} . For any $i \in \{1, \dots, m\}$, we denote by $col_i(\mathcal{N}^*)$ and $col_i(\mathcal{N})$ the i -th column vector of \mathcal{N}^* and \mathcal{N} , respectively. By (112), we have $(a, b) = (0, 1)$ (here, a and b are defined in $x_1 = ax_2 + bx_3 + c$ in (71)). Note that $(a, b) \cdot (1, 0) = 0$. Hence, by Lemma 18 (3), we can assume that $col_j(\mathcal{N}^*) = (1, 0)^\top$, where $j \in \{1, \dots, m\}$. We can assume that $col_k(\mathcal{N}^*) = (0, 1)^\top$, where $k \in \{1, \dots, m\}$, similarly.

The purpose of this paragraph is to give all reactions in the network G . Recall that by (61),

$$col_i(\mathcal{N}) = \begin{pmatrix} 0 & 1 \\ 1 & 0 \\ 0 & 1 \end{pmatrix} col_i(\mathcal{N}^*). \quad (119)$$

Since $col_j(\mathcal{N}^*)$ is $(1, 0)^\top$, by (119), $col_j(\mathcal{N})$ is $(0, 1, 0)^\top$. Hence, by Lemma 21, there exists a reaction in the network G as follows.



Since $col_k(\mathcal{N}^*)$ is $(0, 1)^\top$, by (119), $col_k(\mathcal{N})$ is $(1, 0, 1)^\top$. Hence, by Lemma 21, there exists a reaction in the network G as follows.



Note that $col_j(\mathcal{N})$ and $col_k(\mathcal{N})$ are linearly independent. Hence, all column vectors of \mathcal{N} can be generated by $col_j(\mathcal{N})$ and $col_k(\mathcal{N})$. That means all reactions in the network G can be generated by (120) and (121). Thus, by the fact that G is maximum, the network G can be written as (115). By (115), the steady-state system f defined as in (2) has the form (116)–(118). \square

proof of Lemma 29 (I) Assume that the conservation law of the network G is (112). By Lemma 30, the steady-state system f defined as in (2) is (116)–(118). Below we prove that for any $x \in \mathbb{R}_{>0}^3$, if x_2 is large enough, then $f_2(x) < 0$ and if x_1 or x_3 is large enough, then $f_3(x) < 0$. If x_2 is large enough, then by (117), we have $f_2(x) < 0$. If x_1 or x_3 is large enough, then by (118), we have $f_3(x) < 0$. Since $f_2(x) < 0$ or $f_3(x) < 0$, the network G admits no positive steady state at infinity. Since $\kappa \in \mathbb{R}_{>0}^{16}$, for any $x \in \mathbb{R}_{>0}^3$, if $x_1 = 0$ or $x_3 = 0$, then by (116), we get $f_1(x) > 0$. Since $\kappa \in \mathbb{R}_{>0}^{16}$, for any $x \in \mathbb{R}_{>0}^3$, if $x_2 = 0$, then by (117), $f_2(x) > 0$. Thus, the network G admits no boundary steady state. By Lemma 25, for any $\kappa \in \mathbb{R}_{>0}^m$, for any $c \in \mathbb{R}$, and for any corresponding positive steady state $x \in \mathbb{R}_{>0}^3$, $\det(\text{Jac}_h(\kappa, x)) > 0$. Recall that the conservation law is (112). Hence, the steady-state system augmented by conservation laws h defined in (6) is $(h_1, h_2, h_3) = (x_1 - x_3 - c, f_2, f_3)$, where f_2 and f_3 is (117) and (118). Let every coordinate of κ^* be 1. Let $c^* = 0$. Substitute κ^* and c^* into h , we have

$$h_1 = x_1 - x_3, \quad (122)$$

$$h_2 = (-x_2 + 1)(2x_1x_3 + x_1 + x_3 + 2), \quad (123)$$

$$h_3 = 2(-x_1x_3 + 1)(x_2 + 1). \quad (124)$$

We solve x_1 , x_2 and x_3 from $h_1 = h_2 = h_3 = 0$. The network G has exactly one positive steady state $x^* = (1, 1, 1)^\top$ in \mathcal{P}_{c^*} . Note that by (112), for any $c \in \mathbb{R}$, $\mathcal{P}_c^+ \neq \emptyset$. By Lemma 43 (see Appendix 7.2), for any $c \in \mathbb{R}$ and for any $\kappa \in \mathbb{R}_{>0}^m$, G has exactly one nondegenerate positive steady state in \mathcal{P}_c .

(II) Assume that the conservation law of the network G is (113). Note that we can exchange the two species X_2 and X_3 in the network G by relabeling the species. Hence, by the proof (I), we get the conclusion.

(III) Assume that the conservation law of the network G is (114). If $c \leq 0$, then by (114), $x_1 = c \leq 0$ (i.e., $\mathcal{P}_c^+ = \emptyset$). If $c > 0$, then for any $c \in \mathbb{R}_{>0}$, $x_1 = c > 0$ is a constant. Thus, we can consider the network G as a two-dimensional zero-one networks with two species. By the proof of Lemma 14, the network G has exactly one nondegenerate positive steady state in \mathcal{P}_c . Therefore, The conclusion of Lemma 29 holds.

The monostationarity of networks in \mathcal{G}_3 In this section, we consider the networks in \mathcal{G}_3 . The main result is Lemma 31.

Lemma 31. *Consider a network $G \in \mathcal{G}_3$. Then, for any $c \in \mathbb{R}$, either $\mathcal{P}_c^+ = \emptyset$ or for any $\kappa \in \mathbb{R}_{>0}^m$, the network G has exactly one nondegenerate positive steady state in \mathcal{P}_c .*

In order to prove Lemma 31, we first give the possible conservation laws of a network G in \mathcal{G}_3 in Lemma 32. Second, we prove that the network G is dissipative by four cases respectively in Lemma 33, Lemma 36, Lemma 37 and Lemma 38. Third, we prove in Lemma 39 that the network G admits no boundary steady states. Finally, we prove Lemma 31 by applying Theorem 1.

Lemma 32. *Consider a network $G \in \mathcal{G}_3$. Then, the conservation law of G has one of the following forms.*

$$x_1 = -x_2 - x_3 + c, \quad (125)$$

$$x_1 = -\frac{1}{2}x_2 - \frac{1}{2}x_3 + c, \quad (126)$$

$$x_1 = -x_3 + c, \text{ or } x_1 = -x_2 + c, \quad (127)$$

$$x_1 = \frac{1}{2}x_2 - \frac{1}{2}x_3 + c, \text{ or } x_1 = -\frac{1}{2}x_2 + \frac{1}{2}x_3 + c, \quad (128)$$

$$x_1 = x_2 - x_3 + c, \text{ or } x_1 = -x_2 + x_3 + c, \quad (129)$$

$$x_1 = x_2 + x_3 + c. \quad (130)$$

Proof. Recall that the conservation law has the form $x_1 = ax_2 + bx_3 + c$ defined as in (71). By Lemma 16, we have $(|a|, |b|) = (1, 0), (0, 1), (0, 0), (\frac{1}{2}, \frac{1}{2})$ or $(1, 1)$. Recall that $\mathcal{G}_3 = \mathcal{G} \setminus \{\mathcal{G}_2 \cup \mathcal{G}_1\}$ is defined in (75) and $\mathcal{G}_2 = \{G \mid (a, b) \in \{(1, 0), (0, 1), (0, 0)\}\}$ is defined as in (74). If $(|a|, |b|) = (1, 0), (0, 1)$ or $(0, 0)$, then, by $G \notin \mathcal{G}_2$, the conservation law has the form (127). Recall that $\mathcal{G}_1 = \{G \mid (a, b) = (\frac{1}{2}, \frac{1}{2})\}$ defined as in (73). If $(|a|, |b|) = (\frac{1}{2}, \frac{1}{2})$ or $(1, 1)$, then, by $G \notin \mathcal{G}_1$, the conservation law has the form (125)–(126) and (128)–(130). \square

Lemma 33. *Consider a network $G \in \mathcal{G}_3$. Assume that the conservation law has the form (125) or (126). Then, the network G is dissipative.*

Proof. Assume that the conservation law has the form (125), i.e., $x_1 + x_2 + x_3 = c$. Since $\mathcal{P}_c^+ \neq \emptyset$, $c > 0$. Hence, for any $x^* \in \mathcal{P}_c$, $x_1^* \leq c$, $x_2^* \leq c$ and $x_3^* \leq c$. Thus, \mathcal{P}_c is a compact set. Hence, the network G is conservative. Thus, by Lemma 1, the network G is dissipative. Assume that the conservation law has the form (126). Then, the proof is similar to the first case. \square

Lemma 34. Consider a network $G \in \mathcal{G}_3$. Let f be the steady-state system defined as in (2). The conservation law has the form $x_1 = ax_2 + bx_3 + c$. If $\text{sgn}(b) < 0$, then, there exists $\omega \in \mathbb{R}_{>0}^3$ such that $\omega \cdot f = f_2$.

Proof. By (71), we have $f_1 = af_2 + bf_3$. So, for any $y = (y_1, y_2, y_3)^\top \in \mathbb{R}_{>0}^3$, we have

$$y \cdot f = (y_1a + y_2)f_2 + (y_1b + y_3)f_3. \quad (131)$$

Let $y_1 = -\frac{1}{b}$. By $\text{sgn}(b) < 0$, $y_1 > 0$. Let $y_3 = 1$ and $y_2 = |-\frac{a}{b}| + 1$. So, by (131), we have

$$y \cdot f = \left(-\frac{a}{b} + \left|-\frac{a}{b}\right| + 1\right)f_2. \quad (132)$$

Let $\omega = \frac{y}{-\frac{a}{b} + \left|-\frac{a}{b}\right| + 1}$. So, there exists $\omega \in \mathbb{R}_{>0}^3$ such that $\omega \cdot f = f_2$. \square

Lemma 35. Consider a network $G \in \mathcal{G}_3$. Assume that the conservation law is (127), (128) or (129). For any $c \in \mathbb{R}$, if $\mathcal{P}_c^+ \neq \emptyset$, then for any $R > 0$, there exists $M > 0$ such that for any $x \in \mathcal{P}_c$ satisfying $\|x\|_\infty > M$, we have $x_2 > R$.

Proof. (i) Assume that the conservation law has the form (127). Note that we can exchange the two species X_2 and X_3 in the network G by relabeling the species. Hence, we only need to consider the conservation law with the form $x_1 = -x_3 + c$. By $\mathcal{P}_c^+ \neq \emptyset$, $c > 0$. Then, by $x \in \mathcal{P}_c$, we have $x_1 \leq c$ and $x_3 \leq c$. For any $R > 0$, we let $M = R + c$. Then for any $x \in \mathcal{P}_c$ satisfying $\|x\|_\infty > M$, we have $x_2 = \|x\|_\infty > M > R$.

(ii) Assume that the conservation law has the form (128). Note that we can exchange the two species X_2 and X_3 in the network G by relabeling the species. Hence, we only need to consider the conservation law with the form $x_1 = \frac{1}{2}x_2 - \frac{1}{2}x_3 + c$. For any $c \in \mathbb{R}$ and for any $R > 0$, we let $M = R + 2|c| + 2c + 1$. Note that $M > 0$. For any $c \in \mathbb{R}$ and for any $x \in \mathcal{P}_c$ satisfying $\|x\|_\infty > M$, we prove the conclusion by discussing three cases.

(a) Assume that $x_1 = \|x\|_\infty > M$. Note that $x_3 \geq 0$. Note that the conservation law is $x_1 = \frac{1}{2}x_2 - \frac{1}{2}x_3 + c$. Hence, $x_2 + 2c = 2x_1 + x_3 > M$. Thus, we have $x_2 > R$.

(b) Assume that $x_3 = \|x\|_\infty > M$. The proof is similar to the proof of case (a).

(c) Assume that $x_2 = \|x\|_\infty > M$. Then, by $M = R + 2|c| + 2c + 1$, $x_2 > R$.

(iii) Assume that the conservation law has the form (129). The proof is similar to the second case. \square

Lemma 36. Consider a network $G \in \mathcal{G}_3$. Assume that the conservation law has the form (127). Then, the network G is dissipative.

Proof. We denote by \mathcal{N} the stoichiometric matrix of the network G . Recall that \mathcal{N}^* (59) is the submatrix formed by the last two row vectors of \mathcal{N} . For any $i \in \{1, \dots, m\}$, we denote by $\text{col}_i(\mathcal{N}^*)$ and $\text{col}_i(\mathcal{N})$ the i -th column vector of \mathcal{N}^* and \mathcal{N} , respectively. Note that we can exchange the two species X_2 and X_3 in the network G by relabeling the species. Hence, by (127), we only need to consider the conservation law

$$x_1 = -x_3 + c.$$


Thus, $(a, b) = (0, -1)$ (here, a and b are defined in $x_1 = ax_2 + bx_3 + c$ in (71)). Note that $(a, b) \cdot (1, 0) = 0$. Hence, by Lemma 18 (3), we can assume that $\text{col}_j(\mathcal{N}^*) = (1, 0)^\top$,

where $j \in \{1, \dots, m\}$. Similarly, we can assume that $col_k(\mathcal{N}^*) = (0, 1)^\top$, where $k \in \{1, \dots, m\}$.

The purpose of this paragraph is to give all reactions in the network G . Recall that by (61),

$$col_i(\mathcal{N}) = \begin{pmatrix} 0 & -1 \\ 1 & 0 \\ 0 & 1 \end{pmatrix} col_i(\mathcal{N}^*). \quad (133)$$

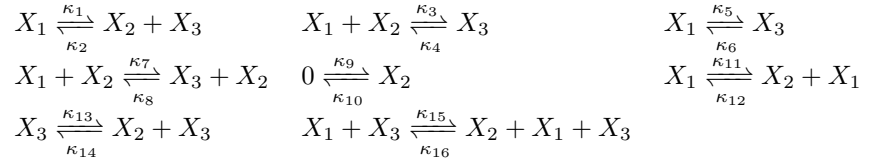
Since $col_j(\mathcal{N}^*)$ is $(1, 0)^\top$, by (133), $col_j(\mathcal{N})$ is $(0, 1, 0)^\top$. Hence, by Lemma 21, there exists a reaction in the network G as follows.



Since $col_k(\mathcal{N}^*)$ is $(0, 1)^\top$, by (133), $col_k(\mathcal{N})$ is $(-1, 0, 1)^\top$. Hence, by Lemma 21, there exists a reaction in the network G as follows.



Note that $col_j(\mathcal{N})$ and $col_k(\mathcal{N})$ are linearly independent. Hence, all column vectors of \mathcal{N} can be generated by $col_j(\mathcal{N})$ and $col_k(\mathcal{N})$. That means all reactions in the network G can be generated by (134) and (135). Thus, by the fact that the network G is maximum, the network G can be written as follows.



Hence, for the steady-state system f defined as in (2), we have

$$f_2 = -(\kappa_{16}x_1x_3 + \kappa_3x_1 + \kappa_{12}x_1 + \kappa_2x_3 + \kappa_{14}x_3 + \kappa_{10})x_2 \quad (136)$$

$$+ \kappa_{15}x_1x_3 + \kappa_1x_1 + \kappa_{11}x_1 + \kappa_4x_3 + \kappa_{13}x_3 + \kappa_9. \quad (137)$$

Below we prove that there exists $R > 0$ such that for any $x^* \in \mathcal{P}_c$ satisfying $x_2^* > R$, we have $f_2(x^*) < 0$. Note that the conservation law is $x_1 = -x_3 + c$. So, for any $c \in \mathbb{R}$, if $\mathcal{P}_c^+ \neq \emptyset$, we have $c > 0$. For any $x^* \in \mathcal{P}_c$, since $c > 0$, we have $x_1^* \leq c$ and $x_3^* \leq c$. So, by (136), there exists $R > 0$ such that $f_2(x^*) < 0$ when $x_2^* > R$. By Lemma 35, for any $c \in \mathbb{R}$ and for any $R > 0$, there exists $M > 0$ such that for any $x^* \in \mathcal{P}_c$ satisfying $\|x^*\|_\infty > M$, we have $x_2^* > R$. Hence, for any $x^* \in \mathcal{P}_c$ satisfying $\|x^*\|_\infty > M$, we have $f_2(x^*) < 0$. Note that $\text{sgn}(b) < 0$. Then, by Lemma 34 and Lemma 2, G is dissipative. \square

Lemma 37. *Consider a network $G \in \mathcal{G}_3$. Assume that the conservation law has the form (128). Then, the network G is dissipative.*

Proof. Note that we can exchange the two species X_2 and X_3 in the network G by relabeling the species. Hence, by (128), we only need to consider the conservation law with the form $x_1 = \frac{1}{2}x_2 - \frac{1}{2}x_3 + c$. Hence, $(a, b) = (\frac{1}{2}, -\frac{1}{2})$ (here, a and b are defined in $x_1 = ax_2 + bx_3 + c$ in (71)). We denote by \mathcal{N} the stoichiometric matrix of the network G . Recall that \mathcal{N}^* (59) is the submatrix formed by the last two row vectors of \mathcal{N} . For any $i \in \{1, \dots, m\}$, we denote $col_i(\mathcal{N}^*)$ and $col_i(\mathcal{N})$ the i -th column vector of \mathcal{N}^* and \mathcal{N} , respectively. Note that $(a, b) \cdot (1, 1) = 0$. So, by Lemma 18 (3), we can assume that

$col_j(\mathcal{N}^*) = (1, 1)^\top$, where $j \in \{1, \dots, m\}$. We can assume that $col_k(\mathcal{N}^*) = (1, -1)^\top$, where $k \in \{1, \dots, m\}$, similarly.

The purpose of this paragraph is to give all reactions in the network G . Recall that by (61),

$$col_i(\mathcal{N}) = \begin{pmatrix} \frac{1}{2} & -\frac{1}{2} \\ 1 & 0 \\ 0 & 1 \end{pmatrix} col_i(\mathcal{N}^*). \quad (138)$$

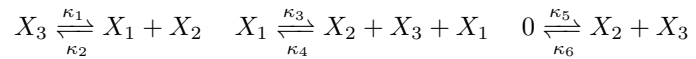
Since $col_j(\mathcal{N}^*)$ is $(1, 1)^\top$, by (138), $col_j(\mathcal{N})$ is $(0, 1, 1)^\top$. Hence, by Lemma 21, there exists a reaction in the network G as follows.



Since $col_k(\mathcal{N}^*)$ is $(1, -1)^\top$, by (138), $col_k(\mathcal{N})$ is $(1, 1, -1)^\top$. Hence, by Lemma 21, there exists a reaction in the network G as follows.



Note that $col_j(\mathcal{N})$ and $col_k(\mathcal{N})$ are linearly independent. Hence, all column vectors of \mathcal{N} can be generated by $col_j(\mathcal{N})$ and $col_k(\mathcal{N})$. That means all reactions in the network can be generated by (139) and (140). So, by the fact that the network is maximum, the network can be written as follows.



Hence, for the steady-state system f defined as in (2), we have

$$f_2 = -(\kappa_4 x_1 x_3 + \kappa_2 x_1 + \kappa_6 x_3) x_2 + \kappa_1 x_3 + \kappa_3 x_1 + \kappa_5. \quad (141)$$

Below we prove that there exists $R > 0$ such that for any $x^* \in \mathcal{P}_c$ satisfying $x_2^* > R$, we have $f_2(x^*) < 0$. Note that the conservation law is $x_1 = \frac{1}{2}x_2 - \frac{1}{2}x_3 + c$. So, for any $c \in \mathbb{R}$, if $\mathcal{P}_c^+ \neq \emptyset$, we have $\frac{1}{2}x_2^* + c > 0$. Hence, x_1^* and x_3^* can not be 0 simultaneously. Then, we prove the conclusion by discussing three cases.

(I) Assume that $x_1^* \neq 0$ and $x_3^* \neq 0$. By (141), there exists $R > 0$ such that $f_2(x^*) < 0$ when $x_2^* > R$.

(II) Assume that $x_1^* = 0$ and $x_3^* \neq 0$. Hence, by (141),

$$f_2 = -\kappa_6 x_3 x_2 + \kappa_1 x_3 + \kappa_5. \quad (142)$$

Then, there exists $R > 0$ such that $f_2(x^*) < 0$ when $x_2^* > R$.

(III) Assume that $x_1^* \neq 0$ and $x_3^* = 0$. Hence, by (141),

$$f_2 = -\kappa_2 x_1 x_2 + \kappa_3 x_1 + \kappa_5. \quad (143)$$

Then, there exists $R > 0$ such that $f_2(x^*) < 0$ when $x_2^* > R$.

By Lemma 35, for any $c \in \mathbb{R}$, for any $R > 0$, there exists $M > 0$ such that for any $x^* \in \mathcal{P}_c$ satisfying $\|x^*\|_\infty > M$, we have $x_2^* > R$. So, for any $x^* \in \mathcal{P}_c$ satisfying $\|x^*\|_\infty > M$, we have $f_2(x^*) < 0$. Note that $\text{sgn}(b) < 0$. Then, by Lemma 34 and Lemma 2, G is dissipative. \square

Lemma 38. *Consider a network $G \in \mathcal{G}_3$. Assume that the conservation law has the form (129) or (130). Then, the network G is dissipative.*

Proof. (I) Assume that the conservation law has the form (129). Note that we can exchange the two species X_2 and X_3 in the network G by relabeling the species. Hence, by (129), we only need to consider the conservation law with the form $x_1 = x_2 - x_3 + c$. Hence, $(a, b) = (1, -1)$ (here, a and b are defined in $x_1 = ax_2 + bx_3 + c$ in (71)). We denote by \mathcal{N} the stoichiometric matrix of the network G . Recall that \mathcal{N}^* (59) is the submatrix formed by the last two row vectors of \mathcal{N} . For any $i \in \{1, \dots, m\}$, we denote by $col_i(\mathcal{N}^*)$ and $col_i(\mathcal{N})$ the i -th column vector of \mathcal{N}^* and \mathcal{N} , respectively. We notice that $(a, b) \cdot (1, 0) = 1$. Hence, by Lemma 18 (3), we can assume $col_j(\mathcal{N}^*) = (1, 0)^\top$, where $j \in \{1, \dots, m\}$. Similarly, we can assume that $col_k(\mathcal{N}^*) = (0, 1)^\top$, where $k \in \{1, \dots, m\}$.

The purpose of this paragraph is to give all reactions in the network G . Recall that by (61),

$$col_i(\mathcal{N}) = \begin{pmatrix} 1 & -1 \\ 1 & 0 \\ 0 & 1 \end{pmatrix} col_i(\mathcal{N}^*). \quad (144)$$

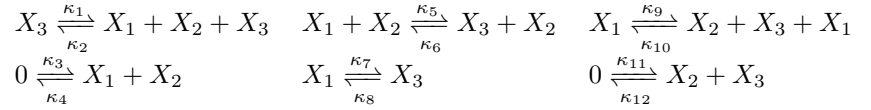
Since $col_j(\mathcal{N}^*)$ is $(1, 0)^\top$, by (144), $col_j(\mathcal{N})$ is $(1, 1, 0)^\top$. Hence, by Lemma 21, there exists a reaction in the network G as follows.



Since $col_k(\mathcal{N}^*)$ is $(0, 1)^\top$, by (144), $col_k(\mathcal{N})$ is $(-1, 0, 1)^\top$. Hence, by Lemma 21, there exists a reaction in the network G as follows.



Note that $col_j(\mathcal{N})$ and $col_k(\mathcal{N})$ are linearly independent. Hence, all column vectors of \mathcal{N} can be generated by $col_j(\mathcal{N})$ and $col_k(\mathcal{N})$. That means all reactions in the network can be generated by (145) and (146). So, by the fact that the network is maximum, the network can be written as follows.



Hence, for the steady-state system f defined as in (2), we have

$$f_2 = -(\kappa_2 x_1 x_3 + \kappa_{10} x_1 x_3 + \kappa_4 x_1 + \kappa_{12} x_3) x_2 + \kappa_9 x_1 + \kappa_1 x_3 + \kappa_3 + \kappa_{11}. \quad (147)$$

Below we prove that there exists $R > 0$ such that for any $x^* \in \mathcal{P}_c$ satisfying $x_2^* > R$, we have $f_2(x^*) < 0$. Note that the conservation law is $x_1 = x_2 - x_3 + c$. So, for any $c \in \mathbb{R}$, if $\mathcal{P}_c^+ \neq \emptyset$, we have $x_2^* + c > 0$. Hence, x_1^* and x_3^* can not be 0 simultaneously. Then, we prove the conclusion by discussing three cases.

(i) Assume that $x_1^* \neq 0$ and $x_3^* \neq 0$. By (147), there exists $R > 0$ such that $f_2(x^*) < 0$ when $x_2^* > R$.

(ii) Assume that $x_1^* = 0$ and $x_3^* \neq 0$. Hence, by (141),

$$f_2 = -\kappa_{12} x_3 x_2 + \kappa_1 x_3 + \kappa_3 + \kappa_{11}. \quad (148)$$

Then, there exists $R > 0$ such that $f_2(x^*) < 0$ when $x_2^* > R$.

(iii) Assume that $x_1^* \neq 0$ and $x_3^* = 0$. Hence, by (141),

$$f_2 = -\kappa_4 x_1 x_2 + \kappa_9 x_1 + \kappa_3 + \kappa_{11}. \quad (149)$$

Then, there exists $R > 0$ such that $f_2(x^*) < 0$ when $x_2^* > R$.

By Lemma 35, for any $c \in \mathbb{R}$, for any $R > 0$, there exists $M > 0$ such that for any $x^* \in \mathcal{P}_c$ satisfying $\|x^*\|_\infty > M$, we have $x_2^* > R$. So, for any $x^* \in \mathcal{P}_c$ satisfying $\|x^*\|_\infty > M$, we have $f_2(x^*) < 0$. Note that $\text{sgn}(b) < 0$. Then, by Lemma 34 and Lemma 2, G is dissipative.

(II) Assume the conservation law has the form (130). So, by (55), $\mathcal{N}_1 = \mathcal{N}_2 + \mathcal{N}_3$. Recall that \mathcal{N}_2 and \mathcal{N}_3 are linearly independent. Hence, we get \mathcal{N}_1 and \mathcal{N}_3 are linearly independent. Thus, we can exchange the two species X_1 and X_2 in the network G by relabeling the species, and we call the new concentration variables as $\tilde{x}_1, \tilde{x}_2, \tilde{x}_3$. Hence, by (130), we have $\tilde{x}_1 = \tilde{x}_2 - \tilde{x}_3 - c$. Therefore, the conclusion holds according to the proof of the first case. \square

Lemma 39. *Consider a network $G \in \mathcal{G}_3$. Then, for any $c \in \mathbb{R}$, if $\mathcal{P}_c^+ \neq \emptyset$, then for any $\kappa \in \mathbb{R}_{>0}^m$, the network G has no boundary steady state in \mathcal{P}_c .*

Proof. By Lemma 32, the conservation law of the network G in \mathcal{G}_3 can only be one of the equalities presented in (125)–(130). Note that each conservation law presented in (125)–(130) corresponds to a network, see (169)–(174) in Appendix 7.3. Below we prove the conclusion for the conservation law (125), the proof for any other one is similar. Note that the network G corresponding to the conservation law (125) is (169) in Appendix 7.3. By (125), the conservation law is $x_1 = -x_2 - x_3 + c$. Since $\mathcal{P}_c^+ \neq \emptyset$, we have $c > 0$. Hence, $(0, 0, 0)$ can not be a boundary steady state. Notice that for the network in (169), the steady-state system f defined in (2) is given by the following polynomials:

$$f_1 = -x_1(\kappa_3 x_3 + \kappa_5 x_2 + \kappa_9 + \kappa_{11}) + (\kappa_4 + \kappa_6)x_2 x_3 + \kappa_{10} x_2 + \kappa_{12} x_3, \quad (150)$$

$$f_2 = -x_2(\kappa_1 x_1 + \kappa_4 x_3 + \kappa_7 + \kappa_{10}) + (\kappa_2 + \kappa_3)x_1 x_3 + \kappa_8 x_3 + \kappa_9 x_1, \quad (151)$$

$$f_3 = -x_3(\kappa_2 x_1 + \kappa_6 x_2 + \kappa_8 + \kappa_{12}) + (\kappa_1 + \kappa_5)x_1 x_2 + \kappa_7 x_2 + \kappa_{11} x_1. \quad (152)$$

Assume that $(x_1, x_2, x_3) \in \mathbb{R}_{\geq 0}^3$. If $x_1 = 0$, $x_2 > 0$ and $x_3 > 0$, then, by (150), $f_1(x) > 0$. Thus, $(0, x_2, x_3)$ can not be a boundary steady state. Similarly, if $x_1 > 0$, $x_2 = 0$ and $x_3 > 0$, then, by (151), $f_2(x) > 0$. And if $x_1 > 0$, $x_2 > 0$ and $x_3 = 0$, then, by (152), $f_3(x) > 0$. If $x_1 = x_2 = 0$ and $x_3 > 0$, then, by (151), $f_2(x) > 0$. Then, $(0, 0, x_3)$ can not be a boundary steady state. Similarly, if $x_1 = x_3 = 0$ and $x_2 > 0$, then, by (151), $f_2(x) < 0$. And if $x_2 = x_3 = 0$ and $x_1 > 0$, then, by (151), $f_2(x) > 0$. Therefore, for any $c \in \mathbb{R}$, if $\mathcal{P}_c^+ \neq \emptyset$, then the network G admits no boundary steady state in \mathcal{P}_c . \square

proof of Lemma 31 For any $c \in \mathbb{R}$, if $\mathcal{P}_c = \emptyset$, then the conclusion holds. If $\mathcal{P}_c \neq \emptyset$, then we prove as follows. For any network $G \in \mathcal{G}_3$, by Lemma 33, Lemma 36, Lemma 37 and Lemma 38, G is dissipative. Since $\mathcal{P}_c \neq \emptyset$, by Lemma 39, G admits no boundary steady state. Let h be the steady-state system augmented by conservation laws defined in (6). By Lemma 25, for any $\kappa \in \mathbb{R}_{>0}^m$ and for any corresponding positive steady state x in \mathcal{P}_c^+ , we have $\text{sign}(\det(\text{Jac}_h(\kappa, x))) = 1$. Then, by Theorem 1, the network has exactly one nondegenerate positive steady state in \mathcal{P}_c .

5.4.4 Proof of Lemma 15

proof of Lemma 15 By Lemma 27, all two-dimensional maximum three-species networks admit no multistationarity. For any two-dimensional network G with three species, by Lemma 20, either the network G only admits degenerate positive steady states or for any $\kappa \in \mathbb{R}_{>0}^m$ and for any corresponding positive steady state $x \in \mathbb{R}_{>0}^3$, we have $\det(\text{Jac}_h(\kappa, x)) > 0$. If for any $\kappa \in \mathbb{R}_{>0}^m$ and for any corresponding positive steady state $x \in \mathbb{R}_{>0}^3$, $\det(\text{Jac}_h(\kappa, x)) > 0$, then, by Lemma 27 and by the inheritance of multistationarity [5, Theorem 1], the network admits no multistationarity. So, the network G admits no multistationarity or G only admits degenerate positive steady states.

5.5 Proof of Theorem 3

proof of Theorem 3 The conclusion follows from Lemma 14 and Lemma 15.

proof of Corollary 1 The conclusion follows from Theorem 3 and Lemma 13.

proof of Corollary 2 By Theorem 2, one-dimensional zero-one networks admit no multistationarity. By Corollary 1, two-dimensional zero-one networks with up to three species admit no nondegenerate multistationarity/multistability.

6 Smallest zero-one network admits nondegenerate multistationarity/multistability

In Section 6.1, we present the main result Theorem 4 and its proof. And we give the flow diagram of proof of Theorem 4 in Figure 3. In Section 6.2, we give the details for the computations carried out in the proof of Theorem 4. And we provide the smallest zero-one networks admitting nondegenerate multistationarity/multistability in Example 3 and Example 4.

6.1 Main result

Theorem 4. *Consider a three-dimensional zero-one network G with three species. Then, we have the following statements.*

- (I) *If G admits nondegenerate multistationarity, then G has at least five reactions. Moreover, there exists a three-dimensional zero-one network with three species and five reactions such that the network admits nondegenerate multistationarity.*
- (II) *If G admits multistability, then G has at least six reactions. Moreover, there exists a three-dimensional zero-one network with three species and six reactions such that the network admits multistability.*

Proof. (I) Note that for any three-dimensional zero-one network with three species and three reactions, the stoichiometric matrix of the network is a full-rank square matrix. Therefore, the network admits no positive steady state. By [2, Lemma 3.1], a three-dimensional zero-one network with three species and four reactions admits exactly one nondegenerate positive steady state or admits a continuum of degenerate positive steady states. Thus, if a three-dimensional zero-one network G with three species admits nondegenerate multistationarity, then G has at least five reactions. And there exists a three-dimensional zero-one network with three species and five reactions such that the network admits nondegenerate multistationarity, see Example 3.

(II) By (I), if G admits multistability, then G has at least five reactions. Below, we prove by a computational way that if G has five reactions, then the network G admits no multistability. First, we can list all three-dimensional zero-one networks with three species and five reactions, and there are 291960 networks. By the following two criteria, we can remove the networks that must admit no multistability. We denote by \mathcal{N} the stoichiometric matrix of the network G .

Criterion I: If $\mathcal{F}(\mathcal{N}) = \emptyset$, then the network admits no positive steady state.

Criterion II: If G is injective, then the network admits no multistationarity [7].

By applying Criterion I, we find that there are only 117256 networks admitting positive steady states. After that, by applying Criterion II, we find that only 66201 networks might admit multistationarity. By using the command `RealRootClassification` in `Maple`, we find that all these 66201 networks admit at most two nondegenerate positive

steady states, and in the 66201 networks, there are 496 networks admitting exactly two nondegenerate positive steady states. For each network that admits exactly two nondegenerate positive steady states, the command `RealRootClassification` gives at least one witness $\kappa^* \in \mathbb{R}_{>0}^5$ over each open connected component \mathcal{O} of the complement of the hypersurface generated by the border polynomial (see [39, Definition 6.1]) such that the network has two nondegenerate positive steady states $x^{(1)}, x^{(2)} \in \mathbb{R}_{>0}^3$. And checking by `Maple`, $\det(\text{Jac}_f(\kappa^*, x^{(1)}))$ and $\det(\text{Jac}_f(\kappa^*, x^{(2)}))$ have different signs for these two steady states. By Lemma 42 (see Appendix 7.1), for any $\kappa^* \in \mathbb{R}_{>0}^5$ and for any corresponding positive steady state $x^* \in \mathbb{R}_{>0}^3$, if the positive steady state x^* is stable, then $\det(\text{Jac}_f(\kappa^*, x^*)) < 0$. So, only one of $x^{(1)}$ and $x^{(2)}$ is stable. Notice that by the theory [39, Section 6.1] of real root classification, for any rate-constant vector κ located in \mathcal{O} , there will be two nondegenerate steady states and the determinant of the Jacobian matrix $\det(\text{Jac}_f)$ will have different signs at the two steady states (that means only one of the two steady states will be stable). Thus, we conclude that all the 178 networks admit at most one stable steady state. Hence, if G admits multistability, then G has at least six reactions. Moreover, there exists a three-dimensional zero-one network with three species and six reactions such that the network admits multistability, see Example 4. The supporting codes are available online³. \square

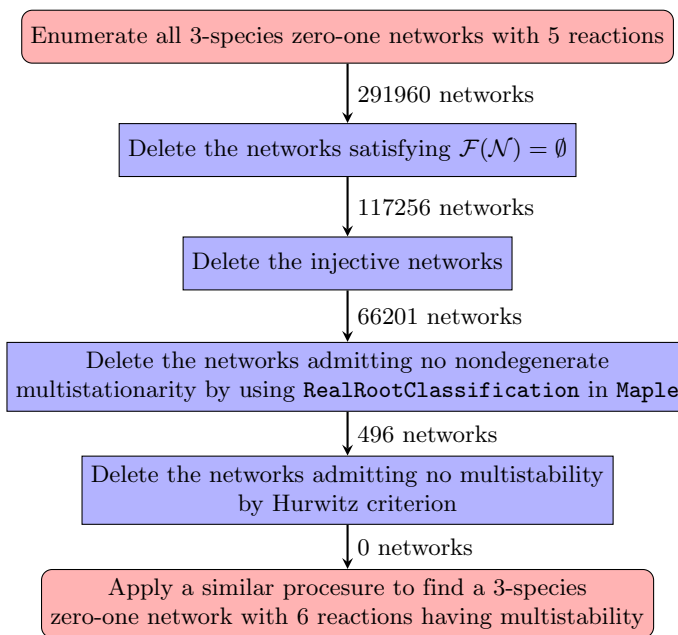


Fig 3. The flow diagram of proof of Theorem 4 (II) for the three-dimensional networks.

6.2 Implementations and examples

We have implemented the procedure in Figure 3 in `Maple`. And we run the procedure by a 3.60 GHz Inter Core i9 processor (64GB total memory) under Windows 10. First, we check all three-dimensional zero-one networks with three species and five reactions through the first five steps in Figure 3. And we record the timings for carrying out these steps in Table 1.

³<https://github.com/YueJ13/multistability/tree/main/smallest>

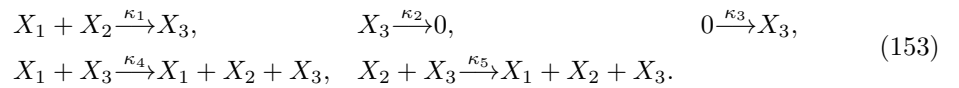
Table 1. The computational time (h: hours) for running the procedure in Figure 3.

STEPS	TIME	NUMBER OF NETWORKS
Preprocess	3.5h	29141080
Delete the networks satisfying $\mathcal{F}(\mathcal{N}) = \emptyset$	0.1h	291960
Delete the injective networks	0.1h	117256
Delete the networks admitting no multistationarity	36h	66201
Delete the networks admitting no multistability	0.1h	496

Notes:(i) The column “STEPS” records the first five steps in the procedure shown in Figure 3. (ii) The column “TIME” records the computational time for computing each step. (iii) The last column records the number of networks we dealt with in each step.

As what has been shown in Figure 3 (or Table 1), we have found 496 three-species, five-reaction networks that admit nondegenerate multistationarity, and we present one of them in Example 3.

Example 3. Consider the following network G :



The steady-state system f defined as in (2) is as follows.

$$\begin{aligned} f_1 &= -\kappa_1 x_1 x_2 + \kappa_5 x_2 x_3, \\ f_2 &= -\kappa_1 x_1 x_2 + \kappa_4 x_1 x_3, \\ f_3 &= \kappa_1 x_1 x_2 - \kappa_2 x_3 + \kappa_3. \end{aligned} \quad (154)$$

Let $\kappa_1^* = 1$, $\kappa_2^* = 3$, $\kappa_3^* = 2$, $\kappa_4^* = \kappa_5^* = 1$. Substitute $\kappa^* \in \mathbb{R}_{>0}^5$ into (157), we have two distinct positive steady states.

$$\begin{aligned} x^{(1)} &= (1, 1, 1)^\top, \\ x^{(2)} &= (2, 2, 2)^\top, \end{aligned} \quad (155)$$

where $x^{(1)}$ and $x^{(2)}$ are nondegenerate. And $x^{(1)}$ is stable.

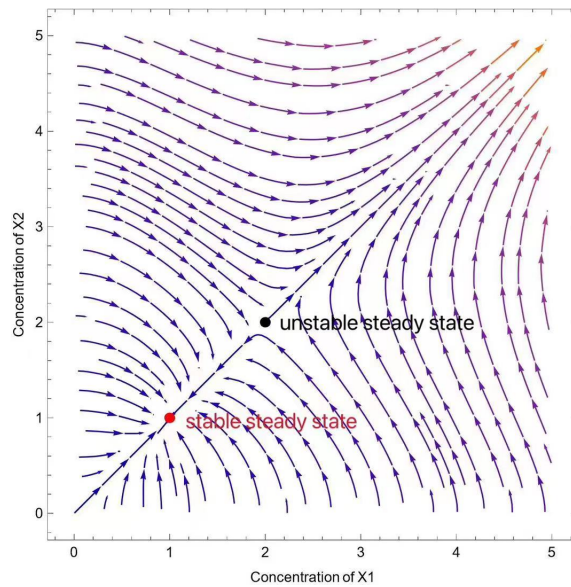
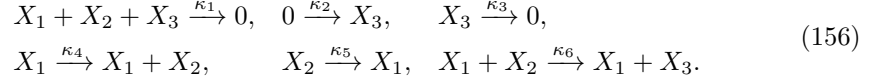


Fig 4. The steady states of the network (153). Let $\kappa_1^* = 1$, $\kappa_2^* = 3$, $\kappa_3^* = 2$, $\kappa_4^* = 1$, $\kappa_5^* = 1$. We get two steady states $x^{(1)} = (1, 1, 1)^\top$ and $x^{(2)} = (2, 2, 2)^\top$.

Remark 8. When we enumerate the three-dimensional zero-one networks with three species and six reactions, we find that there are 3226043960 networks in total. So, we can not complete the procedure in Figure 3 in a reasonable time. However, we can still apply the procedure to find a multistable network, see Example 4.

Example 4. Consider the following network G :



The steady-state system f defined as in (2) is as follows.

$$\begin{aligned} f_1 &= -\kappa_1 x_1 x_2 x_3 + \kappa_5 x_2, \\ f_2 &= -\kappa_1 x_1 x_2 x_3 - \kappa_6 x_1 x_2 + \kappa_4 x_1 - \kappa_5 x_2, \\ f_3 &= -\kappa_1 x_1 x_2 x_3 + \kappa_6 x_1 x_2 - \kappa_3 x_3 + \kappa_2. \end{aligned} \quad (157)$$

Let $\kappa_1^* = \frac{5765}{16}$, $\kappa_2^* = \frac{1655}{65536}$, $\kappa_3^* = \dots = \kappa_6^* = \frac{1}{2}$. Substitute $\kappa^* \in \mathbb{R}_{>0}^6$ into (157), we have three distinct positive steady states.

$$\begin{aligned} x^{(1)} &= (0.8340329166, 0.2942918947, 0.001663824382)^\top, \\ x^{(2)} &= (0.05999575106, 0.02912421107, 0.02312970964)^\top, \\ x^{(3)} &= (0.05546474050, 0.02698403889, 0.02501921562)^\top. \end{aligned} \quad (158)$$

And, $x^{(1)}$ and $x^{(3)}$ are stable.

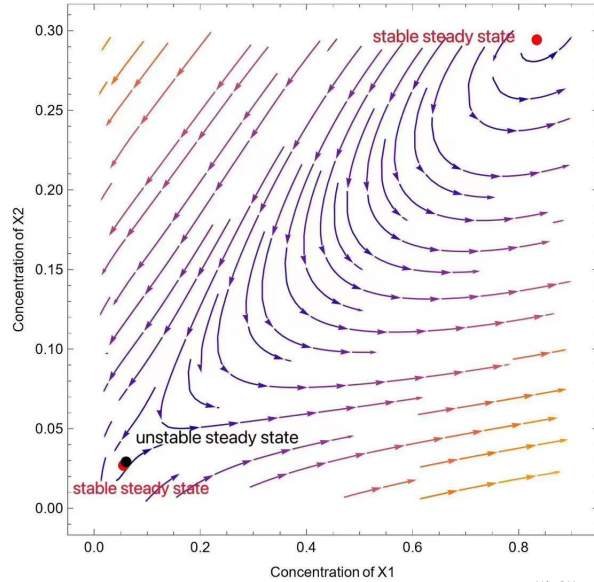


Fig 5. The steady states of the network (156). Let $\kappa_1^* = \frac{5765}{16}$, $\kappa_2^* = \frac{1655}{65536}$, $\kappa_3^* = \dots = \kappa_6^* = \frac{1}{2}$. We get three steady states $x^{(1)} = (0.8340329166, 0.2942918947, 0.001663824382)^\top$, $x^{(2)} = (0.05999575106, 0.02912421107, 0.02312970964)^\top$, and $x^{(3)} = (0.05546474050, 0.02698403889, 0.02501921562)^\top$.

7 Supporting information

7.1 S1 Appendix.

In this section, we first present a necessary and sufficient condition for a steady state of a two-dimensional network to be stable, see Lemma 40. After that, based on Hurwitz criterion (see Lemma 41), we prove a necessary condition for a steady state of a three-dimensional network to be stable, see Lemma 42. Remark that Lemma 40 and Lemma 42 are used in the proofs of Lemma 13 in Section 5.2 and Theorem 4 in Section 6.

Lemma 40. *Consider a two-dimensional network G . Let f_1, \dots, f_s be the polynomials defined in (2). Let h be the steady-state system augmented by conservation laws defined in (6). For any $\kappa \in \mathbb{R}_{>0}^m$, for any $c \in \mathbb{R}^{s-2}$ and for any corresponding nondegenerate positive steady state $x \in \mathbb{R}_{>0}^s$, x is stable if and only if*

$$\sum_{i=1}^s \frac{\partial f_i}{\partial x_i}(\kappa, x) < 0, \text{ and } \det(\text{Jac}_h(\kappa, x)) > 0. \quad (159)$$

Proof. We denote by E an $s \times s$ identity matrix. The characteristic polynomial of $\text{Jac}_f(x)$ is $\det(\lambda E - \text{Jac}_f(x)) = \lambda^s + (-1)a_1\lambda^{s-1} + (-1)^2a_2\lambda^{s-2} + \dots + (-1)^sa_s$, where a_i ($i \in \{3, \dots, s\}$) is the sum of all i -order principal subformulas of $\text{Jac}_f(x)$. Note that the rank of $\text{Jac}_f(x)$ is two. Thus, for any $i \in \{3, \dots, s\}$, we have $a_i = 0$. Then, we have

$$\det(\lambda E - \text{Jac}_f(x)) = \lambda^s - \lambda^{s-1} \sum_{i=1}^s \frac{\partial f_i}{\partial x_i} + \lambda^{s-2} \sum_{I \subseteq \{1, \dots, s\}, |I|=2} \det(\text{Jac}_f[I, I]). \quad (160)$$

By [37, Proposition 5.3], we have

$$\det(\lambda E - \text{Jac}_f(x)) = \lambda^{s-2}(\lambda^2 - \lambda \sum_{i=1}^s \frac{\partial f_i}{\partial x_i} + \det(\text{Jac}_h(x))). \quad (161)$$

For any $\kappa^* \in \mathbb{R}_{>0}^m$, $c^* \in \mathbb{R}^{s-2}$ and corresponding nondegenerate positive steady state $x^* \in \mathbb{R}_{>0}^s$, let

$$q(\lambda) = \lambda^2 - \lambda \sum_{i=1}^s \frac{\partial f_i}{\partial x_i}(\kappa^*, x^*) + \det(\text{Jac}_h(\kappa^*, x^*)). \quad (162)$$

Then, all roots of $q(\lambda)$ have negative real parts (i.e., the nondegenerate positive steady state x is stable) if and only if $\sum_{i=1}^s \frac{\partial f_i}{\partial x_i}(\kappa^*, x^*) < 0$ and $\det(\text{Jac}_h(\kappa^*, x^*)) > 0$. \square

Lemma 41. [31, Criterion 1] *Let $q(z) = a_s z^s + \dots + a_0$ be a real polynomial with $a_s > 0$ and $a_0 \neq 0$. The Hurwitz matrix $H = (h_{ij})$ associated with $q(z)$ has entries $h_{ij} = a_{s-2i+j}$ for $i, j \in \{1, \dots, s\}$ by letting $a_k = 0$ if $k \notin \{0, \dots, s\}$:*

$$H = \begin{pmatrix} a_{s-1} & a_s & 0 & 0 & \cdots & 0 \\ a_{s-3} & a_{s-2} & a_{s-1} & a_s & \cdots & 0 \\ \vdots & \ddots & \vdots & \vdots & \ddots & \vdots \\ 0 & 0 & 0 & a_{6-s} & \cdots & a_2 \\ 0 & 0 & 0 & 0 & \cdots & a_0 \end{pmatrix} \in \mathbb{R}^{s \times s}. \quad (163)$$

The i -th Hurwitz determinant is defined to be $H_i = \det(H[I, I])$, where $I = \{1, \dots, i\}$. Then, all roots of $q(z)$ have negative real part if and only if $H_i > 0$ for all $i \in \{1, \dots, s\}$. If $H_i < 0$ for some i , then at least one root of $q(z)$ has positive real part.

Lemma 42. Consider a three-dimensional network G with three species. Let f be the steady-state system defined as in (2). For any $\kappa \in \mathbb{R}_{>0}^m$ and for any corresponding positive steady state $x \in \mathbb{R}_{>0}^3$, if x is stable, then $\det(\text{Jac}_f(\kappa, x)) < 0$.

Proof. Assume that the characteristic polynomial of $\text{Jac}_f(\kappa, x)$ is

$$\det(\lambda E - \text{Jac}_f(\kappa, x)) = \lambda^3 - a_1\lambda^2 + a_2\lambda - a_3.$$

By Lemma 41, the Hurwitz matrix H is equal to

$$\begin{pmatrix} -a_1 & 1 & 0 \\ -a_3 & a_2 & -a_1 \\ 0 & 0 & -a_3 \end{pmatrix}. \quad (164)$$

By Lemma 41, all roots of $\det(\lambda E - \text{Jac}_f(\kappa, x))$ have negative real part if and only if $-a_1 > 0$, $-a_1a_2 + a_3 > 0$, and $-a_3(-a_1a_2 + a_3) > 0$. Note that $a_3 = \det(\text{Jac}_f(\kappa, x))$. Thus, if x is stable, then $-a_3 > 0$ (i.e., $\det(\text{Jac}_f(\kappa, x)) < 0$). \square

7.2 S2 Appendix

In this section, we introduce the theoretical foundation (see Lemma 43) for the method of real root classification in computational real algebraic geometry. We remark that Lemma 43 is a corollary of Ehresmann's theorem [23] for which there exist semi-algebraic statements since 1992. We remark that we have used Lemma 43 to prove the monostationarity of two classes of zero-one networks in Sections 5.4.3 and 5.4.3.

First, we review some useful notions in computational algebraic geometry. Let $u := (u_1, \dots, u_n)$ and $x := (x_1, \dots, x_s)$. We define π as the *canonical projection*: $\mathbb{C}^n \times \mathbb{C}^s \rightarrow \mathbb{C}^n$ such that for every $(u, x) \in \mathbb{C}^n \times \mathbb{C}^s$, $\pi(u, x) = u$. For any finite polynomial set $g := \{g_1, \dots, g_s\} \subseteq \mathbb{Q}[u, x]$, we define

$$\mathcal{V}(g) := \{(u, x) \in \mathbb{C}^n \times \mathbb{C}^s \mid g_1(u, x) = \dots = g_s(u, x) = 0\}. \quad (165)$$

A finite polynomial set $g \subseteq \mathbb{Q}[u, x]$ is called a *general zero-dimensional system* if there exists an affine variety $V \subsetneq \mathbb{C}^n$ such that for any $u \in \mathbb{C}^n \setminus V$, the cardinality of the set $\pi^{(-1)}(u) \cap \mathcal{V}(g)$ is a finite number (i.e., the equations $g_1(u, x) = \dots = g_s(u, x) = 0$ have finitely many common solutions for x in \mathbb{C}^s).

The *set of nonproperness* of g , denoted by $\mathcal{V}_\infty(g)$, is defined as the set of the $u \in \overline{\pi(\mathcal{V}(g))}$ such that there does not exist a compact neighborhood U of u where $\pi^{-1}(U) \cap \mathcal{V}(g)$ is compact [14]. Geometrically, $\mathcal{V}_\infty(g)$ is the set of parameters u such that the equations $g_1 = \dots = g_s = 0$ have some solution x with coordinates tending to infinity. By [14, Lemma 2 and Theorem 2], $\mathcal{V}_\infty(g)$ is an algebraically closed set and can be computed by Gröbner bases.

We define $\mathcal{V}_J(g) := \overline{\pi(\mathcal{V}(g) \cap \mathcal{V}(\text{Jac}_g))}$. Geometrically, $\mathcal{V}_J(g)$ is the closure of the union of the projection of the singular locus of $\mathcal{V}(g)$ and the set of critical values of the restriction of π to the regular locus of $\mathcal{V}(g)$ [14, Definition 2].

Also, we define $\mathcal{V}_0(g) := \overline{\pi(\mathcal{V}(g) \cap \mathcal{V}(\prod_{i=1}^s x_i))}$. Geometrically, $\mathcal{V}_0(g)$ is the algebraic closure of the parameters such that the equations $g_1 = \dots = g_s = 0$ have the solutions with zero coordinates.

Based on the above notions, we are prepared to present the following lemma.

Lemma 43. [17, Theorem 2] For any general zero-dimensional system $g \subseteq \mathbb{Q}[u, x]$, if \mathcal{C} is an open connected component of $\mathbb{R}^n \setminus (\mathcal{V}_\infty(g) \cup \mathcal{V}_J(g))$, then over $u \in \mathcal{C}$, the cardinality of the following set is constant:

$$\pi^{(-1)}(u) \cap \mathcal{V}(g) \cap \mathbb{R}^{n+s}.$$

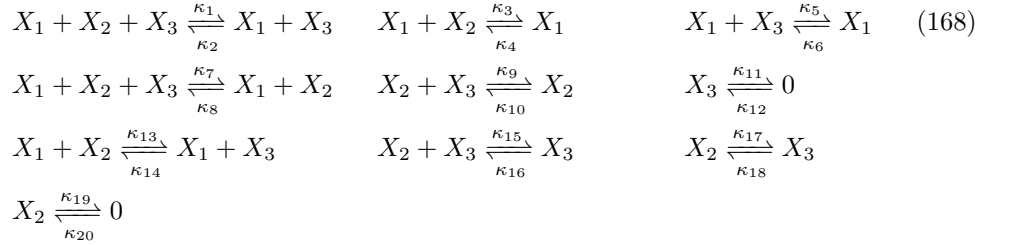
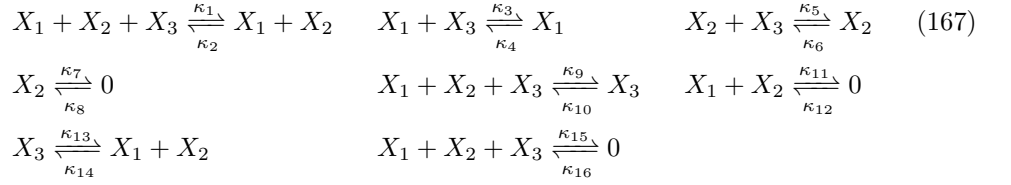
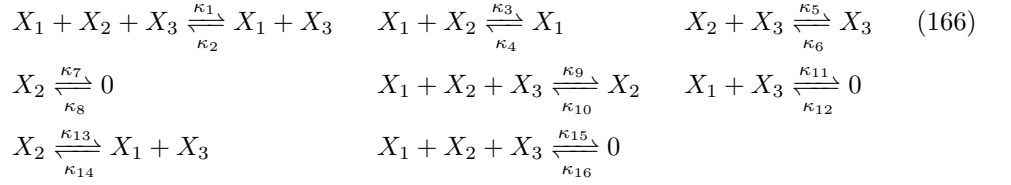
Moreover, if \mathcal{C} is an open connected component of $\mathbb{R}^n \setminus (\mathcal{V}_\infty(g) \cup \mathcal{V}_J(g) \cup \mathcal{V}_0(g))$, then over $u \in \mathcal{C}$, the cardinality of the following set is constant:

$$\pi^{(-1)}(u) \cap \mathcal{V}(g) \cap (\mathbb{R}^n \times \mathbb{R}_{>0}^s).$$

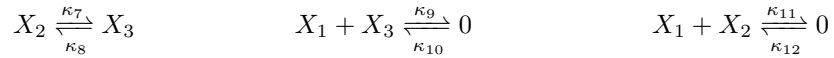
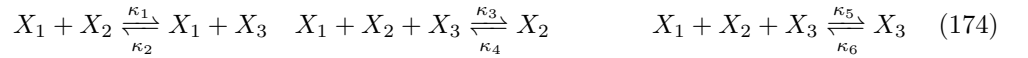
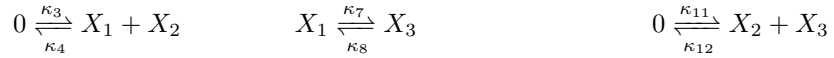
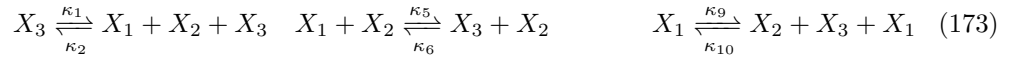
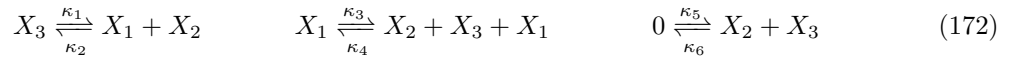
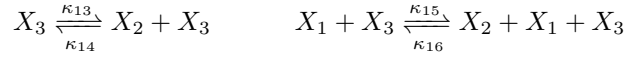

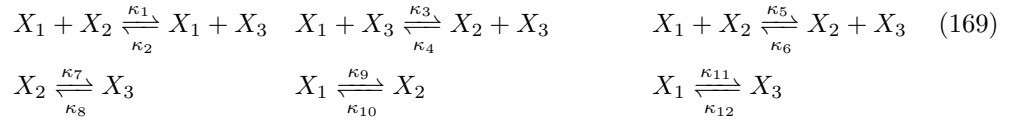
7.3 S3 Appendix.

In this section, we list all the networks in $\mathcal{G}_2 \cup \mathcal{G}_3$ (recall that \mathcal{G}_2 and \mathcal{G}_3 are two classes of maximum three-species networks defined in (74)–(75)). We remark that in the proof of Lemma 25 in Section 5.4.2, we have applied a computational method to go over all networks in $\mathcal{G}_2 \cup \mathcal{G}_3$.

The set \mathcal{G}_2 contains network (166)–(168).



The set \mathcal{G}_3 contains network (169)–(174).



References

1. M. Ali Al-Radhawi, David Angeli, and Eduardo D. Sontag. A computational framework for a Lyapunov-enabled analysis of biochemical reaction networks. *PLoS computational biology*, 16(2):e1007681, 2020.
2. Murad Banaji, and Balázs Boros. The smallest bimolecular mass action reaction networks admitting Andronov–Hopf bifurcation. *Nonlinearity*, 36(2):1398, 2023.
3. Christoph Bagowski, and James Ferrell Jr. Bistability in the JNK cascade. *Curr. Biol.*, 11(15):1176–82, 2001.
4. Murad Banaji, and Casian Pantea. Some results on injectivity and multistationarity in chemical reaction networks. *SIAM J. Appl. Dyn. Syst.*, 15(2):807–869, 2016.
5. Murad Banaji, and Casian Pantea. The inheritance of nondegenerate multistationarity in chemical reaction networks. *SIAM J. Appl. Math.*, 78:1105–1130, 2018.
6. Changbo Chen, James H. Davenport, Marc Moreno Maza, Bican Xia, and Rong Xiao. Computing with semi-algebraic sets: Relaxation techniques and effective boundaries. *Journal of Symbolic Computation*, 52:72–96, 2013.
7. Gheorghe Craciun, and Martin Feinberg. Multiple equilibria in complex chemical reaction networks: I. the injectivity property. *SIAM J. Appl. Math.*, 65:1526–1546, 2005.

8. Carsten Conradi, and Dietrich Flockerzi. Switching in mass action networks based on linear inequalities. *SIAM J. Appl. Dyn. Syst.*, 11(1):110-134, 2012.
9. Carsten Conradi, Elisenda Feliu, and Maya Mincheva. On the existence of Hopf bifurcations in the sequential and distributive double phosphorylation cycle. *Mathematical Biosciences and Engineering*, 17(1):494-513, 2020.
10. Carsten Conradi, Elisenda Feliu, Maya Mincheva, and Carsten Wiuf. Identifying parameter regions for multistationarity. *PLoS Comput. Biol.*, 13(10):e1005751, 2017.
11. Gheorghe Craciun, Yangzhong Tang, and Martin Feinberg. Understanding bistability in complex enzyme-driven reaction networks. *PNAS*, 103(23):8697–8702, 2006.
12. Biswa Nath Datta. An elementary proof of the stability criterion of Liénard and Chipart. *Linear Algebra Appl.*, 22:89–96, 1978.
13. Alicia Dickenstein, Mercedes Perez Millan, Anne Shiu, and Xiaoxian Tang. Multistationarity in structured reaction networks. *Bull. Math. Biol.*, 81(5):1527–1581, 2019.
14. Lazard Daniel, and Fabrice Rouillier. Solving parametric polynomial systems. *Journal of Symbolic Computation*, 42(6):636-667, 2007.
15. Feliu Elisenda, and Carsten Wiuf. Enzyme-sharing as a cause of multi-stationarity in signalling systems. *Journal of The Royal Society Interface*, 9(71):1224-1232, 2012.
16. Hoon Hong, Xiaoxian Tang, and Bican Xia. Special algorithm for stability analysis of multistable biological regulatory systems. *J. Symbolic Comput.*, 70:112–135, 2015.
17. Rodriguez Jose Israel, and Xiaoxian Tang. A probabilistic algorithm for computing data-discriminants of likelihood equations. *Journal of Symbolic Computation*, 83:342-364, 2017.
18. James Ferrell Jr., and Eric Machleder. The biochemical basis of an all-or-none cell fate switch in *Xenopus* oocytes. *Science*, 280(5365):895–898, 1998.
19. Badal Joshi, and Anne Shiu. Atoms of multistationarity in chemical reaction networks. *J. Math. Chem.*, 51:153–178, 2013.
20. Badal Joshi, and Anne Shiu. Which small reaction networks are multistationary? *SIAM J. Appl. Dyn. Syst.*, 16(2):802–833, 2017.
21. Nidhi Kaihnsa, Tung Nguyen, and Anne Shiu. Absolute concentration robustness and multistationarity in reaction networks: Conditions for coexistence. *European Journal of Applied Mathematics*, 1-35, 2024.
22. Stefan Müller, Elisenda Feliu, Georg Regensburger, Carsten Conradi, Anne Shiu, and Alicia Dickenstein. Sign conditions for injectivity of generalized polynomial maps with applications to chemical reaction networks and real algebraic geometry. *Found. Comput. Math.*, 16(1):69–97, 2016.
23. Coste Michel, and Masahiro Shiota. Nash triviality in families of Nash manifolds. *Inventiones mathematicae*, 108(1):349–368, 1992.

24. Maple (2020) Maplesoft, a division of Waterloo Maple Inc., Waterloo, Ontario.
25. Nida Obatake, Anne Shiu, Xiaoxian Tang, and Angelica Torres. Oscillations and bistability in a model of ERK regulation. *J. Math. Biol.*, 79:1515–1549, 2019.
26. Lawrence Perko. Differential equations and dynamical systems, *Volume 7 of Texts in Applied Mathematics. Springer-Verlag, New York, third edition*, 2001.
27. Casian Pantea, and Galyna Voitiuk. Classification of multistationarity for mass action networks with one-dimensional stoichiometric subspace. *arXiv preprint*, arXiv:2208.06310, 2022.
28. Guy Shinar, and Martin Feinberg. Concordant chemical reaction networks. *Math. Biosci.*, 240(2):92–113, 2012.
29. Anne Shiu, and Timo de Wolff. Nondegenerate multistationarity in small reaction networks. *Discrete Contin. Dyn. Syst. B*, 24(6):2683–2700, 2019.
30. Feng Song, Meritxell Sáez, Carsten Wiuf, Elisenda Feliu, and Orkun S. Soyer. Core signalling motif displaying multistability through multi-state enzymes. *Journal of the Royal Society Interface*, 13(123): 20160524, 2016.
31. Angelica Torres, and Elisenda Feliu. Symbolic Proof of Bistability in Reaction Networks. *SIAM J. Appl. Dyn. Syst.*, 20(1):1–37, 2021.
32. Máté László Telek, and Elisenda Feliu. Topological descriptors of the parameter region of multistationarity: Deciding upon connectivity. *PLOS Comput. Biol.*, 19.3: e1010970, 2023.
33. Xiaoxian Tang, Kexin Lin, and Zhishuo Zhang. Multistationarity of Reaction Networks with One-Dimensional Stoichiometric Subspaces. *CSIAM Trans. Appl. Math.*, 3(3):564–600, 2022
34. Xianxian Tang, and Kaizhang Wang. Hopf bifurcations of reaction networks with zero-one stoichiometric coefficients. *SIAM J. Appl. Dyn. Syst.*, 22(3):2459–2489, 2023.
35. Xianxian Tang, and Hao Xu. Multistability of small reaction networks. *SIAM J. Appl. Dyn. Syst.*, 20(2):608–635, 2021.
36. Xianxian Tang, and Zhizhuo Zhang. Multistability of reaction networks with one-dimensional stoichiometric subspaces. *SIAM J. Appl. Dyn. Syst.*, 21(2):1426–1454, 2022.
37. Carsten Wiuf, and Elisenda Feliu. Power-law kinetics and determinant criteria for the preclusion of multistationarity in networks of interacting species. *SIAM J. Appl. Dyn. Syst.*, 12:1685–1721, 2013.
38. Wen Xiong, and James Ferrell Jr. A positive-feedback-based bistable ‘memory module’ that governs a cell fate decision. *Nature*, 426:460–465, 2003.
39. Xia Bican and Yang Lu. Automated inequality proving and discovering. *World Scientific*, 2016.